

**CRPF**  
**Constable**  
**Previous Year Paper**  
**Technical Tradesman**  
**04 July, 2023 Shift 3**



Adda247

# Test Prime

**ALL EXAMS, ONE SUBSCRIPTION**



**1,00,000+**  
Mock Tests



**Personalised**  
Report Card



**Unlimited**  
Re-Attempt



**600+**  
Exam Covered



**25,000+** Previous  
Year Papers



**500%**  
Refund



**ATTEMPT FREE MOCK NOW**

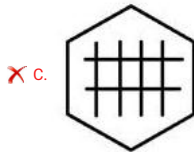
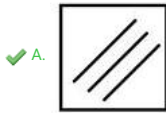
## CRPF Technical Tradesman 1st to 12th July 2023

|                  |                         |
|------------------|-------------------------|
| Participant ID   |                         |
| Participant Name |                         |
| Test Center Name |                         |
| Test Date        | 04/07/2023              |
| Test Time        | 4:30 PM - 6:30 PM       |
| Subject          | Constable Water Carrier |

Section : General Intelligence and Reasoning

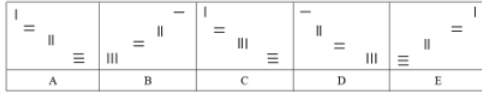
Q.1 Four figures have been given, out of which three are alike in some manner and one is different. Select the one that is different.

Ans



Question ID : 63068062131  
 Option 1 ID : 630680239845  
 Option 2 ID : 630680239843  
 Option 3 ID : 630680239842  
 Option 4 ID : 630680239844  
 Status : Answered  
 Chosen Option : A

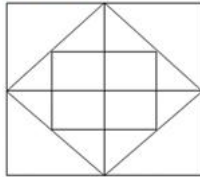
Q.2 Five figures have been given, out of which four are alike in some manner and one is different. Select the one that is different.



- Ans
- A. E
  - B. A
  - C. B
  - D. C

Question ID : 63068011473  
 Option 1 ID : 630680431688  
 Option 2 ID : 630680431687  
 Option 3 ID : 630680431689  
 Option 4 ID : 630680431686  
 Status : Answered  
 Chosen Option : D

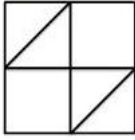
Q.3 Find the number of triangles in the given figure.



- Ans
- A. 20
  - B. 16
  - C. 12
  - D. 24

Question ID : 63068049924  
 Option 1 ID : 630680192019  
 Option 2 ID : 630680192021  
 Option 3 ID : 630680192020  
 Option 4 ID : 630680192018  
 Status : Answered  
 Chosen Option : D

Q.4 How many squares are there in the given figure?



- Ans
- A. 6
  - B. 7
  - C. 4
  - D. 5

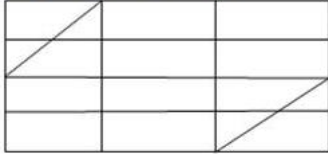
Question ID : 63068049477  
 Option 1 ID : 630680190340  
 Option 2 ID : 630680190341  
 Option 3 ID : 630680190338  
 Option 4 ID : 630680190339  
 Status : Answered  
 Chosen Option : D

Q.5 Amit is facing North. He turns  $90^\circ$  in the clockwise direction and walks 10 m, then he turns  $45^\circ$  in same direction and walks 45 m and finally, he turns  $180^\circ$  in the same direction. Which direction is he facing now?

- Ans
- A. East
  - B. South-East
  - C. South-West
  - D. North-West

Question ID : 63068050330  
 Option 1 ID : 630680193642  
 Option 2 ID : 630680193645  
 Option 3 ID : 630680193643  
 Option 4 ID : 630680193644  
 Status : Answered  
 Chosen Option : D

Q.6 How many triangles are there in the following figure?



- Ans  A. 8  
 B. 6  
 C. 10  
 D. 12

Question ID : 63068062126  
 Option 1 ID : 630680239823  
 Option 2 ID : 630680239822  
 Option 3 ID : 630680239824  
 Option 4 ID : 630680239825  
 Status : Answered  
 Chosen Option : D

Q.7 A toddler is facing south. He turns  $45^\circ$  anticlockwise and runs in that direction. He then turns  $90^\circ$  clockwise and runs in that direction and finally, turns right and stops. Which direction is he facing now?

- Ans  A. South-east  
 B. North-west  
 C. North-east  
 D. South-west

Question ID : 63068048494  
 Option 1 ID : 630680186617  
 Option 2 ID : 630680186615  
 Option 3 ID : 630680186616  
 Option 4 ID : 630680186614  
 Status : Answered  
 Chosen Option : D

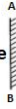
Q.8 A boy is facing south. He turns  $90^\circ$  in the clockwise direction, then he turns  $45^\circ$  in same direction and finally he turns  $180^\circ$  in same direction. In which direction is he facing now?

- Ans  A. North-West  
 B. South-West  
 C. South-East  
 D. South

Question ID : 63068050322  
 Option 1 ID : 630680193611  
 Option 2 ID : 630680193613  
 Option 3 ID : 630680193610  
 Option 4 ID : 630680193612  
 Status : Answered  
 Chosen Option : C

Q.9 Choose the alternative which closely resembles the mirror image of the given combination.

s P a R K I e



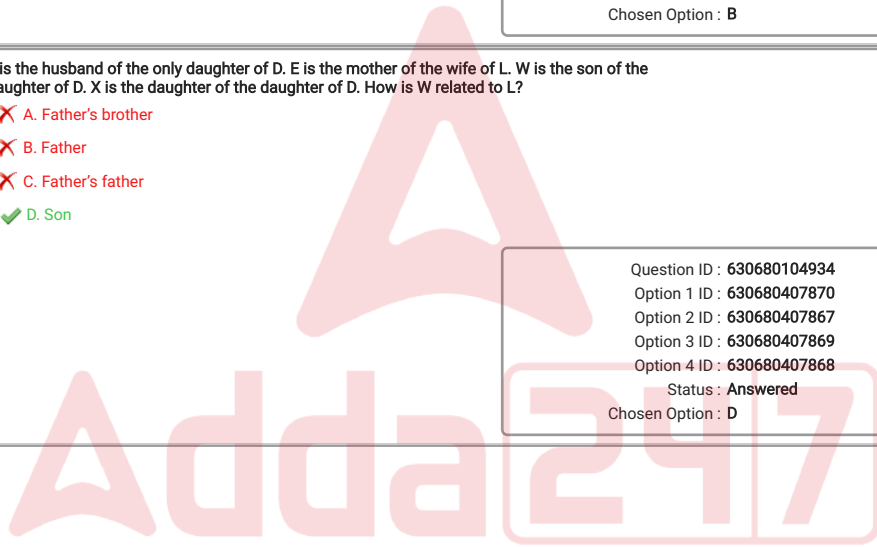
- Ans
- A. e R K I s P a
  - B. e I K R s P a
  - C. e b a R K I e
  - D. e b s R K I e

Question ID : 63068084008  
 Option 1 ID : 630680325625  
 Option 2 ID : 630680325624  
 Option 3 ID : 630680325627  
 Option 4 ID : 630680325626  
 Status : Answered  
 Chosen Option : B

Q.10 L is the husband of the only daughter of D. E is the mother of the wife of L. W is the son of the daughter of D. X is the daughter of the daughter of D. How is W related to L?

- Ans
- A. Father's brother
  - B. Father
  - C. Father's father
  - D. Son

Question ID : 630680104934  
 Option 1 ID : 630680407870  
 Option 2 ID : 630680407867  
 Option 3 ID : 630680407869  
 Option 4 ID : 630680407868  
 Status : Answered  
 Chosen Option : D



**Q.11** Select the option that is related to Figure C in the same way as Figure B is related to Figure A.

Ans

- A.
- B.
- C.
- D.

Question ID : 63068057847  
 Option 1 ID : 630680223165  
 Option 2 ID : 630680223162  
 Option 3 ID : 630680223163  
 Option 4 ID : 630680223164  
 Status : Answered  
 Chosen Option : D

---

**Q.12** P and A are brothers. F is the father of A. R is the wife of the son of F. B is the wife of A. T is the son of R. How is F related to T?

Ans

- A. Father's father
- B. Son
- C. Father's brother
- D. Father

Question ID : 630680104932  
 Option 1 ID : 630680407861  
 Option 2 ID : 630680407859  
 Option 3 ID : 630680407862  
 Option 4 ID : 630680407860  
 Status : Answered  
 Chosen Option : A

Q.13 'M \$ N' means 'M is the brother of N'.  
'M + N' means 'M is the mother of N'.  
'M ÷ N' means 'M is the father of N'.  
'M & N' means 'M is the wife of N'.  
'M = N' means 'M is the sister of N'.  
If 'E & D ÷ C \$ A + F', then how is A related to E?

- Ans
- A. Son
  - B. Granddaughter
  - C. Daughter
  - D. Niece

Question ID : 630680133293  
Option 1 ID : 630680516146  
Option 2 ID : 630680516148  
Option 3 ID : 630680516147  
Option 4 ID : 630680516149  
Status : Answered  
Chosen Option : D

Q.14 What will come in place of the '?' in the following equation, if '+' and '-' are interchanged and 'x' and '÷' are interchanged?  
 $195 - 55 + (7 \div 7) \times 7 + (7 + 5) = ?$

- Ans
- A. 222
  - B. 98
  - C. 278
  - D. 208

Question ID : 63068053402  
Option 1 ID : 630680205695  
Option 2 ID : 630680205694  
Option 3 ID : 630680205696  
Option 4 ID : 630680205697  
Status : Answered  
Chosen Option : D

Adda247

**Q.15** The sequence of folding a piece of paper and the manner in which the folded paper has been cut is shown in the following figures. How would this paper look when unfolded?

**Ans**

- A.**
- B.**
- C.**
- D.**

Question ID : 63068085592  
 Option 1 ID : 630680331875  
 Option 2 ID : 630680331872  
 Option 3 ID : 630680331874  
 Option 4 ID : 630680331873  
 Status : Answered  
 Chosen Option : A

---

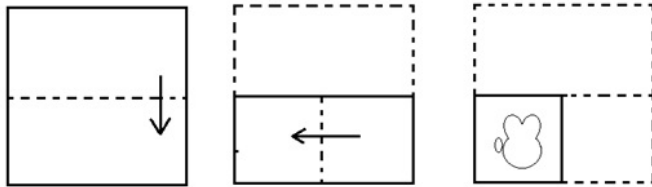
**Q.16** Harsh is standing south of Veer. Deepti is standing east of Veer. Manoj is standing west of Deepti. Saroj is standing north of Veer. Harsh is standing south-east of Manoj. What is the position of Veer with respect to Manoj?

**Ans**

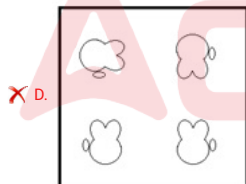
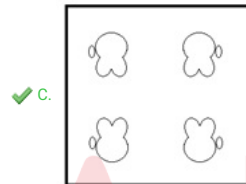
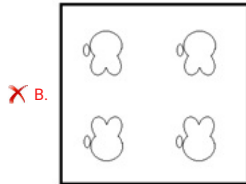
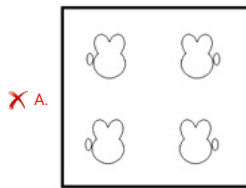
- A. South**
- B. East**
- C. North**
- D. West**

Question ID : 63068075779  
 Option 1 ID : 630680293232  
 Option 2 ID : 630680293229  
 Option 3 ID : 630680293231  
 Option 4 ID : 630680293230  
 Status : Answered  
 Chosen Option : B

Q.17 The sequence of folding a piece of paper and the manner in which the folded paper is cut is shown in the following figures. How would this paper look when unfolded?

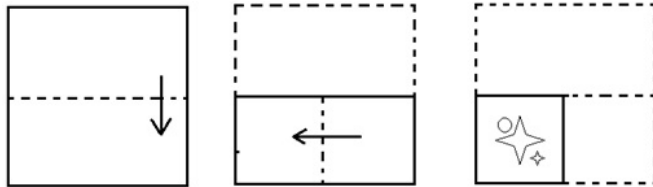


Ans

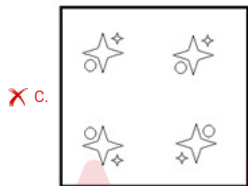
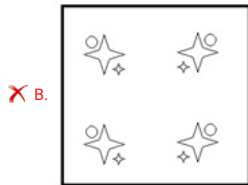
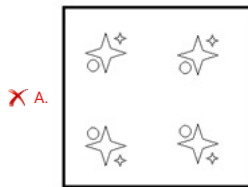


Question ID : 630680165223  
 Option 1 ID : 630680639914  
 Option 2 ID : 630680639915  
 Option 3 ID : 630680639913  
 Option 4 ID : 630680639912  
 Status : Answered  
 Chosen Option : C

Q.18 The sequence of folding a piece of paper and the manner in which the folded paper is cut is shown in the following figures. How would this paper look when unfolded?



Ans



Question ID : 630680165217  
 Option 1 ID : 630680639889  
 Option 2 ID : 630680639888  
 Option 3 ID : 630680639890  
 Option 4 ID : 630680639891  
 Status : Answered  
 Chosen Option : D

Q.19 Five figures have been given, out of which four are alike in some manner and one is different. Select the one that is different.

|                                   |                                   |                                  |                                |                                   |
|-----------------------------------|-----------------------------------|----------------------------------|--------------------------------|-----------------------------------|
| I II III<br>= III =<br>I III IIII | = III =<br>I III IIII<br>I II III | I III IIII<br>= III =<br>I II II | I II III<br>= III =<br>= III = | = III =<br>I II III<br>I III IIII |
| A                                 | B                                 | C                                | D                              | E                                 |

Ans  A, C

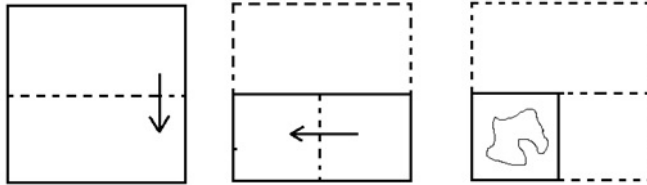
B, B

C, D

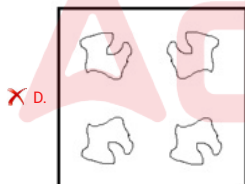
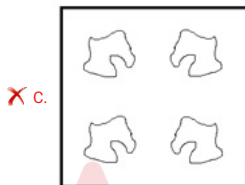
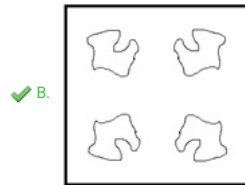
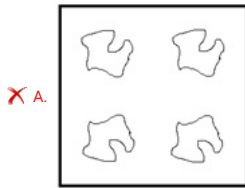
D, E

Question ID : 630680111480  
 Option 1 ID : 630680431715  
 Option 2 ID : 630680431714  
 Option 3 ID : 630680431717  
 Option 4 ID : 630680431716  
 Status : Answered  
 Chosen Option : A

Q.20 The sequence of folding a piece of paper and the manner in which the folded paper is cut is shown in the following figures. How would this paper look when unfolded?

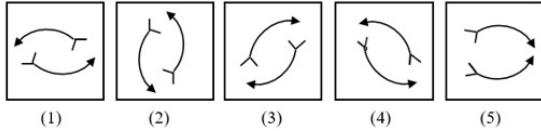


Ans



Question ID : 630680165218  
 Option 1 ID : 630680639894  
 Option 2 ID : 630680639893  
 Option 3 ID : 630680639892  
 Option 4 ID : 630680639895  
 Status : Answered  
 Chosen Option : B

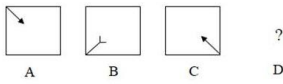
Q.21 Five figures have been given, out of which four are alike in some manner and one is different. Select the figure that is different.



- Ans
- A. 3
  - B. 4
  - C. 5
  - D. 2

Question ID : 63068084070  
 Option 1 ID : 630680325834  
 Option 2 ID : 630680325833  
 Option 3 ID : 630680325832  
 Option 4 ID : 630680325835  
 Status : Answered  
 Chosen Option : C






Q.22 Figure A is related to figure B in a certain pattern. Following the same pattern, figure C is related to figure D. Study the pattern and select the figure that can replace the question mark (?) for figure D.



- Ans
- A.
  - B.
  - C.
  - D.

Question ID : 63068062235  
 Option 1 ID : 630680240236  
 Option 2 ID : 630680240235  
 Option 3 ID : 630680240237  
 Option 4 ID : 630680240234  
 Status : Answered  
 Chosen Option : C

Q.23 Five figures have been given, out of which four are alike in some manner and one is different. Select the one that is different.

|   |   |   |   |   |
|---|---|---|---|---|
|  |  |  |  |  |
| A   | B   | C   | D   | E   |

- Ans
- A. E
  - B. D
  - C. B
  - D. A

Question ID : 63068011479  
 Option 1 ID : 630680431711  
 Option 2 ID : 630680431710  
 Option 3 ID : 630680431712  
 Option 4 ID : 630680431713  
 Status : Answered  
 Chosen Option : C

Q.24 What will come in place of the '?' in the following equation, if '+' and '-' are interchanged and 'x' and '/' are interchanged?  
 $22 + 2 - 2 + (3 + 4) \div 10 - 6 = ?$

- Ans
- A. 93
  - B. 37
  - C. 89
  - D. 76

Question ID : 63068053403  
 Option 1 ID : 630680205698  
 Option 2 ID : 630680205699  
 Option 3 ID : 630680205701  
 Option 4 ID : 630680205700  
 Status : Answered  
 Chosen Option : C

Q.25 An old man takes 5 steps towards the south and then takes a left and walks another 5 steps. He takes another left and walks 5 more steps, then takes a right, walks 10 steps and stops. How far and towards which direction is he from the starting point?

- Ans
- A. 10 steps; South-west
  - B. 15 steps; East
  - C. 15 steps; South
  - D. 10 steps; South-east

Question ID : 630680104925  
 Option 1 ID : 630680407833  
 Option 2 ID : 630680407832  
 Option 3 ID : 630680407834  
 Option 4 ID : 630680407831  
 Status : Answered  
 Chosen Option : B

Section : General Knowledge and General Awareness

Q.1 Which of the following dynasties was established by Khizr Khan?

- Ans
- A. Lodi Dynasty
  - B. Bahmani Sultanate
  - C. Sayyid Dynasty
  - D. Sur Dynasty

Question ID : 63068092824  
 Option 1 ID : 630680359987  
 Option 2 ID : 630680359990  
 Option 3 ID : 630680359989  
 Option 4 ID : 630680359988  
 Status : Answered  
 Chosen Option : C

Q.2 In which of the following battles did Babur defeat Ibrahim Lodi?

- Ans
- A. The first battle of Panipat in 1526
  - B. The second battle of Tarain in 1192
  - C. The third battle of Panipat 1761
  - D. The first battle of Tarain in 1191

Question ID : 630680100531  
 Option 1 ID : 630680390820  
 Option 2 ID : 630680390822  
 Option 3 ID : 630680390821  
 Option 4 ID : 630680390823  
 Status : Answered  
 Chosen Option : A

Q.3 Which of the following cities in the Harappan sites was an important centre for making objects of stone, shell and metal?

- Ans
- A. Banawali
  - B. Rakhigarhi
  - C. Lothal
  - D. Roapar

Question ID : 630680157821  
 Option 1 ID : 630680610813  
 Option 2 ID : 630680610812  
 Option 3 ID : 630680610814  
 Option 4 ID : 630680610815  
 Status : Answered  
 Chosen Option : C

Q.4 Mu'izz al-Dīn Muḥammad ibn Sām's lieutenant was:

- Ans
- A. Raziya
  - B. Quṭb al-Dīn Aibak
  - C. Ghiyas ud din Balban
  - D. Iltutmish

Question ID : 63068089826  
Option 1 ID : 630680348079  
Option 2 ID : 630680348080  
Option 3 ID : 630680348081  
Option 4 ID : 630680348078  
Status : Answered  
Chosen Option : B

Q.5 The term 'mango showers' is associated with

- Ans
- A. post-monsoon snowfall
  - B. pre-monsoon snowfall
  - C. post-monsoon rainfall
  - D. pre-monsoon rainfall

Question ID : 63068090211  
Option 1 ID : 630680349621  
Option 2 ID : 630680349619  
Option 3 ID : 630680349620  
Option 4 ID : 630680349618  
Status : Answered  
Chosen Option : B

Q.6 The idea of the 'Institution of the Speaker and its Role' in the Indian Constitution has been taken from the Constitution of \_\_\_\_\_.

- Ans
- A. France
  - B. Japan
  - C. Italy
  - D. Britain

Question ID : 630680209100  
Option 1 ID : 630680810616  
Option 2 ID : 630680810618  
Option 3 ID : 630680810617  
Option 4 ID : 630680810615  
Status : Answered  
Chosen Option : D

Q.7 The famous Ajanta caves are located closest to which of the following Indian cities?

- Ans
- A. Chennai
  - B. Aurangabad
  - C. Pune
  - D. Mumbai

Question ID : 630680157824  
Option 1 ID : 630680610827  
Option 2 ID : 630680610825  
Option 3 ID : 630680610826  
Option 4 ID : 630680610824  
Status : Answered  
Chosen Option : B

Q.8 By what process are packaged and non-packaged foods treated with mild heat, typically less than 100 °C (212 °F), to kill off harmful bacteria, salmonella, and other disease-causing pathogens?

- Ans
- A. Irradiation
  - B. Canning
  - C. Smoking
  - D. Pasteurisation

Question ID : 630680208549  
Option 1 ID : 630680808427  
Option 2 ID : 630680808428  
Option 3 ID : 630680808429  
Option 4 ID : 630680808430  
Status : Not Answered  
Chosen Option : -

Q.9 Which of the following national parks is famous for the 'one-horned rhino'?

- Ans
- A. Indravati
  - B. Keoladeo
  - C. Bandhavgarh
  - D. Kaziranga

Question ID : 63068090197  
Option 1 ID : 630680349565  
Option 2 ID : 630680349564  
Option 3 ID : 630680349562  
Option 4 ID : 630680349563  
Status : Answered  
Chosen Option : D

Q.10 Which institution won the Digital Innovation of the Year award at the Times Higher Education Asia award - 2021?

- Ans  A. Kalinga Institute of Industrial Technology  
 B. OP Jindal Global University  
 C. Shiv Nadar University  
 D. Subharti University

Question ID : 63068099171  
Option 1 ID : 630680385390  
Option 2 ID : 630680385389  
Option 3 ID : 630680385391  
Option 4 ID : 630680385388  
Status : Answered  
Chosen Option : B

Q.11 Loktak Lake, the largest natural freshwater lake in India, is located in the state of \_\_\_\_\_.

- Ans  A. Odisha  
 B. Kerala  
 C. Rajasthan  
 D. Manipur

Question ID : 63068069565  
Option 1 ID : 630680268928  
Option 2 ID : 630680268927  
Option 3 ID : 630680268929  
Option 4 ID : 630680268926  
Status : Answered  
Chosen Option : D

Q.12 Which Article of the Constitution of India deals with the abolition of untouchability and prohibition of its practice?

- Ans  A. Article 16  
 B. Article 17  
 C. Article 15  
 D. Article 14

Question ID : 63068090770  
Option 1 ID : 630680351856  
Option 2 ID : 630680351857  
Option 3 ID : 630680351855  
Option 4 ID : 630680351854  
Status : Answered  
Chosen Option : B

Q.13 Dhamek Stupa was originally built during the \_\_\_\_\_ Dynasty/Empire in the third century and later replaced in the year 500 CE.

- Ans  A. Maurya  
 B. Shunga  
 C. Kushan  
 D. Gupta

Question ID : 630680158675  
Option 1 ID : 630680614192  
Option 2 ID : 630680614194  
Option 3 ID : 630680614195  
Option 4 ID : 630680614193  
Status : Not Answered  
Chosen Option : -

Q.14 Which statement about Safdarjung Tomb at Delhi is correct?

- Ans  A. It is built of pure white marble.  
 B. It followed the tradition of Gol Gumbaz.  
 C. It was built by Nawab Shuja-ud- Daula.  
 D. It has a Naqqar Khana and the ruins of guest houses.

Question ID : 630680213913  
Option 1 ID : 630680829701  
Option 2 ID : 630680829699  
Option 3 ID : 630680829702  
Option 4 ID : 630680829700  
Status : Answered  
Chosen Option : A

Q.15 Razia Sultan is associated with which of the following dynasties?

- Ans  A. Mamluk Dynasty  
 B. Khilji Dynasty  
 C. Sur Dynasty  
 D. Lodi Dynasty

Question ID : 63068092825  
Option 1 ID : 630680359991  
Option 2 ID : 630680359992  
Option 3 ID : 630680359994  
Option 4 ID : 630680359993  
Status : Answered  
Chosen Option : B

Q.16 Which of the following mountain ranges of India is located closer to the Tropic of Cancer?

- Ans  A. Zaskar Range  
 B. Gir Range  
 C. Shivalik Range  
 D. Vindhya Range

Question ID : 63068090185  
Option 1 ID : 630680349514  
Option 2 ID : 630680349515  
Option 3 ID : 630680349517  
Option 4 ID : 630680349516  
Status : Answered  
Chosen Option : B

Q.17 Which of the following systems was a major political innovation of the Vijayanagara Empire administration?

- Ans  A. Iqtadari  
 B. Khas-i-Khel  
 C. Amara-Nayaka  
 D. Brahmadeya

Question ID : 630680213985  
Option 1 ID : 630680829987  
Option 2 ID : 630680829988  
Option 3 ID : 630680829990  
Option 4 ID : 630680829989  
Status : Answered  
Chosen Option : A

Q.18 Which statement about the Indian monument – Hawa Mahal is correct?

- Ans  A. It is located at a distance of 13 km from Delhi.  
 B. It was built for the royal women to enjoy events in the street.  
 C. It was built by Maharaja Sawai Madho Singh I.  
 D. It is an example of Neoclassical architecture.

Question ID : 630680213911  
Option 1 ID : 630680829693  
Option 2 ID : 630680829691  
Option 3 ID : 630680829694  
Option 4 ID : 630680829692  
Status : Answered  
Chosen Option : C

Q.19 In India, which mineral is extracted from the Bailadila, Bellary, Mayurbhanj mines?

- Ans
- A. Iron-Ore
  - B. Copper
  - C. Coal
  - D. Tungsten

Question ID : 63068090198  
Option 1 ID : 630680349566  
Option 2 ID : 630680349567  
Option 3 ID : 630680349568  
Option 4 ID : 630680349569  
Status : Answered  
Chosen Option : A

Q.20 Which of the following pairs is INCORRECTLY matched?

- Ans
- A. Root - Absorbs water from the soil
  - B. Flower - Carries food
  - C. Fruit - Protects seeds
  - D. Leaf - Prepares food

Question ID : 630680209089  
Option 1 ID : 630680810574  
Option 2 ID : 630680810572  
Option 3 ID : 630680810571  
Option 4 ID : 630680810573  
Status : Answered  
Chosen Option : B

Q.21 In which year's Budget did the government announce the ₹8,000 crore National Mission on Quantum Technology and Application for a period of five years?

- Ans
- A. 2018
  - B. 2021
  - C. 2019
  - D. 2020

Question ID : 630680100125  
Option 1 ID : 630680389198  
Option 2 ID : 630680389196  
Option 3 ID : 630680389199  
Option 4 ID : 630680389197  
Status : Not Answered  
Chosen Option : -

Q.22 Which of the following organisations had been accredited with the Google Cloud Partner Specialisation in the data and analytics space in 2021?

- Ans
- A. Accenture
  - B. Infosys
  - C. Wipro
  - D. Tata Consultancy Services

Question ID : 630680127554  
Option 1 ID : 630680494478  
Option 2 ID : 630680494479  
Option 3 ID : 630680494476  
Option 4 ID : 630680494477  
Status : Answered  
Chosen Option : B

Q.23 Infosys accredited with \_\_\_\_\_ Cloud Partner Specialisation for data and analytics in 2021.

- Ans
- A. IBM
  - B. Microsoft
  - C. Google
  - D. Apple

Question ID : 630680112014  
Option 1 ID : 630680433785  
Option 2 ID : 630680433782  
Option 3 ID : 630680433783  
Option 4 ID : 630680433784  
Status : Answered  
Chosen Option : C

Q.24 To meet the increasing demand for oxygen in the second wave of COVID-19, the Government of India started which of the following projects in June 2021?

- Ans
- A. Mission O<sub>2</sub>
  - B. Project O<sub>2</sub>
  - C. Project Air
  - D. Project Life

Question ID : 630680208112  
Option 1 ID : 630680806680  
Option 2 ID : 630680806679  
Option 3 ID : 630680806681  
Option 4 ID : 630680806682  
Status : Answered  
Chosen Option : B

Q.25 What is India's rank in the world telecommunications market as per India Brand Equity Foundation data in April 2021?

- Ans
- A. Third
  - B. Fourth
  - C. First
  - D. Second

Question ID : 63068052580  
 Option 1 ID : 630680202424  
 Option 2 ID : 630680202425  
 Option 3 ID : 630680202422  
 Option 4 ID : 630680202423  
 Status : Not Answered  
 Chosen Option : -

Section : Elementary Mathematics

Q.1 The ratio of milk and water in 64 litres of a mixture is 5 : 3. What amount of water (in litres) is to be added to make the ratio 3 : 5?

- Ans
- A.  $31\frac{2}{3}$
  - B.  $41\frac{2}{3}$
  - C.  $42\frac{2}{3}$
  - D.  $32\frac{2}{3}$

Question ID : 630680109048  
 Option 1 ID : 630680423052  
 Option 2 ID : 630680423054  
 Option 3 ID : 630680423055  
 Option 4 ID : 630680423053  
 Status : Answered  
 Chosen Option : C

Q.2 The ages of A and B are in the ratio 5 : 7. Four years hence, their ages will be in the ratio of 7 : 9. What is B's present age (in years)?

- Ans
- A. 28
  - B. 21
  - C. 7
  - D. 14

Question ID : 630680122777  
 Option 1 ID : 630680476021  
 Option 2 ID : 630680476018  
 Option 3 ID : 630680476020  
 Option 4 ID : 630680476019  
 Status : Answered  
 Chosen Option : D

Q.3 The average age of a first-year B.Tech class was 18 years. When 6 boys whose average age was 20 years were admitted to the class, the average was increased by 6 months. How many students were there in the class originally?

- Ans  A. 18  
 B. 21  
 C. 20  
 D. 19

Question ID : 630680108470  
 Option 1 ID : 630680420846  
 Option 2 ID : 630680420845  
 Option 3 ID : 630680420844  
 Option 4 ID : 630680420847  
 Status : Answered  
 Chosen Option : C

Q.4 I split ₹15,000 into two deposits. The first part was deposited for 8 years at 15% simple rate of interest, while the second part was deposited for 12 years at 20% simple rate of interest. If the second part yielded double interest of that obtained from the first part, how much more is the deposit amount of the first part compared to the second?

- Ans  A. -₹5,000  
 B. ₹5,000  
 C. ₹6,6700  
 D. ₹0

Question ID : 630680108996  
 Option 1 ID : 630680422865  
 Option 2 ID : 630680422866  
 Option 3 ID : 630680422867  
 Option 4 ID : 630680422864  
 Status : Answered  
 Chosen Option : B

Q.5 In a class there are 66 students. Their average weight is 56 kg. When a student leaves the class, the average is reduced by 500 g. Find the weight of the student who left the class.

- Ans  A. 38.5 kg  
 B. 96.5 kg  
 C. 83.5 kg  
 D. 88.5 kg

Question ID : 630680108471  
 Option 1 ID : 630680420849  
 Option 2 ID : 630680420851  
 Option 3 ID : 630680420848  
 Option 4 ID : 630680420850  
 Status : Answered  
 Chosen Option : C

Q.6 A policeman chases a thief at a speed of 30 km/h and catches him after 1 minute 30 seconds. If the distance between the policeman and the thief was 450 m initially, what was the thief's speed?

- Ans
- A. 16 km/h
  - B. 14 km/h
  - C. 18 km/h
  - D. 12 km/h

Question ID : 630680125167  
 Option 1 ID : 630680485448  
 Option 2 ID : 630680485447  
 Option 3 ID : 630680485449  
 Option 4 ID : 630680485446  
 Status : Answered  
 Chosen Option : D

Q.7 Aman and Aashu undertake a project worth ₹8,700. Aman alone can complete the work in 7 days. They work together for 2 days. After 2 days, Aashu works alone for 2 days and Aman completes the remaining work in 2 more days. What is the share of Aman in the earnings?

- Ans
- A. ₹5,171.16
  - B. ₹4,971.42
  - C. ₹521.64
  - D. ₹5,071.63

Question ID : 630680114230  
 Option 1 ID : 630680442323  
 Option 2 ID : 630680442325  
 Option 3 ID : 630680442322  
 Option 4 ID : 630680442324  
 Status : Not Answered  
 Chosen Option : -

Q.8 The volume of an ice cube is  $343 \text{ cm}^3$  Find its total surface area.

- Ans
- A.  $294 \text{ cm}^2$
  - B.  $200 \text{ cm}^2$
  - C.  $400 \text{ cm}^2$
  - D.  $372 \text{ cm}^2$

Question ID : 63068056841  
 Option 1 ID : 630680219295  
 Option 2 ID : 630680219294  
 Option 3 ID : 630680219297  
 Option 4 ID : 630680219296  
 Status : Not Answered  
 Chosen Option : -

Q.9 A sum of ₹550 is to be repaid in 2 equal annual instalments. If the rate is 20% compounded annually, then the value of each instalment will be:

- Ans
- A. ₹180
  - B. ₹360
  - C. ₹320
  - D. ₹380

Question ID : 630680115673  
 Option 1 ID : 630680448042  
 Option 2 ID : 630680448044  
 Option 3 ID : 630680448043  
 Option 4 ID : 630680448045  
 Status : Not Attempted and Marked For Review  
 Chosen Option : -

Q.10 The marked price of a laptop is ₹62,500. The successive discounts offered by the store are 12% and 'x%'. If the selling price of the laptop is ₹44,000, then what is the value of 'x'?

- Ans
- A. 22
  - B. 20
  - C. 15
  - D. 18

Question ID : 630680112589  
 Option 1 ID : 630680436053  
 Option 2 ID : 630680436052  
 Option 3 ID : 630680436050  
 Option 4 ID : 630680436051  
 Status : Answered  
 Chosen Option : B

Q.11 Ramu can complete a work in 8 days, Rahim in 10 days and Raju in 12 days. All of them began the work together, but Ramu had to leave the work after 2 days of the start and Rahim, 3 days before the completion of the work. How long did the work last?

- Ans
- A.  $5\frac{8}{11}$  days
  - B.  $5\frac{5}{7}$  days
  - C.  $3\frac{8}{11}$  days
  - D. 5 days

Question ID : 630680116075  
 Option 1 ID : 630680449632  
 Option 2 ID : 630680449633  
 Option 3 ID : 630680449631  
 Option 4 ID : 630680449630  
 Status : Answered  
 Chosen Option : D

Q.12 If  $y + \frac{3}{2 + \frac{1}{3 + \frac{4}{5}}} = 5$ , then the value of y is:

- Ans
- A.  $\frac{158}{43}$
  - B.  $\frac{155}{43}$
  - C.  $\frac{154}{43}$
  - D.  $\frac{157}{43}$

Question ID : 63068022265  
 Option 1 ID : 630680862891  
 Option 2 ID : 630680862892  
 Option 3 ID : 630680862894  
 Option 4 ID : 630680862893  
 Status : Not Answered  
 Chosen Option : -

Q.13 By selling 36 oranges, one gains the selling price of 12 oranges. The gain percent is:

- Ans
- A.  $66\frac{1}{3}\%$
  - B. 50%
  - C.  $33\frac{1}{3}\%$
  - D. 25%

Question ID : 630680220081  
 Option 1 ID : 630680854206  
 Option 2 ID : 630680854205  
 Option 3 ID : 630680854204  
 Option 4 ID : 630680854203  
 Status : Answered  
 Chosen Option : C

Q.14 If the area of a triangle is  $294 \text{ cm}^2$  and its sides are in the ratio 3:4:5, the perimeter of the triangle is:

- Ans
- A. 96 cm
  - B. 84 cm
  - C. 86 cm
  - D. 90 cm

Question ID : 63068085741  
 Option 1 ID : 630680332427  
 Option 2 ID : 630680332426  
 Option 3 ID : 630680332424  
 Option 4 ID : 630680332425  
 Status : Not Answered  
 Chosen Option : -

Q.15 If both external and internal surfaces are spherical and both have a common central point, where R is an external radius and r is an internal radius, then the volume of the hollow sphere is:

- Ans
- A.  $\frac{4}{3}\pi(R^2 - r^2)$
  - B.  $\frac{4}{3}\pi(R^3 + r^3)$
  - C.  $\frac{4}{3}\pi(R^3 - r^3)$
  - D.  $\frac{4}{3}\pi(R - r)$

Question ID : 63068067771  
 Option 1 ID : 630680261893  
 Option 2 ID : 630680261892  
 Option 3 ID : 630680261891  
 Option 4 ID : 630680261890  
 Status : Not Answered  
 Chosen Option : -

Q.16 The monthly expenditure of Kanta is 20% more than Chhetri's monthly income. Chhetri's monthly expenditure is 20% less than the monthly income of Basansy. Kanta's monthly expenditure is 50% more than that of Basansy's monthly income. If the monthly savings of Chhetri is ₹9,000, then find the monthly income (in ₹) of Chhetri.

- Ans
- A. 40000
  - B. 25000
  - C. 35000
  - D. 20000

Question ID : 630680115534  
 Option 1 ID : 630680447489  
 Option 2 ID : 630680447487  
 Option 3 ID : 630680447488  
 Option 4 ID : 630680447486  
 Status : Not Answered  
 Chosen Option : -

Q.17 A cone of height 22 cm and diameter 20 cm is mounted on a hemisphere of the same diameter. Find the volume of the solid formed.

- Ans
- A. 4540 cm<sup>3</sup>
  - B. 5000 cm<sup>3</sup>
  - C. 4600 cm<sup>3</sup>
  - D. 4400 cm<sup>3</sup>

Question ID : 63068068341  
 Option 1 ID : 630680264070  
 Option 2 ID : 630680264072  
 Option 3 ID : 630680264073  
 Option 4 ID : 630680264071  
 Status : Not Answered  
 Chosen Option : -

Q.18 Which of the following numbers should be added to each of the numbers 15, 45, 25 and 70 so that the numbers become proportional?

- Ans
- A. 3
  - B. 5
  - C. 10
  - D. 15

Question ID : 630680115580  
 Option 1 ID : 630680447670  
 Option 2 ID : 630680447671  
 Option 3 ID : 630680447672  
 Option 4 ID : 630680447673  
 Status : Answered  
 Chosen Option : C

Q.19 A spherical reservoir of capacity  $256000 \times \frac{\pi}{3}$  liters is to be built. What would be the surface area of that reservoir?  
 ( $1\text{m}^3 = 1000$  litres)

- Ans
- A.  $16\pi \text{ m}^2$
  - B.  $64\pi \text{ m}^2$
  - C.  $36\pi \text{ m}^2$
  - D.  $4\pi \text{ m}^2$

Question ID : 63068070043  
 Option 1 ID : 630680270813  
 Option 2 ID : 630680270810  
 Option 3 ID : 630680270811  
 Option 4 ID : 630680270812  
 Status : Not Answered  
 Chosen Option : -

Q.20 Find the remainder when  $2^{32}$  is divided by 5.

- Ans
- A. 2
  - B. 6
  - C. 4
  - D. 1

Question ID : 63068068406  
 Option 1 ID : 630680264330  
 Option 2 ID : 630680264331  
 Option 3 ID : 630680264332  
 Option 4 ID : 630680264333  
 Status : Not Answered  
 Chosen Option : -

Q.21 If the mean of 5 observations  $x, x + 2, x + 4, x + 6$  and  $x + 8$  is 66, then the mean of the last three observations is:

- Ans
- A. 66
  - B. 64
  - C. 68
  - D. 67

Question ID : 630680107275  
 Option 1 ID : 630680416487  
 Option 2 ID : 630680416485  
 Option 3 ID : 630680416486  
 Option 4 ID : 630680416484  
 Status : Answered  
 Chosen Option : C

Q.22 If  $\sqrt{2} = 1.414$ , find the value of  $\sqrt{128} - \left(\frac{1}{2}\right)\sqrt{32} - \sqrt{50}$  correct to 3 places of decimal.

- Ans
- A. 2.143
  - B. 1.816
  - C. 1.414
  - D. 1.732

Question ID : 63068068400  
 Option 1 ID : 630680264309  
 Option 2 ID : 630680264308  
 Option 3 ID : 630680264307  
 Option 4 ID : 630680264306  
 Status : Not Answered  
 Chosen Option : -

Q.23 A fast train takes 2 hours less than a slow train for a journey of 192 km. If the speed of the slow train is 16 km/h less than that of the fast train, then find the speed of the two trains.

- Ans
- A. 28 km/h and 12 km/h
  - B. 48 km/h and 12 km/h
  - C. 28 km/h and 32 km/h
  - D. 48 km/h and 32 km/h

Question ID : 630680108490  
 Option 1 ID : 630680420925  
 Option 2 ID : 630680420927  
 Option 3 ID : 630680420926  
 Option 4 ID : 630680420924  
 Status : Answered  
 Chosen Option : A

Q.24 Manish sold an article for Rs.20,000. Had he offered a discount of 12% on the selling price he would have earned a profit of 10%. What is the cost price of the article?

- Ans  A. Rs.14,600  
 B. Rs.16,000  
 C. Rs.17,600  
 D. Rs.16,500

Question ID : 630680107280  
 Option 1 ID : 630680416507  
 Option 2 ID : 630680416505  
 Option 3 ID : 630680416504  
 Option 4 ID : 630680416506  
 Status : Answered  
 Chosen Option : B

Q.25 Out of the people eligible to vote, 10% are between the ages of 18 and 21. In an election, 70% of those eligible and who were between the ages of 18 and 21 actually voted. In that election, people between the ages of 18 and 21 who actually voted were how much per cent of those eligible to vote?

- Ans  A. 4  
 B. 6  
 C. 5  
 D. 7

Question ID : 630680105244  
 Option 1 ID : 630680409058  
 Option 2 ID : 630680409055  
 Option 3 ID : 630680409057  
 Option 4 ID : 630680409056  
 Status : Answered  
 Chosen Option : D

Section : English

Q.1 Select the most appropriate synonym of the underlined word.

Jatin plays a significant role in that movie.

- Ans  A. Modest  
 B. Serious  
 C. Meaningful  
 D. Caring

Question ID : 63068087413  
 Option 1 ID : 630680339039  
 Option 2 ID : 630680339040  
 Option 3 ID : 630680339038  
 Option 4 ID : 630680339037  
 Status : Answered  
 Chosen Option : A

Q.2 Select the INCORRECTLY spelt word.  
The study of how learning occurs is part of neuropsychology, educational psychology, learning theory and pedagogyx

- Ans
- A. psychology
  - B. occurs
  - C. neuropsychology
  - D. pedagogy

Question ID : 630680113821  
Option 1 ID : 630680440811  
Option 2 ID : 630680440813  
Option 3 ID : 630680440810  
Option 4 ID : 630680440812  
Status : Not Answered  
Chosen Option : -

Q.3 Sentences of a paragraph are given below in jumbled order. Arrange the sentences in the correct order to form a meaningful and coherent paragraph.  
A. How often do we remember to treat others as you would like them to treat you?  
B. Hence we should try to cultivate new habits every day that add positively to our personality.  
C. Genes might play a role when it comes to one's disposition, but the major portion of our attitudes and behaviour is influenced by the choices we make.  
D. In our quest to get more and more, we forget that the quality of our lives depends on the kind of personalities we have cultivated for ourselves.

- Ans
- A. ADCB
  - B. DCBA
  - C. ACBD
  - D. ADCB

Question ID : 630680204349  
Option 1 ID : 630680792479  
Option 2 ID : 630680792481  
Option 3 ID : 630680792480  
Option 4 ID : 630680792482  
Status : Not Answered  
Chosen Option : -

Q.4 Select the most appropriate ANTONYM of the given word.  
Lethargic

- Ans
- A. Affluent
  - B. Energetic
  - C. Affective
  - D. Efficient

Question ID : 630680158461  
Option 1 ID : 630680613370  
Option 2 ID : 630680613369  
Option 3 ID : 630680613371  
Option 4 ID : 630680613368  
Status : Not Answered  
Chosen Option : -

Q.5 Select the most appropriate ANTONYM of the given word.  
Cacophony

- Ans  A. Clear  
 B. Order  
 C. Harmony  
 D. ShriII

Question ID : 630680146609  
 Option 1 ID : 630680567321  
 Option 2 ID : 630680567318  
 Option 3 ID : 630680567319  
 Option 4 ID : 630680567320  
 Status : Not Answered  
 Chosen Option : -

Q.6 Sentences of a paragraph are given below in jumbled order. Arrange the sentences in the correct order to form a meaningful and coherent paragraph.  
 1. It allows people to explore new cultures, gain independence, and develop valuable skills.  
 2. Traveling is a popular pastime that offers a variety of benefits for personal growth and development.  
 3. Sustainable travel practices can help minimise the negative impact of tourism on the planet and local communities.  
 4. However, it is important to consider the impact of travel on the environment and local communities, and to travel responsibly.

- Ans  A. 2143  
 B. 1432  
 C. 3214  
 D. 4213

Question ID : 630680204372  
 Option 1 ID : 630680792574  
 Option 2 ID : 630680792572  
 Option 3 ID : 630680792573  
 Option 4 ID : 630680792571  
 Status : Not Answered  
 Chosen Option : -

Q.7 Select the most appropriate ANTONYM of the given word.  
Impious

- Ans  A. Brilliant  
 B. Sympathetic  
 C. Implied  
 D. Reverent

Question ID : 630680146607  
 Option 1 ID : 630680567312  
 Option 2 ID : 630680567310  
 Option 3 ID : 630680567313  
 Option 4 ID : 630680567311  
 Status : Not Answered  
 Chosen Option : -

Q.8 Select the option that can be used as a one-word substitute for the given group of words.  
A person out to destroy all government law and order

- Ans
- A. Diplomat
  - B. Aristocrat
  - C. Dictator
  - D. Anarchist

Question ID : 630680160919  
Option 1 ID : 630680623043  
Option 2 ID : 630680623042  
Option 3 ID : 630680623041  
Option 4 ID : 630680623040  
Status : Not Answered  
Chosen Option : -

Q.9 Select the INCORRECTLY spelt word.

He is very humourous, as is evident in his witty blog.

- Ans
- A. Evident
  - B. Blog
  - C. Humourous
  - D. Witty

Question ID : 630680112948  
Option 1 ID : 630680437411  
Option 2 ID : 630680437413  
Option 3 ID : 630680437410  
Option 4 ID : 630680437412  
Status : Answered  
Chosen Option : C

Q.10 Identify the option that makes the given sentence grammatically correct  
The intelligent is studying grammar.

- Ans
- A. The studios is studying grammar.
  - B. The class is studying grammar.
  - C. The students is studying grammar.
  - D. The class were studying grammar.

Question ID : 63068071247  
Option 1 ID : 630680275573  
Option 2 ID : 630680275571  
Option 3 ID : 630680275570  
Option 4 ID : 630680275572  
Status : Answered  
Chosen Option : C

Q.11 Sentences of a paragraph are given below in jumbled order. Arrange the sentences in the correct order to form a meaningful and coherent paragraph.  
 1.Globalisation refers to the interconnectedness of nations, economies and cultures around the world  
 2.However, globalisation has also created challenges, such as job displacement, economic inequality and cultural homogenisation.  
 3.It has brought about many benefits, such as increased trade and economic growth, greater access to goods and services, and cultural exchange.  
 4.It is important to address these issues and promote responsible globalisation that benefits everyone.

- Ans  A. 1324  
 B. 1423  
 C. 1234  
 D. 2431

Question ID : 630680204377  
 Option 1 ID : 630680792593  
 Option 2 ID : 630680792591  
 Option 3 ID : 630680792594  
 Option 4 ID : 630680792592  
 Status : Not Answered  
 Chosen Option : -

Q.12 Select the option that can be used as a one-word substitute for the given group of words.  
 A group of artists, dancers and acrobats

- Ans  A. Troupe  
 B. Swarm  
 C. Tuft  
 D. Flock

Question ID : 630680160085  
 Option 1 ID : 630680619724  
 Option 2 ID : 630680619727  
 Option 3 ID : 630680619725  
 Option 4 ID : 630680619726  
 Status : Not Answered  
 Chosen Option : -

Q.13 The following sentence has been split into four segments. Identify the segment that contains a grammatical error.

You can send / the packet by / courier as Raj can / take it with him.

- Ans  A. the packet by  
 B. courier as Raj can  
 C. take it with him  
 D. You can send

Question ID : 63068067408  
 Option 1 ID : 630680260455  
 Option 2 ID : 630680260456  
 Option 3 ID : 630680260457  
 Option 4 ID : 630680260454  
 Status : Answered  
 Chosen Option : A

Q.14 Select the most appropriate ANTONYM of the given word.  
About

- Ans  A. Lengthy  
 B. Exact  
 C. Ignore  
 D. Extract

Question ID : 630680158462  
Option 1 ID : 630680613373  
Option 2 ID : 630680613374  
Option 3 ID : 630680613372  
Option 4 ID : 630680613375  
Status : Answered  
Chosen Option : B

Q.15 Select the most appropriate synonym of the underlined word.  
The project cannot be completed on time due to paucity of funds.

- Ans  A. Plenty  
 B. Increase  
 C. Excess  
 D. Scarcity

Question ID : 630680204388  
Option 1 ID : 630680792637  
Option 2 ID : 630680792638  
Option 3 ID : 630680792635  
Option 4 ID : 630680792636  
Status : Answered  
Chosen Option : C

Q.16 Select the INCORRECTLY spelt word from the given sentence.  
If a man has many interests he can look out for other hobbies for some time and for that period he can remain unc~~onc~~cerned with his tiresome vocation.

- Ans  A. Uncuncerend  
 B. Hobbies  
 C. Vocation  
 D. Interests

Question ID : 630680204334  
Option 1 ID : 630680792421  
Option 2 ID : 630680792420  
Option 3 ID : 630680792422  
Option 4 ID : 630680792419  
Status : Answered  
Chosen Option : D

Q.17 Sentences of a paragraph are given below in jumbled order. Arrange the sentences in the correct order to form a meaningful and coherent paragraph.  
 A. The story is not only about the violence against women but also about the victims' blur in our minds.  
 B. The narrator is recounting conversations with strangers about the podcast she's making.  
 C. It's a serial-style exploration of the murder of a girl at an elite boarding school in the '90s.  
 D. Rebecca Makka's new novel, 'I Have Some Questions for You', begins with a dark joke.

- Ans  A. DACB  
 B. DBCA  
 C. ACDB  
 D. BDAC

Question ID : 630680204313  
 Option 1 ID : 630680792338  
 Option 2 ID : 630680792336  
 Option 3 ID : 630680792335  
 Option 4 ID : 630680792337  
 Status : Not Answered  
 Chosen Option : -

Q.18 Select the option that can be used as a one-word substitute for the given group of words.  
 Fear of being without a mobile phone

- Ans  A. Ophiophobia  
 B. Xenophobia  
 C. Necrophobia  
 D. Nomophobia

Question ID : 630680176601  
 Option 1 ID : 630680684627  
 Option 2 ID : 630680684625  
 Option 3 ID : 630680684624  
 Option 4 ID : 630680684626  
 Status : Not Answered  
 Chosen Option : -

Q.19 Select the option that can be used as a one-word substitute for the given group of words.  
 To attack someone by writing or verbally with a pinch of humour to provoke contempt

- Ans  A. Diatribe  
 B. Lampoon  
 C. Jibe  
 D. Sartorial

Question ID : 630680160245  
 Option 1 ID : 630680620353  
 Option 2 ID : 630680620352  
 Option 3 ID : 630680620355  
 Option 4 ID : 630680620354  
 Status : Not Answered  
 Chosen Option : -

Q.20 Select the INCORRECTLY spelt word.

- Ans  A. Performance  
 B. Perception  
 C. Perversion  
 D. Persecution

Question ID : 630680129489  
Option 1 ID : 630680501575  
Option 2 ID : 630680501574  
Option 3 ID : 630680501577  
Option 4 ID : 630680501576  
Status : Answered  
Chosen Option : B

**Comprehension:**

Read the given passage and answer the questions that follow.

WHO chief is right in arguing that tracing the origins of Covid is not just a scientific but also a moral imperative. This comes as the US Energy department is reported to have assessed that the pandemic had likely been caused by an unintentional Chinese lab leak. The lab leak theory has persisted despite some scientists positing that the novel virus had naturally jumped from animals to humans. The main reason for this state of unknowability is China's stonewalling of a thorough Covid-origin investigation.

Recall that China had allowed a WHO team to visit the country in early 2021 for the investigation. But the visiting team was neither allowed to freely travel and interview witnesses nor given access to raw patient data from early cases in Wuhan—the Chinese city thought to be ground zero of the pandemic. As a result, the visit's report was inconclusive. And when WHO proposed a second phase of investigation later that year, China flatly refused. This further fuelled speculation that Beijing was hiding something, especially at the Wuhan Institute of Virology, which was said to be conducting gain of function research on coronaviruses. Experiments that were reportedly also funded by the US. If the lab leak theory is true, Covid would be a man-made disaster of epic proportions.

Therefore, two things are important. First, there must be an international consensus on banning all gain of function research. The dangers of such experiments far outweigh the benefits. These modified viruses are essentially deadly bioweapons. Second, investigations into the origins of Covid must continue—to find the truth and to better prepare for or prevent future outbreaks. Was Beijing directly responsible for the worst pandemic of this century, that's the question.

SubQuestion No : 21

Q.21 What are the doubts of common men about the origin of Covid?

- Ans  A. Covid might have come out of Wuhan lab  
 B. Covid might be created in England lab  
 C. Reddy's lab might be the source for Corona virus  
 D. Covid spread from sea animals

Question ID : 630680204964  
Option 1 ID : 630680794720  
Option 2 ID : 630680794722  
Option 3 ID : 630680794719  
Option 4 ID : 630680794721  
Status : Answered  
Chosen Option : D

**Comprehension:**

Read the given passage and answer the questions that follow.

WHO chief is right in arguing that tracing the origins of Covid is not just a scientific but also a moral imperative. This comes as the US Energy department is reported to have assessed that the pandemic had likely been caused by an unintentional Chinese lab leak. The lab leak theory has persisted despite some scientists positing that the novel virus had naturally jumped from animals to humans. The main reason for this state of unknowability is China's stonewalling of a thorough Covid-origin investigation.

Recall that China had allowed a WHO team to visit the country in early 2021 for the investigation. But the visiting team was neither allowed to freely travel and interview witnesses nor given access to raw patient data from early cases in Wuhan—the Chinese city thought to be ground zero of the pandemic. As a result, the visit's report was inconclusive. And when WHO proposed a second phase of investigation later that year, China flatly refused. This further fuelled speculation that Beijing was hiding something, especially at the Wuhan Institute of Virology, which was said to be conducting gain of function research on coronaviruses. Experiments that were reportedly also funded by the US. If the lab leak theory is true, Covid would be a man-made disaster of epic proportions. Therefore, two things are important. First, there must be an international consensus on banning all gain of function research. The dangers of such experiments far outweigh the benefits. These modified viruses are essentially deadly bioweapons. Second, investigations into the origins of Covid must continue—to find the truth and to better prepare for or prevent future outbreaks. Was Beijing directly responsible for the worst pandemic of this century, that's the question.

SubQuestion No : 22

Q.22 Select the most appropriate title to the passage.

- Ans
- A. Conflict between China and India
  - B. Covid and Online Classes
  - C. The Treatment for Covid
  - D. The Origin of Covid

Question ID : 630680204962

Option 1 ID : 630680794713

Option 2 ID : 630680794712

Option 3 ID : 630680794714

Option 4 ID : 630680794711

Status : Answered

Chosen Option : D

**Comprehension:**

Read the given passage and answer the questions that follow.

WHO chief is right in arguing that tracing the origins of Covid is not just a scientific but also a moral imperative. This comes as the US Energy department is reported to have assessed that the pandemic had likely been caused by an unintentional Chinese lab leak. The lab leak theory has persisted despite some scientists positing that the novel virus had naturally jumped from animals to humans. The main reason for this state of unknowability is China's stonewalling of a thorough Covid-origin investigation.

Recall that China had allowed a WHO team to visit the country in early 2021 for the investigation. But the visiting team was neither allowed to freely travel and interview witnesses nor given access to raw patient data from early cases in Wuhan—the Chinese city thought to be ground zero of the pandemic. As a result, the visit's report was inconclusive. And when WHO proposed a second phase of investigation later that year, China flatly refused. This further fuelled speculation that Beijing was hiding something, especially at the Wuhan Institute of Virology, which was said to be conducting gain of function research on coronaviruses. Experiments that were reportedly also funded by the US. If the lab leak theory is true, Covid would be a man-made disaster of epic proportions. Therefore, two things are important. First, there must be an international consensus on banning all gain of function research. The dangers of such experiments far outweigh the benefits. These modified viruses are essentially deadly bioweapons. Second, investigations into the origins of Covid must continue—to find the truth and to better prepare for or prevent future outbreaks. Was Beijing directly responsible for the worst pandemic of this century, that's the question.

SubQuestion No : 23

Q.23 Which of the following statements is true?

- Ans
- A. Modified viruses are deadly bioweapons.
  - B. The WHO team found the origin of Covid in one month.
  - C. China did not allow the WHO team to investigate in China.
  - D. WHO team visited Wuhan twice.

Question ID : 630680204965

Option 1 ID : 630680794726

Option 2 ID : 630680794725

Option 3 ID : 630680794724

Option 4 ID : 630680794723

Status : Answered

Chosen Option : A

**Comprehension:**

Read the given passage and answer the questions that follow.

WHO chief is right in arguing that tracing the origins of Covid is not just a scientific but also a moral imperative. This comes as the US Energy department is reported to have assessed that the pandemic had likely been caused by an unintentional Chinese lab leak. The lab leak theory has persisted despite some scientists positing that the novel virus had naturally jumped from animals to humans. The main reason for this state of unknowability is China's stonewalling of a thorough Covid-origin investigation.

Recall that China had allowed a WHO team to visit the country in early 2021 for the investigation. But the visiting team was neither allowed to freely travel and interview witnesses nor given access to raw patient data from early cases in Wuhan—the Chinese city thought to be ground zero of the pandemic. As a result, the visit's report was inconclusive. And when WHO proposed a second phase of investigation later that year, China flatly refused. This further fuelled speculation that Beijing was hiding something, especially at the Wuhan Institute of Virology, which was said to be conducting gain of function research on coronaviruses. Experiments that were reportedly also funded by the US. If the lab leak theory is true, Covid would be a man-made disaster of epic proportions. Therefore, two things are important. First, there must be an international consensus on banning all gain of function research. The dangers of such experiments far outweigh the benefits. These modified viruses are essentially deadly bioweapons. Second, investigations into the origins of Covid must continue—to find the truth and to better prepare for or prevent future outbreaks. Was Beijing directly responsible for the worst pandemic of this century, that's the question.

SubQuestion No : 24

Q.24 What is the argument of the head of WHO?

- Ans
- A. China did not create Covid
  - B. The USA has created Covid
  - C. Finding the origin of Covid is useless now
  - D. Finding the origin of Covid is a scientific and moral thing

Question ID : 630680204963

Option 1 ID : 630680794715

Option 2 ID : 630680794716

Option 3 ID : 630680794717

Option 4 ID : 630680794718

Status : Answered

Chosen Option : D

**Comprehension:**

Read the given passage and answer the questions that follow.

WHO chief is right in arguing that tracing the origins of Covid is not just a scientific but also a moral imperative. This comes as the US Energy department is reported to have assessed that the pandemic had likely been caused by an unintentional Chinese lab leak. The lab leak theory has persisted despite some scientists positing that the novel virus had naturally jumped from animals to humans. The main reason for this state of unknowability is China's stonewalling of a thorough Covid-origin investigation.

Recall that China had allowed a WHO team to visit the country in early 2021 for the investigation. But the visiting team was neither allowed to freely travel and interview witnesses nor given access to raw patient data from early cases in Wuhan—the Chinese city thought to be ground zero of the pandemic. As a result, the visit's report was inconclusive. And when WHO proposed a second phase of investigation later that year, China flatly refused. This further fuelled speculation that Beijing was hiding something, especially at the Wuhan Institute of Virology, which was said to be conducting gain of function research on coronaviruses. Experiments that were reportedly also funded by the US. If the lab leak theory is true, Covid would be a man-made disaster of epic proportions. Therefore, two things are important. First, there must be an international consensus on banning all gain of function research. The dangers of such experiments far outweigh the benefits. These modified viruses are essentially deadly bioweapons. Second, investigations into the origins of Covid must continue—to find the truth and to better prepare for or prevent future outbreaks. Was Beijing directly responsible for the worst pandemic of this century, that's the question.

SubQuestion No : 25

Q.25 Select the most appropriate meaning of 'Ground zero'.

- Ans  A. The beginning place  
 B. The ending place  
 C. Under ground  
 D. First floor

Question ID : 630680204966  
 Option 1 ID : 630680794729  
 Option 2 ID : 630680794730  
 Option 3 ID : 630680794727  
 Option 4 ID : 630680794728  
 Status : Answered  
 Chosen Option : A

Section : Hindi

Q.1 आप मुझसे हम चाहते हैं?

- Ans  A. हम  
 B. मुझसे  
 C. चाहते  
 D. आप

Question ID : 63068066850  
 Option 1 ID : 630680258241  
 Option 2 ID : 630680258240  
 Option 3 ID : 630680258239  
 Option 4 ID : 630680258238  
 Status : Not Answered  
 Chosen Option : -

Q.2 निम्नलिखित वाक्यांश को ध्यानपूर्वक पढ़ें और बताएं कि यह किस समास का उदाहरण है?  
सिंह रूपी नर – नरसिंह

- Ans  A. कर्मधारय समास  
 B. बहुव्रीहि समास  
 C. द्वंद समास  
 D. तत्पुरुष समास

Question ID : 630680203685  
Option 1 ID : 630680789940  
Option 2 ID : 630680789941  
Option 3 ID : 630680789942  
Option 4 ID : 630680789939  
Status : Not Answered  
Chosen Option : -

Q.3 कौन से विकल्प में 'विधि' के अनेकार्थी शब्द बनाए गए हैं?

- Ans  A. परिणाम, फलक  
 B. दुल्हा, वरदान  
 C. कानून, ईश्वर  
 D. पूँजी, संपत्ति

Question ID : 630680198522  
Option 1 ID : 630680770049  
Option 2 ID : 630680770047  
Option 3 ID : 630680770048  
Option 4 ID : 630680770050  
Status : Not Answered  
Chosen Option : -

Q.4 निम्नलिखित रिक्तस्थान की पूर्ति समश्रुत भिन्नार्थक शब्द से करें।  
चारों ओर बिखरे हरित \_\_\_\_\_ को देख कर सुदेश ने \_\_\_\_\_ लिया कि वह प्रकृति की रक्षा करेगा।

- Ans  A. पेड़, दूड़  
 B. पौधा, वादा  
 C. फसल, कसम  
 D. पर्ण, प्रण

Question ID : 630680197190  
Option 1 ID : 630680765044  
Option 2 ID : 630680765046  
Option 3 ID : 630680765045  
Option 4 ID : 630680765043  
Status : Not Answered  
Chosen Option : -

Q.5 'केवल एक ही \_\_\_\_\_ हरा बचा है' निम्नलिखित वाक्य के रिक्त स्थान में कौन सा उचित तत्सम शब्द प्रयोग होगा?

- Ans  A. रूखा  
 B. वृक्ष  
 C. रीता  
 D. रूख

Question ID : 630680197090  
 Option 1 ID : 630680764643  
 Option 2 ID : 630680764645  
 Option 3 ID : 630680764646  
 Option 4 ID : 630680764644  
 Status : Not Answered  
 Chosen Option : -

Q.6 'अंधा बाँटे रेवड़ी, फिरि - फिरि अपने को दे' लोकोक्ति का अर्थ है-

- Ans  A. अपात्र को बहुमूल्य चीज देना  
 B. कमाए कोई, उड़ाए कोई और  
 C. करना था क्या करने लगे क्या  
 D. अपनों ही को निरंतर लाभ पहुँचाना

Question ID : 630680203734  
 Option 1 ID : 630680790135  
 Option 2 ID : 630680790138  
 Option 3 ID : 630680790136  
 Option 4 ID : 630680790137  
 Status : Not Answered  
 Chosen Option : -

Q.7 दिए गए शब्द का उपयुक्त पर्यायवाची शब्द चुनिए-

- पुत्र  
 Ans  A. तनया  
 B. रवि  
 C. तनय  
 D. सोम

Question ID : 630680128711  
 Option 1 ID : 630680498482  
 Option 2 ID : 630680498483  
 Option 3 ID : 630680498485  
 Option 4 ID : 630680498484  
 Status : Not Answered  
 Chosen Option : -

Q.8 निम्न में से किस विकल्प में लोकोक्ति और उसका अर्थ सुमेलित है-

- Ans
- A. बिल्ली के भागों छींका टूटा – बिल्ली का भाग्य उसका साथ देता है।
  - B. नाचने निकली तो घूँघट क्या – नाचने वालों को घूँघट नहीं ओढ़ना चाहिए।
  - C. तबेले की सज़ा बंदर के सिर – अपराध करे कोई, पकड़ा जाए कोई और।
  - D. थोथा चना बाजे घना – आलसी व्यक्ति बातें बड़ी-बड़ी करता है।

Question ID : 630680197142  
 Option 1 ID : 630680764852  
 Option 2 ID : 630680764851  
 Option 3 ID : 630680764854  
 Option 4 ID : 630680764853  
 Status : Not Answered  
 Chosen Option : –

Q.9 निम्नलिखित विकल्पों में से उचित तत्सम शब्द चुनकर वाक्य पूर्ण करें -  
 इस नगर की \_\_\_\_\_ अत्यंत विशाल और सुन्दर प्रतीत होती है।

- Ans
- A. शहतीर
  - B. दीवार
  - C. चारदीवारी
  - D. प्राचीर

Question ID : 630680146756  
 Option 1 ID : 630680567863  
 Option 2 ID : 630680567862  
 Option 3 ID : 630680567865  
 Option 4 ID : 630680567864  
 Status : Not Answered  
 Chosen Option : –

Q.10 निम्नलिखित विकल्पों में से कौनसा विकल्प 'बाघ' का पर्यायवाची शब्द नहीं है।

- Ans
- A. व्याघ्र
  - B. छितरल
  - C. शाखामृग
  - D. शार्दूल

Question ID : 630680128848  
 Option 1 ID : 630680499028  
 Option 2 ID : 630680499029  
 Option 3 ID : 630680499027  
 Option 4 ID : 630680499026  
 Status : Not Answered  
 Chosen Option : –

Q.11 'संकल्प' शब्द का सर्वाधिक उपयुक्त संधि-विच्छेद है-

- Ans
- A. सन्+कल्प
  - B. सम्+कल्प
  - C. संक्+कल्प
  - D. सं+कल्प

Question ID : 630680123437  
 Option 1 ID : 630680478631  
 Option 2 ID : 630680478632  
 Option 3 ID : 630680478633  
 Option 4 ID : 630680478630  
 Status : Not Answered  
 Chosen Option : -

Q.12 निम्न में से 'निर्भय' शब्द का संधि विच्छेद कौनसा सही है?

- Ans
- A. नी+भय
  - B. नि+भय
  - C. नीः+भय
  - D. निः+भय

Question ID : 63068065889  
 Option 1 ID : 630680254486  
 Option 2 ID : 630680254487  
 Option 3 ID : 630680254489  
 Option 4 ID : 630680254488  
 Status : Not Answered  
 Chosen Option : -

Q.13 निम्नलिखित रिक्तस्थान की पूर्ति समश्रुत भिन्नार्थक शब्द से करें।  
 प्रातःकाल में \_\_\_\_\_ आराधना में व्यस्त है।

- Ans
- A. बालक हनुमान
  - B. कनिका लक्ष्मी
  - C. देव देव
  - D. तरुण तरुणि

Question ID : 630680197189  
 Option 1 ID : 630680765040  
 Option 2 ID : 630680765042  
 Option 3 ID : 630680765041  
 Option 4 ID : 630680765039  
 Status : Not Answered  
 Chosen Option : -

Q.14 'कठोर' का पर्यायवाची शब्द निम्न में से है-

- Ans  A. परुष  
 B. कट्टर  
 C. पुरुष  
 D. कटु

Question ID : 630680126203  
 Option 1 ID : 630680489418  
 Option 2 ID : 630680489419  
 Option 3 ID : 630680489421  
 Option 4 ID : 630680489420  
 Status : Not Answered  
 Chosen Option : -

Q.15 निम्नलिखित में से कौन का वाक्य अकर्मक क्रिया की दृष्टि से शुद्ध है?

- Ans  A. शीलू गीत गाती है  
 B. वह खाना खा रहा है  
 C. मैंने आभा को पुस्तक दी  
 D. सुमन हंस रही है

Question ID : 63068066910  
 Option 1 ID : 630680258476  
 Option 2 ID : 630680258474  
 Option 3 ID : 630680258477  
 Option 4 ID : 630680258475  
 Status : Not Answered  
 Chosen Option : -

Q.16 'हाथी की पीठ पर रखी जाने वाली चौकी' वाक्यांश के लिए सार्थक शब्द निम्नलिखित में से है-

- Ans  A. काठी  
 B. होदा  
 C. हीआ  
 D. पालकी

Question ID : 630680197161  
 Option 1 ID : 630680764927  
 Option 2 ID : 630680764929  
 Option 3 ID : 630680764930  
 Option 4 ID : 630680764928  
 Status : Not Answered  
 Chosen Option : -

Q.17 'तुलसी के वास्ते ही जैसे राम ने अवतार लिया।'

यह वाक्य किस कारक का सटीक उदाहरण है?

- Ans  A. कर्ता  
 B. संप्रदान  
 C. करण  
 D. कर्म

Question ID : 63068066760  
Option 1 ID : 630680257900  
Option 2 ID : 630680257898  
Option 3 ID : 630680257899  
Option 4 ID : 630680257901  
Status : Not Answered  
Chosen Option : -

Q.18 'मृत्युंजय' किस समास का उदाहरण है?

- Ans  A. अव्ययीभाव समास  
 B. तत्पुरुष समास  
 C. बहुव्रीहि समास  
 D. कर्मधारय समास

Question ID : 63068065771  
Option 1 ID : 630680254036  
Option 2 ID : 630680254034  
Option 3 ID : 630680254037  
Option 4 ID : 630680254035  
Status : Not Answered  
Chosen Option : -

Q.19 'चंद्रमा' शब्द किसका पर्यायवाची है?

- Ans  A. नीरद  
 B. तापस  
 C. सोम  
 D. वासर

Question ID : 630680198503  
Option 1 ID : 630680769971  
Option 2 ID : 630680769972  
Option 3 ID : 630680769974  
Option 4 ID : 630680769973  
Status : Not Answered  
Chosen Option : -

Q.20 'जो सब काम अपने भरोसे करता हो' इस वाक्यांश के लिए सार्थक शब्द है -

- Ans
- A. सकर्मक
  - B. अकर्मण्य
  - C. परावलंबी
  - D. स्वावलंबी

Question ID : 630680128767  
Option 1 ID : 630680498707  
Option 2 ID : 630680498708  
Option 3 ID : 630680498706  
Option 4 ID : 630680498709  
Status : Not Answered  
Chosen Option : -

#### Comprehension:

निम्नलिखित गद्यांश को ध्यानपूर्वक पढ़े और प्रश्न के उत्तर दीजिये:

आधुनिक काल में मानव और प्रकृति के पारस्परिक संबंधों के जो मानव-वैज्ञानिक तथा समाज-वैज्ञानिक अध्ययन हुए हैं उनसे यह स्पष्ट रूप से प्रामाणिक हो चुका है कि समान प्राकृतिक परिस्थितियों और वातावरण में रहने वाले मानव-समुदायों में भी अनेक मूलभूत सांस्कृतिक भिन्नताएं संभव हैं। भौगोलिक दृष्टि से सहारा के तौरंग और मूर समाजों का पर्यावरण एक-सा है, किन्तु उनकी संस्कृतियों में असाधारण भिन्नता है। दक्षिण अफ्रीका के बुशमैन और हाटेनटाट समूहों की संस्कृतियाँ भिन्न हैं, यद्यपि उनका भौगोलिक पर्यावरण एक-सा है। ऑस्ट्रेलिया के दक्षिण-पूर्व भाग में पहले शिकार और खाद्य संकलन करने वाली जातियाँ ही रहती थीं, किन्तु अब उसी क्षेत्र में सफलता पूर्वक कृषि और पशुपालन करने वाले युरोपीय समुदाय बस गए हैं। आर्कटिक क्षेत्र के एस्कीमो इग्लू कहलाए जाने वाले बर्फ के मकान बनाते हैं, किन्तु आर्कटिक साइबेरिया के चुकनी समाज में बर्फ को काटकर उससे ही घर बनाने की प्रथा नहीं पाई जाती।

SubQuestion No : 21

Q.21 गद्यांश से यह निष्कर्ष निकलता है कि-

- Ans
- A. मानव और प्रकृति में पारस्परिक संबंध है
  - B. बुशमैन और हाटेनटाट की संस्कृतियाँ भिन्न हैं
  - C. मानव समुदायों में सांस्कृतिक भिन्नता संभव है
  - D. तौरंग और मूर समाजों की संस्कृतियों में असाधारण भिन्नता है

Question ID : 630680127839  
Option 1 ID : 630680495510  
Option 2 ID : 630680495508  
Option 3 ID : 630680495511  
Option 4 ID : 630680495509  
Status : Not Answered  
Chosen Option : -

**Comprehension:**

निम्नलिखित गद्यांश को ध्यानपूर्वक पढ़े और प्रश्न के उत्तर दीजिये:

आधुनिक काल में मानव और प्रकृति के पारस्परिक संबंधों के जो मानव-वैज्ञानिक तथा समाज-वैज्ञानिक अध्ययन हुए हैं उनसे यह स्पष्ट रूप से प्रामाणिक हो चुका है कि समान प्राकृतिक परिस्थितियों और वातावरण में रहने वाले मानव-समुदायों में भी अनेक मूलभूत सांस्कृतिक भिन्नताएं संभव हैं। भौगोलिक दृष्टि से सहारा के तौरंग और मूर समाजों का पर्यावरण एक-सा है, किन्तु उनकी संस्कृतियों में असाधारण भिन्नता है। दक्षिण अफ्रीका के बुशमैन और हाटेनटाट समूहों की संस्कृतियाँ भिन्न हैं, यद्यपि उनका भौगोलिक पर्यावरण एक-सा है। ऑस्ट्रेलिया के दक्षिण-पूर्व भाग में पहले शिकार और खाद्य संकलन करने वाली जातियाँ ही रहती थीं, किन्तु अब उसी क्षेत्र में सफलता पूर्वक कृषि और पशुपालन करने वाले युरोपीय समुदाय बस गए हैं। आर्कटिक क्षेत्र के एस्कीमो इग्लू कहलाए जाने वाले बर्फ के मकान बनाते हैं, किन्तु आर्कटिक साइबेरिया के चुकनी समाज में बर्फ को काटकर उससे ही घर बनाने की प्रथा नहीं पाई जाती।

**SubQuestion No : 22**

Q.22 गद्यांश में किस भौगोलिक क्षेत्र की बात नहीं कही गई है-

- Ans  A. ऑस्ट्रेलिया  
 B. दक्षिण अफ्रीका  
 C. आर्कटिक  
 D. एशिया

Question ID : 630680127838  
 Option 1 ID : 630680495506  
 Option 2 ID : 630680495504  
 Option 3 ID : 630680495507  
 Option 4 ID : 630680495505  
 Status : Not Answered  
 Chosen Option : -

**Comprehension:**

निम्नलिखित गद्यांश को ध्यानपूर्वक पढ़े और प्रश्न के उत्तर दीजिये:

आधुनिक काल में मानव और प्रकृति के पारस्परिक संबंधों के जो मानव-वैज्ञानिक तथा समाज-वैज्ञानिक अध्ययन हुए हैं उनसे यह स्पष्ट रूप से प्रामाणिक हो चुका है कि समान प्राकृतिक परिस्थितियों और वातावरण में रहने वाले मानव-समुदायों में भी अनेक मूलभूत सांस्कृतिक भिन्नताएं संभव हैं। भौगोलिक दृष्टि से सहारा के तौरंग और मूर समाजों का पर्यावरण एक-सा है, किन्तु उनकी संस्कृतियों में असाधारण भिन्नता है। दक्षिण अफ्रीका के बुशमैन और हाटेनटाट समूहों की संस्कृतियाँ भिन्न हैं, यद्यपि उनका भौगोलिक पर्यावरण एक-सा है। ऑस्ट्रेलिया के दक्षिण-पूर्व भाग में पहले शिकार और खाद्य संकलन करने वाली जातियाँ ही रहती थीं, किन्तु अब उसी क्षेत्र में सफलता पूर्वक कृषि और पशुपालन करने वाले युरोपीय समुदाय बस गए हैं। आर्कटिक क्षेत्र के एस्कीमो इग्लू कहलाए जाने वाले बर्फ के मकान बनाते हैं, किन्तु आर्कटिक साइबेरिया के चुकनी समाज में बर्फ को काटकर उससे ही घर बनाने की प्रथा नहीं पाई जाती।

**SubQuestion No : 23**

Q.23 गद्यांश में उदाहरणों द्वारा सिद्ध किया गया है कि 'समान प्राकृतिक परिस्थितियों और वातावरण में रहने वाली जातियों में'-

- Ans  A. सांस्कृतिक भिन्नता संभव है  
 B. सांस्कृतिक एकरूपता संभव है  
 C. सांस्कृतिक समानता होती है  
 D. सांस्कृतिक भिन्नता जरूरी है

Question ID : 630680127837  
 Option 1 ID : 630680495500  
 Option 2 ID : 630680495501  
 Option 3 ID : 630680495502  
 Option 4 ID : 630680495503  
 Status : Not Answered  
 Chosen Option : -

**Comprehension:**

निम्नलिखित गद्यांश को ध्यानपूर्वक पढ़े और प्रश्न के उत्तर दीजिये:

आधुनिक काल में मानव और प्रकृति के पारस्परिक संबंधों के जो मानव-वैज्ञानिक तथा समाज-वैज्ञानिक अध्ययन हुए हैं उनसे यह स्पष्ट रूप से प्रामाणिक हो चुका है कि समान प्राकृतिक परिस्थितियों और वातावरण में रहने वाले मानव-समुदायों में भी अनेक मूलभूत सांस्कृतिक भिन्नताएं संभव हैं। भौगोलिक दृष्टि से सहारा के तौरंग और मूर समाजों का पर्यावरण एक-सा है, किन्तु उनकी संस्कृतियों में असाधारण भिन्नता है। दक्षिण अफ्रीका के बुशमैन और हाटेनटाट समूहों की संस्कृतियाँ भिन्न हैं, यद्यपि उनका भौगोलिक पर्यावरण एक-सा है। ऑस्ट्रेलिया के दक्षिण-पूर्व भाग में पहले शिकार और खाद्य संकलन करने वाली जातियाँ ही रहती थीं, किन्तु अब उसी क्षेत्र में सफलता पूर्वक कृषि और पशुपालन करने वाले युरोपीय समुदाय बस गए हैं। आर्कटिक क्षेत्र के एस्कीमो इग्लू कहलाए जाने वाले बर्फ के मकान बनाते हैं, किन्तु आर्कटिक साइबेरिया के चुकनी समाज में बर्फ को काटकर उससे ही घर बनाने की प्रथा नहीं पाई जाती।

**SubQuestion No : 24**

Q.24 आर्कटिक साइबेरिया में रहने वाले समाज का नाम है-

- Ans  A. चुकनी  
 B. बुशमैन  
 C. हाटेनटाट  
 D. मूर

Question ID : 630680127836

Option 1 ID : 630680495499

Option 2 ID : 630680495498

Option 3 ID : 630680495497

Option 4 ID : 630680495496

Status : Not Answered

Chosen Option : -

**Comprehension:**

निम्नलिखित गद्यांश को ध्यानपूर्वक पढ़े और प्रश्न के उत्तर दीजिये:

आधुनिक काल में मानव और प्रकृति के पारस्परिक संबंधों के जो मानव-वैज्ञानिक तथा समाज-वैज्ञानिक अध्ययन हुए हैं उनसे यह स्पष्ट रूप से प्रामाणिक हो चुका है कि समान प्राकृतिक परिस्थितियों और वातावरण में रहने वाले मानव-समुदायों में भी अनेक मूलभूत सांस्कृतिक भिन्नताएं संभव हैं। भौगोलिक दृष्टि से सहारा के तौरंग और मूर समाजों का पर्यावरण एक-सा है, किन्तु उनकी संस्कृतियों में असाधारण भिन्नता है। दक्षिण अफ्रीका के बुशमैन और हाटेनटाट समूहों की संस्कृतियाँ भिन्न हैं, यद्यपि उनका भौगोलिक पर्यावरण एक-सा है। ऑस्ट्रेलिया के दक्षिण-पूर्व भाग में पहले शिकार और खाद्य संकलन करने वाली जातियाँ ही रहती थीं, किन्तु अब उसी क्षेत्र में सफलता पूर्वक कृषि और पशुपालन करने वाले युरोपीय समुदाय बस गए हैं। आर्कटिक क्षेत्र के एस्कीमो इग्लू कहलाए जाने वाले बर्फ के मकान बनाते हैं, किन्तु आर्कटिक साइबेरिया के चुकनी समाज में बर्फ को काटकर उससे ही घर बनाने की प्रथा नहीं पाई जाती।

**SubQuestion No : 25**

Q.25 गद्यांश की विषय-वस्तु किससे संबंधित है-

- Ans  A. मनोविज्ञान  
 B. शिक्षाशास्त्र  
 C. समाजशास्त्र  
 D. साहित्य

Question ID : 630680127835

Option 1 ID : 630680495495

Option 2 ID : 630680495493

Option 3 ID : 630680495494

Option 4 ID : 630680495492

Status : Not Answered

Chosen Option : -