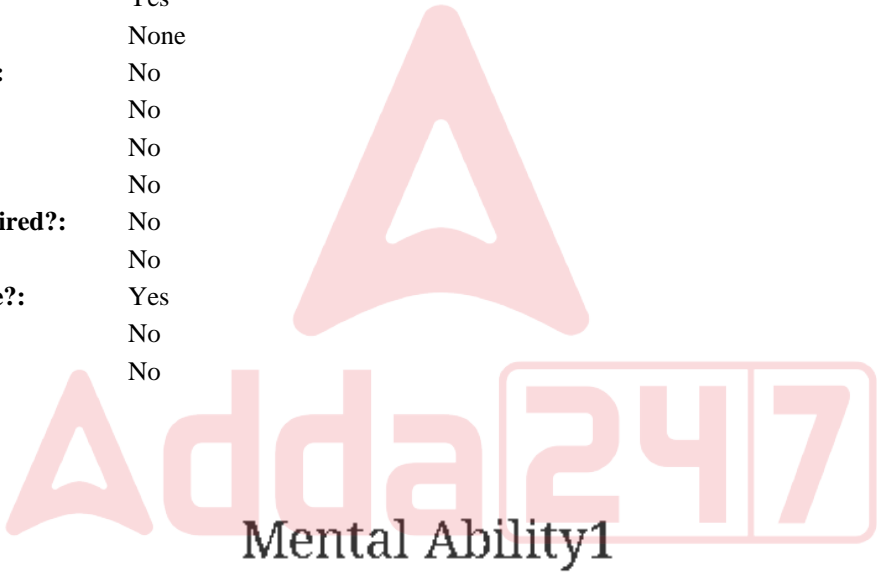


Education Consultant India Ltd.

Notations :

- 1.Options shown in green color and with ✓ icon are correct.
- 2.Options shown in red color and with ✖ icon are incorrect.

Question Paper Name:	GRADE II DASS 17th July 2019 Shift 3
Subject Name:	GRADE II DASS
Creation Date:	2019-07-17 19:29:31
Duration:	120
Total Marks:	200
Display Marks:	Yes
Share Answer Key With Delivery Engine:	No
Actual Answer Key:	Yes
Calculator:	None
Magnifying Glass Required?:	No
Ruler Required?:	No
Eraser Required?:	No
Scratch Pad Required?:	No
Rough Sketch/Notepad Required?:	No
Protractor Required?:	No
Show Watermark on Console?:	Yes
Highlighter:	No
Auto Save on Console?:	No



Group Number :	1
Group Id :	58618092
Group Maximum Duration :	0
Group Minimum Duration :	0
Show Attended Group? :	No
Edit Attended Group? :	No
Break time:	0
Group Marks:	20
Is this Group for Examiner?:	No
Revisit allowed for group Instructions? :	Yes
Maximum Instruction Time:	0
Minimum Instruction Time:	0

Mental Ability1

Section Id :	58618096
Section Number :	1

Adda247

Test Prime

ALL EXAMS, ONE SUBSCRIPTION



1,00,000+
Mock Tests



**Personalised
Report Card**



**Unlimited
Re-Attempt**



600+
Exam Covered



25,000+ Previous
Year Papers



500%
Refund



ATTEMPT FREE MOCK NOW

Section type :	Online
Mandatory or Optional:	Mandatory
Number of Questions:	20
Number of Questions to be attempted:	20
Section Marks:	20

Sub-Section Number:	1
Sub-Section Id:	586180131
Question Shuffling Allowed :	Yes

Question Number : 1 Question Id : 5861802015 Question Type : MCQ Option Shuffling : Yes

Correct Marks : 1 Wrong Marks : 0.25

There is a certain relationship between two given words on one side of :: and one word is given on another side of :: while another word is to be found from the given alternatives, having the same relation with the word as the words of the given pair.

Choose the correct alternative.

Grapes: Bunch :: Singer : ?

Options :

1. ✖ Groups
2. ✖ Crew
3. ✔ Chorus
4. ✖ Jagjit Singh

Question Number : 1 Question Id : 5861802015 Question Type : MCQ Option Shuffling : Yes

Correct Marks : 1 Wrong Marks : 0.25

:: के एक ओर दिए दो शब्दों के बीच एक निश्चित संबंध है, और :: के दूसरी ओर एक शब्द दिया गया है, जबकि दिए गए विकल्पों में से अन्य शब्द खोजना है जिसका उस शब्द से वही संबंध हो जो दिए गए जोड़े के शब्दों के बीच है।

सही विकल्प चुनें।

अंगूर : गुच्छा :: गायक : ?

Options :

1. ✖ समूह

2. ✖ गायक दल

3. ✔ सहगान

4. ✖ जगजीत सिंह

Question Number : 2 Question Id : 5861802016 Question Type : MCQ Option Shuffling : Yes

Correct Marks : 1 Wrong Marks : 0.25

There is a certain relationship between two given numbers on one side of :: and one number is given on another side of :: while another number is to be found from the given alternatives, having the same relation with the number as the number of the given pair.

Choose the correct alternative.

24: 264 :: 52: ?

Options :

1. ✖ 288

2. ✔ 572

3. ✖ 445

4. ✖ 390

Question Number : 2 Question Id : 5861802016 Question Type : MCQ Option Shuffling : Yes

Correct Marks : 1 Wrong Marks : 0.25

:: के एक ओर दी दो संख्याओं के बीच एक निश्चित संबंध है, और :: के दूसरी ओर एक संख्या दी गई है, जबकि दिए गए विकल्पों में से अन्य संख्या खोजनी है जिसका उस संख्या से वही संबंध हो जो दिए गए जोड़े की संख्याओं के बीच है।

सही विकल्प चुनें।

24 : 264 :: 52 : ?

Options :

1. ✖ 288

2. ✔ 572

3. ✖ 445

4. ✖ 390

Question Number : 3 Question Id : 5861802017 Question Type : MCQ Option Shuffling : Yes

Correct Marks : 1 Wrong Marks : 0.25

A group of three interrelated word is given. Choose a word from the given alternatives that is similar to the given words and hence belongs to the same group.

Ornithology : Seismology : Ethnology

Options :

1. ✖ Ostrich

2. ✖ Names

3. ✔ Occultism

4. ✖ Earthquakes

Question Number : 3 Question Id : 5861802017 Question Type : MCQ Option Shuffling : Yes

Correct Marks : 1 Wrong Marks : 0.25

तीन परस्पर संबंधित शब्दों का एक समूह दिया गया है। दिए गए विकल्पों से वह शब्द चुनें जो दिए गए शब्दों के समान हो और इस प्रकार उसी समूह से संबंधित हो।

ऑर्निथोलॉजी : सीस्मोलॉजी : एथनोलॉजी

Options :

1. ✖ शत्रुमुर्ग

2. ✖ नाम

3. ✔ रहस्यवाद

4. ✖ भूकंप

Question Number : 4 Question Id : 5861802018 Question Type : MCQ Option Shuffling : Yes

Correct Marks : 1 Wrong Marks : 0.25

A group of three interrelated numbers is given. Choose a numbers from the given alternatives that is similar to the given numbers and hence belongs to the same group.

156 : 221 : 143

Options :

1. ✖ 192

2. ✖ 224

3. ✖ 238

4. ✔ 117

Question Number : 4 Question Id : 5861802018 Question Type : MCQ Option Shuffling : Yes

Correct Marks : 1 Wrong Marks : 0.25

तीन परस्पर संबंधित संख्याओं का एक समूह दिया गया है। दिए गए विकल्पों से वह संख्या चुनें जो दी गई संख्याओं के समान हो और इस प्रकार उसी समूह से संबंधित हो।

156 : 221 : 143

Options :

1. ✖ 192

2. ✖ 224

3. ✖ 238

4. ✔ 117

Question Number : 5 Question Id : 5861802019 Question Type : MCQ Option Shuffling : Yes

Correct Marks : 1 Wrong Marks : 0.25

Which of the following is the same as **Poet, Hunter, and Judge?**

Options :

1. ✖ Crop

2. ✖ Food

3. ✔ Farmer

4. ✖ Justice

Question Number : 5 Question Id : 5861802019 Question Type : MCQ Option Shuffling : Yes

Correct Marks : 1 Wrong Marks : 0.25

निम्नलिखित में से कौनसा विकल्प कवि, शिकारी और न्यायाधीश से समानता रखता है?

Options :

1. ✖ फसल

2. ✖ भोजन

3. ✔ किसान

4. ✖ न्याय

Question Number : 6 Question Id : 5861802020 Question Type : MCQ Option Shuffling : Yes

Correct Marks : 1 Wrong Marks : 0.25

Four pairs of words are given out of which the words in three pairs bear a certain common relationship. Choose the pair in which the words are differently related.

Options :

1. ✖ Bihar – Patna

2. ✖ Kerala – Trivandrum

3. ✔ Nagaland – Gangtok

4. ✖ Assam – Dispur

Question Number : 6 Question Id : 5861802020 Question Type : MCQ Option Shuffling : Yes

Correct Marks : 1 Wrong Marks : 0.25

शब्दों के चार जोड़े दिए गए हैं जिनमें से तीन जोड़ों में शब्दों के बीच एक निश्चित समान संबंध है। वह जोड़ा चुनें जिसमें शब्द भिन्न प्रकार से परस्पर संबंधित हैं।

Options :

1. ✖ बिहार - पटना

2. ✖ केरल - त्रिवेन्द्रम

3. ✓ नागालैंड - गंगटोक

4. ✗ असम - दिसपुर

Question Number : 7 Question Id : 5861802021 Question Type : MCQ Option Shuffling : Yes

Correct Marks : 1 Wrong Marks : 0.25

Six girls are standing in a circle formation, facing the center. Asha is to the left of Pinky. Soni is between Aarti and Vijaya. Hema is between Asha and Aarti. Who is standing to the left of Vijaya?

Options :

1. ✓ Pinky

2. ✗ Soni

3. ✗ Aarti

4. ✗ Asha

Question Number : 7 Question Id : 5861802021 Question Type : MCQ Option Shuffling : Yes

Correct Marks : 1 Wrong Marks : 0.25

छह लड़कियां एक वृत्ताकार घरे के चारों ओर खड़ी हैं और इन सब का मुंह घरे के केन्द्र की ओर है। आशा पिंगी के बाईं ओर खड़ी है। सोनी आरती और विजया के बीच खड़ी है। हेमा आशा और आरती के बीच है। विजया के बाईं ओर कौन खड़ी है?

Options :

1. ✓ पिंगी

2. ✗ सोनी

3. ✗ आरती

4. ✖ आशा

Question Number : 8 Question Id : 5861802022 Question Type : MCQ Option Shuffling : Yes

Correct Marks : 1 Wrong Marks : 0.25

My school is in the East of my house, Temple is North of my house and Market is South of my house. If all are at equal distance from my house, in which direction the Temple is with respect to the School?

Options :

1. ✖ North – East

2. ✔ North – West

3. ✖ South – East

4. ✖ South – West

Question Number : 8 Question Id : 5861802022 Question Type : MCQ Option Shuffling : Yes

Correct Marks : 1 Wrong Marks : 0.25

मेरा स्कूल मेरे घर की पूर्व दिशा में है, मंदिर मेरे घर की उत्तर दिशा में है और बाज़ार मेरे घर की दक्षिण दिशा में है। अगर ये सभी मेरे घर से समान दूरी पर हैं, तो मंदिर, स्कूल के संबंध में किस दिशा में स्थित है?

Options :

1. ✖ उत्तर - पूर्व

2. ✔ उत्तर - पश्चिम

3. ✖ दक्षिण - पूर्व

4. ✖ दक्षिण - पश्चिम

Question Number : 9 Question Id : 5861802023 Question Type : MCQ Option Shuffling : Yes

Correct Marks : 1 Wrong Marks : 0.25

Sachin, Sahil, Sandhya, Sani, Sanju, Saurabh, Shweta and Sunil are sitting around a round table in the same order for lunch at equal distance. Their positions are Anti-clockwise. If Sandhya sits facing East, then in which direction Sanju is facing?

Options :

1. ✖ North – East

2. ✔ North

3. ✖ South – East

4. ✖ South

Question Number : 9 Question Id : 5861802023 Question Type : MCQ Option Shuffling : Yes

Correct Marks : 1 Wrong Marks : 0.25

सचिन, साहिल, संध्या, सनी, संजू, सौरभ, श्वेता और सुनील, लंच के लिए एक गोल मेज के चारों ओर समान दूरियों पर इसी क्रम में बैठे हैं। उनकी स्थिति दक्षिणावर्त है। यदि संध्या पूर्व की ओर बैठी है, तो संजू की स्थिति क्या होगी?

Options :

1. ✖ उत्तर - पूर्व

2. ✔ उत्तर

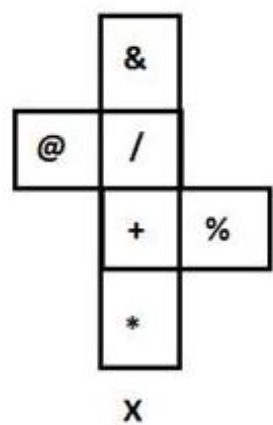
3. ✖ दक्षिण - पूर्व

4. ✖ दक्षिण

Question Number : 10 Question Id : 5861802024 Question Type : MCQ Option Shuffling : Yes

Correct Marks : 1 Wrong Marks : 0.25

The sheet of paper in fig X is folded to form a cube. Which will come opposite to face showing ‘/’?

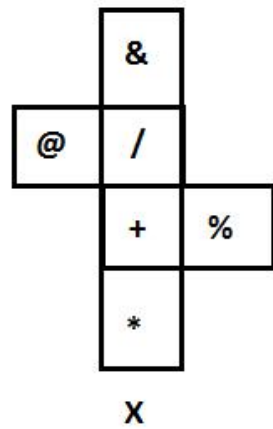


Options :

- 1. ✖ @
- 2. ✔ *
- 3. ✖ +
- 4. ✖ &

Question Number : 10 Question Id : 5861802024 Question Type : MCQ Option Shuffling : Yes
Correct Marks : 1 Wrong Marks : 0.25

चित्र X में कागज की एक शीट को मोड़कर एक घन बनाया गया है। इसका जो भाग ‘/’ दिखा रहा है, उसके ठीक विपरीत क्या होगा?



Options :

- 1. ✖ @

2. ✓ *

3. ✗ +

4. ✗ &

Question Number : 11 Question Id : 5861802025 Question Type : MCQ Option Shuffling : Yes

Correct Marks : 1 Wrong Marks : 0.25

Children A, B, C, D, E, F and G are standing in a line. F is to the left of A and right of B. D is between G and B. E is standing left of C and G is right of C. Who is standing at the left extreme?

Options :

1. ✗ C

2. ✗ A

3. ✓ E

4. ✗ D

Question Number : 11 Question Id : 5861802025 Question Type : MCQ Option Shuffling : Yes

Correct Marks : 1 Wrong Marks : 0.25

बच्चे A, B, C, D, E, F और G एक कतार में खड़े हैं। F, A के बाईं ओर व B के दाईं ओर खड़ा है। D, G और B के बीच में खड़ा है। E के C के बाएं खड़ा है और G, C के दाएं खड़ा है। सबसे बाईं ओर कौन खड़ा है?

Options :

1. ✗ C

2. ✗ A

3. ✓ E

4. ✗ D

Question Number : 12 Question Id : 5861802026 Question Type : MCQ Option Shuffling : Yes

Correct Marks : 1 Wrong Marks : 0.25

S, T, U, V, X, Y and Z are sitting around a round table for group discussion. T is sitting third to the right of S and between U and Z. Z is sitting third to the right of Y. V is sitting right of X. What will be the position of V?

Options :

1. ✗ V is sitting second to the left of T

2. ✗ V is sitting between T and Z

3. ✓ V is sitting second to the left of Y

4. ✗ V is sitting third to the left of S

Question Number : 12 Question Id : 5861802026 Question Type : MCQ Option Shuffling : Yes

Correct Marks : 1 Wrong Marks : 0.25

S, T, U, V, X, Y और Z समूह चर्चा में भाग लेने के लिए एक गोल मेज के चारों ओर बैठे हैं। T, S के दायें से तीसरे और U और Z के बीच में बैठा है। Z, Y के दायें से तीसरे स्थान पर बैठा है। V, X के ठीक दाईं ओर बैठा है। V की स्थिति क्या होगी?

Options :

1. ✗ V, T के बाएं से दूसरे स्थान पर बैठा है।

2. ✗ V, T और Z के बीच में बैठा है।

3. ✓ V, Y के बाएं से दूसरे स्थान पर बैठा है।

4. ✗ V, S के बाएं से तीसरे स्थान पर बैठा है।

Question Number : 13 Question Id : 5861802027 Question Type : MCQ Option Shuffling : Yes
Correct Marks : 1 Wrong Marks : 0.25

- I. Doby is sister of John and John is brother of Shreya.
- II. Shreya is daughter Jones and sister of Jani.
- III. Doby is brother of Shreya and Jani.

If the first two statements are true, the third statement is:

Options :

1. ✗ True

2. ✓ False

3. ✗ May be true

4. ✗ Uncertain

Question Number : 13 Question Id : 5861802027 Question Type : MCQ Option Shuffling : Yes
Correct Marks : 1 Wrong Marks : 0.25

- I. डॉबी जॉन की बहन है और जॉन श्रेया का भाई है।
- II. श्रेया, जॉन्स की बेटी और जॉनी की बहन है।
- III. डॉबी श्रेया और जानी का भाई है।

यदि प्रथम दोनों कथन सही हैं, तो तीसरा कथन:

Options :

1. ✗ सही

2. ✓ गलत
3. ✗ सही हो सकता है।
4. ✗ अनिश्चित है।

Question Number : 14 Question Id : 5861802028 Question Type : MCQ Option Shuffling : Yes

Correct Marks : 1 Wrong Marks : 0.25

Anas, Bipin, Chandan, Dev, Easa and Fatima are friends. No two friends are of the same age, but all have birthdays on the same date. The youngest is 23 years old and the oldest is 28 years. Easa is somewhere between Chandan and Anas. Dev is older than Bipin. Fatima is older than Chandan. Anas is oldest and Chandan is youngest among all.

Which of the following is true?

Options :

1. ✗ Bipin is 24 years old
2. ✓ Anas is 28 years old
3. ✗ Chandan is 25 years old
4. ✗ Fatima is 27 years old

Question Number : 14 Question Id : 5861802028 Question Type : MCQ Option Shuffling : Yes

Correct Marks : 1 Wrong Marks : 0.25

अनस, बिपिन, चंदन, देव, ईसा और फातिमा दोस्त हैं। कोई भी दो दोस्त समान उम्र के नहीं हैं, लेकिन सभी का जन्मदिन एक ही तारीख को आता है। इनमें सबसे छोटा व्यक्ति 23 साल का और सबसे बड़ा 28 साल का है। ईसा की उम्र चंदन और अनस के कहीं बीच की है। देव बिपिन से बड़ा है। फातिमा चंदन से बड़ी हैं। अनस सबसे बड़ा है और चंदन सभी में सबसे छोटा है।

निम्न में से कौन सा कथन सत्य है?

Options :

1. ✖ बिपिन की उम्र 24 साल है।
2. ✔ अनस की उम्र 28 साल है।
3. ✖ चंदन की उम्र 25 साल है।
4. ✖ फातिमा की उम्र 27 साल है।

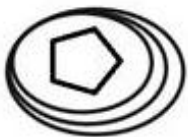
Question Number : 15 Question Id : 5861802029 Question Type : MCQ Option Shuffling : Yes

Correct Marks : 1 Wrong Marks : 0.25

What will be the water image of?



Options :



1. ✖



2. ✖



3. ✔

4. ✖

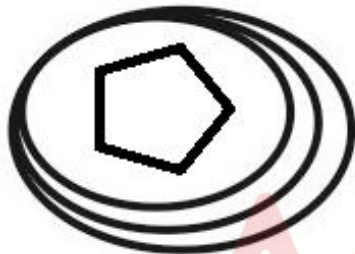


Question Number : 15 Question Id : 5861802029 Question Type : MCQ Option Shuffling : Yes
Correct Marks : 1 Wrong Marks : 0.25

निम्न की जल में छवि (वाटर इमेज) क्या होगी?




Options :



1. ✖



2. ✖



3. ✓



4. ✗

Question Number : 16 Question Id : 5861802030 Question Type : MCQ Option Shuffling : Yes
Correct Marks : 1 Wrong Marks : 0.25

Rohan looked at his watch and told his sister Rima that it was 6:23 pm. But Rima told him that he had misread the long hand for short hand and vice-versa, What was the correct time?

Options :

1. ✓ 4:33 pm

2. ✗ 4:23 pm

3. ✗ 4:27 pm

4. ✗ 4:15 pm

Question Number : 16 Question Id : 5861802030 Question Type : MCQ Option Shuffling : Yes
Correct Marks : 1 Wrong Marks : 0.25

रोहन ने घड़ी देखकर अपनी बहन रीमा को बताया कि शाम के 6:23 बजे हैं। लेकिन रीमा ने उसे बताया कि उसने घड़ी की बड़ी सुई को छोटी और छोटी सुई को बड़ी समझ लिया है जिससे समय गलत आ रहा है, सही समय क्या था?

Options :

1. ✓ 4:33 pm

2. ✗ 4:23 pm

3. ✗ 4:27 pm

4. ✗ 4:15 pm

Question Number : 17 Question Id : 5861802031 Question Type : MCQ Option Shuffling : Yes

Correct Marks : 1 Wrong Marks : 0.25

Six friends are sitting in a row in a cinema hall. Karan is sitting between Vijay and Rakesh. Vjay is sitting next to Mukti. Mukti is sitting next to Bakta, who is sitting on the extreme left and Dinesh is sitting next to Rakesh. Who are sitting adjacent to Vijay?

Options :

1. ✓ Mukti and Karan

2. ✗ Bakta and Mukti

3. ✗ Dinesh and Rakesh

4. ✗ Rakesh and Bakta

Question Number : 17 Question Id : 5861802031 Question Type : MCQ Option Shuffling : Yes

Correct Marks : 1 Wrong Marks : 0.25

एक सिनेमा हॉल में छह दोस्त एक कतार में बैठे हैं। करण विजय और राकेश के बीच में बैठा है। विजय मुक्ति के बगल में बैठा है। मुक्ति बक्ता के बगल में बैठी है, जो सबसे बाईं ओर बैठी है और दिनेश राकेश के बगल में बैठा है। विजय के पास कौन बैठे हैं?

Options :

1. ✓ मुक्ति और करण
2. ✗ बकता और मुक्ति
3. ✗ दिनेश और राकेश
4. ✗ राकेश और बकता

Question Number : 18 Question Id : 5861802032 Question Type : MCQ Option Shuffling : Yes

Correct Marks : 1 Wrong Marks : 0.25

The statement given below is followed by two decisions labeled I, and II. You have to assume everything in the statement to be true, and then decide which of the two suggested decisions logically follows for pursuing.

Statement: There are huge numbers of people affected by air pollution caused by automobile industries.

Decisions:

- I. Automobile industries should be closed immediately.
- II. Such types of industries should be shifted outer sides of city.

Options :

1. ✗ Only I follows
2. ✗ Both I and II follow
3. ✗ Neither I nor II follow
4. ✓ Only II follows

Question Number : 18 Question Id : 5861802032 Question Type : MCQ Option Shuffling : Yes

Correct Marks : 1 Wrong Marks : 0.25

नीचे दिए कथन के बाद दो निर्णय I, और II दिए गए हैं। आपको कथन को पूर्णतया सत्य मानना है और फिर यह निर्धारित करना है कि दोनों में से कौन से निर्णय तर्कसंगत रूप से सही हैं।

कथन: मोटर वाहन उद्योगों के कारण हो रहा वायु प्रदूषण बहुत से लोगों को प्रभावित कर रहा है।

निर्णय:

- I. मोटर वाहन उद्योगों को तुरंत बंद कर दिया जाना चाहिए।
- II. इस प्रकार के उद्योगों को शहर के बाहर स्थानांतरित कर दिया जाना चाहिए।

Options :

1. ✗ केवल I सही है।
2. ✗ I और II दोनों सही हैं।
3. ✗ या तो I या II सही हैं।
4. ✓ केवल II सही है।

Question Number : 19 Question Id : 5861802033 Question Type : MCQ Option Shuffling : Yes

Correct Marks : 1 Wrong Marks : 0.25

The statement given below is followed by two decisions labeled I, and II. You have to assume everything in the statement to be true, and then decide which of the two suggested decisions logically follows for pursuing.

Statement: Highway robbery on the expressway between Delhi to Agra is increasing day by day.

Decisions:

- I. As soon as possible robbers should be arrested.
- II. Regular police patrolling should be started at this expressway.

Options :

1. ✗ Only I follows
2. ✓ Both I and II follow
3. ✗ Either I or II follow

4. ✖ Only II follows

Question Number : 19 Question Id : 5861802033 Question Type : MCQ Option Shuffling : Yes

Correct Marks : 1 Wrong Marks : 0.25

नीचे दिए कथन के बाद दो निर्णय I, और II दिए गए हैं। आपको कथन को पूर्णतया सत्य मानना है और फिर यह निर्धारित करना है कि दोनों में से कौन से निर्णय तर्कसंगत रूप से सही हैं।

कथन: दिल्ली से आगरा के बीच एक्सप्रेसवे हाईवे पर लूट की घटनाएं दिनोदिन बढ़ती जा रही है।

निर्णय:

- I. जितनी जल्दी हो सके लुटेरों को गिरफ्तार कर लिया जाना चाहिए।
- II. इस एक्सप्रेसवे पर नियमित पुलिस गश्त शुरू की जानी चाहिए।

Options :

1. ✖ केवल I सही है।

2. ✔ I और II दोनों सही हैं।

3. ✖ या तो I या II सही हैं।

4. ✖ केवल II सही है।

Question Number : 20 Question Id : 5861802034 Question Type : MCQ Option Shuffling : Yes

Correct Marks : 1 Wrong Marks : 0.25

The statement given below is followed by two decisions labeled I, and II. You have to assume everything in the statement to be true, and then decide which of the two suggested decisions logically follows for pursuing.

Statement: All employees of the office have celebrated birthday of Mr. X and have taken photos/selfi in the restricted area of the office.

Decisions:

- I. All staff should be suspended from job.
- II. A show cause notice should be served to all staff.

Options :

1. ✖ Only I follows

2. ✖ Both I and II follow

3. ✖ Either I or II follow

4. ✔ Only II follows

Question Number : 20 Question Id : 5861802034 Question Type : MCQ Option Shuffling : Yes

Correct Marks : 1 Wrong Marks : 0.25

नीचे दिए कथन के बाद दो निर्णय I, और II दिए गए हैं। आपको कथन को पूर्णतया सत्य मानना है और फिर यह निर्धारित करना है कि दोनों में से कौन से निर्णय तर्कसंगत रूप से सही हैं।

कथन: कार्यालय के सभी कर्मचारियों ने मिस्टर X का जन्मदिन मनाया है और कार्यालय के प्रतिबंधित क्षेत्र में फोटो / सेल्फी ली है।

निर्णय:

- I. सभी कर्मचारियों को नौकरी से निलंबित कर दिया जाना चाहिए।
- II. सभी कर्मचारियों को कारण बताओ नोटिस दिया जाना चाहिए।

Options :

1. ✖ केवल I सही है।

2. ✖ I और II दोनों सही हैं।

3. ✖ या तो I या II सही हैं।

4. ✔ केवल II सही है।

Mental Ability2

Group Number :

2

Group Id :

58618093

Group Maximum Duration :

0

Group Minimum Duration :

0

Show Attended Group? :

No

Edit Attended Group? :	No
Break time:	0
Group Marks:	20
Is this Group for Examiner?:	No
Revisit allowed for group Instructions? :	Yes
Maximum Instruction Time:	0
Minimum Instruction Time:	0

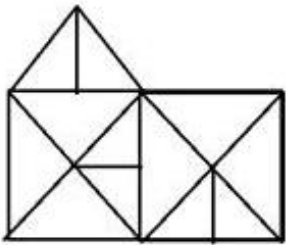
Mental Ability2

Section Id :	58618097
Section Number :	1
Section type :	Online
Mandatory or Optional:	Mandatory
Number of Questions:	20
Number of Questions to be attempted:	20
Section Marks:	20

Sub-Section Number:	1
Sub-Section Id:	586180132
Question Shuffling Allowed :	Yes

Question Number : 21 Question Id : 5861802035 Question Type : MCQ Option Shuffling : Yes
Correct Marks : 1 Wrong Marks : 0.25

How many triangles are in the figure?



Options :

1. ✖ 23

2. ✖ 22

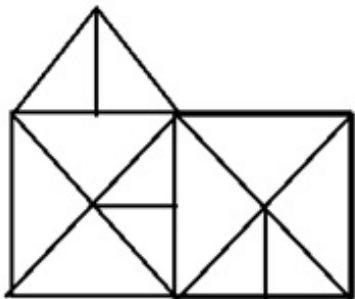
3. ✖ 21

4. ✔ 25

Question Number : 21 Question Id : 5861802035 Question Type : MCQ Option Shuffling : Yes

Correct Marks : 1 Wrong Marks : 0.25

चित्र में कितने त्रिभुज हैं?



Options :

1. ✖ 23

2. ✖ 22

3. ✖ 21

4. ✔ 25

Question Number : 22 Question Id : 5861802036 Question Type : MCQ Option Shuffling : Yes

Correct Marks : 1 Wrong Marks : 0.25

In a certain code language ANTICIPATION is written as ICITNANOITAP. How will the PRODUCTIVITY be written in that language?

Options :

1. ✖ CUDORPYTIVTI

2. ✔ CUDORPYTIVIT

3. ✖ CUDOPRYTIVIT

4. ✖ CUDORPTYIVIT

Question Number : 22 Question Id : 5861802036 Question Type : MCQ Option Shuffling : Yes

Correct Marks : 1 Wrong Marks : 0.25

एक निश्चित कोड में ANTICIPATION को ICITNANOITAP लिखा जाता है। उसी कोड में PRODUCTIVITY को किस प्रकार लिखा जाएगा?

Options :

1. ✖ CUDORPYTIVTI

2. ✔ CUDORPYTIVIT

3. ✖ CUDOPRYTIVIT

4. ✖ CUDORPTYIVIT

Question Number : 23 Question Id : 5861802037 Question Type : MCQ Option Shuffling : Yes

Correct Marks : 1 Wrong Marks : 0.25

Four letter clusters are given out of which the three letter clusters bear a certain common relationship. Choose the option in which the letter clusters are differently related.

Options :

1. ✖ DHLP

2. ✔ EIMR

3. ✖ CGKO

4. ✖ SWAE

Question Number : 23 Question Id : 5861802037 Question Type : MCQ Option Shuffling : Yes

Correct Marks : 1 Wrong Marks : 0.25

नीचे चार अक्षर समूह दिए गए हैं, जिनमें से तीन अक्षर समूह आपस में किसी ना किसी तरीके से संबंधित हैं। आपस में संबंध ना रखने वाले अक्षर समूहों का विकल्प चुनें।

Options :

1. ✖ DHLP

2. ✔ EIMR

3. ✖ CGKO

4. ✖ SWAE

Question Number : 24 Question Id : 5861802038 Question Type : MCQ Option Shuffling : Yes

Correct Marks : 1 Wrong Marks : 0.25

Four numbers are given out of which the three numbers bear a certain common relationship. Choose the number which is different from others.

Options :

1. ✖ 341

2. ✖ 403

3. ✖ 527

4. ✔ 697

Question Number : 24 Question Id : 5861802038 Question Type : MCQ Option Shuffling : Yes

Correct Marks : 1 Wrong Marks : 0.25

चार संख्याएं दी गई हैं, जिनमें से तीन संख्याओं के बीच एक निश्चित समान संबंध है। वह संख्या चुनें जो अन्य से भिन्न है।

Options :

1. ✖ 341

2. ✖ 403

3. ✖ 527

4. ✔ 697


Question Number : 25 Question Id : 5861802039 Question Type : MCQ Option Shuffling : Yes


Correct Marks : 1 Wrong Marks : 0.25


Four figures are given out of which the three figures bear a certain common relationship. Choose the figures which is different from others.

Options :

1. ✖ 

2. ✔ 

3. ✖ 

4. ✖ 

Question Number : 25 Question Id : 5861802039 Question Type : MCQ Option Shuffling : Yes

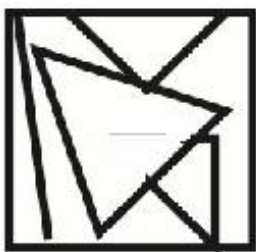
Correct Marks : 1 Wrong Marks : 0.25

चार आकृतियां दी गई हैं, जिनमें से तीन आकृतियों के बीच एक निश्चित समान संबंध है। वह आकृति चुनें जो अन्य से भिन्न है।

Options :




1. ✖



2. ✔



3. ✖



4. ✖

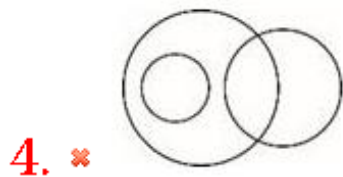

Question Number : 26 Question Id : 5861802040 Question Type : MCQ Option Shuffling : Yes

Correct Marks : 1 Wrong Marks : 0.25

Venn diagram that best represents the given set of classes:

PARENTS, MOTHER, FRIENDS

Options :



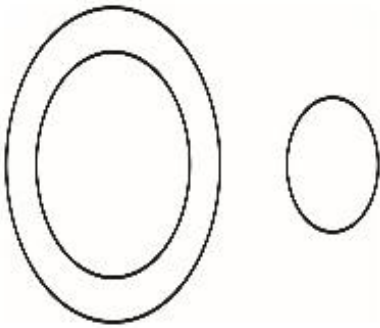
Question Number : 26 Question Id : 5861802040 Question Type : MCQ Option Shuffling : Yes

Correct Marks : 1 Wrong Marks : 0.25


कौन सा वेन आरेख, दिए गए वर्गों के समुच्चय को सर्वोत्तम निरूपित करता है?

माता-पिता, माता, मित्र


Options :



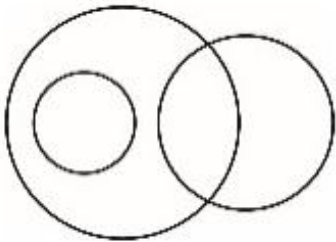
1. ✓



2. ✗



3. ✗



4. ✗




Question Number : 27 Question Id : 5861802041 Question Type : MCQ Option Shuffling : Yes
Correct Marks : 1 Wrong Marks : 0.25

Venn diagram that best represents the given set of classes:

SCIENTIST, DOCTORS, ADVOCATES

Options :

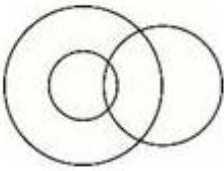
1. ✖



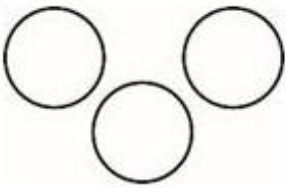
2. ✖



3. ✖



4. ✔




Question Number : 27 Question Id : 5861802041 Question Type : MCQ Option Shuffling : Yes

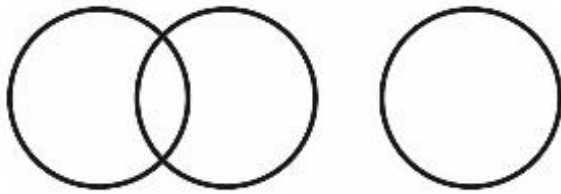
Correct Marks : 1 Wrong Marks : 0.25

कौन सा वेन आरेख, दिए गए वर्गों के समुच्चय को सर्वोत्तम निरूपित करता है?
वैज्ञानिक, डॉक्टर, वकील

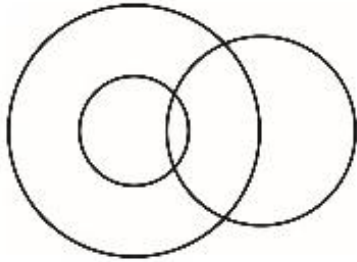
Options :



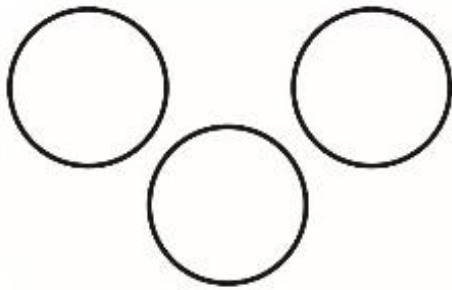
1. ✖



2. ✖



3. ✖



4. ✔

Question Number : 28 Question Id : 5861802042 Question Type : MCQ Option Shuffling : Yes

Correct Marks : 1 Wrong Marks : 0.25

If 'A - B' means A is mother of B, 'A \$ B', A is sister of B, 'A @ B' means A is father of B and 'A=B' means A is son of B.

If $R \$ S = O @ P$, then how R is related to P?

Options :

1. ✖ Nephew

2. ✖ Son

3. ✔ Sister

4. ✖ Niece

Question Number : 28 Question Id : 5861802042 Question Type : MCQ Option Shuffling : Yes

Correct Marks : 1 Wrong Marks : 0.25

यदि 'A - B' का अर्थ A , B की मां है, 'A \$ B' का अर्थ A , B की बहन है, 'A @ B' का अर्थ A , B का पिता है, और 'A=B' का अर्थ A , B का पुत्र है।

यदि $R \$ S = O @ P$, तो R , P से किस प्रकार संबंधित है?

Options :

1. ✖ भतीजा

2. ✖ बेटा

3. ✔ बहन

4. ✖ भांजी

Question Number : 29 Question Id : 5861802043 Question Type : MCQ Option Shuffling : Yes

Correct Marks : 1 Wrong Marks : 0.25

Shahini and Mohani are sisters. Dev and Anu are brothers. Dinesh is husband of Manju and son of Jyoti. Dev is son Jyoti and Jyoti is mother of Shahini. How Dinesh is related to Mohani?

Options :

1. ✖ Son

2. ✔ Brother

3. ✖ Father

4. ✖ Brother in law

Question Number : 29 Question Id : 5861802043 Question Type : MCQ Option Shuffling : Yes

Correct Marks : 1 Wrong Marks : 0.25

शाहिनी और मोहनी बहनें हैं। देव और अनु भाई हैं। दिनेश मंजू का पति और ज्योति का बेटा है। देव ज्योति का बेटा है और ज्योति शाहिनी की मां हैं। दिनेश का मोहिनी से क्या संबंध है?

Options :

1. ✖ बेटा

2. ✔ भाई

3. ✖ पिता

4. ✖ बहनोई

Question Number : 30 Question Id : 5861802044 Question Type : MCQ Option Shuffling : Yes

Correct Marks : 1 Wrong Marks : 0.25

If 'P * Q' means P is father of Q, 'P % Q', P is daughter of Q, 'P # Q' means P is mother of Q and 'P = Q' means Q is son of P

If $M = N * O \# R * S$, then how R is related to M?

Options :

1. ✖ Brother

2. ✔ Grand grand Son

3. ✖ Grand grand Father

4. ✖ Grand grand Mother

Question Number : 30 Question Id : 5861802044 Question Type : MCQ Option Shuffling : Yes

Correct Marks : 1 Wrong Marks : 0.25

यदि 'P * Q' का अर्थ P , Q का पिता है, 'P % Q' का अर्थ P , Q की पुत्री है, 'P # Q' का अर्थ P , Q की मां है, और 'P = Q' का अर्थ Q , P का पुत्र है।

यदि $M = N * O \# R * S$, तो R , M से किस प्रकार संबंधित है?

Options :

1. ✖ भाई

2. ✔ परपोता

3. ✖ परदादा

4. ✖ परदादी

Question Number : 31 Question Id : 5861802045 Question Type : MCQ Option Shuffling : Yes

Correct Marks : 1 Wrong Marks : 0.25

In certain code TRAINER is written as US19O5S, How will be FASHION written in that code?

Options :

1. ✖ G1TI9PO

2. ✔ G1TI915O

3. ✖ GBTI915O

4. ✖ G1TI715O

Question Number : 31 Question Id : 5861802045 Question Type : MCQ Option Shuffling : Yes

Correct Marks : 1 Wrong Marks : 0.25

एक निश्चित कोड में TRAINER को US19O5S लिखा जाता है। उसी कोड में FASHION को किस प्रकार लिखा जाएगा?

Options :

1. ✖ G1TI9PO
2. ✔ G1TI915O
3. ✖ GBTI915O
4. ✖ G1TI715O

Question Number : 32 Question Id : 5861802046 Question Type : MCQ Option Shuffling : Yes
Correct Marks : 1 Wrong Marks : 0.25

In certain code ACTION is written as 372, How will be FOLLOW written in that code?

Options :

1. ✖ 200
2. ✖ 83
3. ✖ 345
4. ✔ 498

Question Number : 32 Question Id : 5861802046 Question Type : MCQ Option Shuffling : Yes
Correct Marks : 1 Wrong Marks : 0.25

एक निश्चित कोड में ACTION को 372 लिखा जाता है। उसी कोड में FOLLOW को किस प्रकार लिखा जाएगा?

Options :

1. ✖ 200

2. ✖ 83

3. ✖ 345

4. ✔ 498

Question Number : 33 Question Id : 5861802047 Question Type : MCQ Option Shuffling : Yes

Correct Marks : 1 Wrong Marks : 0.25

Which of the following pairs of signs, when their positions are interchanged, will correctly solve the given mathematical equation?

$$20 + 5 - 25 \div 5 \times 5 = 100$$

Options :

1. ✖ \div and \times

2. ✖ \div and $+$

3. ✔ $+$ and \times

4. ✖ $+$ and $-$

Question Number : 33 Question Id : 5861802047 Question Type : MCQ Option Shuffling : Yes

Correct Marks : 1 Wrong Marks : 0.25

निम्न में से किस चिन्ह युग्म में, उनकी स्थितियां परस्पर बदले जाने पर दिया गया गणितीय समीकरण सही हल हो जाएगा?

$$20 + 5 - 25 \div 5 \times 5 = 100$$

Options :

1. ✖ \div और \times

2. ✖ ÷ और +

3. ✔ + और ×

4. ✖ + और -

Question Number : 34 Question Id : 5861802048 Question Type : MCQ Option Shuffling : Yes

Correct Marks : 1 Wrong Marks : 0.25

Which of the following pairs of numbers and signs, when their positions are interchanged, will correctly solve the given mathematical equation?

$$16 \div 4 \times 12 + 14 - 7 = 41$$

Options :

1. ✔ 16 and 12, + and -

2. ✖ 7 and 16, - and ×

3. ✖ 14 and 7, × and ÷

4. ✖ 12 and 7, + and -

Question Number : 34 Question Id : 5861802048 Question Type : MCQ Option Shuffling : Yes

Correct Marks : 1 Wrong Marks : 0.25

संख्याओं व चिन्हों के निम्न में से किस युग्म में, उनकी स्थितियां परस्पर बदले जाने पर दिया गया गणितीय समीकरण सही हल हो जाएगा?

$$16 \div 4 \times 12 + 14 - 7 = 41$$

Options :

1. ✔ 16 और 12, + और -

2. ✖ 7 और 16, - और ✖

3. ✖ 14 और 7, ✖ और ÷

4. ✖ 12 और 7, + और -

Question Number : 35 Question Id : 5861802049 Question Type : MCQ Option Shuffling : Yes

Correct Marks : 1 Wrong Marks : 0.25

Some teams take parts in a cricket tournament. Each one has to play every other one. If there are 91 games played. How many teams are there?

Options :

1. ✖ 11

2. ✖ 12

3. ✖ 13

4. ✔ 14

Question Number : 35 Question Id : 5861802049 Question Type : MCQ Option Shuffling : Yes

Correct Marks : 1 Wrong Marks : 0.25

कुछ टीमों एक क्रिकेट टूर्नामेंट में हिस्सा लेती हैं। सभी टीमों को एक दूसरे के साथ खेलना है। अगर कुल 91 खेल खेले जाते हैं। कुल कितनी टीमों खेल रही हैं?

Options :

1. ✖ 11

2. ✖ 12

3. ✖ 13

4. ✔ 14

Question Number : 36 Question Id : 5861802050 Question Type : MCQ Option Shuffling : Yes

Correct Marks : 1 Wrong Marks : 0.25

Four words have been given out of which three are alike in some manner, while the fourth one is different. Choose out the odd one.

Options :

1. ✖ Kidney

2. ✖ Liver

3. ✖ Lungs

4. ✔ Toe

Question Number : 36 Question Id : 5861802050 Question Type : MCQ Option Shuffling : Yes

Correct Marks : 1 Wrong Marks : 0.25

चार शब्द दिए गए हैं जिनमें से तीन किसी प्रकार समान हैं, जबकि चौथा भिन्न है। असंगत को चुनें।

Options :

1. ✖ गुर्दा

2. ✖ लिवर

3. ✖ फेफड़े

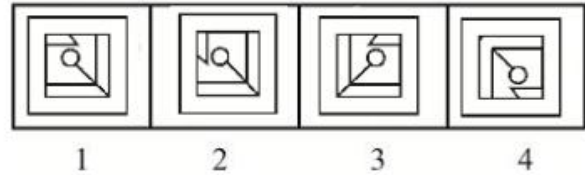
4. ✓ पाँव का अंगूठा

Question Number : 37 Question Id : 5861802051 Question Type : MCQ Option Shuffling : Yes

Correct Marks : 1 Wrong Marks : 0.25

In problem, out of four figures marked 1, 2, 3 and 4, three are similar in a certain manner. However one figure is not like the other three. Choose the figure which is different from the rest.

Answer Fig.



Options :

1. ✖ 1

2. ✖ 2

3. ✖ 3

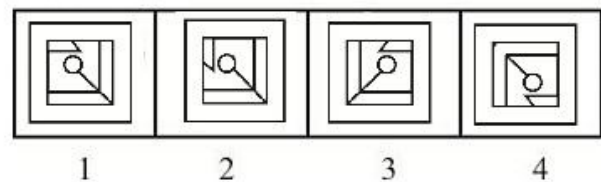
4. ✓ 4

Question Number : 37 Question Id : 5861802051 Question Type : MCQ Option Shuffling : Yes

Correct Marks : 1 Wrong Marks : 0.25

प्रश्न में, 1, 2, 3 और 4 अंकित चार चित्रों में से तीन किसी प्रकार समान हैं। हालांकि एक चित्र, अन्य तीन के समान नहीं है। वह चित्र चुनें जो शेष से भिन्न है।

उत्तर आकृति



Options :

1. ✖ 1

2. ✖ 2

3. ✖ 3

4. ✔ 4

Question Number : 38 Question Id : 5861802052 Question Type : MCQ Option Shuffling : Yes

Correct Marks : 1 Wrong Marks : 0.25

Select the option that will correctly replace the question mark (?) in the series.

15, 12, 24, 21, ?

Options :

1. ✖ 25

2. ✔ 42

3. ✖ 33

4. ✖ 43

Question Number : 38 Question Id : 5861802052 Question Type : MCQ Option Shuffling : Yes

Correct Marks : 1 Wrong Marks : 0.25

वह विकल्प चुनें जो श्रृंखला में प्रश्न चिन्ह (?) को सही प्रतिस्थापित करेगा।

15, 12, 24, 21, ?

Options :

1. ✖ 25

2. ✔ 42

3. ✖ 33

4. ✖ 43

Question Number : 39 Question Id : 5861802053 Question Type : MCQ Option Shuffling : Yes

Correct Marks : 1 Wrong Marks : 0.25

Select the option that will correctly replace the question mark (?) in the series.

30, 31, 40, 65, ?

Options :

1. ✖ 124

2. ✔ 114

3. ✖ 95

4. ✖ 105

Question Number : 39 Question Id : 5861802053 Question Type : MCQ Option Shuffling : Yes

Correct Marks : 1 Wrong Marks : 0.25

वह विकल्प चुनें जो श्रृंखला में प्रश्न चिन्ह (?) को सही प्रतिस्थापित करेगा।

30, 31, 40, 65, ?

Options :

1. ✖ 124

2. ✔ 114

3. ✖ 95

4. ✖ 105

Question Number : 40 Question Id : 5861802054 Question Type : MCQ Option Shuffling : Yes

Correct Marks : 1 Wrong Marks : 0.25

One term in the number series is wrong. Find out the wrong term.

0, 8, 12, 20, 24, 30, 36

Options :

1. ✖ 0

2. ✖ 12

3. ✖ 24

4. ✔ 30

Question Number : 40 Question Id : 5861802054 Question Type : MCQ Option Shuffling : Yes

Correct Marks : 1 Wrong Marks : 0.25

दी गई संख्या श्रृंखला में एक पद गलत है। गलत पद का पता लगाएं।

0, 8, 12, 20, 24, 30, 36

Options :

1. ✖ 0

2. ✖ 12

3. ✖ 24

4. ✔ 30

General Awareness1

Group Number :	3
Group Id :	58618094
Group Maximum Duration :	0
Group Minimum Duration :	0
Show Attended Group? :	No
Edit Attended Group? :	No
Break time:	0
Group Marks:	20
Is this Group for Examiner?:	No
Revisit allowed for group Instructions? :	Yes
Maximum Instruction Time:	0
Minimum Instruction Time:	0

General Awareness1

Section Id :	58618098
Section Number :	1
Section type :	Online
Mandatory or Optional:	Mandatory
Number of Questions:	20
Number of Questions to be attempted:	20
Section Marks:	20

Sub-Section Number:	1
Sub-Section Id:	586180133
Question Shuffling Allowed :	Yes

Question Number : 41 Question Id : 5861802055 Question Type : MCQ Option Shuffling : Yes
Correct Marks : 1 Wrong Marks : 0.25

The branch of Science dealing with study of earth quakes is called?

Options :

- 1. ✖ Auxanology
- 2. ✖ Tocology
- 3. ✔ Seismology
- 4. ✖ Aurology

Question Number : 41 Question Id : 5861802055 Question Type : MCQ Option Shuffling : Yes
Correct Marks : 1 Wrong Marks : 0.25

भूकंपों का अध्ययन करने वाली विज्ञान की शाखा को किस नाम से जाना जाता है?

Options :

1. ✖ ऑक्सनोलोजी
2. ✖ टोकोलोजी
3. ✔ सीस्मोलोजी
4. ✖ ऑरोलोजी

Question Number : 42 Question Id : 5861802056 Question Type : MCQ Option Shuffling : Yes
Correct Marks : 1 Wrong Marks : 0.25

What is the name of chemical factory in which the pathetic Bhopal Chemical Tragedy which happened in 1984 killing lakhs of people?

Options :

1. ✖ Union Chemicals and Fertilizers
2. ✖ Indian Carbide Factory
3. ✖ New India Chemicals
4. ✔ Union Carbide Factory

Question Number : 42 Question Id : 5861802056 Question Type : MCQ Option Shuffling : Yes
Correct Marks : 1 Wrong Marks : 0.25

1984 में हुई दयनीय भोपाल रासायनिक त्रासदी जिसने लाखों लोगों की जान ले ली थी, किस रासायनिक कारखाने में हुई थी?

Options :

1. ✖ यूनियन केमिकल एंड फर्टिलाइजर्स
2. ✖ इंडियन कार्बाइड फैक्ट्री
3. ✖ न्यू इंडिया केमिकल्स
4. ✔ यूनियन कार्बाइड फैक्टरी

Question Number : 43 Question Id : 5861802057 Question Type : MCQ Option Shuffling : Yes

Correct Marks : 1 Wrong Marks : 0.25

Which one of the following acts as nitrogen fixing bacteria?

Options :

1. ✖ Escherichia Coli
2. ✖ Cutibacterium acnes
3. ✔ Azotobacter
4. ✖ Helicobacter pylori

Question Number : 43 Question Id : 5861802057 Question Type : MCQ Option Shuffling : Yes

Correct Marks : 1 Wrong Marks : 0.25

निम्नलिखित में से कौन सा नाइट्रोजन स्थिरिकारक जीवाणु के रूप में कार्य करता है?

Options :

1. ✖ इस्चरीचिया कोलाई
2. ✖ क्युटिबैक्टीरियम एक्नी
3. ✔ एजोटोबैक्टर
4. ✖ हेलिकोबैक्टर पाइरोली

Question Number : 44 Question Id : 5861802058 Question Type : MCQ Option Shuffling : Yes

Correct Marks : 1 Wrong Marks : 0.25

The degree of salinity of the dead sea is approximately:

Options :

1. ✖ 32 parts per thousand
2. ✔ 332 parts per thousand
3. ✖ 132 parts per thousand
4. ✖ 664 parts per thousand

Question Number : 44 Question Id : 5861802058 Question Type : MCQ Option Shuffling : Yes

Correct Marks : 1 Wrong Marks : 0.25

मृत सागर की लवणीयता लगभग है:

Options :

1. ✖ 32 भाग प्रति हजार
2. ✔ 332 भाग प्रति हजार
3. ✖ 132 भाग प्रति हजार
4. ✖ 664 भाग प्रति हजार

Question Number : 45 Question Id : 5861802059 Question Type : MCQ Option Shuffling : Yes
Correct Marks : 1 Wrong Marks : 0.25

Who has won the best film editing award at the 91st academy (Oscar) awards ceremony?

Options :

1. ✔ John Ottman
2. ✖ Ludwig Goransson
3. ✖ Guy Nattiv
4. ✖ John Warthrust

Question Number : 45 Question Id : 5861802059 Question Type : MCQ Option Shuffling : Yes
Correct Marks : 1 Wrong Marks : 0.25

91वें अकादमी (ऑस्कर) पुरस्कार समारोह में सर्वश्रेष्ठ फिल्म संपादन पुरस्कार किसने जीता?

Options :

1. ✔ जॉन ओटमैन
2. ✖ लुडविग गोरानसन
3. ✖ गाई नैटिव
4. ✖ जॉन वॉरट्रस्ट

Question Number : 46 Question Id : 5861802060 Question Type : MCQ Option Shuffling : Yes
Correct Marks : 1 Wrong Marks : 0.25

What is name of mobile app launched by President of India recently on the occasion of 54th Valour Day of CRPF?

Options :

1. ✖ Valour App
2. ✖ Shaurya App
3. ✔ Veer Parivar App
4. ✖ Veer Jawan App

Question Number : 46 Question Id : 5861802060 Question Type : MCQ Option Shuffling : Yes
Correct Marks : 1 Wrong Marks : 0.25

हाल ही में CRPF के 54वें शौर्य दिवस के अवसर पर भारत के राष्ट्रपति द्वारा शुरू की गई मोबाइल ऐप का नाम क्या है?

Options :

1. ✖ वेलोर ऐप
2. ✖ शौर्य ऐप
3. ✔ वीर परिवार ऐप
4. ✖ वीर जवान ऐप

Question Number : 47 Question Id : 5861802061 Question Type : MCQ Option Shuffling : Yes
Correct Marks : 1 Wrong Marks : 0.25

Who is the present chairperson of Central Board of Film Certification of India?

Options :

1. ✔ Praseon Joshi
2. ✖ Leela Samson
3. ✖ Sharmila Tagore
4. ✖ Anupam Kher

Question Number : 47 Question Id : 5861802061 Question Type : MCQ Option Shuffling : Yes
Correct Marks : 1 Wrong Marks : 0.25

भारत के केंद्रीय फिल्म प्रमाणन बोर्ड के वर्तमान अध्यक्ष कौन हैं?

Options :

1. ✔ प्रसून जोशी

2. ✖ लीला सैमसन
3. ✖ शर्मिला टैगोर
4. ✖ अनुपम खेर

Question Number : 48 Question Id : 5861802062 Question Type : MCQ Option Shuffling : Yes
Correct Marks : 1 Wrong Marks : 0.25

The government of India has announced renaming of Ross islands of Andaman after which national leader in December 2018?

Options :

1. ✖ Lal Bahadur shastri
2. ✖ Sardar Vallabhai Patel
3. ✔ Netaji Subhash Chandra Bose
4. ✖ Mahatma Gandhi

Question Number : 48 Question Id : 5861802062 Question Type : MCQ Option Shuffling : Yes
Correct Marks : 1 Wrong Marks : 0.25

भारत सरकार ने दिसंबर 2018 में अंडमान के रॉस द्वीपों का नाम बदलकर किस राष्ट्रीय नेता के नाम पर रखने की घोषणा की है?

Options :

1. ✖ लाल बहादुर शास्त्री
2. ✖ सरदार वल्लभ भाई पटेल
3. ✔ नेताजी सुभाष चंद्र बोस
4. ✖ महात्मा गांधी

Question Number : 49 Question Id : 5861802063 Question Type : MCQ Option Shuffling : Yes
Correct Marks : 1 Wrong Marks : 0.25

Which Viceroy of India had introduced the Hindu Widow Remarriage Act?

Options :

1. ✔ Lord Dalhousie

2. ✖ Lord Irwin
3. ✖ Lord Wavell
4. ✖ Lord Rippon

Question Number : 49 Question Id : 5861802063 Question Type : MCQ Option Shuffling : Yes
Correct Marks : 1 Wrong Marks : 0.25

भारत के किस वायसराय ने हिंदू विधवा पुनर्विवाह अधिनियम पेश किया था?

Options :

1. ✔ लॉर्ड डलहौजी
2. ✖ लॉर्ड इरविन
3. ✖ लॉर्ड वेवेल
4. ✖ लॉर्ड रिपन

Question Number : 50 Question Id : 5861802064 Question Type : MCQ Option Shuffling : Yes
Correct Marks : 1 Wrong Marks : 0.25

Which Viceroy of India proposed the Vernacular Press Act?

Options :

1. ✖ Lord Canning
2. ✖ Lord Dalhousie
3. ✔ Lord Lytton
4. ✖ Lord Mountbatten

Question Number : 50 Question Id : 5861802064 Question Type : MCQ Option Shuffling : Yes
Correct Marks : 1 Wrong Marks : 0.25

भारत के किस वायसराय ने वर्नाक्यूलर प्रेस एक्ट का प्रस्ताव रखा?

Options :

1. ✖ लॉर्ड कैनिंग
2. ✖ लॉर्ड डलहौजी
3. ✔ लॉर्ड लिटन

4. ✖ लॉर्ड माउंटबेटन

Question Number : 51 Question Id : 5861802065 Question Type : MCQ Option Shuffling : Yes
Correct Marks : 1 Wrong Marks : 0.25

Which Sikh Guru is considered as the popularizer or standardizer of the Gurmukhi script?

Options :

1. ✖ Guru Hargobind
2. ✔ Guru Angad
3. ✖ Guru Harkishan
4. ✖ Guru Amardas

Question Number : 51 Question Id : 5861802065 Question Type : MCQ Option Shuffling : Yes
Correct Marks : 1 Wrong Marks : 0.25

गुरुमुखी लिपि को लोकप्रिय बनाने या इसका प्रवर्तन करने का श्रेय कौन से सिख गुरु को जाता है?

Options :

1. ✖ गुरु हरगोबिंद
2. ✔ गुरु अंगद
3. ✖ गुरु हरकिशन
4. ✖ गुरु अमरदास

Question Number : 52 Question Id : 5861802066 Question Type : MCQ Option Shuffling : Yes
Correct Marks : 1 Wrong Marks : 0.25

Under whose leadership was the Indian National Trade Union Congress formed in 1947?

Options :

1. ✔ Sardar Vallabhbhai Patel
2. ✖ Lal Bahadur Shastri
3. ✖ Khan Abdul Ghaffar Khan
4. ✖ B.P.Wadia

Question Number : 52 Question Id : 5861802066 Question Type : MCQ Option Shuffling : Yes
Correct Marks : 1 Wrong Marks : 0.25

1947 में भारतीय राष्ट्रीय ट्रेड यूनियन कांग्रेस किसके नेतृत्व में बनी?

Options :

1. ✓ सरदार वल्लभभाई पटेल
2. ✖ लाल बहादुर शास्त्री
3. ✖ खान अब्दुल गफ्फार खान
4. ✖ बी. पी. वाडिया

Question Number : 53 Question Id : 5861802067 Question Type : MCQ Option Shuffling : Yes
Correct Marks : 1 Wrong Marks : 0.25

Which article of Indian constitution has provision for protection of life and personal liberty?

Options :

1. ✓ Article 21
2. ✖ Article 31
3. ✖ Article 41
4. ✖ Article 51

Question Number : 53 Question Id : 5861802067 Question Type : MCQ Option Shuffling : Yes
Correct Marks : 1 Wrong Marks : 0.25

भारतीय संविधान के किस अनुच्छेद में जीवन की सुरक्षा और व्यक्तिगत स्वतंत्रता का प्रावधान दिया गया है?

Options :

1. ✓ अनुच्छेद 21
2. ✖ अनुच्छेद 31
3. ✖ अनुच्छेद 41
4. ✖ अनुच्छेद 51

Question Number : 54 Question Id : 5861802068 Question Type : MCQ Option Shuffling : Yes

Correct Marks : 1 Wrong Marks : 0.25

निम्नलिखित में से किस राज्य/केंद्र शासित प्रदेश की विधानसभा में अनुमोदित सदस्यों की संख्या सबसे कम है?

Options :

1. ✖ नागालैंड
2. ✖ मेघालय
3. ✔ पुडुचेरी
4. ✖ दिल्ली

Question Number : 54 Question Id : 5861802068 Question Type : MCQ Option Shuffling : Yes

Correct Marks : 1 Wrong Marks : 0.25

Which state/Union territory among the following has the least sanctioned strength of the Vidhan Sabha?

Options :

1. ✖ Nagaland
2. ✖ Meghalaya
3. ✔ Puducherry
4. ✖ Delhi

Question Number : 55 Question Id : 5861802069 Question Type : MCQ Option Shuffling : Yes

Correct Marks : 1 Wrong Marks : 0.25

LM Singhvi committee appointed by Rajiv Gandhi government is related to?

Options :

1. ✖ Centre -State relations
2. ✔ Panchayati Raj institutions
3. ✖ Indian Industrial policy
4. ✖ Indian Foreign trade policy

Question Number : 55 Question Id : 5861802069 Question Type : MCQ Option Shuffling : Yes

Correct Marks : 1 Wrong Marks : 0.25

राजीव गांधी सरकार द्वारा नियुक्त एलएम सिंघवी समिति किससे संबंधित है?

Options :

1. ✖ केन्द्र-राज्य संबंध
2. ✔ पंचायती राज संस्थाएं
3. ✖ भारतीय औद्योगिक नीति
4. ✖ भारतीय विदेश व्यापार नीति

Question Number : 56 Question Id : 5861802070 Question Type : MCQ Option Shuffling : Yes
Correct Marks : 1 Wrong Marks : 0.25

Article 23 and 24 of the Indian constitution contains details of?

Options :

1. ✔ Right against exploitation
2. ✖ Right to constitutional remedies
3. ✖ Right to equality
4. ✖ Legislative procedure

Question Number : 56 Question Id : 5861802070 Question Type : MCQ Option Shuffling : Yes
Correct Marks : 1 Wrong Marks : 0.25

भारतीय संविधान के अनुच्छेद 23 और 24 में किसका विवरण दिया गया है?

Options :

1. ✔ शोषण के खिलाफ अधिकार
2. ✖ संवैधानिक उपचार का अधिकार
3. ✖ समानता का अधिकार
4. ✖ विधायी प्रक्रिया

Question Number : 57 Question Id : 5861802071 Question Type : MCQ Option Shuffling : Yes
Correct Marks : 1 Wrong Marks : 0.25

The part IV-A of the Indian constitution contains?

Options :

1. ✖ The Union and the executive
2. ✖ Fundamental rights
3. ✔ Fundamental duties
4. ✖ The states

Question Number : 57 Question Id : 5861802071 Question Type : MCQ Option Shuffling : Yes
Correct Marks : 1 Wrong Marks : 0.25

भारतीय संविधान के भाग IV-A में क्या शामिल है?

Options :

1. ✖ संघ और कार्यपालिका
2. ✖ मौलिक अधिकार
3. ✔ मूल कर्तव्य
4. ✖ राज्य

Question Number : 58 Question Id : 5861802072 Question Type : MCQ Option Shuffling : Yes
Correct Marks : 1 Wrong Marks : 0.25

Which article of the Indian constitution provides right to minorities to establish and administer educational institutions?

Options :

1. ✔ Article 30
2. ✖ Article 33
3. ✖ Article 35
4. ✖ Article 39

Question Number : 58 Question Id : 5861802072 Question Type : MCQ Option Shuffling : Yes
Correct Marks : 1 Wrong Marks : 0.25

भारतीय संविधान का कौन सा अनुच्छेद अल्पसंख्यकों को शैक्षिक संस्थानों की स्थापना और प्रशासन का अधिकार प्रदान करता है?

Options :

1. ✓ अनुच्छेद 30
2. ✗ अनुच्छेद 33
3. ✗ अनुच्छेद 35
4. ✗ अनुच्छेद 39

Question Number : 59 Question Id : 5861802073 Question Type : MCQ Option Shuffling : Yes
Correct Marks : 1 Wrong Marks : 0.25

The term 'Half Nelson' is associated with which one of the following sport?

Options :

1. ✗ Polo
2. ✗ Kho-Kho
3. ✗ Horse racing
4. ✓ Wrestling

Question Number : 59 Question Id : 5861802073 Question Type : MCQ Option Shuffling : Yes
Correct Marks : 1 Wrong Marks : 0.25

'हाफ नेल्सन' शब्द निम्नलिखित में से किस खेल से संबंधित है?

Options :

1. ✗ पोलो
2. ✗ खो-खो
3. ✗ घोड़ों की दौड़
4. ✓ कुश्ती

Question Number : 60 Question Id : 5861802074 Question Type : MCQ Option Shuffling : Yes
Correct Marks : 1 Wrong Marks : 0.25

With which game the Uber Cup is associated?

Options :

1. ✗ Wrestling
2. ✗ Shooting

3. ✓ Badminton

4. ✖ Tennis

Question Number : 60 Question Id : 5861802074 Question Type : MCQ Option Shuffling : Yes
Correct Marks : 1 Wrong Marks : 0.25

उबेर कप किस खेल से संबंधित है?

Options :

1. ✖ कुश्ती

2. ✖ शूटिंग

3. ✓ बैडमिंटन

4. ✖ टेनिस

General Awareness2

Group Number :	4
Group Id :	58618095
Group Maximum Duration :	0
Group Minimum Duration :	0
Show Attended Group? :	No
Edit Attended Group? :	No
Break time:	0
Group Marks:	20
Is this Group for Examiner?:	No
Revisit allowed for group Instructions? :	Yes
Maximum Instruction Time:	0
Minimum Instruction Time:	0

General Awareness2

Section Id :	58618099
Section Number :	1
Section type :	Online
Mandatory or Optional:	Mandatory
Number of Questions:	20
Number of Questions to be attempted:	20
Section Marks:	20

Sub-Section Number:	1
Sub-Section Id:	586180134

Question Shuffling Allowed :

Yes

Question Number : 61 Question Id : 5861802075 Question Type : MCQ Option Shuffling : Yes

Correct Marks : 1 Wrong Marks : 0.25

Which bowler has taken highest number of wickets in the ICC Cricket World Cup (ODI) till 2015 World Cup?

Options :

1. ✖ Courtney Walsh
2. ✔ Glenn McGrath
3. ✖ Muttiah Muralitharan
4. ✖ Shane Warne

Question Number : 61 Question Id : 5861802075 Question Type : MCQ Option Shuffling : Yes

Correct Marks : 1 Wrong Marks : 0.25

ICC क्रिकेट विश्व कप (ODI) के 2015 विश्व कप तक किस गेंदबाज ने सर्वाधिक विकेट लिए?

Options :

1. ✖ कर्टनी वॉल्श
2. ✔ ग्लेन मैकग्राथ
3. ✖ मुथैया मुरलीधरन
4. ✖ शेन वार्न

Question Number : 62 Question Id : 5861802076 Question Type : MCQ Option Shuffling : Yes

Correct Marks : 1 Wrong Marks : 0.25

The traditional food 'Madra' is popular in which state of India?

Options :

1. ✔ Himachal Pradesh
2. ✖ Goa
3. ✖ Karnataka
4. ✖ Manipur

Question Number : 62 Question Id : 5861802076 Question Type : MCQ Option Shuffling : Yes

Correct Marks : 1 Wrong Marks : 0.25

पारंपरिक भोजन 'मद्रा' भारत के किस राज्य में लोकप्रिय है?

Options :

1. ✓ हिमाचल प्रदेश
2. ✗ गोवा
3. ✗ कर्नाटक
4. ✗ मणिपुर

Question Number : 63 Question Id : 5861802077 Question Type : MCQ Option Shuffling : Yes
Correct Marks : 1 Wrong Marks : 0.25

Which famous theatre personality is known as 'communications guru of India'?

Options :

1. ✗ Feroz Khan
2. ✓ Alyque Padamsee
3. ✗ Girish Karnad
4. ✗ Mahesh Dattani

Question Number : 63 Question Id : 5861802077 Question Type : MCQ Option Shuffling : Yes
Correct Marks : 1 Wrong Marks : 0.25

किस प्रसिद्ध थिएटर व्यक्तित्व को 'भारत के संचार गुरु' के नाम से भी जाना जाता है?

Options :

1. ✗ फ़िरोज़ खान
2. ✓ एलिक पदमसी
3. ✗ गिरीश कर्नाड
4. ✗ महेश दत्ताणी

Question Number : 64 Question Id : 5861802078 Question Type : MCQ Option Shuffling : Yes
Correct Marks : 1 Wrong Marks : 0.25

The traditional food 'Sadya' is popular in which Indian state?

Options :

1. ✖ Manipur
2. ✖ Karnataka
3. ✔ Kerala
4. ✖ Telangana

Question Number : 64 Question Id : 5861802078 Question Type : MCQ Option Shuffling : Yes
Correct Marks : 1 Wrong Marks : 0.25

किस भारतीय राज्य में पारंपरिक भोजन 'सद्य' लोकप्रिय है?

Options :

1. ✖ मणिपुर
2. ✖ कर्नाटक
3. ✔ केरल
4. ✖ तेलंगाना

Question Number : 65 Question Id : 5861802079 Question Type : MCQ Option Shuffling : Yes
Correct Marks : 1 Wrong Marks : 0.25

The wrong country-capital match among the following is?

Options :

1. ✖ Barbados - Bridgetown
2. ✔ Bahrain - Helsinki
3. ✖ Mongolia - Ulaanbaatar
4. ✖ Angola - Luanda

Question Number : 65 Question Id : 5861802079 Question Type : MCQ Option Shuffling : Yes
Correct Marks : 1 Wrong Marks : 0.25

निम्नलिखित में से कौन सा "देश-राजधानी" मेल गलत है?

Options :

1. ✖ बारबाडोस - ब्रिजटाउन
2. ✔ बहरीन - हेलसिंकी

3. ✖ मंगोलिया - उलानबाटार

4. ✖ अंगोला - लुआंडा

Question Number : 66 Question Id : 5861802080 Question Type : MCQ Option Shuffling : Yes
Correct Marks : 1 Wrong Marks : 0.25

The beautiful 'Tso-Kar lake' is also known as?

Options :

1. ✖ Snow Lake

2. ✖ Pink Lake

3. ✔ White Lake

4. ✖ Rose Lake

Question Number : 66 Question Id : 5861802080 Question Type : MCQ Option Shuffling : Yes
Correct Marks : 1 Wrong Marks : 0.25

सुंदर 'त्सो-कार झील' को इस नाम से भी जाना जाता है?

Options :

1. ✖ स्नो लेक

2. ✖ पिंक लेक

3. ✔ व्हाइट लेक

4. ✖ रोज लेक

Question Number : 67 Question Id : 5861802081 Question Type : MCQ Option Shuffling : Yes
Correct Marks : 1 Wrong Marks : 0.25

In which Indian state, the Kadana Hydroelectric project is located?

Options :

1. ✖ Kashmir

2. ✖ Orissa

3. ✖ West Bengal

4. ✔ Gujarat

Question Number : 67 Question Id : 5861802081 Question Type : MCQ Option Shuffling : Yes
Correct Marks : 1 Wrong Marks : 0.25

कडाना पनबिजली परियोजना, भारत के किस राज्य में स्थित है?

Options :

1. ✖ कश्मीर
2. ✖ उड़ीसा
3. ✖ पश्चिम बंगाल
4. ✔ गुजरात

Question Number : 68 Question Id : 5861802082 Question Type : MCQ Option Shuffling : Yes
Correct Marks : 1 Wrong Marks : 0.25

The Bokaro steel plant was set up in India with the assistance of?

Options :

1. ✖ Italy
2. ✖ France
3. ✔ USSR
4. ✖ Germany

Question Number : 68 Question Id : 5861802082 Question Type : MCQ Option Shuffling : Yes
Correct Marks : 1 Wrong Marks : 0.25

भारत में बोकारो स्टील प्लांट किसकी सहायता से स्थापित किया गया था?

Options :

1. ✖ इटली
2. ✖ फ्रांस
3. ✔ यूएसएसआर
4. ✖ जर्मनी

Question Number : 69 Question Id : 5861802083 Question Type : MCQ Option Shuffling : Yes
Correct Marks : 1 Wrong Marks : 0.25

What was the subject of Meera Seth committee appointed by Government of India?

Options :

1. ✖ Public welfare
2. ✔ Handloom Sector
3. ✖ Loan system
4. ✖ Pension for farmers

Question Number : 69 Question Id : 5861802083 Question Type : MCQ Option Shuffling : Yes
Correct Marks : 1 Wrong Marks : 0.25

भारत सरकार द्वारा नियुक्त मीरा सेठ समिति किस विषय से संबंधित थी?

Options :

1. ✖ सार्वजनिक कल्याण
2. ✔ हथकरघा क्षेत्र
3. ✖ ऋण प्रणाली
4. ✖ किसानों के लिए पेंशन

Question Number : 70 Question Id : 5861802084 Question Type : MCQ Option Shuffling : Yes
Correct Marks : 1 Wrong Marks : 0.25

Which committee was constituted by the Reserve Bank of India to make recommendations on Capital Account Convertibility (CAC)?

Options :

1. ✖ Mahajan committe
2. ✖ Satyam Committe
3. ✔ Tarapore committee
4. ✖ Nayak committee

Question Number : 70 Question Id : 5861802084 Question Type : MCQ Option Shuffling : Yes
Correct Marks : 1 Wrong Marks : 0.25

भारतीय रिजर्व बैंक द्वारा कैपिटल अकाउंट कन्वर्जेन्सिटी (CAC) पर सिफारिशें करने के लिए कौन सी समिति गठित की गई थी?

Options :

1. ✖ महाजन समिति
2. ✖ सत्यम समिति
3. ✔ तारापोर समिति
4. ✖ नायक समिति

Question Number : 71 Question Id : 5861802085 Question Type : MCQ Option Shuffling : Yes
Correct Marks : 1 Wrong Marks : 0.25

Adding Chromium oxide to molten glass gives which colour to it?

Options :

1. ✖ Yellow - Amber
2. ✔ Emerald Green
3. ✖ Red
4. ✖ Blue - Violet

Question Number : 71 Question Id : 5861802085 Question Type : MCQ Option Shuffling : Yes
Correct Marks : 1 Wrong Marks : 0.25

पिघले हुए ग्लास में क्रोमियम ऑक्साइड मिलाने पर कैसा रंग उत्पन्न होता है?

Options :

1. ✖ पीला-अम्बर
2. ✔ पन्ने जैसा हरा
3. ✖ लाल
4. ✖ नीला - बैंगनी

Question Number : 72 Question Id : 5861802086 Question Type : MCQ Option Shuffling : Yes
Correct Marks : 1 Wrong Marks : 0.25

‘CETANE’ number is used to express the quality of which one of the following fuels?

Options :

1. ✖ Coal
2. ✖ Petrol
3. ✔ Diesel
4. ✖ Wood

Question Number : 72 Question Id : 5861802086 Question Type : MCQ Option Shuffling : Yes
Correct Marks : 1 Wrong Marks : 0.25

CETANE’ संख्या का उपयोग निम्न में से किस ईंधन की गुणवत्ता को व्यक्त करने के लिए किया जाता है?

Options :

1. ✖ कोयला
2. ✖ पेट्रोल
3. ✔ डीज़ल
4. ✖ लकड़ी

Question Number : 73 Question Id : 5861802087 Question Type : MCQ Option Shuffling : Yes
Correct Marks : 1 Wrong Marks : 0.25

The instrument which measures the changes in volume of a substance is called?

Options :

1. ✔ Dilatometer
2. ✖ Nephelometer
3. ✖ Hypsometer
4. ✖ Cathetometer

Question Number : 73 Question Id : 5861802087 Question Type : MCQ Option Shuffling : Yes
Correct Marks : 1 Wrong Marks : 0.25

वह उपकरण जो किसी पदार्थ के आयतन में परिवर्तन को मापता है, कहलाता है?

Options :

1. ✓ डायलेटोमीटर
2. ✖ नेफलोमीटर
3. ✖ हिप्सोमीटर
4. ✖ कैथेटोमीटर

Question Number : 74 Question Id : 5861802088 Question Type : MCQ Option Shuffling : Yes
Correct Marks : 1 Wrong Marks : 0.25

The ore 'Cinnabar' contains which one of the following metals?

Options :

1. ✖ Sodium
2. ✓ Mercury
3. ✖ Aluminium
4. ✖ Zinc

Question Number : 74 Question Id : 5861802088 Question Type : MCQ Option Shuffling : Yes
Correct Marks : 1 Wrong Marks : 0.25

अयस्क 'सिनेबार' में निम्नलिखित में से कौन सी धातु पाई जाती है?

Options :

1. ✖ सोडियम
2. ✓ पारा
3. ✖ एल्युमीनियम
4. ✖ जस्ता

Question Number : 75 Question Id : 5861802089 Question Type : MCQ Option Shuffling : Yes
Correct Marks : 1 Wrong Marks : 0.25

The Eco-friendly rocket 'ANGARA' was developed by?

Options :

1. ✖ USA
2. ✖ India
3. ✔ Russia
4. ✖ Germany

Question Number : 75 Question Id : 5861802089 Question Type : MCQ Option Shuffling : Yes
Correct Marks : 1 Wrong Marks : 0.25

इको-फ्रेंडली रॉकेट 'ANGARA' किसके द्वारा विकसित किया गया था?

Options :

1. ✖ यूएसए
2. ✖ भारत
3. ✔ रूस
4. ✖ जर्मनी

Question Number : 76 Question Id : 5861802090 Question Type : MCQ Option Shuffling : Yes
Correct Marks : 1 Wrong Marks : 0.25

The first ever World Ocean Science Congress was held at?

Options :

1. ✔ Kochi
2. ✖ Chennai
3. ✖ Goa
4. ✖ Mumbai

Question Number : 76 Question Id : 5861802090 Question Type : MCQ Option Shuffling : Yes
Correct Marks : 1 Wrong Marks : 0.25

पहली विश्व महासागर विज्ञान कांग्रेस कहाँ आयोजित की गई थी?

Options :

1. ✔ कोच्चि
2. ✖ चेन्नई

3. ✖ गोवा

4. ✖ मुंबई

Question Number : 77 Question Id : 5861802091 Question Type : MCQ Option Shuffling : Yes
Correct Marks : 1 Wrong Marks : 0.25

APSARA, CIRUS and ZERLINA are the name of?

Options :

1. ✖ Warships

2. ✖ Satellites

3. ✖ Surface to surface missiles

4. ✔ Nuclear Reactors

Question Number : 77 Question Id : 5861802091 Question Type : MCQ Option Shuffling : Yes
Correct Marks : 1 Wrong Marks : 0.25

अप्सरा, सायरस और झेरलिना किसके नाम हैं?

Options :

1. ✖ युद्धपोत

2. ✖ उपग्रह

3. ✖ सतह से सतह पर मार करने वाली मिसाइलें

4. ✔ नाभिकीय रिएक्टर

Question Number : 78 Question Id : 5861802092 Question Type : MCQ Option Shuffling : Yes
Correct Marks : 1 Wrong Marks : 0.25

Where is the headquarters of the OPEC (Organization of Petroleum Exporting Countries) located?

Options :

1. ✔ Vienna, Austria

2. ✖ Algiers, Algeria

3. ✖ Jakarta, Indonesia

4. ✖ Caracas, Venezuela

Question Number : 78 Question Id : 5861802092 Question Type : MCQ Option Shuffling : Yes
Correct Marks : 1 Wrong Marks : 0.25

ओपेक (पेट्रोलियम निर्यातक देशों का संगठन) का मुख्यालय कहां स्थित है?

Options :

1. ✓ वियना, ऑस्ट्रिया
2. ✗ अल्जीयर्स, अल्जीरिया
3. ✗ जकार्ता, इंडोनेशिया
4. ✗ कराकस, वेनेजुएला

Question Number : 79 Question Id : 5861802093 Question Type : MCQ Option Shuffling : Yes
Correct Marks : 1 Wrong Marks : 0.25

In which year Telecom Regulatory Authority of India was established?

Options :

1. ✗ 2000
2. ✗ 1990
3. ✓ 1997
4. ✗ 1989

Question Number : 79 Question Id : 5861802093 Question Type : MCQ Option Shuffling : Yes
Correct Marks : 1 Wrong Marks : 0.25

भारतीय दूरसंचार नियामक प्राधिकरण की स्थापना किस वर्ष की गई थी?

Options :

1. ✗ 2000
2. ✗ 1990
3. ✓ 1997
4. ✗ 1989

Question Number : 80 Question Id : 5861802094 Question Type : MCQ Option Shuffling : Yes
Correct Marks : 1 Wrong Marks : 0.25

Who is the present Vice-Chairperson of NITI Aayog?

Options :

- 1. ✓ Rajiv Kumar
- 2. ✗ Ramesh Chand
- 3. ✗ V.K.Paul
- 4. ✗ Bibek Debroy

Question Number : 80 Question Id : 5861802094 Question Type : MCQ Option Shuffling : Yes
Correct Marks : 1 Wrong Marks : 0.25

नीति आयोग के वर्तमान उपाध्यक्ष कौन हैं?

Options :

- 1. ✓ राजीव कुमार
- 2. ✗ रमेश चंद
- 3. ✗ वी.के पॉल
- 4. ✗ बिबेक देबरॉय



Group Number :	5
Group Id :	58618096
Group Maximum Duration :	0
Group Minimum Duration :	0
Show Attended Group? :	No
Edit Attended Group? :	No
Break time:	0
Group Marks:	20
Is this Group for Examiner?:	No
Revisit allowed for group Instructions? :	Yes
Maximum Instruction Time:	0
Minimum Instruction Time:	0

Arithmetic Ability1

Section Id : 586180100
Section Number : 1

Section type :	Online
Mandatory or Optional:	Mandatory
Number of Questions:	20
Number of Questions to be attempted:	20
Section Marks:	20

Sub-Section Number:	1
Sub-Section Id:	586180135
Question Shuffling Allowed :	Yes

Question Number : 81 Question Id : 5861802095 Question Type : MCQ Option Shuffling : Yes
Correct Marks : 1 Wrong Marks : 0.25

If $\frac{2x}{1+\frac{1}{1+\frac{x}{1-x}}} = 1$, then the value of x is:

Options :

1. ✖ $\frac{1}{3}$

2. ✖ $\frac{3}{5}$

3. ✔ $\frac{2}{3}$

4. ✖ 1

Question Number : 81 Question Id : 5861802095 Question Type : MCQ Option Shuffling : Yes
Correct Marks : 1 Wrong Marks : 0.25

यदि $\frac{2x}{1+\frac{1}{1+\frac{x}{1-x}}} = 1$, तो x का मान होगा:

Options :

1. ✖ $\frac{1}{3}$

2. ✖ $\frac{3}{5}$

3. ✔ $\frac{2}{3}$

4. ✖ 1

Question Number : 82 Question Id : 5861802096 Question Type : MCQ Option Shuffling : Yes
Correct Marks : 1 Wrong Marks : 0.25

Solve the following.

$$5 - \left[\frac{3}{4} + \left\{ 2\frac{1}{2} - \left(0.5 + \frac{1}{6} - \frac{1}{7} \right) \right\} \right] = ?$$

Options :

1. ✖ $2\frac{61}{84}$

2. ✔ $2\frac{23}{84}$

3. ✖ $2\frac{47}{84}$

4. ✖ $1\frac{19}{84}$

Question Number : 82 Question Id : 5861802096 Question Type : MCQ Option Shuffling : Yes
Correct Marks : 1 Wrong Marks : 0.25

निम्नलिखित को हल करें:

$$5 - \left[\frac{3}{4} + \left\{ 2\frac{1}{2} - \left(0.5 + \frac{1}{6} - \frac{1}{7} \right) \right\} \right] = ?$$

Options :

1. ✖ $2\frac{61}{84}$

2. ✔ $2\frac{23}{84}$

3. ✖ $2\frac{47}{84}$

4. ✖ $1\frac{19}{84}$

Question Number : 83 Question Id : 5861802097 Question Type : MCQ Option Shuffling : Yes

Correct Marks : 1 Wrong Marks : 0.25

The value of $\left(\frac{5}{7} \text{ of } 1\frac{6}{13} \right) \div \left(2\frac{5}{7} \div 3\frac{1}{4} \right)$ is:

Options :

1. ✖ $\frac{299}{180}$

2. ✖ $\frac{20}{169}$

3. ✖ 1

4. ✓ $\frac{5}{4}$

Question Number : 83 Question Id : 5861802097 Question Type : MCQ Option Shuffling : Yes

Correct Marks : 1 Wrong Marks : 0.25

$\left(\frac{5}{7} \text{ का } 1\frac{6}{13}\right) \div \left(2\frac{5}{7} \div 3\frac{1}{4}\right)$ का मान होगा:

Options :

1. ✗ $\frac{299}{180}$

2. ✗ $\frac{20}{169}$

3. ✗ 1

4. ✓ $\frac{5}{4}$

Question Number : 84 Question Id : 5861802098 Question Type : MCQ Option Shuffling : Yes

Correct Marks : 1 Wrong Marks : 0.25

If $\frac{a}{x} + \frac{y}{b} = 1$ and $\frac{b}{y} + \frac{z}{c} = 1$, then $\frac{x}{a} + \frac{c}{z}$ is equal to:

Options :

1. ✗ 0

2. ✓ 1

3. ✗ $\frac{b}{y}$

4. ✖ $\frac{y}{b}$

Question Number : 84 Question Id : 5861802098 Question Type : MCQ Option Shuffling : Yes
Correct Marks : 1 Wrong Marks : 0.25

यदि $\frac{a}{x} + \frac{y}{b} = 1$ और $\frac{b}{y} + \frac{z}{c}$ तो $\frac{x}{a} + \frac{c}{z}$ निम्न के बराबर होगा:

Options :

1. ✖ 0

2. ✔ 1

3. ✖ $\frac{b}{y}$

4. ✖ $\frac{y}{b}$

Question Number : 85 Question Id : 5861802099 Question Type : MCQ Option Shuffling : Yes
Correct Marks : 1 Wrong Marks : 0.25

The value of $\frac{3.6 \times 0.48 \times 2.50}{0.12 \times 0.09 \times 0.5}$ is:

Options :

1. ✖ 8000

2. ✖ 80000

3. ✔ 800

4. ✖ 80

Question Number : 85 Question Id : 5861802099 Question Type : MCQ Option Shuffling : Yes

Correct Marks : 1 Wrong Marks : 0.25

$$\frac{3.6 \times 0.48 \times 2.50}{0.12 \times 0.09 \times 0.5}$$

का मान होगा:

Options :

1. ✖ 8000

2. ✖ 80000

3. ✔ 800

4. ✖ 80

Question Number : 86 Question Id : 5861802100 Question Type : MCQ Option Shuffling : Yes

Correct Marks : 1 Wrong Marks : 0.25

On simplification, $3.\overline{36} - 2.\overline{05} + 1.\overline{33}$ is equal to:

Options :

1. ✔ $2.\overline{64}$

2. ✖ $2.\overline{61}$

3. ✖ 2.64

4. ✖ 2.60

Question Number : 86 Question Id : 5861802100 Question Type : MCQ Option Shuffling : Yes

Correct Marks : 1 Wrong Marks : 0.25

सरलीकरण पर, $3.\overline{36} - 2.\overline{05} + 1.\overline{33}$ निम्न के बराबर होगा:

Options :

1. ✓ $2.\overline{64}$

2. ✗ $2.\overline{61}$

3. ✗ 2.64

4. ✗ 2.60

Question Number : 87 Question Id : 5861802101 Question Type : MCQ Option Shuffling : Yes

Correct Marks : 1 Wrong Marks : 0.25

The value of $\frac{(0.06)^2 + (0.47)^2 + (0.079)^2}{(0.006)^2 + (0.047)^2 + (0.0079)^2}$ is:

Options :

1. ✗ 10

2. ✗ 0.1

3. ✗ 1000

4. ✓ 100

Question Number : 87 Question Id : 5861802101 Question Type : MCQ Option Shuffling : Yes

Correct Marks : 1 Wrong Marks : 0.25

$\frac{(0.06)^2 + (0.47)^2 + (0.079)^2}{(0.006)^2 + (0.047)^2 + (0.0079)^2}$ का मान होगा:

Options :

1. ✖ 10

2. ✖ 0.1

3. ✖ 1000

4. ✔ 100

Question Number : 88 Question Id : 5861802102 Question Type : MCQ Option Shuffling : Yes

Correct Marks : 1 Wrong Marks : 0.25

यदि 0.232323... को एक भिन्न में बदला जाता है, तो इसका परिणाम होगा:

Options :

1. ✖ $\frac{2}{9}$

2. ✖ $\frac{12}{5}$

3. ✔ $\frac{23}{99}$

4. ✖ $\frac{53}{100}$

Question Number : 88 Question Id : 5861802102 Question Type : MCQ Option Shuffling : Yes

Correct Marks : 1 Wrong Marks : 0.25

If 0.232323... is converted into a fraction, then the result will be:

Options :

1. ✖ $\frac{2}{9}$

2. ✖ $\frac{12}{5}$

3. ✔ $\frac{23}{99}$

4. ✖ $\frac{53}{100}$

Question Number : 89 Question Id : 5861802103 Question Type : MCQ Option Shuffling : Yes
Correct Marks : 1 Wrong Marks : 0.25

The sum of the first 20 terms of the series $\frac{1}{5 \times 6} + \frac{1}{6 \times 7} + \frac{1}{7 \times 8} + \dots$ is:

Options :

1. ✖ 16

2. ✖ 1.6

3. ✔ 0.16

4. ✖ 0.106

Question Number : 89 Question Id : 5861802103 Question Type : MCQ Option Shuffling : Yes
Correct Marks : 1 Wrong Marks : 0.25

$\frac{1}{5 \times 6} + \frac{1}{6 \times 7} + \frac{1}{7 \times 8} + \dots$ श्रृंखला के पहले 20 पदों का योग होगा:

Options :

1. ✖ 16

2. ✖ 1.6

3. ✔ 0.16

4. ✖ 0.106

Question Number : 90 Question Id : 5861802104 Question Type : MCQ Option Shuffling : Yes
Correct Marks : 1 Wrong Marks : 0.25

The value of $\frac{(2.3)^3 - 0.027}{(2.3)^2 + 0.69 + 0.09}$ is:

Options :

1. ✖ 3

2. ✖ 4

3. ✖ 1

4. ✔ 2

Question Number : 90 Question Id : 5861802104 Question Type : MCQ Option Shuffling : Yes
Correct Marks : 1 Wrong Marks : 0.25

$\frac{(2.3)^3 - 0.027}{(2.3)^2 + 0.69 + 0.09}$ का मान होगा:

Options :

1. ✖ 3

2. ✖ 4

3. ✖ 1

4. ✔ 2

Question Number : 91 Question Id : 5861802105 Question Type : MCQ Option Shuffling : Yes

Correct Marks : 1 Wrong Marks : 0.25

The HCF of two numbers, each having three digits, is 17 and their LCM is 714. The sum of the numbers is:

Options :

1. ✔ 221

2. ✖ 102

3. ✖ 119

4. ✖ 149

Question Number : 91 Question Id : 5861802105 Question Type : MCQ Option Shuffling : Yes

Correct Marks : 1 Wrong Marks : 0.25

तीन अंकों वाली दो संख्याओं का महत्तम समापवर्तक 17 और लघुत्तम समापवर्तक 714 है। इन संख्याओं का योग होगा:

Options :

1. ✔ 221

2. ✖ 102

3. ✖ 119

4. ✖ 149

Question Number : 92 Question Id : 5861802106 Question Type : MCQ Option Shuffling : Yes

Correct Marks : 1 Wrong Marks : 0.25

A garden consists of 135 rubber plants planted in certain number of columns. There are another set of 225 corn plants that is to be planted in the same number of columns. What is the maximum number of columns in which they can be planted?

Options :

1. ✖ 55

2. ✖ 35

3. ✔ 45

4. ✖ 25

Question Number : 92 Question Id : 5861802106 Question Type : MCQ Option Shuffling : Yes

Correct Marks : 1 Wrong Marks : 0.25

एक बगीचे में 135 रबर के पौधे हैं जिन्हें निश्चित संख्या में स्तंभों में लगाया गया है। इसी प्रकार से 225 मक्के के पौधों को भी समान संख्या के स्तंभों में लगाया जाना है। उन स्तंभों की अधिकतम संख्या ज्ञात करें जिनमें उन्हें लगाया जा सकता है?

Options :

1. ✖ 55

2. ✖ 35

3. ✔ 45

4. ✖ 25

Question Number : 93 Question Id : 5861802107 Question Type : MCQ Option Shuffling : Yes

Correct Marks : 1 Wrong Marks : 0.25

What is the largest number that will divide 4358, 4748, 5138 and 5788 to leave a remainder of 3 in each case?

Options :

1. ✖ 52

2. ✖ 55

3. ✔ 65

4. ✖ 75

Question Number : 93 Question Id : 5861802107 Question Type : MCQ Option Shuffling : Yes

Correct Marks : 1 Wrong Marks : 0.25

वह सबसे बड़ी संख्या कौन सी है जो 4358, 4748, 5138 और 5788 को विभाजित करती है और प्रत्येक मामले में 3 शेष बचता है?

Options :

1. ✖ 52

2. ✖ 55

3. ✔ 65

4. ✖ 75

Question Number : 94 Question Id : 5861802108 Question Type : MCQ Option Shuffling : Yes

Correct Marks : 1 Wrong Marks : 0.25

In 90 litres of a mixture of milk and water, the ratio of milk to water is 2 : 1. If this ratio is to be 1 : 2 respectively, then the quantity of water to be further added is:

Options :

1. ✖ 30 litres

2. ✖ 45 litres

3. ✖ 60 litres

4. ✔ 90 litres

Question Number : 94 Question Id : 5861802108 Question Type : MCQ Option Shuffling : Yes

Correct Marks : 1 Wrong Marks : 0.25

90 लीटर के दूध और पानी के मिश्रण में, दूध से पानी का अनुपात 2 : 1 है। इस अनुपात को क्रमशः 1 : 2 करने के लिए मिश्रण में कितना पानी मिलाए जाने की आवश्यकता है?

Options :

1. ✖ 30 लीटर

2. ✖ 45 लीटर

3. ✖ 60 लीटर

4. ✔ 90 लीटर

Question Number : 95 Question Id : 5861802109 Question Type : MCQ Option Shuffling : Yes

Correct Marks : 1 Wrong Marks : 0.25

The salaries of three persons, X, Y and Z, are in the ratio of 2 : 3 : 5. If increments of 15%, 10% and 20% are allowed, respectively, in their salaries, then the new ratio of their salaries will be:

Options :

1. ✖ 21 : 32 : 54

2. ✖ 13 : 23 : 40

3. ✖ 23 : 33 : 55

4. ✔ 23 : 33 : 60

Question Number : 95 Question Id : 5861802109 Question Type : MCQ Option Shuffling : Yes

Correct Marks : 1 Wrong Marks : 0.25

तीन व्यक्तियों X, Y और Z का वेतन 2 : 3 : 5 के अनुपात में है। यदि उनके वेतन में क्रमशः 15%, 10% और 20% की वृद्धि कर दी जाए, तो उनके वेतन का नया अनुपात होगा:

Options :

1. ✖ 21 : 32 : 54

2. ✖ 13 : 23 : 40

3. ✖ 23 : 33 : 55

4. ✔ 23 : 33 : 60

Question Number : 96 Question Id : 5861802110 Question Type : MCQ Option Shuffling : Yes

Correct Marks : 1 Wrong Marks : 0.25

Amit bought 600 mangoes and 400 apples for his shop. If 15% of the mangoes and 8% of the apples were rotten, then the percentage of fruits in good condition is:

Options :

1. ✖ 89.2%

2. ✖ 81.4%

3. ✖ 84.6%

4. ✔ 87.8%

Question Number : 96 Question Id : 5861802110 Question Type : MCQ Option Shuffling : Yes

Correct Marks : 1 Wrong Marks : 0.25

अमित ने अपनी दुकान के लिए 600 आम और 400 सेब खरीदे। यदि 15% आम और 8% सेब सड़े हुए थे, तो गणना करें कि कितने प्रतिशत फल अच्छी स्थिति में हैं?

Options :

1. ✖ 89.2%

2. ✖ 81.4%

3. ✖ 84.6%

4. ✔ 87.8%

Question Number : 97 Question Id : 5861802111 Question Type : MCQ Option Shuffling : Yes

Correct Marks : 1 Wrong Marks : 0.25

A television manufacturing company declares that a television is now available for Rs. 25,600 as against Rs. 28,400 a year before. Find the approximate percentage reduction in the price of television offered by the company?

Options :

1. ✖ 9.81%

2. ✔ 9.86%

3. ✖ 9.68%

4. ✖ 8.96%

Question Number : 97 Question Id : 5861802111 Question Type : MCQ Option Shuffling : Yes

Correct Marks : 1 Wrong Marks : 0.25

एक टेलीविजन बनाने वाली कंपनी ने घोषणा की कि अब उसके टेलीविजन एक साल पहले के भाव रुपये 28,400 के मुकाबले रुपये 25,600 में उपलब्ध होंगे। कंपनी के टेलीविजन की कीमत में अनुमानित प्रतिशत कमी की गणना करें।

Options :

1. ✖ 9.81%

2. ✔ 9.86%

3. ✖ 9.68%

4. ✖ 8.96%

Question Number : 98 Question Id : 5861802112 Question Type : MCQ Option Shuffling : Yes

Correct Marks : 1 Wrong Marks : 0.25

A number is first increased by 40% and then decreased by 40%. The net percentage increase or decrease is:

Options :

1. ✔ 16% decrease

2. ✖ 14% increase

3. ✖ 18% decrease

4. ✖ 15% increase

Question Number : 98 Question Id : 5861802112 Question Type : MCQ Option Shuffling : Yes

Correct Marks : 1 Wrong Marks : 0.25

एक संख्या को पहले 40% बढ़ाया जाता है और फिर इसमें 40% की कमी की जाती है। सकल प्रतिशत वृद्धि या कमी ज्ञात करें:

Options :

1. ✔ 16% कमी

2. ✖ 14% वृद्धि

3. ✖ 18% कमी

4. ✖ 15% वृद्धि

Question Number : 99 Question Id : 5861802113 Question Type : MCQ Option Shuffling : Yes

Correct Marks : 1 Wrong Marks : 0.25

The average age of a father and his two sons is 27 years. Five years ago, the average age of the two sons was 12 years. The present age of the father is:

Options :

1. ✖ 49 years

2. ✖ 34 years

3. ✔ 47 years

4. ✖ 42 years

Question Number : 99 Question Id : 5861802113 Question Type : MCQ Option Shuffling : Yes

Correct Marks : 1 Wrong Marks : 0.25

एक पिता और उसके दो पुत्रों की औसत आयु 27 वर्ष है। पांच साल पहले, दोनों बेटों की औसत आयु 12 वर्ष थी। पिता की वर्तमान आयु है:

Options :

1. ✖ 49 साल

2. ✖ 34 साल

3. ✔ 47 साल

4. ✖ 42 साल

Question Number : 100 Question Id : 5861802114 Question Type : MCQ Option Shuffling : Yes

Correct Marks : 1 Wrong Marks : 0.25

In a hostel of 12 boys and some girls, the average consumption of rice per month is 12 kg. The average consumption of rice by boys is 16 kg per head and that by girls is 8 kg per head. The number of girls in the hostel is:

Options :

1. ✖ 14

2. ✔ 12

3. ✖ 16

4. ✖ 15

Question Number : 100 Question Id : 5861802114 Question Type : MCQ Option Shuffling : Yes

Correct Marks : 1 Wrong Marks : 0.25

12 लड़कों और कुछ लड़कियों के एक छात्रावास में, प्रति माह चावल की औसत खपत 12 kg है। प्रत्येक लड़का औसतन 16 kg चावल की खपत करता है वहीं लड़कियों के मामले में यह आंकड़ा प्रति लड़की 8 kg है। छात्रावास में लड़कियों की संख्या की गणना करें:

Options :

1. ✖ 14

2. ✔ 12

3. ✖ 16

4. ✖ 15

Arithmetic Ability2

Group Number :	6
Group Id :	58618097
Group Maximum Duration :	0
Group Minimum Duration :	0
Show Attended Group? :	No
Edit Attended Group? :	No
Break time:	0
Group Marks:	20
Is this Group for Examiner?:	No
Revisit allowed for group Instructions? :	Yes
Maximum Instruction Time:	0
Minimum Instruction Time:	0

Arithmetic Ability2

Section Id :	586180101
Section Number :	1
Section type :	Online
Mandatory or Optional:	Mandatory
Number of Questions:	20
Number of Questions to be attempted:	20
Section Marks:	20

Sub-Section Number:	1
Sub-Section Id:	586180136
Question Shuffling Allowed :	Yes

Question Number : 101 Question Id : 5861802115 Question Type : MCQ Option Shuffling : Yes

Correct Marks : 1 Wrong Marks : 0.25

The percentage profit earned by selling an article for Rs. 1,920 is equal to the percentage loss incurred by selling the same article for Rs. 1,280. At what price should the article be sold to make a 25% profit?

Options :

1. ✖ Rs. 2,400

2. ✖ Rs. 2,200

3. ✖ Rs. 2,100

4. ✔ Rs. 2,000

Question Number : 101 Question Id : 5861802115 Question Type : MCQ Option Shuffling : Yes

Correct Marks : 1 Wrong Marks : 0.25

किसी वस्तु को रुपये 1920 में बेचने पर होने वाला प्रतिशत लाभ, उसी वस्तु को रुपये 1280 में बेचने पर होने वाली प्रतिशत हानि के बराबर होता है। 25% का लाभ कमाने के लिए वस्तु को किस कीमत पर बेचा जाना चाहिए?

Options :

1. ✖ रुपये 2,400

2. ✖ रुपये 2,200

3. ✖ रुपये 2,100

4. ✔ रुपये 2,000

Question Number : 102 Question Id : 5861802116 Question Type : MCQ Option Shuffling : Yes

Correct Marks : 1 Wrong Marks : 0.25

A shopkeeper sold a television set for Rs. 17,940 after giving a discount of 8% on its marked price and earned a profit of 19.6%. If no discount was offered, then the percentage of profit earned would have been:

Options :

1. ✓ 30%

2. ✗ 27%

3. ✗ 25%

4. ✗ 24.8%

Question Number : 102 Question Id : 5861802116 Question Type : MCQ Option Shuffling : Yes

Correct Marks : 1 Wrong Marks : 0.25

एक दुकानदार ने एक टेलीविजन सेट के अंकित मूल्य पर 8% की छूट देने के बाद इसे रुपये 17,940 में बेचा और इस सौदे में 19.6% का लाभ कमाया। अगर उसने कोई छूट नहीं दी होती, तो अर्जित लाभ का प्रतिशत होता:

Options :

1. ✓ 30%

2. ✗ 27%

3. ✗ 25%

4. ✗ 24.8%

Question Number : 103 Question Id : 5861802117 Question Type : MCQ Option Shuffling : Yes

Correct Marks : 1 Wrong Marks : 0.25

'A' costs Rs. 500 per kg. After mixing it with 'B' costing Rs. 250 per kg, a shopkeeper sells the mixture at Rs. 480 per kg, thereby making a profit of 20%. In what ratio does he mix the two?

Options :

1. ✗ 3 : 4

2. ✖ 1 : 3

3. ✔ 3 : 2

4. ✖ 4 : 5

Question Number : 103 Question Id : 5861802117 Question Type : MCQ Option Shuffling : Yes

Correct Marks : 1 Wrong Marks : 0.25

‘A’ की लागत रुपये 500 प्रति kg है। एक दुकानदार इसमें रुपये 250 प्रति kg वाला ‘B’ मिलाकर इस मिश्रण को प्रति किलोग्राम रुपये 480 में बेचता है और इस सौदे में 20% का लाभ कमाता है। उसने दोनों को किस अनुपात में मिलाया है?

Options :

1. ✖ 3 : 4

2. ✖ 1 : 3

3. ✔ 3 : 2

4. ✖ 4 : 5

Question Number : 104 Question Id : 5861802118 Question Type : MCQ Option Shuffling : Yes

Correct Marks : 1 Wrong Marks : 0.25

A shopkeeper gives a discount of 20% on the labelled price of a calculator. On this discounted price, he gives an additional discount of 12%. If the final selling price of the calculator is Rs. 704, then the labelled price of the calculator is:

Options :

1. ✖ Rs. 1,045.00

2. ✔ Rs. 1,000.00

3. ✖ Rs. 930.00

4. ✖ Rs. 845.00

Question Number : 104 Question Id : 5861802118 Question Type : MCQ Option Shuffling : Yes

Correct Marks : 1 Wrong Marks : 0.25

एक दुकानदार कैलकुलेटर की लेबल की गई कीमत पर 20% की छूट देता है। इस रियायती कीमत पर, वह 12% की अतिरिक्त छूट जोड़ देता है। यदि कैलकुलेटर का अंतिम विक्रय मूल्य रुपये 704 है तो कैलकुलेटर का लेबल मूल्य ज्ञात करें:

Options :

1. ✖ रुपये 1,045.00

2. ✔ रुपये 1,000.00

3. ✖ रुपये 930.00

4. ✖ रुपये 845.00

Question Number : 105 Question Id : 5861802119 Question Type : MCQ Option Shuffling : Yes

Correct Marks : 1 Wrong Marks : 0.25

If the difference between a discount of 35% and two successive discounts of 20% on a certain bill is Rs. 22, then the amount of the bill is:

Options :

1. ✔ Rs. 2,200

2. ✖ Rs. 1,100

3. ✖ Rs. 1,000

4. ✖ Rs. 1,500

Question Number : 105 Question Id : 5861802119 Question Type : MCQ Option Shuffling : Yes

Correct Marks : 1 Wrong Marks : 0.25

यदि एक निश्चित बिल पर 35% की छूट और 20% की दो क्रमिक छूटों के बीच का अंतर रुपये 22 है, तो बिल की राशि है:

Options :

1. ✔ रुपये 2,200

2. ✖ रुपये 1,100

3. ✖ रुपये 1,000

4. ✖ रुपये 1,500

Question Number : 106 Question Id : 5861802120 Question Type : MCQ Option Shuffling : Yes

Correct Marks : 1 Wrong Marks : 0.25

At what rate percentage per annum will the simple interest on a sum of money be $\frac{2}{5}$ of the sum in 10 years?

Options :

1. ✖ $\frac{17}{3}\%$

2. ✖ 6%

3. ✔ 4%

4. ✖ $\frac{20}{3}\%$

Question Number : 106 Question Id : 5861802120 Question Type : MCQ Option Shuffling : Yes

Correct Marks : 1 Wrong Marks : 0.25

किस सालाना ब्याज दर पर किसी राशि पर 10 साल की अवधि में मूल राशि का $\frac{2}{5}$ ब्याज अर्जित होगा?

Options :

1. ✖ $\frac{17}{3}\%$

2. ✖ 6%

3. ✔ 4%

4. ✖ $\frac{20}{3}\%$

Question Number : 107 Question Id : 5861802121 Question Type : MCQ Option Shuffling : Yes

Correct Marks : 1 Wrong Marks : 0.25

Simple interest on a certain amount is $\frac{9}{16}$ of the principal. If the numbers representing the rate of interest in percentage and time in years are equal, then the time for which the principal is lent out is:

Options :

1. ✔ $7\frac{1}{2}$ years

2. ✖ $6\frac{1}{2}$ years

3. ✖ $5\frac{1}{2}$ years

4. ✖ 7 years

Question Number : 107 Question Id : 5861802121 Question Type : MCQ Option Shuffling : Yes

Correct Marks : 1 Wrong Marks : 0.25

एक निश्चित राशि पर साधारण ब्याज मूलधन का $\frac{9}{16}$ है। यदि इस राशि पर लगने वाले प्रतिशत ब्याज की दर और समयावधि समान है, तो गणना कीजिए कि मूलधन कितने समय के लिए उधार दिया गया है?

Options :

1. ✓ $7\frac{1}{2}$ साल के लिए

2. ✗ $6\frac{1}{2}$ साल के लिए

3. ✗ $5\frac{1}{2}$ साल के लिए

4. ✗ 7 साल के लिए

Question Number : 108 Question Id : 5861802122 Question Type : MCQ Option Shuffling : Yes

Correct Marks : 1 Wrong Marks : 0.25

A person divided a sum of Rs. 2,600 into three parts and invested the parts at 4%, 6% and 8% per annum simple interest, respectively. At the end of the year, the person got the same interest in all three cases. The money invested at 4% was:

Options :

1. ✓ Rs. 1,200

2. ✗ Rs. 800

3. ✗ Rs. 600

4. ✗ Rs. 200

Question Number : 108 Question Id : 5861802122 Question Type : MCQ Option Shuffling : Yes

Correct Marks : 1 Wrong Marks : 0.25

एक व्यक्ति ने रुपये 2,600 को तीन भागों में विभाजित किया और इन भागों को क्रमशः 4%, 6% और 8% प्रतिवर्ष साधारण ब्याज पर निवेशित किया। वर्ष के अंत में, इस व्यक्ति को तीनों मामलों में समान ब्याज अर्जित हुआ। 4% की दर पर निवेशित राशि की गणना कीजिए:

Options :

1. ✓ रुपये 1,200

2. ✗ रुपये 800

3. ✗ रुपये 600

4. ✗ रुपये 200

Question Number : 109 Question Id : 5861802123 Question Type : MCQ Option Shuffling : Yes

Correct Marks : 1 Wrong Marks : 0.25

The difference between the compound interest and the simple interest at a certain rate per annum accrued on a sum of Rs. 18,000 in 2 years was Rs. 405. The rate of interest per annum was:

Options :

1. ✗ 13%

2. ✗ 16%

3. ✓ 15%

4. ✗ 12%

Question Number : 109 Question Id : 5861802123 Question Type : MCQ Option Shuffling : Yes

Correct Marks : 1 Wrong Marks : 0.25

रुपये 18,000 की राशि पर 2 वर्षों की अवधि में एक निश्चित प्रतिवर्ष ब्याज दर पर प्राप्त चक्रवृद्धि ब्याज और साधारण ब्याज के बीच का अंतर रुपये 405 था। प्रति वर्ष ब्याज की दर थी:

Options :

1. ✖ 13%

2. ✖ 16%

3. ✔ 15%

4. ✖ 12%

Question Number : 110 Question Id : 5861802124 Question Type : MCQ Option Shuffling : Yes

Correct Marks : 1 Wrong Marks : 0.25

A sum of money was borrowed at 5% compound interest and then paid back in two annual instalments of Rs. 882 each. The sum borrowed was:

Options :

1. ✖ Rs. 1,680

2. ✖ Rs. 1,700

3. ✖ Rs. 1,620

4. ✔ Rs. 1,640

Question Number : 110 Question Id : 5861802124 Question Type : MCQ Option Shuffling : Yes

Correct Marks : 1 Wrong Marks : 0.25

एक राशि को 5% चक्रवृद्धि ब्याज पर उधार लिया गया और इसे रुपये 882 की 2 सालाना किश्तों में वापस चुका दिया गया। उधार ली गई राशि थी:

Options :

1. ✖ रुपये 1,680

2. ✖ रुपये 1,700

3. ✖ रुपये 1,620

4. ✔ रुपये 1,640

Question Number : 111 Question Id : 5861802125 Question Type : MCQ Option Shuffling : Yes

Correct Marks : 1 Wrong Marks : 0.25

A rectangle has width a and length b . If the width is decreased by 20% and the length is increased by 10%, then what is the area of the new rectangle in percentage compared to ab ?

Options :

1. ✖ 110%

2. ✔ 88%

3. ✖ 120%

4. ✖ 80%

Question Number : 111 Question Id : 5861802125 Question Type : MCQ Option Shuffling : Yes

Correct Marks : 1 Wrong Marks : 0.25

एक आयत की चौड़ाई a और लंबाई b है। यदि इसकी चौड़ाई 20% कम कर दी जाती है और लंबाई 10% बढ़ा दी जाती है, तो ab की तुलना में नए आयत क्षेत्रफल कितने प्रतिशत होगा?

Options :

1. ✖ 110%

2. ✔ 88%

3. ✖ 120%

4. ✖ 80%

Question Number : 112 Question Id : 5861802126 Question Type : MCQ Option Shuffling : Yes

Correct Marks : 1 Wrong Marks : 0.25

A tank is 25 m long, 12 m wide and 6 m deep. The cost of plastering its wall and bottom at Rs. 1.5 per m^2 will be:

Options :

1. ✖ Rs. 1,160

2. ✖ Rs. 1,010

3. ✔ Rs. 1,116

4. ✖ Rs. 1,106

Question Number : 112 Question Id : 5861802126 Question Type : MCQ Option Shuffling : Yes

Correct Marks : 1 Wrong Marks : 0.25

एक टैंक 25 m लंबा, 12 m चौड़ा और 6 m गहरा है। रुपये 1.5 प्रति m^2 की दर से इसकी दीवार और तल को प्लास्टर करने की लागत की गणना कीजिए:

Options :

1. ✖ रुपये 1,160

2. ✖ रुपये 1,010

3. ✔ रुपये 1,116

4. ✖ रुपये 1,106

Question Number : 113 Question Id : 5861802127 Question Type : MCQ Option Shuffling : Yes

Correct Marks : 1 Wrong Marks : 0.25

If the height of a triangle is decreased by 40% and its base is increased by 40%, then its area will:

Options :

1. ✖ increase by 8%

2. ✖ increase by 16%

3. ✖ decrease by 8%

4. ✔ decrease by 16%

Question Number : 113 Question Id : 5861802127 Question Type : MCQ Option Shuffling : Yes

Correct Marks : 1 Wrong Marks : 0.25

यदि किसी त्रिभुज की ऊँचाई 40% कम कर दी जाती है और इसका आधार 40% तक बढ़ा दिया जाता है, तो इसका नया क्षेत्रफल होगा:

Options :

1. ✖ 8% अधिक

2. ✖ 16% अधिक

3. ✖ 8% कम

4. ✔ 16% कम

Question Number : 114 Question Id : 5861802128 Question Type : MCQ Option Shuffling : Yes

Correct Marks : 1 Wrong Marks : 0.25

Anbu can do a job in 10 days. Babu can do the same job in 20 days. They start doing the job together, but after 4 days, Babu leaves. How many more days will be required by Anbu to complete this job alone?

Options :

1. ✓ 4

2. ✗ 6

3. ✗ 2

4. ✗ 5

Question Number : 114 Question Id : 5861802128 Question Type : MCQ Option Shuffling : Yes

Correct Marks : 1 Wrong Marks : 0.25

अन्बु किसी काम को 10 दिनों में पूरा कर सकता है। बाबू को वही काम पूरा करने में 20 दिन लगते हैं। वे एक साथ काम करना शुरू करते हैं, लेकिन 4 दिनों के बाद, बाबू काम छोड़ देता है। अन्बु को इस काम को आगे अकेले पूरा करने के लिए कितने दिन और लगेंगे?

Options :

1. ✓ 4

2. ✗ 6

3. ✗ 2

4. ✗ 5

Question Number : 115 Question Id : 5861802129 Question Type : MCQ Option Shuffling : Yes

Correct Marks : 1 Wrong Marks : 0.25

A takes 30 days to finish a work. B and C are thrice and twice as efficient as A, respectively. If A, B, and C work together, then how many days will they take to finish the work?

Options :

1. ✖ 4.5

2. ✔ 5

3. ✖ 6

4. ✖ 6.3

Question Number : 115 Question Id : 5861802129 Question Type : MCQ Option Shuffling : Yes

Correct Marks : 1 Wrong Marks : 0.25

A को किसी काम को पूरा करने में 30 दिन लगते हैं। B और C, A के मुकाबले क्रमशः तीन गुना और दो गुना अधिक कुशल हैं। यदि A, B, और C एक साथ काम करते हैं, तो उन्हें काम पूरा करने में कितने दिन लगेंगे?

Options :

1. ✖ 4.5

2. ✔ 5

3. ✖ 6

4. ✖ 6.3

Question Number : 116 Question Id : 5861802130 Question Type : MCQ Option Shuffling : Yes

Correct Marks : 1 Wrong Marks : 0.25

Two trains start from A and B and travel towards each other at speeds of 50 km/h and 60 km/h, respectively. When they meet each other, the second train has travelled 120 km more than the first train. The distance between A and B is:

Options :

1. ✖ 1200 km

2. ✖ 720 km

3. ✖ 1230 km

4. ✔ 1320 km

Question Number : 116 Question Id : 5861802130 Question Type : MCQ Option Shuffling : Yes

Correct Marks : 1 Wrong Marks : 0.25

दो ट्रेनें A और B से शुरू होती हैं और क्रमशः 50 km/h और 60 km/h की गति से एक दूसरे की ओर चलती हैं। जब ये दोनों आपस में मिलती हैं, तो दूसरी ट्रेन पहली ट्रेन के मुकाबले 120 km अधिक दूरी तय कर चुकी होती है। A और B के बीच की दूरी है:

Options :

1. ✖ 1200 km

2. ✖ 720 km

3. ✖ 1230 km

4. ✔ 1320 km

Question Number : 117 Question Id : 5861802131 Question Type : MCQ Option Shuffling : Yes

Correct Marks : 1 Wrong Marks : 0.25

जमीन पर बिंदु A से किसी हवाई जहाज का उन्नयन कोण 60° है। 15 सेकंड की क्षैतिज उड़ान के बाद, उन्नयन कोण बदलकर 30° हो जाता है। यदि हवाई जहाज 200 m/s की गति से उड़ रहा है, तो हवाई जहाज जिस ऊंचाई पर उड़ रहा है, वह है:

Options :

1. ✖ $1300\sqrt{3}$ m

2. ✓ $1500\sqrt{3}$ m

3. ✗ $1500/\sqrt{3}$ m

4. ✗ $1300/\sqrt{5}$ m

Question Number : 117 Question Id : 5861802131 Question Type : MCQ Option Shuffling : Yes

Correct Marks : 1 Wrong Marks : 0.25

The angle of elevation of an aeroplane from point A on the ground is 60° . After a flight of 15 seconds horizontally, the angle of elevation changes to 30° . If the aeroplane is flying at a speed of 200 m/s, then the constant height at which the aeroplane is flying is:

Options :

1. ✗ $1300\sqrt{3}$ m

2. ✓ $1500\sqrt{3}$ m

3. ✗ $1500/\sqrt{3}$ m

4. ✗ $1300/\sqrt{5}$ m

Question Number : 118 Question Id : 5861802132 Question Type : MCQ Option Shuffling : Yes

Correct Marks : 1 Wrong Marks : 0.25

A sprinter runs the first 50 m of a 100-m race in 5 seconds. Thereafter, he increases his speed so as to run half of the remaining stretch with a speed that is 50% of the speed with which he runs the remaining distance. What should be his average speed immediately after leaving the 50-m mark, so that he completes the race in 9.5 seconds?

Options :

1. ✗ 8.25 m/s

2. ✓ 8.33 m/s

3. ✖ 8.4 m/s

4. ✖ 8.5 m/s

Question Number : 118 Question Id : 5861802132 Question Type : MCQ Option Shuffling : Yes

Correct Marks : 1 Wrong Marks : 0.25

एक धावक एक 100-m की दौड़ के पहले 50 m, 5 सेकंड में पूरे कर लेता है। इसके बाद वह अपनी गति बढ़ा देता है, ताकि वह बची हुई दौड़ का आधा भाग अगले हिस्से में दौड़े जाने वाली गति की 50% गति से पूरा कर सके। 50-m के निशान को पार करने के तुरंत बाद उसकी औसत गति क्या होनी चाहिए, जिससे कि वह 9.5 सेकंड में दौड़ पूरी कर ले?

Options :

1. ✖ 8.25 m/s

2. ✔ 8.33 m/s

3. ✖ 8.4 m/s

4. ✖ 8.5 m/s

Question Number : 119 Question Id : 5861802133 Question Type : MCQ Option Shuffling : Yes

Correct Marks : 1 Wrong Marks : 0.25

The following table shows the number of students who went abroad for higher studies from different states (A to F) over the years:

	1995	1996	1997	1998	1999
A	723	840	900	920	925
B	1035	940	1200	1400	1500
C	750	600	830	575	900
D	500	550	450	600	525
E	1500	1625	1700	1475	1800
F	800	840	875	925	785
Total	5308	5395	5955	5895	6435

The state from which the least number of students went abroad over the given years is:

Options :

1. ✖ A
2. ✖ B
3. ✖ C
4. ✔ D

Question Number : 119 Question Id : 5861802133 Question Type : MCQ Option Shuffling : Yes
Correct Marks : 1 Wrong Marks : 0.25
निम्न तालिका टेबल उन छात्रों की संख्या दर्शाती है जो उच्च अध्ययन के लिए विभिन्न राज्यों (A to F) से विदेश गए थे:

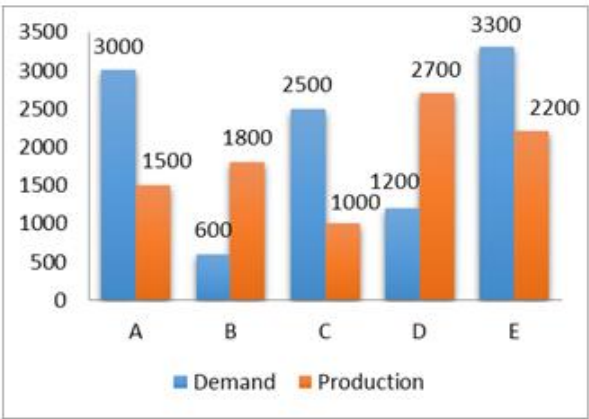
	1995	1996	1997	1998	1999
A	723	840	900	920	925
B	1035	940	1200	1400	1500
C	750	600	830	575	900
D	500	550	450	600	525
E	1500	1625	1700	1475	1800
F	800	840	875	925	785
कुल	5308	5395	5955	5895	6435

वह राज्य जहां से दिए गए वर्षों में सबसे कम छात्र विदेश गए:
Options :

1. ✖ A
2. ✖ B
3. ✖ C
4. ✔ D

Question Number : 120 Question Id : 5861802134 Question Type : MCQ Option Shuffling : Yes
Correct Marks : 1 Wrong Marks : 0.25

The following graph shows the demand and production of five companies.



The ratio of the number of companies having more demand than production to the number of those having more production than demand is:

Options :

1. ✖ 2 : 3

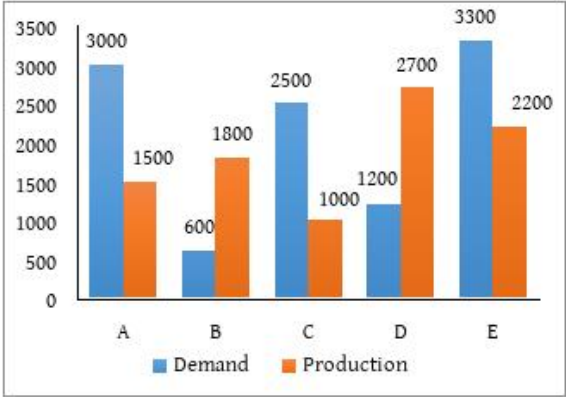
2. ✖ 4 : 1

3. ✔ 3 : 2

4. ✖ 2 : 2

Question Number : 120 Question Id : 5861802134 Question Type : MCQ Option Shuffling : Yes
Correct Marks : 1 Wrong Marks : 0.25

निम्नलिखित ग्राफ पांच कंपनियों की मांग और उत्पादन को दर्शाता है।



उत्पादन की तुलना में अधिक मांग वाली कंपनियों और मांग से अधिक उत्पादन करने वाली कंपनियों की संख्या का अनुपात है:

Options :

1. ✖ 2 : 3

2. ✖ 4 : 1

3. ✔ 3 : 2

4. ✖ 2 : 2



General English1

Group Number :	7
Group Id :	58618098
Group Maximum Duration :	0
Group Minimum Duration :	0
Show Attended Group? :	No
Edit Attended Group? :	No
Break time:	0
Group Marks:	20
Is this Group for Examiner?:	No
Revisit allowed for group Instructions? :	Yes
Maximum Instruction Time:	0
Minimum Instruction Time:	0

General English1

Section Id :	586180102
Section Number :	1
Section type :	Online
Mandatory or Optional:	Mandatory
Number of Questions:	20
Number of Questions to be attempted:	20
Section Marks:	20

Sub-Section Number:	1
Sub-Section Id:	586180137
Question Shuffling Allowed :	Yes

Question Number : 121 Question Id : 5861802135 Question Type : MCQ Option Shuffling : Yes
Correct Marks : 1 Wrong Marks : 0.25

Select the option that can be used as a one-word substitute for the given group of words.

The art and science of graphically representing a geographical area

Options :

1. ✖ Cacography
2. ✖ Choreography
3. ✔ Cartography
4. ✖ Geography

Question Number : 121 Question Id : 5861802135 Question Type : MCQ Option Shuffling : Yes
Correct Marks : 1 Wrong Marks : 0.25

Select the option that can be used as a one-word substitute for the given group of words.

The art and science of graphically representing a geographical area

Options :

1. ✖ Cacography
2. ✖ Choreography
3. ✔ Cartography
4. ✖ Geography

Question Number : 122 Question Id : 5861802136 Question Type : MCQ Option Shuffling : Yes

Correct Marks : 1 Wrong Marks : 0.25

Select the option that can be used as a one-word substitute for the given group of words.

Very determined and refusing to be defeated by problems

Options :

1. ✖ Vociferous
2. ✖ Impetuous
3. ✖ Imprudent
4. ✔ Pertinacious

Question Number : 122 Question Id : 5861802136 Question Type : MCQ Option Shuffling : Yes

Correct Marks : 1 Wrong Marks : 0.25

Select the option that can be used as a one-word substitute for the given group of words.

Very determined and refusing to be defeated by problems

Options :

1. ✖ Vociferous
2. ✖ Impetuous
3. ✖ Imprudent

4. ✓ Pertinacious

Question Number : 123 Question Id : 5861802137 Question Type : MCQ Option Shuffling : Yes
Correct Marks : 1 Wrong Marks : 0.25

Fill in the blanks with the most appropriate option.

When a study is called _____, the results can be reproduced by repeating the _____ in the study.

Options :

1. ✓ reliable, conditions
2. ✗ stable, condiments
3. ✗ verifiable, scenario
4. ✗ indelible, items

Question Number : 123 Question Id : 5861802137 Question Type : MCQ Option Shuffling : Yes
Correct Marks : 1 Wrong Marks : 0.25

Fill in the blanks with the most appropriate option.

When a study is called _____, the results can be reproduced by repeating the _____ in the study.

Options :

1. ✓ reliable, conditions
2. ✗ stable, condiments
3. ✗ verifiable, scenario
4. ✗ indelible, items

Question Number : 124 Question Id : 5861802138 Question Type : MCQ Option Shuffling : Yes
Correct Marks : 1 Wrong Marks : 0.25

Select the option that best gives the meaning of the underlined idiom.

Last evening we bought a carpet that cost us an arm and a leg.

Note: For this question, discrepancy is found in question/answer. So, this question is ignored for all candidates.

Options :

1. That was very easily available
2. That was very expensive
3. That was very cheap
4. That was not bought with money

Question Number : 124 Question Id : 5861802138 Question Type : MCQ Option Shuffling : Yes

Correct Marks : 1 Wrong Marks : 0.25

Select the option that best gives the meaning of the underlined idiom.

Last evening we bought a carpet that cost us an arm and a leg.

Note: For this question, discrepancy is found in question/answer. So, this question is ignored for all candidates.

Options :

1. That was very easily available
2. That was very expensive
3. That was very cheap
4. That was not bought with money

Question Number : 125 Question Id : 5861802139 Question Type : MCQ Option Shuffling : Yes

Correct Marks : 1 Wrong Marks : 0.25

Choose the meaning of the underlined phrase in the following sentence.

My mother told me off for bullying my sister.

Note: For this question, discrepancy is found in question/answer. So, this question is ignored for all candidates.

Options :

1. Extolled
2. Denied
3. Reprimanded
4. Declined

Question Number : 125 Question Id : 5861802139 Question Type : MCQ Option Shuffling : Yes
Correct Marks : 1 Wrong Marks : 0.25

Choose the meaning of the underlined phrase in the following sentence.

My mother told me off for bullying my sister.

Note: For this question, discrepancy is found in question/answer. So, this question is ignored for all candidates.

Options :

1. Extolled
2. Denied
3. Reprimanded
4. Declined

Question Number : 126 Question Id : 5861802140 Question Type : MCQ Option Shuffling : Yes
Correct Marks : 1 Wrong Marks : 0.25

Fill in the blank with the most appropriate adjective.

Naresh is very good at judging people and utilising a situation for his own advantage. He can be described as _____ business man.

Options :

1. ✓ an astute
2. ✗ an intellectual
3. ✗ a philanthropic
4. ✗ a benevolent

Question Number : 126 Question Id : 5861802140 Question Type : MCQ Option Shuffling : Yes

Correct Marks : 1 Wrong Marks : 0.25

Fill in the blank with the most appropriate adjective.

Naresh is very good at judging people and utilising a situation for his own advantage. He can be described as _____ business man.

Options :

1. ✓ an astute
2. ✗ an intellectual
3. ✗ a philanthropic
4. ✗ a benevolent

Question Number : 127 Question Id : 5861802141 Question Type : MCQ Option Shuffling : Yes

Correct Marks : 1 Wrong Marks : 0.25

Choose the appropriate phrase to complete the following conditional sentence.

I would have told Ram the news sooner:

Options :

1. ✖ if I went to meet him in the station
2. ✖ if I call him immediately
3. ✔ if I had seen him
4. ✖ if you told me where Ram was staying

Question Number : 127 Question Id : 5861802141 Question Type : MCQ Option Shuffling : Yes
Correct Marks : 1 Wrong Marks : 0.25

Choose the appropriate phrase to complete the following conditional sentence.

I would have told Ram the news sooner:

Options :

1. ✖ if I went to meet him in the station
2. ✖ if I call him immediately
3. ✔ if I had seen him
4. ✖ if you told me where Ram was staying

Question Number : 128 Question Id : 5861802142 Question Type : MCQ Option Shuffling : Yes
Correct Marks : 1 Wrong Marks : 0.25

Which one of the following conditional sentences is grammatically correct?

Options :

1. ✖ I would love to go trekking if I am not scared of the forest.

2. ✖ I would have written your assignment if you help me in my homework.
3. ✖ If she had not studied French in her school days, she will not be able to join for Masters in France.
4. ✔ Unless John comes soon, we'll be late for the finals.

Question Number : 128 Question Id : 5861802142 Question Type : MCQ Option Shuffling : Yes
Correct Marks : 1 Wrong Marks : 0.25

Which one of the following conditional sentences is grammatically correct?

Options :

1. ✖ I would love to go trekking if I am not scared of the forest.
2. ✖ I would have written your assignment if you help me in my homework.
3. ✖ If she had not studied French in her school days, she will not be able to join for Masters in France.
4. ✔ Unless John comes soon, we'll be late for the finals.

Question Number : 129 Question Id : 5861802143 Question Type : MCQ Option Shuffling : Yes
Correct Marks : 1 Wrong Marks : 0.25

Choose the sentence in which the subject correctly agrees with its verb.

Options :

1. ✖ One of the reasons for Ram's dismissal are his carelessness in documentation.
2. ✖ Everyone were planning to go to the office party.
3. ✖ Neither my phone nor my laptop are working properly.

4. ✓ The remains of the martyred soldier were brought to his native place.

Question Number : 129 Question Id : 5861802143 Question Type : MCQ Option Shuffling : Yes
Correct Marks : 1 Wrong Marks : 0.25

Choose the sentence in which the subject correctly agrees with its verb.

Options :

1. ✗ One of the reasons for Ram's dismissal are his carelessness in documentation.
2. ✗ Everyone were planning to go to the office party.
3. ✗ Neither my phone nor my laptop are working properly.
4. ✓ The remains of the martyred soldier were brought to his native place.

Question Number : 130 Question Id : 5861802144 Question Type : MCQ Option Shuffling : Yes
Correct Marks : 1 Wrong Marks : 0.25

Select the grammatically correct sentence from the given options.

Options :

1. ✗ Yesterday she told me that she will visit her aunt today.
2. ✗ Vinay is a new student in the college. He doesn't have much friends.
3. ✗ Despite I was tired, I wrote my exam today.
4. ✓ My cousin arrived in India much later than his father.

Question Number : 130 Question Id : 5861802144 Question Type : MCQ Option Shuffling : Yes
Correct Marks : 1 Wrong Marks : 0.25

Select the grammatically correct sentence from the given options.

Options :

1. ✖ Yesterday she told me that she will visit her aunt today.
2. ✖ Vinay is a new student in the college. He doesn't have much friends.
3. ✖ Despite I was tired, I wrote my exam today.
4. ✔ My cousin arrived in India much later than his father.

Question Number : 131 Question Id : 5861802145 Question Type : MCQ Option Shuffling : Yes
Correct Marks : 1 Wrong Marks : 0.25

There are two statements numbered I and II. There may be cause and effect relationship between them. Or both might be effects of some independent cause or independent causes.

Choose the appropriate option after reading the following two statements:

I. The government has a standardised fee structure for all professional courses in government as well as private institutions from this year onwards.

II. Last year, there was a widespread agitation from public regarding the irregular fee structure for professional courses in private colleges.

Options :

1. ✖ Statement I is the cause and Statement II is the effect
2. ✔ Statement II is the cause and Statement I is the effect
3. ✖ Both statements are independent causes with no relation to each other.

4. ✖ Both statements are effects of an independent cause.

Question Number : 131 Question Id : 5861802145 Question Type : MCQ Option Shuffling : Yes

Correct Marks : 1 Wrong Marks : 0.25

There are two statements numbered I and II. There may be cause and effect relationship between them. Or both might be effects of some independent cause or independent causes.

Choose the appropriate option after reading the following two statements:

I. The government has a standardised fee structure for all professional courses in government as well as private institutions from this year onwards.

II. Last year, there was a widespread agitation from public regarding the irregular fee structure for professional courses in private colleges.

Options :

1. ✖ Statement I is the cause and Statement II is the effect
2. ✔ Statement II is the cause and Statement I is the effect
3. ✖ Both statements are independent causes with no relation to each other.
4. ✖ Both statements are effects of an independent cause.

Question Number : 132 Question Id : 5861802146 Question Type : MCQ Option Shuffling : Yes
Correct Marks : 1 Wrong Marks : 0.25

Fill in the blank with the most appropriate option.

The environmental board of our country issued an ominous forecast about the availability of drinking water in the future _____ the innovative measures taken by the water board.

Options :

1. ✖ however
2. ✖ as
3. ✔ despite
4. ✖ although

Question Number : 132 Question Id : 5861802146 Question Type : MCQ Option Shuffling : Yes
Correct Marks : 1 Wrong Marks : 0.25

Fill in the blank with the most appropriate option.

The environmental board of our country issued an ominous forecast about the availability of drinking water in the future _____ the innovative measures taken by the water board.

Options :

1. ✖ however
2. ✖ as
3. ✔ despite
4. ✖ although

Question Number : 133 Question Id : 5861802147 Question Type : MCQ Option Shuffling : Yes

Correct Marks : 1 Wrong Marks : 0.25

Select the option that expresses the given sentence in reported speech.

Anita said, “We went to a restaurant for lunch and then to the library”.

Options :

1. ✖ Anita replied that they went to a restaurant for lunch and then to the library.
2. ✖ Anita said that they had gone for lunch to a restaurant and then had gone to the library.
3. ✔ Anita said that they had gone to a restaurant for lunch and then to the library.
4. ✖ Anita said that they went to both, restaurant and library.

Question Number : 133 Question Id : 5861802147 Question Type : MCQ Option Shuffling : Yes

Correct Marks : 1 Wrong Marks : 0.25

Select the option that expresses the given sentence in reported speech.

Anita said, “We went to a restaurant for lunch and then to the library”.

Options :

1. ✖ Anita replied that they went to a restaurant for lunch and then to the library.
2. ✖ Anita said that they had gone for lunch to a restaurant and then had gone to the library.

3. ✓ Anita said that they had gone to a restaurant for lunch and then to the library.
4. ✗ Anita said that they went to both, restaurant and library.

Question Number : 134 Question Id : 5861802148 Question Type : MCQ Option Shuffling : Yes
Correct Marks : 1 Wrong Marks : 0.25

Select the option that expresses the given sentence in passive voice.

Scientists discovered one major oil deposit in UP.

Options :

1. ✗ Major oil deposit were discovered by scientists.
2. ✓ One major oil deposit was discovered by scientists in UP.
3. ✗ One major oil deposit have been discovered in UP.
4. ✗ Major oil deposit is being discovered by scientists in UP.

Question Number : 134 Question Id : 5861802148 Question Type : MCQ Option Shuffling : Yes
Correct Marks : 1 Wrong Marks : 0.25

Select the option that expresses the given sentence in passive voice.

Scientists discovered one major oil deposit in UP.

Options :

1. ✗ Major oil deposit were discovered by scientists.
2. ✓ One major oil deposit was discovered by scientists in UP.
3. ✗ One major oil deposit have been discovered in UP.

4. ✖ Major oil deposit is being discovered by scientists in UP.

Question Number : 135 Question Id : 5861802149 Question Type : MCQ Option Shuffling : Yes

Correct Marks : 1 Wrong Marks : 0.25

Fill in the blanks with the most appropriate option.

A: Aarushi is loving her campus life in Toronto.

B: What! I didn't _____abroad!

Options :

1. ✔ even know she has gone

2. ✖ even know she lived

3. ✖ know she has left to

4. ✖ knew she was in

Question Number : 135 Question Id : 5861802149 Question Type : MCQ Option Shuffling : Yes

Correct Marks : 1 Wrong Marks : 0.25

Fill in the blanks with the most appropriate option.

A: Aarushi is loving her campus life in Toronto.

B: What! I didn't _____abroad!

Options :

1. ✔ even know she has gone

2. ✖ even know she lived

3. ✖ know she has left to

4. ✖ knew she was in

Question Number : 136 Question Id : 5861802150 Question Type : MCQ Option Shuffling : Yes

Correct Marks : 1 Wrong Marks : 0.25

In which of the following four sentences is the order of the words correct?

Options :

1. ✖ At the top of the answer script you have to write your name.
2. ✖ Mr. Kepner is building opposite the hospital his new office block.
3. ✖ We bought an antique, beautiful watch in Italy.
4. ✔ We will probably be leaving for our hometown this weekend.

Question Number : 136 Question Id : 5861802150 Question Type : MCQ Option Shuffling : Yes

Correct Marks : 1 Wrong Marks : 0.25

In which of the following four sentences is the order of the words correct?

Options :

1. ✖ At the top of the answer script you have to write your name.
2. ✖ Mr. Kepner is building opposite the hospital his new office block.
3. ✖ We bought an antique, beautiful watch in Italy.
4. ✔ We will probably be leaving for our hometown this weekend.

Question Number : 137 Question Id : 5861802151 Question Type : MCQ Option Shuffling : Yes

Correct Marks : 1 Wrong Marks : 0.25

Sentences of a paragraph are given below. While the first and the last sentences are in correct order, the sentences in between are jumbled up. Arrange the sentences in the right order to form a meaningful and coherent paragraph.

1. Example is so powerful that if it is good, nothing else is necessary.
- P. Moreover we ask for gentleness loudly, and rudely command courtesy; we advise modesty, and pose as infallible gods.
- Q. This is so very apt in parent-children relationships.
- R. We counsel temperance, and eat and drink to excess; we teach amiability, and quarrel publicly.
- S. Many a times parents bemoan that their children do not behave the way they want them to; but most often it is because we ourselves violate the rules we would have our children obey.
6. But children learn by what they see us do, not be what we tell them.

Options :

1. ✖ PQSR
2. ✔ QSRP
3. ✖ SRQP
4. ✖ RQSP

Question Number : 137 Question Id : 5861802151 Question Type : MCQ Option Shuffling : Yes
Correct Marks : 1 Wrong Marks : 0.25

Sentences of a paragraph are given below. While the first and the last sentences are in correct order, the sentences in between are jumbled up. Arrange the sentences in the right order to form a meaningful and coherent paragraph.

1. Example is so powerful that if it is good, nothing else is necessary.

P. Moreover we ask for gentleness loudly, and rudely command courtesy; we advise modesty, and pose as infallible gods.

Q. This is so very apt in parent-children relationships.

R. We counsel temperance, and eat and drink to excess; we teach amiability, and quarrel publicly.

S. Many a times parents bemoan that their children do not behave the way they want them to; but most often it is because we ourselves violate the rules we would have our children obey.

6. But children learn by what they see us do, not be what we tell them.

Options :

1. ✖ PQSR

2. ✔ QSRP

3. ✖ SRQP

4. ✖ RQSP

Question Number : 138 Question Id : 5861802152 Question Type : MCQ Option Shuffling : Yes
Correct Marks : 1 Wrong Marks : 0.25



Sentences of a paragraph are given below. While the first and the last sentences are in correct order, the sentences in between are jumbled up. Arrange the sentences in the right order to form a meaningful and coherent paragraph.

1. Researchers from National Centre for Biological Sciences (NCBS), have conducted a memory test to show how memories change and get updated over time in people with unipolar and bipolar depression.

P. Two days later, controls, unipolar and bipolar patients were split into two groups, and the first group was prompted to remember what happened on the first day while the other group did not get this reminder.

Q. All the participants were made to memorise a different list of everyday objects. On the fifth day, all participants were asked to recollect the objects from the list shown on the first day.

R. On the first day of the Memory Test, all the participants memorised a list of 20 objects.

S. Unipolar and bipolar patients remembered fewer objects than control group.

6. Such recall is a form of memory updation where new learning updates older memories, but only when the old memory is activated by a reminder.

Options :

1. ✖ PQRS
2. ✖ SPQR
3. ✖ QPRS
4. ✔ RPQS

Question Number : 138 Question Id : 5861802152 Question Type : MCQ Option Shuffling : Yes
Correct Marks : 1 Wrong Marks : 0.25



Sentences of a paragraph are given below. While the first and the last sentences are in correct order, the sentences in between are jumbled up. Arrange the sentences in the right order to form a meaningful and coherent paragraph.

1. Researchers from National Centre for Biological Sciences (NCBS), have conducted a memory test to show how memories change and get updated over time in people with unipolar and bipolar depression.

P. Two days later, controls, unipolar and bipolar patients were split into two groups, and the first group was prompted to remember what happened on the first day while the other group did not get this reminder.

Q. All the participants were made to memorise a different list of everyday objects. On the fifth day, all participants were asked to recollect the objects from the list shown on the first day.

R. On the first day of the Memory Test, all the participants memorised a list of 20 objects.

S. Unipolar and bipolar patients remembered fewer objects than control group.

6. Such recall is a form of memory updation where new learning updates older memories, but only when the old memory is activated by a reminder.

Options :

1. ✖ PQRS

2. ✖ SPQR

3. ✖ QPRS

4. ✔ RPQS

Question Number : 139 Question Id : 5861802153 Question Type : MCQ Option Shuffling : Yes
Correct Marks : 1 Wrong Marks : 0.25

Read and choose the right place (right letter) to insert the sentence so that the passage would be meaningful:

After Tahiti, the Galapagos were the most famous of all the tropical islands in the Pacific. [A] They had been discovered in 1535 by Fray Tomas de Berlanga, Bishop of Panama, and were now owned by Ecuador, 500 odd miles away. Already in the 1830s some sixty or seventy whalers, mostly American, called there every year for 'refreshments'. [B] After a sumptuous lunch they usually enjoyed siesta in the shady caves near the coasts. [C] The whalers then called for mail at Post Office Bay where a box was set up on the beach. [D] Every whaling captain took from it any letters which he thought he might be able to forward.

The sentence to be inserted is:

‘They replenished their water tanks from the springs and captured tortoises for meat.’

Options :

1. ✖ A
2. ✔ B
3. ✖ C
4. ✖ D

Question Number : 139 Question Id : 5861802153 Question Type : MCQ Option Shuffling : Yes
Correct Marks : 1 Wrong Marks : 0.25

Read and choose the right place (right letter) to insert the sentence so that the passage would be meaningful:

After Tahiti, the Galapagos were the most famous of all the tropical islands in the Pacific. [A] They had been discovered in 1535 by Fray Tomas de Berlanga, Bishop of Panama, and were now owned by Ecuador, 500 odd miles away. Already in the 1830s some sixty or seventy whalers, mostly American, called there every year for 'refreshments'. [B] After a sumptuous lunch they usually enjoyed siesta in the shady caves near the coasts. [C] The whalers then called for mail at Post Office Bay where a box was set up on the beach. [D] Every whaling captain took from it any letters which he thought he might be able to forward.

The sentence to be inserted is:

'They replenished their water tanks from the springs and captured tortoises for meat.'

Options :

1. ✖ A
2. ✔ B
3. ✖ C
4. ✖ D

Question Number : 140 Question Id : 5861802154 Question Type : MCQ Option Shuffling : Yes
Correct Marks : 1 Wrong Marks : 0.25

Which of the following options when properly rearranged becomes the answer for the following question?

Did you see my mobile phone which I left on my work station?

Options :

1. ✖ I will not / it and / be seeing it / I didn't see
2. ✖ To call my friend / her number / I would like / and I don't know / to use your phone
3. ✔ Came and / but your friend / yes I saw it / from the table / took it
4. ✖ I kept / by your house / I don't think / in the table / my phone

Question Number : 140 Question Id : 5861802154 Question Type : MCQ Option Shuffling : Yes
Correct Marks : 1 Wrong Marks : 0.25

Which of the following options when properly rearranged becomes the answer for the following question?

Did you see my mobile phone which I left on my work station?

Options :

1. ✖ I will not / it and / be seeing it / I didn't see
2. ✖ To call my friend / her number / I would like / and I don't know / to use your phone
3. ✔ Came and / but your friend / yes I saw it / from the table / took it

4. ✖ I kept / by your house / I don't think / in the table / my phone

General English2

Group Number :	8
Group Id :	58618099
Group Maximum Duration :	0
Group Minimum Duration :	0
Show Attended Group? :	No
Edit Attended Group? :	No
Break time:	0
Group Marks:	20
Is this Group for Examiner?:	No
Revisit allowed for group Instructions? :	Yes
Maximum Instruction Time:	0
Minimum Instruction Time:	0

General English2

Section Id :	586180103
Section Number :	1
Section type :	Online
Mandatory or Optional:	Mandatory
Number of Questions:	12
Number of Questions to be attempted:	12
Section Marks:	20

Sub-Section Number:	1
Sub-Section Id:	586180138
Question Shuffling Allowed :	Yes

Question Number : 141 Question Id : 5861802155 Question Type : MCQ Option Shuffling : Yes
Correct Marks : 1 Wrong Marks : 0.25

Select the most appropriate synonym of the underlined word.

A minor accident on the sports ground became fatal to the player who was hit by a cork ball.

Options :

1. ✖ futile

- 2. ✖ conclusive
- 3. ✖ latest
- 4. ✔ disastrous

Question Number : 141 Question Id : 5861802155 Question Type : MCQ Option Shuffling : Yes
Correct Marks : 1 Wrong Marks : 0.25

Select the most appropriate synonym of the underlined word.

A minor accident on the sports ground became fatal to the player who was hit by a cork ball.

Options :

- 1. ✖ futile
- 2. ✖ conclusive
- 3. ✖ latest
- 4. ✔ disastrous

Question Number : 142 Question Id : 5861802156 Question Type : MCQ Option Shuffling : Yes
Correct Marks : 1 Wrong Marks : 0.25

Match the following words with their respective synonyms.

Column A	Column B
(a) Blight	(i) dangerous
(b) Indolence	(ii) profuse
(c) Hazardous	(iii) blot
(d) Prolific	(iv) laziness

Options :

- 1. ✖ a-iii, b-i, c-ii, d-iv
- 2. ✔ a-iii, b-iv, c-i, d-ii

3. ✖ a-iv, b-ii, c-i, d-iii

4. ✖ a-iv, b-iii, c-ii, d-i

Question Number : 142 Question Id : 5861802156 Question Type : MCQ Option Shuffling : Yes
Correct Marks : 1 Wrong Marks : 0.25

Match the following words with their respective synonyms.

Column A	Column B
(a) Blight	(i) dangerous
(b) Indolence	(ii) profuse
(c) Hazardous	(iii) blot
(d) Prolific	(iv) laziness

Options :

1. ✖ a-iii, b-i, c-ii, d-iv

2. ✔ a-iii, b-iv, c-i, d-ii

3. ✖ a-iv, b-ii, c-i, d-iii

4. ✖ a-iv, b-iii, c-ii, d-i

Question Number : 143 Question Id : 5861802157 Question Type : MCQ Option Shuffling : Yes
Correct Marks : 1 Wrong Marks : 0.25

Select the most appropriate synonym of the underlined word.

The old man spoke in a raspy voice.

Options :

1. ✖ grave
2. ✔ gravelly
3. ✖ serious
4. ✖ grim

Question Number : 143 Question Id : 5861802157 Question Type : MCQ Option Shuffling : Yes
Correct Marks : 1 Wrong Marks : 0.25

Select the most appropriate synonym of the underlined word.

The old man spoke in a raspy voice.

Options :

1. ✖ grave
2. ✔ gravelly
3. ✖ serious
4. ✖ grim

Question Number : 144 Question Id : 5861802158 Question Type : MCQ Option Shuffling : Yes
Correct Marks : 1 Wrong Marks : 0.25

Select the option that can be used as a one-word substitute for the given group of words.

Someone who wishes to fight or argue

Options :

1. ✖ garrulous
2. ✖ taciturn
3. ✖ censure
4. ✔ belligerent

Question Number : 144 Question Id : 5861802158 Question Type : MCQ Option Shuffling : Yes
Correct Marks : 1 Wrong Marks : 0.25

Select the option that can be used as a one-word substitute for the given group of words.

Someone who wishes to fight or argue

Options :

1. ✖ garrulous
2. ✖ taciturn
3. ✖ censure
4. ✔ belligerent

Question Number : 145 Question Id : 5861802159 Question Type : MCQ Option Shuffling : Yes
Correct Marks : 1 Wrong Marks : 0.25

Select the most appropriate synonym of the given word.

MERCURIAL

Options :

1. ✖ arduous
2. ✔ capricious
3. ✖ onerous
4. ✖ wearisome

Question Number : 145 Question Id : 5861802159 Question Type : MCQ Option Shuffling : Yes
Correct Marks : 1 Wrong Marks : 0.25

Select the most appropriate synonym of the given word.

MERCURIAL

Options :

1. ✖ arduous

2. ✓ capricious

3. ✗ onerous

4. ✗ wearisome

Question Number : 146 Question Id : 5861802160 Question Type : MCQ Option Shuffling : Yes
Correct Marks : 1 Wrong Marks : 0.25

Select the most appropriate ANTONYM of the underlined word.

The sprightly girl was the only one left to be interviewed.

Options :

1. ✗ haughty

2. ✗ responsive

3. ✓ impassive

4. ✗ objective

Question Number : 146 Question Id : 5861802160 Question Type : MCQ Option Shuffling : Yes
Correct Marks : 1 Wrong Marks : 0.25

Select the most appropriate ANTONYM of the underlined word.

The sprightly girl was the only one left to be interviewed.

Options :

1. ✗ haughty

2. ✗ responsive

3. ✓ impassive

4. ✗ objective

Question Number : 147 Question Id : 5861802161 Question Type : MCQ Option Shuffling : Yes
Correct Marks : 1 Wrong Marks : 0.25

Select the most appropriate ANTONYM of the underlined word.

The patience of the audience began to whittle when the batsmen did not score a single run from the last two overs.

Options :

1. ✖ undermine
2. ✖ erode
3. ✔ increase
4. ✖ disregard

Question Number : 147 Question Id : 5861802161 Question Type : MCQ Option Shuffling : Yes

Correct Marks : 1 Wrong Marks : 0.25

Select the most appropriate ANTONYM of the underlined word.

The patience of the audience began to whittle when the batsmen did not score a single run from the last two overs.

Options :

1. ✖ undermine
2. ✖ erode
3. ✔ increase
4. ✖ disregard

Question Number : 148 Question Id : 5861802162 Question Type : MCQ Option Shuffling : Yes

Correct Marks : 1 Wrong Marks : 0.25

Select the most appropriate ANTONYM of the underlined word.

The major problem with the school auditorium is that there are no windows or backstage door, only one route of egress in case of emergency.

Options :

1. ✖ exit
2. ✖ outlet
3. ✖ inlet
4. ✔ entrance

Question Number : 148 Question Id : 5861802162 Question Type : MCQ Option Shuffling : Yes
Correct Marks : 1 Wrong Marks : 0.25

Select the most appropriate ANTONYM of the underlined word.

The major problem with the school auditorium is that there are no windows or backstage door, only one route of egress in case of emergency.

Options :

1. ✖ exit
2. ✖ outlet
3. ✖ inlet
4. ✔ entrance

Question Number : 149 Question Id : 5861802163 Question Type : MCQ Option Shuffling : Yes
Correct Marks : 1 Wrong Marks : 0.25

Select the most appropriate ANTONYM of the underlined word.

My boss was not too impressed with my display of perspicacity.

Options :

1. ✓ obtuseness
2. ✗ perceptivity
3. ✗ sensitiveness
4. ✗ discernment

Question Number : 149 Question Id : 5861802163 Question Type : MCQ Option Shuffling : Yes

Correct Marks : 1 Wrong Marks : 0.25

Select the most appropriate ANTONYM of the underlined word.

My boss was not too impressed with my display of perspicacity.

Options :

1. ✓ obtuseness
2. ✗ perceptivity
3. ✗ sensitiveness
4. ✗ discernment

Question Number : 150 Question Id : 5861802164 Question Type : MCQ Option Shuffling : Yes

Correct Marks : 1 Wrong Marks : 0.25

Select the most appropriate ANTONYM of the underlined word.

The students were unable to proceed with their project work as they found their teacher’s instructions too nebulous.

Options :

- 1. ✖ amorphous
- 2. ✖ inchoate
- 3. ✔ definite
- 4. ✖ nascent

Question Number : 150 Question Id : 5861802164 Question Type : MCQ Option Shuffling : Yes
Correct Marks : 1 Wrong Marks : 0.25

Select the most appropriate ANTONYM of the underlined word.

The students were unable to proceed with their project work as they found their teacher’s instructions too nebulous.

Options :

- 1. ✖ amorphous
- 2. ✖ inchoate
- 3. ✔ definite
- 4. ✖ nascent

Sub-Section Number:	2
Sub-Section Id:	586180139
Question Shuffling Allowed :	Yes

Question Label : Comprehension



Read the given passage and answer the questions that follow.

What is instinct? If we were to believe the latest fashions in psychology we should reject it as a name for a non-existent thing; but when we find that those who have thrown instinct out of the door are dragging it back through the window as “unlearned response”, we may be content to retain the old bottles for the old wine, and call with the plain name of instinct our inherited tendencies to walk and run, to eat and play, to fight or seek escape, to woo and wed, and love our children when they come.

These are useful economies of behavior, developed to meet, without the delays of deliberation, recurrent exigencies in the career of the race. But they adapt us only to these ancient and stereotyped situations; they were built up against the needs and background of our animal and hunting life; and though they serve us well when there is no time for thought, they adapt us rather to yesterday than to today. By instinct “we fear not the carriers of malaria and yellow fever, but thunder and the dark; we pity not the gifted debarred from education, but the beggar’s bloody sore; we are less excited by a great injustice than by a little blood; we suffer more from such scorn as untipped waiters show than from our own idleness, ignorance and folly”. Instinct sufficed, perhaps, for the primitive life of the chase; it is to this, and not to tillage, that our natural impulses fit us, and for this that we long in our periodical and youthful desire to “return to nature”. But ever since civilization began, instinct has been inadequate and life has called for reason.

Sub questions

Question Number : 151 Question Id : 5861802166 Question Type : MCQ Option Shuffling : Yes
Correct Marks : 1 Wrong Marks : 0.25

As per the passage ‘unlearned response’ is:

Options :

1. ✖ a scientific term for our premeditated responses at the time of crisis
2. ✖ a psychological term for our systematic reaction to philosophical questions
3. ✔ a scientific term for our natural instincts
4. ✖ an academic term used to describe biographical facts

Question Number : 152 Question Id : 5861802167 Question Type : MCQ Option Shuffling : Yes
Correct Marks : 1 Wrong Marks : 0.25

In the passage, the author concludes that:

Options :

1. ✖ we need to have our natural instincts to survive in modern civilisation.
2. ✔ natural instincts are more appropriate for our primitive life but do not help in modern civilised world.
3. ✖ developed conditioned responses are the same as unlearned responses of today.
4. ✖ without our natural instincts we will not be able to react to our everyday problems.

Question Number : 153 Question Id : 5861802168 Question Type : MCQ Option Shuffling : Yes
Correct Marks : 1 Wrong Marks : 0.25

What does the following sentence mean?

‘We are less excited by a great injustice than by a little blood’

Options :

1. ✓ By instinct, we tend to react more to personal issues than other general issues.
2. ✖ We get upset seeing blood but more upset seeing injustice around us.
3. ✖ We get excited seeing someone commit a crime.
4. ✖ Our instincts trigger our anger when we see injustice happening in front of our eyes

Question Number : 154 Question Id : 5861802169 Question Type : MCQ Option Shuffling : Yes
Correct Marks : 1 Wrong Marks : 0.25

What is an instinct according to the author?

Options :

1. ✖ It is a deliberate behavior at times of emergency
2. ✖ It is a natural behavior formed as a reaction when we see injustice happening around us
3. ✖ It is the most common behavior found in mankind against uncommon criminal elements
4. ✓ Instinct is a spontaneous behavior at times of crisis

Question Number : 155 Question Id : 5861802170 Question Type : MCQ Option Shuffling : Yes
Correct Marks : 1 Wrong Marks : 0.25

What is important to a civilised world?

Options :

1. ✖ Good instincts
2. ✓ Good reasoning skills
3. ✖ Good hunting skills
4. ✖ Good financial skills

Question Id : 5861802165 Question Type : COMPREHENSION Sub Question Shuffling Allowed : Yes Group Comprehension Questions : No
Question Numbers : (151 to 155)

Question Label : Comprehension

Read the given passage and answer the questions that follow.

What is instinct? If we were to believe the latest fashions in psychology we should reject it as a name for a non-existent thing; but when we find that those who have thrown instinct out of the door are dragging it back through the window as “unlearned response”, we may be content to retain the old bottles for the old wine, and call with the plain name of instinct our inherited tendencies to walk and run, to eat and play, to fight or seek escape, to woo and wed, and love our children when they come.

These are useful economies of behavior, developed to meet, without the delays of deliberation, recurrent exigencies in the career of the race. But they adapt us only to these ancient and stereotyped situations; they were built up against the needs and background of our animal and hunting life; and though they serve us well when there is no time for thought, they adapt us rather to yesterday than to today. By instinct “we fear not the carriers of malaria and yellow fever, but thunder and the dark; we pity not the gifted debarred from education, but the beggar’s bloody sore; we are less excited by a great injustice than by a little blood; we suffer more from such scorn as untipped waiters show than from our own idleness, ignorance and folly”. Instinct sufficed, perhaps, for the primitive life of the chase; it is to this, and not to tillage, that our natural impulses fit us, and for this that we long in our periodical and youthful desire to “return to nature”. But ever since civilization began, instinct has been inadequate and life has called for reason.

Sub questions

Question Number : 151 Question Id : 5861802166 Question Type : MCQ Option Shuffling : Yes
Correct Marks : 1 Wrong Marks : 0.25

As per the passage 'unlearned response' is:

Options :

1. ✖ a scientific term for our premeditated responses at the time of crisis
2. ✖ a psychological term for our systematic reaction to philosophical questions
3. ✔ a scientific term for our natural instincts
4. ✖ an academic term used to describe biographical facts

Question Number : 152 Question Id : 5861802167 Question Type : MCQ Option Shuffling : Yes
Correct Marks : 1 Wrong Marks : 0.25

In the passage, the author concludes that:

Options :

1. ✖ we need to have our natural instincts to survive in modern civilisation.
2. ✔ natural instincts are more appropriate for our primitive life but do not help in modern civilised world.
3. ✖ developed conditioned responses are the same as unlearned responses of today.
4. ✖ without our natural instincts we will not be able to react to our everyday problems.

Question Number : 153 Question Id : 5861802168 Question Type : MCQ Option Shuffling : Yes
Correct Marks : 1 Wrong Marks : 0.25

What does the following sentence mean?

‘We are less excited by a great injustice than by a little blood’

Options :

1. ✓ By instinct, we tend to react more to personal issues than other general issues.
2. ✗ We get upset seeing blood but more upset seeing injustice around us.
3. ✗ We get excited seeing someone commit a crime.
4. ✗ Our instincts trigger our anger when we see injustice happening in front of our eyes

Question Number : 154 Question Id : 5861802169 Question Type : MCQ Option Shuffling : Yes
Correct Marks : 1 Wrong Marks : 0.25

What is an instinct according to the author?

Options :

1. ✗ It is a deliberate behavior at times of emergency
2. ✗ It is a natural behavior formed as a reaction when we see injustice happening around us
3. ✗ It is the most common behavior found in mankind against uncommon criminal elements
4. ✓ Instinct is a spontaneous behavior at times of crisis

Question Number : 155 Question Id : 5861802170 Question Type : MCQ Option Shuffling : Yes
Correct Marks : 1 Wrong Marks : 0.25

What is important to a civilised world?

Options :

1. ✖ Good instincts
2. ✔ Good reasoning skills
3. ✖ Good hunting skills
4. ✖ Good financial skills

Sub-Section Number: 3
Sub-Section Id: 586180140
Question Shuffling Allowed : Yes

Question Id : 5861802171 Question Type : COMPREHENSION Sub Question Shuffling Allowed : Yes Group Comprehension Questions : No

Question Numbers : (156 to 160)

Question Label : Comprehension



Read the given passage and answer the questions that follow.

In the later part of the 1990s the Universal Serial Bus (USB) was invented as a system of exchanging data from one storage place to another at a relatively fast speed. Today, about 10 billion USB devices are in use, a figure that even stuns its inventor Ajay Bhatt from Intel. USB has become a common name everywhere, from schools and offices to hospitals.

Ajay Bhatt was annoyed by the different types of connections that a PC had and looked for a simpler way of linking different parts of a computer. He tried to set up a uniform connection system for all PC parts and other devices.

Although it was difficult for Bhatt to convince computer makers that he had a good idea, he finally got the approval to change a computer's extension system completely.

USB has many advantages. For one, a single port can control up to 128 devices at once. They are powered by themselves and you do not have to switch off a device to make USB work. A USB object installs itself. Just plug it in and the computer automatically downloads the software you need to make it work.

When the first USB devices hit the markets in the late 1990s they were an immediate success. Today's USB 3.0 standard is over 400 times faster than its original USB 1. Today's PCs and laptops have at least 3-4 USB ports. USB connectors can be found everywhere, on printers, digital cameras, mobile phones and tablets.

Sub questions

Question Number : 156 Question Id : 5861802172 Question Type : MCQ Option Shuffling : Yes
Correct Marks : 1 Wrong Marks : 0.25

According to the passage what is the main use of USB?

Options :

1. ✖ To increase the processing speed of the computer
2. ✖ To convert word files to another format
3. ✔ To transfer data from one device to another
4. ✖ To act as a power source for computer

Question Number : 157 Question Id : 5861802173 Question Type : MCQ Option Shuffling : Yes
Correct Marks : 1 Wrong Marks : 0.25

What do the following group of words mean?

‘has become a common name everywhere’

Options :

1. ✖ Has become very cheap
2. ✖ Is used only for common purposes
3. ✖ Is preferred by common public, not by technical people
4. ✔ Has become familiar everywhere

Question Number : 158 Question Id : 5861802174 Question Type : MCQ Option Shuffling : Yes
Correct Marks : 1 Wrong Marks : 0.25

As per the passage which one of the following is NOT an advantage of USB?

Options :

1. ✖ It can control upto 128 devices at once
2. ✔ It needs a battery to function
3. ✖ It can power itself
4. ✖ It can install itself

Question Number : 159 Question Id : 5861802175 Question Type : MCQ Option Shuffling : Yes
Correct Marks : 1 Wrong Marks : 0.25

Based on the passage we can infer that:

Options :

1. ✓ Most of the electronic devices have USB connectors to transfer data
2. ✖ USB is the safest way to transfer data from one device to another
3. ✖ We cannot have more than one USB port in a computer
4. ✖ The transfer speed of the latest USB is slightly higher than the earliest USB.

Question Number : 160 Question Id : 5861802176 Question Type : MCQ Option Shuffling : Yes

Correct Marks : 1 Wrong Marks : 0.25

What was the level of impact of the invention of USB in the commercial world?

Options :

1. ✖ Very moderate in reality
2. ✖ Not as high as it should have been
3. ✓ Very high in the industry
4. ✖ Considerably low compared to the expectations of the market

Question Id : 5861802171 Question Type : COMPREHENSION Sub Question Shuffling Allowed : Yes Group Comprehension Questions : No

Question Numbers : (156 to 160)

Question Label : Comprehension

Read the given passage and answer the questions that follow.

In the later part of the 1990s the Universal Serial Bus (USB) was invented as a system of exchanging data from one storage place to another at a relatively fast speed. Today, about 10 billion USB devices are in use, a figure that even stuns its inventor Ajay Bhatt from Intel. USB has become a common name everywhere, from schools and offices to hospitals.

Ajay Bhatt was annoyed by the different types of connections that a PC had and looked for a simpler way of linking different parts of a computer. He tried to set up a uniform connection system for all PC parts and other devices. Although it was difficult for Bhatt to convince computer makers that he had a good idea, he finally got the approval to change a computer's extension system completely.

USB has many advantages. For one, a single port can control up to 128 devices at once. They are powered by themselves and you do not have to switch off a device to make USB work. A USB object installs itself. Just plug it in and the computer automatically downloads the software you need to make it work.

When the first USB devices hit the markets in the late 1990s they were an immediate success. Today's USB 3.0 standard is over 400 times faster than its original USB 1. Today's PCs and laptops have at least 3-4 USB ports. USB connectors can be found everywhere, on printers, digital cameras, mobile phones and tablets.

Sub questions

Question Number : 156 Question Id : 5861802172 Question Type : MCQ Option Shuffling : Yes
Correct Marks : 1 Wrong Marks : 0.25

According to the passage what is the main use of USB?

Options :

1. ✖ To increase the processing speed of the computer
2. ✖ To convert word files to another format
3. ✔ To transfer data from one device to another
4. ✖ To act as a power source for computer

Question Number : 157 Question Id : 5861802173 Question Type : MCQ Option Shuffling : Yes
Correct Marks : 1 Wrong Marks : 0.25

What do the following group of words mean?

‘has become a common name everywhere’

Options :

1. ✖ Has become very cheap
2. ✖ Is used only for common purposes
3. ✖ Is preferred by common public, not by technical people
4. ✔ Has become familiar everywhere

Question Number : 158 Question Id : 5861802174 Question Type : MCQ Option Shuffling : Yes
Correct Marks : 1 Wrong Marks : 0.25

As per the passage which one of the following is NOT an advantage of USB?

Options :

1. ✖ It can control upto 128 devices at once
2. ✔ It needs a battery to function

3. ✖ It can power itself
4. ✖ It can install itself

Question Number : 159 Question Id : 5861802175 Question Type : MCQ Option Shuffling : Yes
Correct Marks : 1 Wrong Marks : 0.25

Based on the passage we can infer that:

Options :

1. ✔ Most of the electronic devices have USB connectors to transfer data
2. ✖ USB is the safest way to transfer data from one device to another
3. ✖ We cannot have more than one USB port in a computer
4. ✖ The transfer speed of the latest USB is slightly higher than the earliest USB.

Question Number : 160 Question Id : 5861802176 Question Type : MCQ Option Shuffling : Yes
Correct Marks : 1 Wrong Marks : 0.25

What was the level of impact of the invention of USB in the commercial world?

Options :

1. ✖ Very moderate in reality
2. ✖ Not as high as it should have been
3. ✔ Very high in the industry
4. ✖ Considerably low compared to the expectations of the market

General Hindi1

Group Number :	9
Group Id :	586180100
Group Maximum Duration :	0
Group Minimum Duration :	0
Show Attended Group? :	No
Edit Attended Group? :	No
Break time:	0
Group Marks:	20
Is this Group for Examiner?:	No
Revisit allowed for group Instructions? :	Yes
Maximum Instruction Time:	0
Minimum Instruction Time:	0

General Hindi1

Section Id :	586180104
Section Number :	1
Section type :	Online
Mandatory or Optional:	Mandatory
Number of Questions:	20
Number of Questions to be attempted:	20
Section Marks:	20

Sub-Section Number:	1
Sub-Section Id:	586180141
Question Shuffling Allowed :	Yes

Question Number : 161 Question Id : 5861802177 Question Type : MCQ Option Shuffling : Yes
Correct Marks : 1 Wrong Marks : 0.25

‘चिड़िया’ कैसा शब्द है?

Options :

- ✖ तद्भव
- ✖ तत्सम
- ✓ देशज
- ✖ विदेशी

Question Number : 161 Question Id : 5861802177 Question Type : MCQ Option Shuffling : Yes
Correct Marks : 1 Wrong Marks : 0.25

‘चिड़िया’ कैसा शब्द है?

Options :

- ✖ तद्भव

2. ✖ तत्सम

3. ✔ देशज

4. ✖ विदेशी

Question Number : 162 Question Id : 5861802178 Question Type : MCQ Option Shuffling : Yes
Correct Marks : 1 Wrong Marks : 0.25

निम्न में से कौन सा शब्द तद्भव है?

Options :

1. ✖ एकल

2. ✔ अमोल

3. ✖ अंधकार

4. ✖ आषाढ़

Question Number : 162 Question Id : 5861802178 Question Type : MCQ Option Shuffling : Yes
Correct Marks : 1 Wrong Marks : 0.25

निम्न में से कौन सा शब्द तद्भव है?

Options :

1. ✖ एकल

2. ✔ अमोल

3. ✖ अंधकार

4. ✖ आषाढ़

Question Number : 163 Question Id : 5861802179 Question Type : MCQ Option Shuffling : Yes
Correct Marks : 1 Wrong Marks : 0.25

निम्न में से कौन सा शब्द तत्सम है?

Options :

1. ✔ चूर्ण

2. ✖ चोंच

3. ✖ चौक

4. ✖ चौखट

Question Number : 163 Question Id : 5861802179 Question Type : MCQ Option Shuffling : Yes

Correct Marks : 1 Wrong Marks : 0.25

निम्न में से कौन सा शब्द तत्सम है?

Options :

1. ✓ चूर्ण
2. ✗ चोंच
3. ✗ चौक
4. ✗ चौखट

Question Number : 164 Question Id : 5861802180 Question Type : MCQ Option Shuffling : Yes

Correct Marks : 1 Wrong Marks : 0.25

निम्न में से शुद्ध वर्तनी वाला शब्द है?

Options :

1. ✗ प्रतीकुल
2. ✗ प्रतीकूल
3. ✗ प्रतिकुल
4. ✓ प्रतिकूल

Question Number : 164 Question Id : 5861802180 Question Type : MCQ Option Shuffling : Yes

Correct Marks : 1 Wrong Marks : 0.25

निम्न में से शुद्ध वर्तनी वाला शब्द है?

Options :

1. ✗ प्रतीकुल
2. ✗ प्रतीकूल
3. ✗ प्रतिकुल
4. ✓ प्रतिकूल

Question Number : 165 Question Id : 5861802181 Question Type : MCQ Option Shuffling : Yes

Correct Marks : 1 Wrong Marks : 0.25

‘चिर – चीर’ शब्द युग्म का सही अर्थ है:

Options :

1. ✗ कपड़ा – पुराना

2. ✓ पुराना – कपड़ा

3. ✗ नवीन – कपड़ा

4. ✗ पुराना – लकड़ी

Question Number : 165 Question Id : 5861802181 Question Type : MCQ Option Shuffling : Yes

Correct Marks : 1 Wrong Marks : 0.25

‘चिर - चीर’ शब्द युग्म का सही अर्थ है:

Options :

1. ✗ कपड़ा - पुराना

2. ✓ पुराना - कपड़ा

3. ✗ नवीन - कपड़ा

4. ✗ पुराना - लकड़ी

Question Number : 166 Question Id : 5861802182 Question Type : MCQ Option Shuffling : Yes

Correct Marks : 1 Wrong Marks : 0.25

‘दान’ किस प्रकार की संज्ञा है?

Options :

1. ✗ व्यक्तिवाचक

2. ✗ जातिवाचक

3. ✓ भाववाचक

4. ✗ पदार्थवाचक

Question Number : 166 Question Id : 5861802182 Question Type : MCQ Option Shuffling : Yes

Correct Marks : 1 Wrong Marks : 0.25

‘दान’ किस प्रकार की संज्ञा है?

Options :

1. ✗ व्यक्तिवाचक

2. ✗ जातिवाचक

3. ✓ भाववाचक

4. ✗ पदार्थवाचक

Question Number : 167 Question Id : 5861802183 Question Type : MCQ Option Shuffling : Yes
Correct Marks : 1 Wrong Marks : 0.25

‘इतना’ किस सर्वनाम का परिमाणवाचक विशेषण है?

Options :

1. ✓ यह
2. ✗ वह
3. ✗ जो
4. ✗ सो

Question Number : 167 Question Id : 5861802183 Question Type : MCQ Option Shuffling : Yes
Correct Marks : 1 Wrong Marks : 0.25

‘इतना’ किस सर्वनाम का परिमाणवाचक विशेषण है?

Options :

1. ✓ यह
2. ✗ वह
3. ✗ जो
4. ✗ सो

Question Number : 168 Question Id : 5861802184 Question Type : MCQ Option Shuffling : Yes
Correct Marks : 1 Wrong Marks : 0.25

‘सारा देश’ में ‘सारा’ किस प्रकार का विशेषण है?

Options :

1. ✗ निश्चित संख्यावाचक
2. ✗ अनिश्चित संख्यावाचक
3. ✗ गुणवाचक
4. ✓ परिमाण बोधक

Question Number : 168 Question Id : 5861802184 Question Type : MCQ Option Shuffling : Yes
Correct Marks : 1 Wrong Marks : 0.25

‘सारा देश’ में ‘सारा’ किस प्रकार का विशेषण है?

Options :

1. ✗ निश्चित संख्यावाचक

2. ✖ अनिश्चित संख्यावाचक
3. ✖ गुणवाचक
4. ✔ परिमाण बोधक

Question Number : 169 Question Id : 5861802185 Question Type : MCQ Option Shuffling : Yes
Correct Marks : 1 Wrong Marks : 0.25

निम्न में सकर्मक धातु है:

Options :

1. ✖ कटना
2. ✖ पिसना
3. ✖ दबना
4. ✔ लूटना

Question Number : 169 Question Id : 5861802185 Question Type : MCQ Option Shuffling : Yes
Correct Marks : 1 Wrong Marks : 0.25

निम्न में सकर्मक धातु है:

Options :

1. ✖ कटना
2. ✖ पिसना
3. ✖ दबना
4. ✔ लूटना

Question Number : 170 Question Id : 5861802186 Question Type : MCQ Option Shuffling : Yes
Correct Marks : 1 Wrong Marks : 0.25

‘वह दौड़कर चलता है’ वाक्य में क्रिया विशेषण है:

Options :

1. ✖ वह
2. ✔ दौड़कर
3. ✖ चलता
4. ✖ है

Question Number : 170 Question Id : 5861802186 Question Type : MCQ Option Shuffling : Yes

Correct Marks : 1 Wrong Marks : 0.25

‘वह दौड़कर चलता है’ वाक्य में क्रिया विशेषण है:

Options :

1. ✖ वह
2. ✔ दौड़कर
3. ✖ चलता
4. ✖ है

Question Number : 171 Question Id : 5861802187 Question Type : MCQ Option Shuffling : Yes

Correct Marks : 1 Wrong Marks : 0.25

‘गायन’ का संधि विच्छेद होगा:

Options :

1. ✖ गा + अन
2. ✖ गे + अन
3. ✔ गै + अन
4. ✖ गौ + अन

Question Number : 171 Question Id : 5861802187 Question Type : MCQ Option Shuffling : Yes

Correct Marks : 1 Wrong Marks : 0.25

‘गायन’ का संधि विच्छेद होगा:

Options :

1. ✖ गा + अन
2. ✖ गे + अन
3. ✔ गै + अन
4. ✖ गौ + अन

Question Number : 172 Question Id : 5861802188 Question Type : MCQ Option Shuffling : Yes

Correct Marks : 1 Wrong Marks : 0.25

‘चन्द्रमौलि’ में कौन सा समास है?

Options :

1. ✔ बहुब्रीहि

2. ✖ तत्पुरुष
3. ✖ अव्ययीभाव
4. ✖ द्वंद्व

Question Number : 172 Question Id : 5861802188 Question Type : MCQ Option Shuffling : Yes
Correct Marks : 1 Wrong Marks : 0.25

‘चन्द्रमौलि’ में कौन सा समास है?

Options :

1. ✔ बहुब्रीहि
2. ✖ तत्पुरुष
3. ✖ अव्ययीभाव
4. ✖ द्वंद्व

Question Number : 173 Question Id : 5861802189 Question Type : MCQ Option Shuffling : Yes
Correct Marks : 1 Wrong Marks : 0.25

‘अंतर्दशा’ में किस उपसर्ग का प्रयोग हुआ है?

Options :

1. ✖ अ
2. ✖ अंत
3. ✔ अन्तर्
4. ✖ दशा

Question Number : 173 Question Id : 5861802189 Question Type : MCQ Option Shuffling : Yes
Correct Marks : 1 Wrong Marks : 0.25

‘अंतर्दशा’ में किस उपसर्ग का प्रयोग हुआ है?

Options :

1. ✖ अ
2. ✖ अंत
3. ✔ अन्तर्
4. ✖ दशा

Question Number : 174 Question Id : 5861802190 Question Type : MCQ Option Shuffling : Yes
Correct Marks : 1 Wrong Marks : 0.25

‘पाश्चात्य’ में किस प्रत्यय का प्रयोग हुआ है?

Options :

1. ✖ अय
2. ✔ त्य
3. ✖ चात्य
4. ✖ पा

Question Number : 174 Question Id : 5861802190 Question Type : MCQ Option Shuffling : Yes
Correct Marks : 1 Wrong Marks : 0.25

‘पाश्चात्य’ में किस प्रत्यय का प्रयोग हुआ है?

Options :

1. ✖ अय
2. ✔ त्य
3. ✖ चात्य
4. ✖ पा

Question Number : 175 Question Id : 5861802191 Question Type : MCQ Option Shuffling : Yes
Correct Marks : 1 Wrong Marks : 0.25

निम्न में कौन सा शब्द स्त्रीलिंग नहीं है?

Options :

1. ✖ नहर
2. ✖ नकल
3. ✖ नजर
4. ✔ नमक

Question Number : 175 Question Id : 5861802191 Question Type : MCQ Option Shuffling : Yes
Correct Marks : 1 Wrong Marks : 0.25

निम्न में कौन सा शब्द स्त्रीलिंग नहीं है?

Options :

1. ✖ नहर

2. ✖ नकल
3. ✖ नजर
4. ✔ नमक

Question Number : 176 Question Id : 5861802192 Question Type : MCQ Option Shuffling : Yes
Correct Marks : 1 Wrong Marks : 0.25

‘फूल से भी प्यारा’ किस पदबन्ध का उदाहरण है?

Options :

1. ✔ विशेषण पदबन्ध
2. ✖ संज्ञा पदबन्ध
3. ✖ सर्वनाम पदबन्ध
4. ✖ क्रिया पदबन्ध

Question Number : 176 Question Id : 5861802192 Question Type : MCQ Option Shuffling : Yes
Correct Marks : 1 Wrong Marks : 0.25

‘फूल से भी प्यारा’ किस पदबन्ध का उदाहरण है?

Options :

1. ✔ विशेषण पदबन्ध
2. ✖ संज्ञा पदबन्ध
3. ✖ सर्वनाम पदबन्ध
4. ✖ क्रिया पदबन्ध

Question Number : 177 Question Id : 5861802193 Question Type : MCQ Option Shuffling : Yes
Correct Marks : 1 Wrong Marks : 0.25

‘मानव ने कहा कि मैं पढ़ूँगा’ वाक्य में ‘मैं पढ़ूँगा’ किस प्रकार का उपवाक्य है?

Options :

1. ✔ संज्ञा उपवाक्य
2. ✖ विशेषण उपवाक्य
3. ✖ क्रिया उपवाक्य
4. ✖ क्रिया विशेषण उपवाक्य

Question Number : 177 Question Id : 5861802193 Question Type : MCQ Option Shuffling : Yes

Correct Marks : 1 Wrong Marks : 0.25

‘मानव ने कहा कि मैं पढ़ूँगा।’ वाक्य में ‘मैं पढ़ूँगा’ किस प्रकार का उपवाक्य है?

Options :

1. ✓ संज्ञा उपवाक्य
2. ✗ विशेषण उपवाक्य
3. ✗ क्रिया उपवाक्य
4. ✗ क्रिया विशेषण उपवाक्य

Question Number : 178 Question Id : 5861802194 Question Type : MCQ Option Shuffling : Yes

Correct Marks : 1 Wrong Marks : 0.25

‘बादल गरजता है।’ किस प्रकार का वाक्य है?

Options :

1. ✗ उपवाक्य
2. ✓ सरल वाक्य
3. ✗ मिश्र वाक्य
4. ✗ संयुक्त वाक्य

Question Number : 178 Question Id : 5861802194 Question Type : MCQ Option Shuffling : Yes

Correct Marks : 1 Wrong Marks : 0.25

‘बादल गरजता है।’ किस प्रकार का वाक्य है?

Options :

1. ✗ उपवाक्य
2. ✓ सरल वाक्य
3. ✗ मिश्र वाक्य
4. ✗ संयुक्त वाक्य

Question Number : 179 Question Id : 5861802195 Question Type : MCQ Option Shuffling : Yes

Correct Marks : 1 Wrong Marks : 0.25

पदक्रम की दृष्टि से कौन सा वाक्य शुद्ध है?

Options :

1. ✖ दया करें मुझ पर, हे प्रभु।
2. ✖ मुझ पर दया करें, हे प्रभु।
3. ✖ हे प्रभु, दया करें मुझ पर।
4. ✔ हे प्रभु, मुझ पर दया करें।

Question Number : 179 Question Id : 5861802195 Question Type : MCQ Option Shuffling : Yes
Correct Marks : 1 Wrong Marks : 0.25

पदक्रम की दृष्टि से कौन सा वाक्य शुद्ध है?

Options :

1. ✖ दया करें मुझ पर, हे प्रभु।
2. ✖ मुझ पर दया करें, हे प्रभु।
3. ✖ हे प्रभु, दया करें मुझ पर।
4. ✔ हे प्रभु, मुझ पर दया करें।

Question Number : 180 Question Id : 5861802196 Question Type : MCQ Option Shuffling : Yes
Correct Marks : 1 Wrong Marks : 0.25

अन्वय की दृष्टि से कौन सा वाक्य शुद्ध है?

Options :

1. ✖ शिल्पा ने पुस्तक पढ़े।
2. ✖ शिल्पा ने पुस्तक पढ़ो।
3. ✔ शिल्पा ने पुस्तक पढ़ी।
4. ✖ शिल्पा ने पुस्तक पढ़ा।

Question Number : 180 Question Id : 5861802196 Question Type : MCQ Option Shuffling : Yes
Correct Marks : 1 Wrong Marks : 0.25

अन्वय की दृष्टि से कौन सा वाक्य शुद्ध है?

Options :

1. ✖ शिल्पा ने पुस्तक पढ़े।
2. ✖ शिल्पा ने पुस्तक पढ़ो।
3. ✔ शिल्पा ने पुस्तक पढ़ी।

4. ✖ शिल्पा ने पुस्तक पढ़ा।

General Hindi2

Group Number :	10
Group Id :	586180101
Group Maximum Duration :	0
Group Minimum Duration :	120
Show Attended Group? :	No
Edit Attended Group? :	No
Break time:	0
Group Marks:	20
Is this Group for Examiner?:	No
Revisit allowed for group Instructions? :	Yes
Maximum Instruction Time:	0
Minimum Instruction Time:	0

General Hindi2

Section Id :	586180105
Section Number :	1
Section type :	Online
Mandatory or Optional:	Mandatory
Number of Questions:	12
Number of Questions to be attempted:	12
Section Marks:	20

Sub-Section Number:	1
Sub-Section Id:	586180142
Question Shuffling Allowed :	Yes

Question Number : 181 Question Id : 5861802197 Question Type : MCQ Option Shuffling : Yes
Correct Marks : 1 Wrong Marks : 0.25

‘पर्वत’ का पर्यायवाची है?

Options :

- 1. ✖ भू
- 2. ✔ भूधर
- 3. ✖ धरा
- 4. ✖ वसुधा

Question Number : 181 Question Id : 5861802197 Question Type : MCQ Option Shuffling : Yes
Correct Marks : 1 Wrong Marks : 0.25

‘पर्वत’ का पर्यायवाची है?

Options :

1. ✖ भू
2. ✔ भूधर
3. ✖ धरा
4. ✖ वसुधा

Question Number : 182 Question Id : 5861802198 Question Type : MCQ Option Shuffling : Yes
Correct Marks : 1 Wrong Marks : 0.25

‘सिंह’ का पर्यायवाची नहीं है:

Options :

1. ✔ चतुरानन
2. ✖ पंचमुख
3. ✖ महावीर
4. ✖ केशी

Question Number : 182 Question Id : 5861802198 Question Type : MCQ Option Shuffling : Yes
Correct Marks : 1 Wrong Marks : 0.25

‘सिंह’ का पर्यायवाची नहीं है:

Options :

1. ✔ चतुरानन
2. ✖ पंचमुख
3. ✖ महावीर
4. ✖ केशी

Question Number : 183 Question Id : 5861802199 Question Type : MCQ Option Shuffling : Yes
Correct Marks : 1 Wrong Marks : 0.25

‘सारंग’ किसका पर्यायवाची है?

Options :

1. ✖ घोड़ा
2. ✖ सूर्य

3. ✓ चन्द्र

4. ✗ पक्षी

Question Number : 183 Question Id : 5861802199 Question Type : MCQ Option Shuffling : Yes
Correct Marks : 1 Wrong Marks : 0.25

‘सारंग’ किसका पर्यायवाची है?

Options :

1. ✗ घोड़ा

2. ✗ सूर्य

3. ✓ चन्द्र

4. ✗ पक्षी

Question Number : 184 Question Id : 5861802200 Question Type : MCQ Option Shuffling : Yes
Correct Marks : 1 Wrong Marks : 0.25

‘अर्चि’ किसका पर्यायवाची है?

Options :

1. ✗ बाण

2. ✗ आँख

3. ✗ स्वर्ण

4. ✓ किरण

Question Number : 184 Question Id : 5861802200 Question Type : MCQ Option Shuffling : Yes
Correct Marks : 1 Wrong Marks : 0.25

‘अर्चि’ किसका पर्यायवाची है?

Options :

1. ✗ बाण

2. ✗ आँख

3. ✗ स्वर्ण

4. ✓ किरण

Question Number : 185 Question Id : 5861802201 Question Type : MCQ Option Shuffling : Yes
Correct Marks : 1 Wrong Marks : 0.25

‘पतंग’ किसका पर्यायवाची नहीं है?

Options :

1. ✖ सूर्य
2. ✖ पक्षी
3. ✖ नौका
4. ✔ घोड़ा

Question Number : 185 Question Id : 5861802201 Question Type : MCQ Option Shuffling : Yes

Correct Marks : 1 Wrong Marks : 0.25

‘पतंग’ किसका पर्यायवाची नहीं है?

Options :

1. ✖ सूर्य
2. ✖ पक्षी
3. ✖ नौका
4. ✔ घोड़ा

Question Number : 186 Question Id : 5861802202 Question Type : MCQ Option Shuffling : Yes

Correct Marks : 1 Wrong Marks : 0.25

‘अंतरंग’ का विलोम शब्द है:

Options :

1. ✖ रंग
2. ✖ विरंग
3. ✔ बहिरंग
4. ✖ सुरंग

Question Number : 186 Question Id : 5861802202 Question Type : MCQ Option Shuffling : Yes

Correct Marks : 1 Wrong Marks : 0.25

‘अंतरंग’ का विलोम शब्द है:

Options :

1. ✖ रंग
2. ✖ विरंग

3. ✓ बहिरंग

4. ✗ सुरंग

Question Number : 187 Question Id : 5861802203 Question Type : MCQ Option Shuffling : Yes

Correct Marks : 1 Wrong Marks : 0.25

‘अभिज्ञ’ का विलोम होगा:

Options :

1. ✗ बहुज्ञ

2. ✓ अनभिज्ञ

3. ✗ विज्ञ

4. ✗ प्रज्ञ

Question Number : 187 Question Id : 5861802203 Question Type : MCQ Option Shuffling : Yes

Correct Marks : 1 Wrong Marks : 0.25

‘अभिज्ञ’ का विलोम होगा:

Options :

1. ✗ बहुज्ञ

2. ✓ अनभिज्ञ

3. ✗ विज्ञ

4. ✗ प्रज्ञ

Question Number : 188 Question Id : 5861802204 Question Type : MCQ Option Shuffling : Yes

Correct Marks : 1 Wrong Marks : 0.25

‘आंतर’ किसका विलोम है?

Options :

1. ✓ बाह्य

2. ✗ भौतिक

3. ✗ साम्य

4. ✗ प्रकारान्तर

Question Number : 188 Question Id : 5861802204 Question Type : MCQ Option Shuffling : Yes

Correct Marks : 1 Wrong Marks : 0.25

‘आंतर’ किसका विलोम है?

Options :

1. ✓ बाह्य
2. ✗ भौतिक
3. ✗ साम्य
4. ✗ प्रकारान्तर

Question Number : 189 Question Id : 5861802205 Question Type : MCQ Option Shuffling : Yes

Correct Marks : 1 Wrong Marks : 0.25

‘शिक्षक को छात्र उन्मुख अध्यापन करना चाहिए।’ पंक्ति के रेखांकित शब्द का विलोम होगा:

Options :

1. ✗ सम्मुख
2. ✗ आमुख
3. ✓ विमुख
4. ✗ प्रमुख

Question Number : 189 Question Id : 5861802205 Question Type : MCQ Option Shuffling : Yes

Correct Marks : 1 Wrong Marks : 0.25

‘शिक्षक को छात्र उन्मुख अध्यापन करना चाहिए।’ पंक्ति के रेखांकित शब्द का विलोम होगा:

Options :

1. ✗ सम्मुख
2. ✗ आमुख
3. ✓ विमुख
4. ✗ प्रमुख

Question Number : 190 Question Id : 5861802206 Question Type : MCQ Option Shuffling : Yes

Correct Marks : 1 Wrong Marks : 0.25

‘शूर’ का विलोम है:

Options :

1. ✖ वीर
2. ✖ शोक
3. ✖ विबोध
4. ✔ भीरू

Question Number : 190 Question Id : 5861802206 Question Type : MCQ Option Shuffling : Yes
Correct Marks : 1 Wrong Marks : 0.25

‘शूर’ का विलोम है:

Options :

1. ✖ वीर
2. ✖ शोक
3. ✖ विबोध
4. ✔ भीरू

Sub-Section Number: 2
Sub-Section Id: 586180143
Question Shuffling Allowed : Yes

Question Id : 5861802207 Question Type : COMPREHENSION Sub Question Shuffling Allowed : Yes Group Comprehension Questions : No
Question Numbers : (191 to 195)

Question Label : Comprehension

चे दिये गए गद्यांश को पढ़कर पूछे गये प्रश्नों के उत्तर दीजिए।
 भारतीय इतिहास और संस्कृति 'वसुधैव कुटुंबकम्' की संस्कृति रही है। भारतीय साहित्य और इतिहास को तमाम संस्कृतियों ने संक्रमित किया लेकिन फिर भी हमारी संस्कृति अनेकता में एकता को संजोये हुए आगे बढ़ी। हड़प्पा मोहन जोदड़ो से लेकर आज तक यह अक्षुण्ण बनी हुयी है तो इसका एकमात्र कारण हमारी संस्कृति की समन्वय भावना ही है। सभी संस्कृतियों को अपने में समाहित करते हुए हम आज भी आगे बढ़ रहे हैं। शक, यवन, हूण, मंगोल चंगेज और अंग्रेज तक इस भारतीय संस्कृति को गाहे-बेगाहे प्रभावित ही नहीं किये बल्कि इसे परिवर्तित करने का असफल प्रयत्न भी किये। प्रत्येक आक्रमण और युद्धों की विभीषिका को झेलते हुए हम आज भी अपनी सांस्कृतिक विरासत को बचाये ही नहीं है बल्कि आज हम विश्व की महाशक्ति बनने के करीब हैं।

Sub questions

Question Number : 191 Question Id : 5861802208 Question Type : MCQ Option Shuffling : Yes
 Correct Marks : 1 Wrong Marks : 0.25

भारतीय संस्कृति की विशेषता है:

Options :

1. ✖ एकता में अनेकता
2. ✔ अनेकता में एकता
3. ✖ एकता में एकता
4. ✖ अनेकता में अनेकता

Question Number : 192 Question Id : 5861802209 Question Type : MCQ Option Shuffling : Yes
 Correct Marks : 1 Wrong Marks : 0.25

‘अक्षुण्ण’ का अर्थ है:

Options :

1. ✔ अखंडित
2. ✖ महान
3. ✖ नवीन
4. ✖ आदर्श

Question Number : 193 Question Id : 5861802210 Question Type : MCQ Option Shuffling : Yes
 Correct Marks : 1 Wrong Marks : 0.25

‘समन्वय’ का आशय है:

Options :

1. ✖ आदर्श
2. ✖ त्याग
3. ✖ समता
4. ✔ मेल

Question Number : 194 Question Id : 5861802211 Question Type : MCQ Option Shuffling : Yes

Correct Marks : 1 Wrong Marks : 0.25

‘विभीषिका’ का अर्थ है:

Options :

1. ✖ हास
2. ✖ परिहास
3. ✔ त्रास
4. ✖ छल

Question Number : 195 Question Id : 5861802212 Question Type : MCQ Option Shuffling : Yes

Correct Marks : 1 Wrong Marks : 0.25

गद्यांश का उपयुक्त शीर्षक होगा:

Options :

1. ✖ भारतीय संस्कृति का समस्या
2. ✔ भारतीय संस्कृति की विशेषता
3. ✖ भारतीय संस्कृति में सुधार की आवश्यकता
4. ✖ भारतीय संस्कृति का पतन

Question Id : 5861802207 Question Type : COMPREHENSION Sub Question Shuffling Allowed : Yes Group Comprehension Questions : No

Question Numbers : (191 to 195)

Question Label : Comprehension

नीचे दिये गए गद्यांश को पढ़कर पूछे गये प्रश्नों के उत्तर दीजिए।
भारतीय इतिहास और संस्कृति 'वसुधैव कुटुंबकम्' की संस्कृति रही है।
भारतीय साहित्य और इतिहास को तमाम संस्कृतियों ने संक्रमित किया
लेकिन फिर भी हमारी संस्कृति अनेकता में एकता को संजोये हुए आगे
बढ़ी। हड़प्पा मोहन जोदड़ो से लेकर आज तक यह अक्षुण्ण बनी हुयी है
तो इसका एकमात्र कारण हमारी संस्कृति की समन्वय भावना ही है।
सभी संस्कृतियों को अपने में समाहित करते हुए हम आज भी आगे बढ़
रहे हैं। शक, यवन, हूण, मंगोल चंगेज और अंग्रेज तक इस भारतीय
संस्कृति को गाहे-बेगाहे प्रभावित ही नहीं किये बल्कि इसे परिवर्तित
करने का असफल प्रयत्न भी किये। प्रत्येक आक्रमण और युद्धों की
विभीषिका को झेलते हुए हम आज भी अपनी सांस्कृतिक विरासत को
बचाये ही नहीं है बल्कि आज हम विश्व की महाशक्ति बनने के करीब हैं
।

Sub questions

Question Number : 191 Question Id : 5861802208 Question Type : MCQ Option Shuffling : Yes

Correct Marks : 1 Wrong Marks : 0.25

भारतीय संस्कृति की विशेषता है:

Options :

1. ✖ एकता में अनेकता
2. ✔ अनेकता में एकता
3. ✖ एकता में एकता
4. ✖ अनेकता में अनेकता

Question Number : 192 Question Id : 5861802209 Question Type : MCQ Option Shuffling : Yes

Correct Marks : 1 Wrong Marks : 0.25

'अक्षुण्ण' का अर्थ है:

Options :

1. ✓ अखंडित
2. ✗ महान
3. ✗ नवीन
4. ✗ आदर्श

Question Number : 193 Question Id : 5861802210 Question Type : MCQ Option Shuffling : Yes
Correct Marks : 1 Wrong Marks : 0.25

‘समन्वय’ का आशय है:

Options :

1. ✗ आदर्श
2. ✗ त्याग
3. ✗ समता
4. ✓ मेल

Question Number : 194 Question Id : 5861802211 Question Type : MCQ Option Shuffling : Yes
Correct Marks : 1 Wrong Marks : 0.25

‘विभीषिका’ का अर्थ है:

Options :

1. ✗ हास
2. ✗ परिहास
3. ✓ त्रास
4. ✗ छल

Question Number : 195 Question Id : 5861802212 Question Type : MCQ Option Shuffling : Yes
Correct Marks : 1 Wrong Marks : 0.25

गद्यांश का उपयुक्त शीर्षक होगा:

Options :

1. ✗ भारतीय संस्कृति का समस्या
2. ✓ भारतीय संस्कृति की विशेषता

3. ✖ भारतीय संस्कृति में सुधार की आवश्यकता

4. ✖ भारतीय संस्कृति का पतन

Sub-Section Number: 3
Sub-Section Id: 586180144
Question Shuffling Allowed : Yes

Question Id : 5861802213 Question Type : COMPREHENSION Sub Question Shuffling Allowed : Yes Group Comprehension Questions : No

Question Numbers : (196 to 200)

Question Label : Comprehension

नीचे दिये गए गद्यांश को पढ़कर पूछे गये प्रश्नों के उत्तर दीजिए।

यथार्थवाद यथार्थ चित्रण के प्रति एक सामान्य और सहज रुझानमात्र न रहकर एक लक्ष्य है जो रचनाकार को अनुशासित करता है। उसे एक खास दिशा में आगे बढ़ने को प्रेरित करता है। यथार्थवादी रचनाकार अपने द्वारा चित्रित जीवन की स्थितियों के प्रति न केवल एक वस्तुमुखी दृष्टिकोण का आग्रही होता है, यह दावा भी करता है कि वह केवल ठोस तथ्यों का ही उपस्थापक या पुरस्कर्ता है। उसका सारा प्रयास इस ओर रहता है कि वह वस्तुस्थिति का चित्रण करते हुए निजी मान्यताओं, निर्णयों तथा दार्शनिक व्याख्याओं से प्रत्यक्षतः असंपृक्त रहते हुए जीवन के उस समूचे क्रिया-व्यापार में पाठक को यह अनुभव कराये कि वह भी इस समूचे क्रिया-व्यापार का सहज दर्शक या पाठक न होकर एक भागीदार है।

Sub questions

Question Number : 196 Question Id : 5861802214 Question Type : MCQ Option Shuffling : Yes

Correct Marks : 1 Wrong Marks : 0.25

गद्यांश का केंद्रीय विषय है:

Options :

1. ✓ यथार्थवाद

2. ✖ समाजवाद

3. ✖ कलावाद

4. ✖ अभिव्यक्तिवाद

Question Number : 197 Question Id : 5861802215 Question Type : MCQ Option Shuffling : Yes

Correct Marks : 1 Wrong Marks : 0.25

‘प्रत्यक्षतः’ का आशय है:

Options :

1. ✓ स्पष्ट रूप से
2. ✗ अस्पष्ट रूप से
3. ✗ गंभीर रूप से
4. ✗ प्रामाणिक रूप से

Question Number : 198 Question Id : 5861802216 Question Type : MCQ Option Shuffling : Yes

Correct Marks : 1 Wrong Marks : 0.25

‘असंपृक्त’ का अर्थ है:

Options :

1. ✗ संबद्ध
2. ✓ असंबद्ध
3. ✗ घनिष्ठ
4. ✗ लगाव

Question Number : 199 Question Id : 5861802217 Question Type : MCQ Option Shuffling : Yes

Correct Marks : 1 Wrong Marks : 0.25

वस्तुमुखी दृष्टि का आधार है:

Options :

1. ✗ कल्पना
2. ✗ ज्ञान
3. ✗ अनुभव
4. ✓ तथ्य

Question Number : 200 Question Id : 5861802218 Question Type : MCQ Option Shuffling : Yes

Correct Marks : 1 Wrong Marks : 0.25

‘आग्रह’ का अर्थ होता है:

Options :

1. ✗ आदेश
2. ✗ निवेदन
3. ✓ हठ
4. ✗ निर्णय

Question Id : 5861802213 Question Type : COMPREHENSION Sub Question Shuffling Allowed : Yes Group Comprehension Questions : No
Question Numbers : (196 to 200)

Question Label : Comprehension

नीचे दिये गए गद्यांश को पढ़कर पूछे गये प्रश्नों के उत्तर दीजिए।
यथार्थवाद यथार्थ चित्रण के प्रति एक सामान्य और सहज रुझानमात्र न रहकर एक लक्ष्य है जो रचनाकार को अनुशासित करता है। उसे एक खास दिशा में आगे बढ़ने को प्रेरित करता है। यथार्थवादी रचनाकार अपने द्वारा चित्रित जीवन की स्थितियों के प्रति न केवल एक वस्तुमुखी दृष्टिकोण का आग्रही होता है, यह दावा भी करता है कि वह केवल ठोस तथ्यों का ही उपस्थापक या पुरस्कर्ता है। उसका सारा प्रयास इस ओर रहता है कि वह वस्तुस्थिति का चित्रण करते हुए निजी मान्यताओं, निर्णयों तथा दार्शनिक व्याख्याओं से प्रत्यक्षतः असंपृक्त रहते हुए जीवन के उस समूचे क्रिया-व्यापार में पाठक को यह अनुभव कराये कि वह भी इस समूचे क्रिया-व्यापार का सहज दर्शक या पाठक न होकर एक भागीदार है।

Sub questions

Question Number : 196 Question Id : 5861802214 Question Type : MCQ Option Shuffling : Yes
Correct Marks : 1 Wrong Marks : 0.25

गद्यांश का केंद्रीय विषय है:

Options :

1. ✓ यथार्थवाद
2. ✗ समाजवाद
3. ✗ कलावाद
4. ✗ अभिव्यक्तिवाद

Question Number : 197 Question Id : 5861802215 Question Type : MCQ Option Shuffling : Yes
Correct Marks : 1 Wrong Marks : 0.25

‘प्रत्यक्षतः’ का आशय है”:

Options :

1. ✓ स्पष्ट रूप से
2. ✗ अस्पष्ट रूप से
3. ✗ गंभीर रूप से
4. ✗ प्रामाणिक रूप से

Question Number : 198 Question Id : 5861802216 Question Type : MCQ Option Shuffling : Yes

Correct Marks : 1 Wrong Marks : 0.25

‘असंपृक्त’ का अर्थ है:

Options :

1. ✗ संबद्ध
2. ✓ असंबद्ध
3. ✗ घनिष्ठ
4. ✗ लगाव

Question Number : 199 Question Id : 5861802217 Question Type : MCQ Option Shuffling : Yes

Correct Marks : 1 Wrong Marks : 0.25

वस्तुमुखी दृष्टि का आधार है:

Options :

1. ✗ कल्पना
2. ✗ ज्ञान
3. ✗ अनुभव
4. ✓ तथ्य

Question Number : 200 Question Id : 5861802218 Question Type : MCQ Option Shuffling : Yes

Correct Marks : 1 Wrong Marks : 0.25

‘आग्रह’ का अर्थ होता है:

Options :

1. ✖ आदेश
2. ✖ निवेदन
3. ✔ हठ
4. ✖ निर्णय

