

NTA UGC NET December 2025 31st Dec to 7th Jan 2026

Application No	250520321791
Candidate Name	RITU RANI
Roll No.	HR010102038
Test Date	03/01/2026
Test Time	3:00 PM - 6:00 PM
Subject	80 Geography

Section : General Paper

Comprehension:

Study carefully the table given below and answer the question asked here under.

The following table gives the percentage of students belonging to low income group in each of the five colleges A, B, C, D and E, along with the proportion of males and females with and without low income.

College Name	Percentage of students with low income	Proportion of males and females	
		With low income	Without low income
		M : F	M : F
A	35	5 : 6	6 : 7
B	25	3 : 5	4 : 5
C	24	1 : 2	2 : 3
D	19	3 : 2	4 : 3
E	15	5 : 3	3 : 2

SubQuestion No : 1

Q.1 Which college has the least number of male students with low income, if we assume that every college has equal number of total students?

1. B
2. C
3. D
4. E

Options 1. 1

2. 2
3. 3
4. 4

Question Type : **MCQ**

Question ID : **6119872776**

Option 1 ID : **61198710809**

Option 2 ID : **61198710810**

Option 3 ID : **61198710811**

Option 4 ID : **61198710812**

Status : **Answered**

Chosen Option : 1

Comprehension:

Study carefully the table given below and answer the question asked here under.

The following table gives the percentage of students belonging to low income group in each of the five colleges A, B, C, D and E, along with the proportion of males and females with and without low income.

College Name	Percentage of students with low income	Proportion of males and females	
		With low income	Without low income
		M : F	M : F
A	35	5 : 6	6 : 7
B	25	3 : 5	4 : 5
C	24	1 : 2	2 : 3
D	19	3 : 2	4 : 3
E	15	5 : 3	3 : 2

SubQuestion No : 2

Q.2 Which college has the least number of students without low income, if we assume that every college has same number of total students?

1. A
2. B
3. C
4. D

Options 1. 1

2. 2
3. 3
4. 4

Question Type : **MCQ**

Question ID : **6119872778**

Option 1 ID : **61198710817**

Option 2 ID : **61198710818**

Option 3 ID : **61198710819**

Option 4 ID : **61198710820**

Status : **Answered**

Chosen Option : **3**

Comprehension:

Study carefully the table given below and answer the question asked here under.

The following table gives the percentage of students belonging to low income group in each of the five colleges A, B, C, D and E, along with the proportion of males and females with and without low income.

College Name	Percentage of students with low income	Proportion of males and females	
		With low income	Without low income
		M : F	M : F
A	35	5 : 6	6 : 7
B	25	3 : 5	4 : 5
C	24	1 : 2	2 : 3
D	19	3 : 2	4 : 3
E	15	5 : 3	3 : 2

SubQuestion No : 3

Q.3 Which college has the least number of female students with low income, if we assume that every college has same number of total students?

1. B
2. C
3. D
4. E

Options 1. 1

2. 2
3. 3
4. 4

Question Type : **MCQ**

Question ID : **6119872777**

Option 1 ID : **61198710813**

Option 2 ID : **61198710814**

Option 3 ID : **61198710815**

Option 4 ID : **61198710816**

Status : **Answered**

Chosen Option : **3**

Comprehension:

Study carefully the table given below and answer the question asked here under.

The following table gives the percentage of students belonging to low income group in each of the five colleges A, B, C, D and E, along with the proportion of males and females with and without low income.

College Name	Percentage of students with low income	Proportion of males and females	
		With low income	Without low income
		M : F	M : F
A	35	5 : 6	6 : 7
B	25	3 : 5	4 : 5
C	24	1 : 2	2 : 3
D	19	3 : 2	4 : 3
E	15	5 : 3	3 : 2

SubQuestion No : 4

Q.4 What is the number of males without low income in College C if the total number of students in that college is 5000?

1. 1520
2. 3800
3. 1620
4. 1630

Options 1. 1

2. 2

3. 3

4. 4

Question Type : **MCQ**

Question ID : **6119872774**

Option 1 ID : **61198710801**

Option 2 ID : **61198710802**

Option 3 ID : **61198710803**

Option 4 ID : **61198710804**

Status : **Answered**

Chosen Option : **2**

Comprehension:

Study carefully the table given below and answer the question asked here under.

The following table gives the percentage of students belonging to low income group in each of the five colleges A, B, C, D and E, along with the proportion of males and females with and without low income.

College Name	Percentage of students with low income	Proportion of males and females	
		With low income	Without low income
		M : F	M : F
A	35	5 : 6	6 : 7
B	25	3 : 5	4 : 5
C	24	1 : 2	2 : 3
D	19	3 : 2	4 : 3
E	15	5 : 3	3 : 2

SubQuestion No : 5

Q.5 If the number of males without low income in College E is 2295, then the total number of students in College E is :

1. 4000
2. 5000
3. 4500
4. 5500

Options 1. 1

2. 2
3. 3
4. 4

Question Type : **MCQ**

Question ID : **6119872775**

Option 1 ID : **61198710805**

Option 2 ID : **61198710806**

Option 3 ID : **61198710807**

Option 4 ID : **61198710808**

Status : **Answered**

Chosen Option : **3**

Q.6 Match the LIST-I with LIST-II

LIST-I (Schedule of Reinforcement)		LIST-II (Example)
A. Fixed ratio	I.	Individuals are reinforced for the first response they make after various time intervals have passed.
B. Fixed interval	II.	Responses occur a certain number of times before reinforcement.
C. Variable interval	III.	The reinforcement may occur after any number of responses.
D. Variable ratio	IV.	No reinforcement is given until a certain interval of time has elapsed.

Choose the **correct** answer from the options given below:

1. A-II, B-IV, C-I, D-III
2. A-III, B-IV, C-II, D-I
3. A-I, B-III, C-II, D-IV
4. A-III, B-I, C-IV, D-II

Options 1. 1

2. 2
3. 3
4. 4

Question Type : **MCQ**

Question ID : **6119872780**

Option 1 ID : **61198710825**

Option 2 ID : **61198710826**

Option 3 ID : **61198710827**

Option 4 ID : **61198710828**

Status : **Answered**

Chosen Option : **4**

Q.7 As per the National Education Policy-2020, what percent of learners from school and higher education were expected to have exposure to vocational education by 2025?

1. 30%
2. 35%
3. 40%
4. 50%

Options 1. 1

2. 2
3. 3
4. 4

Question Type : **MCQ**

Question ID : **6119872814**

Option 1 ID : **61198710961**

Option 2 ID : **61198710962**

Option 3 ID : **61198710963**

Option 4 ID : **61198710964**

Status : **Answered**

Chosen Option : **2**

Q.8 Given below are two statements: one is labelled as **Assertion A** and the other is labelled as **Reason R**

Assertion A: Intelligence is, to some extent, an inherited characteristic.

Reason R: Environment also has a significant influence on intelligence.

In the light of the above statements, choose the **most appropriate** answer from the options given below

1. Both **A** and **R** are correct and **R** is the correct explanation of **A**
2. Both **A** and **R** are correct but **R** is NOT the correct explanation of **A**
3. **A** is correct but **R** is not correct
4. **A** is not correct but **R** is correct

Options 1. 1

2. 2

3. 3

4. 4

Question Type : **MCQ**

Question ID : **6119872779**

Option 1 ID : **61198710821**

Option 2 ID : **61198710822**

Option 3 ID : **61198710823**

Option 4 ID : **61198710824**

Status : **Answered**

Chosen Option : **2**

Q.9 Arrange the following fractions in ascending order:

A. $\frac{7}{16}$

B. $\frac{13}{25}$

C. $\frac{2}{3}$

D. $\frac{11}{23}$

E. $\frac{5}{19}$

Choose the **correct** answer from the options given below:

1. B, E, D, C, A

2. E, A, D, B, C

3. E, D, B, A, C

4. B, A, D, C, E

Options 1. 1

2. 2

3. 3

4. 4

Question Type : **MCQ**

Question ID : **6119872796**

Option 1 ID : **61198710889**

Option 2 ID : **61198710890**

Option 3 ID : **61198710891**

Option 4 ID : **61198710892**

Status : **Answered**

Chosen Option : **2**

Q.10 A person who uses his expertise to gain access to other people's computers to get information illegally or to cause damage, is a

1. Hacker
2. Analyst
3. Messenger
4. Spammer

Options 1. 1

2. 2
3. 3
4. 4

Question Type : **MCQ**

Question ID : **6119872804**

Option 1 ID : **61198710921**

Option 2 ID : **61198710922**

Option 3 ID : **61198710923**

Option 4 ID : **61198710924**

Status : **Answered**

Chosen Option : 1

Q.11 Given below are two statements: one is labelled as **Assertion A** and the other is labelled as **Reason R**.

Assertion A: Education is the most important pillar of a civilized and dignified society.

Reason R: The educational institutions do not represent values and ethics.

In the light of the above statements, choose the **most appropriate** answer from the options given below

1. Both **A** and **R** are correct and **R** is the correct explanation of **A**
2. Both **A** and **R** are correct but **R** is NOT the correct explanation of **A**
3. **A** is correct but **R** is not correct
4. **A** is not correct but **R** is correct

Options 1. 1

2. 2
3. 3
4. 4

Question Type : **MCQ**

Question ID : **6119872816**

Option 1 ID : **61198710969**

Option 2 ID : **61198710970**

Option 3 ID : **61198710971**

Option 4 ID : **61198710972**

Status : **Answered**

Chosen Option : 3

Q.12 Match the LIST-I with LIST-II

LIST-I (Layer of Panchakosha)		LIST-II (Aspect of Development)	
A.	Annamaya Kosha	I.	mind layer
B.	Anandamaya Kosha	II.	intellectual layer
C.	Manomaya Kosha	III.	inner self
D.	Vijnanamaya Kosha	IV.	physical layer

Choose the **correct** answer from the options given below:

1. A-I, B-II, C-IV, D-III
2. A-IV, B-III, C-I, D-II
3. A-IV, B-I, C-II, D-III
4. A-III, B-IV, C-II, D-I

Options 1. 1

2. 2

3. 3

4. 4

Question Type : **MCQ**

Question ID : **6119872818**

Option 1 ID : **61198710977**

Option 2 ID : **61198710978**

Option 3 ID : **61198710979**

Option 4 ID : **61198710980**

Status : **Answered**

Chosen Option : **4**

Q.13 निम्नलिखित में से कौन सा/से सत्य है/हैं?

- A. गौण पद में मध्य पद की उपस्थिति पक्षधर्मता कहलाती है।
- B. व्याप्ति द्वारा सिद्ध रूप में पक्षधर्मता का ज्ञान उपमिति कहलाता है।
- C. भारतीय तर्कशास्त्र निगमन को आगमन से पृथक् नहीं करता है।
- D. अनुमान में पक्षता विषय स्वरूप होती है।

नीचे दिए गए विकल्पों में से **सही** उत्तर का चयन कीजिए:

- 1. केवल D
- 2. केवल A और B
- 3. केवल A और C
- 4. केवल B

Options 1. 1

2. 2

3. 3

4. 4

Question Type : **MCQ**

Question ID : **6119872803**

Option 1 ID : **61198710917**

Option 2 ID : **61198710918**

Option 3 ID : **61198710919**

Option 4 ID : **61198710920**

Status : **Answered**

Chosen Option : **3**

Q.14 Match the **LIST-I** with **LIST-II**

LIST-I		LIST-II	
A. Simplex	I.	Multiple bits transmitted over several channels at the same time	
B. Serial	II.	Data transmission in one direction only	
C. Full-duplex	III.	Data is sent one bit at a time over a single channel	
D. Parallel	IV.	Data transmission in two directions at the same time	

Choose the **correct** answer from the options given below:

1. A-II, B-I, C-IV, D-III
2. A-II, B-III, C-IV, D-I
3. A-III, B-II, C-I, D-IV
4. A-III, B-II, C-IV, D-I

Options 1. 1

2. 2
3. 3
4. 4

Question Type : **MCQ**

Question ID : **6119872806**

Option 1 ID : **61198710929**

Option 2 ID : **61198710930**

Option 3 ID : **61198710931**

Option 4 ID : **61198710932**

Status : **Answered**

Chosen Option : **2**

Q.15 Which of the following is NOT a requirement for a proper sanitary landfill site?

1. The area should not be geologically active.
2. It should be located below the water table.
3. It should not be very near to residential communities.
4. It must be accessible to roads so that garbage can be delivered easily.

Options 1. 1

2. 2
3. 3
4. 4

Question Type : **MCQ**

Question ID : **6119872813**

Option 1 ID : **61198710957**

Option 2 ID : **61198710958**

Option 3 ID : **61198710959**

Option 4 ID : **61198710960**

Status : **Answered**

Chosen Option : **2**

Q.16 Which of the following is NOT a correct statement-

1. Operant behavior is emitted in the presence of discriminative stimuli.
2. Learning is the encoding of information in long-term-memory.
3. Language doesn't play any role in self-regulation.
4. Respondent behavior is elicited in the presence of unconditioned stimuli.

Options 1. 1

2. 2

3. 3

4. 4

Question Type : **MCQ**

Question ID : **6119872783**

Option 1 ID : **61198710837**

Option 2 ID : **61198710838**

Option 3 ID : **61198710839**

Option 4 ID : **61198710840**

Status : **Answered**

Chosen Option : **3**

Q.17 People who exercise influence over decisions made by others are known as:

1. Opinion Followers
2. Transmitters
3. Receivers
4. Opinion Leaders

Options 1. 1

2. 2

3. 3

4. 4

Question Type : **MCQ**

Question ID : **6119872793**

Option 1 ID : **61198710877**

Option 2 ID : **61198710878**

Option 3 ID : **61198710879**

Option 4 ID : **61198710880**

Status : **Answered**

Chosen Option : **4**

Q.18 Match the LIST-I with LIST-II

LIST-I (Relation between propositions)		LIST-II (Propositions)	
A.	Contradictories	I.	A and E
B.	Contraries	II.	A and I
C.	Subcontraries	III.	E and I
D.	Subalternation	IV.	I and O

Choose the **correct** answer from the options given below:

1. A-I, B-II, C-III, D-IV
2. A-II, B-I, C-IV, D-III
3. A-III, B-I, C-IV, D-II
4. A-IV, B-III, C-II, D-I

Options 1. 1

2. 2
3. 3
4. 4

Question Type : **MCQ**

Question ID : **6119872800**

Option 1 ID : **61198710905**

Option 2 ID : **61198710906**

Option 3 ID : **61198710907**

Option 4 ID : **61198710908**

Status : **Answered**

Chosen Option : **3**

Q.19 Given below are two statements: one is labelled as **Assertion A** and the other is labelled as **Reason R**

Assertion A: Earth's atmosphere keeps the planet warm mainly by reflecting the incoming solar radiation.

Reason R: Greenhouse gases absorb longwave radiation emitted from the earth's surface.

In the light of the above statements, choose the **most appropriate** answer from the options given below

1. Both **A** and **R** are correct and **R** is the correct explanation of **A**
2. Both **A** and **R** are correct but **R** is NOT the correct explanation of **A**
3. **A** is correct but **R** is not correct
4. **A** is not correct but **R** is correct

Options 1. 1

2. 2
3. 3
4. 4

Question Type : **MCQ**

Question ID : **6119872809**

Option 1 ID : **61198710941**

Option 2 ID : **61198710942**

Option 3 ID : **61198710943**

Option 4 ID : **61198710944**

Status : **Answered**

Chosen Option : **1**

Q.20 If 28% of a number is 75 less than 43% of the same number, then 30% of that number is:

1. 175
2. 145
3. 150
4. 120

Options 1. 1

2. 2
3. 3
4. 4

Question Type : **MCQ**

Question ID : **6119872794**

Option 1 ID : **61198710881**

Option 2 ID : **61198710882**

Option 3 ID : **61198710883**

Option 4 ID : **61198710884**

Status : **Answered**

Chosen Option : **3**

Q.21 Which of the following are system software?

- A. Compiler
- B. Word Processor
- C. Interpreter
- D. Linker
- E. Assembler

Choose the **correct** answer from the options given below:

1. A, C, D and E only
2. A, B and D only
3. A, B, C and E only
4. B, C and D only

Options 1. 1

2. 2
3. 3
4. 4

Question Type : **MCQ**

Question ID : **6119872807**

Option 1 ID : **61198710933**

Option 2 ID : **61198710934**

Option 3 ID : **61198710935**

Option 4 ID : **61198710936**

Status : **Answered**

Chosen Option : **4**

Q.22 McLuhan's conception of a new form of social organization emerging due to instantaneous electronic media connecting the entire world into one great social, political, and cultural system, is known as:

1. Global Village
2. Global City
3. Global District
4. Global Block

Options 1. 1

2. 2
3. 3
4. 4

Question Type : **MCQ**

Question ID : **6119872792**

Option 1 ID : **61198710873**

Option 2 ID : **61198710874**

Option 3 ID : **61198710875**

Option 4 ID : **61198710876**

Status : **Answered**

Chosen Option : **4**

Q.23 Quantitative research can be represented as a research strategy that

1. embodies a view of social reality as an external, objective reality
2. emphasizes an inductive approach to the relationship between theory and research
3. has rejected the practices and norms of natural scientific model
4. embodies a view of social reality as a constantly shifting emergent property of individuals' creation

Options 1. 1

2. 2
3. 3
4. 4

Question Type : **MCQ**

Question ID : **6119872788**

Option 1 ID : **61198710857**

Option 2 ID : **61198710858**

Option 3 ID : **61198710859**

Option 4 ID : **61198710860**

Status : **Answered**

Chosen Option : **2**

Q.24 Arrange the following education institutions in the increasing order of the entry eligibility for the programs offered there?

- A. Indian Institutes of Technology (IITs)
- B. Jan Shiksha Sansthan
- C. Industrial Training Institutes (ITIs)
- D. Polytechnics

Choose the **correct** answer from the options given below:

- 1. B, C, D, A
- 2. C, D, A, B
- 3. B, D, C, A
- 4. C, B, A, D

Options 1. 1

2. 2

3. 3

4. 4

Question Type : **MCQ**

Question ID : **6119872817**

Option 1 ID : **61198710973**

Option 2 ID : **61198710974**

Option 3 ID : **61198710975**

Option 4 ID : **61198710976**

Status : **Answered**

Chosen Option : **3**

Q.25 Arrange the following in ascending order of size:

- A. Mini Computer
- B. Notebook Computer
- C. Desktop Computer
- D. Tablet

Choose the **correct** answer from the options given below:

- 1. D, B, A, C
- 2. A, B, D, C
- 3. D, B, C, A
- 4. B, A, D, C

Options 1. 1
2. 2
3. 3
4. 4

Question Type : **MCQ**
Question ID : **6119872808**
Option 1 ID : **61198710937**
Option 2 ID : **61198710938**
Option 3 ID : **61198710939**
Option 4 ID : **61198710940**
Status : **Answered**
Chosen Option : **1**

Q.26 Which of the following is related to computer software?

- 1. Spreadsheet
- 2. Mouse
- 3. Stylus
- 4. Pen drive

Options 1. 1
2. 2
3. 3
4. 4

Question Type : **MCQ**
Question ID : **6119872805**
Option 1 ID : **61198710925**
Option 2 ID : **61198710926**
Option 3 ID : **61198710927**
Option 4 ID : **61198710928**
Status : **Answered**
Chosen Option : **1**

Q.27 Match the LIST-I with LIST-II

LIST-I (Strategies for mitigating bias in classroom)		LIST-II (Example)	
A.	Stereotype Replacement	I.	Building opportunities to learn about first-person perspective of students in class
B.	Counter-stereotypic Imaging	II.	Learn about a range of individuals from different social groups
C.	Individuating	III.	Plan ahead in teaching to ensure non-stereotypic examples
D.	Perspective-Taking	IV.	Ask students to introduce significant things about themselves during class

Choose the **correct** answer from the options given below:

1. A-III, B-IV, C-II, D-I
2. A-II, B-IV, C-III, D-I
3. A-I, B-IV, C-II, D-III
4. A-III, B-II, C-IV, D-I

Options 1. 1

2. 2
3. 3
4. 4

Question Type : **MCQ**

Question ID : **6119872791**

Option 1 ID : **61198710869**

Option 2 ID : **61198710870**

Option 3 ID : **61198710871**

Option 4 ID : **61198710872**

Status : **Answered**

Chosen Option : **1**

Q.28 Arrange the following in terms of increasing order of the minimum number of variables required for their computation:

- A. Mean
- B. First order correlation
- C. Correlation coefficient
- D. Second order correlation

Choose the **correct** answer from the options given below:

1. A, B, C, D
2. B, A, C, D
3. A, C, B, D
4. B, D, C, A

Options 1. 1

2. 2
3. 3
4. 4

Question Type : **MCQ**

Question ID : **6119872785**

Option 1 ID : **61198710845**

Option 2 ID : **61198710846**

Option 3 ID : **61198710847**

Option 4 ID : **61198710848**

Status : **Answered**

Chosen Option : **1**

Q.29 "The sky-lotus is fragrant, because it has lotusness in it like a natural lotus", commits the fallacy (hetvābhāsa) of:

1. Asiddha
2. Satpratipakṣa
3. Savyabhicāra
4. Viruddha

Options 1. 1

2. 2
3. 3
4. 4

Question Type : **MCQ**

Question ID : **6119872799**

Option 1 ID : **61198710901**

Option 2 ID : **61198710902**

Option 3 ID : **61198710903**

Option 4 ID : **61198710904**

Status : **Answered**

Chosen Option : **1**

Q.30 Arrange the following states of India in the increasing order of total installed capacity of renewable power as of August, 2025.

- A. Uttar Pradesh
- B. Gujrat
- C. Tamil Nadu
- D. Karnataka

Choose the **correct** answer from the options given below:

1. A, B, C, D
2. D, C, B, A
3. A, D, C, B
4. C, A, D, B

Options 1. 1

2. 2
3. 3
4. 4

Question Type : **MCQ**

Question ID : **6119872810**

Option 1 ID : **61198710945**

Option 2 ID : **61198710946**

Option 3 ID : **61198710947**

Option 4 ID : **61198710948**

Status : **Answered**

Chosen Option : **3**

Q.31 Arrange the following in chronological order:

- A. RPWD ACT
- B. RTE ACT
- C. RCI ACT
- D. PwD ACT
- E. SDG Adoption by India

Choose the **correct** answer from the options given below:

- 1. A, B, C, D, E
- 2. C, D, E, A, B
- 3. C, D, B, E, A
- 4. E, A, C, D, B

Options 1. 1

2. 2

3. 3

4. 4

Question Type : **MCQ**

Question ID : **6119872781**

Option 1 ID : **61198710829**

Option 2 ID : **61198710830**

Option 3 ID : **61198710831**

Option 4 ID : **61198710832**

Status : **Answered**

Chosen Option : **4**

Q.32 Which of the following are commonly responsible for acid rain?

1. N_2O and CO_2
2. NO_2 and SO_2
3. NH_3 and CH_4
4. CO_2 and O_3

Options 1. 1

2. 2

3. 3

4. 4

Question Type : MCQ

Question ID : 6119872812

Option 1 ID : 61198710953

Option 2 ID : 61198710954

Option 3 ID : 61198710955

Option 4 ID : 61198710956

Status : Answered

Chosen Option : 3

Q.33 Identify the variables that pertain to interval scale of measurement

- A. gender
- B. date of birth of a person
- C. religion
- D. time of the day

Choose the **correct** answer from the options given below:

1. A and B only
2. B only
3. B, C and D only
4. B and D only

Options 1. 1

2. 2

3. 3

4. 4

Question Type : MCQ

Question ID : 6119872784

Option 1 ID : 61198710841

Option 2 ID : 61198710842

Option 3 ID : 61198710843

Option 4 ID : 61198710844

Status : Answered

Chosen Option : 1

Q.34 Match the LIST-I with LIST-II

LIST-I (Cost Price = C.P. and Selling Price = S.P.)		LIST-II (in Rs)
A.	If C.P. = Rs 600, Profit = 25%, then S.P. = ?	I. 1080
B.	S.P. = Rs 1680, Loss = 20%, then C.P. = ?	II. 750
C.	Marked Price = Rs 1500, successive discounts are 20% & 10%, then S.P. = ?	III. 1200
D.	Difference between C.P. and S.P. = Rs 240, Profit = 20%, then C.P. = ?	IV. 2100

Choose the **correct** answer from the options given below:

1. A-I, B-III, C-IV, D-II
2. A-III, B-II, C-I, D-IV
3. A-II, B-IV, C-I, D-III
4. A-IV, B-I, C-III, D-II

Options 1. 1

2. 2
3. 3
4. 4

Question Type : **MCQ**

Question ID : **6119872798**

Option 1 ID : **61198710897**

Option 2 ID : **61198710898**

Option 3 ID : **61198710899**

Option 4 ID : **61198710900**

Status : **Answered**

Chosen Option : **4**

Q.35 Which one of the following is NOT the role of Higher Education Institutions for promoting inclusive practices?

1. To ensure a barrier-free and an inclusive mechanism to help in the admission process.
2. To take appropriate measures to ensure universal accessibility in infrastructure systems.
3. To make compulsory provisions for teacher training based on Universal Design of Learning (UDL).
4. To facilitate participation in corporate life on an equal basis with others.

Options 1. 1

2. 2
3. 3
4. 4

Question Type : **MCQ**

Question ID : **6119872815**

Option 1 ID : **61198710965**

Option 2 ID : **61198710966**

Option 3 ID : **61198710967**

Option 4 ID : **61198710968**

Status : **Answered**

Chosen Option : **4**

Q.36 Complete the series:
I2Z, K4X, M7V, O11T, _____, S22P

1. Q16R
2. Q16P
3. R15P
4. R15T

Options 1. 1

2. 2
3. 3
4. 4

Question Type : **MCQ**

Question ID : **6119872795**

Option 1 ID : **61198710885**

Option 2 ID : **61198710886**

Option 3 ID : **61198710887**

Option 4 ID : **61198710888**

Status : **Answered**

Chosen Option : **1**

Q.37 Match the LIST-I with LIST-II

LIST-I (Standard Normal Variate)		LIST-II (Probability)	
A.	$-1 \leq Z \leq +1$	I.	~ 0.5
B.	$-1 \leq Z \leq +2$	II.	~ 0.16
C.	$-\infty < Z \leq 0$	III.	~ 0.68
D.	$-\infty < Z \leq -1$	IV.	~ 0.82

Choose the **correct** answer from the options given below:

1. A-I, B-II, C-III, D-IV
2. A-II, B-III, C-IV, D-I
3. A-III, B-IV, C-I, D-II
4. A-III, B-II, C-I, D-IV

Options 1. 1

2. 2
3. 3
4. 4

Question Type : **MCQ**

Question ID : **6119872786**

Option 1 ID : **61198710849**

Option 2 ID : **61198710850**

Option 3 ID : **61198710851**

Option 4 ID : **61198710852**

Status : **Answered**

Chosen Option : **1**

Q.38 Which among the following is NOT a National Coordinator for Higher Education Courses on SWAYAM?

1. Indira Gandhi National Open University
2. Consortium for Educational Communication
3. National Institute of Technical Teacher Training and Research
4. National Institute for Open Schooling

Options 1. 1

2. 2
3. 3
4. 4

Question Type : **MCQ**

Question ID : **6119872782**

Option 1 ID : **61198710833**

Option 2 ID : **61198710834**

Option 3 ID : **61198710835**

Option 4 ID : **61198710836**

Status : **Answered**

Chosen Option : **2**

Q.39 निम्नलिखित में से कौन सा/से सत्य है/हैं?

- A. लोकोत्तेजक युक्ति एक आकारिक तर्कदोष है।
- B. रेड हैरिंग तर्कदोष में, भ्रमित करने के लिए कुछ विकर्षण का उपयोग किया जाता है।
- C. बाध्यकारी आग्रह तर्कदोष में, व्यक्तिगत आलोचना की जाती है।
- D. स्ट्रॉमैन तर्कदोष में बल का उपयोग सहमति प्राप्त करने के लिए किया जाता है।

नीचे दिए गए विकल्पों में से **सही** उत्तर का चयन कीजिए:

1. केवल A और B
2. केवल B
3. केवल A, C और D
4. केवल B और D

Options 1. 1

2. 2
3. 3
4. 4

Question Type : **MCQ**

Question ID : **6119872802**

Option 1 ID : **61198710913**

Option 2 ID : **61198710914**

Option 3 ID : **61198710915**

Option 4 ID : **61198710916**

Status : **Answered**

Chosen Option : **1**

Q.40 Given below are two statements: one is labelled as **Assertion A** and the other is labelled as **Reason R**

Assertion A: People tend to ignore media messages they feel are in accord with their already-held attitudes and interests.

Reason R: Selective exposure theory suggests that audiences tend to match their choice of media channels and content to their own tastes, ideas and informational needs.

In the light of the above statements, choose the **most appropriate** answer from the options given below

1. Both **A** and **R** are correct and **R** is the correct explanation of **A**
2. Both **A** and **R** are correct but **R** is NOT the correct explanation of **A**
3. **A** is correct but **R** is not correct
4. **A** is not correct but **R** is correct

Options 1. 1

2. 2

3. 3

4. 4

Question Type : **MCQ**

Question ID : **6119872789**

Option 1 ID : **61198710861**

Option 2 ID : **61198710862**

Option 3 ID : **61198710863**

Option 4 ID : **61198710864**

Status : **Answered**

Chosen Option : 1

Q.41 Given below are two statements: one is labelled as **Assertion A** and the other is labelled as **Reason R**

Assertion A: The terms validity and invalidity apply only to deductive arguments.

Reason R: In a deductive argument, conclusion follows from its premises with absolute necessity.

In the light of the above statements, choose the **most appropriate** answer from the options given below

1. Both **A** and **R** are correct and **R** is the correct explanation of **A**
2. Both **A** and **R** are correct but **R** is NOT the correct explanation of **A**
3. **A** is correct but **R** is not correct
4. **A** is not correct but **R** is correct

Options 1. 1

2. 2

3. 3

4. 4

Question Type : **MCQ**

Question ID : **6119872801**

Option 1 ID : **61198710909**

Option 2 ID : **61198710910**

Option 3 ID : **61198710911**

Option 4 ID : **61198710912**

Status : **Answered**

Chosen Option : 1

Q.42 Arrange the following in the ascending order of adoption according to the Transmission Model of Learning.

- A. Exposure
- B. Recall
- C. Processing
- D. Comprehension
- E. Learning

Choose the **correct** answer from the options given below:

1. A, B, C, D, E
2. D, C, B, A, E
3. C, D, B, A, E
4. A, C, D, B, E

Options 1. 1

2. 2
3. 3
4. 4

Question Type : **MCQ**

Question ID : **6119872790**

Option 1 ID : **61198710865**

Option 2 ID : **61198710866**

Option 3 ID : **61198710867**

Option 4 ID : **61198710868**

Status : **Answered**

Chosen Option : **4**

Q.43 Match the LIST-I with LIST-II

LIST-I (Zone)		LIST-II (Day time sound limits in dB as per Noise Pollution Rules, 2000)	
A.	Industrial	I.	50
B.	Commercial	II.	65
C.	Residential	III.	75
D.	Silence	IV.	55

Choose the **correct** answer from the options given below:

1. A-III, B-II, C-IV, D-I
2. A-III, B-IV, C-II, D-I
3. A-I, B-IV, C-II, D-III
4. A-I, B-II, C-IV, D-III

Options 1. 1

2. 2
3. 3
4. 4

Question Type : **MCQ**

Question ID : **6119872811**

Option 1 ID : **61198710949**

Option 2 ID : **61198710950**

Option 3 ID : **61198710951**

Option 4 ID : **61198710952**

Status : **Answered**

Chosen Option : **1**

Q.44 In qualitative research, the criterion that parallels internal validity is

1. credibility
2. transferability
3. dependability
4. confirmability

Options 1. 1

2. 2

3. 3

4. 4

Question Type : **MCQ**

Question ID : **6119872787**

Option 1 ID : **61198710853**

Option 2 ID : **61198710854**

Option 3 ID : **61198710855**

Option 4 ID : **61198710856**

Status : **Answered**

Chosen Option : **4**

Q.45 Identify the correct mathematical statement(s):

- A. The expression $\frac{3}{4} + \frac{5}{36} + \frac{7}{144} + \dots + \frac{17}{5184} + \frac{19}{8100}$ is equal to 0.09.
- B. The value of $\frac{x}{x-1} + \frac{1}{x+1} + \frac{2x}{1-x^2}$ is 1.
- C. The value of $3.8 - (4.2 \div 0.7 \times 3) + 5 \times 2 \div 0.5$ is 5.6.
- D. $\frac{(3.63)^2 - (2.37)^2}{3.63 + 2.37}$ is equal to 6.

Choose the **correct** answer from the options given below:

1. A and C only
2. B only
3. B and D only
4. C and D only

Options 1. 1

2. 2

3. 3

4. 4

Question Type : **MCQ**

Question ID : **6119872797**

Option 1 ID : **61198710893**

Option 2 ID : **61198710894**

Option 3 ID : **61198710895**

Option 4 ID : **61198710896**

Status : **Answered**

Chosen Option : **2**

Comprehension:

Read the passage given below and answer questions:

If unpleasant things happen in our daily life, we immediately pay attention to them but do not notice other pleasant things. We experience these as normal or usual. This shows that compassion and affection are part of human nature.

Compassion or love has different levels; some are more mixed than others with desire or attachment. For example, parents' attitudes toward their children contain a mixture of desire and attachment with compassion. The love and compassion between husband and wife-especially at the beginning of marriage when they don't know the deep nature of each other-are on a superficial level. As soon as the attitude of one partner changes, the attitude of the other becomes opposite to what it was. That kind of love and compassion is more of the nature of attachment. Attachment means some kind of feeling of closeness projected by oneself. In reality, the other side may be very negative, but due to one's own mental attachment and projection, it appears as something nice. Furthermore, attachment causes one to exaggerate a small good quality and make it appear 100 percent beautiful or 100 percent positive. As soon as the mental attitudes change, that picture completely changes. Therefore, that kind of love and compassion is, rather, attachment.

SubQuestion No : 46

Q.46 According to the passage, when one partner is negative but appears as nice and pleasant to the other, it is because of the latter's

1. Prejudice
2. Strong feelings
3. Gender Bias
4. Mental projection

Options 1. 1

2. 2
3. 3
4. 4

Question Type : **MCQ**

Question ID : **6119872821**

Option 1 ID : **61198710985**

Option 2 ID : **61198710986**

Option 3 ID : **61198710987**

Option 4 ID : **61198710988**

Status : **Answered**

Chosen Option : **4**

Comprehension:

Read the passage given below and answer questions:

If unpleasant things happen in our daily life, we immediately pay attention to them but do not notice other pleasant things. We experience these as normal or usual. This shows that compassion and affection are part of human nature.

Compassion or love has different levels; some are more mixed than others with desire or attachment. For example, parents' attitudes toward their children contain a mixture of desire and attachment with compassion. The love and compassion between husband and wife-especially at the beginning of marriage when they don't know the deep nature of each other-are on a superficial level. As soon as the attitude of one partner changes, the attitude of the other becomes opposite to what it was. That kind of love and compassion is more of the nature of attachment. Attachment means some kind of feeling of closeness projected by oneself. In reality, the other side may be very negative, but due to one's own mental attachment and projection, it appears as something nice. Furthermore, attachment causes one to exaggerate a small good quality and make it appear 100 percent beautiful or 100 percent positive. As soon as the mental attitudes change, that picture completely changes. Therefore, that kind of love and compassion is, rather, attachment.

SubQuestion No : 47

Q.47 In our daily life, according to the passage, the _____ things are always noticed.

1. unpleasant
2. normal
3. pleasant
4. humdrum

Options 1. 1

2. 2
3. 3
4. 4

Question Type : **MCQ**

Question ID : **6119872822**

Option 1 ID : **61198710989**

Option 2 ID : **61198710990**

Option 3 ID : **61198710991**

Option 4 ID : **61198710992**

Status : **Answered**

Chosen Option : **1**

Comprehension:

Read the passage given below and answer questions:

If unpleasant things happen in our daily life, we immediately pay attention to them but do not notice other pleasant things. We experience these as normal or usual. This shows that compassion and affection are part of human nature.

Compassion or love has different levels; some are more mixed than others with desire or attachment. For example, parents' attitudes toward their children contain a mixture of desire and attachment with compassion. The love and compassion between husband and wife-especially at the beginning of marriage when they don't know the deep nature of each other-are on a superficial level. As soon as the attitude of one partner changes, the attitude of the other becomes opposite to what it was. That kind of love and compassion is more of the nature of attachment. Attachment means some kind of feeling of closeness projected by oneself. In reality, the other side may be very negative, but due to one's own mental attachment and projection, it appears as something nice. Furthermore, attachment causes one to exaggerate a small good quality and make it appear 100 percent beautiful or 100 percent positive. As soon as the mental attitudes change, that picture completely changes. Therefore, that kind of love and compassion is, rather, attachment.

SubQuestion No : 48

Q.48 The presence of attachment in a relationship will give rise to...

1. exaggeration of any small good quality.
2. a mixture of unpleasantness and sorrow.
3. an exact match of attitudes all the time.
4. a clear understanding of the partner's deep nature.

Options 1. 1

2. 2

3. 3

4. 4

Question Type : **MCQ**

Question ID : **6119872823**

Option 1 ID : **61198710993**

Option 2 ID : **61198710994**

Option 3 ID : **61198710995**

Option 4 ID : **61198710996**

Status : **Answered**

Chosen Option : **1**

Comprehension:

Read the passage given below and answer questions:

If unpleasant things happen in our daily life, we immediately pay attention to them but do not notice other pleasant things. We experience these as normal or usual. This shows that compassion and affection are part of human nature.

Compassion or love has different levels; some are more mixed than others with desire or attachment. For example, parents' attitudes toward their children contain a mixture of desire and attachment with compassion. The love and compassion between husband and wife-especially at the beginning of marriage when they don't know the deep nature of each other-are on a superficial level. As soon as the attitude of one partner changes, the attitude of the other becomes opposite to what it was. That kind of love and compassion is more of the nature of attachment. Attachment means some kind of feeling of closeness projected by oneself. In reality, the other side may be very negative, but due to one's own mental attachment and projection, it appears as something nice. Furthermore, attachment causes one to exaggerate a small good quality and make it appear 100 percent beautiful or 100 percent positive. As soon as the mental attitudes change, that picture completely changes. Therefore, that kind of love and compassion is, rather, attachment.

SubQuestion No : 49

Q.49 The passage holds that "attachment" is a feeling of closeness projected by

1. the partner
2. the individual themselves
3. the environment
4. the family

Options 1. 1

2. 2
3. 3
4. 4

Question Type : **MCQ**

Question ID : **6119872824**

Option 1 ID : **61198710997**

Option 2 ID : **61198710998**

Option 3 ID : **61198710999**

Option 4 ID : **61198711000**

Status : **Answered**

Chosen Option : **1**

Comprehension:**Read the passage given below and answer questions:**

If unpleasant things happen in our daily life, we immediately pay attention to them but do not notice other pleasant things. We experience these as normal or usual. This shows that compassion and affection are part of human nature.

Compassion or love has different levels; some are more mixed than others with desire or attachment. For example, parents' attitudes toward their children contain a mixture of desire and attachment with compassion. The love and compassion between husband and wife-especially at the beginning of marriage when they don't know the deep nature of each other-are on a superficial level. As soon as the attitude of one partner changes, the attitude of the other becomes opposite to what it was. That kind of love and compassion is more of the nature of attachment. Attachment means some kind of feeling of closeness projected by oneself. In reality, the other side may be very negative, but due to one's own mental attachment and projection, it appears as something nice. Furthermore, attachment causes one to exaggerate a small good quality and make it appear 100 percent beautiful or 100 percent positive. As soon as the mental attitudes change, that picture completely changes. Therefore, that kind of love and compassion is, rather, attachment.

SubQuestion No : 50**Q.50** Choose the word that can replace the word "superficial" in the passage:

1. Superior
2. Suburban
3. Surface
4. Spurious

Options 1. 1

2. 2
3. 3
4. 4

Question Type : **MCQ**Question ID : **6119872820**Option 1 ID : **61198710981**Option 2 ID : **61198710982**Option 3 ID : **61198710983**Option 4 ID : **61198710984**Status : **Answered**Chosen Option : **3**Section : **Geography**

Q.51 Arrange the following elements of a standard hill-slope from bottom to top.

- A. Waxing slope
- B. Free-face slope
- C. Waning slope
- D. Debris slope

Choose the **correct** answer from the options given below:

- 1. A, B, C, D
- 2. C, D, B, A
- 3. D, B, C, A
- 4. B, A, D, C

Options 1. 1

2. 2

3. 3

4. 4

Question Type : **MCQ**

Question ID : **6119872875**

Option 1 ID : **61198711201**

Option 2 ID : **61198711202**

Option 3 ID : **61198711203**

Option 4 ID : **61198711204**

Status : **Answered**

Chosen Option : **4**

Q.52 Match the LIST-I with LIST-II

LIST-I (Sampling Method)		LIST-II (Sample Selection)	
A. Random		I. The population is divided into groups and then samples are selected within each group.	
B. Stratified		II. By numbering each subject and then selecting the K th subject.	
C. Purposive		III. Each subject will get equal chance of selection.	
D. Systematic		IV. When only minimal information is available about the parent population.	

Choose the **correct** answer from the options given below:

1. A-I, B-II, C-III, D-IV
2. A-III, B-I, C-IV, D-II
3. A-IV, B-III, C-II, D-I
4. A-II, B-IV, C-I, D-III

Options 1. 1

2. 2
3. 3
4. 4

Question Type : **MCQ**Question ID : **6119872913**Option 1 ID : **61198711353**Option 2 ID : **61198711354**Option 3 ID : **61198711355**Option 4 ID : **61198711356**Status : **Answered**Chosen Option : **2****Q.53** Given below are two statements: one is labelled as **Assertion A** and the other is labelled as **Reason R**

Assertion A: The Central Place Theory of Christaller is based on demographic hierarchy of central places.

Reason R: No settlement can claim to be a central place unless it has a complementary area.

In the light of the above statements, choose the **most appropriate** answer from the options given below

1. Both **A** and **R** are correct and **R** is the correct explanation of **A**.
2. Both **A** and **R** are correct but **R** is NOT the correct explanation of **A**.
3. **A** is correct but **R** is not correct.
4. **A** is not correct but **R** is correct.

Options 1. 1

2. 2
3. 3
4. 4

Question Type : **MCQ**Question ID : **6119872869**Option 1 ID : **61198711177**Option 2 ID : **61198711178**Option 3 ID : **61198711179**Option 4 ID : **61198711180**Status : **Answered**Chosen Option : **2**

Q.54 Identify the correct statements:

- A. In the oceans the highest salinity is found in the latitudinal belt of 15° N and 10° S.
- B. Sodium chloride is the leading salt in oceans.
- C. Great Salt Lake of Anatolian plateau has a salinity of 240‰.
- D. Baltic sea salinity is much below the normal salinity of the oceans.

Choose the **correct** answer from the options given below:

- 1. A and B Only
- 2. B and D Only
- 3. A and C Only
- 4. A and D Only

Options 1. 1

- 2. 2
- 3. 3
- 4. 4

Question Type : **MCQ**

Question ID : **6119872892**

Option 1 ID : **61198711269**

Option 2 ID : **61198711270**

Option 3 ID : **61198711271**

Option 4 ID : **61198711272**

Status : **Answered**

Chosen Option : **2**

Q.55 Arrange the following biological units in lower to higher biotic order:

- A. Populations
- B. Cells
- C. Tissues
- D. Communities

Choose the **correct** answer from the options given below:

- 1. C, B, A, D
- 2. C, B, D, A
- 3. B, C, D, A
- 4. B, C, A, D

Options 1. 1

2. 2

3. 3

4. 4

Question Type : **MCQ**

Question ID : **6119872880**

Option 1 ID : **61198711221**

Option 2 ID : **61198711222**

Option 3 ID : **61198711223**

Option 4 ID : **61198711224**

Status : **Answered**

Chosen Option : **4**

Q.56 Arrange the following concepts chronologically in the evolution of geographical thought:

- A. Sequent occupance
- B. Lebensraum
- C. Teleological approach
- D. Topophilia

Choose the **correct** answer from the options given below:

- 1. B, C, D, A
- 2. C, B, D, A
- 3. C, B, A, D
- 4. B, C, A, D

Options 1. 1
2. 2
3. 3
4. 4

Question Type : **MCQ**

Question ID : **6119872888**

Option 1 ID : **61198711253**

Option 2 ID : **61198711254**

Option 3 ID : **61198711255**

Option 4 ID : **61198711256**

Status : **Answered**

Chosen Option : **1**

Q.57 Given below are two statements: one is labelled as **Assertion A** and the other is labelled as **Reason R**

Assertion A: The Jains registered least growth rate of population in India (2001-2011).

Reason R: Conversion into other religious faiths is very common in Jains in India.

In the light of the above statements, choose the **most appropriate** answer from the options given below

- 1. Both **A** and **R** are correct and **R** is the correct explanation of **A**.
- 2. Both **A** and **R** are correct but **R** is NOT the correct explanation of **A**.
- 3. **A** is correct but **R** is not correct.
- 4. **A** is not correct but **R** is correct.

Options 1. 1
2. 2
3. 3
4. 4

Question Type : **MCQ**

Question ID : **6119872871**

Option 1 ID : **61198711185**

Option 2 ID : **61198711186**

Option 3 ID : **61198711187**

Option 4 ID : **61198711188**

Status : **Answered**

Chosen Option : **2**

Q.58 Match the LIST-I with LIST-II

LIST-I (Country)		LIST-II (Infant Mortality Rate in 2024)	
A.	Sudan	I.	36
B.	Bangladesh	II.	23
C.	Indonesia	III.	17
D.	Norway	IV.	02

Choose the **correct** answer from the options given below:

1. A-IV, B-III, C-II, D-I
2. A-III, B-IV, C-I, D-II
3. A-I, B-II, C-III, D-IV
4. A-II, B-I, C-IV, D-III

Options 1. 1

2. 2
3. 3
4. 4

Question Type : **MCQ**Question ID : **6119872912**Option 1 ID : **61198711349**Option 2 ID : **61198711350**Option 3 ID : **61198711351**Option 4 ID : **61198711352**Status : **Answered**Chosen Option : **3****Q.59** Match the LIST-I with LIST-II

LIST-I (Country)		LIST-II (Percent of Population below 15 years of age in 2024)	
A.	China	I.	23
B.	Niger	II.	18
C.	South Korea	III.	47
D.	Mexico	IV.	11

Choose the **correct** answer from the options given below:

1. A-III, B-II, C-IV, D-I
2. A-II, B-III, C-IV, D-I
3. A-II, B-III, C-I, D-IV
4. A-III, B-II, C-I, D-IV

Options 1. 1

2. 2
3. 3
4. 4

Question Type : **MCQ**Question ID : **6119872907**Option 1 ID : **61198711329**Option 2 ID : **61198711330**Option 3 ID : **61198711331**Option 4 ID : **61198711332**Status : **Answered**Chosen Option : **2**

Q.60 Carlsberg ridge is located in which of the following oceans?

1. North Pacific Ocean
2. South Atlantic Ocean
3. Indian Ocean
4. South Pacific Ocean

Options 1. 1

2. 2
3. 3
4. 4

Question Type : **MCQ**

Question ID : **6119872833**

Option 1 ID : **61198711033**

Option 2 ID : **61198711034**

Option 3 ID : **61198711035**

Option 4 ID : **61198711036**

Status : **Answered**

Chosen Option : **3**

Q.61 The angle of repose refers to:

1. Maximum slope angle which allows debris to stay in place without movement.
2. Minimum slope angle which allows debris movement.
3. Nearly all natural surfaces which have slope to some degree.
4. Hillslopes that are covered with residual regolith, which grades downward into solid and unaltered rock.

Options 1. 1

2. 2
3. 3
4. 4

Question Type : **MCQ**

Question ID : **6119872825**

Option 1 ID : **61198711001**

Option 2 ID : **61198711002**

Option 3 ID : **61198711003**

Option 4 ID : **61198711004**

Status : **Answered**

Chosen Option : **2**

Q.62 Which of the following soil order is found in the Deccan Plateau of western India?

1. Vertisols
2. Histosols
3. Mollisols
4. Inceptisols

Options 1. 1

2. 2
3. 3
4. 4

Question Type : **MCQ**

Question ID : **6119872837**

Option 1 ID : **61198711049**

Option 2 ID : **61198711050**

Option 3 ID : **61198711051**

Option 4 ID : **61198711052**

Status : **Answered**

Chosen Option : **4**

Q.63 Given below are two statements: one is labelled as **Assertion A** and the other is labelled as **Reason R**

Assertion A: Arizona state of USA has most of the copper concentration mills and smelters.

Reason R: Copper concentration and smelters are bulk-reducing industries.

In the light of the above statements, choose the **most appropriate** answer from the options given below

1. Both **A** and **R** are correct and **R** is the correct explanation of **A**.
2. Both **A** and **R** are correct but **R** is NOT the correct explanation of **A**.
3. **A** is correct but **R** is not correct.
4. **A** is not correct but **R** is correct.

Options 1. 1

2. 2
3. 3
4. 4

Question Type : **MCQ**

Question ID : **6119872870**

Option 1 ID : **61198711181**

Option 2 ID : **61198711182**

Option 3 ID : **61198711183**

Option 4 ID : **61198711184**

Status : **Answered**

Chosen Option : **4**

Q.64 An isolated hill formed by felsic batholith and which is revealed by erosion of weaker surrounding rock is called as:

1. Hogback ridge
2. Flatiron
3. Horst
4. Monadnock

Options 1. 1

2. 2
3. 3
4. 4

Question Type : **MCQ**

Question ID : **6119872827**

Option 1 ID : **61198711009**

Option 2 ID : **61198711010**

Option 3 ID : **61198711011**

Option 4 ID : **61198711012**

Status : **Answered**

Chosen Option : **4**

Q.65 नीचे दो कथन दिए गए हैं: एक अभिकथन (**Assertion A**) के रूप में है तो दूसरा उसके कारण (**Reason R**) के रूप में:

अभिकथन A: डेविस के अपरदन चक्र की तरुणावस्था में निरपेक्ष ऊंचाई तथा सापेक्ष उच्चावच तेजी से बढ़ते हैं।

कारण R: तरुणावस्था में सरिताओं की प्रमुख प्रवृत्ति घाटी गर्तन होती है।

उपरोक्त कथन के आलोक में, नीचे दिए गए विकल्पों में से सबसे उपयुक्त **उत्तर** का चयन कीजिए

1. **A** और **R** दोनों सही हैं और **R, A** की सही व्याख्या है।
2. **A** और **R** दोनों सही हैं और **R, A** की सही व्याख्या नहीं है।
3. **A** सही है और **R** सही नहीं है।
4. **A** सही नहीं है और **R** सही है।

Options 1. 1

2. 2
3. 3
4. 4

Question Type : **MCQ**

Question ID : **6119872865**

Option 1 ID : **61198711161**

Option 2 ID : **61198711162**

Option 3 ID : **61198711163**

Option 4 ID : **61198711164**

Status : **Answered**

Chosen Option : **1**

Q.66 Match the LIST-I with LIST-II

LIST-I (Metamorphic Rock)		LIST-II (Original Rock)	
A.	Gneiss	I.	Limestone
B.	Anthracite	II.	Sandstone
C.	Quartzite	III.	Bituminous
D.	Marble	IV.	Granite

Choose the **correct** answer from the options given below:

1. A-IV, B-III, C-II, D-I
2. A-I, B-II, C-III, D-IV
3. A-IV, B-II, C-I, D-III
4. A-III, B-I, C-IV, D-II

Options 1. 1

2. 2
3. 3
4. 4

Question Type : **MCQ**Question ID : **6119872911**Option 1 ID : **61198711345**Option 2 ID : **61198711346**Option 3 ID : **61198711347**Option 4 ID : **61198711348**Status : **Answered**Chosen Option : **1****Q.67** Which of the following rivers represents an example of antecedent drainage?

1. Kaveri
2. Luni
3. Kosi
4. Godavari

Options 1. 1

2. 2
3. 3
4. 4

Question Type : **MCQ**Question ID : **6119872862**Option 1 ID : **61198711149**Option 2 ID : **61198711150**Option 3 ID : **61198711151**Option 4 ID : **61198711152**Status : **Answered**Chosen Option : **3**

Q.68 In the process of location of economic activities, the localization of shoe and leather industries was propounded by:

1. Hoover
2. Pred
3. Palander
4. Smith

Options 1. 1

2. 2
3. 3
4. 4

Question Type : **MCQ**

Question ID : **6119872846**

Option 1 ID : **61198711085**

Option 2 ID : **61198711086**

Option 3 ID : **61198711087**

Option 4 ID : **61198711088**

Status : **Answered**

Chosen Option : 1

Q.69 In the given equation $p_1 = a_{11}X_1 + a_{12}X_2 + \dots + a_{1k}X_k$; what a_{11} refers to

1. Principal components
2. Communality
3. Eigen value
4. Loadings

Options 1. 1

2. 2
3. 3
4. 4

Question Type : **MCQ**

Question ID : **6119872861**

Option 1 ID : **61198711145**

Option 2 ID : **61198711146**

Option 3 ID : **61198711147**

Option 4 ID : **61198711148**

Status : **Answered**

Chosen Option : 1

Q.70 Capital city of which of the following states is located in the least earthquake hazard sensitivity zone?

1. West Bengal
2. Maharashtra
3. Mizoram
4. Chhattisgarh

Options 1. 1

2. 2
3. 3
4. 4

Question Type : **MCQ**

Question ID : **6119872864**

Option 1 ID : **61198711157**

Option 2 ID : **61198711158**

Option 3 ID : **61198711159**

Option 4 ID : **61198711160**

Status : **Answered**

Chosen Option : **4**

Q.71 Given below are two statements: one is labelled as **Assertion A** and the other is labelled as **Reason R**

Assertion A: Datum plane is difficult to determine.

Reason R: Sea level is not the same always and everywhere; it fluctuates.

In the light of the above statements, choose the **most appropriate** answer from the options given below

1. Both **A** and **R** are correct and **R** is the correct explanation of **A**.
2. Both **A** and **R** are correct but **R** is NOT the correct explanation of **A**.
3. **A** is correct but **R** is not correct.
4. **A** is not correct but **R** is correct.

Options 1. 1

2. 2
3. 3
4. 4

Question Type : **MCQ**

Question ID : **6119872873**

Option 1 ID : **61198711193**

Option 2 ID : **61198711194**

Option 3 ID : **61198711195**

Option 4 ID : **61198711196**

Status : **Answered**

Chosen Option : **4**

Q.72 The article "Transportation and Societal Framework" is contribution of which of the following scholar?

1. Zipf
2. Ullman
3. Hurst
4. Stouffer

Options 1. 1

2. 2
3. 3
4. 4

Question Type : **MCQ**

Question ID : **6119872844**

Option 1 ID : **61198711077**

Option 2 ID : **61198711078**

Option 3 ID : **61198711079**

Option 4 ID : **61198711080**

Status : **Answered**

Chosen Option : **4**

Q.73 In determining the concept of resources, Zimmermann used the term "Neutral Stuff" to refer

1. Technology
2. Human Resource
3. Nature
4. Stock

Options 1. 1

2. 2
3. 3
4. 4

Question Type : **MCQ**

Question ID : **6119872848**

Option 1 ID : **61198711093**

Option 2 ID : **61198711094**

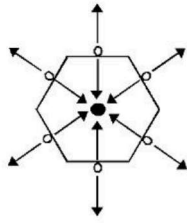
Option 3 ID : **61198711095**

Option 4 ID : **61198711096**

Status : **Answered**

Chosen Option : **2**

Q.74 According to the Central Place Theory the following diagram represents the nesting of complementary areas under which one "K" Value?



1. K-3
2. K-4
3. K-7
4. K-18

Options 1. 1

2. 2
3. 3
4. 4

Question Type : **MCQ**

Question ID : **6119872841**

Option 1 ID : **61198711065**

Option 2 ID : **61198711066**

Option 3 ID : **61198711067**

Option 4 ID : **61198711068**

Status : **Answered**

Chosen Option : **3**

Q.75 Match the **LIST-I** with **LIST-II**

LIST-I (Concept)		LIST-II (Scholar)	
A.	Ecological Niche	I.	Tansley
B.	Ecosystem	II.	Elton
C.	Evolution of species through the process of mutation	III.	Clements
D.	Vegetation Succession	IV.	De Vries

Choose the **correct** answer from the options given below:

1. A-II, B-I, C-III, D-IV
2. A-II, B-I, C-IV, D-III
3. A-IV, B-I, C-II, D-III
4. A-I, B-II, C-III, D-IV

Options 1. 1

2. 2
3. 3
4. 4

Question Type : **MCQ**

Question ID : **6119872905**

Option 1 ID : **61198711321**

Option 2 ID : **61198711322**

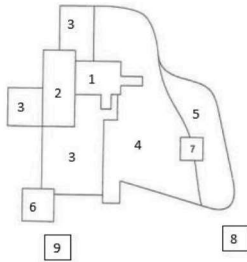
Option 3 ID : **61198711323**

Option 4 ID : **61198711324**

Status : **Answered**

Chosen Option : **4**

Q.76 In the given diagram of the Multiple Nuclei Model of Harris and Ullman, number 7 represents which of the following?



1. Heavy Manufacturing Center
2. Outlying Business District
3. Residential Suburb
4. Industrial Suburb

Options 1. 1
2. 2
3. 3
4. 4

Question Type : **MCQ**
Question ID : **6119872840**
Option 1 ID : **61198711061**
Option 2 ID : **61198711062**
Option 3 ID : **61198711063**
Option 4 ID : **61198711064**
Status : **Answered**
Chosen Option : **4**

Q.77 Which of the following is measured on the basis of the actual temperature and wind speed?

1. Relative humidity
2. Wind-chill index
3. Lapse rate
4. Heat index

Options 1. 1
2. 2
3. 3
4. 4

Question Type : **MCQ**
Question ID : **6119872829**
Option 1 ID : **61198711017**
Option 2 ID : **61198711018**
Option 3 ID : **61198711019**
Option 4 ID : **61198711020**
Status : **Answered**
Chosen Option : **1**

Q.78 Match the LIST-I with LIST-II

LIST-I (Volcano)		LIST-II (Location)	
A.	Mount Etna	I.	Australia
B.	Cotopaxi	II.	Sicily
C.	Mount Mayon	III.	Ecuador
D.	Mount Hamilton	IV.	Philippines

Choose the **correct** answer from the options given below:

1. A-I, B-III, C-II, D-IV
2. A-II, B-IV, C-I, D-III
3. A-I, B-II, C-IV, D-III
4. A-II, B-III, C-IV, D-I

Options 1. 1

2. 2
3. 3
4. 4

Question Type : **MCQ**Question ID : **6119872901**Option 1 ID : **61198711305**Option 2 ID : **61198711306**Option 3 ID : **61198711307**Option 4 ID : **61198711308**Status : **Answered**Chosen Option : **3****Q.79** Which of the following bands of Landsat satellites when used in combination will show the vegetation limits quite clearly?

1. 1 and 2
2. 2 and 3
3. 3 and 4
4. 5 and 7

Options 1. 1

2. 2
3. 3
4. 4

Question Type : **MCQ**Question ID : **6119872859**Option 1 ID : **61198711137**Option 2 ID : **61198711138**Option 3 ID : **61198711139**Option 4 ID : **61198711140**Status : **Answered**Chosen Option : **2**

Q.80 Arrange the following surfaces from lowest to highest albedo rate.

- A. Fresh snow
- B. Old snow
- C. Sand
- D. Green Forest

Choose the **correct** answer from the options given below:

- 1. A, B, C, D
- 2. D, A, B, C
- 3. A, C, D, B
- 4. D, C, B, A

Options 1. 1

2. 2

3. 3

4. 4

Question Type : **MCQ**

Question ID : **6119872877**

Option 1 ID : **61198711209**

Option 2 ID : **61198711210**

Option 3 ID : **61198711211**

Option 4 ID : **61198711212**

Status : **Answered**

Chosen Option : **1**

Q.81 Match the LIST-I with LIST-II

LIST-I (Concept)		LIST-II (Scholar)	
A.	Trickling Down and Polarisation Effect	I.	Gunnar Myrdal
B.	Cumulative Causation Model	II.	John Friedman
C.	Core Periphery Model	III.	Francis Perroux
D.	Growth Pole Model	IV.	Hirschman

Choose the **correct** answer from the options given below:

1. A-II, B-III, C-IV, D-I
2. A-I, B-IV, C-II, D-III
3. A-III, B-II, C-I, D-IV
4. A-IV, B-I, C-II, D-III

Options 1. 1

2. 2
3. 3
4. 4

Question Type : **MCQ**

Question ID : **6119872910**

Option 1 ID : **61198711341**

Option 2 ID : **61198711342**

Option 3 ID : **61198711343**

Option 4 ID : **61198711344**

Status : **Answered**

Chosen Option : **4**

Q.82 Arrange the following states of India in descending order on the basis of level of urbanization in 2011.

- A. Mizoram
- B. West Bengal
- C. Gujarat
- D. Punjab

Choose the **correct** answer from the options given below:

1. C, A, D, B
2. C, A, B, D
3. A, C, D, B
4. A, C, B, D

Options 1. 1

2. 2
3. 3
4. 4

Question Type : **MCQ**

Question ID : **6119872882**

Option 1 ID : **61198711229**

Option 2 ID : **61198711230**

Option 3 ID : **61198711231**

Option 4 ID : **61198711232**

Status : **Answered**

Chosen Option : **1**

Q.83 India signed and ratified Kyoto Protocol in which year?

1. 1997
2. 2001
3. 2002
4. 2007

Options 1. 1

2. 2
3. 3
4. 4

Question Type : **MCQ**

Question ID : **6119872834**

Option 1 ID : **61198711037**

Option 2 ID : **61198711038**

Option 3 ID : **61198711039**

Option 4 ID : **61198711040**

Status : **Answered**

Chosen Option : **1**

Q.84 Appiko movement was most similar to which of the following social movements in India?

1. Nupi-Lan
2. Save-Silent Valley
3. Chipko Movement
4. Narmada Bachao Andolan

Options 1. 1

2. 2
3. 3
4. 4

Question Type : **MCQ**

Question ID : **6119872852**

Option 1 ID : **61198711109**

Option 2 ID : **61198711110**

Option 3 ID : **61198711111**

Option 4 ID : **61198711112**

Status : **Answered**

Chosen Option : **3**

Q.85 In which one of the following regions the variability of rainfall is highest?

1. Utkal Plain
2. Rajasthan
3. Western Coastal region
4. Eastern Himalaya

Options 1. 1

2. 2
3. 3
4. 4

Question Type : **MCQ**

Question ID : **6119872863**

Option 1 ID : **61198711153**

Option 2 ID : **61198711154**

Option 3 ID : **61198711155**

Option 4 ID : **61198711156**

Status : **Answered**

Chosen Option : **4**

Q.86 Identify incorrect statements with reference to the Demographic Transition Theory:

- A. It was originally put forth by Notestein in 1929.
- B. In the early expanding stage of demographic transition total population increases with increasing rates of population growth.
- C. In low stationary stage of demographic transition infant mortality rates remain high.
- D. At continental level, Asia and Europe represent two extreme of demographic transition.

Choose the **correct** answer from the options given below:

1. B, C, and D Only
2. A, B, and C Only
3. A, B, and D Only
4. A, C, and D Only

Options 1. 1

2. 2
3. 3
4. 4

Question Type : **MCQ**

Question ID : **6119872894**

Option 1 ID : **61198711277**

Option 2 ID : **61198711278**

Option 3 ID : **61198711279**

Option 4 ID : **61198711280**

Status : **Answered**

Chosen Option : **2**

Q.87 Choose the correct statements regarding earthquakes:

- A. The first waves to reach the seismometer are S-waves.
- B. The scale of earthquake magnitude was devised in 1935.
- C. The Richter scale is used to measure the energy released by earthquakes.
- D. Earthquakes occur frequently at spreading and converging boundaries of lithospheric plates.

Choose the **correct** answer from the options given below:

- 1. B, C and D Only
- 2. B and C Only
- 3. A and C Only
- 4. B and D Only

Options 1. 1

- 2. 2
- 3. 3
- 4. 4

Question Type : **MCQ**

Question ID : **6119872890**

Option 1 ID : **61198711261**

Option 2 ID : **61198711262**

Option 3 ID : **61198711263**

Option 4 ID : **61198711264**

Status : **Answered**

Chosen Option : **3**

Q.88 Match the LIST-I with LIST-II

LIST-I (Relative Levels of Urbanisation in 2024)		LIST-II (Examples of Countries)	
A.	Highly Urbanised	I.	Sri Lanka
B.	Moderately Urbanised	II.	India
C.	Less Urbanised	III.	Austria
D.	Least Urbanised	IV.	Germany

Choose the **correct** answer from the options given below:

- 1. A-IV, B-III, C-II, D-I
- 2. A-IV, B-III, C-I, D-II
- 3. A-III, B-IV, C-I, D-II
- 4. A-III, B-IV, C-II, D-I

Options 1. 1

- 2. 2
- 3. 3
- 4. 4

Question Type : **MCQ**

Question ID : **6119872906**

Option 1 ID : **61198711325**

Option 2 ID : **61198711326**

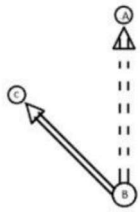
Option 3 ID : **61198711327**

Option 4 ID : **61198711328**

Status : **Answered**

Chosen Option : **1**

Q.89 The following diagram represents which one element of the spatial interaction model of Ullman?



1. Complementarity
2. Intervening opportunity
3. Transferability
4. Sustainability

Options

1. 1
2. 2
3. 3
4. 4

Question Type : **MCQ**

Question ID : **6119872843**

Option 1 ID : **61198711073**

Option 2 ID : **61198711074**

Option 3 ID : **61198711075**

Option 4 ID : **61198711076**

Status : **Answered**

Chosen Option : **3**

Q.90 Arrange the following leading exporters in world merchandise trade in 2024 in descending order of their share:

- A. Netherlands
- B. USA
- C. China
- D. Japan

Choose the **correct** answer from the options given below:

1. B, C, D, A
2. B, C, A, D
3. C, B, A, D
4. C, B, D, A

Options

1. 1
2. 2
3. 3
4. 4

Question Type : **MCQ**

Question ID : **6119872885**

Option 1 ID : **61198711241**

Option 2 ID : **61198711242**

Option 3 ID : **61198711243**

Option 4 ID : **61198711244**

Status : **Answered**

Chosen Option : **1**

Q.91 Arrange the publications of following industrial location theories in correct sequence from oldest to latest:

- A. D. M. Smith's Theory
- B. August Losch's Theory
- C. Allen Pred's Theory
- D. Alfred Weber's Theory

Choose the **correct** answer from the options given below:

- 1. C, A, D, B
- 2. D, B, A, C
- 3. A, B, C, D
- 4. D, C, A, B

Options 1. 1

- 2. 2
- 3. 3
- 4. 4

Question Type : **MCQ**

Question ID : **6119872884**

Option 1 ID : **61198711237**

Option 2 ID : **61198711238**

Option 3 ID : **61198711239**

Option 4 ID : **61198711240**

Status : **Answered**

Chosen Option : **4**

Q.92 In which of the following aerial photographs, negative is allowed to move continuously over the fixed slit?

- 1. Composite photograph
- 2. Sonne's Photograph
- 3. Timetrogon Photograph
- 4. Vertical Photograph

Options 1. 1

- 2. 2
- 3. 3
- 4. 4

Question Type : **MCQ**

Question ID : **6119872860**

Option 1 ID : **61198711141**

Option 2 ID : **61198711142**

Option 3 ID : **61198711143**

Option 4 ID : **61198711144**

Status : **Answered**

Chosen Option : **1**

Q.93 Which one of the following marine biomes is the deepest biome zone?

1. Neritic Zone
2. Hadal Zone
3. Epipelagic Zone
4. Bathypelagic Zone

Options 1. 1

2. 2
3. 3
4. 4

Question Type : **MCQ**

Question ID : **6119872836**

Option 1 ID : **61198711045**

Option 2 ID : **61198711046**

Option 3 ID : **61198711047**

Option 4 ID : **61198711048**

Status : **Answered**

Chosen Option : **4**

Q.94 Given below are two statements: one is labelled as **Assertion A** and the other is labelled as **Reason R**

Assertion A: The Harvey of "Explanation in Geography"(1969) was a transformed intellectual in "Social Justice and the city"(1973)

Reason R: The theories and methodologies of the conventional geography were proving to be utterly inadequate for the pursuit of geography as a socially relevant discipline engaged in the betterment of the human conditions.

In the light of the above statements, choose the **most appropriate** answer from the options given below

1. Both **A** and **R** are correct and **R** is the correct explanation of **A**.
2. Both **A** and **R** are correct but **R** is NOT the correct explanation of **A**.
3. **A** is correct but **R** is not correct.
4. **A** is not correct but **R** is correct.

Options 1. 1

2. 2
3. 3
4. 4

Question Type : **MCQ**

Question ID : **6119872872**

Option 1 ID : **61198711189**

Option 2 ID : **61198711190**

Option 3 ID : **61198711191**

Option 4 ID : **61198711192**

Status : **Answered**

Chosen Option : **1**

Q.95 Who among the following said that there are not necessities but everywhere possibilities; and man as master of these possibilities is the judge of their use.

1. Febvre
2. Blache
3. Brunhes
4. Spate

Options 1. 1

2. 2
3. 3
4. 4

Question Type : **MCQ**

Question ID : **6119872856**

Option 1 ID : **61198711125**

Option 2 ID : **61198711126**

Option 3 ID : **61198711127**

Option 4 ID : **61198711128**

Status : **Answered**

Chosen Option : **4**

Q.96 Match the LIST-I with LIST-II

LIST-I (Biome)		LIST-II (Country)	
A.	Tropical Evergreen Rain-forest	I.	Hungary
B.	Temperate Grassland	II.	Morocco
C.	Boreal Forest	III.	Indonesia
D.	Mediterranean	IV.	Finland

Choose the **correct** answer from the options given below:

1. A-I, B-III, C-IV, D-II
2. A-II, B-III, C-I, D-IV
3. A-III, B-I, C-IV, D-II
4. A-III, B-I, C-II, D-IV

Options 1. 1

2. 2
3. 3
4. 4

Question Type : **MCQ**

Question ID : **6119872904**

Option 1 ID : **61198711317**

Option 2 ID : **61198711318**

Option 3 ID : **61198711319**

Option 4 ID : **61198711320**

Status : **Answered**

Chosen Option : **3**

Q.97 Match the LIST-I with LIST-II

LIST-I (Process)		LIST-II (Geomorphologist)	
A.	Slope Decline Theory	I.	W. Penck
B.	Slope Replacement Theory	II.	L. C. King
C.	Parallel Retreat Theory	III.	G. K. Gilbert
D.	Graded Stream Theory	IV.	W. M. Davis

Choose the **correct** answer from the options given below:

1. A-II, B-III, C-I, D-IV
2. A-IV, B-I, C-III, D-II
3. A-II, B-IV, C-I, D-III
4. A-IV, B-I, C-II, D-III

Options 1. 1

2. 2
3. 3
4. 4

Question Type : **MCQ**Question ID : **6119872900**Option 1 ID : **61198711301**Option 2 ID : **61198711302**Option 3 ID : **61198711303**Option 4 ID : **61198711304**Status : **Answered**Chosen Option : **3****Q.98** Arrange the following religious groups of India in ascending order on the basis of percentage share in total population (2011):

- A. Jains
- B. Buddhists
- C. Sikhs
- D. Christians

Choose the **correct** answer from the options given below:

1. D, C, B, A
2. A, B, C, D
3. C, D, A, B
4. B, A, D, C

Options 1. 1

2. 2
3. 3
4. 4

Question Type : **MCQ**Question ID : **6119872887**Option 1 ID : **61198711249**Option 2 ID : **61198711250**Option 3 ID : **61198711251**Option 4 ID : **61198711252**Status : **Answered**Chosen Option : **4**

Q.99 Match the LIST-I with LIST-II

LIST-I (Industrial Region)		LIST-II (Country)	
A.	Mohawk Valley	I.	Canada
B.	Po Valley	II.	Germany
C.	Ruhr Valley	III.	USA
D.	St. Lawrence Valley	IV.	Italy

Choose the **correct** answer from the options given below:

1. A-III, B-IV, C-II, D-I
2. A-IV, B-III, C-II, D-I
3. A-III, B-I, C-II, D-IV
4. A-IV, B-III, C-I, D-II

Options 1. 1

2. 2
3. 3
4. 4

Question Type : **MCQ**Question ID : **6119872908**Option 1 ID : **61198711333**Option 2 ID : **61198711334**Option 3 ID : **61198711335**Option 4 ID : **61198711336**Status : **Answered**Chosen Option : **4****Q.100** Which of the following is regarded as the most typical value of a series that remains unaffected by the presence of extreme values?

1. Mode
2. Mean
3. Coefficient of Variation
4. Standard deviation

Options 1. 1

2. 2
3. 3
4. 4

Question Type : **MCQ**Question ID : **6119872857**Option 1 ID : **61198711129**Option 2 ID : **61198711130**Option 3 ID : **61198711131**Option 4 ID : **61198711132**Status : **Answered**Chosen Option : **4**

Q.101 Given below are two statements: one is labelled as **Assertion A** and the other is labelled as **Reason R**

Assertion A: India is in the late expanding stage of demographic transition.

Reason R: The Empowered Action Group (EAG) states have lowest total fertility rates among all states of India.

In the light of the above statements, choose the **most appropriate** answer from the options given below

1. Both **A** and **R** are correct and **R** is the correct explanation of **A**.
2. Both **A** and **R** are correct but **R** is NOT the correct explanation of **A**.
3. **A** is correct but **R** is not correct.
4. **A** is not correct but **R** is correct.

Options 1. 1

2. 2

3. 3

4. 4

Question Type : **MCQ**

Question ID : **6119872874**

Option 1 ID : **61198711197**

Option 2 ID : **61198711198**

Option 3 ID : **61198711199**

Option 4 ID : **61198711200**

Status : **Answered**

Chosen Option : **3**

Q.102 Choose the incorrect statements regarding clouds and fronts:

- A. High clouds absorb more solar radiation, warming the planet.
- B. In an occluded front a cold front overtakes a warm front.
- C. When warm air invades cold air, the boundary is a cold front.
- D. Cyclones are often called as fair-weather system.

Choose the **correct** answer from the options given below:

- 1. B and C Only
- 2. A and B Only
- 3. A and D Only
- 4. C and D Only

Options 1. 1

2. 2

3. 3

4. 4

Question Type : **MCQ**

Question ID : **6119872891**

Option 1 ID : **61198711265**

Option 2 ID : **61198711266**

Option 3 ID : **61198711267**

Option 4 ID : **61198711268**

Status : **Answered**

Chosen Option : **3**

Q.103 Arrange the following types of maps from smaller to larger scale:

- A. Million Sheet
- B. Degree Sheet
- C. Quadrant Sheet
- D. Inch Sheet

Choose the **correct** answer from the options given below:

- 1. D, C, B, A
- 2. A, B, C, D
- 3. C, D, A, B
- 4. B, A, D, C

Options 1. 1

2. 2

3. 3

4. 4

Question Type : **MCQ**

Question ID : **6119872889**

Option 1 ID : **61198711257**

Option 2 ID : **61198711258**

Option 3 ID : **61198711259**

Option 4 ID : **61198711260**

Status : **Answered**

Chosen Option : **1**

Q.104 Arrange the following countries in descending order in terms of their total population as per UN World Population Data 2024.

- A. Bangladesh
- B. Pakistan
- C. Indonesia
- D. Nigeria

Choose the **correct** answer from the options given below:

- 1. C, B, D, A
- 2. C, B, A, D
- 3. B, C, A, D
- 4. B, C, D, A

Options 1. 1

- 2. 2
- 3. 3
- 4. 4

Question Type : **MCQ**

Question ID : **6119872883**

Option 1 ID : **61198711233**

Option 2 ID : **61198711234**

Option 3 ID : **61198711235**

Option 4 ID : **61198711236**

Status : **Answered**

Chosen Option : **3**

Q.105 Scarification refers to:

- 1. Excavation and land disturbances initiated to extract mineral resources.
- 2. Spontaneous downhill motion of regolith.
- 3. Mudflows on the slopes of erupting volcanoes.
- 4. Mass wasting of Earth materials with high water content.

Options 1. 1

- 2. 2
- 3. 3
- 4. 4

Question Type : **MCQ**

Question ID : **6119872826**

Option 1 ID : **61198711005**

Option 2 ID : **61198711006**

Option 3 ID : **61198711007**

Option 4 ID : **61198711008**

Status : **Answered**

Chosen Option : **3**

Q.106 Match the LIST-I with LIST-II

LIST-I (Crop Productivity Index)		LIST-II (Applied By)	
A.	Carrying Capacity Method	I.	Bhatia
B.	Efficiency Index Method	II.	Sapre and Despande
C.	Index of Productivity Method	III.	Stamp
D.	Weighted Ranking Coefficient	IV.	Enyedi

Choose the **correct** answer from the options given below:

1. A-III, B-IV, C-II, D-I
2. A-II, B-III, C-I, D-IV
3. A-III, B-I, C-IV, D-II
4. A-IV, B-I, C-II, D-III

Options 1. 1

2. 2
3. 3
4. 4

Question Type : **MCQ**

Question ID : **6119872909**

Option 1 ID : **61198711337**

Option 2 ID : **61198711338**

Option 3 ID : **61198711339**

Option 4 ID : **61198711340**

Status : **Answered**

Chosen Option : 1

Q.107 In which of following regions the total fertility rate is highest as per UN World Population Data 2024?

1. Western Africa
2. South Asia
3. East Asia
4. Central Asia

Options 1. 1

2. 2
3. 3
4. 4

Question Type : **MCQ**

Question ID : **6119872839**

Option 1 ID : **61198711057**

Option 2 ID : **61198711058**

Option 3 ID : **61198711059**

Option 4 ID : **61198711060**

Status : **Answered**

Chosen Option : 3

Q.108 Insolation will be high when:

1. Solar radiation is back towards the space.
2. Energy is emitted at longer wavelengths.
3. Solar energy received at the earth surface is between 0.3 μm to 3.0 μm .
4. Sun is directly overhead.

Options 1. 1

2. 2
3. 3
4. 4

Question Type : **MCQ**

Question ID : **6119872830**

Option 1 ID : **61198711021**

Option 2 ID : **61198711022**

Option 3 ID : **61198711023**

Option 4 ID : **61198711024**

Status : **Answered**

Chosen Option : **4**

Q.109 Arrange the following humidity provinces in correct sequence based on the lowest to highest moisture index as proposed by Thornthwaite.

- A. Humid
- B. Dry Sub-humid
- C. Per Humid
- D. Moist sub-humid

Choose the **correct** answer from the options given below:

1. D, A, B, C
2. B, C, A, D
3. B, D, A, C
4. A, B, C, D

Options 1. 1

2. 2
3. 3
4. 4

Question Type : **MCQ**

Question ID : **6119872878**

Option 1 ID : **61198711213**

Option 2 ID : **61198711214**

Option 3 ID : **61198711215**

Option 4 ID : **61198711216**

Status : **Answered**

Chosen Option : **3**

Q.110 'The Geography of the Peace' is work of which of the following scholar?

1. Mackinder
2. Mahan
3. Spykman
4. Cohen

Options 1. 1

2. 2
3. 3
4. 4

Question Type : **MCQ**

Question ID : **6119872854**

Option 1 ID : **61198711117**

Option 2 ID : **61198711118**

Option 3 ID : **61198711119**

Option 4 ID : **61198711120**

Status : **Answered**

Chosen Option : **2**

Q.111 Identify correct statements regarding culture:

- A. Wissler produced continental scale maps of native culture areas.
- B. Ratzel's favoured culture hearths were Southeast Asia and Northwest South America.
- C. Dynamic Culture regions Tripartite model was proposed by Kniffen.
- D. Sauer's idea of culture hearth was influenced by his early work on plant domestication in Mexico.

Choose the **correct** answer from the options given below:

1. A and D Only
2. A and B Only
3. C and D Only
4. B and C Only

Options 1. 1

2. 2
3. 3
4. 4

Question Type : **MCQ**

Question ID : **6119872896**

Option 1 ID : **61198711285**

Option 2 ID : **61198711286**

Option 3 ID : **61198711287**

Option 4 ID : **61198711288**

Status : **Answered**

Chosen Option : **1**

Q.112 Which of the following is an example of exhaustible but reusable resource according to Renner?

1. Tin
2. Wind
3. Human Talent
4. Natural Gas

Options 1. 1

2. 2
3. 3
4. 4

Question Type : **MCQ**

Question ID : **6119872849**

Option 1 ID : **61198711097**

Option 2 ID : **61198711098**

Option 3 ID : **61198711099**

Option 4 ID : **61198711100**

Status : **Answered**

Chosen Option : **3**

Q.113 Arrange the following Indian environmental laws and projects in chronological order of their initiation.

- A. Biological Diversity Act
- B. The Air (Prevention and Control of Pollution) Act
- C. The Water (Prevention and Control of Pollution) Act
- D. Project Tiger

Choose the **correct** answer from the options given below:

1. D, C, B, A
2. C, D, B, A
3. C, D, A, B
4. D, C, A, B

Options 1. 1

2. 2
3. 3
4. 4

Question Type : **MCQ**

Question ID : **6119872881**

Option 1 ID : **61198711225**

Option 2 ID : **61198711226**

Option 3 ID : **61198711227**

Option 4 ID : **61198711228**

Status : **Answered**

Chosen Option : **4**

Q.114 Extreme heat and pressure transform shale into:

1. Marble
2. Quartzite
3. Slate
4. Gneiss

Options 1. 1

2. 2
3. 3
4. 4

Question Type : **MCQ**

Question ID : **6119872828**

Option 1 ID : **61198711013**

Option 2 ID : **61198711014**

Option 3 ID : **61198711015**

Option 4 ID : **61198711016**

Status : **Answered**

Chosen Option : **2**

Q.115 Which of the following stresses on openness to a range of opinions in social enquiry, artistic experimentation and political empowerment?

1. Modernism
2. Post-Modernism
3. Exceptionalism
4. Marxism

Options 1. 1

2. 2
3. 3
4. 4

Question Type : **MCQ**

Question ID : **6119872855**

Option 1 ID : **61198711121**

Option 2 ID : **61198711122**

Option 3 ID : **61198711123**

Option 4 ID : **61198711124**

Status : **Answered**

Chosen Option : **1**

Q.116 Arrange the following relief features of Atlantic Ocean from south to north.

- A. Romanche deep
- B. Dolphin ridge
- C. Walvis ridge
- D. Wyville Thomson ridge

Choose the **correct** answer from the options given below:

- 1. A, D, B, C
- 2. C, A, B, D
- 3. D, B, C, A
- 4. C, B, A, D

Options 1. 1

- 2. 2
- 3. 3
- 4. 4

Question Type : **MCQ**

Question ID : **6119872879**

Option 1 ID : **61198711217**

Option 2 ID : **61198711218**

Option 3 ID : **61198711219**

Option 4 ID : **61198711220**

Status : **Answered**

Chosen Option : **4**

Q.117 It signifies the industrial practices first associated with workplace innovations with four important elements of division of labour, standardisation, arrangement of correct sequence for production and precision of assembly line. It refers to:

- 1. Fordism
- 2. Actor-Network Theory
- 3. Commodity-chain
- 4. Agglomeration of Economies

Options 1. 1

- 2. 2
- 3. 3
- 4. 4

Question Type : **MCQ**

Question ID : **6119872847**

Option 1 ID : **61198711089**

Option 2 ID : **61198711090**

Option 3 ID : **61198711091**

Option 4 ID : **61198711092**

Status : **Answered**

Chosen Option : **2**

Q.118 Which of the following is NOT correct with reference to E-20 petrol?

1. It has 20 percent blending of ethanol bio-fuel.
2. Ethanol is a renewable fuel.
3. Ethanol blending boosts farmer's incomes
4. A NITI Aayog study has noticed that GHG (Green House Gases) emissions in case of use of sugarcane based ethanol are 65 percent higher as compared to petrol.

Options 1. 1

2. 2
3. 3
4. 4

Question Type : **MCQ**

Question ID : **6119872845**

Option 1 ID : **61198711081**

Option 2 ID : **61198711082**

Option 3 ID : **61198711083**

Option 4 ID : **61198711084**

Status : **Answered**

Chosen Option : **3**

Q.119 Identify the correct statements:

- A. Herodotus believed that all history must be treated geographically and all geography must be treated historically.
- B. Writings of Ptolemy inspired for exploration of the Terra- Incognito.
- C. Al-Masudi in his book Kitab-al-Hind gave a detailed description of the Indian Monsoon.
- D. Gerland suggested that since man could not be put to scientific analysis, study of man should be taken outside the purview of geography.

Choose the **correct** answer from the options given below:

1. A, B, and C Only
2. B, C, and D Only
3. A, C, and D Only
4. A, B, and D Only

Options 1. 1

2. 2
3. 3
4. 4

Question Type : **MCQ**

Question ID : **6119872897**

Option 1 ID : **61198711289**

Option 2 ID : **61198711290**

Option 3 ID : **61198711291**

Option 4 ID : **61198711292**

Status : **Answered**

Chosen Option : **4**

Q.120 Arrange the following lithospheric plates from south to north on the map of world.

- A. Juan De Fuca plate
- B. Scotia Plate
- C. Cocos Plate
- D. Nazca Plate

Choose the **correct** answer from the options given below:

1. B, D, C, A
2. B, C, A, D
3. B, A, D, C
4. A, B, C, D

Options 1. 1

2. 2
3. 3
4. 4

Question Type : **MCQ**

Question ID : **6119872876**

Option 1 ID : **61198711205**

Option 2 ID : **61198711206**

Option 3 ID : **61198711207**

Option 4 ID : **61198711208**

Status : **Answered**

Chosen Option : **3**

Q.121 Given below are two statements: one is labelled as **Assertion A** and the other is labelled as **Reason R**

Assertion A: Volcanic eruptions and earthquakes are quite frequent in Hawaiian Islands

Reason R: Hawaiian islands are located in Circum-pacific "Ring of Fire".

In the light of the above statements, choose the **most appropriate** answer from the options given below

1. Both **A** and **R** are correct and **R** is the correct explanation of **A**.
2. Both **A** and **R** are correct but **R** is NOT the correct explanation of **A**.
3. **A** is correct but **R** is not correct.
4. **A** is not correct but **R** is correct.

Options 1. 1

2. 2
3. 3
4. 4

Question Type : **MCQ**

Question ID : **6119872868**

Option 1 ID : **61198711173**

Option 2 ID : **61198711174**

Option 3 ID : **61198711175**

Option 4 ID : **61198711176**

Status : **Answered**

Chosen Option : **1**

Q.122 Intergovernmental Panel on Climate Change finalized AR6 Synthesis Report on Climate Change in which of the following years?

1. 2006
2. 2014
3. 2019
4. 2023

Options 1. 1

2. 2
3. 3
4. 4

Question Type : **MCQ**

Question ID : **6119872835**

Option 1 ID : **61198711041**

Option 2 ID : **61198711042**

Option 3 ID : **61198711043**

Option 4 ID : **61198711044**

Status : **Answered**

Chosen Option : **2**

Q.123 Which of the following market-based mechanisms were directly part of Kyoto Protocol as offers to countries to meet their targets?

- A. International Emission Trading
- B. Clean Development Mechanism
- C. Trade Tariffs
- D. Joint Implementation

Choose the **correct** answer from the options given below:

1. A, B, and C Only
2. B, C, and D Only
3. A, C, and D Only
4. A, B, and D Only

Options 1. 1

2. 2
3. 3
4. 4

Question Type : **MCQ**

Question ID : **6119872893**

Option 1 ID : **61198711273**

Option 2 ID : **61198711274**

Option 3 ID : **61198711275**

Option 4 ID : **61198711276**

Status : **Answered**

Chosen Option : **2**

Q.124 In which of the following states of India, the degree of primacy of the primate city as per the Law of Primate City is highest?

1. Rajasthan
2. Uttar Pradesh
3. West Bengal
4. Madhya Pradesh

Options 1. 1

2. 2
3. 3
4. 4

Question Type : **MCQ**

Question ID : **6119872838**

Option 1 ID : **61198711053**

Option 2 ID : **61198711054**

Option 3 ID : **61198711055**

Option 4 ID : **61198711056**

Status : **Answered**

Chosen Option : **3**

Q.125 Which of the following countries land area has the highest percentage of polders?

1. New Zealand
2. Poland
3. Thailand
4. Netherlands

Options 1. 1

2. 2
3. 3
4. 4

Question Type : **MCQ**

Question ID : **6119872842**

Option 1 ID : **61198711069**

Option 2 ID : **61198711070**

Option 3 ID : **61198711071**

Option 4 ID : **61198711072**

Status : **Answered**

Chosen Option : **4**

Q.126 Given below are two statements: one is labelled as **Assertion A** and the other is labelled as **Reason R**

Assertion A: Monsoon is characterised by a seasonal reversal of wind direction.

Reason R: Differential rates of heating of land and sea produces thermally induced pressure gradient.

In the light of the above statements, choose the **most appropriate** answer from the options given below

1. Both **A** and **R** are correct and **R** is the correct explanation of **A**.
2. Both **A** and **R** are correct but **R** is NOT the correct explanation of **A**.
3. **A** is correct but **R** is not correct.
4. **A** is not correct but **R** is correct.

Options 1. 1

2. 2

3. 3

4. 4

Question Type : **MCQ**

Question ID : **6119872866**

Option 1 ID : **61198711165**

Option 2 ID : **61198711166**

Option 3 ID : **61198711167**

Option 4 ID : **61198711168**

Status : **Answered**

Chosen Option : **2**

Q.127 Identify the correct statements with reference to transport in India:

- A. The rail transport share in total transport is 65 percent in the freight traffic and 85 percent in the passenger traffic.
- B. Bharatmala project was started in 2015 for the development of National Highways.
- C. National Waterway 3 runs in the western coastal region of India.
- D. Ennore port is located in the state of Tamil Nadu, India.

Choose the **correct** answer from the options given below:

1. C and D Only
2. A, B and C Only
3. B and D Only
4. B, C and D Only

Options 1. 1

2. 2

3. 3

4. 4

Question Type : **MCQ**

Question ID : **6119872899**

Option 1 ID : **61198711297**

Option 2 ID : **61198711298**

Option 3 ID : **61198711299**

Option 4 ID : **61198711300**

Status : **Answered**

Chosen Option : **2**

Q.128 In the concentric zone model of Von Thunen, firewood and timber production and crop farming without fallow fall in which pair of zones respectively?

1. Zone IV and III
2. Zone V and VII
3. Zone II and III
4. Zone VII and IV

Options 1. 1

2. 2
3. 3
4. 4

Question Type : **MCQ**

Question ID : **6119872850**

Option 1 ID : **61198711101**

Option 2 ID : **61198711102**

Option 3 ID : **61198711103**

Option 4 ID : **61198711104**

Status : **Answered**

Chosen Option : **2**

Q.129 Arrange the following regional planning programmes of India in chronological order based on their year of initiation:

- A. National Capital Region
- B. National Watershed Development Program for Rainfed Areas
- C. Command Area Development Program
- D. Desert Development Program

Choose the **correct** answer from the options given below:

1. D, C, A, B
2. D, C, B, A
3. C, D, B, A
4. C, D, A, B

Options 1. 1

2. 2
3. 3
4. 4

Question Type : **MCQ**

Question ID : **6119872886**

Option 1 ID : **61198711245**

Option 2 ID : **61198711246**

Option 3 ID : **61198711247**

Option 4 ID : **61198711248**

Status : **Answered**

Chosen Option : **2**

Q.130 Identify the correct statements regarding morphometric analysis:

- A. Drainage frequency is the relation between number of channels per unit of area.
- B. Form factor is the ratio between altitudinal variation and total relative relief.
- C. Drainage density is the relation between length of channels per unit of area.
- D. Circulatory ratio is obtained by dividing basin area by maximum basin length.

Choose the **correct** answer from the options given below:

- 1. A and B Only
- 2. B and C Only
- 3. C and D Only
- 4. A and C Only

Options 1. 1

- 2. 2
- 3. 3
- 4. 4

Question Type : **MCQ**

Question ID : **6119872898**

Option 1 ID : **61198711293**

Option 2 ID : **61198711294**

Option 3 ID : **61198711295**

Option 4 ID : **61198711296**

Status : **Answered**

Chosen Option : **1**

Q.131 Identify those agricultural regions of Whittlesey (1936) which were important in the Less Developed Countries.

- A. Shifting Cultivation
- B. Pastoral Nomadism
- C. Commercial Plantation Agriculture
- D. Commercial Livestock Ranching

Choose the **correct** answer from the options given below:

- 1. A, C, and D Only
- 2. B, C, and D Only
- 3. A, B, and C Only
- 4. A, B, and D Only

Options 1. 1

- 2. 2
- 3. 3
- 4. 4

Question Type : **MCQ**

Question ID : **6119872895**

Option 1 ID : **61198711281**

Option 2 ID : **61198711282**

Option 3 ID : **61198711283**

Option 4 ID : **61198711284**

Status : **Answered**

Chosen Option : **1**

Q.132 The frequency distribution of spot heights and hill summits refers to:

1. Hypsographic curve
2. Altimetric frequency curve
3. Clinographic curve
4. Composite profile

Options 1. 1

2. 2

3. 3

4. 4

Question Type : **MCQ**

Question ID : **6119872858**

Option 1 ID : **61198711133**

Option 2 ID : **61198711134**

Option 3 ID : **61198711135**

Option 4 ID : **61198711136**

Status : **Answered**

Chosen Option : **3**

Q.133 Thailand-Cambodia conflict of 2025 occurred in which of the geo-political regions of Mackinder?

1. Geographical Pivot
2. Heartland
3. Inner Crescent
4. Outer Crescent

Options 1. 1

2. 2

3. 3

4. 4

Question Type : **MCQ**

Question ID : **6119872853**

Option 1 ID : **61198711113**

Option 2 ID : **61198711114**

Option 3 ID : **61198711115**

Option 4 ID : **61198711116**

Status : **Answered**

Chosen Option : **3**

Q.134 Tokyo, Kawasaki and Yokohama industrial region is located in which of the following regions of Japan?

1. Kwanto Plain
2. Kinki Plain
3. Nobi Plain
4. Taranaki Lowlands

Options 1. 1

2. 2
3. 3
4. 4

Question Type : **MCQ**

Question ID : **6119872851**

Option 1 ID : **61198711105**

Option 2 ID : **61198711106**

Option 3 ID : **61198711107**

Option 4 ID : **61198711108**

Status : **Answered**

Chosen Option : **3**

Q.135 Match the LIST-I with LIST-II

LIST-I (Type of Time Series)		LIST-II (Example)	
A.	Secular	I.	Production of milk
B.	Periodic	II.	Earthquake
C.	Cyclical (Long duration)	III.	Growth of population of a country
D.	Irregular	IV.	Climate Change

Choose the **correct** answer from the options given below:

1. A-I, B-II, C-III, D-IV
2. A-IV, B-III, C-II, D-I
3. A-III, B-I, C-IV, D-II
4. A-II, B-IV, C-I, D-III

Options 1. 1

2. 2
3. 3
4. 4

Question Type : **MCQ**

Question ID : **6119872914**

Option 1 ID : **61198711357**

Option 2 ID : **61198711358**

Option 3 ID : **61198711359**

Option 4 ID : **61198711360**

Status : **Answered**

Chosen Option : **3**

Q.136 Which of the following layers of atmosphere is the home of strong, persistent winds that flow from west to east?

1. Mesosphere
2. Thermosphere
3. Stratosphere
4. Heterosphere

Options 1. 1

2. 2
3. 3
4. 4

Question Type : **MCQ**

Question ID : **6119872832**

Option 1 ID : **61198711029**

Option 2 ID : **61198711030**

Option 3 ID : **61198711031**

Option 4 ID : **61198711032**

Status : **Answered**

Chosen Option : **3**

Q.137 Match the **LIST-I** with **LIST-II**

LIST-I (Local Wind)		LIST-II (Country)	
A.	Berg	I.	Argentina
B.	Zonda	II.	Italy
C.	Samoon	III.	South Africa
D.	Sirocco	IV.	Iran

Choose the **correct** answer from the options given below:

1. A-III, B-I, C-IV, D-II
2. A-III, B-IV, C-I, D-II
3. A-II, B-IV, C-III, D-I
4. A-I, B-III, C-II, D-IV

Options 1. 1

2. 2
3. 3
4. 4

Question Type : **MCQ**

Question ID : **6119872903**

Option 1 ID : **61198711313**

Option 2 ID : **61198711314**

Option 3 ID : **61198711315**

Option 4 ID : **61198711316**

Status : **Answered**

Chosen Option : **3**

Q.138 Given below are two statements: one is labelled as **Assertion A** and the other is labelled as **Reason R**

Assertion A: The Kuroshio current system runs from Taiwan to the Bearing strait.

Reason R: Tsushima current has relatively colder temperature and it modifies the weather conditions of the Australian coast.

In the light of the above statements, choose the **most appropriate** answer from the options given below

1. Both **A** and **R** are correct and **R** is the correct explanation of **A**.
2. Both **A** and **R** are correct but **R** is NOT the correct explanation of **A**.
3. **A** is correct but **R** is not correct.
4. **A** is not correct but **R** is correct.

Options 1. 1

2. 2

3. 3

4. 4

Question Type : **MCQ**

Question ID : **6119872867**

Option 1 ID : **61198711169**

Option 2 ID : **61198711170**

Option 3 ID : **61198711171**

Option 4 ID : **61198711172**

Status : **Answered**

Chosen Option : **2**

Q.139 Enhanced Fujita Intensity scale pertains to:

1. Typhoon
2. Lightning
3. Tornado
4. Thunderstorm

Options 1. 1

2. 2

3. 3

4. 4

Question Type : **MCQ**

Question ID : **6119872831**

Option 1 ID : **61198711025**

Option 2 ID : **61198711026**

Option 3 ID : **61198711027**

Option 4 ID : **61198711028**

Status : **Answered**

Chosen Option : **3**

Q.140 Match the LIST-I with LIST-II

LIST-I (Vegetation Group)		LIST-II (Climate Type)	
A.	Hekistotherms	I.	Warm Temperate Rainy Climate
B.	Mesotherms	II.	Cold Forest Climate
C.	Megatherms	III.	Polar Climate
D.	Microtherms	IV.	Tropical Rainy Climate

Choose the **correct** answer from the options given below:

1. A-III, B-IV, C-II, D-I
2. A-IV, B-II, C-I, D-III
3. A-III, B-I, C-IV, D-II
4. A-IV, B-I, C-III, D-II

Options 1. 1

2. 2
3. 3
4. 4

Question Type : **MCQ**

Question ID : **6119872902**

Option 1 ID : **61198711309**

Option 2 ID : **61198711310**

Option 3 ID : **61198711311**

Option 4 ID : **61198711312**

Status : **Answered**

Chosen Option : **3**

Comprehension:

Read the following paragraph and answer the questions:

By the mid-1960's, once the need for precision in geographical research through increased use of statistical-mathematical techniques had been commonly accepted and the controversy regarding systematic versus regional geography resolved, the euphoria about quantitative "revolution" had greatly receded. The professionals began to look back on the course of revolution and assess the resultant gains and losses for the discipline. In human geography, alongside the rejection of the concept of strict operation of the principle of economic rationality there was a perceptible shift from deductive to inductive mode of explanation. The paper titled "The Decision Process in a Spatial Context"(1964) proved seminal in starting of the movement toward behaviouralism as an "alternative" to the normative approach to theory.

SubQuestion No : 141

Q.141 The 'quantitative revolution' phase models and theories were not based on which one of the following assumptions?

1. Man is a rational (economic) person.
2. 'Space' as an isotropic surface.
3. Focus upon the individual rather than to approach problems at the level of the social group.
4. Man has infinite or perfect knowledge of his space (environment and resources)

Options 1. 1

2. 2

3. 3

4. 4

Question Type : **MCQ**

Question ID : **6119872917**

Option 1 ID : **61198711365**

Option 2 ID : **61198711366**

Option 3 ID : **61198711367**

Option 4 ID : **61198711368**

Status : **Answered**

Chosen Option : **3**

Comprehension:

Read the following paragraph and answer the questions:

By the mid-1960's, once the need for precision in geographical research through increased use of statistical-mathematical techniques had been commonly accepted and the controversy regarding systematic versus regional geography resolved, the euphoria about quantitative "revolution" had greatly receded. The professionals began to look back on the course of revolution and assess the resultant gains and losses for the discipline. In human geography, alongside the rejection of the concept of strict operation of the principle of economic rationality there was a perceptible shift from deductive to inductive mode of explanation. The paper titled "The Decision Process in a Spatial Context"(1964) proved seminal in starting of the movement toward behaviouralism as an "alternative" to the normative approach to theory.

SubQuestion No : 142

Q.142 Who criticized the "exceptionalist" claims made for regional geography and put forward a strong case for geography to adopt the philosophy and methodology of positivism?

1. Hartshorne
2. Schaefer
3. Richthofen
4. Hettner

Options 1. 1

2. 2
3. 3
4. 4

Question Type : **MCQ**

Question ID : **6119872920**

Option 1 ID : **61198711377**

Option 2 ID : **61198711378**

Option 3 ID : **61198711379**

Option 4 ID : **61198711380**

Status : **Answered**

Chosen Option : **4**

Comprehension:

Read the following paragraph and answer the questions:

By the mid-1960's, once the need for precision in geographical research through increased use of statistical-mathematical techniques had been commonly accepted and the controversy regarding systematic versus regional geography resolved, the euphoria about quantitative "revolution" had greatly receded. The professionals began to look back on the course of revolution and assess the resultant gains and losses for the discipline. In human geography, alongside the rejection of the concept of strict operation of the principle of economic rationality there was a perceptible shift from deductive to inductive mode of explanation. The paper titled "The Decision Process in a Spatial Context"(1964) proved seminal in starting of the movement toward behaviouralism as an "alternative" to the normative approach to theory.

SubQuestion No : 143

Q.143 Which of the following is associated with behaviouralism in geography?

1. Social Physics
2. Gravity Model
3. Central Place Theory
4. Mental Maps

Options 1. 1

2. 2
3. 3
4. 4

Question Type : **MCQ**

Question ID : **6119872918**

Option 1 ID : **61198711369**

Option 2 ID : **61198711370**

Option 3 ID : **61198711371**

Option 4 ID : **61198711372**

Status : **Answered**

Chosen Option : **2**

Comprehension:

Read the following paragraph and answer the questions:

By the mid-1960's, once the need for precision in geographical research through increased use of statistical-mathematical techniques had been commonly accepted and the controversy regarding systematic versus regional geography resolved, the euphoria about quantitative "revolution" had greatly receded. The professionals began to look back on the course of revolution and assess the resultant gains and losses for the discipline. In human geography, alongside the rejection of the concept of strict operation of the principle of economic rationality there was a perceptible shift from deductive to inductive mode of explanation. The paper titled "The Decision Process in a Spatial Context"(1964) proved seminal in starting of the movement toward behaviouralism as an "alternative" to the normative approach to theory.

SubQuestion No : 144

Q.144 The paper " The Decision Process in a Spatial Context" was authored by whom?

1. Carl Sauer
2. Julian Wolpert
3. W. K. Kirk
4. Gould and White

Options 1. 1

2. 2
3. 3
4. 4

Question Type : **MCQ**

Question ID : **6119872919**

Option 1 ID : **61198711373**

Option 2 ID : **61198711374**

Option 3 ID : **61198711375**

Option 4 ID : **61198711376**

Status : **Answered**

Chosen Option : **1**

Comprehension:

Read the following paragraph and answer the questions:

By the mid-1960's, once the need for precision in geographical research through increased use of statistical-mathematical techniques had been commonly accepted and the controversy regarding systematic versus regional geography resolved, the euphoria about quantitative "revolution" had greatly receded. The professionals began to look back on the course of revolution and assess the resultant gains and losses for the discipline. In human geography, alongside the rejection of the concept of strict operation of the principle of economic rationality there was a perceptible shift from deductive to inductive mode of explanation. The paper titled "The Decision Process in a Spatial Context"(1964) proved seminal in starting of the movement toward behaviouralism as an "alternative" to the normative approach to theory.

SubQuestion No : 145

Q.145 Which of the following works first focused on a two fold division of geography into regional and systematic geography?

1. Geographia Generalis
2. Almagast
3. Anthropogeographie
4. Erdkunde

Options 1. 1

2. 2

3. 3

4. 4

Question Type : **MCQ**

Question ID : **6119872916**

Option 1 ID : **61198711361**

Option 2 ID : **61198711362**

Option 3 ID : **61198711363**

Option 4 ID : **61198711364**

Status : **Answered**

Chosen Option : **4**

Comprehension:

Read the following paragraph and answer the questions:

India is a land of great physiographic diversity. In the northern part the highest and the youngest folded mountains of world, glaciated peaks, deep valleys and gorges are present. In the southern part extends the peninsular plateau with ancient Pre-Cambrian rocks, denudated surfaces, senile topography and relict mountains. The Himalayan mountain ranges in the north and north-east along with the Andaman and Nicobar Islands are tectonic ranges and they are primarily result of plate-tectonics.

SubQuestion No : 146

Q.146 Which one of the following is NOT a tectonic island?

1. Little Andaman
2. Great Nicobar
3. Minicoy
4. Car Nicobar

Options 1. 1

2. 2

3. 3

4. 4

Question Type : **MCQ**

Question ID : **6119872924**

Option 1 ID : **61198711389**

Option 2 ID : **61198711390**

Option 3 ID : **61198711391**

Option 4 ID : **61198711392**

Status : **Answered**

Chosen Option : **3**

Comprehension:

Read the following paragraph and answer the questions:

India is a land of great physiographic diversity. In the northern part the highest and the youngest folded mountains of world, glaciated peaks, deep valleys and gorges are present. In the southern part extends the peninsular plateau with ancient Pre-Cambrian rocks, denudated surfaces, senile topography and relict mountains. The Himalayan mountain ranges in the north and north-east along with the Andaman and Nicobar Islands are tectonic ranges and they are primarily result of plate-tectonics.

SubQuestion No : 147

Q.147 Himalayas belong to which one of the following orogenies?

1. Caledonian
2. Hercynian
3. Pre-cambrian
4. Alpine

Options 1. 1

2. 2

3. 3

4. 4

Question Type : **MCQ**

Question ID : **6119872926**

Option 1 ID : **61198711397**

Option 2 ID : **61198711398**

Option 3 ID : **61198711399**

Option 4 ID : **61198711400**

Status : **Answered**

Chosen Option : **4**

Comprehension:

Read the following paragraph and answer the questions:

India is a land of great physiographic diversity. In the northern part the highest and the youngest folded mountains of world, glaciated peaks, deep valleys and gorges are present. In the southern part extends the peninsular plateau with ancient Pre-Cambrian rocks, denudated surfaces, senile topography and relict mountains. The Himalayan mountain ranges in the north and north-east along with the Andaman and Nicobar Islands are tectonic ranges and they are primarily result of plate-tectonics.

SubQuestion No : 148

Q.148 Which one of the following is a relict mountain?

1. Pir Panjal
2. Eastern Ghats
3. Mishi hills in Arunachal Pradesh
4. Lusai Hills

Options 1. 1

2. 2

3. 3

4. 4

Question Type : MCQ

Question ID : 6119872925

Option 1 ID : 61198711393

Option 2 ID : 61198711394

Option 3 ID : 61198711395

Option 4 ID : 61198711396

Status : Answered

Chosen Option : 4

Comprehension:

Read the following paragraph and answer the questions:

India is a land of great physiographic diversity. In the northern part the highest and the youngest folded mountains of world, glaciated peaks, deep valleys and gorges are present. In the southern part extends the peninsular plateau with ancient Pre-Cambrian rocks, denudated surfaces, senile topography and relict mountains. The Himalayan mountain ranges in the north and north-east along with the Andaman and Nicobar Islands are tectonic ranges and they are primarily result of plate-tectonics.

SubQuestion No : 149

Q.149 Which one of the following was a part of Gondwanaland?

1. Meghalaya plateau
2. Kashmir Valley
3. Andaman and Nicobar Islands
4. Ladakh

Options 1. 1

2. 2

3. 3

4. 4

Question Type : **MCQ**

Question ID : **6119872922**

Option 1 ID : **61198711381**

Option 2 ID : **61198711382**

Option 3 ID : **61198711383**

Option 4 ID : **61198711384**

Status : **Answered**

Chosen Option : **4**

Comprehension:

Read the following paragraph and answer the questions:

India is a land of great physiographic diversity. In the northern part the highest and the youngest folded mountains of world, glaciated peaks, deep valleys and gorges are present. In the southern part extends the peninsular plateau with ancient Pre-Cambrian rocks, denudated surfaces, senile topography and relict mountains. The Himalayan mountain ranges in the north and north-east along with the Andaman and Nicobar Islands are tectonic ranges and they are primarily result of plate-tectonics.

SubQuestion No : 150

Q.150 Which one of the following passes is NOT prone to glaciation?

1. Nathu La
2. Zoji La
3. Bhorphat
4. Rohtang pass

Options 1. 1

2. 2

3. 3

4. 4

Question Type : **MCQ**

Question ID : **6119872923**

Option 1 ID : **61198711385**

Option 2 ID : **61198711386**

Option 3 ID : **61198711387**

Option 4 ID : **61198711388**

Status : **Answered**

Chosen Option : **3**