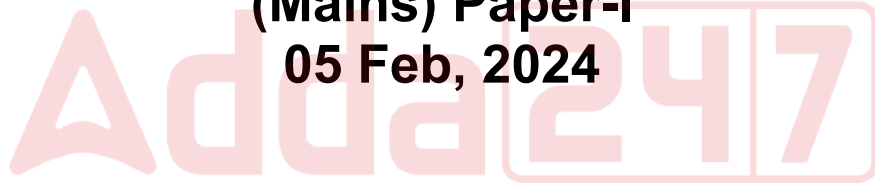


CGPDTM
Patent Examiner
Previous Year Paper
(Mains) Paper-I
05 Feb, 2024



Adda247

Test Prime

ALL EXAMS, ONE SUBSCRIPTION



1,00,000+
Mock Tests



**Personalised
Report Card**



**Unlimited
Re-Attempt**



600+
Exam Covered



25,000+ Previous
Year Papers



500%
Refund



ATTEMPT FREE MOCK NOW

DPIIT Re Exam 5th Feb 2024

Application No	
Candidate Name	
Roll No.	
Test Date	05/02/2024
Test Time	9:00 AM - 11:00 AM
Subject	Paper I

Section : General Knowledge And Current Affairs

Q.1 Which State has become the first state to launch schools under "PM SHRI" Program .?

- Options**
1. Uttarakhand
 2. Haryana
 3. Madhya Pradesh
 4. Gujarat

Question Type : **MCQ**

Question ID : **519181681**

Option 1 ID : **519181865**

Option 2 ID : **519181867**

Option 3 ID : **519181866**

Option 4 ID : **519181868**

Status : **Answered**

Chosen Option : **1**

Q.2 Which Union Ministry launched "Apna Chandrayaan Portal"?

- Options**
1. Ministry of External Affairs
 2. Ministry of Defence
 3. Ministry of Science & Technology
 4. Ministry of Education

Question Type : **MCQ**

Question ID : **519181675**

Option 1 ID : **519181843**

Option 2 ID : **519181841**

Option 3 ID : **519181844**

Option 4 ID : **519181842**

Status : **Answered**

Chosen Option : **2**

Q.3 Who has become the First Woman Director General of Military Hospital Service (MHS)?

- Options**
1. Sadhana Saxena Nair
 2. Amita Singh Verma
 3. Nandini Singh Chaddha
 4. Renuka Das Nigam

Question Type : **MCQ**

Question ID : **519181674**

Option 1 ID : **519181837**

Option 2 ID : **519181839**

Option 3 ID : **519181840**

Option 4 ID : **519181838**

Status : **Answered**

Chosen Option : **3**

Q.4 First Indian leader to make a speech in Hindi to Address UN General Assembly was _____?

- Options**
1. Shri Jawahar Lal Nehru
 2. Shri Lal Bahadur Shastri
 3. Shri Morarji Desai
 4. Shri Atal Bihari Vajpayee

Question Type : **MCQ**

Question ID : **519181666**

Option 1 ID : **519181807**

Option 2 ID : **519181806**

Option 3 ID : **519181805**

Option 4 ID : **519181808**

Status : **Answered**

Chosen Option : **4**

Q.5 Which of the following statements regarding our " National Flag " are correct

- (A). The design of the National Flag was adopted by the Constituent Assembly of India on 22nd July 1947
- (B). The Wheel on National Flag has 24 spokes
- (C). The ratio of the width of the National Flag to its length is 3:2
- (D). National Flag was designed by Pingali Venkayy

Choose the **correct** answer from the options given below:

- Options
- 1. (A), (B) and (D) only.
 - 2. (A), (B) and (C) only
 - 3. (B) and (C) only.
 - 4. (A), (C) and (D) only.

Question Type : MCQ

Question ID : 519181669

Option 1 ID : 519181820

Option 2 ID : 519181819

Option 3 ID : 519181818

Option 4 ID : 519181817

Status : Answered

Chosen Option : 2

Q.6 What is the main objective of the HARIDAY Scheme launched by Ministry of Urban Development.

- Options
- 1. Development of Urban Transport
 - 2. Development of Heritage Sites
 - 3. Health of Urban People
 - 4. Development of Smart Cities

Question Type : MCQ

Question ID : 519181678

Option 1 ID : 519181856

Option 2 ID : 519181854

Option 3 ID : 519181855

Option 4 ID : 519181853

Status : Answered

Chosen Option : 3

Q.7 As per Hindu mythology, the demon king Hiranyakashyap was killed by which Avatar of Lord Vishnu?

- Options
1. Narsimha
 2. Varah
 3. Kurm
 4. Parshuram

Question Type : **MCQ**

Question ID : **519181682**

Option 1 ID : **519181869**

Option 2 ID : **519181871**

Option 3 ID : **519181872**

Option 4 ID : **519181870**

Status : **Answered**

Chosen Option : **1**

Q.8 Which Indian has received the Ramon Magsaysay Award for the year 2023?

- Options
1. Sonam Wangchuk
 2. Thodur Madabusi Krishan
 3. Ananya Gaur
 4. Dr. Ravi Kannan R

Question Type : **MCQ**

Question ID : **519181673**

Option 1 ID : **519181835**

Option 2 ID : **519181836**

Option 3 ID : **519181834**

Option 4 ID : **519181833**

Status : **Answered**

Chosen Option : **2**

Q.9 Which Bank has launched "Amrit Mahotsav FD Scheme"?

- Options
1. SBI Bank
 2. HDFC Bank
 3. PNB Bank
 4. IDBI Bank

Question Type : **MCQ**
 Question ID : **519181676**
 Option 1 ID : **519181848**
 Option 2 ID : **519181847**
 Option 3 ID : **519181845**
 Option 4 ID : **519181846**
 Status : **Answered**
 Chosen Option : **1**

Q.10 The highest number of confirmed cases of Covid-19 was identified in:

- Options
1. United State of America
 2. India
 3. China
 4. Germany

Question Type : **MCQ**
 Question ID : **519181684**
 Option 1 ID : **519181879**
 Option 2 ID : **519181878**
 Option 3 ID : **519181877**
 Option 4 ID : **519181880**
 Status : **Answered**
 Chosen Option : **2**

Q.11 Who is known as the father of Indian Economic Reforms?

- Options
1. Naresh Chandra
 2. P.V. Narasimha Rao
 3. Dr. Manmohan Singh
 4. Rakesh Mohan

Question Type : **MCQ**
 Question ID : **519181677**
 Option 1 ID : **519181849**
 Option 2 ID : **519181851**
 Option 3 ID : **519181852**
 Option 4 ID : **519181850**
 Status : **Answered**
 Chosen Option : **3**

Q.12 First Indian to orbit in Space is.....

- Options
1. Kalpana Chawla
 2. Raja Chari
 3. Rakesh Sharma
 4. Sunita Williams

Question Type : MCQ

Question ID : 519181671

Option 1 ID : 519181826

Option 2 ID : 519181825

Option 3 ID : 519181828

Option 4 ID : 519181827

Status : Answered

Chosen Option : 3

Q.13 Which Country will host BRICS 2024?

- Options
1. Brazil
 2. India
 3. Russia
 4. China

Question Type : MCQ

Question ID : 519181680

Option 1 ID : 519181862

Option 2 ID : 519181863

Option 3 ID : 519181861

Option 4 ID : 519181864

Status : Answered

Chosen Option : 1

Q.14 Match List-I with List-II

List-I	List-II
Movements/ Satyagraha	Lead by
(A). Bardoli Satya graha	(I). Dr. B.R. Ambedkar
(B). Champaran Movement	(II). Bal Ganga Dhar Tilak/ Annie Besant
(C). Mahad/Chavdar Tale Satyagraha	(III). Sardar Vallabhai Patel
(D). Home Rule Movement	(IV). Mahatma Gandhi

Choose the **correct** answer from the options given below:

- Options
1. (A) - (III), (B) - (IV), (C) - (II), (D) - (I)
 2. (A) - (III), (B) - (I), (C) - (IV), (D) - (II)
 3. (A) - (IV), (B) - (III), (C) - (I), (D) - (II)
 4. (A) - (III), (B) - (IV), (C) - (I), (D) - (II)

Question Type : MCQ

Question ID : 519181668

Option 1 ID : 519181814

Option 2 ID : 519181813

Option 3 ID : 519181815

Option 4 ID : 519181816

Status : Answered

Chosen Option : 4

Q.15 India's first "Underground Power Transformer" has been installed in:

- Options
1. Bikaner
 2. Jabalpur
 3. Bengaluru
 4. Ahmedabad

Question Type : MCQ

Question ID : 519181683

Option 1 ID : 519181873

Option 2 ID : 519181876

Option 3 ID : 519181875

Option 4 ID : 519181874

Status : Answered

Chosen Option : 2

Q.16 Match List-I with List-II

List-I (Temple,Location)	List-II (Associated Dynasty)
(A) Ramappa Temple, Telangana	(i) Solankies/ Chaulukyas
(B) Modhera Sun Temple,Gujarat	(II) Bundeles/ Chandeles
(C) Kailash Nath Temple, Tamil Nadu	(III) Kakatiyas
(D) Khajuraho Temple, Madhya Pradesh	(IV) Pallavas

Choose the **correct** answer from the options given below:

- Options
1. (A) - (III), (B) - (IV), (C) - (I), (D) - (II)
 2. (A) - (III), (B) - (I), (C) - (IV), (D) - (II)
 3. (A) - (III), (B) - (I), (C) - (II), (D) - (IV)
 4. (A) - (I), (B) - (III), (C) - (IV), (D) - (II)

Question Type : MCQ

Question ID : 519181667

Option 1 ID : 519181812

Option 2 ID : 519181810

Option 3 ID : 519181809

Option 4 ID : 519181811

Status : Answered

Chosen Option : 3

Q.17 In which country did Indian External Affairs Minister recently unveiled the bust of Gurudev Rabindranath Tagore?

- Options
1. Argentina
 2. Thailand
 3. Vietnam
 4. Bangladesh

Question Type : MCQ

Question ID : 519181679

Option 1 ID : 519181857

Option 2 ID : 519181860

Option 3 ID : 519181859

Option 4 ID : 519181858

Status : Answered

Chosen Option : 3

Q.18 Match List-I with List-II

List-I	List-II
Water falls of India	Location (State)
(A) Dudhsagar	(I) Tamil Nadu
(B) Jog	(II) Odisha
(C) Khandadhar	(III) Karnataka
(D) Thalaiyar	(IV) Goa

Choose the **correct** answer from the options given below:

- Options
1. (A) - (IV), (B) - (III), (C) - (II), (D) - (I)
 2. (A) - (II), (B) - (III), (C) - (I), (D) - (IV)
 3. (A) - (IV), (B) - (I), (C) - (III), (D) - (II)
 4. (A) - (IV), (B) - (II), (C) - (III), (D) - (I)

Question Type : MCQ

Question ID : 519181665

Option 1 ID : 519181804

Option 2 ID : 519181801

Option 3 ID : 519181803

Option 4 ID : 519181802

Status : Answered

Chosen Option : 1

Q.19 Arrange the following Socio ecological Movements in correct chronological order

- (A). Bishnoi movement
- (B). Narmada Bachao movement
- (C). Chipko movement
- (D). Silent Valley movement
- (E). Appiko movement

Choose the **correct** answer from the options given below:

- Options
1. A, C, D, B, E
 2. A,D, C, B, E
 3. A, C, D, E, B
 4. C, D, A, E, B

Question Type : MCQ

Question ID : 519181672

Option 1 ID : 519181831

Option 2 ID : 519181829

Option 3 ID : 519181830

Option 4 ID : 519181832

Status : Answered

Chosen Option : 3

Q.20 Match List-I with List-II

List-I	List-II
Folk Dances	States/UT
(A). Lavani	(I). Assam
(B). Ottam	(II). Odisha
(C). Savari	(III). Maharashtra
(D). Bihu	(IV). Kerala

Choose the **correct** answer from the options given below:

- Options
- (A) - (IV), (B) - (III), (C) - (II), (D) - (I)
 - (A) - (III), (B) - (IV), (C) - (II), (D) - (I)
 - (A) - (IV), (B) - (I), (C) - (II), (D) - (III)
 - (A) - (III), (B) - (II), (C) - (IV), (D) - (I)

Question Type : MCQ

Question ID : 519181670

Option 1 ID : 519181822

Option 2 ID : 519181821

Option 3 ID : 519181824

Option 4 ID : 519181823

Status : Answered

Chosen Option : 2

Section : General Aptitude

Q.21 In given question choose the missing term in place of question mark (?) on the basis of the relation between the word given on the left/right side of the sign of analogy :

BHARAT: 281912 :: DELHI: ____?____

- Options**
1. 45189
 2. 45389
 3. 45398
 4. 45289

Question Type : **MCQ**

Question ID : **519181702**

Option 1 ID : **519181952**

Option 2 ID : **519181951**

Option 3 ID : **519181950**

Option 4 ID : **519181949**

Status : **Answered**

Chosen Option : **2**



Q.22 Given below are statements followed by two conclusions number I and II.

Statements:

All books are pens.

Some pens are desks.

Some desks are chairs.

Some chairs are tables

Conclusions:

I. Some tables are desks

II. Some chairs are pens.

Identify which of the given conclusions follows the statements

- Options
1. Only conclusion I is true
 2. Both conclusion I and II are true
 3. Neither conclusion (I) nor (II) is true
 4. Only conclusion II is true

Question Type : MCQ

Question ID : 519181687

Option 1 ID : 519181890

Option 2 ID : 519181892

Option 3 ID : 519181889

Option 4 ID : 519181891

Status : Answered

Chosen Option : 3

Q.23 If 25th December, 1995 is a Monday, then what day is 25th December 2005?

- Options**
1. Sunday
 2. Tuesday
 3. Saturday
 4. Monday

Question Type : **MCQ**
 Question ID : **519181688**
 Option 1 ID : **519181896**
 Option 2 ID : **519181894**
 Option 3 ID : **519181895**
 Option 4 ID : **519181893**
 Status : **Answered**
 Chosen Option : **1**

Q.24 Find the missing term in the following letter-number series:

2A11, 4D13, 12G17, 48J23, ?

- Options**
1. 148J21
 2. 136J29
 3. 240N31
 4. 240M31

Question Type : **MCQ**
 Question ID : **519181692**
 Option 1 ID : **519181911**
 Option 2 ID : **519181910**
 Option 3 ID : **519181909**
 Option 4 ID : **519181912**
 Status : **Answered**
 Chosen Option : **4**

Q.25 Ankit is facing in which direction?

Statement (I): Sita is facing east direction and if she turns to her right she will face Azim.

Statement (II): Ankit is facing opposite direction as that of Kavya who is facing Sita.

In light of the above statements, choose the *most appropriate* answer from the options given below.

- Options
1. If data given in both statements I and II together are necessary to answer the question.
 2. If data in the Statement I alone is sufficient to answer the question
 3. If data given in both I and II together are not sufficient to answer the question.
 4. If data in the Statement II alone is sufficient to answer the question

Question Type : **MCQ**

Question ID : **519181694**

Option 1 ID : **519181920**

Option 2 ID : **519181917**

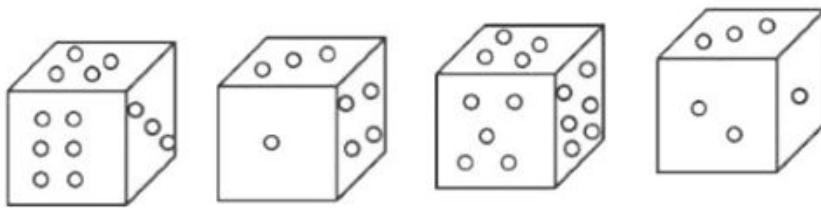
Option 3 ID : **519181919**

Option 4 ID : **519181918**

Status : **Answered**

Chosen Option : **1**

Q.26 How many dots are there on the dice face opposite the one with three dots?



Options 1. 1

2. 5

3. 6

4. 4

Question Type : MCQ

Question ID : 519181701

Option 1 ID : 519181948

Option 2 ID : 519181946

Option 3 ID : 519181947

Option 4 ID : 519181945

Status : Answered

Chosen Option : 2

Q.27 Given below are statements and conclusion:

Statement :

$$E = G \geq H = N, C > F \geq M = N$$

Conclusion :

I. $F \geq E$

II. $E \geq M$

III. $C \geq G$

In light of the above statements, Which conclusion is true ?

Options 1. Only I and III is true

2. Only III is true

3. Only II is true

4. Only I is true

Question Type : MCQ

Question ID : 519181689

Option 1 ID : 519181899

Option 2 ID : 519181900

Option 3 ID : 519181898

Option 4 ID : 519181897

Status : Answered

Chosen Option : 3

Q.28 Study the following letter series and give the answer of the question based on the letter series.

ABC FED GHI LKJ MNORQP STUXWVYZ

How many letters are not at their usual place in the alphabetical order if compared with the exact alphabetical series?

- Options
1. 7
 2. 9
 3. 10
 4. 8

Question Type : **MCQ**
 Question ID : **519181703**
 Option 1 ID : **519181953**
 Option 2 ID : **519181954**
 Option 3 ID : **519181956**
 Option 4 ID : **519181955**
 Status : **Answered**
 Chosen Option : **4**

Q.29 Rearrange the unorganised letters to create meaningful words and then choose the one which is different from others.

- A. ENNI
 B. NEO
 C. EPPI
 D. REETH

- Options
1. A
 2. D
 3. B
 4. C

Question Type : **MCQ**
 Question ID : **519181700**
 Option 1 ID : **519181944**
 Option 2 ID : **519181941**
 Option 3 ID : **519181942**
 Option 4 ID : **519181943**
 Status : **Answered**
 Chosen Option : **2**

Q.30 The clock was set correct on Thursday at 5 AM. If the clock gains 20 minutes per hour, then what will be the time that the clock shows on Friday, 9:30 PM?

- Options**
1. 10 AM of Saturday
 2. 10:30 AM of Saturday
 3. 11:30 AM of Saturday
 4. 11 AM of Saturday

Question Type : **MCQ**
 Question ID : **519181693**
 Option 1 ID : **519181913**
 Option 2 ID : **519181915**
 Option 3 ID : **519181916**
 Option 4 ID : **519181914**
 Status : **Answered**
 Chosen Option : **4**

Q.31 Read the given information and answer the following questions.

- (I). 'PXQ' means 'P is father of Q'
 (II). 'P-Q' means 'P is sister of Q'
 (III). 'P+Q' means 'P is the mother of Q'
 (IV). 'P÷Q' means 'P is brother of Q'

In the expression $B+DXM+N$, how is M related to B?

- Options**
1. Granddaughter
 2. Grandson
 3. Grandmother
 4. Son

Question Type : **MCQ**
 Question ID : **519181695**
 Option 1 ID : **519181923**
 Option 2 ID : **519181924**
 Option 3 ID : **519181921**
 Option 4 ID : **519181922**
 Status : **Answered**
 Chosen Option : **2**

Q.32 Six boys A,B,C,D,E, and F are sitting around a circular table facing towards the centre (not necessarily in the same order). B is second to the right of A.E is to the immediate right of C.C and D are facing towards each other, Who is sitting third to the right of A?

- Options**
1. E
 2. F
 3. D
 4. B

Question Type : **MCQ**

Question ID : **519181696**

Option 1 ID : **519181927**

Option 2 ID : **519181928**

Option 3 ID : **519181926**

Option 4 ID : **519181925**

Status : **Answered**

Chosen Option : **2**

Q.33 Find the next term in the alpha numeric series:

Q34M, M18J, I9G, E5D, ?

- Options**
1. A1A
 2. D4A
 3. A2B
 4. A4A

Question Type : **MCQ**

Question ID : **519181691**

Option 1 ID : **519181907**

Option 2 ID : **519181908**

Option 3 ID : **519181906**

Option 4 ID : **519181905**

Status : **Answered**

Chosen Option : **1**

Q.34 In a code language, "MANGO" is code as "ODRLU". In the same language, "PEACH" will be coded as :

- Options
1. RHHNE
 2. RHENH
 3. RHEHN
 4. REHNH

Question Type : MCQ
Question ID : 519181686
Option 1 ID : 519181888
Option 2 ID : 519181887
Option 3 ID : 519181886
Option 4 ID : 519181885
Status : Answered
Chosen Option : 3

Q.35 Ravi is facing North-West. He turns in clockwise direction by 90° , then 180° in the anti-clockwise direction and then another 90° in the same direction. Which direction is he facing now?

- Options
1. South-East
 2. South-West
 3. West
 4. South

Question Type : MCQ
Question ID : 519181685
Option 1 ID : 519181883
Option 2 ID : 519181882
Option 3 ID : 519181881
Option 4 ID : 519181884
Status : Answered
Chosen Option : 1

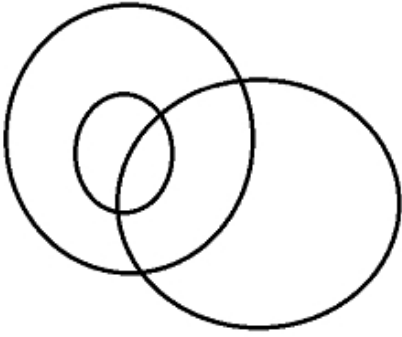
Q.36 Which of the following diagrams includes the best relation between:

Women, Mothers and Doctors

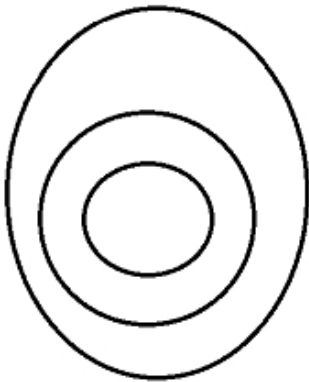
Options



2.



3.



4.



Question Type : **MCQ**

Question ID : **519181697**

Option 1 ID : **519181929**

Option 2 ID : **519181932**

Option 3 ID : **519181930**

Option 4 ID : **519181931**

Status : **Answered**

Chosen Option : **2**

Q.37 Statement: The potential of any individual can be developed with the help of cooperative social relationship in our society

Assumption:

- (A) There is an aspiration of prosperity in every society
- (B) Every person wants to develop his/her potential
- (C) In any society, we can establish and sustain cooperative environment

Which of the assumption is implicate in the statement

- Options**
- 1. Both A and C only
 - 2. Both B and C only
 - 3. A only
 - 4. B only

Question Type : **MCQ**

Question ID : **519181698**

Option 1 ID : **519181934**

Option 2 ID : **519181935**

Option 3 ID : **519181936**

Option 4 ID : **519181933**

Status : **Answered**

Chosen Option : **1**

Q.38 Which is the fourth number to the right of the number which is exactly in the middle of the following sequence of numbers?

1 2 4 3 7 6 8 9 7 6 6 4 3 1 2 3 4 8 9 2 5 5 3 4 3 2 9

- Options**
- 1. 8
 - 2. 6
 - 3. 3
 - 4. 7

Question Type : **MCQ**

Question ID : **519181699**

Option 1 ID : **519181939**

Option 2 ID : **519181938**

Option 3 ID : **519181940**

Option 4 ID : **519181937**

Status : **Answered**

Chosen Option : **1**

Q.39 In a march past, seven persons are standing in a row. Q is standing left to R but right to P. O is standing right to N and left to P. Similarly, S is standing right to R and left to T. Find out who is standing in the middle?

- Options**
1. Q
 2. R
 3. P
 4. O

Question Type : **MCQ**

Question ID : **519181690**

Option 1 ID : **519181903**

Option 2 ID : **519181904**

Option 3 ID : **519181902**

Option 4 ID : **519181901**

Status : **Answered**

Chosen Option : **1**

Q.40 There are five different houses A to E in a row. A is to the right of B, and E is to the left of C and right of A. B is to the right of D. Which of the house is in the extreme right?

- Options**
1. C
 2. B
 3. D
 4. A

Question Type : **MCQ**

Question ID : **519181704**

Option 1 ID : **519181959**

Option 2 ID : **519181958**

Option 3 ID : **519181960**

Option 4 ID : **519181957**

Status : **Answered**

Chosen Option : **1**

Q.41 Point O is the circumcentre of a $\triangle ABC$. If $\angle BCA = 55^\circ$ and $\angle BAC = 75^\circ$, then $\angle OAC =$

- Options
1. 50°
 2. 40°
 3. $37\frac{1}{2}^\circ$
 4. $27\frac{1}{2}^\circ$

Question Type : MCQ

Question ID : 519181723

Option 1 ID : 5191811036

Option 2 ID : 5191811035

Option 3 ID : 5191811034

Option 4 ID : 5191811033

Status : Answered

Chosen Option : 3

Q.42 Kaushal travelled for 2 hours 15 minutes at the speed of 40 km/h. At what speed should he travel to cover the same distance in 2 hours?

- Options
1. 48 Km/h
 2. 44 Km/h
 3. 45 Km/h
 4. 48.5 Km/h

Question Type : MCQ

Question ID : 519181706

Option 1 ID : 519181965

Option 2 ID : 519181967

Option 3 ID : 519181966

Option 4 ID : 519181968

Status : Answered

Chosen Option : 2

Q.43 A trader sold an article at a loss of 5% but when he increased the selling price by Rs. 65, he gained $3\frac{1}{3}\%$. If he sells the same article at Rs. 936, what is the profit percentage?

- Options**
1. 25%
 2. 10%
 3. 30%
 4. 20%

Question Type : **MCQ**

Question ID : **519181710**

Option 1 ID : **519181983**

Option 2 ID : **519181981**

Option 3 ID : **519181984**

Option 4 ID : **519181982**

Status : **Not Answered**

Chosen Option : --

Q.44 What is the reciprocal of the sum of the reciprocals of $\frac{8}{5}$ and $\frac{-5}{3}$?

- Options**
1. -15
 2. $-\frac{1}{15}$
 3. $\frac{11}{5}$
 4. 40

Question Type : **MCQ**

Question ID : **519181721**

Option 1 ID : **5191811025**

Option 2 ID : **5191811026**

Option 3 ID : **5191811027**

Option 4 ID : **5191811028**

Status : **Answered**

Chosen Option : 1

Q.45 A started a business by investing Rs. 48000 and later B joined him by investing Rs. 40,000. After some time they shared the profit in the ratio 3:2. Find the ratio of their periods of investment.

- Options
1. 9:5
 2. 4:5
 3. 5:4
 4. 5:9

Question Type : **MCQ**

Question ID : **519181719**

Option 1 ID : **5191811019**

Option 2 ID : **5191811017**

Option 3 ID : **5191811018**

Option 4 ID : **5191811020**

Status : **Answered**

Chosen Option : **1**

Q.46 The value of $\frac{\cos 10^\circ}{\sin 80^\circ} + \frac{\sec 22^\circ}{\operatorname{cosec} 68^\circ} - \sin 90^\circ - \tan 45^\circ$ is

- Options
1. $1 - \sqrt{3}$
 2. 0
 3. 4
 4. 2

Question Type : **MCQ**

Question ID : **519181707**

Option 1 ID : **519181972**

Option 2 ID : **519181971**

Option 3 ID : **519181969**

Option 4 ID : **519181970**

Status : **Answered**

Chosen Option : **2**

Q.47 In an office 60% of the staff is male. In an election in the office, 40% of the females and 60% of the males voted for Anju. The percentage of votes Anju got was

- Options**
1. 52%
 2. 42%
 3. 50%
 4. 54%

Question Type : **MCQ**

Question ID : **519181711**

Option 1 ID : **519181987**

Option 2 ID : **519181985**

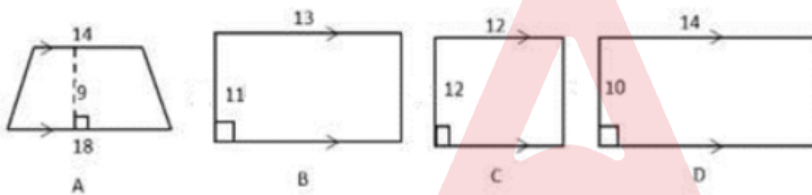
Option 3 ID : **519181986**

Option 4 ID : **519181988**

Status : **Answered**

Chosen Option : **1**

Q.48 Which two figures have an equal area?



- Options**
1. A and D
 2. A and C
 3. A and B
 4. B and D

Question Type : **MCQ**

Question ID : **519181714**

Option 1 ID : **5191811000**

Option 2 ID : **519181999**

Option 3 ID : **519181997**

Option 4 ID : **519181998**

Status : **Answered**

Chosen Option : **2**

Q.49 A, B and C working together can do a work in 10 days. If A's efficiency to do the work is 3 times that of C and B's efficiency to do the same work is 2 times that of C, then in how many days can A alone do the same work?

- Options**
1. 30
 2. 45
 3. 24
 4. 20

Question Type : **MCQ**
 Question ID : **519181705**
 Option 1 ID : **519181962**
 Option 2 ID : **519181961**
 Option 3 ID : **519181963**
 Option 4 ID : **519181964**
 Status : **Answered**
 Chosen Option : 1

Q.50 A well of diameter 3 m is dug 14 m deep. The earth taken out is spread evenly all around. It in the shape of a circular ring of width 4 m to form an embankment. The height of the embankment is.

- Options**
1. 2.5 m
 2. 3 m
 3. 1.125 m
 4. 1.25 m

Question Type : **MCQ**
 Question ID : **519181713**
 Option 1 ID : **519181993**
 Option 2 ID : **519181996**
 Option 3 ID : **519181995**
 Option 4 ID : **519181994**
 Status : **Answered**
 Chosen Option : 3

Q.51 How much rice (in kg) costing ₹ 108/kg be mixed with 16 kg rice costing ₹ 93/kg so that the mixture be worth ₹ 100/ kg?

- Options
1. 14
 2. 13.5
 3. 13
 4. 15

Question Type : MCQ

Question ID : 519181718

Option 1 ID : 5191811014

Option 2 ID : 5191811015

Option 3 ID : 5191811016

Option 4 ID : 5191811013

Status : Answered

Chosen Option : 4

Q.52 Sahil made a profit of 10% by selling a pen after offering a discount of 12% if the marked price of the pen is Rs. 1080, then find its cost price (in Rs.).

- Options
1. 854
 2. 870
 3. 850
 4. 864

Question Type : MCQ

Question ID : 519181708

Option 1 ID : 519181974

Option 2 ID : 519181976

Option 3 ID : 519181973

Option 4 ID : 519181975

Status : Not Answered

Chosen Option : --

Q.53 On a certain sum, difference between compound interest and simple interest at 8% per annum for 2 years is Rs. 192. What is the sum (in Rs)?

- Options**
1. 30000
 2. 28000
 3. 32500
 4. 24000

Question Type : **MCQ**

Question ID : **519181724**

Option 1 ID : **5191811039**

Option 2 ID : **5191811038**

Option 3 ID : **5191811040**

Option 4 ID : **5191811037**

Status : **Answered**

Chosen Option : **2**

Q.54 The incomes of Akhils, Bhanu and Ketan are in the ratio 5:7:8 and their expenses are in the ratio 4:5:6. If Akhil saves Rs. 3000 out of his total income of Rs. 25000, then the total of savings of Akhil, Bhanu and Ketan (in Rs.) is

- Options**
1. 17000
 2. 17500
 3. 17800
 4. 17680

Question Type : **MCQ**

Question ID : **519181717**

Option 1 ID : **5191811009**

Option 2 ID : **5191811010**

Option 3 ID : **5191811012**

Option 4 ID : **5191811011**

Status : **Answered**

Chosen Option : **1**

Q.55 Simplify:

$$100 \div 10 \times 2 + 3 \times 4 - 1$$

- Options
1. 31
 2. 75
 3. 16
 4. 150

Question Type : MCQ

Question ID : 519181722

Option 1 ID : 5191811031

Option 2 ID : 5191811030

Option 3 ID : 5191811032

Option 4 ID : 5191811029

Status : Answered

Chosen Option : 3

Q.56 Find the greatest value of K if mode of 4, k, 2k, 8, k+1, 4, 6, 8 is 4.

- Options
1. 1
 2. 2
 3. 3
 4. 4

Question Type : MCQ

Question ID : 519181720

Option 1 ID : 5191811024

Option 2 ID : 5191811021

Option 3 ID : 5191811022

Option 4 ID : 5191811023

Status : Answered

Chosen Option : 4

Q.57 The average of 10 natural numbers is 15. If the average of seven of these numbers is 18 and the remaining three are consecutive natural numbers, then find the smallest of the three numbers?

- Options**
1. 6
 2. 7
 3. 9
 4. 8

Question Type : **MCQ**

Question ID : **519181715**

Option 1 ID : **5191811001**

Option 2 ID : **5191811002**

Option 3 ID : **5191811004**

Option 4 ID : **5191811003**

Status : **Not Answered**

Chosen Option : --

Q.58 There is 60% increase in an amount in 6 years on simple interest. What will be the compound interest of Rs. 20,000 after 3 years at the same rate of interest?

- Options**
1. Rs.5620
 2. Rs.4520
 3. Rs.4620
 4. Rs.6620

Question Type : **MCQ**

Question ID : **519181712**

Option 1 ID : **519181991**

Option 2 ID : **519181989**

Option 3 ID : **519181990**

Option 4 ID : **519181992**

Status : **Answered**

Chosen Option : **3**

Q.59 The sum of reciprocal of a number and reciprocal of three fifth of the number is $\frac{1}{9}$ what is one-third of the number?

- Options**
1. 6
 2. 8
 3. 5
 4. 18

Question Type : **MCQ**
 Question ID : **519181716**
 Option 1 ID : **5191811006**
 Option 2 ID : **5191811007**
 Option 3 ID : **5191811005**
 Option 4 ID : **5191811008**
 Status : **Answered**
 Chosen Option : 1

Q.60 A manufacturer earns 20% profit by selling an article for Rs. 2640. If the production cost is increased by 15% , then for how much should he sell the article to gain 10% ?

- Options**
1. Rs. 2873
 2. Rs. 2738
 3. Rs. 2420
 4. Rs. 2783

Question Type : **MCQ**
 Question ID : **519181709**
 Option 1 ID : **519181980**
 Option 2 ID : **519181978**
 Option 3 ID : **519181977**
 Option 4 ID : **519181979**
 Status : **Answered**
 Chosen Option : 3

Section : English Language Proficiency

Comprehension:

Read the passage carefully and answer the questions that follow:

Out of the nearly one lakh e-rickshaws that continue to mushroom across the capital unabated, a majority are running on old and relatively unsafe lead acid batteries, according to officials in the Delhi government.

A ubiquitous sight on Delhi's streets and the preferred mode of travel for last-mile connectivity for the common man, e-rickshaws are marred by several issues including overloading and non-adherence to traffic laws, agencies including the Transport Department and the Traffic Police said.

Two weeks back, a 42-year-old woman died of severe burn injuries after the e-rickshaw she was travelling in burst into flames following a suspected battery malfunction in northeast delhi.

E-carts have, in step with e-rickshaws, proliferated as well with almost 13,000 currently registered and operating in the city. According to government sources these too function predominantly on lead acid batteries, especially their unregistered variety that is commonly known as 'jugaad'.

A senior Delhi government official said the Vaahan Dashboard, which is the Government of India's official portal to track vehicle registration, doesn't capture the data on the battery type of the e-rickshaw.

According to sources in the Delhi government, the case tragically underscored the need to rein in such vehicles, especially in light of estimates that only a little over 20% of the e-rickshaws registered in 2023 operate on lithium-ion batteries, which are considered safer than the lead acid variety.

SubQuestion No : 61

Q.61 A portal to register small vehicles

- Options**
1. A road rage incident.
 2. She was electrocuted due to a faulty wire.
 3. Battery malfunction in an e-rickshaw.
 4. An accident between an e-rickshaw and a lorry

Question Type : **MCQ**

Question ID : 519181727

Option 1 ID : 5191811045

Option 2 ID : 5191811047

Option 3 ID : 5191811046

Option 4 ID : 5191811048

Status : Answered

Chosen Option : 3

Comprehension:

Read the passage carefully and answer the questions that follow:

Out of the nearly one lakh e-rickshaws that continue to mushroom across the capital unabated, a majority are running on old and relatively unsafe lead acid batteries, according to officials in the Delhi government.

A ubiquitous sight on Delhi's streets and the preferred mode of travel for last-mile connectivity for the common man, e-rickshaws are marred by several issues including overloading and non-adherence to traffic laws, agencies including the Transport Department and the Traffic Police said.

Two weeks back, a 42-year-old woman died of severe burn injuries after the e-rickshaw she was travelling in burst into flames following a suspected battery malfunction in northeast delhi.

E-carts have, in step with e-rickshaws, proliferated as well with almost 13,000 currently registered and operating in the city. According to government sources these too function predominantly on lead acid batteries, especially their unregistered variety that is commonly known as 'jugaad'.

A senior Delhi government official said the Vaahan Dashboard, which is the Government of India's official portal to track vehicle registration, doesn't capture the data on the battery type of the e-rickshaw.

According to sources in the Delhi government, the case tragically underscored the need to rein in such vehicles, especially in light of estimates that only a little over 20% of the e-rickshaws registered in 2023 operate on lithium-ion batteries, which are considered safer than the lead acid variety.

SubQuestion No : 62

Indian Government's portal for lead acid batteries

- Options
1. A portal to register small vehicles
 2. A site to track unregistered vehicles instantly
 3. Indian Government's portal for lead acid batteries
 4. Indian government's official portal to track vehicles registrations.

Question Type : **MCQ**

Question ID : **519181726**

Option 1 ID : **5191811042**

Option 2 ID : **5191811043**

Option 3 ID : **5191811041**

Option 4 ID : **5191811044**

Status : **Answered**

Chosen Option : **4**

Comprehension:



Read the passage carefully and answer the questions that follow:

Out of the nearly one lakh e-rickshaws that continue to mushroom across the capital unabated, a majority are running on old and relatively unsafe lead acid batteries, according to officials in the Delhi government.

A ubiquitous sight on Delhi's streets and the preferred mode of travel for last-mile connectivity for the common man, e-rickshaws are marred by several issues including overloading and non-adherence to traffic laws, agencies including the Transport Department and the Traffic Police said.

Two weeks back, a 42-year-old woman died of severe burn injuries after the e-rickshaw she was travelling in burst into flames following a suspected battery malfunction in northeast delhi.

E-carts have, in step with e-rickshaws, proliferated as well with almost 13,000 currently registered and operating in the city. According to government sources these too function predominantly on lead acid batteries, especially their unregistered variety that is commonly known as 'jugaad'.

A senior Delhi government official said the Vaahan Dashboard, which is the Government of India's official portal to track vehicle registration, doesn't capture the data on the battery type of the e-rickshaw.

According to sources in the Delhi government, the case tragically underscored the need to rein in such vehicles, especially in light of estimates that only a little over 20% of the e-rickshaws registered in 2023 operate on lithium-ion batteries, which are considered safer than the lead acid variety.

SubQuestion No : 63

Q.63 A site to track unregistered vehicles instantly

- Options**
1. Lead - acid batteries
 2. Unregistered lead acid - batteries.
 3. Registered lead acid - batteries.
 4. Lithium - ion batteries.

Question Type : **MCQ**

Question ID : 519181728

Option 1 ID : 5191811049

Option 2 ID : 5191811051

Option 3 ID : 5191811052

Option 4 ID : 5191811050

Status : Answered

Chosen Option : 2

Comprehension:

Read the passage carefully and answer the questions that follow:

Out of the nearly one lakh e-rickshaws that continue to mushroom across the capital unabated, a majority are running on old and relatively unsafe lead acid batteries, according to officials in the Delhi government.

A ubiquitous sight on Delhi's streets and the preferred mode of travel for last-mile connectivity for the common man, e-rickshaws are marred by several issues including overloading and non-adherence to traffic laws, agencies including the Transport Department and the Traffic Police said.

Two weeks back, a 42-year-old woman died of severe burn injuries after the e-rickshaw she was travelling in burst into flames following a suspected battery malfunction in northeast Delhi.

E-carts have, in step with e-rickshaws, proliferated as well with almost 13,000 currently registered and operating in the city. According to government sources these too function predominantly on lead acid batteries, especially their unregistered variety that is commonly known as 'jugaad'.

A senior Delhi government official said the Vaahan Dashboard, which is the Government of India's official portal to track vehicle registration, doesn't capture the data on the battery type of the e-rickshaw.

According to sources in the Delhi government, the case tragically underscored the need to rein in such vehicles, especially in light of estimates that only a little over 20% of the e-rickshaws registered in 2023 operate on lithium-ion batteries, which are considered safer than the lead acid variety.

SubQuestion No : 64

Q.64

Indian government's official portal to track vehicles registrations.

- Options
1. The final leg of the communications network delivery components to the end user.
 2. Wireless medium of communication
 3. The 4G connectivity channel
 4. An eco-friendly connectivity route to cut costs.

Question Type : **MCQ**
 Question ID : **519181729**
 Option 1 ID : **5191811055**
 Option 2 ID : **5191811056**
 Option 3 ID : **5191811053**
 Option 4 ID : **5191811054**
 Status : **Answered**
 Chosen Option : **1**

Q.65 Which of the following is not a part of BOTH formal and informal letters?

- Options
1. Sender's address
 2. Receiver's address
 3. Date
 4. Subscription

Question Type : **MCQ**
 Question ID : **519181736**
 Option 1 ID : **5191811083**
 Option 2 ID : **5191811084**
 Option 3 ID : **5191811081**
 Option 4 ID : **5191811082**
 Status : **Answered**
 Chosen Option : **4**

Q.66 What is informal communication within an organization called?

- Options
1. Grapevine
 2. Chronemics
 3. Downward communication
 4. Upward communication

Question Type : **MCQ**
 Question ID : **519181744**
 Option 1 ID : **5191811114**
 Option 2 ID : **5191811115**
 Option 3 ID : **5191811116**
 Option 4 ID : **5191811113**
 Status : **Answered**
 Chosen Option : **2**

Q.67 From the given options, choose the correct spelling of the word:

- Options**
1. Neumonia
 2. Pneumonia
 3. Nemonia
 4. Pneumounia

Question Type : **MCQ**

Question ID : **519181742**

Option 1 ID : **5191811105**

Option 2 ID : **5191811108**

Option 3 ID : **5191811107**

Option 4 ID : **5191811106**

Status : **Answered**

Chosen Option : **2**

Q.68 Fill in the blank with the correct form of the tense.

The jujitsu player_____ for Indonesia tomorrow (leave)

- Options**
1. had left
 2. has been leaving
 3. leaved
 4. is leaving

Question Type : **MCQ**

Question ID : **519181733**

Option 1 ID : **5191811071**

Option 2 ID : **5191811070**

Option 3 ID : **5191811072**

Option 4 ID : **5191811069**

Status : **Answered**

Chosen Option : **4**

Q.69 Select the most appropriate sentence from the given options to convert the given sentence of Active Voice in Passive Voice

Rohit helped his father in his business.

- Options**
1. The father was helped by Rohit in his business
 2. Rohit's father was helped by him in his business
 3. Father helped Rohit in his business
 4. Rohit's father was helped in his business by Rohit

Question Type : **MCQ**
 Question ID : **519181734**
 Option 1 ID : **5191811075**
 Option 2 ID : **5191811073**
 Option 3 ID : **5191811076**
 Option 4 ID : **5191811074**
 Status : **Answered**
 Chosen Option : **2**

Q.70 fill in the blanks with the correct form of the tense:

she _____ the family since her father retired. (support)

- Options**
1. ought to support
 2. have supported
 3. has been supporting
 4. was supporting

Question Type : **MCQ**
 Question ID : **519181731**
 Option 1 ID : **5191811063**
 Option 2 ID : **5191811061**
 Option 3 ID : **5191811062**
 Option 4 ID : **5191811064**
 Status : **Answered**
 Chosen Option : **3**

Q.71 fill in the blank with an appropriate question tag

keep your mouth shut,_____?

- Options
1. can you
 2. shan't you
 3. can't you
 4. must you

Question Type : **MCQ**
 Question ID : **519181730**
 Option 1 ID : **5191811059**
 Option 2 ID : **5191811058**
 Option 3 ID : **5191811057**
 Option 4 ID : **5191811060**
 Status : **Answered**
 Chosen Option : **3**

Q.72 Which of the following is NOT an antonym of "Truth"?

- Options
1. Veracity
 2. Delusion
 3. Fiction
 4. Fallacy

Question Type : **MCQ**
 Question ID : **519181738**
 Option 1 ID : **5191811089**
 Option 2 ID : **5191811092**
 Option 3 ID : **5191811091**
 Option 4 ID : **5191811090**
 Status : **Answered**
 Chosen Option : **1**

Q.73 Choose the correct option against the blank
While walking in the park, I ran _____ my old classmates

- Options
1. away
 2. into
 3. out
 4. down

Question Type : **MCQ**
Question ID : **519181743**
Option 1 ID : **5191811109**
Option 2 ID : **5191811112**
Option 3 ID : **5191811110**
Option 4 ID : **5191811111**
Status : **Answered**
Chosen Option : **1**

Q.74 Arrange the following sentences in the correct order
(A). He saw Jonty sitting at his desk

(B). He walked over to his desk and looked over his shoulder

(C). The warden yelled and Jonty got up with a start

(D). The warden slowly opened the door.

(E). He saw Jonty sketching in his sketchbook.

Choose the **correct** answer from the options given below:

- Options
1. (A), (B), (D), (C), (E).
 2. (C), (A), (B), (E), (D).
 3. (D), (A), (B), (E), (C).
 4. (E), (C), (D), (B), (A).

Question Type : **MCQ**
Question ID : **519181739**
Option 1 ID : **5191811093**
Option 2 ID : **5191811094**
Option 3 ID : **5191811096**
Option 4 ID : **5191811095**
Status : **Answered**
Chosen Option : **3**

Q.75 Fill in the blanks with suitable articles.

_____ girl on _____ right is my cousin.

Options 1.

1. The , the
2. An, a
3. The, an
4. The, a

Question Type : MCQ

Question ID : 519181737

Option 1 ID : 5191811087

Option 2 ID : 5191811086

Option 3 ID : 5191811088

Option 4 ID : 5191811085

Status : Answered

Chosen Option : 1

Q.76 Match List-I with List-II

List-I	List-II
(A). Go Cold turkey	(I). In a risky situation
(B). On thin ice	(II). Being a disgrace to the family
(C). Steal someone's thunder	(III). Upstage someone
(D). A Black Sheep	(IV). To quit or stop addictive on dangerous behaviour

Choose the **correct** answer from the options given below:

- Options 1.
1. (A) - (III), (B) - (II), (C) - (I), (D) - (IV)
 2. (A) - (IV), (B) - (I), (C) - (III), (D) - (II)
 3. (A) - (I), (B) - (IV), (C) - (II), (D) - (III)
 4. (A) - (II), (B) - (III), (C) - (IV), (D) - (I)

Question Type : MCQ

Question ID : 519181735

Option 1 ID : 5191811080

Option 2 ID : 5191811079

Option 3 ID : 5191811078

Option 4 ID : 5191811077

Status : Answered

Chosen Option : 2

Q.77 In the given sentence, one option has an error. Choose the option that has the error.

The customer service associate gave us much information which we needed

- Options**
1. The customer service associate gave us
 2. Which we needed
 3. Much information
 4. No error

Question Type : **MCQ**

Question ID : **519181740**

Option 1 ID : **5191811097**

Option 2 ID : **5191811099**

Option 3 ID : **5191811098**

Option 4 ID : **5191811100**

Status : **Answered**

Chosen Option : **3**

Q.78 Choose the correct form of the verb that agrees with the subject:
Tilak said that the quality of the books ____ bad.

- Options**
1. have
 2. were
 3. are
 4. was

Question Type : **MCQ**

Question ID : **519181745**

Option 1 ID : **5191811119**

Option 2 ID : **5191811117**

Option 3 ID : **5191811118**

Option 4 ID : **5191811120**

Status : **Answered**

Chosen Option : **2**

Q.79 Fill in the blank with an appropriate preposition
She returned _____ an hour.

- Options**
1. within
 2. at
 3. off
 4. on

Question Type : **MCQ**
Question ID : **519181741**
Option 1 ID : **5191811101**
Option 2 ID : **5191811103**
Option 3 ID : **5191811102**
Option 4 ID : **5191811104**
Status : **Answered**
Chosen Option : **1**

Q.80 Match the **categories** in List I with their meanings in List II

List-I	List-II
(A). Intra personal communication	(I). Handshake with a
(B). Oral	(II). Sending an E-mail
(C). Written	(III). Self-motivation
(D). Non-verbal communication	(IV). Delivering a verbal Presentation

Choose the **correct** answer from the options given below:

- Options**
1. (A) - (IV), (B) - (III), (C) - (II), (D) - (I)
 2. (A) - (I), (B) - (II), (C) - (III), (D) - (IV)
 3. (A) - (II), (B) - (I), (C) - (IV), (D) - (III)
 4. (A) - (III), (B) - (IV), (C) - (II), (D) - (I)

Question Type : **MCQ**
Question ID : **519181732**
Option 1 ID : **5191811066**
Option 2 ID : **5191811068**
Option 3 ID : **5191811067**
Option 4 ID : **5191811065**
Status : **Answered**
Chosen Option : **4**

Q.81 Which of the following is/are non-patentable invention-
(A). Frivolous Invention

(B). Mere discovery of scientific principle

(C). Mathematical method

(D). Literary and Artistic work

Choose the **correct** answer from the options given below:

Options 1. (A), (B), (C) and (D).

2. (A), (B) and (C) only.

3. (B), (C) and (D) only.

4. (A) and (B) only.

Question Type : **MCQ**

Question ID : **519181757**

Option 1 ID : **5191811168**

Option 2 ID : **5191811166**

Option 3 ID : **5191811167**

Option 4 ID : **5191811165**

Status : **Answered**

Chosen Option : **4**

Q.82 Which of the following is main activities of WIPO-

- (A). Legal Negotiation and Policy discussion.
- (B). Administration of Inter-Governmental IP Treaties.
- (C). International IP filing and examination services.
- (D). IP Information, Advisory and Training services.

Choose the **correct** answer from the options given below:

- Options
- 1. (A), (B), (C) and (D).
 - 2. (A), (B) and (C) only.
 - 3. (A) and (B) only.
 - 4. (B), (C) and (D).

Question Type : **MCQ**

Question ID : **519181765**

Option 1 ID : **5191811200**

Option 2 ID : **5191811198**

Option 3 ID : **5191811197**

Option 4 ID : **5191811199**

Status : **Answered**

Chosen Option : **1**

Q.83 Which was the first Indian Product to get GI Tag-

- Options
- 1. Darjeeling Tea
 - 2. Kataring rice
 - 3. Basmatee rice
 - 4. Madhubani painting

Question Type : **MCQ**

Question ID : **519181754**

Option 1 ID : **5191811153**

Option 2 ID : **5191811154**

Option 3 ID : **5191811155**

Option 4 ID : **5191811156**

Status : **Answered**

Chosen Option : **1**

Q.84 As per National Intellectual Property Rights Policy published on 12th May 2016 the objective 7 is

- Options**
1. Generation of IPRs
 2. Human Capital Development
 3. Commercialization of IPRs
 4. Legal and Legislative framework

Question Type : **MCQ**
 Question ID : **519181747**
 Option 1 ID : **5191811125**
 Option 2 ID : **5191811128**
 Option 3 ID : **5191811127**
 Option 4 ID : **5191811126**
 Status : **Answered**
 Chosen Option : **4**

Q.85 World intellectual property day is celebrated every year on-

- Options**
1. 24 April
 2. 20 March
 3. 26 April
 4. 20 June

Question Type : **MCQ**
 Question ID : **519181753**
 Option 1 ID : **5191811151**
 Option 2 ID : **5191811149**
 Option 3 ID : **5191811150**
 Option 4 ID : **5191811152**
 Status : **Answered**
 Chosen Option : **1**

Q.86 An assurance of quality and distinctiveness which is essentially attributable to the fact of its origin is that defined geographical locality, region or country comes under

- Options**
1. Copyright
 2. Patents
 3. Trademark
 4. GI

Question Type : **MCQ**
 Question ID : **519181749**
 Option 1 ID : **5191811136**
 Option 2 ID : **5191811134**
 Option 3 ID : **5191811133**
 Option 4 ID : **5191811135**
 Status : **Answered**
 Chosen Option : **4**

Q.87 The Trade Marks Registry was established in India in the year-

- Options
1. 1940
 2. 1999
 3. 2005
 4. 1911

Question Type : **MCQ**
Question ID : **519181761**
Option 1 ID : **5191811182**
Option 2 ID : **5191811183**
Option 3 ID : **5191811184**
Option 4 ID : **5191811181**
Status : **Answered**
Chosen Option : **2**

Q.88 Semiconductor Integrated Circuits Layout Design Registry is located at

- Options
1. Mumbai
 2. Delhi
 3. Nagpur
 4. Chennai

Question Type : **MCQ**
Question ID : **519181748**
Option 1 ID : **5191811131**
Option 2 ID : **5191811132**
Option 3 ID : **5191811129**
Option 4 ID : **5191811130**
Status : **Answered**
Chosen Option : **1**

Q.89 The Office of Controller General of Patents, Designs and Trademarks (CGPDTM) falls under-

- Options
1. Ministry of Cooperation
 2. Ministry of Commerce and Industry
 3. Ministry of Micro, Small and Medium Enterprises
 4. Ministry of Parliamentary Affairs

Question Type : **MCQ**
Question ID : **519181751**
Option 1 ID : **5191811142**
Option 2 ID : **5191811143**
Option 3 ID : **5191811144**
Option 4 ID : **5191811141**
Status : **Answered**
Chosen Option : **2**

Q.90 As on 1st January 2023 the WIPO's Director General is-

- Options**
1. Mr. Kenichiro Natsume, Japan
 2. Dr. Edward Kwakwa, Ghana
 3. Professor Adebambo Adewopo, Nigeria
 4. Mr. Daren Tang, Republic of Singapore

Question Type : **MCQ**
Question ID : **519181763**
Option 1 ID : **5191811190**
Option 2 ID : **5191811192**
Option 3 ID : **5191811191**
Option 4 ID : **5191811189**
Status : **Answered**
Chosen Option : **4**

Q.91 As per Global Innovation Index 2023 ranking India ranked 1 in following categories

- Options**
1. Not ranked in top 03 in any category
 2. Low Middle Income; Central and Southern Asia
 3. Low Income; Central and Southern Asia
 4. Upper Middle income; Central and Southern Asia

Question Type : **MCQ**
Question ID : **519181752**
Option 1 ID : **5191811148**
Option 2 ID : **5191811147**
Option 3 ID : **5191811146**
Option 4 ID : **5191811145**
Status : **Answered**
Chosen Option : **1**

Q.92 Which of the following is not subject matter of copyright protection

- Options**
1. Invention
 2. Literary work
 3. Musical work
 4. Artistic work

Question Type : **MCQ**
Question ID : **519181756**
Option 1 ID : **5191811164**
Option 2 ID : **5191811161**
Option 3 ID : **5191811163**
Option 4 ID : **5191811162**
Status : **Answered**
Chosen Option : **1**

Q.93 Which of the following is not IPR Law-

- Options**
1. Patent Act, 1970
 2. Copyright Act, 1957
 3. Trade Marks Act, 1999
 4. Excise Act, 1958

Question Type : **MCQ**

Question ID : **519181759**

Option 1 ID : **5191811174**

Option 2 ID : **5191811173**

Option 3 ID : **5191811175**

Option 4 ID : **5191811176**

Status : **Answered**

Chosen Option : **4**

Q.94 The National Biodiversity Authority (NBA) was established by the Central Government in 2003 to implement India's Biodiversity Act (2002), Headquarter of NBA is located at

- Options**
1. Mumbai, Maharastra
 2. Nagpur, Maharastra
 3. Chennai, Tamilnadu
 4. Kolkatta, West Bengal

Question Type : **MCQ**

Question ID : **519181760**

Option 1 ID : **5191811178**

Option 2 ID : **5191811179**

Option 3 ID : **5191811180**

Option 4 ID : **5191811177**

Status : **Answered**

Chosen Option : **1**

Q.95 As per Global Innovation Index 2023, select the top most innovative economy of the world

- Options**
1. Switzerland
 2. Sweden
 3. Singapore
 4. United States of America

Question Type : **MCQ**
Question ID : **519181750**
Option 1 ID : **5191811138**
Option 2 ID : **5191811137**
Option 3 ID : **5191811139**
Option 4 ID : **5191811140**
Status : **Answered**
Chosen Option : **1**

Q.96 The first objective of the National Intellectual Property Rights Policy published on 12th May 2016 is

- Options**
1. IPR Awareness Outreach and Promotion
 2. Generation of IPRs
 3. Administration and Management
 4. Legal and Legislative Framework

Question Type : **MCQ**
Question ID : **519181762**
Option 1 ID : **5191811187**
Option 2 ID : **5191811185**
Option 3 ID : **5191811188**
Option 4 ID : **5191811186**
Status : **Answered**
Chosen Option : **1**

Q.97 The essential features of copyright are-

- (A). Creation of statute
- (B). Multiple rights
- (C). The work must be original
- (D). Copyright exist in expression of idea not the idea itself

Choose the most appropriate answer from the options given below:

- Options
1. (B), (C) and (D).
 2. (A) and (B) only.
 3. (A), (B) and (C) only.
 4. (A), (B), (C) and (D).

Question Type : **MCQ**

Question ID : **519181755**

Option 1 ID : **5191811159**

Option 2 ID : **5191811157**

Option 3 ID : **5191811158**

Option 4 ID : **5191811160**

Status : **Answered**

Chosen Option : **3**

Q.98 According to section 6 of Patent Act an application for a patent for an Invention may be made by -

- (A). True and First inventor
- (B). Assignee of True and First Inventor
- (C). Legal representative of True and First Inventor
- (D). Owner of Copyright work

Choose the **correct** answer from the options given below:

- Options**
- 1. (C) and (D) only.
 - 2. (B), (C) and (D) only.
 - 3. (A), (B) and (C) only.
 - 4. (A) and (B) only.

Question Type : **MCQ**
Question ID : **519181758**
Option 1 ID : **5191811171**
Option 2 ID : **5191811172**
Option 3 ID : **5191811169**
Option 4 ID : **5191811170**
Status : **Answered**
Chosen Option : **3**

Q.99 An innovation for being patentable has not to satisfy following condition

- Options**
- 1. Non-obvious
 - 2. Novelty
 - 3. Useful
 - 4. Extraordinary

Question Type : **MCQ**
Question ID : **519181746**
Option 1 ID : **5191811122**
Option 2 ID : **5191811121**
Option 3 ID : **5191811124**
Option 4 ID : **5191811123**
Status : **Answered**
Chosen Option : **4**

Q.100 After accession to Madrid Protocol, a treaty under Madrid System for International Registration following Registry is associated

- Options**
1. Trade Marks Registry
 2. SCICLD Registry
 3. Copyright Registry
 4. Geographical Indications Registry (GI)

Question Type : **MCQ**

Question ID : **519181764**

Option 1 ID : **5191811194**

Option 2 ID : **5191811193**

Option 3 ID : **5191811196**

Option 4 ID : **5191811195**

Status : **Not Answered**

Chosen Option : --