

Constable GD in CAPFs and SSF Rifleman GD in AR and Sepoy in NCB Examination 2025

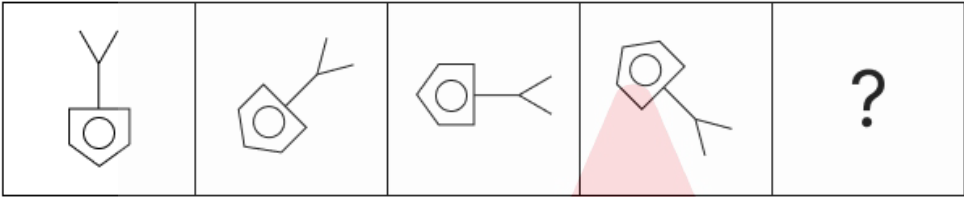
Exam Date	21/02/2025
Exam Time	3:00 PM - 4:00 PM
Subject	Constable GD Examination 2025

Section : Part-A-General Intelligence and Reasoning

Q.1 Each letter in the word DUMPERS is arranged in the English alphabetical order. How many letters are there in the English alphabetical order between the letter which is fourth from the left end and the one which is second from the right end in the new letter-cluster thus formed?

- Ans
- ✓ 1. 2
 - ✗ 2. 5
 - ✗ 3. 1
 - ✗ 4. 3

Q.2 Identify the figure given in the options, which when put in place of the question mark (?) will logically complete the series.



Ans

- ✓ 1.
- ✗ 2.
- ✗ 3.
- ✗ 4.

Q.3 Select the option that represents the letters that, when sequentially placed from left to right in the blanks below, will complete the letter series.
C _ _ _ B _ _ A X B _ Z

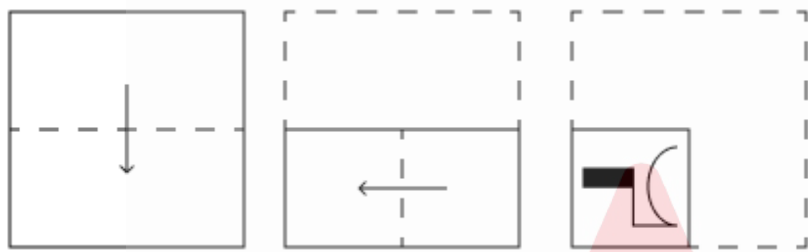
- Ans
- ☒ 1. CCXAZA
 - ☒ 2. XCZACA
 - ☒ 3. ZAXCZC
 - ☒ 4. ACXZCZ

Q.4 What should come in place of the question mark (?) in the given series based on the English alphabetical order?

BCG EFJ HIM KLP ?

- Ans
- ☒ 1. NOS
 - ☒ 2. NOT
 - ☒ 3. QOT
 - ☒ 4. QOS

Q.5 A paper is folded and punched as shown below. How will it appear when unfolded?



Ans

- ☒ 1.
- ☒ 2.
- ☒ 3.
- ☒ 4.

Q.6 In a certain code language, 'TIDE' is coded as '2986' and 'KITE' is coded as '8216'. How is 'D' coded in the given language?

- Ans**
- ☒ 1. 9
 - ☐ 2. 8
 - ☐ 3. 6
 - ☐ 4. 2

Q.7 E, F, G, H, J, K and L are sitting around a circular table facing the centre of the table (but not necessarily in the same order). L sits to the immediate right of F. Only three people sit between L and H when counted from the left of L. Only three people sit between F and J when counted from the left of F. E sits to the immediate right of K. How many people sit between F and K when counted from the right of K?

- Ans**
- ☐ 1. Four
 - ☐ 2. Three
 - ☒ 3. One
 - ☐ 4. Two

Q.8 AR 18 is related to HO 31 in a certain way. In the same way, KN 05 is related to RK 18. To which of the given options is QL 15 related, following the same logic?

- Ans**
- ☐ 1. XI 27
 - ☒ 2. XI 28
 - ☐ 3. YK 26
 - ☐ 4. WJ 28

Q.9 What will come in the place of the question mark (?) in the following equation, if '+' and '-' are interchanged and 'x' and '÷' are interchanged?

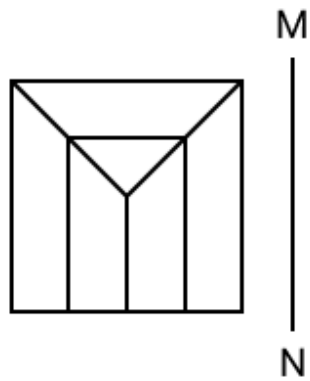
$41 + 8 \div 6 - 24 \times 2 = ?$

- Ans**
- ☒ 1. 5
 - ☐ 2. 11
 - ☐ 3. 1
 - ☐ 4. 16

Q.10 Six people, F, G, H, I, J and S, are sitting in a straight line facing north (but not necessarily in the same order). No one sits to the right of F. Only three people sit between F and J. Only two people sit between J and G. H sits second to the left of I. How many people sit between H and S?

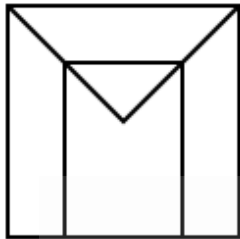
- Ans**
- ☒ 1. Two
 - ☐ 2. Four
 - ☐ 3. One
 - ☐ 4. Three

Q.11 Select the correct mirror image of the given figure when the mirror is placed at MN as shown below.

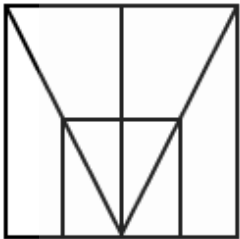


Ans

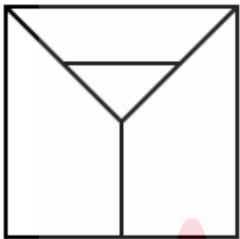
✗ 1.



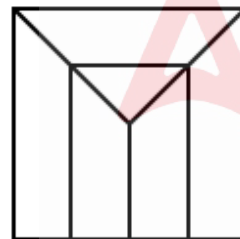
✗ 2.



✗ 3.



✓ 4.



Q.12 Based on the English alphabetical order, three of the following four letter-clusters are alike in a certain way and thus form a group. Which letter-cluster DOES NOT belong to that group?
(Note: The odd one out is not based on the number of consonants/vowels or their position in the letter-cluster.)

- Ans
- ✗ 1. LOI
 - ✗ 2. PSM
 - ✗ 3. RUO
 - ✓ 4. TWS

Q.13 In a certain code language, 'TNRA' is coded as '28' and 'LOPGVO' is coded as '42'. How is 'JDSHKQB' coded in the given language?

- Ans
- ✗ 1. 44
 - ✗ 2. 52
 - ✗ 3. 50
 - ✓ 4. 49

Q.14 What should come in place of the question mark (?) in the given series?


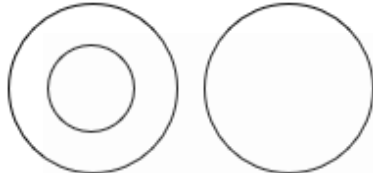
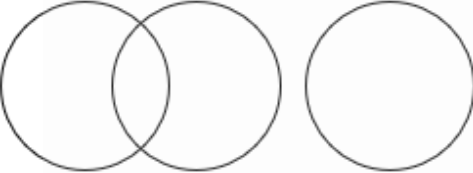
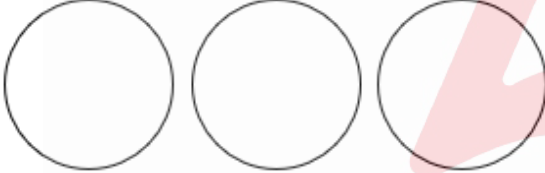
54 55 58 63 70 ?

- Ans
- ☐ 1. 78
 - ☐ 2. 81
 - ☐ 3. 80
 - ☒ 4. 79

Q.15 Select the Venn diagram that best illustrates the relationship between the following classes.

Cow, Cheetah, Wild animals

Ans

- ☐ 1. 
- ☒ 2. 
- ☐ 3. 
- ☐ 4. 

Q.16 Read the given statements and conclusions carefully. Assuming that the information given in the statements is true, even if it appears to be at variance with commonly known facts, decide which of the given conclusions logically follow(s) from the statements.

Statements:

All sacks are rugs.

All mugs are rugs.

All pugs are rugs.

Conclusions:

(I): Some pugs are sacks.

(II): Some mugs are pugs.

- Ans
- ☐ 1. Only conclusion (I) follows.
 - ☐ 2. Both conclusions (I) and (II) follow.
 - ☒ 3. Neither conclusion (I) nor (II) follows.
 - ☐ 4. Only conclusion (II) follows.

Q.17 What should come in place of the question mark (?) in the given series?

53 63 76 92 111 ?

- Ans
- ☐ 1. 156
 - ☒ 2. 133
 - ☐ 3. 126
 - ☐ 4. 143

Q.18 In a certain code language,

'A + B' means 'A is the daughter of B',
'A – B' means 'A is the brother of B',
'A × B' means 'A is the wife of B' and
'A ÷ B' means 'A is the father of B'.

Based on the above, how is P related to T if 'P – Q + R × S ÷ T'?

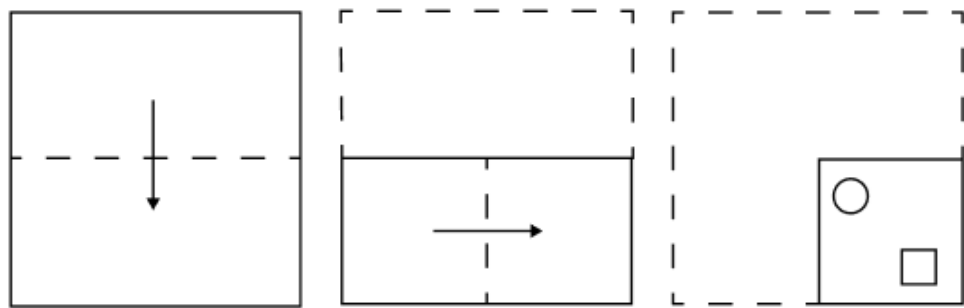
- Ans
- ☐ 1. Father
 - ☒ 2. Brother
 - ☐ 3. Son
 - ☐ 4. Husband

Q.19 MH 45 is related to KF 40 in a certain way. In the same way, TN 35 is related to RL 30. To which of the following is ZI 25 related following the same logic?

- Ans
- ☐ 1. YJ 25
 - ☒ 2. XG 20
 - ☐ 3. XH 25
 - ☐ 4. WK 30

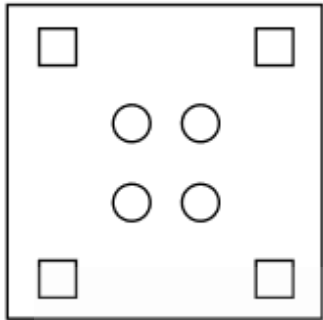


Q.20 A paper is folded and cut as shown below. How will it appear when unfolded?

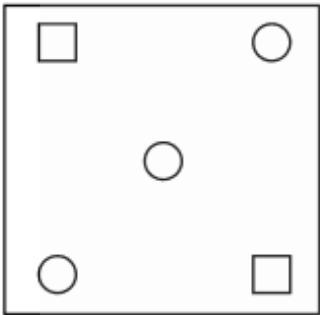


Ans

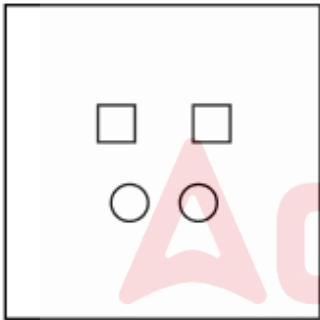
✓ 1.



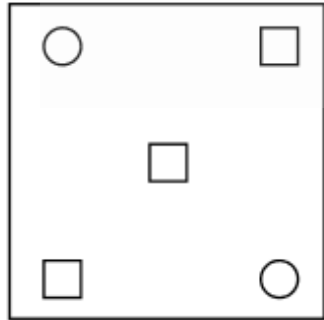
✗ 2.



✗ 3.



✗ 4.



Section : Part-B-General Knowledge and General awareness

Q.1 Who among the following was the last Tirthankara of Jainism?

- Ans
- ✗ 1. Parsvanatha
 - ✗ 2. Naminatha
 - ✓ 3. Mahavira
 - ✗ 4. Ajitanatha

Q.2 Handstand, Cast, Splits, Handspring on Vault, Back Handspring, Split Leap and Tap Swing on Bars are terms used in ____.

- Ans

☒ 1. Gymnastics

☐ 2. Skateboarding

☐ 3. Archery

☐ 4. Fencing

Q.3 Which of the following musical instruments was played by Ustad Asad Ali Khan?

- Ans

☐ 1. Santur

☒ 2. Rudra veena

☐ 3. Tabla

☐ 4. Sarod

Q.4 Who won the Best Male Athlete of the Year award at the 37th National Games event?

- Ans

☒ 1. Srihari Nataraj

☐ 2. Arokia Rajiv

☐ 3. Sajan Prakash

☐ 4. Shivpal Singh

Q.5 The Right to Freedom of Speech and Expression is guaranteed by which Article of the Indian Constitution?

- Ans

☐ 1. Article 21(1)(c)

☒ 2. Article 19(1)(a)

☐ 3. Article 25

☐ 4. Article 141(d)

Q.6 In which year was the All India Women’s Conference (AIWC) established?

- Ans

☐ 1. 1930

☐ 2. 1928

☐ 3. 1920

☒ 4. 1927

Q.7 As per the Human Development Report, 2021-22 (UNDP), which of the following neighbouring countries of India has the highest ranking in the Human Development Index?

- Ans

☐ 1. Bhutan

☐ 2. Bangladesh

☐ 3. Nepal

☒ 4. Sri Lanka

Q.8 How much of the world's water is estimated to exist as freshwater?

- Ans

☐ 1. 1%

☐ 2. 5%

☒ 3. 2.5%

☐ 4. 10%

Q.9 Rajinder Khanna, Deputy NSA and former chief of India's external intelligence agency Research and Analysis Wing (R&AW), was promoted to the position of _____ in July 2024.

- Ans

☐ 1. NSA

☐ 2. Reserved NSA

☒ 3. Additional NSA

☐ 4. CAG

Q.10 In which of the following Indian states is the vibrant temple festival Thrissur Pooram celebrated?

- Ans
1. Tamil Nadu
2. Andhra Pradesh
3. Maharashtra
4. Kerala

Q.11 What was the primary goal of the Green Revolution in India?

- Ans
1. Industrial development
2. Increasing agricultural productivity
3. Reducing population growth
4. Promoting foreign trade

Q.12 Who among the following became the Chief of the Air Staff (CAS) of the Indian Air Force (IAF) in September 2024?

- Ans
1. Air Chief Marshal Vivek Ram Chaudhari
2. Air Chief Marshal Rakesh Kumar Singh Bhadauria
3. Air Chief Marshal AP Singh
4. Air Chief Marshal Birender Singh Dhanoa

Q.13 India initiated its First Five Year Plan in 1951, influenced by the socialist ideals of _____.

- Ans
1. Bhim Rao Ambedkar
2. Rajendra Prasad
3. Jawaharlal Nehru
4. Lal Bahadur Shastri

Q.14 In astronomy, Cassiopeia is a constellation in the northern sky that is easily identified by its cluster of how many bright stars?

- Ans
1. 7
2. 3
3. 9
4. 5

Q.15 According to National Multidimensional Poverty Index 2021, which of the following states recorded the steepest decline in poor?

- Ans
1. Andhra Pradesh
2. Bihar
3. Maharashtra
4. Gujarat

Q.16 Padma Shri awardee Kalamandalam Gopi is recognised globally as the face of which dance form?

- Ans
1. Odissi
2. Kuchipudi
3. Mohiniattam
4. Kathakali

Q.17 Giddha is the folk dance of _____.

- Ans
1. Uttar Pradesh
2. Rajasthan
3. Madhya Pradesh
4. Punjab

Q.18 Which compound is widely found in coffee and tea that has antioxidant and anti-inflammatory activity?

- Ans
- ☐ 1. Lycopene

☐ 2. Anthocyanins

☐ 3. Curcumin

☒ 4. Chlorogenic Acid

Q.19 According to the Constitution of India, who may reserve a bill passed by the state legislative assembly for the president's consent?

- Ans
- ☐ 1. Opposition party in state legislative assembly

☒ 2. Governor

☐ 3. Chairperson of state legislative assembly

☐ 4. Chief Minister

Q.20 What is the primary objective of the Atmanirbhar Clean Plant Programme, which was launched in the 2023-24 Union Budget of the Government of India?

- Ans
- ☒ 1. Enhancing the availability of disease-free planting material

☐ 2. Supporting the defense sector

☐ 3. Promoting clean energy

☐ 4. Boosting manufacturing industries

Section : Part-C-Elementary Mathematics

Q.1 Akshay invests a sum of ₹5400 and Atul invests a sum of ₹9400 at the same rate of simple interest per annum. If, at the end of 6 years, Atul gets ₹360 more interest than Akshay, then find the rate of interest per annum (in percentage).

- Ans
- ☐ 1. 4.5

☐ 2. 2.5

☐ 3. 3.5

☒ 4. 1.5

Q.2 The LCM of 26, 34, 221 and 195 is:

- Ans
- ☐ 1. 6627

☐ 2. 6590

☐ 3. 6532

☒ 4. 6630

Q.3 Find the average of 309, 125, 90, 45, 125 and 104.

- Ans
- ☐ 1. 130

☐ 2. 136

☐ 3. 139

☒ 4. 133

Q.4 In a circular race of 1500 m, A and B start running simultaneously at a speed of 27 km/hr and 45 km/hr from the same point and the same time. After how much time will they meet at the starting point for the first time if they are running in the opposite direction?

- Ans
- ☒ 1. 10 min

☐ 2. 45 min

☐ 3. 35 min

☐ 4. 50 min

Q.5 A hemispherical tank has an inner diameter of 1.4 m. Find its capacity. (Take $\pi = 22/7$)
(Rounded up to two decimal places)

- Ans**
- ☒ 1. 0.52 m^3
 - ☒ 2. 0.72 m^3
 - ☒ 3. 0.78 m^3
 - ☒ 4. 0.62 m^3

Q.6 Anand has ₹1612 with him. He divided it amongst his sons Anil and Ashok and asked them to invest it at 8% rate of interest compounded annually. It was seen that Anil and Ashok got same amount after 11 and 12 years respectively. How much (in ₹) did Anand give to Anil?

- Ans**
- ☒ 1. 837
 - ☒ 2. 687
 - ☒ 3. 775
 - ☒ 4. 875

Q.7 Bipin offers a discount scheme that on buying 7 notebooks, get 3 for free. What will be the sale price (in ₹) of a notebook with a marked price ₹185, if the equivalent percentage discount is applied?

- Ans**
- ☒ 1. 129.50
 - ☒ 2. 130
 - ☒ 3. 130.50
 - ☒ 4. 129

Q.8 The average weight of Tushar, Salil and Mukund is 46 kg. If the average weight of Tushar and Salil be 40 kg and that of Salil and Mukund be 46 kg, then the weight of Salil (in kg) is:

- Ans**
- ☒ 1. 34
 - ☒ 2. 49
 - ☒ 3. 44
 - ☒ 4. 54

Q.9 Find the fourth proportional to 20, 24 and 30.

- Ans**
- ☒ 1. 36
 - ☒ 2. 16
 - ☒ 3. 9
 - ☒ 4. 25

Q.10 Find the value of $\left[(87 \div 3) \times \left\{ \frac{52}{2} + \frac{18}{3} \times (9 - 6) \right\} \right]$

- Ans**
- ☒ 1. 1281
 - ☒ 2. 1269
 - ☒ 3. 1276
 - ☒ 4. 1291

Q.11 400 oranges were bought at ₹1250 per hundred and were sold at a profit of ₹1000. Find the selling price (in ₹) per dozen of oranges.

- Ans**
- ☒ 1. 180
 - ☒ 2. 190
 - ☒ 3. 195
 - ☒ 4. 170

Q.12 A shopkeeper bought an article for ₹500. At what price (in ₹) should he sell the article to make 22% profit?

- Ans**
- ☐ 1. 390
 - ☐ 2. 598
 - ☒ 3. 610
 - ☐ 4. 622

Q.13 The ratio of male and female employees in a multinational company is 4 : 3. If there are 460 male employees in the company, then find the number of female employees.

- Ans**
- ☐ 1. 540
 - ☒ 2. 345
 - ☐ 3. 690
 - ☐ 4. 230

Q.14 Pinki, Chinki and Reema started a work and Reema left after 4 days when 46% of the work is completed and then work got completed in 9 more days. In how many days can Reema alone complete the work?

- Ans**
- ☒ 1. $18\frac{2}{11}$
 - ☐ 2. $18\frac{4}{11}$
 - ☐ 3. $18\frac{9}{11}$
 - ☐ 4. $18\frac{7}{11}$

Q.15 Two trains having lengths of 410 m and 440 m are running at speeds of 60 km/h and 70 km/h, respectively, in the same direction. The time taken (in minutes) by the faster train, coming from behind, to completely cross the other train is:

- Ans**
- ☐ 1. 3.4
 - ☐ 2. 5
 - ☒ 3. 5.1
 - ☐ 4. 4

Q.16 The price of a mobile phone was ₹18,000 last year. It has increased by $15\frac{3}{4}\%$ this year. What is the current price of the mobile phone?

- Ans**
- ☐ 1. ₹20,000
 - ☐ 2. ₹19,450
 - ☐ 3. ₹18,880
 - ☒ 4. ₹20,835

Q.17 Anand has ₹1218 with him. He divided it amongst his sons Anil and Ashok and asked them to invest it at 10% rate of interest compounded annually. It was seen that Anil and Ashok got same amount after 15 and 16 years respectively. How much (in ₹) did Anand give to Ashok?

- Ans**
- ☒ 1. 580
 - ☐ 2. 638
 - ☐ 3. 430
 - ☐ 4. 738

Q.18 The LCM of two numbers is 105 and numbers are in ratio of 5 : 3, then the sum of the numbers is:

- Ans**
- ☐ 1. 65
 - ☐ 2. 94
 - ☐ 3. 49
 - ☒ 4. 56

Q.19 The price (per litre) of petrol increases by 75%. By what percent should its consumption be reduced such that the expenditure on it increases by 26% only?

- Ans
- ☐ 1. 18%
 - ☐ 2. 75%
 - ☐ 3. 72%
 - ☒ 4. 28%

Q.20 Evaluate: $(-9) - (-60) \div (-12) + (-4) \times 6$

- Ans
- ☐ 1. -41
 - ☐ 2. -40
 - ☐ 3. -37
 - ☒ 4. -38

Section : Part-D-English

Q.1 Select the most appropriate option to fill in the blank.

Edible flowers _____ made up of a large group of flowers that have different characteristics.

- Ans
- ☒ 1. are
 - ☐ 2. was
 - ☐ 3. were
 - ☐ 4. is

Q.2 Select the most appropriate option to fill in the blank.

She was able to attract the attention of the judges with her intellect and _____ demeanor.

- Ans
- ☐ 1. repellent
 - ☒ 2. bewitching
 - ☐ 3. repugnant
 - ☐ 4. revolting

Q.3 Select the most appropriate synonym of the given word.

Abandon

- Ans
- ☐ 1. Hold
 - ☐ 2. Weave
 - ☒ 3. Leave
 - ☐ 4. Claim

Q.4 Select the INCORRECTLY spelt word from the given options.

- Ans
- ☐ 1. Attendance
 - ☒ 2. Alloting
 - ☐ 3. Accompany
 - ☐ 4. Automatic

Q.5 Select the INCORRECTLY spelt word.

- Ans
- ☐ 1. Categorically
 - ☒ 2. Couragiously
 - ☐ 3. Concurrently
 - ☐ 4. Charmingly

Q.6 In the sentence 'The explanation provided by the professor was succinct', what is the most appropriate ANTONYM of the word 'succinct'?

- Ans**
- ☒ 1. Laconic
 - ☒ 2. Long-winded
 - ☒ 3. Pithy
 - ☒ 4. Concise

Q.7 Select the most appropriate option to fill in the blank.

Pollution _____ ecosystems and wildlife.

- Ans**
- ☒ 1. damages
 - ☒ 2. damage
 - ☒ 3. is damage
 - ☒ 4. damaging

Q.8 Your colleague suggests you are 'barking up the wrong tree' when you are trying to convince the boss about a project. What does your colleague mean?

- Ans**
- ☒ 1. Your colleague wants you to climb a tree.
 - ☒ 2. Your colleague wants you to stop working on the project.
 - ☒ 3. Your colleague thinks you are making the right assumptions.
 - ☒ 4. Your colleague thinks you are pursuing the wrong course of action or making a wrong assumption.

Q.9 The given sentence is divided into four segments. Select the segment with the grammatical error.

Jawed refused politely / a second serving of the custard by / the host at / Hotel Grand yesterday.

- Ans**
- ☒ 1. Jawed refused politely
 - ☒ 2. a second serving of the custard by
 - ☒ 3. the host at
 - ☒ 4. Hotel Grand yesterday

Q.10 Select the most appropriate option to fill in the blank.

She _____ a decision to move to a new city after careful consideration.

- Ans**
- ☒ 1. have
 - ☒ 2. made
 - ☒ 3. do
 - ☒ 4. make

Q.11 Select the most appropriate ANTONYM of the given word.

Scarce

- Ans**
- ☒ 1. Tiny
 - ☒ 2. Heavy
 - ☒ 3. Ample
 - ☒ 4. Less

Q.12 Select the most appropriate option to fill in the blanks.

The (1)___ park was filled with (2)___ grass, tall trees and vibrant flowers, creating a (3)___ retreat for the city's busy residents.

- Ans

✓

1. (1) spacious ; (2) green ; (3) peaceful

✗

2. (1) green ; (2) peaceful ; (3) spacious

✗

3. (1) peaceful ; (2) spacious ; (3) green

✗

4. (1)green ; (2) spacious ; (3) peaceful

Q.13 Select the most appropriate ANTONYM of the underlined word in the given sentence.

My family have heard a lot about the clandestine transactions of Nishant's family.

- Ans

✗

1. Under the table

✗

2. Hush-hush

✗

3. Furtive

✓

4. Overt

Q.14 Select the most appropriate synonym for the given word.

Inspid

- Ans

✓

1. Bland

✗

2. Flavourful

✗

3. Spicy

✗

4. Tangy

Q.15 The following sentence has been split into four segments. Identify the segment that contains a grammatical error.

(A) He usual jogs in the early morning, / (B) enjoying the fresh air and peaceful atmosphere / (C) while preparing for / (D) the upcoming marathon.

- Ans

✓

1. A

✗

2. D

✗

3. C

✗

4. B

Comprehension:

In the following passage, some words have been deleted. Read the passage carefully and select the most appropriate option to fill in each blank.

The meaning and purpose of life is a/an (1)___ quest that many of us indulge in at some point in life. Arthur Schopenhauer gives the purpose of life a subjective hue, rooted in (2)___, kindness and love. His philosophy asserts that acknowledging the (3)___ nature of suffering in all living beings fosters a compassionate attitude. Cultivating moral (4)___is a means to transcend the inherent suffering in existence. So, the recognition of shared suffering and the pursuit of moral excellence contribute to a (5)___ life.

SubQuestion No : 16

Q.16 Select the most appropriate option to fill in blank no. 1.

- Ans

✗

1. extrovert

✓

2. introspective

✗

3. unthoughtful

✗

4. superficial

Comprehension:

In the following passage, some words have been deleted. Read the passage carefully and select the most appropriate option to fill in each blank.

The meaning and purpose of life is a/an (1)___ quest that many of us indulge in at some point in life. Arthur Schopenhauer gives the purpose of life a subjective hue, rooted in (2)___, kindness and love. His philosophy asserts that acknowledging the (3)___ nature of suffering in all living beings fosters a compassionate attitude. Cultivating moral (4)___ is a means to transcend the inherent suffering in existence. So, the recognition of shared suffering and the pursuit of moral excellence contribute to a (5)___ life.

SubQuestion No : 17

Q.17 Select the most appropriate option to fill in blank no. 2.

- Ans

☐

1. apathy
- ☐

2. remorse
- ☒

3. compassion
- ☐

4. ignominy

Comprehension:

In the following passage, some words have been deleted. Read the passage carefully and select the most appropriate option to fill in each blank.

The meaning and purpose of life is a/an (1)___ quest that many of us indulge in at some point in life. Arthur Schopenhauer gives the purpose of life a subjective hue, rooted in (2)___, kindness and love. His philosophy asserts that acknowledging the (3)___ nature of suffering in all living beings fosters a compassionate attitude. Cultivating moral (4)___ is a means to transcend the inherent suffering in existence. So, the recognition of shared suffering and the pursuit of moral excellence contribute to a (5)___ life.

SubQuestion No : 18

Q.18 Select the most appropriate option to fill in blank no. 3.

- Ans

☐

1. abrasive
- ☐

2. corrosive
- ☐

3. unfamiliar
- ☒

4. pervasive

Comprehension:

In the following passage, some words have been deleted. Read the passage carefully and select the most appropriate option to fill in each blank.

The meaning and purpose of life is a/an (1)___ quest that many of us indulge in at some point in life. Arthur Schopenhauer gives the purpose of life a subjective hue, rooted in (2)___, kindness and love. His philosophy asserts that acknowledging the (3)___ nature of suffering in all living beings fosters a compassionate attitude. Cultivating moral (4)___ is a means to transcend the inherent suffering in existence. So, the recognition of shared suffering and the pursuit of moral excellence contribute to a (5)___ life.

SubQuestion No : 19

Q.19 Select the most appropriate option to fill in blank no. 4.

- Ans

☐

1. maleficences
- ☐

2. scourges
- ☒

3. virtues
- ☐

4. advantage

Comprehension:

In the following passage, some words have been deleted. Read the passage carefully and select the most appropriate option to fill in each blank.

The meaning and purpose of life is a/an (1)___ quest that many of us indulge in at some point in life. Arthur Schopenhauer gives the purpose of life a subjective hue, rooted in (2)___, kindness and love. His philosophy asserts that acknowledging the (3)___ nature of suffering in all living beings fosters a compassionate attitude. Cultivating moral (4)___ is a means to transcend the inherent suffering in existence. So, the recognition of shared suffering and the pursuit of moral excellence contribute to a (5)___ life.

SubQuestion No : 20

Q.20 Select the most appropriate option to fill in blank no. 5.

- Ans

✓ 1. meaningful

✗ 2. diligent

✗ 3. trivial

✗ 4. irrational

Section : Part-D-Hindi

Q.1 ‘बिजली’ का पर्याय निम्न में से है --

- Ans

✓ 1. दामिनी

✗ 2. वनिता

✗ 3. सरिता

✗ 4. सविता

Q.2 ‘कुछ ढंग का लिखो-पढ़ो तो बात बने, खाली कागज़ी घोड़े दौड़ाने से क्या लाभ?’

रेखांकित मुहावरे को वाक्यानुकूल मुहावरा चुनकर प्रतिस्थापित करें-

- Ans

✗ 1. किस्सा खड़ा करने से

✗ 2. कसौटी पर कसने से

✓ 3. कागज़ काले करने से

✗ 4. कूच कर जाने से

Q.3 ‘तुम्हारे पास समय की कोई _____ है कि नहीं, कभी तो वक्त पर आओ!’

उचित सार्थक और निरर्थक शब्द-युग्म वाले विकल्प का चयन करके उपरोक्त वाक्य पूर्ण करें-

- Ans

✗ 1. जरूरत - वरूरत

✗ 2. साठ - गाँठ

✗ 3. मूल्य - सूत्य

✓ 4. कीमत - वीमत

Q.4 निम्नलिखित वाक्य के किस खंड में अशुद्धि है?

भिखारी ने राजा को आशिर्वाद दिया।

- Ans

✓ 1. आशिर्वाद

✗ 2. राजा

✗ 3. भिखारी

✗ 4. दिया

Q.5 ‘सीधा’ शब्द का अर्थ निम्न में से नहीं है-

- Ans

✗ 1. जो टेढ़ा न हो

✗ 2. सरल

✓ 3. वाम

✗ 4. दाहिना

Q.6 उसने खाना खाया और मेला देखने चला गया ।' निम्नलिखित विकल्पों में से इस वाक्य के लिए कौन सा एक उचित सरल वाक्य होगा।

- Ans
- ☒ 1. खाना खाकर उसने मेला देखा।
 - ☒ 2. उसने खाना खाया, मेला देखने चला गया।
 - ☒ 3. खाना खाकर वह मेला देखने चला गया।
 - ☒ 4. खाना खाया और मेला देखने चला गया।

Q.7 निम्नलिखित वाक्य को ध्यानपूर्वक पढ़ें और बताएं कि वाक्य के किस भाग में वर्तनी संबंधी त्रुटि है?
तिरंगा हमारा राष्ट्रीय ध्वज है।

- Ans
- ☒ 1. तिरंगा
 - ☒ 2. ध्वज है।
 - ☒ 3. हमारा
 - ☒ 4. राष्ट्रीय

Q.8 दिए गए वाक्य का शुद्ध रूप होगा--
राहुल गेंद से द्वारा खेल रहा है।

- Ans
- ☒ 1. राहुल पर गेंद खेल रहा है।
 - ☒ 2. राहुल गेंद से खेल रहा है।
 - ☒ 3. राहुल गेंद की द्वारा खेल रहा है।
 - ☒ 4. गेंद राहुल से खेल रहा है।

Q.9 निम्नलिखित वाक्य को ध्यानपूर्वक पढ़ें और बताएं कि प्रस्तुत विकल्पों में से कौनसा विकल्प चिह्नित शब्द का विलोम शब्द है?

श्रीमान जी आपने बहुत समय से कुछ खाया नहीं है, कृपया आहार ग्रहण कीजिए।

- Ans
- ☒ 1. अन्न
 - ☒ 2. भोजन
 - ☒ 3. निराहार
 - ☒ 4. नीरहर

Q.10 निम्नलिखित वाक्यांश के लिए सार्थक शब्द चुनिए -
संसद में सदस्यता रखने वाला

- Ans
- ☒ 1. विधेयक
 - ☒ 2. विधायक
 - ☒ 3. सांसद
 - ☒ 4. संसद

Q.11 आम आदमी पार्टी का चुनाव चिन्ह झाड़ू है। वाक्य में झाड़ू शब्द है।

- Ans
- ☒ 1. तत्सम
 - ☒ 2. विदेशी
 - ☒ 3. देशज
 - ☒ 4. तद्भव

Q.12 निम्नलिखित वाक्यों में से लिंग सम्बन्धी अशुद्धि वाला वाक्य ज्ञात कीजिए-

- Ans
- ☒ 1. साड़ी की आँचल उड़ती है।
 - ☒ 2. सूर्य की लालिमा आज दर्शनीय है।
 - ☒ 3. बारिश हो रही है और हवा चल रही है।
 - ☒ 4. इस स्थान की परिधि दूर तक है।

Q.13 ‘विद्यालय के वार्षिक समारोह में मुख्य अतिथि का मंच पर बहुत आदर किया गया।’

सर्वाधिक उपयुक्त विकल्प चुनकर वाक्य के रेखांकित अंश को बदलें-

- Ans

☒

1. श्रेष्ठता प्रदान
- ☒

2. बहुत सम्मानित
- ☒

3. भव्य स्वागत
- ☒

4. बहुत उत्साहित

Q.14 दिए गए शब्द का उचित विलोम शब्द चुनिए-

सुदूर

- Ans

☒

1. सन्निकट
- ☒

2. दूर
- ☒

3. विदूर
- ☒

4. मुदूर

Q.15 निम्नलिखित वाक्य में रेखांकित पद के बदले कौन सा विकल्प सही है?

वकीलों ने कागजात का निरीक्षण किया।

- Ans

☒

1. की देखरेख किया
- ☒

2. की जाँच की
- ☒

3. के निरीक्षण किए
- ☒

4. का अवलोकन की

Comprehension:

उपरोक्त गद्यांश के आधार पर रिक्त स्थानों की पूर्ति कीजिए-

‘यदि विचार-सामग्री निबंध की (1)_____ है तो भाषा-शैली निबंध का शरीर एक अच्छे निबंध में शुद्ध, स्पष्ट तथा सुबोध भाषा का प्रयोग करना चाहिए एक (2)_____ निबंध की भाषा का सबसे बड़ा गुण यही है कि वह इतनी (3)_____ हो कि पाठक का मन ही अपनी ओर आकर्षित कर ले भाषा को सशक्त बनाने के लिए (4)_____ मुहावरों और लोकोक्तियों का प्रयोग किया जा सकता है, लेकिन निबंध में अलंकारों, मुहावरों, लोकोक्तियों आदि की (5)_____ भी नहीं होनी चाहिए ऐसा करने से निबंध में अस्वाभाविकता का समावेश हो जाता है और उसका सारा लालित्य नष्ट हो जाता है ’

SubQuestion No : 16

Q.16 गद्यांश के रिक्त स्थान (1) के लिए सर्वाधिक उपयुक्त शब्द होगा-

- Ans

☒

1. हृदय
- ☒

2. आत्मा
- ☒

3. विशिष्ट
- ☒

4. मन

Comprehension:

उपरोक्त गद्यांश के आधार पर रिक्त स्थानों की पूर्ति कीजिए-

‘यदि विचार-सामग्री निबंध की (1)_____ है तो भाषा-शैली निबंध का शरीर एक अच्छे निबंध में शुद्ध, स्पष्ट तथा सुबोध भाषा का प्रयोग करना चाहिए एक (2)_____ निबंध की भाषा का सबसे बड़ा गुण यही है कि वह इतनी (3)_____ हो कि पाठक का मन ही अपनी ओर आकर्षित कर ले भाषा को सशक्त बनाने के लिए (4)_____ मुहावरों और लोकोक्तियों का प्रयोग किया जा सकता है, लेकिन निबंध में अलंकारों, मुहावरों, लोकोक्तियों आदि की (5)_____ भी नहीं होनी चाहिए ऐसा करने से निबंध में अस्वाभाविकता का समावेश हो जाता है और उसका सारा लालित्य नष्ट हो जाता है ’

SubQuestion No : 17

Q.17 गद्यांश के रिक्त स्थान (2) के लिए सर्वाधिक उपयुक्त शब्द होगा-

- Ans

☒

1. व्यवहार्य
- ☒

2. शुद्ध
- ☒

3. क्लिष्ट
- ☒

4. श्रेष्ठ

Comprehension:

उपरोक्त गद्यांश के आधार पर रिक्त स्थानों की पूर्ति कीजिए-

'यदि विचार-सामग्री निबंध की (1)_____ है तो भाषा-शैली निबंध का शरीर एक अच्छे निबंध में शुद्ध, स्पष्ट तथा सुबोध भाषा का प्रयोग करना चाहिए एक (2)_____ निबंध की भाषा का सबसे बड़ा गुण यही है कि वह इतनी (3)_____ हो कि पाठक का मन ही अपनी ओर आकर्षित कर ले भाषा को सशक्त बनाने के लिए (4)_____ मुहावरों और लोकोक्तियों का प्रयोग किया जा सकता है, लेकिन निबंध में अलंकारों, मुहावरों, लोकोक्तियों आदि की (5)_____ भी नहीं होनी चाहिए ऐसा करने से निबंध में अस्वाभाविकता का समावेश हो जाता है और उसका सारा लालित्य नष्ट हो जाता है '

SubQuestion No : 18

Q.18 गद्यांश के रिक्त स्थान (3) के लिए सर्वाधिक उपयुक्त शब्द होगा-

- Ans**
- ☒ 1. प्रगाढ़
 - ☒ 2. सशक्त
 - ☒ 3. आसक्त
 - ☒ 4. विकुंचित

Comprehension:

उपरोक्त गद्यांश के आधार पर रिक्त स्थानों की पूर्ति कीजिए-

'यदि विचार-सामग्री निबंध की (1)_____ है तो भाषा-शैली निबंध का शरीर एक अच्छे निबंध में शुद्ध, स्पष्ट तथा सुबोध भाषा का प्रयोग करना चाहिए एक (2)_____ निबंध की भाषा का सबसे बड़ा गुण यही है कि वह इतनी (3)_____ हो कि पाठक का मन ही अपनी ओर आकर्षित कर ले भाषा को सशक्त बनाने के लिए (4)_____ मुहावरों और लोकोक्तियों का प्रयोग किया जा सकता है, लेकिन निबंध में अलंकारों, मुहावरों, लोकोक्तियों आदि की (5)_____ भी नहीं होनी चाहिए ऐसा करने से निबंध में अस्वाभाविकता का समावेश हो जाता है और उसका सारा लालित्य नष्ट हो जाता है '

SubQuestion No : 19

Q.19 गद्यांश के रिक्त स्थान (4) के लिए सर्वाधिक उपयुक्त शब्द होगा-

- Ans**
- ☒ 1. यथापूर्व
 - ☒ 2. यथावत्
 - ☒ 3. यथाशक्ति
 - ☒ 4. यथावत

Comprehension:

उपरोक्त गद्यांश के आधार पर रिक्त स्थानों की पूर्ति कीजिए-

'यदि विचार-सामग्री निबंध की (1)_____ है तो भाषा-शैली निबंध का शरीर एक अच्छे निबंध में शुद्ध, स्पष्ट तथा सुबोध भाषा का प्रयोग करना चाहिए एक (2)_____ निबंध की भाषा का सबसे बड़ा गुण यही है कि वह इतनी (3)_____ हो कि पाठक का मन ही अपनी ओर आकर्षित कर ले भाषा को सशक्त बनाने के लिए (4)_____ मुहावरों और लोकोक्तियों का प्रयोग किया जा सकता है, लेकिन निबंध में अलंकारों, मुहावरों, लोकोक्तियों आदि की (5)_____ भी नहीं होनी चाहिए ऐसा करने से निबंध में अस्वाभाविकता का समावेश हो जाता है और उसका सारा लालित्य नष्ट हो जाता है '

SubQuestion No : 20

Q.20 गद्यांश के रिक्त स्थान (5) के लिए सर्वाधिक उपयुक्त शब्द होगा-

- Ans**
- ☒ 1. अतिशयता
 - ☒ 2. सघनता
 - ☒ 3. प्रगाढ़ता
 - ☒ 4. प्रबलता