



Odisha Sub-ordinate Staff Selection Commission
(OSSSC), Govt. of Odisha

Roll No.	
Application No.	-
Participant Name	
Test Center Name	iON Digital Zone iDZ1 Patia
Test Date	12/11/2025
Test Time	3:00 PM - 4:30 PM
Subject	OSSSC Preliminary Examination for the district cadre posts of RI, ICDS Supervisor, ARI, Amin & SFS under CRE 2023 IV
Application Photograph	
Registration photograph	

* Note
Correct Answer will carry 1 mark per Question.
Incorrect Answer will carry 0.33 Negative mark per Question.

1. Options shown in green color with a tick icon are correct.
2. Chosen option on the right of the question indicates the option selected by the candidate.

Section : Mathematics

Adda247

Test Prime

ALL EXAMS, ONE SUBSCRIPTION



1,00,000+
Mock Tests



**Personalised
Report Card**



**Unlimited
Re-Attempt**



600+
Exam Covered



25,000+ Previous
Year Papers



500%
Refund



ATTEMPT FREE MOCK NOW

Q.1 10 chairs and 10 tables cost ₹4,400 and 19 chairs and 14 tables cost ₹7,000. What is the cost of 17 chairs and 12 tables?

- Ans
- ☒ 1. ₹6,118
 - ☒ 2. ₹6,123
 - ☒ 3. ₹6,124
 - ☒ 4. ₹6,120

Question Type : MCQ

Question ID : 4410091218350

Option 1 ID : 4410094806826

Option 2 ID : 4410094806825

Option 3 ID : 4410094806824

Option 4 ID : 4410094806823

Status : Answered

Chosen Option : 4

Q.2 An article is sold at a profit of 11%. If the cost price is increased by ₹25 and the selling price is reduced by ₹90, then the profit would be 10.4%. What is the original cost price (in ₹) of the article?

- Ans
- ☒ 1. ₹19,300
 - ☒ 2. ₹19,600
 - ☒ 3. ₹19,900
 - ☒ 4. ₹19,500

Question Type : MCQ

Question ID : 441009916218

Option 1 ID : 4410093619125

Option 2 ID : 4410093619123

Option 3 ID : 4410093619124

Option 4 ID : 4410093619126

Status : Not Answered

Chosen Option : --

Q.3 The vertices of ΔABC lie on a circle with centre O. AO is produced to a point D on BC such that $AD \perp BC$. If $\angle B = 78^\circ$ and

- Ans
- ☒ 1. 78°
 - ☒ 2. 36°
 - ☒ 3. 60°
 - ☒ 4. 42°

Question Type : MCQ

Question ID : 441009921820

Option 1 ID : 4410093641253

Option 2 ID : 4410093641251

Option 3 ID : 4410093641254

Option 4 ID : 4410093641252

Status : Answered

Chosen Option : 4

Q.4	The current population of a town is 10,624. It increases by 50% and 25% in two successive years but decreases by 55% in the third year. What is the population of the town at the end of the third year?
Ans	<div><div>✖</div>1. 8969</div>
	<div><div>✔</div>2. 8964</div>
	<div><div>✖</div>3. 8963</div>
	<div><div>✖</div>4. 8962</div>

Question Type :	MCQ
Question ID :	441009921045
Option 1 ID :	4410093638153
Option 2 ID :	4410093638151
Option 3 ID :	4410093638154
Option 4 ID :	4410093638152
Status :	Answered
Chosen Option :	1

Q.5	Two trains with lengths 460 metres and 440 metres, respectively, are running in opposite directions, one at a speed of 160 km/h and the other at a speed of 200 km/h. In how much time will they completely cross each other from the moment they meet?
Ans	<div><div>✖</div>1. 8 seconds</div>
	<div><div>✔</div>2. 9 seconds</div>
	<div><div>✖</div>3. 5 seconds</div>
	<div><div>✖</div>4. 7 seconds</div>

Question Type :	MCQ
Question ID :	441009909510
Option 1 ID :	4410093591923
Option 2 ID :	4410093591924
Option 3 ID :	4410093591921
Option 4 ID :	4410093591922
Status :	Not Answered
Chosen Option :	--

Q.6	The sum of three positive integers is 440. If the ratio of the first number to the second number is 3 : 4, find the value of the second number to the third number is 3 : 4, find the value of the third number.
Ans	<div><div><div>✖ 1. 178</div><div>✖ 2. 188</div><div>✖ 3. 148</div><div>✔ 4. 168</div></div></div>

Question Type :	MCQ
Question ID :	441009182952
Option 1 ID :	441009723220
Option 2 ID :	441009723221
Option 3 ID :	441009723218
Option 4 ID :	441009723219
Status :	Answered
Chosen Option :	4

Q.7	X, Y and Z invest ₹4,00,000, ₹3,20,000 and ₹2,80,000, respectively, to start a business. They agree to share profits in the ratio of their capital contributions. Additionally, it is agreed that if the annual profit exceeds ₹6,00,000, then 15% of the excess amount will be given to Y as a bonus for supervising the operations. If the total profit at the end of the year is ₹7,80,000, what is Y's total share (including the bonus) in the profit?
Ans	<div><div><div>✖ 1. ₹2,76,960</div><div>✔ 2. ₹2,67,960</div><div>✖ 3. ₹2,67,690</div><div>✖ 4. ₹2,69,760</div></div></div>

Question Type :	MCQ
Question ID :	441009920573
Option 1 ID :	4410093636265
Option 2 ID :	4410093636263
Option 3 ID :	4410093636264
Option 4 ID :	4410093636266
Status :	Not Answered
Chosen Option :	--

Q.8 A batsman in his 9th inning makes a score of 94 and thereby increases his average by 1. What is his average after the 9th inning?

- Ans ☒ 1. 97
- ☒ 2. 86
- ☒ 3. 94
- ☒ 4. 89

Question Type :	MCQ
Question ID :	441009516378
Option 1 ID :	4410092020934
Option 2 ID :	4410092020931
Option 3 ID :	4410092020933
Option 4 ID :	4410092020932
Status :	Not Answered
Chosen Option :	--

Q.9 Bhuvan sells buttermilk by mixing water and curd in a ratio of 1 litre of water with 119 litres of curd, following Bhuvan's recipe

- Ans ☒ 1. $32\sqrt{3}$
- ☒ 2. $27\sqrt{3}$
- ☒ 3. $51\sqrt{3}$
- ☒ 4. $\sqrt{357}$

Question Type :	MCQ
Question ID :	44100997410
Option 1 ID :	441009387649
Option 2 ID :	441009387647
Option 3 ID :	441009387648
Option 4 ID :	441009387650
Status :	Answered
Chosen Option :	4

Q.10	Rishabh and Rahul can complete a work together in 18 days, Rahul and Abhishek can complete the same work together in 10 days and Rishabh and Abhishek can do the same work together in 15 days. In how much time can Rishabh complete the work alone?
Ans	<div><div>✗ 1. 30 days</div><div>✗ 2. 110 days</div><div>✗ 3. 60 days</div><div>✓ 4. 90 days</div></div>

Question Type :	MCQ
Question ID :	441009165347
Option 1 ID :	441009654803
Option 2 ID :	441009654806
Option 3 ID :	441009654804
Option 4 ID :	441009654805
Status :	Not Answered
Chosen Option :	--

Q.11	A shopkeeper, on the eve of Holi, offered a series of discounts on earphones. Find the selling price of a earphone if the marked price is ₹1,620 and the successive discounts are 25% and 50%.
Ans	<div><div>✗ 1. ₹606.50</div><div>✓ 2. ₹607.50</div><div>✗ 3. ₹608.50</div><div>✗ 4. ₹609.50</div></div>

Question Type :	MCQ
Question ID :	441009643272
Option 1 ID :	4410092527266
Option 2 ID :	4410092527267
Option 3 ID :	4410092527268
Option 4 ID :	4410092527269
Status :	Answered
Chosen Option :	2

Q.12	When a vehicle is sold for ₹16,300, the owner incurs a loss of 20%. At what price (in ₹) must the vehicle be sold to gain 12%?
Ans	<div><div>✖</div>1. 22,817</div>
	<div><div>✖</div>2. 22,822</div>
	<div><div>✖</div>3. 22,823</div>
	<div><div>✔</div>4. 22,820</div>

Question Type :	MCQ
Question ID :	441009565009
Option 1 ID :	4410092215159
Option 2 ID :	4410092215158
Option 3 ID :	4410092215157
Option 4 ID :	4410092215156
Status :	Answered
Chosen Option :	4

Q.13	Simplify: $137 - 39 \times (20 + 14) + 48$
Ans	<div><div>✖</div>1. -1136</div>
	<div><div>✔</div>2. -1141</div>
	<div><div>✖</div>3. -1147</div>
	<div><div>✖</div>4. -1146</div>

Question Type :	MCQ
Question ID :	441009912118
Option 1 ID :	4410093602726
Option 2 ID :	4410093602723
Option 3 ID :	4410093602725
Option 4 ID :	4410093602724
Status :	Answered
Chosen Option :	3

Q.14	In what ratio must a grocer mix two varieties of rice costing ₹284 and ₹208 per kg, respectively, to get a mixture of rice worth ₹251 per kg?
Ans	<div><div>✖</div>1. 31 : 86</div>
	<div><div>✔</div>2. 43 : 33</div>
	<div><div>✖</div>3. 35 : 44</div>
	<div><div>✖</div>4. 33 : 43</div>

Question Type :	MCQ
Question ID :	441009920166
Option 1 ID :	4410093634637
Option 2 ID :	4410093634638
Option 3 ID :	4410093634636
Option 4 ID :	4410093634635
Status :	Not Answered
Chosen Option :	--

Q.15 Utsavi invested a sum of ₹3,800 at 20% per annum compound interest, compounded annually. If she received an amount of ₹5,472 after n years, the value of n is:

- Ans ☒ 1. 1.5
- ☒ 2. 2.5
- ☒ 3. 2
- ☒ 4. 3

Question Type :	MCQ
Question ID :	441009919494
Option 1 ID :	4410093631949
Option 2 ID :	4410093631948
Option 3 ID :	4410093631947
Option 4 ID :	4410093631950
Status :	Not Answered
Chosen Option :	--

Q.16 The simplified value of $\frac{\left(\frac{17}{27}\right)}{\left(\frac{17}{6}\right)} \div \left(\frac{3}{9} \times \frac{18}{9} + \frac{4}{9}\right) + \frac{6}{5} \div \frac{30}{15}$ of $\frac{15}{5}$ is

- Ans ☒ 1. $\frac{2}{5}$
- ☒ 2. $\frac{12}{13}$
- ☒ 3. $\frac{3}{8}$
- ☒ 4. $\frac{5}{9}$

Question Type :	MCQ
Question ID :	441009912407
Option 1 ID :	4410093603879
Option 2 ID :	4410093603882
Option 3 ID :	4410093603881
Option 4 ID :	4410093603880
Status :	Not Answered
Chosen Option :	--

Q.17 Three pipes P, Q and R can fill an empty water tank in 24, 36 and 48 minutes, respectively. A pipe X can empty the full tank in 1 hour. The three pipes P, Q and R are opened at the same time and after 4 minutes R is closed and X is opened. After 6 more minutes P is closed. If the remaining tank is filled when only pipes Q and X are open, then find the time taken by Q and X to fill that part of the tank.

- Ans

1. 22 minutes
2. 35 minutes
3. 29 minutes
4. 40 minutes

Question Type :	MCQ
Question ID :	4410091204381
Option 1 ID :	4410094751031
Option 2 ID :	4410094751032
Option 3 ID :	4410094751033
Option 4 ID :	4410094751034
Status :	Not Answered
Chosen Option :	--

Q.18 A motorcyclist travels from X to Y at 45 km/hr and returns at 75 km/hr. If he had traveled both ways at 60 km/hr, he would have taken 30 minutes less in total. Find the distance between X and Y.

- Ans

1. 185 km
2. 225 km
3. 275 km
4. 318 km

Question Type :	MCQ
Question ID :	4410091197349
Option 1 ID :	4410094723320
Option 2 ID :	4410094723321
Option 3 ID :	4410094723322
Option 4 ID :	4410094723323
Status :	Not Answered
Chosen Option :	--

Q.19	Let AB be a 12 cm long arc on a circle C. If the circumference of the circle is 180 cm, then find the angle made by the arc AB at the centre of the circle. (Use $\pi = 22/7$)
Ans	<div><div><div>✖</div><div>1. 48°</div></div></div>
	<div><div><div>✖</div><div>2. 36°</div></div></div>
	<div><div><div>✖</div><div>3. 32°</div></div></div>
	<div><div><div>✔</div><div>4. 24°</div></div></div>

Question Type :	MCQ
Question ID :	441009592254
Option 1 ID :	4410092324136
Option 2 ID :	4410092324134
Option 3 ID :	4410092324133
Option 4 ID :	4410092324135
Status :	Answered
Chosen Option :	2

Q.20	Simplify $7^3 - 1^2 + \left(\frac{26}{13}\right)^2 - 0 + 8 \times 2.2069$
Ans	<div><div><div>✖</div><div>1. 371</div></div></div>
	<div><div><div>✔</div><div>2. 362</div></div></div>
	<div><div><div>✖</div><div>3. 366</div></div></div>
	<div><div><div>✖</div><div>4. 360</div></div></div>

Question Type :	MCQ
Question ID :	441009535594
Option 1 ID :	4410092097773
Option 2 ID :	4410092097772
Option 3 ID :	4410092097774
Option 4 ID :	4410092097775
Status :	Answered
Chosen Option :	4

Q.21	In March 1863, which British Chief Commissioner officially visited the Sambalpur region of Odisha?
Ans	<div><div>✖</div>1. WR Forster</div>
	<div><div>✔</div>2. Richard Temple</div>
	<div><div>✖</div>3. HB Impey</div>
	<div><div>✖</div>4. Captain Leigh</div>

Question Type :	MCQ
Question ID :	441009642166
Option 1 ID :	4410092522808
Option 2 ID :	4410092522807
Option 3 ID :	4410092522809
Option 4 ID :	4410092522810
Status :	Answered
Chosen Option :	4

Q.22	In a significant milestone, India has officially surpassed Japan to become the world's fourth-largest economy, with a nominal GDP of \$4.187 trillion in the year _____.
Ans	<div><div>✖</div>1. 2022</div>
	<div><div>✖</div>2. 2023</div>
	<div><div>✖</div>3. 2024</div>
	<div><div>✔</div>4. 2025</div>

Question Type :	MCQ
Question ID :	441009850918
Option 1 ID :	4410093356585
Option 2 ID :	4410093356582
Option 3 ID :	4410093356583
Option 4 ID :	4410093356584
Status :	Answered
Chosen Option :	4

Q.23	Who among the following serves as the Chairperson of the National Institution for Transforming India, commonly known as NITI Aayog?
Ans	<div><div>✖</div>1. The Vice President of India</div>
	<div><div>✔</div>2. The Prime Minister of India</div>
	<div><div>✖</div>3. The Finance Minister of India</div>
	<div><div>✖</div>4. The President of India</div>

Question Type :	MCQ
Question ID :	441009501394
Option 1 ID :	4410091960749
Option 2 ID :	4410091960746
Option 3 ID :	4410091960747
Option 4 ID :	4410091960748
Status :	Answered
Chosen Option :	3

Q.24 What is one of the focuses of the Prime Minister Dhan-Dhaanya Krishi Yojana introduced in Budget 2025?

- Ans
- ☐

1. Providing subsidised fertilisers to all farmers
- ☐

2. Ensuring crop insurance coverage for all crops
- ☐

3. Promoting organic farming across India
- ☒

4. Boosting productivity in 100 low-performing districts

Question Type :	MCQ
Question ID :	441009946467
Option 1 ID :	4410093739383
Option 2 ID :	4410093739384
Option 3 ID :	4410093739381
Option 4 ID :	4410093739382
Status :	Answered
Chosen Option :	4

Q.25 In which of the following years did the Santhal Rebellion start?

- Ans
- ☐

1. 1817
- ☒

2. 1855
- ☐

3. 1832
- ☐

4. 1841

Question Type :	MCQ
Question ID :	441009822180
Option 1 ID :	4410093242834
Option 2 ID :	4410093242836
Option 3 ID :	4410093242835
Option 4 ID :	4410093242837
Status :	Not Answered
Chosen Option :	--

Q.26 Which of the following political parties decided to participate in the council elections (1923) in Madras, even after the call for boycotting elections during the Non-Cooperation- Khilafat Movement (1921)?

- Ans
- ☐

1. Muslim League
- ☒

2. Justice Party
- ☐

3. Indian National Congress
- ☐

4. Swaraj Party

Question Type :	MCQ
Question ID :	441009631303
Option 1 ID :	4410092479357
Option 2 ID :	4410092479356
Option 3 ID :	4410092479355
Option 4 ID :	4410092479358
Status :	Answered
Chosen Option :	4

Q.27	Under which tree did Siddhartha Gautama attain enlightenment in Buddha Gaya?
Ans	<div><div><div><div><div></div></div></div><div>1. Banyan tree</div></div></div>
	<div><div><div><div><div></div></div></div><div>2. Mango tree</div></div></div>
	<div><div><div><div><div></div></div></div><div>3. Neem tree</div></div></div>
	<div><div><div><div><div></div></div></div><div>4. Peepal tree</div></div></div>

Question Type :	MCQ
Question ID :	4410091191413
Option 1 ID :	4410094699823
Option 2 ID :	4410094699825
Option 3 ID :	4410094699824
Option 4 ID :	4410094699822
Status :	Answered
Chosen Option :	1

Q.28	Which of the following states DOES NOT have a bicameral legislature?
Ans	<div><div><div><div><div></div></div></div><div>1. Rajasthan</div></div></div>
	<div><div><div><div><div></div></div></div><div>2. Karnataka</div></div></div>
	<div><div><div><div><div></div></div></div><div>3. Uttar Pradesh</div></div></div>
	<div><div><div><div><div></div></div></div><div>4. Maharashtra</div></div></div>

Question Type :	MCQ
Question ID :	441009683729
Option 1 ID :	4410092688890
Option 2 ID :	4410092688891
Option 3 ID :	4410092688888
Option 4 ID :	4410092688889
Status :	Answered
Chosen Option :	2

Q.29	As per the Odisha Economic Survey 2024–25, what is Odisha's rank among major Indian states in terms of capital outlay as a percentage of GSDP?
Ans	<div><div><div><div><div></div></div></div><div>1. Fifth</div></div></div>
	<div><div><div><div><div></div></div></div><div>2. Second</div></div></div>
	<div><div><div><div><div></div></div></div><div>3. Third</div></div></div>
	<div><div><div><div><div></div></div></div><div>4. First</div></div></div>

Question Type :	MCQ
Question ID :	441009875397
Option 1 ID :	4410093455164
Option 2 ID :	4410093455162
Option 3 ID :	4410093455163
Option 4 ID :	4410093455161
Status :	Not Answered
Chosen Option :	--

Q.30	Who presented the Odisha Budget for 2025-26?
Ans	<div><div>✓</div>1. Mohan Charan Majhi</div>
	<div><div>✗</div>2. PK Mishra</div>
	<div><div>✗</div>3. Ashok Chandra Panda</div>
	<div><div>✗</div>4. Naveen Patnaik</div>

Question Type :	MCQ
Question ID :	4410091250103
Option 1 ID :	4410094933586
Option 2 ID :	4410094933587
Option 3 ID :	4410094933588
Option 4 ID :	4410094933585
Status :	Answered
Chosen Option :	3

Q.31	India signed the Paris Agreement on Climate Change in which of the following years?
Ans	<div><div>✗</div>1. 2014</div>
	<div><div>✗</div>2. 2017</div>
	<div><div>✓</div>3. 2016</div>
	<div><div>✗</div>4. 2015</div>

Question Type :	MCQ
Question ID :	441009754280
Option 1 ID :	4410092971109
Option 2 ID :	4410092971112
Option 3 ID :	4410092971111
Option 4 ID :	4410092971110
Status :	Answered
Chosen Option :	2

Q.32	Which tree is most dominant in moist deciduous forests in India?
Ans	<div><div>✗</div>1. Neem</div>
	<div><div>✗</div>2. Peepal</div>
	<div><div>✓</div>3. Teak</div>
	<div><div>✗</div>4. Deodar</div>

Question Type :	MCQ
Question ID :	441009993800
Option 1 ID :	4410093927293
Option 2 ID :	4410093927294
Option 3 ID :	4410093927292
Option 4 ID :	4410093927291
Status :	Answered
Chosen Option :	1

Q.33 Which of the following is NOT among the industries that currently require compulsory industrial licensing post-1991 reforms?

- Ans ☒ 1. Hazardous Chemicals manufacturing
- ☒ 2. Defence equipment manufacturing
- ☒ 3. Textiles manufacturing
- ☒ 4. Alcoholic beverages

Question Type :	MCQ
Question ID :	4410091015630
Option 1 ID :	4410094014032
Option 2 ID :	4410094014031
Option 3 ID :	4410094014033
Option 4 ID :	4410094014034
Status :	Answered
Chosen Option :	3

Q.34 Which of the following rights is NOT included in the 'Golden Triangle' of the Indian Constitution?

- Ans ☒ 1. Right to Equality
- ☒ 2. Right to Freedom
- ☒ 3. Right against Exploitation
- ☒ 4. Right to Life and Liberty

Question Type :	MCQ
Question ID :	441009633665
Option 1 ID :	4410092488803
Option 2 ID :	4410092488804
Option 3 ID :	4410092488805
Option 4 ID :	4410092488806
Status :	Answered
Chosen Option :	3

Q.35 The 'Odisha Millet Mission' was launched mainly to:

- Ans ☒ 1. revive traditional millet cultivation
- ☒ 2. promote cash crops for export
- ☒ 3. provide free millet to urban poor
- ☒ 4. support coastal aquaculture

Question Type :	MCQ
Question ID :	441009905455
Option 1 ID :	4410093575637
Option 2 ID :	4410093575636
Option 3 ID :	4410093575638
Option 4 ID :	4410093575639
Status :	Answered
Chosen Option :	1

Q.36	Which country was selected as the Vice President of the International Organization of Aids to Marine Navigation in 2025?
Ans	<div><div><div>✖</div><div>1. Mexico</div></div></div>
	<div><div><div>✔</div><div>2. India</div></div></div>
	<div><div><div>✖</div><div>3. Egypt</div></div></div>
	<div><div><div>✖</div><div>4. Vietnam</div></div></div>

Question Type :	MCQ
Question ID :	4410091229011
Option 1 ID :	4410094849516
Option 2 ID :	4410094849514
Option 3 ID :	4410094849515
Option 4 ID :	4410094849513
Status :	Not Attempted and Marked For Review
Chosen Option :	--

Q.37	Which of the following dance forms was developed in monasteries of Assam in the sixteenth century by the saint and reformer Shankaradeva?
Ans	<div><div><div>✖</div><div>1. Kathak dance</div></div></div>
	<div><div><div>✖</div><div>2. Chhau dance</div></div></div>
	<div><div><div>✖</div><div>3. Bihu dance</div></div></div>
	<div><div><div>✔</div><div>4. Sattriya dance</div></div></div>

Question Type :	MCQ
Question ID :	441009872219
Option 1 ID :	4410093442051
Option 2 ID :	4410093442049
Option 3 ID :	4410093442050
Option 4 ID :	4410093442048
Status :	Marked For Review
Chosen Option :	3

Q.38	Ambedkar Jayanti was observed across India on which of the following dates in 2025?
Ans	<div><div><div>✖</div><div>1. 16 April</div></div></div>
	<div><div><div>✔</div><div>2. 14 April</div></div></div>
	<div><div><div>✖</div><div>3. 17 April</div></div></div>
	<div><div><div>✖</div><div>4. 15 April</div></div></div>

Question Type :	MCQ
Question ID :	441009799161
Option 1 ID :	4410093150759
Option 2 ID :	4410093150757
Option 3 ID :	4410093150760
Option 4 ID :	4410093150758
Status :	Not Attempted and Marked For Review
Chosen Option :	--

Q.39	Which Kashmiri folk music and culture legend passed away in June 2025?
Ans	<div><div><div>✖</div><div>1. Ishrat Hussain Shah</div></div></div>
	<div><div><div>✖</div><div>2. Shameema Dev Azad</div></div></div>
	<div><div><div>✖</div><div>3. Ghulam Hassan Sofi</div></div></div>
	<div><div><div>✔</div><div>4. Ustad Ghulam Nabi Shah</div></div></div>

Question Type :	MCQ
Question ID :	441009803025
Option 1 ID :	4410093166221
Option 2 ID :	4410093166219
Option 3 ID :	4410093166218
Option 4 ID :	4410093166220
Status :	Answered
Chosen Option :	4

Q.40	The East Coastal Plain extends from the Ganga Delta in the north to which place in the south?
Ans	<div><div><div>✖</div><div>1. Kochi</div></div></div>
	<div><div><div>✖</div><div>2. Goa</div></div></div>
	<div><div><div>✔</div><div>3. Kanyakumari</div></div></div>
	<div><div><div>✖</div><div>4. Mumbai</div></div></div>

Question Type :	MCQ
Question ID :	441009800049
Option 1 ID :	4410093154274
Option 2 ID :	4410093154273
Option 3 ID :	4410093154275
Option 4 ID :	4410093154276
Status :	Answered
Chosen Option :	3

Section : English

Q.41 Select the option that expresses the given sentence in the Present Perfect Continuous tense.

She started learning French two months ago and is still learning.

- Ans
- ☒ 1. She had learned French for two months.
 - ☒ 2. She was learning French for two months.
 - ☒ 3. She has been learning French for two months.
 - ☒ 4. She is learning French for two months.

Question Type :	MCQ
Question ID :	441009338276
Option 1 ID :	4410091319055
Option 2 ID :	4410091319052
Option 3 ID :	4410091319054
Option 4 ID :	4410091319053
Status :	Answered
Chosen Option :	3

Q.42 Rectify the sentence by selecting the correct spelling of the underlined word from the given options.

The pulchritute of the landscape took my breath away as we hiked through the mountains.

- Ans
- ☒ 1. pelchritute
 - ☒ 2. pulchrituud
 - ☒ 3. pulchritude
 - ☒ 4. pelchritude

Question Type :	MCQ
Question ID :	441009101237
Option 1 ID :	441009402974
Option 2 ID :	441009402972
Option 3 ID :	441009402975
Option 4 ID :	441009402973
Status :	Answered
Chosen Option :	3

Q.43	Select the option that expresses the given sentence in direct speech. Radhika asked if I could help her complete a project.
Ans	<div><div>✖</div>1. Radhika said, "Can she help me complete a project?"</div> <div><div>✔</div>2. Radhika said, "Can you help me complete a project?"</div> <div><div>✖</div>3. Radhika said, "Can I help her complete a project?"</div> <div><div>✖</div>4. Radhika said, "Will I help him complete a project?"</div>

Question Type :	MCQ
Question ID :	4410091140543
Option 1 ID :	4410094497138
Option 2 ID :	4410094497136
Option 3 ID :	4410094497135
Option 4 ID :	4410094497137
Status :	Answered
Chosen Option :	2

Q.44	Select the most appropriate meaning of the given idiom. In the twinkling of an eye
Ans	<div><div>✔</div>1. Very quickly</div> <div><div>✖</div>2. With a lot of effort</div> <div><div>✖</div>3. Slowly over time</div> <div><div>✖</div>4. After much consideration</div>

Question Type :	MCQ
Question ID :	441009904785
Option 1 ID :	4410093573000
Option 2 ID :	4410093572998
Option 3 ID :	4410093572999
Option 4 ID :	4410093572997
Status :	Answered
Chosen Option :	1

Q.45 Identify the error in pronoun in the given sentence and select the option that rectifies this error.

The manager asked the team to give it a round of applause for their hard work.

- Ans
- ☒ 1. one another
 - ☒ 2. each other
 - ☒ 3. theirs
 - ☒ 4. themselves

Question Type :	MCQ
Question ID :	441009904562
Option 1 ID :	4410093572107
Option 2 ID :	4410093572106
Option 3 ID :	4410093572108
Option 4 ID :	4410093572105
Status :	Answered
Chosen Option :	2

Q.46 Select the most appropriate ANTONYM of the underlined word in the given sentence.

He used abusive language.

- Ans
- ☒ 1. casual
 - ☒ 2. precise
 - ☒ 3. praiseful
 - ☒ 4. offensive

Question Type :	MCQ
Question ID :	441009850343
Option 1 ID :	4410093354281
Option 2 ID :	4410093354282
Option 3 ID :	4410093354280
Option 4 ID :	4410093354279
Status :	Answered
Chosen Option :	3

Q.47	Select the most appropriate option to fill in the blank while maintaining the logical flow and grammatical structure of the prose. Nature depletion to most of us has been reduced to threats of global warming. With the forest cover depleted to a minimum, animals poached to extinction and holidays in wildlife sanctuaries, the interest of a few to link with nature seems like a distant possibility. Traditionally, zoos have provided an economic form of recreation for people from various strata of society, income and educational levels, ages and socio-economic backgrounds.
Ans	<div><div>✗</div>1. Animals are exchanged between zoos of the world as part of soft diplomacy</div> <div><div>✗</div>2. Today, children have a wide disconnect with nature and schools are to blame for it</div> <div><div>✗</div>3. Some animal talk shows host animal rights activists demanding bans on zoos.</div> <div><div>✓</div>4. Zoos and zoological parks remain the only places for the multitudes to connect with wild life.</div>

Question Type :	MCQ
Question ID :	441009335223
Option 1 ID :	4410091306832
Option 2 ID :	4410091306830
Option 3 ID :	4410091306833
Option 4 ID :	4410091306831
Status :	Answered
Chosen Option :	4

Q.48	Select the most appropriate meaning of the given idiom. Chink in your armour
Ans	<div><div>✗</div>1. A small hole in clothing</div> <div><div>✗</div>2. A shiny spot in your costume</div> <div><div>✓</div>3. A flaw in someone's character</div> <div><div>✗</div>4. A new piece of equipment</div>

Question Type :	MCQ
Question ID :	441009410779
Option 1 ID :	4410091608507
Option 2 ID :	4410091608508
Option 3 ID :	4410091608506
Option 4 ID :	4410091608509
Status :	Answered
Chosen Option :	3

Q.49	Select the option that expresses the given sentence in the past continuous tense form. We drove through the mountains when the storm hit.
Ans	<div><div>✖</div>1. We had driven through the mountains when the storm hit.</div> <div><div>✖</div>2. We are driving through the mountains when the storm hit.</div> <div><div>✔</div>3. We were driving through the mountains when the storm hit.</div> <div><div>✖</div>4. We had been driving through the mountains when the storm hit.</div>

Question Type :	MCQ
Question ID :	441009331843
Option 1 ID :	4410091293426
Option 2 ID :	4410091293429
Option 3 ID :	4410091293428
Option 4 ID :	4410091293427
Status :	Answered
Chosen Option :	3

Q.50	Select the most appropriate option to fill in the blank. He walked ____ the park to reach his office.
Ans	<div><div>✖</div>1. from</div> <div><div>✔</div>2. through</div> <div><div>✖</div>3. on</div> <div><div>✖</div>4. for</div>

Question Type :	MCQ
Question ID :	44100998807
Option 1 ID :	441009393328
Option 2 ID :	441009393327
Option 3 ID :	441009393330
Option 4 ID :	441009393329
Status :	Answered
Chosen Option :	2

Q.51	Select the most appropriate option to fill in the blank. The clubhouse is neither an expensive nor an elegant edifice, but it meets _____ purposes required of it.
Ans	<div><div>✔ 1. the</div><div>✖ 2. No article required</div><div>✖ 3. an</div><div>✖ 4. a</div></div>

Question Type :	MCQ
Question ID :	441009330709
Option 1 ID :	4410091289359
Option 2 ID :	4410091289360
Option 3 ID :	4410091289358
Option 4 ID :	4410091289357
Status :	Answered
Chosen Option :	2

Q.52	Identify the error in the given sentence and select the option that rectifies it. She insisted to going with us despite the rain.
Ans	<div><div>✖ 1. She insisted in going with us despite the rain.</div><div>✖ 2. She insisted with going with us despite the rain.</div><div>✖ 3. She insisted by going with us despite the rain.</div><div>✔ 4. She insisted on going with us despite the rain.</div></div>

Question Type :	MCQ
Question ID :	441009331658
Option 1 ID :	4410091292728
Option 2 ID :	4410091292729
Option 3 ID :	4410091292731
Option 4 ID :	4410091292730
Status :	Answered
Chosen Option :	4

Q.53 Select the option that rectifies the underlined error in the given sentence.
We were discussing in the exam schedule after class.

- Ans ☒ 1. discussing on
- ☒ 2. discussing for
- ☒ 3. discussing
- ☒ 4. discussing at

Question Type :	MCQ
Question ID :	441009341066
Option 1 ID :	4410091330253
Option 2 ID :	4410091330254
Option 3 ID :	4410091330255
Option 4 ID :	4410091330256
Status :	Answered
Chosen Option :	3

Q.54 Select the most appropriate option to fill in the blank.
He waited _____ she arrived at the station.

- Ans ☒ 1. although
- ☒ 2. until
- ☒ 3. since
- ☒ 4. while

Question Type :	MCQ
Question ID :	44100998966
Option 1 ID :	441009393921
Option 2 ID :	441009393919
Option 3 ID :	441009393920
Option 4 ID :	441009393922
Status :	Answered
Chosen Option :	2

Q.55	Select the option that expresses the given sentence in active voice.
	A guitar is being played by Vighnesh.
Ans	<div><div>✖</div>1. Vighnesh is played a guitar.</div>
	<div><div>✖</div>2. Vighnesh was played a guitar.</div>
	<div><div>✔</div>3. Vighnesh is playing a guitar.</div>
	<div><div>✖</div>4. Vighnesh play a guitar.</div>

Question Type :	MCQ
Question ID :	4410091140439
Option 1 ID :	4410094496721
Option 2 ID :	4410094496720
Option 3 ID :	4410094496719
Option 4 ID :	4410094496722
Status :	Answered
Chosen Option :	3

Q.56	Select the option that expresses the given sentence in direct speech.
	The scientist explained that the experiment had yielded unexpected results.
Ans	<div><div>✖</div>1. The scientist said, "The experiment had yielded unexpected results."</div>
	<div><div>✖</div>2. The scientist said, "The experiment would yield unexpected results."</div>
	<div><div>✔</div>3. The scientist said, "The experiment has yielded unexpected results."</div>
	<div><div>✖</div>4. The scientist said, "The experiment will yield unexpected results."</div>

Question Type :	MCQ
Question ID :	4410091140400
Option 1 ID :	4410094496564
Option 2 ID :	4410094496565
Option 3 ID :	4410094496563
Option 4 ID :	4410094496566
Status :	Answered
Chosen Option :	3

Q.57	Select the option that can be used as a one-word substitute for the highlighted group of words. He was charged with stealing ideas or work of others and claiming it as his own.
Ans	✓ 1. plagiarism
	✗ 2. forgery
	✗ 3. fabrication
	✗ 4. robbery

Question Type :	MCQ
Question ID :	441009347768
Option 1 ID :	4410091357261
Option 2 ID :	4410091357260
Option 3 ID :	4410091357262
Option 4 ID :	4410091357263
Status :	Answered
Chosen Option :	2


	Comprehension:
	Read the given passage and answer the questions that follow. Warren Buffett was born in Omaha in 1930. He developed an interest in the business world and in investing, including the stock market, at an early age. Buffett started his education at the Wharton School at the University of Pennsylvania before moving to the University of Nebraska where he received an undergraduate degree in business administration. He later went to the Columbia Business School, where he earned his graduate degree in economics. Buffett began his career as an investment salesperson in the early 1950s and he formed Buffett Associates in 1956. He was in control of Berkshire Hathaway less than 10 years later, in 1965. Buffett announced his plans to donate his entire fortune to charity in June 2006. He and Bill Gates then announced, in 2010, that they had formed the Giving Pledge campaign to encourage other wealthy individuals to pursue philanthropy.
	SubQuestion No : 58
Q.58	Select the summary that best captures the essence of the given passage.
Ans	✗ 1. Warren Buffett studied at Wharton and worked with Bill Gates and other wealthy individuals in the stock market.
	✗ 2. Warren Buffett started investing late in life and founded a college for business students to emphasise the importance of starting early.
	✗ 3. Warren Buffett became rich through the stock market and enjoys travelling.
	✓ 4. Warren Buffett is an American investor who started early in business, led Berkshire Hathaway, and pledged most of his wealth to charity.

Question Type :	MCQ
Question ID :	441009202524
Option 1 ID :	441009796863
Option 2 ID :	441009796864
Option 3 ID :	441009796862
Option 4 ID :	441009796865
Status :	Answered
Chosen Option :	4

	Comprehension:
	Read the given passage and answer the questions that follow. Warren Buffett was born in Omaha in 1930. He developed an interest in the business world and in investing, including the stock market, at an early age. Buffett started his education at the Wharton School at the University of Pennsylvania before moving to the University of Nebraska where he received an undergraduate degree in business administration. He later went to the Columbia Business School, where he earned his graduate degree in economics. Buffett began his career as an investment salesperson in the early 1950s and he formed Buffett Associates in 1956. He was in control of Berkshire Hathaway less than 10 years later, in 1965. Buffett announced his plans to donate his entire fortune to charity in June 2006. He and Bill Gates then announced, in 2010, that they had formed the Giving Pledge campaign to encourage other wealthy individuals to pursue philanthropy.

	SubQuestion No : 59
Q.59	Which company did Buffett take control of in 1965?
Ans	<div><div>✓</div>1. Berkshire Hathaway</div> <div><div>✗</div>2. Columbia Investments</div> <div><div>✗</div>3. Microsoft</div> <div><div>✗</div>4. The Giving Pledge</div>

Question Type :	MCQ
Question ID :	441009202525
Option 1 ID :	441009796868
Option 2 ID :	441009796869
Option 3 ID :	441009796866
Option 4 ID :	441009796867
Status :	Answered
Chosen Option :	1



	Comprehension:
	Read the given passage and answer the questions that follow.
	Warren Buffett was born in Omaha in 1930. He developed an interest in the business world and in investing, including the stock market, at an early age. Buffett started his education at the Wharton School at the University of Pennsylvania before moving to the University of Nebraska where he received an undergraduate degree in business administration. He later went to the Columbia Business School, where he earned his graduate degree in economics.
	Buffett began his career as an investment salesperson in the early 1950s and he formed Buffett Associates in 1956. He was in control of Berkshire Hathaway less than 10 years later, in 1965. Buffett announced his plans to donate his entire fortune to charity in June 2006. He and Bill Gates then announced, in 2010, that they had formed the Giving Pledge campaign to encourage other wealthy individuals to pursue philanthropy.

	SubQuestion No : 60
Q.60	Select the most appropriate meaning of the given word.
	Philanthropy
Ans	<div><div>✗</div>1. A business strategy</div>
	<div><div>✗</div>2. A scientific theory</div>
	<div><div>✗</div>3. A type of investment plan</div>
	<div><div>✓</div>4. The practice of giving money to help others</div>

Question Type :	MCQ
Question ID :	441009202526
Option 1 ID :	441009796870
Option 2 ID :	441009796871
Option 3 ID :	441009796872
Option 4 ID :	441009796873
Status :	Answered
Chosen Option :	4

Section : Odia

Q.61	ବିଶେଷଣ ପଦ ବ୍ୟବହାର କରି ବାକ୍ୟଟିକୁ ସମ୍ପୂର୍ଣ୍ଣ କର ।
	" ____ ଲୋକର ମନ ଅତି ଶାନ୍ତ ଥିଲା ।"
Ans	<div><div>✗</div>1. ପ୍ରହର</div>
	<div><div>✗</div>2. ରୋଚକ</div>
	<div><div>✓</div>3. ସାଧୁ</div>
	<div><div>✗</div>4. ମିଠା</div>

Question Type :	MCQ
Question ID :	4410091197886
Option 1 ID :	4410094725458
Option 2 ID :	4410094725456
Option 3 ID :	4410094725457
Option 4 ID :	4410094725455
Status :	Answered
Chosen Option :	3

Q.62	ବାକ୍ୟ: "ମୋ ସହପାଠୀ ଛାତ୍ର ପାଠ ପଢ଼ିଛି।" କେଉଁଠାରେ ଭୁଲ ରହିଛି?
Ans	✓ 1. ପଢ଼ିଛି → ପଢ଼ୁଛି
	✗ 2. ଛାତ୍ର → ଛାତ୍ରମାନେ
	✗ 3. ପାଠ → ପାଠକୁ
	✗ 4. ସହପାଠୀ → ସହପାଠୀମାନେ

Question Type :	MCQ
Question ID :	4410091080014
Option 1 ID :	4410094257287
Option 2 ID :	4410094257285
Option 3 ID :	4410094257286
Option 4 ID :	4410094257284
Status :	Answered
Chosen Option :	1

Q.63	ଦିଆଯାଇଥିବା ଇଂରାଜୀ ବାକ୍ୟକୁ ଓଡ଼ିଆରେ ଅନୁବାଦ କର। Kunal walked across the road to drop the letter in the postbox.
Ans	✗ 1. ପୋଷ୍ଟବାକ୍ସରେ ଚିଠି ପକାଇବା ପାଇଁ କୁନାଲ ରାସ୍ତା ଅତିକ୍ରମ କରି ଯାଉଥିଲା।
	✓ 2. ପୋଷ୍ଟବାକ୍ସରେ ଚିଠି ପକାଇବା ପାଇଁ କୁନାଲ ରାସ୍ତା ଅତିକ୍ରମ କରି ଗଲା।
	✗ 3. ପୋଷ୍ଟବାକ୍ସରେ ଚିଠି ପକାଇବା ପାଇଁ କୁନାଲ ରାସ୍ତା ଅତିକ୍ରମ କରିବ।
	✗ 4. ପୋଷ୍ଟବାକ୍ସରେ ଚିଠି ପକାଇବା ପାଇଁ କୁନାଲ ରାସ୍ତା ଅତିକ୍ରମ କରିଛି।

Question Type :	MCQ
Question ID :	4410091233151
Option 1 ID :	4410094866302
Option 2 ID :	4410094866305
Option 3 ID :	4410094866303
Option 4 ID :	4410094866304
Status :	Answered
Chosen Option :	2

Q.64	ଦିଆଯାଇଥିବା ବାକ୍ୟର ସଠିକ୍ ଓଡ଼ିଆ ଅନୁବାଦ କେଉଁଟି? The solar system consists of eight planets orbiting around the Sun.
Ans	<div><div><div><div><div><div></div></div></div><div><div><div></div></div></div></div><div>1. ସୂର୍ଯ୍ୟମଣ୍ଡଳରେ ସୂର୍ଯ୍ୟ ପରିକ୍ରମା କରୁଥିବା ଆଠୋଟି ଗ୍ରହ ରହୁଛି।</div></div></div> <div><div><div><div><div><div></div></div></div><div><div><div></div></div></div></div><div>2. ସୂର୍ଯ୍ୟମଣ୍ଡଳରେ ସୂର୍ଯ୍ୟକୁ ପରିକ୍ରମା କରିବା ଆଠୋଟି ଗ୍ରହ ଅଛନ୍ତି।</div></div></div> <div><div><div><div><div><div></div></div></div><div><div><div></div></div></div></div><div>3. ସୂର୍ଯ୍ୟମଣ୍ଡଳରେ ସୂର୍ଯ୍ୟକୁ ପରିକ୍ରମା କରୁଥିବା ଆଠୋଟି ଗ୍ରହ ରହିଛି।</div></div></div> <div><div><div><div><div><div></div></div></div><div><div><div></div></div></div></div><div>4. ସୂର୍ଯ୍ୟମଣ୍ଡଳ ସୂର୍ଯ୍ୟ ପରିକ୍ରମା କରୁଥିବା ଆଠଟି ଗ୍ରହ ରହିଛନ୍ତି।</div></div></div>

Question Type :	MCQ
Question ID :	4410091202174
Option 1 ID :	4410094742456
Option 2 ID :	4410094742457
Option 3 ID :	4410094742454
Option 4 ID :	4410094742455
Status :	Answered
Chosen Option :	3

Q.65	ନିମ୍ନଲିଖିତ ବିକଳଗୁଡ଼ିକ ମଧ୍ୟରୁ ଦିଆଯାଇଥିବା ଓଡ଼ିଆ ବାକ୍ୟର ସଠିକ୍ ଇଂରାଜୀ ଅନୁବାଦ ବାଛନ୍ତୁ: ନଦୀ ଓ ହ୍ରଦରେ ଆବର୍ଜନା ଫିଙ୍ଗିବା ଜଳ ପ୍ରଦୂଷଣ ବଢ଼ାଇଥାଏ।
Ans	<div><div><div><div><div><div></div></div></div><div><div><div></div></div></div></div><div>1. Throwing garbage into river and lake reduces water pollution.</div></div></div> <div><div><div><div><div><div></div></div></div><div><div><div></div></div></div></div><div>2. Throwing garbage into rivers and lakes increases water pollution.</div></div></div> <div><div><div><div><div><div></div></div></div><div><div><div></div></div></div></div><div>3. Throwing garbage onto rivers and lakes increases water pollution.</div></div></div> <div><div><div><div><div><div></div></div></div><div><div><div></div></div></div></div><div>4. Throwing garbage into rivers and lake increases water pollution.</div></div></div>

Question Type :	MCQ
Question ID :	4410091201954
Option 1 ID :	4410094741603
Option 2 ID :	4410094741602
Option 3 ID :	4410094741604
Option 4 ID :	4410094741605
Status :	Answered
Chosen Option :	2

Q.66	ନିମ୍ନ ଶବ୍ଦଗୁଡ଼ିକୁ ସଠିକ୍ କ୍ରମରେ ସଜାଇ ବାକ୍ୟ ଗଠନ କର। "ବିଷୟରେ - ତାଙ୍କର - ଭାବରେ - ଅଛି- ଜ୍ଞାନ - ବିଶେଷ "
Ans	<div><div><div><div><div><div></div></div></div><div><div><div></div></div></div></div><div>1. ତାଙ୍କର ସାହିତ୍ୟ ବିଶେଷ ଭାବରେ ଜ୍ଞାନ ବିଷୟରେ ଅଛି।</div></div></div> <div><div><div><div><div><div></div></div></div><div><div><div></div></div></div></div><div>2. ତାଙ୍କର ବିଶେଷ ସାହିତ୍ୟ ବିଷୟରେ ଭାବରେ ଜ୍ଞାନ ଅଛି।</div></div></div> <div><div><div><div><div><div></div></div></div><div><div><div></div></div></div></div><div>3. ସାହିତ୍ୟ ବିଷୟରେ ତାଙ୍କର ବିଶେଷ ଭାବରେ ଜ୍ଞାନ ଅଛି।</div></div></div> <div><div><div><div><div><div></div></div></div><div><div><div></div></div></div></div><div>4. ବିଶେଷ ସାହିତ୍ୟ ବିଷୟରେ ତାଙ୍କର ଭାବରେ ଜ୍ଞାନ ଅଛି।</div></div></div>

Question Type :	MCQ
Question ID :	4410091193982
Option 1 ID :	4410094709856
Option 2 ID :	4410094709855
Option 3 ID :	4410094709854
Option 4 ID :	4410094709857
Status :	Answered
Chosen Option :	3

Q.67	ଶିଶୁଟି ତୁଆର ମୁହଁରେ "ନାକେଇଛି" । ରେଖାଙ୍କିତ ପଦଟି କେଉଁ କ୍ରିୟା ସୂଚାଅ?
Ans	<div>✓ 1. ନାମଧାରୁ</div> <div>✗ 2. ପ୍ରେରଣାର୍ଥକ</div> <div>✗ 3. ମିଶ୍ର</div> <div>✗ 4. ଅମିଶ୍ର</div>

Question Type :	MCQ
Question ID :	4410091038534
Option 1 ID :	4410094104274
Option 2 ID :	4410094104276
Option 3 ID :	4410094104277
Option 4 ID :	4410094104275
Status :	Answered
Chosen Option :	3

Q.68	ନିମ୍ନଲିଖିତ ପ୍ରଶ୍ନରେ ଦିଆଯାଇଥିବା ଚାରୋଟି ବିକଳ୍ପ ମଧ୍ୟରୁ ସେହି ବିକଳ୍ପକୁ ବାଛନ୍ତୁ, ଯାହା ପ୍ରଦତ୍ତ ପ୍ରବାଦ ବା ଲୋକବାଣୀର ଅର୍ଥକୁ ସର୍ବୋତ୍ତମ ଭାବରେ ପ୍ରକାଶ କରେ । ଗୁଣ ଚିହ୍ନେ ଗୁଣିଆ ସୁନା ଚିହ୍ନେ ବଣିଆ
Ans	<div>✗ 1. ବଣିଆ ସୁନା ଚିହ୍ନିବା</div> <div>✗ 2. ଗୁଣର ଆଦର ନକରିବା</div> <div>✓ 3. ଗୁଣୀ ଗୁଣର ଆଦର କରେ</div> <div>✗ 4. ଗୁଣିଆ ଗୁଣୀ ଗାରେଡ଼ି କରିବା</div>

Question Type :	MCQ
Question ID :	4410091237991
Option 1 ID :	4410094885492
Option 2 ID :	4410094885493
Option 3 ID :	4410094885494
Option 4 ID :	4410094885495
Status :	Answered
Chosen Option :	3

Q.69	ପ୍ରଦତ୍ତ ବାକ୍ୟକୁ ଗୋଟିଏ ଶବ୍ଦରେ ପ୍ରକାଶ କର । ଯାହା ପାଠ କରିବା ଭରିତ
Ans	<div><div><div><div></div></div><div>1. ବିଦ୍ୟାଳୟ</div></div><div><div><div></div></div><div>2. ପୁସ୍ତକ</div></div><div><div><div></div></div><div>3. ପଠନୀୟ</div></div><div><div><div></div></div><div>4. ପଢ଼ିବା</div></div></div>

Question Type :	MCQ
Question ID :	4410091227974
Option 1 ID :	4410094845408
Option 2 ID :	4410094845406
Option 3 ID :	4410094845407
Option 4 ID :	4410094845405
Status :	Answered
Chosen Option :	3

Q.70	ପଞ୍ଚ' କେଉଁ ପ୍ରକାରର ଶବ୍ଦ?
Ans	<div><div><div><div></div></div><div>1. ଦେଶଜ</div></div><div><div><div></div></div><div>2. ଚତୁର୍ଥ</div></div><div><div><div></div></div><div>3. ବିଦେଶଜ</div></div><div><div><div></div></div><div>4. ଚଉବ</div></div></div>

Question Type :	MCQ
Question ID :	4410091194265
Option 1 ID :	4410094710976
Option 2 ID :	4410094710974
Option 3 ID :	4410094710977
Option 4 ID :	4410094710975
Status :	Answered
Chosen Option :	1

Q.71	ନିମ୍ନଲିଖିତ ବାକ୍ୟରେ ରେଖାଙ୍କିତ ଶବ୍ଦର ଅର୍ଥ ସହିତ ସାମଞ୍ଜସ୍ୟ ରଖୁଥିବା ଶବ୍ଦଟିକୁ ବାଛ । ରାଜକୀୟ ବେଶରେ ସୁସଜ୍ଜିତ ଏବଂ ମସ୍ତକରେ ଜଟିଳ ଚିତ୍ରକଳା ଧାରଣ କରିଥିବା ସେହି କୁଞ୍ଜରୁଟି ନିଜର ଗମ୍ଭୀର ଚାଲିରେ ରାଜଧାନୀର ଜନଗହଳିପୂର୍ଣ୍ଣ ରାଜପଥରେ ବିରାଟ ଶୋଭାଯାତ୍ରାର ନେତୃତ୍ୱ ନେଉଥିଲା । "କୁଞ୍ଜର" କାହାର ସମାର୍ଥବୋଧକ ଶବ୍ଦ?
Ans	<div><div><div><div></div></div><div>1. ହାତୀ</div></div><div><div><div></div></div><div>2. ପକ୍ଷୀ</div></div><div><div><div></div></div><div>3. ମୟୂର</div></div><div><div><div></div></div><div>4. ଘୋଡ଼ା</div></div></div>

Question Type :	MCQ
Question ID :	4410091045014
Option 1 ID :	4410094129161
Option 2 ID :	4410094129160
Option 3 ID :	4410094129159
Option 4 ID :	4410094129158
Status :	Answered
Chosen Option :	1

Q.72	"ଅତିରିକ୍ତ ରାତି ନିମନ୍ତେ ହୁଏ" ଲୋକୋକ୍ତିର ଅର୍ଥ କ'ଣ?
Ans	<div><div><div><div><div><div></div></div></div><div>1. ସବୁବେଳେ ଯୋଗ୍ୟ ସମୟ ରହେ</div></div><div><div><div></div></div><div>2. ଯାହାର ଆବଶ୍ୟକତା ଅଧିକ ସେ ଅଧିକ ପାଇଁ ଯାଞ୍ଚ କରେ</div></div><div><div><div></div></div><div>3. ସମୟ ଅନୁଯାୟୀ କାମ କରିବା</div></div><div><div><div></div></div><div>4. କୌଣସି କାମ ବିଳମ୍ବ କରିବା</div></div></div></div>

Question Type :	MCQ
Question ID :	4410091079995
Option 1 ID :	4410094257208
Option 2 ID :	4410094257209
Option 3 ID :	4410094257210
Option 4 ID :	4410094257211
Status :	Answered
Chosen Option :	2

Q.73	ନିମ୍ନଲିଖିତ ବିକଳ୍ପଗୁଡ଼ିକ ମଧ୍ୟରୁ ଦିଆଯାଇଥିବା ଓଡ଼ିଆ ବାକ୍ୟର ସଠିକ୍ ଇଂରାଜୀ ଅନୁବାଦ ବାଛିନ୍ତୁ: ବ୍ୟାଙ୍କ ଗ୍ରାହକଙ୍କୁ ନୂଆ ରଣ ସୁବିଧା ଦେଇଛି।
Ans	<div><div><div><div><div><div></div></div></div><div>1. The bank has given customers a new loan facility.</div></div><div><div><div></div></div><div>2. The bank will given customers a new loan facility.</div></div><div><div><div></div></div><div>3. The bank gave customers a new loan facility yesterday.</div></div><div><div><div></div></div><div>4. The bank is give customers a new loan facility.</div></div></div></div>

Question Type :	MCQ
Question ID :	4410091201714
Option 1 ID :	4410094740641
Option 2 ID :	4410094740642
Option 3 ID :	4410094740640
Option 4 ID :	4410094740643
Status :	Answered
Chosen Option :	1

Q.74	ପ୍ରଦତ୍ତ ବାକ୍ୟରେ ରେଖାଙ୍କିତ ହୋଇଥିବା ଶବ୍ଦ ସ୍ଥାନରେ ଏକ ଉପଯୁକ୍ତ ବାକ୍ୟ ଖଣ୍ଡ ବ୍ୟବହାର କରନ୍ତୁ। ଗୋଟିଏ ସମୟ ଆସିବ ଯେତେବେଳେ ସମସ୍ତଙ୍କୁ ତୁମକୁ ସମ୍ମାନ ଜଣାଇବେ।
Ans	<div><div><div><div><div><div></div></div></div><div>1. ପରିବର୍ତ୍ତନର ଆବଶ୍ୟକତା ନାହିଁ।</div></div><div><div><div></div></div><div>2. ଯେତେବେଳେ ସମସ୍ତେ</div></div><div><div><div></div></div><div>3. ଯେତେବେଳେ ସମସ୍ତଙ୍କ ପାଇଁ</div></div><div><div><div></div></div><div>4. ଯେତେବେଳେ ସମସ୍ତଙ୍କ ଠାରୁ</div></div></div></div>

Question Type :	MCQ
Question ID :	4410091235735
Option 1 ID :	4410094876627
Option 2 ID :	4410094876624
Option 3 ID :	4410094876626
Option 4 ID :	4410094876625
Status :	Answered
Chosen Option :	2

Q.75	ନିମ୍ନରେ ଦିଆଯାଇଥିବା ବିକଳ୍ପ ମଧ୍ୟରୁ ଉପଯୁକ୍ତ ସମାନାର୍ଥକ ଶବ୍ଦ ଚୟନ କରନ୍ତୁ । ମୂଷା
Ans	<div><div><div>✖</div><div>1. ଗୁଣ୍ଡୁଡ଼ି</div></div><div><div>✖</div><div>2. କୁସାର</div></div><div><div>✔</div><div>3. ମୂଷିକ</div></div><div><div>✖</div><div>4. ବିଲେଇ</div></div></div>


Question Type :	MCQ
Question ID :	4410091199728
Option 1 ID :	4410094732728
Option 2 ID :	4410094732729
Option 3 ID :	4410094732730
Option 4 ID :	4410094732731
Status :	Answered
Chosen Option :	3

	Comprehension:
	ନିମ୍ନ ଅନୁଛେଦଟିକୁ ପାଠ କରି ପ୍ରଦତ୍ତ ପ୍ରଶ୍ନଗୁଡ଼ିକର ଉତ୍ତର ଲେଖ । ଆମେ ପ୍ରତିଦିନ ବହୁତ ଖାଦ୍ୟ ଖର୍ଚ୍ଚ କରୁ । ଅନେକ ସମୟରେ ଆମେ ଆବଶ୍ୟକତାଠାରୁ ଅଧିକ ଖାଦ୍ୟ ଟିଆରି କରି ଅନେକ ଗାର୍ବେଜ ବିନ୍ଦରେ ପକେଇ ଦେଉଛୁ । ଏହି ଖାଦ୍ୟ ଅପଚୟ କେବଳ ଆର୍ଥିକ କ୍ଷତି ନୁହେଁ, ବରଂ ଏହା ପରିବେଶ ଉପରେ ମଧ୍ୟ ପ୍ରଭାବ ପକାଏ । ଜଣେ ଗରିବ ବ୍ୟକ୍ତି ଜେଉଁଠି ଦିନେ ଥିବା ଖାଦ୍ୟ ନାହିଁ, ସେଠି ଆମେ ସୁଖ ସୁବିଧାରେ ଅନେକ ଭାତ, ଚରକାରି ବା ରୋଟି ଫିଙ୍ଗି ଦେଉଛୁ । ଏହି ଅବ୍ୟବସ୍ଥିତ ଆଚରଣ ଦ୍ଵାରା ନ ହେଲେ ଆମେ ଅନେକ ଜଣଙ୍କୁ ଖାଇବାକୁ ଦେଇପାରୁଥାନ୍ତୁ । କିଛି ହୋଟେଲ ଓ ବିବାହ ଅବସରରେ ଅପରିମିତ ଖାଦ୍ୟ ବ୍ୟବହାର ହେଉଥିବା ଦେଖାଯାଏ । ଅତିରିକ୍ତ ଖାଦ୍ୟ ସଞ୍ଚୟ କରି ଜଣେ ଦରିଦ୍ରକୁ ଦେଇଦେବା ଏକ ଉତ୍ତମ ଉଦାହରଣ ହେବ । ଆମେ ଯଦି ସଚେତନ ହେଉ ଓ ଖାଦ୍ୟକୁ ସମ୍ମାନ କରିବା ଶିଖୁ, ତେବେ ଏହି ସମସ୍ୟାର ସମାଧାନ ହେବ ।
	SubQuestion No : 76
Q.76	ଅନୁଛେଦର ସ୍ଵରକୁ ଚିହ୍ନଟ କର ।
Ans	<div><div><div>✖</div><div>1. ରୋମାନ୍ଟିକ</div></div><div><div>✖</div><div>2. ବ୍ୟଙ୍ଗ୍ୟମୟ</div></div><div><div>✔</div><div>3. ସୂଚନାତ୍ମକ</div></div><div><div>✖</div><div>4. ଭୟଭୀତ</div></div></div>

Question Type :	MCQ
Question ID :	4410091188672
Option 1 ID :	4410094688940
Option 2 ID :	4410094688938
Option 3 ID :	4410094688939
Option 4 ID :	4410094688941
Status :	Answered
Chosen Option :	3

Comprehension:	
ନିମ୍ନ ଅନୁଛେଦଟିକୁ ପାଠ କରି ପ୍ରଦତ୍ତ ପ୍ରଶ୍ନଗୁଡ଼ିକର ଉତ୍ତର ଲେଖ ।	
ଆମେ ପ୍ରତିଦିନ ବହୁତ ଖାଦ୍ୟ ଖର୍ଚ୍ଚ କରୁ । ଅନେକ ସମୟରେ ଆମେ ଆବଶ୍ୟକତାଠାରୁ ଅଧିକ ଖାଦ୍ୟ ଡିଆରି କରି ଅନ୍ତେ ଗାର୍ବେଜ ବିନ୍ଦୁରେ ପକେଇ ଦେଉଛୁ । ଏହି ଖାଦ୍ୟ ଅପଚୟ କେବଳ ଆର୍ଥିକ କ୍ଷତି ନୁହେଁ, ବରଂ ଏହା ପରିବେଶ ଉପରେ ମଧ୍ୟ ପ୍ରଭାବ ପକାଏ । ଜଣେ ଗରିବ ବ୍ୟକ୍ତି ଜେଉଁଠି ଦିନେ ଥିବା ଖାଦ୍ୟ ନାହିଁ, ସେଠି ଆମେ ସୁଖ ସୁବିଧାରେ ଅନେକ ଭାତ, ଚରକାରି ବା ରୋଟି ଫିଙ୍ଗି ଦେଉଛୁ । ଏହି ଅବ୍ୟବସ୍ଥିତ ଆଚରଣ ଦ୍ୱାରା ନ ହେଲେ ଆମେ ଅନେକ ଜଣଙ୍କୁ ଖାଇବାକୁ ଦେଇପାରୁଥାନ୍ତୁ । କିଛି ହୋଟେଲ ଓ ବିବାହ ଅବସରରେ ଅପରିମିତ ଖାଦ୍ୟ ବ୍ୟବହାର ହେଉଥିବା ଦେଖାଯାଏ । ଅତିରିକ୍ତ ଖାଦ୍ୟ ସଞ୍ଚୟ କରି ଜଣେ ଦରିଦ୍ରଙ୍କୁ ଦେଇଦେବା ଏକ ଉତ୍ତମ ଉଦାହରଣ ହେବ । ଆମେ ଯଦି ସଚେତନ ହେଉ ଓ ଖାଦ୍ୟକୁ ସମ୍ମାନ କରିବା ଶିଖୁ, ତେବେ ଏହି ସମସ୍ୟାର ସମାଧାନ ହେବ ।	
SubQuestion No : 77	
Q.77	ଅନୁଛେଦର ମୁଖ୍ୟ ବିଷୟବସ୍ତୁକୁ ଚିହ୍ନଟ କର ।
Ans	<div><div><div>✓</div><div>1. ଖାଦ୍ୟ ଅପଚୟ ଓ ତାହାର ପ୍ରଭାବ</div></div><div><div>✗</div><div>2. ଅତ୍ୟଧିକ ଖାଇବା</div></div><div><div>✗</div><div>3. ବିବାହ ଉତ୍ସବ</div></div><div><div>✗</div><div>4. ବିବାହ ଅବସରର ଆନନ୍ଦ</div></div></div>


Question Type :	MCQ
Question ID :	4410091188673
Option 1 ID :	4410094688943
Option 2 ID :	4410094688945
Option 3 ID :	4410094688942
Option 4 ID :	4410094688944
Status :	Answered
Chosen Option :	1



Comprehension:
ନିମ୍ନ ଅନୁଛେଦଟିକୁ ପାଠ କରି ପ୍ରଦତ୍ତ ପ୍ରଶ୍ନଗୁଡ଼ିକର ଉତ୍ତର ଲେଖ । ଆମେ ପ୍ରତିଦିନ ବହୁତ ଖାଦ୍ୟ ଖର୍ଚ୍ଚ କରୁ । ଅନେକ ସମୟରେ ଆମେ ଆବଶ୍ୟକତାଠାରୁ ଅଧିକ ଖାଦ୍ୟ ଡିଆରି କରି ଅନ୍ତେ ଗାର୍ବେଜ ବିନ୍ଦୁରେ ପକେଇ ଦେଉଛୁ । ଏହି ଖାଦ୍ୟ ଅପଚୟ କେବଳ ଆର୍ଥିକ କ୍ଷତି ନୁହେଁ, ବରଂ ଏହା ପରିବେଶ ଉପରେ ମଧ୍ୟ ପ୍ରଭାବ ପକାଏ । ଜଣେ ଗରିବ ବ୍ୟକ୍ତି ଜେଉଁଠି ଦିନେ ଥିବା ଖାଦ୍ୟ ନାହିଁ, ସେଠି ଆମେ ସୁଖ ସୁବିଧାରେ ଅନେକ ଭାତ, ଚରକାରି ବା ରୋଟି ଫିଙ୍ଗି ଦେଉଛୁ । ଏହି ଅବ୍ୟବସ୍ଥିତ ଆଚରଣ ଦ୍ଵାରା ନ ହେଲେ ଆମେ ଅନେକ ଜଣଙ୍କୁ ଖାଇବାକୁ ଦେଇପାରୁଥାନ୍ତୁ । କିଛି ହୋଟେଲ ଓ ବିବାହ ଅବସରରେ ଅପରିମିତ ଖାଦ୍ୟ ବ୍ୟବହାର ହେଉଥିବା ଦେଖାଯାଏ । ଅତିରିକ୍ତ ଖାଦ୍ୟ ସଞ୍ଚୟ କରି ଜଣେ ଦରିଦ୍ରଙ୍କୁ ଦେଇଦେବା ଏକ ଉତ୍ତମ ଉଦାହରଣ ହେବ । ଆମେ ଯଦି ସଚେତନ ହେଉ ଓ ଖାଦ୍ୟକୁ ସମ୍ମାନ କରିବା ଶିଖୁ, ତେବେ ଏହି ସମସ୍ୟାର ସମାଧାନ ହେବ ।

SubQuestion No : 78
Q.78 ଅନୁଛେଦରେ ଦିଆଯାଇଥିବା ତଥ୍ୟଗୁଡ଼ିକୁ ଚିହ୍ନଟ କର ।
Ans
<div><div><div><div></div></div><div>1. ଅପଚୟ ଖାଦ୍ୟ ଗଛ ତଳେ ପକାଯାଏ</div></div></div>
<div><div><div><div></div></div><div>2. ଅନେକ ବେଳେ ଆମେ ଅନାବଶ୍ୟକ ଭାବରେ ଖାଦ୍ୟ ଅପଚୟ କରୁଛୁ</div></div></div>
<div><div><div><div></div></div><div>3. ଗରିବ ଲୋକମାନେ ଅଧିକ ଖାଦ୍ୟ ଖାନ୍ତି</div></div></div>
<div><div><div><div></div></div><div>4. ସମସ୍ତ ଲୋକ ଖାଦ୍ୟ ସଞ୍ଚୟ କରନ୍ତି</div></div></div>


Question Type :	MCQ
Question ID :	4410091188674
Option 1 ID :	4410094688948
Option 2 ID :	4410094688947
Option 3 ID :	4410094688946
Option 4 ID :	4410094688949
Status :	Answered
Chosen Option :	2



Comprehension:
ନିମ୍ନ ଅନୁଛେଦଟିକୁ ପାଠ କରି ପ୍ରଦତ୍ତ ପ୍ରଶ୍ନଗୁଡ଼ିକର ଉତ୍ତର ଲେଖ । ଆମେ ପ୍ରତିଦିନ ବହୁତ ଖାଦ୍ୟ ଖର୍ଚ୍ଚ କରୁ । ଅନେକ ସମୟରେ ଆମେ ଆବଶ୍ୟକତାଠାରୁ ଅଧିକ ଖାଦ୍ୟ ଡିଆରି କରି ଅନ୍ତେ ଗାର୍ବେଜ ବିନ୍ଦୁରେ ପକେଇ ଦେଉଛୁ । ଏହି ଖାଦ୍ୟ ଅପଚୟ କେବଳ ଆର୍ଥିକ କ୍ଷତି ନୁହେଁ, ବରଂ ଏହା ପରିବେଶ ଉପରେ ମଧ୍ୟ ପ୍ରଭାବ ପକାଏ । ଜଣେ ଗରିବ ବ୍ୟକ୍ତି ଜେଉଁଠି ଦିନେ ଥିବା ଖାଦ୍ୟ ନାହିଁ, ସେଠି ଆମେ ସୁଖ ସୁବିଧାରେ ଅନେକ ଭାତ, ଚରକାରି ବା ରୋଟି ଫିଙ୍ଗି ଦେଉଛୁ । ଏହି ଅବ୍ୟବସ୍ଥିତ ଆଚରଣ ଦ୍ୱାରା ନ ହେଲେ ଆମେ ଅନେକ ଜଣଙ୍କୁ ଖାଇବାକୁ ଦେଇପାରୁଥାନ୍ତୁ । କିଛି ହୋଟେଲ ଓ ବିବାହ ଅବସରରେ ଅପରିମିତ ଖାଦ୍ୟ ବ୍ୟବହାର ହେଉଥିବା ଦେଖାଯାଏ । ଅତିରିକ୍ତ ଖାଦ୍ୟ ସଞ୍ଚୟ କରି ଜଣେ ଦରିଦ୍ରଙ୍କୁ ଦେଇଦେବା ଏକ ଉତ୍ତମ ଉଦାହରଣ ହେବ । ଆମେ ଯଦି ସଚେତନ ହେଉ ଓ ଖାଦ୍ୟକୁ ସମ୍ମାନ କରିବା ଶିଖୁ, ତେବେ ଏହି ସମସ୍ୟାର ସମାଧାନ ହେବ ।

SubQuestion No : 79
Q.79 ଅନୁଛେଦରୁ ନିଆଯାଇଥିବା ଉଦାହରଣଗୁଡ଼ିକୁ ଚିହ୍ନଟ କର ।
Ans
<input checked="" type="checkbox"/> 1. ଖାଦ୍ୟ ଉପାଦାନ ବିକ୍ରି
<input checked="" type="checkbox"/> 2. ରୋଟି ଚିକେନ ଖାଇବା
<input checked="" type="checkbox"/> 3. ହୋଟେଲରେ ଖାଦ୍ୟ ନ ମିଳିବା
<input checked="" type="checkbox"/> 4. ଅଧିକ ଭାତ ଓ ଚରକାରି ଫିଙ୍ଗି ଦେବା

Question Type :	MCQ
Question ID :	4410091188675
Option 1 ID :	4410094688950
Option 2 ID :	4410094688953
Option 3 ID :	4410094688951
Option 4 ID :	4410094688952
Status :	Answered
Chosen Option :	4



Comprehension:

ନିମ୍ନ ଅନୁଛେଦଟିକୁ ପାଠ କରି ପ୍ରଦତ୍ତ ପ୍ରଶ୍ନଗୁଡ଼ିକର ଉତ୍ତର ଲେଖ ।

ଆମେ ପ୍ରତିଦିନ ବହୁତ ଖାଦ୍ୟ ଖର୍ଚ୍ଚ କରୁ । ଅନେକ ସମୟରେ ଆମେ ଆବଶ୍ୟକତାଠାରୁ ଅଧିକ ଖାଦ୍ୟ ଡିଆରି କରି ଅନ୍ତେ ଗାର୍ବେଜ ବିନ୍ଦୁରେ ପକେଇ ଦେଉଛୁ । ଏହି ଖାଦ୍ୟ ଅପଚୟ କେବଳ ଆର୍ଥିକ କ୍ଷତି ନୁହେଁ, ବରଂ ଏହା ପରିବେଶ ଉପରେ ମଧ୍ୟ ପ୍ରଭାବ ପକାଏ । ଜଣେ ଗରିବ ବ୍ୟକ୍ତି ଜେଉଁଠି ଦିନେ ଥିବା ଖାଦ୍ୟ ନାହିଁ, ସେଠି ଆମେ ସୁଖ ସୁବିଧାରେ ଅନେକ ଭାତ, ଚରକାରି ବା ରୋଟି ଫିଙ୍ଗି ଦେଉଛୁ । ଏହି ଅବ୍ୟବସ୍ଥିତ ଆଚରଣ ଦ୍ୱାରା ନ ହେଲେ ଆମେ ଅନେକ ଜଣଙ୍କୁ ଖାଇବାକୁ ଦେଇପାରୁଥାନ୍ତୁ । କିଛି ହୋଟେଲ ଓ ବିବାହ ଅବସରରେ ଅପରିମିତ ଖାଦ୍ୟ ବ୍ୟବହାର ହେଉଥିବା ଦେଖାଯାଏ । ଅତିରିକ୍ତ ଖାଦ୍ୟ ସଞ୍ଚୟ କରି ଜଣେ ଦରିଦ୍ରଙ୍କୁ ଦେଇଦେବା ଏକ ଉତ୍ତମ ଉଦାହରଣ ହେବ । ଆମେ ଯଦି ସଚେତନ ହେଉ ଓ ଖାଦ୍ୟକୁ ସମ୍ମାନ କରିବା ଶିଖୁ, ତେବେ ଏହି ସମସ୍ୟାର ସମାଧାନ ହେବ ।

SubQuestion No : 80

Q.80 ଶବ୍ଦ “ଅପଚୟ”ର ସଠିକ ବ୍ୟବହାର କେଉଁଟି?

- Ans
- ☒ 1. ସେ ଅନେକ ଅପଚୟ ଖାଇଥିଲେ
 - ☒ 2. ଟଙ୍କାର ଅପଚୟ କରିବା ଭଲ ନୁହେଁ
 - ☒ 3. ଅପଚୟ ହେଉଛି ଜଳ
 - ☒ 4. ଅପଚୟ ଗଛର ଫଳ ଖାଇଲେ

Question Type :	MCQ
Question ID :	4410091188676
Option 1 ID :	4410094688954
Option 2 ID :	4410094688955
Option 3 ID :	4410094688957
Option 4 ID :	4410094688956
Status :	Answered
Chosen Option :	2

Section : Logical Reasoning

Q.81 If 1 is added to each odd digit and 2 is subtracted from each even digit in the number 3846251, what will be the difference between the highest and lowest digits in the number thus formed?

- Ans
- ☒ 1. 4
 - ☒ 2. 5
 - ☒ 3. 6
 - ☒ 4. 7

Question Type :	MCQ
Question ID :	4410091245418
Option 1 ID :	4410094914955
Option 2 ID :	4410094914954
Option 3 ID :	4410094914952
Option 4 ID :	4410094914953
Status :	Answered
Chosen Option :	3

Q.82	In a certain code language, 'A + B' means 'A is the daughter of B', 'A # B' means 'A is the father of B', 'A × B' means 'A is the son of B' and 'A & B' means 'A is the sister of B'. How is S related to T if 'S×G+J#K&T'?
Ans	<div><div>✖</div>1. Brother</div>
	<div><div>✔</div>2. Sister's son</div>
	<div><div>✖</div>3. Sister's husband</div>
	<div><div>✖</div>4. Father</div>

Question Type :	MCQ
Question ID :	4410091244149
Option 1 ID :	4410094909905
Option 2 ID :	4410094909902
Option 3 ID :	4410094909903
Option 4 ID :	4410094909904
Status :	Answered
Chosen Option :	2

Q.83	Seven boxes A, B, C, D, E, F and G are kept one over the other but not necessarily in the same order. Exactly 3 boxes are kept below A and exactly 4 boxes are kept above D. F is kept immediately above E and G is kept immediately below E. C is kept below B. How many boxes are kept below E?
Ans	<div><div>✖</div>1. 4</div>
	<div><div>✔</div>2. 5</div>
	<div><div>✖</div>3. 3</div>
	<div><div>✖</div>4. 2</div>

Question Type :	MCQ
Question ID :	4410091189867
Option 1 ID :	4410094693617
Option 2 ID :	4410094693618
Option 3 ID :	4410094693616
Option 4 ID :	4410094693615
Status :	Answered
Chosen Option :	2

Q.84	Mr. Tosi starts from Point A and drives 2 km towards south. He then takes a right turn, drives 10 km, turns right and drives 19 km. He then takes a right turn and drives 24 km. He takes a final right turn, drives 17 km and stops at Point P. How far (shortest distance) and towards which direction should he drive in order to reach Point A again? (All turns are 90° turns only unless specified.)
Ans	<div><div>✖</div>1. 12 km to south</div>
	<div><div>✖</div>2. 11 km to east</div>
	<div><div>✔</div>3. 14 km to west</div>
	<div><div>✖</div>4. 10 km to north</div>

Question Type :	MCQ
Question ID :	4410091198399
Option 1 ID :	4410094727489
Option 2 ID :	4410094727488
Option 3 ID :	4410094727487
Option 4 ID :	4410094727490
Status :	Answered
Chosen Option :	3

Q.85	<p>This question is based on the given words.</p> <p>SET YOU PIN VAN</p> <p>In each of the words, each vowel is changed to the letter immediately following it in the English alphabetical order and each consonant is changed to the letter immediately preceding it in the English alphabetical order. In how many letter-clusters thus formed will no vowel appear?⁷¹⁴⁰</p>
Ans	<div><div>✖</div>1. One</div>
	<div><div>✔</div>2. Two</div>
	<div><div>✖</div>3. Three</div>
	<div><div>✖</div>4. Four</div>

Question Type :	MCQ
Question ID :	441009810449
Option 1 ID :	4410093195922
Option 2 ID :	4410093195921
Option 3 ID :	4410093195920
Option 4 ID :	4410093195919
Status :	Answered
Chosen Option :	2

Q.86	Based on the English alphabetical order, three of the following four letter-cluster pairs are alike in a certain way and thus form a group. Which is the letter-cluster pair that DOES NOT belong to that group? (Note: The odd one out is not based on the number of consonants/vowels or their position in the letter-cluster.)
Ans	✔ 1. ZC-DJ
	✘ 2. DG-IL
	✘ 3. SV-XA
	✘ 4. OR-TW

Question Type :	MCQ
Question ID :	441009811735
Option 1 ID :	4410093201063
Option 2 ID :	4410093201065
Option 3 ID :	4410093201066
Option 4 ID :	4410093201064
Status :	Answered
Chosen Option :	1

Q.87	Seven people, I, J, K, Q, R, S and T, are sitting in a straight line facing north. Only two people sit between J and S. Only R sits to the right of Q. Only two people sit between R and S. T sits at some place to the right of K but at some place to the left of I. How many people sit between I and K?
Ans	✔ 1. Two
	✘ 2. Three
	✘ 3. Four
	✘ 4. One

Question Type :	MCQ
Question ID :	441009819326
Option 1 ID :	4410093231429
Option 2 ID :	4410093231428
Option 3 ID :	4410093231427
Option 4 ID :	4410093231430
Status :	Answered
Chosen Option :	1

Q.88 Select the pair that follows the same pattern as that followed by the two pairs given below. Both pairs follow the same pattern.

JKL : MNP
UIG : XLK

- Ans
- ☒ 1. RED : UHG
- ☒ 2. OPS : RRW
- ☒ 3. VGR : YJV
- ☒ 4. TRE : WUH

Question Type :	MCQ
Question ID :	441009819477
Option 1 ID :	4410093232031
Option 2 ID :	4410093232032
Option 3 ID :	4410093232034
Option 4 ID :	4410093232033
Status :	Not Answered
Chosen Option :	--

Q.89 What should come in place of the question mark (?) in the given series?

10 135 199 226 234 ?

- Ans
- ☒ 1. 234
- ☒ 2. 235
- ☒ 3. 237
- ☒ 4. 236

Question Type :	MCQ
Question ID :	4410091227296
Option 1 ID :	4410094842667
Option 2 ID :	4410094842668
Option 3 ID :	4410094842670
Option 4 ID :	4410094842669
Status :	Answered
Chosen Option :	2

Q.90 What should come in place of the question mark (?) in the given series?
21 50 73 92 109 ?

- Ans ☒ 1. 122
- ☐ 2. 125
- ☐ 3. 127
- ☐ 4. 121

Question Type :	MCQ
Question ID :	4410091227456
Option 1 ID :	4410094843316
Option 2 ID :	4410094843317
Option 3 ID :	4410094843318
Option 4 ID :	4410094843315
Status :	Answered
Chosen Option :	1

Q.91 This question is based on the following words.
NOW NAG EAT BAM
How many letters are there in the English alphabetical order between the third letter of the second word from the right and the third letter of the first word from the left?

- Ans ☐ 1. 3
- ☐ 2. 4
- ☒ 3. 2
- ☐ 4. 1

Question Type :	MCQ
Question ID :	441009820413
Option 1 ID :	4410093235777
Option 2 ID :	4410093235778
Option 3 ID :	4410093235776
Option 4 ID :	4410093235775
Status :	Answered
Chosen Option :	3

Q.92 What should come in place of the question mark (?) in the given series based on the English alphabetical order?
PSM ORL NQK MPJ ?

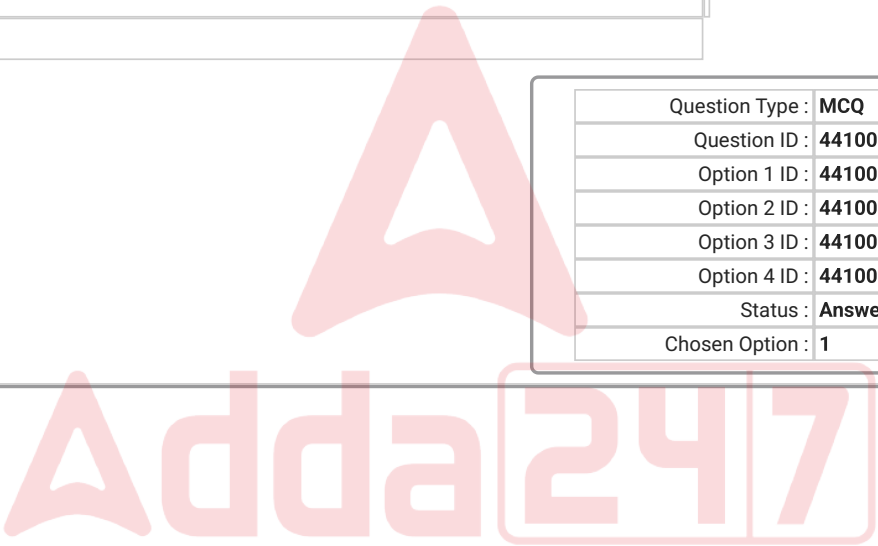
- Ans
- ✓ 1. LOI
 - ✗ 2. LPJ
 - ✗ 3. LOJ
 - ✗ 4. LPI

Question Type :	MCQ
Question ID :	4410091239543
Option 1 ID :	4410094891626
Option 2 ID :	4410094891629
Option 3 ID :	4410094891627
Option 4 ID :	4410094891628
Status :	Answered
Chosen Option :	1

Q.93 J is the sister of D. D is the son of B. B is the wife of F. F is the father of Z. How is J related to Z?

- Ans
- ✓ 1. Sister
 - ✗ 2. Mother
 - ✗ 3. Wife
 - ✗ 4. Daughter

Question Type :	MCQ
Question ID :	4410091246193
Option 1 ID :	4410094918048
Option 2 ID :	4410094918046
Option 3 ID :	4410094918047
Option 4 ID :	4410094918049
Status :	Answered
Chosen Option :	1



Q.94	Refer to the following letter series and answer the question that follows. Counting has to be done from left to right only. (Left) K M H O A J R S B X G R S X T Z J W N (Right) How many such vowels are there each of which is immediately preceded by a consonant and also immediately followed by a vowel?
Ans	<div><div>✖ 1. Four</div><div>✖ 2. Three</div><div>✔ 3. One</div><div>✖ 4. Two</div></div>

Question Type :	MCQ
Question ID :	4410091244189
Option 1 ID :	4410094910057
Option 2 ID :	4410094910056
Option 3 ID :	4410094910054
Option 4 ID :	4410094910055
Status :	Answered
Chosen Option :	3

Q.95	What should come in place of the question mark (?) in the given series? 79 82.4 93.4 96.8 107.8 111.2 ?
Ans	<div><div>✖ 1. 114.6</div><div>✖ 2. 120.8</div><div>✖ 3. 118.4</div><div>✔ 4. 122.2</div></div>

Question Type :	MCQ
Question ID :	4410091238060
Option 1 ID :	4410094885772
Option 2 ID :	4410094885770
Option 3 ID :	4410094885771
Option 4 ID :	4410094885773
Status :	Answered
Chosen Option :	4

Q.96	C, D, E, F, X, Y and Z are sitting around a circular table facing the centre of the table. Only two people sit between E and Z when counted from the left of Z. Y sits third to the left of C. X sits to the immediate right of C. X sits second to the left of E. F is not an immediate neighbour of Y. Who sits third to the right of D?
Ans	<div><div>✓</div>1. X</div>
	<div><div>✗</div>2. D</div>
	<div><div>✗</div>3. C</div>
	<div><div>✗</div>4. Z</div>

Question Type :	MCQ
Question ID :	4410091225518
Option 1 ID :	4410094835578
Option 2 ID :	4410094835577
Option 3 ID :	4410094835576
Option 4 ID :	4410094835579
Status :	Not Attempted and Marked For Review
Chosen Option :	--

Q.97	Refer to the following letter and symbol series and answer the question that follows. Counting to be done from left to right only. (Left) T M % % * * € @ W K € \$ D A € Y € T \$ © * T (Right) How many such letters are there each of which is immediately preceded by a letter and also immediately followed by a symbol?
Ans	<div><div>✗</div>1. 2</div>
	<div><div>✗</div>2. 4</div>
	<div><div>✓</div>3. 3</div>
	<div><div>✗</div>4. 5</div>

Question Type :	MCQ
Question ID :	441009818997
Option 1 ID :	4410093230114
Option 2 ID :	4410093230112
Option 3 ID :	4410093230111
Option 4 ID :	4410093230113
Status :	Answered
Chosen Option :	3

Q.98 Each of X, Y, Z, I, J, K and L has an exam on a different day of a week, starting from Monday and ending on Sunday of the same week. K has exam on Thursday. J has exam two days before K. Only four people have exams between Y and J. X has exam on one of the days after J. L has exam on the day immediately before I. How many people have exams between I and X?

- Ans

✖ 1. One
- ✔ 2. Two
- ✖ 3. Four
- ✖ 4. Three

Question Type :	MCQ
Question ID :	4410091184723
Option 1 ID :	4410094672918
Option 2 ID :	4410094672919
Option 3 ID :	4410094672921
Option 4 ID :	4410094672920
Status :	Not Attempted and Marked For Review
Chosen Option :	--

Q.99 Based on the English alphabetical order, three of the following four letter-cluster pairs are alike in a certain way and thus form a group. Which letter-cluster pair DOES NOT belong to that group?
(Note: The odd one out is not based on the number of consonants/vowels or their position in the letter-cluster.

- Ans

✖ 1. LR-OW
- ✔ 2. BH-FN
- ✖ 3. RX-UC
- ✖ 4. GM-JR

Question Type :	MCQ
Question ID :	441009810987
Option 1 ID :	4410093198073
Option 2 ID :	4410093198072
Option 3 ID :	4410093198074
Option 4 ID :	4410093198071
Status :	Answered
Chosen Option :	1

Q.100 In a certain code language, 'test is difficult' is coded as 'ty hv dg' and 'difficult time now' is coded as 'mz po hv'. How is 'difficult' coded in the given language?
7265

- Ans

✓

1. hv
- ✗

2. dg
- ✗

3. po
- ✗

4. mz

Question Type :	MCQ
Question ID :	441009810574
Option 1 ID :	4410093196420
Option 2 ID :	4410093196421
Option 3 ID :	4410093196419
Option 4 ID :	4410093196422
Status :	Answered
Chosen Option :	1

