

**DELHI DEVELOPMENT AUTHORITY**  
**RECRUITMENT CELL**  
**VIKAS SADAN, INA, NEW DELHI - 110023**  
<https://www.dda.gov.in>

**Advertisement No. 02/2023/Recdt. Cell/Pers./DDA**

Participant ID	
Participant Name	
Test Center Name	
Test Date	22/09/2023
Test Time	11:30 AM - 12:30 PM
Subject	Junior Secretariat Assistant

Section : General Intelligence

Adda247

# Test Prime

**ALL EXAMS, ONE SUBSCRIPTION**



**1,00,000+**  
Mock Tests



**Personalised  
Report Card**



**Unlimited  
Re-Attempt**



**600+**  
Exam Covered



**25,000+** Previous  
Year Papers







**500%**  
Refund



**ATTEMPT FREE MOCK NOW**

Q.1 In the following question, a group of letters is given. The letters of each group are related with the letters of the same group by some Logic/Rule/Relation. From the given alternatives, select a group of letters which follows the same Logic/Rule/Relation. (PR, MO, JL)

- Ans  1. (KP, HN, EK)  
 2. (LJ, IG, FD)  
 3. (QS, NV, KX)  
 4. (VX, SU, PS)

Question ID : 630680371918  
Option 1 ID : 6306801448982  
Option 2 ID : 6306801448981  
Option 3 ID : 6306801448980  
Option 4 ID : 6306801448979  
Status : Answered  
Chosen Option : 2

Q.2 In a certain code language, 'PATH' is written as 'LWPD'. What is the code for 'RACE' in that code language?

- Ans  1. NXYA  
 2. NXZB  
 3. NWYA  
 4. NWZA

Question ID : 630680371916  
Option 1 ID : 6306801448974  
Option 2 ID : 6306801448973  
Option 3 ID : 6306801448972  
Option 4 ID : 6306801448971  
Status : Answered  
Chosen Option : 3

Q.3 Consider the five three digit numbers given below and answer the questions based on it.  
(Left) 259 692 942 697 166 (Right)  
What will be the value if the tens digit of 2nd number from the right end divided by the unit digit of the 3rd number from the left end?

- Ans
- ✗ 1. 1.25
  - ✗ 2. 3.25
  - ✗ 3. 2.5
  - ✓ 4. 4.5

Question ID : 630680371914  
Option 1 ID : 6306801448964  
Option 2 ID : 6306801448963  
Option 3 ID : 6306801448966  
Option 4 ID : 6306801448965  
Status : Answered  
Chosen Option : 4

Q.4 Seven girls P, Q, R, S, T, V and W are sitting in a row facing towards north (not necessarily in the same order). R is at right end of the row. W and P are immediate neighbours. T is exactly in the middle of row. Q is second to the left of W. S is not the immediate neighbour of Q.Which of the following statement(s) is/are correct?  
I. V is third to the left of T.  
II. P is to the immediate neighbour of T.

- Ans
- ✗ 1. Only II
  - ✗ 2. Only I
  - ✗ 3. Both I and II
  - ✓ 4. Neither I nor II

Question ID : 630680371907  
Option 1 ID : 6306801448936  
Option 2 ID : 6306801448935  
Option 3 ID : 6306801448937  
Option 4 ID : 6306801448938  
Status : Answered  
Chosen Option : 4

**Q.5** In the following question below are given some statements followed by some conclusions based on those statements. Taking the given statements to be true even if they seem to be at variance from commonly known facts. Read all the conclusions and then decide which of the given conclusion logically follows the given statements.

**Statements:**

- I. No R is S.
- II. Some S are T.

**Conclusion:**

- I. Some T are not R.
- II. Some S are not R.
- III. All T are R.

- Ans**
- ☒ 1. Both conclusions II and III follows
  - ☒ 2. Both conclusions I and III follows
  - ☒ 3. All conclusion follows
  - ☒ 4. Both conclusions I and II follows

Question ID : 630680371911  
Option 1 ID : 6306801448954  
Option 2 ID : 6306801448951  
Option 3 ID : 6306801448953  
Option 4 ID : 6306801448952  
Status : Answered  
Chosen Option : 4

**Q.6** What is the approximate value of  $141.92 + 176.02 - 210.99$ ?

- Ans**
- ☒ 1. 82
  - ☒ 2. 145
  - ☒ 3. 35
  - ☒ 4. 107

Question ID : 630680371926  
Option 1 ID : 6306801449012  
Option 2 ID : 6306801449011  
Option 3 ID : 6306801449013  
Option 4 ID : 6306801449014  
Status : Answered  
Chosen Option : 4

Q.7 In a certain code language, 'CRIME' is written as 'ZOFJB'. What is the code for 'DOUBT' in that code language?

- Ans
- ☒ 1. ALSZR
  - ☒ 2. ALRYQ
  - ☒ 3. ALRZQ
  - ☒ 4. ALRZR

Question ID : 630680371915  
Option 1 ID : 6306801448970  
Option 2 ID : 6306801448968  
Option 3 ID : 6306801448967  
Option 4 ID : 6306801448969  
Status : Answered  
Chosen Option : 2

Q.8 In the following question, select the missing number from the given series.  
444, 459, 474, 489, ?, 519

- Ans
- ☒ 1. 508
  - ☒ 2. 504
  - ☒ 3. 510
  - ☒ 4. 500

Question ID : 630680371923  
Option 1 ID : 6306801449000  
Option 2 ID : 6306801449001  
Option 3 ID : 6306801449002  
Option 4 ID : 6306801448999  
Status : Answered  
Chosen Option : 2

Q.9 In the following question, select the related letters from the given alternatives.  
YL : VI :: XK : ?

- Ans ☒ 1. AD  
☒ 2. DG  
☒ 3. HI  
☒ 4. UH

Question ID : 630680371917  
Option 1 ID : 6306801448975  
Option 2 ID : 6306801448976  
Option 3 ID : 6306801448977  
Option 4 ID : 6306801448978  
Status : Answered  
Chosen Option : 4

Q.10 In the following question, four letter pairs are given. The letters on left side of (–) is related to the letters on the right side of (–) with some Logic/Rule/Relation. Three are similar on basis of same Logic/Rule/Relation. Select the odd one out from the given alternatives.

- Ans ☒ 1. TJ – ZP  
☒ 2. KS – QY  
☒ 3. IJ – PP  
☒ 4. AP – GV

Question ID : 630680371920  
Option 1 ID : 6306801448990  
Option 2 ID : 6306801448988  
Option 3 ID : 6306801448987  
Option 4 ID : 6306801448989  
Status : Answered  
Chosen Option : 3

Q.11 If ' $\Delta$ ' means '+', ' $\square$ ' means '-', 'O' means ' $\times$ ' and ' $\nabla$ ' means ' $\div$ ', then  $40 \Delta 30 \text{ O } 10 \nabla 20 \square 50 = ?$

- Ans
- ☐ 1. 25
  - ☒ 2. 5
  - ☐ 3. 8
  - ☐ 4. 50

Question ID : 630680371929  
Option 1 ID : 6306801449025  
Option 2 ID : 6306801449024  
Option 3 ID : 6306801449026  
Option 4 ID : 6306801449023  
Status : Answered  
Chosen Option : 4

Q.12 In the following question, select the missing number from the given series.  
144, 112, 79, 45, 10, ?

- Ans
- ☐ 1. -25
  - ☐ 2. -18
  - ☐ 3. 0
  - ☒ 4. -26

Question ID : 630680371921  
Option 1 ID : 6306801448991  
Option 2 ID : 6306801448993  
Option 3 ID : 6306801448994  
Option 4 ID : 6306801448992  
Status : Answered  
Chosen Option : 4



Q.13 What is the approximate value of 0.3% of 19999 × 0.8% of 79899?

- Ans ☒ 1. 680
- ☒ 2. 700
- ☒ 3. 740
- ☒ 4. 650

Question ID : 630680371927  
Option 1 ID : 6306801449015  
Option 2 ID : 6306801449017  
Option 3 ID : 6306801449016  
Option 4 ID : 6306801449018  
Status : Not Attempted and Marked For Review  
Chosen Option : --

Q.14 If '×' means '+', '+' means '−', '−' means '÷' and '÷' means '×', then  $70 \times 50 \div 30 - 5 + 10 =$  ?

- Ans ☒ 1. 350
- ☒ 2. 60
- ☒ 3. 360
- ☒ 4. 100

Question ID : 630680371928  
Option 1 ID : 6306801449020  
Option 2 ID : 6306801449021  
Option 3 ID : 6306801449019  
Option 4 ID : 6306801449022  
Status : Answered  
Chosen Option : 3

Q.15 Eight persons namely - Harsh, Khushi, Jay, Rohan, Ashwin, Palak, Jayesh and Nilamber live on separate floors of an eight-floor building in Mahindra's apartment. Ground floor is numbered 1, first floor is numbered 2 and so on until the topmost floor which is numbered 8. Only two people live between Harsh and Khushi. Jayesh lives immediately above Rohan. Ashwin lives immediately above Jay. Ashwin lives above Nilamber. Palak lives on an odd-numbered floor. Only one person lives between Ashwin and Nilamber. Harsh lives on the floor numbered five. Khushi lives above Harsh. How many persons live between Nilamber and Jayesh?

Ans ☒ 1. 4

☐ 2. 3

☐ 3. 1

☐ 4. 2

Question ID : 630680371908  
Option 1 ID : 6306801448940  
Option 2 ID : 6306801448942  
Option 3 ID : 6306801448941  
Option 4 ID : 6306801448939  
Status : Not Answered  
Chosen Option : --

Q.16 A series is given with one term missing. Select the correct alternative from the given ones that will complete the series.  
RQM, QNH, PKC, OHX, ?

Ans ☐ 1. PTD

☒ 2. NES

☐ 3. NQR

☐ 4. PHD

Question ID : 630680371912  
Option 1 ID : 6306801448958  
Option 2 ID : 6306801448956  
Option 3 ID : 6306801448955  
Option 4 ID : 6306801448957  
Status : Answered  
Chosen Option : 2

Q.17 5 teachers J, K, L, M and N takes lecture on one day of a week starting from Monday to Friday. No two teacher takes lecture on same day. Only three teachers take lecture between J and K. M takes lecture after L and before N. K does not take lecture on Monday. How many lectures are done in between L and K?

- Ans
- ☒ 1. 0
  - ☒ 2. 3
  - ☒ 3. 2
  - ☒ 4. 1

Question ID : 630680371909  
Option 1 ID : 6306801448944  
Option 2 ID : 6306801448946  
Option 3 ID : 6306801448943  
Option 4 ID : 6306801448945  
Status : Answered  
Chosen Option : 3

Q.18 In the following question, select the missing number from the given series.  
1215, 405, 135, 45, 15, ?

- Ans
- ☒ 1. 3
  - ☒ 2. 10
  - ☒ 3. 5
  - ☒ 4. 4

Question ID : 630680371922  
Option 1 ID : 6306801448998  
Option 2 ID : 6306801448995  
Option 3 ID : 6306801448997  
Option 4 ID : 6306801448996  
Status : Answered  
Chosen Option : 3

Q.19 In the following question, select the odd letter/letters from the given alternatives.

- Ans ☒ 1. FK  
☒ 2. IN  
☒ 3. UY  
☒ 4. NS

Question ID : 630680371919  
Option 1 ID : 6306801448985  
Option 2 ID : 6306801448984  
Option 3 ID : 6306801448986  
Option 4 ID : 6306801448983  
Status : Answered  
Chosen Option : 3

Q.20 Select the option that is related to the fifth number cluster in the same way as the second number cluster is related to the first number cluster and fourth number cluster is related to third number cluster.  
4 : 4 :: 8 : 12 :: 9 : ?





- Ans ☒ 1. 16  
☒ 2. 27  
☒ 3. 18  
☒ 4. 14

Question ID : 630680371930  
Option 1 ID : 6306801449028  
Option 2 ID : 6306801449030  
Option 3 ID : 6306801449027  
Option 4 ID : 6306801449029  
Status : Marked For Review  
Chosen Option : 3

**Q.21** In the following question below are given some statements followed by some conclusions based on those statements. Taking the given statements to be true even if they seem to be at variance from commonly known facts. Read all the conclusions and then decide which of the given conclusion logically follows the given statements.

**Statements:**  
I. All A are J.  
II. Some P are J.

**Conclusion:**  
I. Some A are J.  
II. Some P are A.

- Ans**  1. Both conclusions I and II follows  
 2. Only conclusion II follows  
 3. Only conclusion I follows  
 4. Neither conclusion follows

Question ID : 630680371910  
Option 1 ID : 6306801448949  
Option 2 ID : 6306801448948  
Option 3 ID : 6306801448947  
Option 4 ID : 6306801448950  
Status : Answered  
Chosen Option : 3

**Q.22** Six boys P, Q, R, S, T and U are sitting around a circular table facing towards the centre (not necessarily in the same order). P is to the immediate right of U. S is second to the left of U. T is not the immediate neighbour of S. R is to the immediate left of U. Who is sitting to the immediate left of Q?

- Ans**  1. T  
 2. P  
 3. U  
 4. S

Question ID : 630680371906  
Option 1 ID : 6306801448931  
Option 2 ID : 6306801448933  
Option 3 ID : 6306801448934  
Option 4 ID : 6306801448932  
Status : Answered  
Chosen Option : 1

Q.23 A series is given with one term missing. Select the correct alternative from the given ones that will complete the series.  
ABCD, GYKC, MVSB, SSAA, ?

Ans ☒ 1. YPIZ

☐ 2. YMOP

☐ 3. YQPZ

☐ 4. QRTQ

Question ID : 630680371913

Option 1 ID : 6306801448960

Option 2 ID : 6306801448959

Option 3 ID : 6306801448961

Option 4 ID : 6306801448962

Status : Answered

Chosen Option : 1

Q.24 In the following question, select the missing number from the given series.  
85, 96, 83, 98, 81, ?

Ans ☐ 1. 104

☐ 2. 105

☒ 3. 100

☐ 4. 115

Question ID : 630680371924

Option 1 ID : 6306801449005

Option 2 ID : 6306801449003

Option 3 ID : 6306801449004

Option 4 ID : 6306801449006

Status : Answered

Chosen Option : 3

Q.25 In the following question, select the missing number from the given series.  
0, 0, 7, 33, 96, ?

- Ans ☒ 1. 220  
☐ 2. 225  
☐ 3. 218  
☐ 4. 200

Question ID : 630680371925  
Option 1 ID : 6306801449008  
Option 2 ID : 6306801449009  
Option 3 ID : 6306801449010  
Option 4 ID : 6306801449007  
Status : Not Answered  
Chosen Option : --

Section : General Awareness

Q.1 In which of the following vegetation zone the mean temperature in January lies  
between 10°C to 18°C?

- Ans ☒ 1. Subtropical  
☐ 2. Tropical  
☐ 3. Temperate  
☐ 4. Alpine

Question ID : 630680371901  
Option 1 ID : 6306801448912  
Option 2 ID : 6306801448911  
Option 3 ID : 6306801448913  
Option 4 ID : 6306801448914  
Status : Not Answered  
Chosen Option : --

Q.2 Alauddin Khalji ruled in India in which of the following period?

- Ans
- ☒ 1. 1266–1287
  - ☒ 2. 1290–1296
  - ☒ 3. 1296–1316
  - ☒ 4. 1210–1236

Question ID : 630680371891  
Option 1 ID : 6306801448872  
Option 2 ID : 6306801448873  
Option 3 ID : 6306801448874  
Option 4 ID : 6306801448871  
Status : Marked For Review  
Chosen Option : 4

Q.3 Which of the following statement is correct with respect to the Rashtrakutas?  
I. They were the subordinate to the Cholas.  
II. Dantidurga was the Rashtrakuta chief.

- Ans
- ☒ 1. Neither I nor II
  - ☒ 2. Only I
  - ☒ 3. Only II
  - ☒ 4. Both I and II

Question ID : 630680371893  
Option 1 ID : 6306801448882  
Option 2 ID : 6306801448879  
Option 3 ID : 6306801448880  
Option 4 ID : 6306801448881  
Status : Answered  
Chosen Option : 3



Q.4 Which among the following languages belongs to the Austro-Asiatic language family?

I. Dimasa

II. Malto

Ans  1. Only II

 2. Neither I nor II

 3. Both I and II

 4. Only I

Question ID : 630680371897

Option 1 ID : 6306801448896

Option 2 ID : 6306801448898

Option 3 ID : 6306801448897

Option 4 ID : 6306801448895

Status : Not Answered

Chosen Option : --

Q.5 Sarojini Naidu was elected as the President of the Indian National Congress in

\_\_\_\_\_.

Ans  1. 1925

 2. 1927

 3. 1921

 4. 1923

Question ID : 630680371888

Option 1 ID : 6306801448861

Option 2 ID : 6306801448862

Option 3 ID : 6306801448859

Option 4 ID : 6306801448860

Status : Answered

Chosen Option : 1

Q.6 Who among the following was conferred with the Dronacharya Award 2022 in Regular Category?

- Ans ☒ 1. Dinesh Jawahar Lad
- ☒ 2. Suma Siddharth Shirur
- ☒ 3. Bimal Prafulla Ghosh
- ☒ 4. Raj Singh

Question ID : 630680371882  
Option 1 ID : 6306801448835  
Option 2 ID : 6306801448837  
Option 3 ID : 6306801448836  
Option 4 ID : 6306801448838  
Status : Marked For Review  
Chosen Option : 3

Q.7 As per Census 2011, the sex ratio (number of females per 1000 males) of India is

- Ans ☒ 1. 929
- ☒ 2. 934
- ☒ 3. 949
- ☒ 4. 943

Question ID : 630680371903  
Option 1 ID : 6306801448919  
Option 2 ID : 6306801448920  
Option 3 ID : 6306801448922  
Option 4 ID : 6306801448921  
Status : Answered  
Chosen Option : 4

Q.8 As per Census 2011, the growth rate of population of the Christian religious community in the decade 2001-2011 was \_\_\_\_\_.

- Ans
- ☐ 1. 24.6 percent
  - ☐ 2. 17.7 percent
  - ☐ 3. 16.8 percent
  - ☒ 4. 15.5 percent

Question ID : 630680371904  
Option 1 ID : 6306801448926  
Option 2 ID : 6306801448925  
Option 3 ID : 6306801448924  
Option 4 ID : 6306801448923  
Status : Not Attempted and Marked For Review  
Chosen Option : --

Q.9 As of June 2022, the Eighth Schedule to the Indian Constitution consists of \_\_\_\_\_ languages.

- Ans
- ☐ 1. 18
  - ☐ 2. 28
  - ☒ 3. 22
  - ☐ 4. 26

Question ID : 630680371896  
Option 1 ID : 6306801448891  
Option 2 ID : 6306801448894  
Option 3 ID : 6306801448892  
Option 4 ID : 6306801448893  
Status : Answered  
Chosen Option : 3

Q.10 Who is the author of the novel ‘The Guide’?

- Ans
- ☒ 1. Mulk Raj Anand
  - ☒ 2. R.K. Narayan
  - ☒ 3. Bhabani Bhattacharya
  - ☒ 4. Anita Desai

Question ID : 630680371895  
Option 1 ID : 6306801448888  
Option 2 ID : 6306801448889  
Option 3 ID : 6306801448890  
Option 4 ID : 6306801448887  
Status : Not Answered  
Chosen Option : --

Q.11 Which of the following is a lake formed by spits and bars in coastal areas?

- Ans
- ☒ 1. Chilika lake
  - ☒ 2. Wular lake
  - ☒ 3. Sambhar lake
  - ☒ 4. Dal lake

Question ID : 630680371900  
Option 1 ID : 6306801448910  
Option 2 ID : 6306801448909  
Option 3 ID : 6306801448908  
Option 4 ID : 6306801448907  
Status : Not Answered  
Chosen Option : --

Q.12 In an economy, considering the value of intermediate goods separately will lead to the

- I. error of double counting
- II. decreased income

- Ans
- ☒ 1. Only II
  - ☒ 2. Only I
  - ☒ 3. Neither I nor II
  - ☒ 4. Both I and II

Question ID : 630680371887  
Option 1 ID : 6306801448856  
Option 2 ID : 6306801448855  
Option 3 ID : 6306801448858  
Option 4 ID : 6306801448857  
Status : Not Answered  
Chosen Option : --

Q.13 Functional segements of DNA are called \_\_\_\_\_.

- Ans
- ☒ 1. genes
  - ☒ 2. chromatin
  - ☒ 3. chromosome
  - ☒ 4. protein

Question ID : 630680371905  
Option 1 ID : 6306801448928  
Option 2 ID : 6306801448930  
Option 3 ID : 6306801448927  
Option 4 ID : 6306801448929  
Status : Answered  
Chosen Option : 1

Q.14 Who of the following was associated with the Brahmo Samaj?

- Ans ☒ 1. Keshub Chunder Sen
- ☐ 2. Swami Vivekananda
- ☐ 3. Ishwarchandra Vidyasagar
- ☐ 4. Swami Dayanand Saraswati

Question ID : 630680371889  
Option 1 ID : 6306801448863  
Option 2 ID : 6306801448865  
Option 3 ID : 6306801448866  
Option 4 ID : 6306801448864  
Status : Answered  
Chosen Option : 4

Q.15 In January 2023, National Council of Science Museums (NCSM) organised Astro Tourism - A Sky Gazing event in which city?

- Ans ☒ 1. New Delhi
- ☐ 2. Bengaluru
- ☐ 3. Pune
- ☐ 4. Ahmedabad

Question ID : 630680371883  
Option 1 ID : 6306801448840  
Option 2 ID : 6306801448841  
Option 3 ID : 6306801448839  
Option 4 ID : 6306801448842  
Status : Answered  
Chosen Option : 2

Q.16 Which of the following festival marks the Malayalam New Year?

- Ans ☒ 1. Vishu
- ☐ 2. Losar
- ☐ 3. Rongker
- ☐ 4. Ugadi

Question ID : 630680371898  
Option 1 ID : 6306801448901  
Option 2 ID : 6306801448900  
Option 3 ID : 6306801448902  
Option 4 ID : 6306801448899  
Status : Marked For Review  
Chosen Option : 4

Q.17 Which of the following statements is correct regarding Pradhan Mantri Jeevan Jyoti Bima Yojana?

- I. This scheme is available to people in the age group 18 to 50 years.  
II. Risk coverage under this scheme is for Rs. 2 Lakh in case of death of the insured, due to any reason.
- Ans ☒ 1. Both I and II
- ☐ 2. Only II
- ☐ 3. Only I
- ☐ 4. Neither I nor II

Question ID : 630680371885  
Option 1 ID : 6306801448849  
Option 2 ID : 6306801448848  
Option 3 ID : 6306801448847  
Option 4 ID : 6306801448850  
Status : Not Answered  
Chosen Option : --

Q.18 Which among the following statements is correct regarding the Permanent Settlement?  
I. The Permanent Settlement was introduced in India in 1793.  
II. Warren Hastings was the Governor General of India when the Permanent Settlement was introduced.

- Ans ☒ 1. Only I  
☐ 2. Neither I nor II  
☐ 3. Only II  
☐ 4. Both I and II

Question ID : 630680371890  
Option 1 ID : 6306801448867  
Option 2 ID : 6306801448870  
Option 3 ID : 6306801448868  
Option 4 ID : 6306801448869  
Status : Answered  
Chosen Option : 3

Q.19 Which of the following statement is correct?  
I. During winter there is a high-pressure area north of Himalayas and low pressure area over the oceans.  
II. During summer there is a high –pressure area over southern Indian ocean and low pressure area over interior asia.

- Ans ☐ 1. Only II  
☒ 2. Both I and II  
☐ 3. Neither I nor II  
☐ 4. Only I

Question ID : 630680371902  
Option 1 ID : 6306801448916  
Option 2 ID : 6306801448917  
Option 3 ID : 6306801448918  
Option 4 ID : 6306801448915  
Status : Not Answered  
Chosen Option : --



Q.20 Which state of India was awarded Ayushmann Utkrishta award 2022 for adding various health facilities to health facility register?

- Ans
- ☒ 1. Kerala
  - ☒ 2. Madhya Pradesh
  - ☒ 3. Telangana
  - ☒ 4. Uttar Pradesh

Question ID : 630680371884  
 Option 1 ID : 6306801448843  
 Option 2 ID : 6306801448846  
 Option 3 ID : 6306801448844  
 Option 4 ID : 6306801448845  
 Status : Not Answered  
 Chosen Option : --

Q.21 Who among the following rulers succeeded to the throne of Ferghana in 1494?

- Ans
- ☒ 1. Babur
  - ☒ 2. Muhammad Adil Shah
  - ☒ 3. Genghis Khan
  - ☒ 4. Timur

Question ID : 630680371892  
 Option 1 ID : 6306801448878  
 Option 2 ID : 6306801448875  
 Option 3 ID : 6306801448877  
 Option 4 ID : 6306801448876  
 Status : Answered  
 Chosen Option : 1

Q.22 India lost to \_\_\_\_\_ in the semi-finals of the Squash World Cup 2023.

- Ans
- ☒ 1. Australia
  - ☒ 2. Japan
  - ☒ 3. Malaysia
  - ☒ 4. Egypt

Question ID : 630680371881  
Option 1 ID : 6306801448834  
Option 2 ID : 6306801448833  
Option 3 ID : 6306801448832  
Option 4 ID : 6306801448831  
Status : Not Answered  
Chosen Option : --

Q.23 Who is the author of the autobiography 'A Shot at History'?

- Ans
- ☒ 1. Sachin Tendulkar
  - ☒ 2. Abhinav Bindra
  - ☒ 3. Yuvraj Singh
  - ☒ 4. Kapil Dev

Question ID : 630680371894  
Option 1 ID : 6306801448883  
Option 2 ID : 6306801448885  
Option 3 ID : 6306801448884  
Option 4 ID : 6306801448886  
Status : Not Answered  
Chosen Option : --

Q.24 Which of the following festivals is celebrated in Assam?

I. Sarhul

II. Bihu

Ans ☒ 1. Both I and II

☒ 2. Neither I nor II

☒ 3. Only II

☒ 4. Only I

Question ID : 630680371899

Option 1 ID : 6306801448905

Option 2 ID : 6306801448906

Option 3 ID : 6306801448904

Option 4 ID : 6306801448903

Status : Answered

Chosen Option : 3

Q.25 The interest rate at which the Reserve Bank of India absorbs liquidity, on an overnight basis, from banks is called \_\_\_\_\_.

Ans ☒ 1. repo rate

☒ 2. reverse repo rate

☒ 3. Leverage rate

☒ 4. marginal standing facility rate

Question ID : 630680371886

Option 1 ID : 6306801448851

Option 2 ID : 6306801448853

Option 3 ID : 6306801448854

Option 4 ID : 6306801448852

Status : Not Answered

Chosen Option : --

Section : Quantitative Aptitude (Basic Arithmetic Skill)

Q.1 In what ratio water be mixed with milk to gain 15% by selling the mixture at cost price?

- Ans ☒ 1. 3:20  
☐ 2. 3:15  
☐ 3. 15:3  
☐ 4. 20:3

Question ID : 630680371934  
Option 1 ID : 6306801449044  
Option 2 ID : 6306801449045  
Option 3 ID : 6306801449046  
Option 4 ID : 6306801449043  
Status : Answered  
Chosen Option : 1

Q.2 The base of a triangular land is three times its altitude. If the cost of cultivating the field at ₹24.68 per hectare be ₹333.18, find its base and height.

- Ans ☐ 1. 500 m  
☐ 2. 200 m  
☒ 3. 300m.  
☐ 4. 400 m

Question ID : 630680371953  
Option 1 ID : 6306801449122  
Option 2 ID : 6306801449119  
Option 3 ID : 6306801449120  
Option 4 ID : 6306801449121  
Status : Not Answered  
Chosen Option : --

**Q.3** If the price of salt falls by 10%, by how much percent must a householder increase its consumption, so as not to decrease the expenditure on this item?

- Ans**
- ✓ 1.  $11\frac{1}{9}\%$
  - ✗ 2. 12%
  - ✗ 3. 10%
  - ✗ 4. 41%

Question ID : 630680371936  
Option 1 ID : 6306801449051  
Option 2 ID : 6306801449053  
Option 3 ID : 6306801449054  
Option 4 ID : 6306801449052  
Status : Answered  
Chosen Option : 1

**Q.4** The difference between compound interest and simple interest on an amount of ₹10,000 for 2 years is ₹144. What is the rate of interest per annum?

- Ans**
- ✗ 1. 14%
  - ✗ 2. 8%
  - ✗ 3. 10%
  - ✓ 4. 12%

Question ID : 630680371941  
Option 1 ID : 6306801449073  
Option 2 ID : 6306801449071  
Option 3 ID : 6306801449072  
Option 4 ID : 6306801449074  
Status : Answered  
Chosen Option : 4

Q.5 How many metres of mat 63 cm wide will be required to cover the floor of a room 14 m by 9 m?

- Ans
- ☐ 1. 400m
  - ☐ 2. 300m
  - ☒ 3. 200m
  - ☐ 4. 500m

Question ID : 630680371952  
Option 1 ID : 6306801449117  
Option 2 ID : 6306801449116  
Option 3 ID : 6306801449115  
Option 4 ID : 6306801449118  
Status : Not Answered  
Chosen Option : --

Q.6 How many 2 digits number are divisible by 7?

- Ans
- ☒ 1. 13
  - ☐ 2. 18
  - ☐ 3. 12
  - ☐ 4. 17

Question ID : 630680371932  
Option 1 ID : 6306801449036  
Option 2 ID : 6306801449038  
Option 3 ID : 6306801449035  
Option 4 ID : 6306801449037  
Status : Answered  
Chosen Option : 1

**Q.7** A hall is 17 m long and 13 m broad. If the sum of the areas of the floor and the ceiling is equal to the sum of the areas of four walls, the volume of the hall is

- Ans** ☒ 1. 1536  
☐ 2. 1536.5  
☐ 3. 1436.5  
☐ 4. 1436

Question ID : 630680371950  
Option 1 ID : 6306801449109  
Option 2 ID : 6306801449110  
Option 3 ID : 6306801449108  
Option 4 ID : 6306801449107  
Status : **Not Answered**  
Chosen Option : --

**Q.8** What is the value of  $\sqrt{4356}$  ?

- Ans** ☒ 1. 66  
☐ 2. 56  
☐ 3. 74  
☐ 4. 64

Question ID : 630680371931  
Option 1 ID : 6306801449033  
Option 2 ID : 6306801449031  
Option 3 ID : 6306801449034  
Option 4 ID : 6306801449032  
Status : **Answered**  
Chosen Option : 1

**Q.9** What is the total surface area ( $\text{cm}^2$ ) of a right circular cone of height 5 cm and base radius 7 cm?

- Ans**
- ☒ 1. 265
  - ☒ 2. 256
  - ☒ 3. 266
  - ☒ 4. 264

Question ID : 630680371949

Option 1 ID : 6306801449106

Option 2 ID : 6306801449104

Option 3 ID : 6306801449105

Option 4 ID : 6306801449103

Status : Answered

Chosen Option : 4

**Q.10**  $4^{3.5} : 2^{5.0} = ?$  Find the value of this equation.

- Ans**
- ☒ 1. 4:1
  - ☒ 2. 2:10
  - ☒ 3. 2:3
  - ☒ 4. 7:5

Question ID : 630680371939

Option 1 ID : 6306801449063

Option 2 ID : 6306801449066

Option 3 ID : 6306801449064

Option 4 ID : 6306801449065

Status : Answered

Chosen Option : 4







**Q.11** Rohan sells a shirt at loss of 10%. Had he bought it at 20% less and sold it for ₹55 more, he could have gained 40%.  
What is the cost price of the shirt?

- Ans**     1. ₹250  
           2. ₹270  
           3. ₹225  
           4. ₹370

Question ID : 630680371938  
Option 1 ID : 6306801449060  
Option 2 ID : 6306801449061  
Option 3 ID : 6306801449059  
Option 4 ID : 6306801449062  
Status : **Answered**  
Chosen Option : 1

**Q.12** A hollow iron pipe is 21 cm long and its external diameter is 10 cm. If the thickness of the pipe is 1 cm and iron weighs 8g/cu.cm, then the weight of the pipe is

- Ans**     1. 4.752 kg  
           2. 4.52 kg  
           3. 475.2g  
           4. 47.52 kg

Question ID : 630680371951  
Option 1 ID : 6306801449111  
Option 2 ID : 6306801449113  
Option 3 ID : 6306801449114  
Option 4 ID : 6306801449112  
Status : **Not Attempted and Marked For Review**  
Chosen Option : --

Q.13 If  $\operatorname{cosec} \theta = \frac{13}{12}$ , then what is the value of  $\sec (90^\circ - \theta)$  ?

- Ans
- ☒ 1.  $\frac{12}{13}$
  - ☒ 2.  $\frac{5}{13}$
  - ☒ 3.  $\frac{12}{5}$
  - ☒ 4.  $\frac{13}{12}$

Question ID : 630680371955

Option 1 ID : 6306801449127

Option 2 ID : 6306801449129

Option 3 ID : 6306801449130

Option 4 ID : 6306801449128

Status : Answered

Chosen Option : 4

Q.14 Find the value of  $\theta$  where  $\tan 2\theta = \alpha$ .

- Ans
- ☒ 1.  $30^\circ$
  - ☒ 2.  $15^\circ$
  - ☒ 3.  $45^\circ$
  - ☒ 4.  $20^\circ$

Question ID : 630680371954

Option 1 ID : 6306801449126

Option 2 ID : 6306801449123

Option 3 ID : 6306801449125

Option 4 ID : 6306801449124

Status : Answered

Chosen Option : 3

**Q.15** The average weight of 5 women decreases by 4 kg when one of them weighing 160 kg is replaced by another person.  
Find the weight of the new person.

- Ans**
- ☒ 1. 150
  - ☒ 2. 135
  - ☒ 3. 125
  - ☒ 4. 140

Question ID : 630680371933  
Option 1 ID : 6306801449042  
Option 2 ID : 6306801449041  
Option 3 ID : 6306801449039  
Option 4 ID : 6306801449040  
Status : Answered  
Chosen Option : 4

**Q.16** The average age of two professors M and N of a college is 57 years. The average age of M, N and their friend P is 90 years. What is the age of P?

- Ans**
- ☒ 1. 156 years
  - ☒ 2. 146 years
  - ☒ 3. 126 years
  - ☒ 4. 136 years

Question ID : 630680371944  
Option 1 ID : 6306801449084  
Option 2 ID : 6306801449083  
Option 3 ID : 6306801449086  
Option 4 ID : 6306801449085  
Status : Answered  
Chosen Option : 1

Q.17 The system of equations  $x + y = 2$  and  $6x + 2y = 3$  has solution

Ans

✗ 1.  $(\frac{1}{4}, -\frac{9}{4})$

✗ 2.  $(\frac{1}{4}, \frac{1}{4})$

✗ 3.  $(\frac{1}{9}, \frac{1}{9})$

✓ 4.  $(-\frac{1}{4}, \frac{9}{4})$

Question ID : 630680371946

Option 1 ID : 6306801449092

Option 2 ID : 6306801449093

Option 3 ID : 6306801449094

Option 4 ID : 6306801449091

Status : Answered

Chosen Option : 4

**Q.18** A, B and C can do a piece of work in 12, 15 and 20 days respectively. In how many days can A do the work if he is assisted by B and C on every third day?

**Ans**

☒ 1.  $8\frac{6}{11}$  days

☒ 2.  $8\frac{2}{11}$  days

☒ 3.  $7\frac{5}{11}$  days

☒ 4.  $8\frac{5}{11}$  days

Question ID : 630680371942  
Option 1 ID : 6306801449077  
Option 2 ID : 6306801449078  
Option 3 ID : 6306801449076  
Option 4 ID : 6306801449075  
Status : **Marked For Review**  
Chosen Option : 1

**Q.19** A alone can do a piece of work in 5 days and B alone in 10 days. A and B undertook to do it for Rs. 3000. With the help of C, they completed the work in 3 days. How much is to be paid to C?

**Ans**

☒ 1. ₹500

☒ 2. ₹450

☒ 3. ₹300

☒ 4. ₹400

Question ID : 630680371943  
Option 1 ID : 6306801449081  
Option 2 ID : 6306801449082  
Option 3 ID : 6306801449080  
Option 4 ID : 6306801449079  
Status : **Answered**  
Chosen Option : 3

Q.20 If  $7 : n :: 17.5 : 22.5$ , then  $n = ?$

- Ans
- ☐ 1. 6
  - ☒ 2. 9
  - ☐ 3. 7.5
  - ☐ 4. 5.5

Question ID : 630680371940  
Option 1 ID : 6306801449068  
Option 2 ID : 6306801449069  
Option 3 ID : 6306801449070  
Option 4 ID : 6306801449067  
Status : Answered  
Chosen Option : 2

Q.21 If two successive discounts of 10 percent and 5 percent are offered, then what is the net discount?

- Ans
- ☐ 1. 15 percent
  - ☒ 2. 14.5 percent
  - ☐ 3. 20 percent
  - ☐ 4. 15.5 percent

Question ID : 630680371945  
Option 1 ID : 6306801449087  
Option 2 ID : 6306801449089  
Option 3 ID : 6306801449088  
Option 4 ID : 6306801449090  
Status : Answered  
Chosen Option : 2

Q.22 On solving  $3^{(x+y)} = 81$  and  $81^{(x-y)} = 1$  , we observe that:

- Ans ☒ 1. (1,2)
- ☐ 2. (1 ,1)
- ☐ 3. No solution
- ☐ 4. (2,2)

Question ID : 630680371947  
Option 1 ID : 6306801449096  
Option 2 ID : 6306801449098  
Option 3 ID : 6306801449095  
Option 4 ID : 6306801449097  
Status : Answered  
Chosen Option : 4

Q.23 The price of Diesel is increased by 25%. By how much percent a car owner should reduce his consumption of Diesel so that the expenditure on diesel would not be increased?

- Ans ☐ 1. 30%
- ☒ 2. 20%
- ☐ 3. 10%
- ☐ 4. 15%

Question ID : 630680371935  
Option 1 ID : 6306801449050  
Option 2 ID : 6306801449049  
Option 3 ID : 6306801449047  
Option 4 ID : 6306801449048  
Status : Answered  
Chosen Option : 2

Q.24 In a shower, 6 cm of rain falls. The volume of water that falls on 2 hectares of ground is:

- Ans ☒ 1.  $1200 m^3$   
☒ 2.  $1300 m^3$   
☒ 3.  $1250 m^3$   
☒ 4.  $1000 m^3$

Question ID : 630680371948

Option 1 ID : 6306801449099

Option 2 ID : 6306801449102

Option 3 ID : 6306801449101

Option 4 ID : 6306801449100

Status : Answered

Chosen Option : 1

Q.25 If selling price is doubled, the profit triples. The profit percent is:

- Ans ☒ 1. 120%  
☒ 2. 100%  
☒ 3. 50%  
☒ 4. 200%

Question ID : 630680371937

Option 1 ID : 6306801449058

Option 2 ID : 6306801449055

Option 3 ID : 6306801449057

Option 4 ID : 6306801449056

Status : Answered

Chosen Option : 4

Section : English Language (Basic Knowledge)



Q.1 Choose the answer below that spells the word in bold correctly:  
The importance of scientific research can be traced back to the ancient times when  
medicine was in its early stages, and major operations were similar to death warrents.

- Ans ☒ 1. warrants  
☐ 2. warrannts  
☐ 3. warennts  
☐ 4. warents

Question ID : 630680371878  
Option 1 ID : 6306801448819  
Option 2 ID : 6306801448821  
Option 3 ID : 6306801448822  
Option 4 ID : 6306801448820  
Status : Answered  
Chosen Option : 1

Q.2 Choose the most appropriate meaning of the below mentioned word:  
Smeared

- Ans ☐ 1. Applauded  
☐ 2. Glorified  
☐ 3. Exalted  
☒ 4. Painted

Question ID : 630680371876  
Option 1 ID : 6306801448814  
Option 2 ID : 6306801448813  
Option 3 ID : 6306801448811  
Option 4 ID : 6306801448812  
Status : Answered  
Chosen Option : 4

Q.3 Choose the most appropriate one-word substitution for “A person who dishonestly pretends to be somebody else”

- Ans ☐ 1. Fraud
- ☒ 2. Impostor
- ☐ 3. Imperialist
- ☐ 4. Implorer

Question ID : 630680371860  
Option 1 ID : 6306801448749  
Option 2 ID : 6306801448748  
Option 3 ID : 6306801448747  
Option 4 ID : 6306801448750  
Status : Answered  
Chosen Option : 2

Q.4 Select the most appropriate option that can substitute the underlined segment in the given sentence.  
Ashok said that he saw the picture.

- Ans ☐ 1. He will never have
- ☒ 2. He had seen
- ☐ 3. He would have
- ☐ 4. He have seen

Question ID : 630680371862  
Option 1 ID : 6306801448758  
Option 2 ID : 6306801448756  
Option 3 ID : 6306801448757  
Option 4 ID : 6306801448755  
Status : Answered  
Chosen Option : 2

Q.5 Choose the most appropriate one-word substitution for “An inscription on a tomb”

- Ans
- ☐ 1. Legacy
  - ☒ 2. Epitaph
  - ☐ 3. Cryption
  - ☐ 4. Obituary

Question ID : 630680371861  
Option 1 ID : 6306801448754  
Option 2 ID : 6306801448751  
Option 3 ID : 6306801448752  
Option 4 ID : 6306801448753  
Status : Answered  
Chosen Option : 2

Q.6 Choose the most appropriate meaning of the below quoted idiom:  
“Keep an ear to the ground”

- Ans
- ☐ 1. Staying uninformed and not updated about anything
  - ☐ 2. Keep looking to the ground for something
  - ☒ 3. Staying informed and updated about everything
  - ☐ 4. Staying alienated in the real life

Question ID : 630680371874  
Option 1 ID : 6306801448803  
Option 2 ID : 6306801448805  
Option 3 ID : 6306801448806  
Option 4 ID : 6306801448804  
Status : Marked For Review  
Chosen Option : 1

Q.7 Choose the correct answer from below options that suits the below mentioned question:

My history assignment is \_\_\_\_ on Wednesday.

Ans ☒ 1. do

☒ 2. due

☒ 3. dew

☒ 4. duo

Question ID : 630680371880

Option 1 ID : 6306801448830

Option 2 ID : 6306801448829

Option 3 ID : 6306801448827

Option 4 ID : 6306801448828

Status : Answered

Chosen Option : 2

Q.8 Choose the most logical order of the sentences from among the four given choices to construct a coherent paragraph.

Adolescence is a crucial period in one's life as it serves as a foundation for the development of one's future. it is said that the youth are the driving force behind the success of the nation.

A) There is a pressing need for youth with a broad outlook to support the aspirations of the nation.

B) The youth with a broad outlook should be well-informed. They should be avid readers as knowledge is only acquired through reading academic materials.

C) Unfortunately, this generation of youth lacks awareness of the responsibilities they bear on their shoulders.

D) The youth should strive to embody these qualities as they are the key to their future success.

Ans ☒ 1. CDAB

☒ 2. CABD

☒ 3. BCAD

☒ 4. ADCB

Question ID : 630680371864

Option 1 ID : 6306801448764

Option 2 ID : 6306801448765

Option 3 ID : 6306801448766

Option 4 ID : 6306801448763

Status : Answered

Chosen Option : 4

Q.9 Parts of the following sentence have been given as option that contains an error in spelling. If you don't find any error, mark "No error" as your answer.  
Scientific research is the systamatic and structured process of discovering new facts and uncovering their relationships to other facts.

- Ans ☒ 1. discovering  
☒ 2. systamatic  
☒ 3. uncovering  
☒ 4. structured

Question ID : 630680371877  
Option 1 ID : 6306801448815  
Option 2 ID : 6306801448817  
Option 3 ID : 6306801448818  
Option 4 ID : 6306801448816  
Status : Answered  
Chosen Option : 2

Q.10 Choose the most appropriate meaning of the below quoted idiom:  
"Left out in the cold"

- Ans ☒ 1. Being extremely angry  
☒ 2. Being very happy  
☒ 3. Being grungy  
☒ 4. Being ignored

Question ID : 630680371873  
Option 1 ID : 6306801448802  
Option 2 ID : 6306801448801  
Option 3 ID : 6306801448799  
Option 4 ID : 6306801448800  
Status : Answered  
Chosen Option : 4

Q.11 Choose the most appropriate meaning of the below mentioned word:  
Escort

- Ans ☒ 1. Ditch
- ☒ 2. Companion
- ☒ 3. Dump
- ☒ 4. Abandon

Question ID : 630680371875  
Option 1 ID : 6306801448809  
Option 2 ID : 6306801448807  
Option 3 ID : 6306801448810  
Option 4 ID : 6306801448808  
Status : Answered  
Chosen Option : 1

Q.12 Travel \_\_\_\_ racial and national understanding through the exchange of ideas and  
provides interesting conversations.

- Ans ☒ 1. pushes
- ☒ 2. Inevitable
- ☒ 3. fosters
- ☒ 4. Function

Question ID : 630680371868  
Option 1 ID : 6306801448780  
Option 2 ID : 6306801448779  
Option 3 ID : 6306801448781  
Option 4 ID : 6306801448782  
Status : Answered  
Chosen Option : 3

Q.13 Select the most appropriate option that can substitute the blank segment in the given sentence.  
Some of the applicants \_\_\_\_to face a Group discussion round before being short listed.

- Ans
- ☐ 1. will
  - ☐ 2. Had a
  - ☐ 3. has
  - ☒ 4. have

Question ID : 630680371863  
Option 1 ID : 6306801448759  
Option 2 ID : 6306801448760  
Option 3 ID : 6306801448762  
Option 4 ID : 6306801448761  
Status : Answered  
Chosen Option : 3

Q.14 Select the most appropriate option to complete the following sentence:  
Our team lost the game because we played very \_\_\_\_.

- Ans
- ☐ 1. Unexpectedly
  - ☐ 2. amazingly
  - ☒ 3. Badly
  - ☐ 4. patiently

Question ID : 630680371870  
Option 1 ID : 6306801448790  
Option 2 ID : 6306801448787  
Option 3 ID : 6306801448789  
Option 4 ID : 6306801448788  
Status : Marked For Review  
Chosen Option : 3

Q.15 Choose the correct answer from below options that suits the below mentioned questions:

He sanded the wood with \_\_\_\_ sandpaper.

- Ans
- ☐ 1. corse
  - ☐ 2. course
  - ☐ 3. coars
  - ☒ 4. coarse

Question ID : 630680371879  
Option 1 ID : 6306801448824  
Option 2 ID : 6306801448823  
Option 3 ID : 6306801448825  
Option 4 ID : 6306801448826  
Status : Answered  
Chosen Option : 4

Q.16 Select the most appropriate option to complete the following sentence:  
They don't have much money. They can't afford \_\_\_\_ out very often.

- Ans
- ☒ 1. To go
  - ☐ 2. went
  - ☐ 3. Have gone
  - ☐ 4. To tell

Question ID : 630680371871  
Option 1 ID : 6306801448794  
Option 2 ID : 6306801448791  
Option 3 ID : 6306801448793  
Option 4 ID : 6306801448792  
Status : Answered  
Chosen Option : 1



Q.17 Raine had an uncle who was getting married in a week's time. She was very excited to attend \_\_\_\_ wedding ceremony.

- Ans
- ☐ 1. at
  - ☐ 2. him
  - ☐ 3. an
  - ☒ 4. his

Question ID : 630680371869  
Option 1 ID : 6306801448786  
Option 2 ID : 6306801448783  
Option 3 ID : 6306801448784  
Option 4 ID : 6306801448785  
Status : Answered  
Chosen Option : 4

Q.18 Rebecca was having a relaxing day at home on Sunday. She had been busy \_\_\_\_ her revision recently due to a major school examination.

- Ans
- ☒ 1. With
  - ☐ 2. too
  - ☐ 3. during
  - ☐ 4. from

Question ID : 630680371867  
Option 1 ID : 6306801448777  
Option 2 ID : 6306801448778  
Option 3 ID : 6306801448776  
Option 4 ID : 6306801448775  
Status : Answered  
Chosen Option : 1

Q.19 \_\_\_\_\_ the weekends, he helps out at the society, doing odd jobs.

- Ans ☒ 1. During  
☐ 2. Although  
☐ 3. Nothing  
☐ 4. Then

Question ID : 630680371866  
Option 1 ID : 6306801448772  
Option 2 ID : 6306801448771  
Option 3 ID : 6306801448773  
Option 4 ID : 6306801448774  
Status : Answered  
Chosen Option : 1

Q.20 Select the most appropriate option to complete the following sentence:  
I was really astonished. I didn't know\_\_\_\_\_.

- Ans ☐ 1. What to tell  
☐ 2. What to said  
☒ 3. What to say  
☐ 4. Told

Question ID : 630680371872  
Option 1 ID : 6306801448795  
Option 2 ID : 6306801448797  
Option 3 ID : 6306801448796  
Option 4 ID : 6306801448798  
Status : Answered  
Chosen Option : 3

Q.21 Choose the most logical order of the sentences from among the four given choices to construct a coherent paragraph.

The tourism industry is one of the most important sectors for the growth and development of a country. This is because the tourism industry contributes significantly to the revenue of a country.

A) Promotional activities can be carried out by increasing and enhancing tourism activities in our country.

B) Various initiatives and efforts should be taken to encourage the growth and acceleration of tourism.

C) All programs should be carried out in cooperation between relevant parties and not just be hot air or just letting off steam.

D) The efforts of various parties, including the government and private sector, in promoting our country as a tourist destination and improving its tourism industry, will result in the growth and development of the country's economy.

Ans  1. BACD

 2. CADB

 3. BCAD

 4. ABCD

Question ID : 630680371865

Option 1 ID : 6306801448770

Option 2 ID : 6306801448767

Option 3 ID : 6306801448768

Option 4 ID : 6306801448769

Status : Answered

Chosen Option : 4

Comprehension:

Read the passage and answer the given questions  
Choice has become a buzzword for the current generation, raised on the ideals of democracy and freedom. The prevailing perception is that individuals must be allowed to develop their potential and interests in all areas to become well-rounded individuals. But is choice in education something that should be encouraged, particularly in school.

Allowing students to choose their school subjects and activities can be beneficial in various ways. It enables them to explore and expand their personal interests and strengths, promoting a more diverse and vibrant society. In education systems that prioritize producing students who can fill gaps in the economy, allowing students to choose their areas of interest can plant the seeds for a more creative and innovative society that values different abilities. Moreover, allowing students to specialize in a few subjects or activities can encourage depth in knowledge, rather than breadth. Students can become experts in their chosen fields of study or activities, rather than having only superficial knowledge of a wide range of subjects.

However, a broad-based education that covers a wide range of subjects may not be a bad thing. It ensures that each child gets a taste of each subject, allowing them to fully understand their talents. If they have no real idea of what each subject entails, they may develop opinions based on peer influence or hearsay. Also, if a child focuses on only a few subjects or activities, they may not be equipped to handle real-world problems and challenges, which are often interdisciplinary and multifaceted. Compulsory subjects in the early stages of education allow children to discover their real abilities. Compulsory activities expose students to a wider range of experiences that enrich them. In their later school years, choices should be made available in both areas as by then, they will be better equipped to choose wisely.

Therefore, it is not a matter of choosing to make all school subjects and activities compulsory or giving all choices to the students. The school should provide a range of subjects and experiences to expose students to the full repertoire of school life before allowing them to specialize when they are more mature. This approach will ensure a good balance in their education, promoting both breadth and depth of knowledge and skills.

SubQuestion No : 22

Q.22 Identify the suitable title for the passage

- Ans ☒ 1. The importance of choice in School Education
- ☐ 2. School Education and its issues
- ☐ 3. School Subjects & Activities: Their problems
- ☐ 4. Problems of choice in School education

Question ID : 630680371857  
Option 1 ID : 6306801448738  
Option 2 ID : 6306801448735  
Option 3 ID : 6306801448736  
Option 4 ID : 6306801448737  
Status : Not Answered  
Chosen Option : --

Comprehension:

Read the passage and answer the given questions  
Choice has become a buzzword for the current generation, raised on the ideals of democracy and freedom. The prevailing perception is that individuals must be allowed to develop their potential and interests in all areas to become well-rounded individuals. But is choice in education something that should be encouraged, particularly in school.

Allowing students to choose their school subjects and activities can be beneficial in various ways. It enables them to explore and expand their personal interests and strengths, promoting a more diverse and vibrant society. In education systems that prioritize producing students who can fill gaps in the economy, allowing students to choose their areas of interest can plant the seeds for a more creative and innovative society that values different abilities. Moreover, allowing students to specialize in a few subjects or activities can encourage depth in knowledge, rather than breadth. Students can become experts in their chosen fields of study or activities, rather than having only superficial knowledge of a wide range of subjects.

However, a broad-based education that covers a wide range of subjects may not be a bad thing. It ensures that each child gets a taste of each subject, allowing them to fully understand their talents. If they have no real idea of what each subject entails, they may develop opinions based on peer influence or hearsay. Also, if a child focuses on only a few subjects or activities, they may not be equipped to handle real-world problems and challenges, which are often interdisciplinary and multifaceted. Compulsory subjects in the early stages of education allow children to discover their real abilities. Compulsory activities expose students to a wider range of experiences that enrich them. In their later school years, choices should be made available in both areas as by then, they will be better equipped to choose wisely.

Therefore, it is not a matter of choosing to make all school subjects and activities compulsory or giving all choices to the students. The school should provide a range of subjects and experiences to expose students to the full repertoire of school life before allowing them to specialize when they are more mature. This approach will ensure a good balance in their education, promoting both breadth and depth of knowledge and skills.

SubQuestion No : 23

Q.23 What is the meaning of “Diverse”?

- Ans
- ☐ 1. Identical
  - ☐ 2. Similar
  - ☐ 3. Same
  - ☒ 4. Different

Question ID : 630680371858  
Option 1 ID : 6306801448742  
Option 2 ID : 6306801448741  
Option 3 ID : 6306801448740  
Option 4 ID : 6306801448739  
Status : Answered  
Chosen Option : 4

Comprehension:

Read the passage and answer the given questions  
Choice has become a buzzword for the current generation, raised on the ideals of democracy and freedom. The prevailing perception is that individuals must be allowed to develop their potential and interests in all areas to become well-rounded individuals. But is choice in education something that should be encouraged, particularly in school.

Allowing students to choose their school subjects and activities can be beneficial in various ways. It enables them to explore and expand their personal interests and strengths, promoting a more diverse and vibrant society. In education systems that prioritize producing students who can fill gaps in the economy, allowing students to choose their areas of interest can plant the seeds for a more creative and innovative society that values different abilities. Moreover, allowing students to specialize in a few subjects or activities can encourage depth in knowledge, rather than breadth. Students can become experts in their chosen fields of study or activities, rather than having only superficial knowledge of a wide range of subjects.

However, a broad-based education that covers a wide range of subjects may not be a bad thing. It ensures that each child gets a taste of each subject, allowing them to fully understand their talents. If they have no real idea of what each subject entails, they may develop opinions based on peer influence or hearsay. Also, if a child focuses on only a few subjects or activities, they may not be equipped to handle real-world problems and challenges, which are often interdisciplinary and multifaceted. Compulsory subjects in the early stages of education allow children to discover their real abilities. Compulsory activities expose students to a wider range of experiences that enrich them. In their later school years, choices should be made available in both areas as by then, they will be better equipped to choose wisely.

Therefore, it is not a matter of choosing to make all school subjects and activities compulsory or giving all choices to the students. The school should provide a range of subjects and experiences to expose students to the full repertoire of school life before allowing them to specialize when they are more mature. This approach will ensure a good balance in their education, promoting both breadth and depth of knowledge and skills.

SubQuestion No : 24

Q.24 Identify the inferences drawn from the passage

- Ans
- ☒ 1. A broad-based education that covers a wide range of subjects may not be a bad thing.
  - ☒ 2. Choice has become a buzzword for the current generation.
  - ☒ 3. The school should provide a range of subjects and experiences to expose students to the full repertoire of school life before allowing them to specialize when they are more mature.
  - ☒ 4. In education systems that prioritize producing students who can fill gaps in the economy, allowing students to choose their areas of interest cannot plant the seeds for a more creative and innovative society that values different abilities.

Question ID : 630680371859  
Option 1 ID : 6306801448745  
Option 2 ID : 6306801448743  
Option 3 ID : 6306801448746  
Option 4 ID : 6306801448744

Status : **Not Answered**  
Chosen Option : --



Comprehension:

Read the passage and answer the given questions  
Choice has become a buzzword for the current generation, raised on the ideals of democracy and freedom. The prevailing perception is that individuals must be allowed to develop their potential and interests in all areas to become well-rounded individuals. But is choice in education something that should be encouraged, particularly in school.

Allowing students to choose their school subjects and activities can be beneficial in various ways. It enables them to explore and expand their personal interests and strengths, promoting a more diverse and vibrant society. In education systems that prioritize producing students who can fill gaps in the economy, allowing students to choose their areas of interest can plant the seeds for a more creative and innovative society that values different abilities. Moreover, allowing students to specialize in a few subjects or activities can encourage depth in knowledge, rather than breadth. Students can become experts in their chosen fields of study or activities, rather than having only superficial knowledge of a wide range of subjects.

However, a broad-based education that covers a wide range of subjects may not be a bad thing. It ensures that each child gets a taste of each subject, allowing them to fully understand their talents. If they have no real idea of what each subject entails, they may develop opinions based on peer influence or hearsay. Also, if a child focuses on only a few subjects or activities, they may not be equipped to handle real-world problems and challenges, which are often interdisciplinary and multifaceted. Compulsory subjects in the early stages of education allow children to discover their real abilities. Compulsory activities expose students to a wider range of experiences that enrich them. In their later school years, choices should be made available in both areas as by then, they will be better equipped to choose wisely.

Therefore, it is not a matter of choosing to make all school subjects and activities compulsory or giving all choices to the students. The school should provide a range of subjects and experiences to expose students to the full repertoire of school life before allowing them to specialize when they are more mature. This approach will ensure a good balance in their education, promoting both breadth and depth of knowledge and skills.

SubQuestion No : 25

Q.25 Identify the central theme of the passage

- Ans
- ☒ 1. a matter of choosing to make all school subjects and activities compulsory or giving all choices to the students is not all that important and should not be discussed.
  - ☒ 2. Compulsory activities expose students to a wider range of experiences that enrich them.
  - ☒ 3. Allowing students to choose their school subjects and activities can be beneficial in various ways.
  - ☒ 4. Compulsory subjects in the early stages of education allow children to discover their real abilities.

Question ID : 630680371856  
Option 1 ID : 6306801448734  
Option 2 ID : 6306801448733  
Option 3 ID : 6306801448731  
Option 4 ID : 6306801448732  
Status : Not Answered



Chosen Option : --

