

DELHI DEVELOPMENT AUTHORITY
RECRUITMENT CELL
VIKAS SADAN, INA, NEW DELHI - 110023
<https://www.dda.gov.in>

Advertisement No. 02/2023/Recdt. Cell/Pers./DDA

Participant ID	
Participant Name	
Test Center Name	
Test Date	22/09/2023
Test Time	2:30 PM - 3:30 PM
Subject	Junior Secretariat Assistant

Section : General Intelligence

Adda247

Test Prime

ALL EXAMS, ONE SUBSCRIPTION



1,00,000+
Mock Tests



**Personalised
Report Card**



**Unlimited
Re-Attempt**



600+
Exam Covered



25,000+ Previous
Year Papers



500%
Refund



ATTEMPT FREE MOCK NOW

Q.1 A series is given with one term missing. Select the correct alternative from the given ones that will complete the series.
GMRQ, LGYI, QAFA, VUMS, ?

- Ans ☒ 1. AOTK
☐ 2. NTSO
☐ 3. AMNO
☐ 4. ONMP

Question ID : 630680372014
Option 1 ID : 6306801449359
Option 2 ID : 6306801449362
Option 3 ID : 6306801449360
Option 4 ID : 6306801449361
Status : Answered
Chosen Option : 1

Q.2 In the following question, select the missing number from the given series.
49, 22, -5, -32, -59, ?

- Ans ☐ 1. -80
☒ 2. -86
☐ 3. -90
☐ 4. -84

Question ID : 630680372023
Option 1 ID : 6306801449395
Option 2 ID : 6306801449397
Option 3 ID : 6306801449398
Option 4 ID : 6306801449396
Status : Answered
Chosen Option : 2

Q.3 If 'P' means '+', 'Q' means '-', 'R' means 'x' and 'T' means '÷', then 60 T 3 P 50 Q 20 R 5 = ?

- Ans ☒ 1. -30
- ☐ 2. 20
- ☐ 3. -20
- ☐ 4. 0

Question ID : 630680372029
Option 1 ID : 6306801449419
Option 2 ID : 6306801449422
Option 3 ID : 6306801449421
Option 4 ID : 6306801449420
Status : Answered
Chosen Option : 1

Q.4 In the following question, four letter pairs are given. The letters on left side of (–) is related to the letters on the right side of (–) with some Logic/Rule/Relation. Three are similar on basis of same Logic/Rule/Relation. Select the odd one out from the given alternatives.

- Ans ☐ 1. KZ – RG
- ☒ 2. GH – NP
- ☐ 3. AP – HW
- ☐ 4. TI – AP

Question ID : 630680372020
Option 1 ID : 6306801449384
Option 2 ID : 6306801449383
Option 3 ID : 6306801449385
Option 4 ID : 6306801449386
Status : Answered
Chosen Option : 2

Q.5 In the following question, select the related letters from the given alternatives.
FS : JW :: GT : ?

- Ans
- ☒ 1. TF
 - ☒ 2. IL
 - ☒ 3. KX
 - ☒ 4. WX

Question ID : 630680372018
Option 1 ID : 6306801449376
Option 2 ID : 6306801449377
Option 3 ID : 6306801449375
Option 4 ID : 6306801449378
Status : Answered
Chosen Option : 3

Q.6 Eight persons P1, P2, P3, P4, P5, P6, P7 and P8 live in an eight storied building, one on each floor but not necessarily in the same order. The lowermost floor is numbered 1, and the floor above it is numbered 2 and so on.
Only two persons live below the floor on which P7 lives. Only one person lives between P7 and P1. P8 lives on an odd numbered floor but not on floor numbered 7.
Only two persons live between P8 and P2. P2 does not live on the topmost floor. P1 does not live on the lowermost floor. P4 lives immediately below P3. Neither P4 nor P5 lives on floor numbered 6. Who lives immediately below P4?

- Ans
- ☒ 1. P2
 - ☒ 2. P6
 - ☒ 3. P5
 - ☒ 4. P3

Question ID : 630680372010
Option 1 ID : 6306801449346
Option 2 ID : 6306801449344
Option 3 ID : 6306801449345
Option 4 ID : 6306801449343
Status : Answered
Chosen Option : 2

Q.7 Select the option that is related to the fifth number cluster in the same way as the second number cluster is related to the first number cluster and fourth number cluster is related to third number cluster.
17253 : 75321 :: 696 : 966 : 1082 : ?

- Ans ☒ 1. 1888
☒ 2. 8210
☒ 3. 6412
☒ 4. 1828

Question ID : 630680372031
Option 1 ID : 6306801449430
Option 2 ID : 6306801449429
Option 3 ID : 6306801449428
Option 4 ID : 6306801449427
Status : Answered
Chosen Option : 2

Q.8 A series is given with one term missing. Select the correct alternative from the given ones that will complete the series.
YZM, VUL, SPK, PKJ, ?

- Ans ☒ 1. TQS
☒ 2. TQR
☒ 3. UVL
☒ 4. MFI

Question ID : 630680372013
Option 1 ID : 6306801449355
Option 2 ID : 6306801449357
Option 3 ID : 6306801449358
Option 4 ID : 6306801449356
Status : Answered
Chosen Option : 4

Q.9 What is the approximate value of $(18.01 + 21.99) \div 2.08 \times 4.012 - 41.99 + 644.17$?

Ans ☒ 1. 682

☐ 2. 515

☐ 3. 719

☐ 4. 778

Question ID : 630680372027

Option 1 ID : 6306801449413

Option 2 ID : 6306801449412

Option 3 ID : 6306801449414

Option 4 ID : 6306801449411

Status : Answered

Chosen Option : 1

Q.10 In the following question, select the missing number from the given series.
2089, 2065, 2041, 2017, 1993, ?

Ans ☐ 1. 1971

☒ 2. 1969

☐ 3. 1980

☐ 4. 1970

Question ID : 630680372022

Option 1 ID : 6306801449393

Option 2 ID : 6306801449394

Option 3 ID : 6306801449392

Option 4 ID : 6306801449391

Status : Answered

Chosen Option : 2

Q.11 Six lectures A1, A2, A3, A4, A5 and A6 are to be organized in a span of seven days from Sunday to Saturday. Only one lecture on each day in accordance with the following:
I. There should be a gap of two days between A5 and A4.
II. A2 should be organised on Tuesday and should not be organized just before A4.
III. A1 should not be organized on Thursday.
IV. One day there will be no lecture (Friday is not that day), just before that day A4 will be organised.V. A3 should be organised immediately after A6.
Which lecture is organised just before lecture A5?

- Ans ☒ 1. A3
☒ 2. A2
☒ 3. A1
☒ 4. A6

Question ID : 630680372009
Option 1 ID : 6306801449342
Option 2 ID : 6306801449341
Option 3 ID : 6306801449340
Option 4 ID : 6306801449339
Status : Not Attempted and Marked For Review
Chosen Option : --

Q.12 In a certain code language, 'OVER' is written as 'KQAM'. What is the code for 'PAGE' in that code language?

- Ans ☒ 1. LVDA
☒ 2. LVDZ
☒ 3. LVCA
☒ 4. LVCZ

Question ID : 630680372017
Option 1 ID : 6306801449373
Option 2 ID : 6306801449371
Option 3 ID : 6306801449372
Option 4 ID : 6306801449374
Status : Answered
Chosen Option : 4

Q.13 After interchanging the which two numbers, the value of the given equation will be '16'?

$3 + 5 \times 4 - 6 \div 2$

Ans ☒ 1. 3 and 5

☒ 2. 2 and 3

☒ 3. 3 and 4

☒ 4. 5 and 6

Question ID : 630680372024

Option 1 ID : 6306801449399

Option 2 ID : 6306801449400

Option 3 ID : 6306801449401

Option 4 ID : 6306801449402

Status : Answered

Chosen Option : 3

Q.14 In the following question, a group of letters is given. The letters of each group are related with the letters of the same group by some Logic/Rule/Relation. From the given alternatives, select a group of letters which follows the same Logic/Rule/Relation. (DF, HJ, LN)

Ans ☒ 1. (PS, TW, WA)

☒ 2. (RV, VZ, ZC)

☒ 3. (NP, RT, VX)

☒ 4. (KM, OQ, RU)

Question ID : 630680372019

Option 1 ID : 6306801449381

Option 2 ID : 6306801449379

Option 3 ID : 6306801449382

Option 4 ID : 6306801449380

Status : Answered

Chosen Option : 3

Q.15 In the following question, select the missing number from the given series.
19, 40, 15, 44, ?, 48

- Ans ☒ 1. 10
☒ 2. 15
☒ 3. 11
☒ 4. 13

Question ID : 630680372025
Option 1 ID : 6306801449403
Option 2 ID : 6306801449406
Option 3 ID : 6306801449404
Option 4 ID : 6306801449405
Status : Answered
Chosen Option : 3

Q.16 Six boys L, M, N, O, P and R are sitting around a circular table facing opposite to the centre (not necessarily in the same order). M is third to the right of P. L is to immediate left of P. O is to immediate left of M. R is not the immediate neighbour of P. Who is sitting second to the right of N?

- Ans ☒ 1. L
☒ 2. M
☒ 3. R
☒ 4. P

Question ID : 630680372007
Option 1 ID : 6306801449332
Option 2 ID : 6306801449331
Option 3 ID : 6306801449333
Option 4 ID : 6306801449334
Status : Answered
Chosen Option : 2

Q.17 In a certain code language, 'BEST' is written as 'FJWY'. What is the code for 'CLUB' in that code language?

- Ans
- ☒ 1. GQZG
 - ☒ 2. HQYG
 - ☒ 3. GQYG
 - ☒ 4. GQYH

Question ID : 630680372016
Option 1 ID : 6306801449369
Option 2 ID : 6306801449370
Option 3 ID : 6306801449367
Option 4 ID : 6306801449368
Status : Answered
Chosen Option : 3

Q.18 In the following question, select the missing number from the given series.
1, 3, 4, 11, 18, ?

- Ans
- ☒ 1. 41
 - ☒ 2. 34
 - ☒ 3. 33
 - ☒ 4. 30

Question ID : 630680372026
Option 1 ID : 6306801449409
Option 2 ID : 6306801449410
Option 3 ID : 6306801449408
Option 4 ID : 6306801449407
Status : Not Attempted and Marked For Review
Chosen Option : --

Q.19 By interchanging which two numbers (not digits) the equation will be correct?
 $4 \times 7 + 6 \div 2 - 5 = 16$

- Ans
- ☐ 1. 4 and 2
 - ☒ 2. 5 and 7
 - ☐ 3. 4 and 7
 - ☐ 4. 2 and 6

Question ID : 630680372030
Option 1 ID : 6306801449424
Option 2 ID : 6306801449423
Option 3 ID : 6306801449426
Option 4 ID : 6306801449425
Status : Answered
Chosen Option : 2

Q.20 In the following question below are given some statements followed by some conclusions based on those statements. Taking the given statements to be true even if they seem to be at variance from commonly known facts. Read all the conclusions and then decide which of the given conclusion logically follows the given statements.
Statements:
I. Some blue are green.
II. All black are green.
Conclusion:
I. Some green are blue.
II. Some green are black.

- Ans
- ☒ 1. Both conclusions I and II follows
 - ☐ 2. Only conclusion I follows
 - ☐ 3. Only conclusion II follows
 - ☐ 4. Neither conclusion follows

Question ID : 630680372011
Option 1 ID : 6306801449349
Option 2 ID : 6306801449347
Option 3 ID : 6306801449348
Option 4 ID : 6306801449350
Status : Answered
Chosen Option : 1

Q.21 Consider the five three digit numbers given below and the answer the questions based on it.
(Left) 171 955 444 647 993 (Right)
If the hundred digit of 3rd number from the left end and unit digit of the 4th number from left end interchanges their positions, then what will be the position of 3rd smallest number from the left end in the newly formed group of numbers?

- Ans ☒ 1. Third
- ☒ 2. Fifth
- ☒ 3. Fourth
- ☒ 4. Second

Question ID : 630680372015
Option 1 ID : 6306801449364
Option 2 ID : 6306801449366
Option 3 ID : 6306801449365
Option 4 ID : 6306801449363
Status : Not Attempted and Marked For Review
Chosen Option : --

Q.22 What is the approximate value of $2832.07 \div 23.987 + (11.899)2 \div 5.91$?

- Ans ☒ 1. 142
- ☒ 2. 448
- ☒ 3. 178
- ☒ 4. 232

Question ID : 630680372028
Option 1 ID : 6306801449415
Option 2 ID : 6306801449418
Option 3 ID : 6306801449416
Option 4 ID : 6306801449417
Status : Answered
Chosen Option : 1

Q.23 Seven friends A, B, C, D, E, F and G are sitting in a row facing towards the north (not necessarily in the same order). E is at one of the end. A is fifth to the left of E. B is not the immediate neighbour of A or E. C is third to the left of B. Only D is sitting between A and B. Only two friends are sitting between D and F. Which of the following statement(s) is/are correct?
I. G is to the immediate right of B.
II. F is third to the right of A.

- Ans
- ☒ 1. Neither I nor II
 - ☒ 2. Only II
 - ☒ 3. Only I
 - ☒ 4. Both I and II

Question ID : 630680372008
Option 1 ID : 6306801449338
Option 2 ID : 6306801449336
Option 3 ID : 6306801449335
Option 4 ID : 6306801449337
Status : Answered
Chosen Option : 3

Q.24 In the following question, select the odd letter/letters from the given alternatives.

- Ans
- ☒ 1. VR
 - ☒ 2. GB
 - ☒ 3. OJ
 - ☒ 4. FA

Question ID : 630680372021
Option 1 ID : 6306801449389
Option 2 ID : 6306801449390
Option 3 ID : 6306801449388
Option 4 ID : 6306801449387
Status : Answered
Chosen Option : 1

Q.25 In the following question below are given some statements followed by some conclusions based on those statements. Taking the given statements to be true even if they seem to be at variance from commonly known facts. Read all the conclusions and then decide which of the given conclusion logically follows the given statements.

Statements:

I. All Y are M.

II. Some T are Y.

Conclusion:

I. Some Y are T.

II. Some M are not Y.

III. Some Y are M.

- Ans** ☒ 1. Both conclusions I and II follows
- ☒ 2. Only conclusion II follows
- ☒ 3. All conclusion follows
- ☒ 4. Both conclusions I and III follows

Question ID : 630680372012
Option 1 ID : 6306801449351
Option 2 ID : 6306801449354
Option 3 ID : 6306801449352
Option 4 ID : 6306801449353
Status : Answered
Chosen Option : 4

Section : General Awareness

Q.1 Aravind Adiga won the 2008 Man Booker Prize for which of the following novels?

- Ans** ☒ 1. Tomb of Sand
- ☒ 2. The White Tiger
- ☒ 3. Sea of Poppies
- ☒ 4. River of Smoke

Question ID : 630680371996
Option 1 ID : 6306801449290
Option 2 ID : 6306801449289
Option 3 ID : 6306801449287
Option 4 ID : 6306801449288
Status : Answered
Chosen Option : 3

Q.2 Which among the following teams won the highest number of Bronze medals in the National Games 2022?

- Ans ☒ 1. Delhi
☐ 2. Tamil Nadu
☐ 3. Haryana
☐ 4. Punjab

Question ID : 630680371983
Option 1 ID : 6306801449237
Option 2 ID : 6306801449238
Option 3 ID : 6306801449236
Option 4 ID : 6306801449235
Status : Answered
Chosen Option : 3

Q.3 Which of the following pair is correctly matched?
I. Plants – Unicellular
II. Paramecium – Multicellular

- Ans ☐ 1. Only I
☐ 2. Both I and II
☒ 3. Neither I nor II
☐ 4. Only II

Question ID : 630680372006
Option 1 ID : 6306801449327
Option 2 ID : 6306801449329
Option 3 ID : 6306801449330
Option 4 ID : 6306801449328
Status : Not Attempted and Marked For Review
Chosen Option : --

Q.4 Who became the nawab of Bengal after the death of Alivardi Khan?

- Ans ☒ 1. Sirajuddaulah
- ☐ 2. Murshid Quli Khan
- ☐ 3. Shujauddaulah
- ☐ 4. Saadat Ali Khan

Question ID : 630680371990
Option 1 ID : 6306801449266
Option 2 ID : 6306801449264
Option 3 ID : 6306801449265
Option 4 ID : 6306801449263
Status : Answered
Chosen Option : 2

Q.5 Who is the founding father of modern economics?

- Ans ☐ 1. Alfred Marshal
- ☒ 2. Adam Smith
- ☐ 3. Paul Samuelson
- ☐ 4. David Ricardo

Question ID : 630680371987
Option 1 ID : 6306801449252
Option 2 ID : 6306801449251
Option 3 ID : 6306801449254
Option 4 ID : 6306801449253
Status : Answered
Chosen Option : 2

Q.6 Banabhatta has written the biography of which of the following rulers?

- Ans ☒ 1. Harshavardhana
- ☐ 2. Ashoka
- ☐ 3. Samudragupta
- ☐ 4. Ajatashatru

Question ID : 630680371995
Option 1 ID : 6306801449286
Option 2 ID : 6306801449284
Option 3 ID : 6306801449285
Option 4 ID : 6306801449283
Status : Answered
Chosen Option : 1

Q.7 Which state of India renamed the State Planning Commission as the State Transformation Commission?

- Ans ☒ 1. Uttar Pradesh
- ☐ 2. Kerala
- ☐ 3. Telangana
- ☐ 4. Madhya Pradesh

Question ID : 630680371985
Option 1 ID : 6306801449245
Option 2 ID : 6306801449243
Option 3 ID : 6306801449244
Option 4 ID : 6306801449246
Status : Answered
Chosen Option : 1

Q.8 Which of the following festivals is/are related to farmers?
I. Hareli festival
II. Kajari festival

- Ans ☒ 1. Only II
☒ 2. Only I
☒ 3. Both I and II
☒ 4. Neither I nor II

Question ID : 630680372000
Option 1 ID : 6306801449304
Option 2 ID : 6306801449303
Option 3 ID : 6306801449305
Option 4 ID : 6306801449306
Status : Answered
Chosen Option : 3

Q.9 Which of the following bundles are included in the consumer's budget set?
I. Bundles on the budget line
II. Bundles below the budget line

- Ans ☒ 1. Both I and II
☒ 2. Neither I nor II
☒ 3. Only I
☒ 4. Only II

Question ID : 630680371988
Option 1 ID : 6306801449257
Option 2 ID : 6306801449258
Option 3 ID : 6306801449255
Option 4 ID : 6306801449256
Status : Not Attempted and
Marked For Review
Chosen Option : --

Q.10 Which of the following tax was called 'kharaj' in the reign of the ruler Alauddin Khalji?

- Ans
- ☒ 1. Tax on cattle
 - ☒ 2. Tax on sale and purchase
 - ☒ 3. Tax on cultivation
 - ☒ 4. Tax on houses

Question ID : 630680371992
Option 1 ID : 6306801449274
Option 2 ID : 6306801449272
Option 3 ID : 6306801449273
Option 4 ID : 6306801449271
Status : Answered
Chosen Option : 2

Q.11 Which of the following statements is correct regarding start-up platform 'herSTART'?
I. This is a start-up platform of Gujarat University for women entrepreneurs.
II. It was launched in October 2022.

- Ans
- ☒ 1. Only II
 - ☒ 2. Neither I nor II
 - ☒ 3. Only I
 - ☒ 4. Both I and II

Question ID : 630680371986
Option 1 ID : 6306801449248
Option 2 ID : 6306801449250
Option 3 ID : 6306801449247
Option 4 ID : 6306801449249
Status : Not Attempted and Marked For Review
Chosen Option : --

Q.12 Which of the following statement is correct?
I. The variation in duration of sunlight at different places is due to differences in latitude, altitude, season and the duration of day.
II. Due to longer duration of sunlight trees grow faster in summer.

- Ans ☒ 1. Neither I nor II
☒ 2. Only I
☒ 3. Only II
☒ 4. Both I and II

Question ID : 630680372003
Option 1 ID : 6306801449318
Option 2 ID : 6306801449315
Option 3 ID : 6306801449316
Option 4 ID : 6306801449317
Status : Answered
Chosen Option : 4

Q.13 Which of the following pairs of 'organization – year of foundation' is correctly matched?
I. Arya Samaj – 1835
II. Prarthana Samaj – 1867

- Ans ☒ 1. Only I
☒ 2. Neither I nor II
☒ 3. Both I and II
☒ 4. Only II

Question ID : 630680371991
Option 1 ID : 6306801449267
Option 2 ID : 6306801449270
Option 3 ID : 6306801449269
Option 4 ID : 6306801449268
Status : Answered
Chosen Option : 3

Q.14 Dudhwa National Park is present in which of the following state?

- Ans ☒ 1. Rajasthan
- ☒ 2. Uttar Pradesh
- ☒ 3. Madhya Pradesh
- ☒ 4. Chhattisgarh

Question ID : 630680372001
Option 1 ID : 6306801449308
Option 2 ID : 6306801449307
Option 3 ID : 6306801449309
Option 4 ID : 6306801449310
Status : Answered
Chosen Option : 2

Q.15 The Indian National Congress was established when _____ delegates from all over the country met at Bombay in December 1885.

- Ans ☒ 1. 64
- ☒ 2. 83
- ☒ 3. 56
- ☒ 4. 72

Question ID : 630680371989
Option 1 ID : 6306801449260
Option 2 ID : 6306801449262
Option 3 ID : 6306801449259
Option 4 ID : 6306801449261
Status : Answered
Chosen Option : 4

Q.16 Which among the following languages was added in the Eighth Schedule of the Indian Constitution in 1992?

I. Manipuri

II. Santhali

Ans ☒ 1. Neither I nor II

☒ 2. Only I

☒ 3. Only II

☒ 4. Both I and II

Question ID : 630680371998
Option 1 ID : 6306801449298
Option 2 ID : 6306801449295
Option 3 ID : 6306801449296
Option 4 ID : 6306801449297
Status : Answered
Chosen Option : 4

Q.17 Which of the following festivals is dedicated to the Sun God and his wife Usha?

Ans ☒ 1. Vishu

☒ 2. Ugadi

☒ 3. Bihu

☒ 4. Chhath

Question ID : 630680371999
Option 1 ID : 6306801449301
Option 2 ID : 6306801449300
Option 3 ID : 6306801449299
Option 4 ID : 6306801449302
Status : Answered
Chosen Option : 4

Q.18 As per Census 2011, the Sikh Religious community constituted _____ percent of the total population of India.

- Ans
- ☒ 1. 2.3
 - ☒ 2. 0.4
 - ☒ 3. 1.7
 - ☒ 4. 0.7

Question ID : 630680372004
Option 1 ID : 6306801449322
Option 2 ID : 6306801449319
Option 3 ID : 6306801449321
Option 4 ID : 6306801449320
Status : Answered
Chosen Option : 1

Q.19 Which of the following statement is correct with respect to the rulers of Delhi?
I. Chauhans ruled from 1145 to 1198.
II. Prithviraj Chauhan ruled from 1175 to 1192.

- Ans
- ☒ 1. Neither I nor II
 - ☒ 2. Only II
 - ☒ 3. Only I
 - ☒ 4. Both I and II

Question ID : 630680371994
Option 1 ID : 6306801449282
Option 2 ID : 6306801449280
Option 3 ID : 6306801449279
Option 4 ID : 6306801449281
Status : Not Attempted and Marked For Review
Chosen Option : --

Q.20 Deep Grace Ekka was conferred with the Arjuna Award 2022 in which sports?

- Ans ☒ 1. Hockey
- ☐ 2. Athletics
- ☐ 3. Badminton
- ☐ 4. Boxing

Question ID : 630680371982
Option 1 ID : 6306801449234
Option 2 ID : 6306801449231
Option 3 ID : 6306801449232
Option 4 ID : 6306801449233
Status : Not Answered
Chosen Option : --

Q.21 Nanda Devi biosphere reserve is located in which of the following state of India?

- Ans ☐ 1. Himachal Pradesh
- ☐ 2. Kerala
- ☒ 3. Uttarakhand
- ☐ 4. Jammu and Kashmir

Question ID : 630680372002
Option 1 ID : 6306801449311
Option 2 ID : 6306801449314
Option 3 ID : 6306801449313
Option 4 ID : 6306801449312
Status : Answered
Chosen Option : 1

Q.22 Which of the following is the first Indian space mission to observe the Sun and the solar corona?

- Ans ☒ 1. Surya-R1
- ☒ 2. Aditya-L1
- ☒ 3. Aditya-R1
- ☒ 4. Surya-L1

Question ID : 630680371984
Option 1 ID : 6306801449241
Option 2 ID : 6306801449240
Option 3 ID : 6306801449242
Option 4 ID : 6306801449239
Status : Answered
Chosen Option : 2

Q.23 Kadamba Mayurasharman gave up his traditional profession and took to arms and successfully established his kingdom in _____ state.

- Ans ☒ 1. Rajasthan
- ☒ 2. Andhra
- ☒ 3. Karnataka
- ☒ 4. Gujarat

Question ID : 630680371993
Option 1 ID : 6306801449276
Option 2 ID : 6306801449278
Option 3 ID : 6306801449277
Option 4 ID : 6306801449275
Status : Not Answered
Chosen Option : --

Q.24 As of June 2022, which of the following languages has not been given status of classical languages in India?

- Ans
- ☒ 1. Malayalam
 - ☒ 2. Odia
 - ☒ 3. Manipuri
 - ☒ 4. Tamil

Question ID : 630680371997
Option 1 ID : 6306801449292
Option 2 ID : 6306801449293
Option 3 ID : 6306801449294
Option 4 ID : 6306801449291
Status : Answered
Chosen Option : 2

Q.25 As per Census 2011, which among the following states has male literacy rate below 80 percent?
I. Haryana
II. Meghalaya

- Ans
- ☒ 1. Both I and II
 - ☒ 2. Only II
 - ☒ 3. Neither I nor II
 - ☒ 4. Only I

Question ID : 630680372005
Option 1 ID : 6306801449325
Option 2 ID : 6306801449324
Option 3 ID : 6306801449326
Option 4 ID : 6306801449323
Status : Answered
Chosen Option : 4

Section : Quantitative Aptitude (Basic Arithmetic Skill)

Q.1 Three numbers P, Q and R are in the ratio 1:2: 3. Their average is 600. If P is increased by 10% and Q is decreased by 20%, then to get the average increased by 5%, R will be increased by

- Ans**
- ☒ 1. 100
 - ☒ 2. 150
 - ☒ 3. 180
 - ☒ 4. 200

Question ID : 630680372040
Option 1 ID : 6306801449466
Option 2 ID : 6306801449463
Option 3 ID : 6306801449465
Option 4 ID : 6306801449464
Status : **Answered**
Chosen Option : 3

Q.2 The curved surface area of a cylindrical pillar is 528 m^2 and its volume is 3696 m^3 . Find the ratio of its radius to its height

- Ans**
- ☒ 1. 3 : 7
 - ☒ 2. 7 : 3
 - ☒ 3. 6 : 7
 - ☒ 4. 7 : 6

Question ID : 630680372051
Option 1 ID : 6306801449508
Option 2 ID : 6306801449507
Option 3 ID : 6306801449509
Option 4 ID : 6306801449510
Status : **Not Attempted and Marked For Review**
Chosen Option : --

Q.3 The diameter of the Moon is approximately one-fourth of the diameter of the Earth. What is the ratio (approximate) of their volumes?

- Ans
- ☒ 1. 64 : 1
 - ☒ 2. 1 : 64
 - ☒ 3. 1 : 8
 - ☒ 4. 1 : 8

Question ID : 630680372050

Option 1 ID : 6306801449503

Option 2 ID : 6306801449504

Option 3 ID : 6306801449505

Option 4 ID : 6306801449506

Status : Answered

Chosen Option : 2

Q.4 A cylindrical pencil sharpened at one edge is the combination of what?

- Ans
- ☒ 1. frustum of a cone and a cylinder
 - ☒ 2. two cylinders.
 - ☒ 3. a cone and a cylinder
 - ☒ 4. a hemisphere and a cylinder

Question ID : 630680372052

Option 1 ID : 6306801449513

Option 2 ID : 6306801449511

Option 3 ID : 6306801449514

Option 4 ID : 6306801449512

Status : Answered

Chosen Option : 3

Q.5 In what ratio must wheat be mixed at Rs 6 per kg to wheat at Rs 15 per kg so that mixture be worth Rs 13 per kg?

- Ans ☒ 1. 2:7
☐ 2. 3:5
☐ 3. 5:3
☐ 4. 7:2

Question ID : 630680372035
Option 1 ID : 6306801449446
Option 2 ID : 6306801449444
Option 3 ID : 6306801449445
Option 4 ID : 6306801449443
Status : Answered
Chosen Option : 1

Q.6 How many numbers between 200 and 500 are completely divisible by 2, 3 and 4?

- Ans ☐ 1. 27
☐ 2. 26
☐ 3. 24
☒ 4. 25

Question ID : 630680372033
Option 1 ID : 6306801449438
Option 2 ID : 6306801449437
Option 3 ID : 6306801449435
Option 4 ID : 6306801449436
Status : Not Attempted and Marked For Review
Chosen Option : --

Q.7 The marked price of a T- shirt is Rs 1920. The shopkeeper allows a discount of 10% and gains 8%. If no discount is allowed, his gain percent would be:

- Ans
- ☒ 1. 28%
 - ☒ 2. 20.5%
 - ☒ 3. 18.5%
 - ☒ 4. 20%

Question ID : 630680372039
Option 1 ID : 6306801449459
Option 2 ID : 6306801449462
Option 3 ID : 6306801449460
Option 4 ID : 6306801449461
Status : Answered
Chosen Option : 3

Q.8 A and B can together finish a work 15 days. They worked together for 10 days and then B left. After another 20 days, A finished the remaining work. In how many days A alone can finish the work?

- Ans
- ☒ 1. 30 days
 - ☒ 2. 55 days
 - ☒ 3. 50 days
 - ☒ 4. 60 days

Question ID : 630680372043
Option 1 ID : 6306801449475
Option 2 ID : 6306801449478
Option 3 ID : 6306801449476
Option 4 ID : 6306801449477
Status : Not Attempted and Marked For Review
Chosen Option : --

Q.9 The price of sugar is reduced by 2%. How many kilograms of sugar can now be bought for the money which was sufficient to buy 49 kg of sugar earlier?

- Ans**
- ☒ 1. 20kg
 - ☒ 2. 10kg
 - ☒ 3. 50kg
 - ☒ 4. 40kg

Question ID : 630680372037
Option 1 ID : 6306801449451
Option 2 ID : 6306801449454
Option 3 ID : 6306801449452
Option 4 ID : 6306801449453

Status : Answered

Chosen Option : 3

Q.10 What is the value of $\sqrt{1089}$?

- Ans**
- ☒ 1. 33
 - ☒ 2. 34
 - ☒ 3. 36
 - ☒ 4. 26

Question ID : 630680372032
Option 1 ID : 6306801449434
Option 2 ID : 6306801449432
Option 3 ID : 6306801449431
Option 4 ID : 6306801449433

Status : Answered

Chosen Option : 1

Q.11 Marked price of an article is Rs. 3060 and selling price is Rs. 2601. What is the discount percentage?

- Ans ☒ 1. 15 percent
- ☐ 2. 25 percent
- ☐ 3. 20 percent
- ☐ 4. 18 percent

Question ID : 630680372045
Option 1 ID : 6306801449483
Option 2 ID : 6306801449484
Option 3 ID : 6306801449485
Option 4 ID : 6306801449486
Status : Answered
Chosen Option : 1

Q.12 A cubical ice cream brick of edge 22 cm is to be distributed among some children by filling ice cream cones of radius 2 cm and height 7 cm up to its brim. How many children will get the ice cream cones?

- Ans ☐ 1. 150
- ☐ 2. 163
- ☐ 3. 263
- ☒ 4. 363

Question ID : 630680372053
Option 1 ID : 6306801449518
Option 2 ID : 6306801449517
Option 3 ID : 6306801449516
Option 4 ID : 6306801449515
Status : Answered
Chosen Option : 4

Q.13

If $\tan \theta = \frac{5}{12}$, then what is the value of $\cot (90^\circ - \theta)$?

Ans

✓ 1. $\frac{5}{12}$

✗ 2. $\frac{12}{5}$

✗ 3. $\frac{12}{13}$

✗ 4. $\frac{13}{12}$

Question ID : 630680372055

Option 1 ID : 6306801449525

Option 2 ID : 6306801449526

Option 3 ID : 6306801449523

Option 4 ID : 6306801449524

Status : Answered

Chosen Option : 1

Q.14 Three positive numbers are in the ratio 3:4:2. The sum of their squares is 2349. The average of the first two numbers is:

Ans

✓ 1. 31.5

✗ 2. 36

✗ 3. 30

✗ 4. 22.5

Question ID : 630680372034

Option 1 ID : 6306801449441

Option 2 ID : 6306801449440

Option 3 ID : 6306801449439

Option 4 ID : 6306801449442

Status : Not Attempted and
Marked For Review

Chosen Option : --

Q.15 The difference between compound interest and simple interest on an amount of Rs. 10,000 for 2 years is Rs. 144. What is the rate of interest per annum?

- Ans ☒ 1. 12%
☐ 2. 10%
☐ 3. 14%
☐ 4. 8%

Question ID : 630680372042
Option 1 ID : 6306801449474
Option 2 ID : 6306801449472
Option 3 ID : 6306801449473
Option 4 ID : 6306801449471
Status : Answered
Chosen Option : 1

Q.16 8 women can complete a work in 5 days and 8 children take 10 days to complete the work. How many days will 5 women and 6 children take to complete the work?

- Ans ☐ 1. 7 days
☐ 2. 4 days
☒ 3. 5 days
☐ 4. 6 days

Question ID : 630680372044
Option 1 ID : 6306801449481
Option 2 ID : 6306801449482
Option 3 ID : 6306801449479
Option 4 ID : 6306801449480
Status : Answered
Chosen Option : 3

Q.17 To a salt solution of 3 litres containing 40% salt, one litre of water is added. The percentage of Salt in the new solution is:

- Ans**
- ☒ 1. 40%
 - ☒ 2. 50%
 - ☒ 3. 20%
 - ☒ 4. 30%

Question ID : 630680372036
Option 1 ID : 6306801449449
Option 2 ID : 6306801449448
Option 3 ID : 6306801449447
Option 4 ID : 6306801449450
Status : **Not Attempted and Marked For Review**
Chosen Option : --

Q.18 If the income of D is 10% more than that of E and the income of E is 20% less than that of F, then the incomes of D, E, F are in the ratio :

- Ans**
- ☒ 1. 22:20:25
 - ☒ 2. 11:19:14
 - ☒ 3. 23:45:12
 - ☒ 4. 13:57:23

Question ID : 630680372041
Option 1 ID : 6306801449470
Option 2 ID : 6306801449467
Option 3 ID : 6306801449469
Option 4 ID : 6306801449468
Status : **Answered**
Chosen Option : 1

Q.19 Selling price of a table is Rs. 4284. If profit percentage is 19 percent, then what is the cost price of table?

- Ans
- ✗ 1. Rs. 4800
 - ✗ 2. Rs. 3500
 - ✗ 3. Rs. 3000
 - ✓ 4. Rs. 3600

Question ID : 630680372046
Option 1 ID : 6306801449490
Option 2 ID : 6306801449489
Option 3 ID : 6306801449487
Option 4 ID : 6306801449488
Status : Answered
Chosen Option : 4

Q.20 The system of equations $kx + 3y = 2$ and $2x + 6y = 4$ has infinitely many solution when:

- Ans
- ✗ 1. $K = 0$
 - ✗ 2. $K = 3$
 - ✓ 3. $K = 1$
 - ✗ 4. $K = 2$

Question ID : 630680372048
Option 1 ID : 6306801449498
Option 2 ID : 6306801449496
Option 3 ID : 6306801449497
Option 4 ID : 6306801449495
Status : Answered
Chosen Option : 3

Q.21 Point (4, 0) lies on the line

Ans ☒ 1. $2x - 2023y = 8$

☐ 2. $x + 2023y = 1$

☐ 3. $x - 3y = 2$

☐ 4. $x + 3y = 2$

Question ID : 630680372047

Option 1 ID : 6306801449492

Option 2 ID : 6306801449491

Option 3 ID : 6306801449493

Option 4 ID : 6306801449494

Status : Answered

Chosen Option : 1

Q.22 If $\cot \theta = \frac{12}{5}$, then what is the value of $\sin (90^\circ - \theta)$?

Ans ☐ 1. $\frac{5}{12}$

☐ 2. $\frac{13}{12}$

☐ 3. $\frac{12}{5}$

☒ 4. $\frac{12}{13}$

Question ID : 630680372056

Option 1 ID : 6306801449529

Option 2 ID : 6306801449528

Option 3 ID : 6306801449530

Option 4 ID : 6306801449527

Status : Answered

Chosen Option : 4

Q.23 The volume of the largest right circular cone that can be cut out from a cube of edge 4.2 cm is (in cm^3)

- Ans
- ☐ 1. 19
 - ☐ 2. 20.6
 - ☒ 3. 19.4
 - ☐ 4. 19.8

Question ID : 630680372054
Option 1 ID : 6306801449519
Option 2 ID : 6306801449522
Option 3 ID : 6306801449520
Option 4 ID : 6306801449521
Status : Answered
Chosen Option : 3

Q.24 If the manufacturer gains 10%, the wholesale dealer 15% and the retailer 25%, then the cost of production of an umbrella whose retail price is Rs 1265, is:

- Ans
- ☐ 1. Rs 814
 - ☒ 2. Rs 800
 - ☐ 3. Rs 834.34
 - ☐ 4. Rs 652.50

Question ID : 630680372038
Option 1 ID : 6306801449456
Option 2 ID : 6306801449457
Option 3 ID : 6306801449458
Option 4 ID : 6306801449455
Status : Answered
Chosen Option : 3

Q.25 If the volume of a sphere is $206\frac{326}{567}\text{ cm}^3$, then its radius is:

- Ans
- ☒ 1. 4 cm
 - ☒ 2. 3 cm
 - ☒ 3. $3\frac{2}{3}\text{ cm}$
 - ☒ 4. $2\frac{2}{3}\text{ cm}$

Question ID : 630680372049
Option 1 ID : 6306801449502
Option 2 ID : 6306801449499
Option 3 ID : 6306801449500
Option 4 ID : 6306801449501
Status : Not Answered
Chosen Option : --

Section : English Language (Basic Knowledge)

Q.1 Select the most appropriate option that can substitute the underlined segment in the given sentence.
I used to swim across the river when I was young.

- Ans
- ☒ 1. Could swim across
 - ☒ 2. Was swimming across
 - ☒ 3. Can swim across
 - ☒ 4. Will swim across

Question ID : 630680371963
Option 1 ID : 6306801449158
Option 2 ID : 6306801449156
Option 3 ID : 6306801449157
Option 4 ID : 6306801449155
Status : Answered
Chosen Option : 1

Q.2 Choose the most appropriate one-word substitution for “A person who is skilled in horsemanship”

- Ans ☒ 1. Equestrian
- ☐ 2. Cavalryman
- ☐ 3. Jockey
- ☐ 4. Military man

Question ID : 630680371962
Option 1 ID : 6306801449151
Option 2 ID : 6306801449153
Option 3 ID : 6306801449152
Option 4 ID : 6306801449154
Status : Answered
Chosen Option : 2

Q.3 The first thing that Gabi noticed ____ Little India was its smell. She could smell all sorts of Indian herbs and spices.

- Ans ☐ 1. it
- ☐ 2. off
- ☐ 3. while
- ☒ 4. about

Question ID : 630680371970
Option 1 ID : 6306801449185
Option 2 ID : 6306801449183
Option 3 ID : 6306801449184
Option 4 ID : 6306801449186
Status : Answered
Chosen Option : 4

Q.4 Choose the most appropriate meaning of the below quoted idiom:
“A bolt from the blue”

- Ans ☒ 1. A sudden, unexpected event
- ☐ 2. To be in a difficult situation
- ☐ 3. Expecting to attend an event
- ☐ 4. A planned and well executed event

Question ID : 630680371975
Option 1 ID : 6306801449206
Option 2 ID : 6306801449205
Option 3 ID : 6306801449204
Option 4 ID : 6306801449203
Status : Answered
Chosen Option : 1

Q.5 Choose the correct answer from below options that suits the below mentioned question:
My parents moved to a small house by the _____.

- Ans ☐ 1. seen
- ☒ 2. sea
- ☐ 3. se
- ☐ 4. see

Question ID : 630680371980
Option 1 ID : 6306801449226
Option 2 ID : 6306801449225
Option 3 ID : 6306801449224
Option 4 ID : 6306801449223
Status : Answered
Chosen Option : 2

Q.6 Select the most appropriate option that can substitute the underlined segment in the given sentence.
Today, the children__ late for their school.

- Ans ☒ 1. is
☒ 2. were
☒ 3. was
☒ 4. are

Question ID : 630680371964
Option 1 ID : 6306801449162
Option 2 ID : 6306801449161
Option 3 ID : 6306801449160
Option 4 ID : 6306801449159
Status : Answered
Chosen Option : 4

Q.7 Govind was going on a class excursion tomorrow. She was looking forward _____ it because it would be an interesting trip.

- Ans ☒ 1. To
☒ 2. From
☒ 3. Be
☒ 4. Then

Question ID : 630680371967
Option 1 ID : 6306801449173
Option 2 ID : 6306801449172
Option 3 ID : 6306801449171
Option 4 ID : 6306801449174
Status : Answered
Chosen Option : 1

Q.8 Choose the most appropriate one-word substitution for “A small name of grouped stars”

- Ans
- ☒ 1. Galaxy
 - ☒ 2. Congregation
 - ☒ 3. Cluster
 - ☒ 4. Constellation

Question ID : 630680371961
Option 1 ID : 6306801449147
Option 2 ID : 6306801449150
Option 3 ID : 6306801449148
Option 4 ID : 6306801449149
Status : Answered
Chosen Option : 4

Q.9 The last place they visited ____ returning to school was an Indian temple. The architecture of the temple was very elaborate.

- Ans
- ☒ 1. along
 - ☒ 2. from
 - ☒ 3. Before
 - ☒ 4. during

Question ID : 630680371968
Option 1 ID : 6306801449178
Option 2 ID : 6306801449175
Option 3 ID : 6306801449177
Option 4 ID : 6306801449176
Status : Answered
Chosen Option : 3

Q.10 Select the most appropriate option to complete the following sentence:
He looked at me ____ when I interrupted him.

- Ans ☒ 1. angry
☒ 2. heavily
☒ 3. angrily
☒ 4. Badly

Question ID : 630680371971
Option 1 ID : 6306801449187
Option 2 ID : 6306801449190
Option 3 ID : 6306801449188
Option 4 ID : 6306801449189
Status : Answered
Chosen Option : 3

Q.11 Choose the most logical order of the sentences from among the four given choices to construct a coherent paragraph.

The practice of damming rivers to create reservoirs has a long history, with examples dating back to Roman times. Over the years, the reasons for damming rivers have evolved, with three main purposes being human consumption, irrigation, and industrial use.

- A) Dams also help control the flow of floodwater in mountainous areas, which can destroy crops, homes, and animal and human life.
B) Rainfall is never uniform enough to provide a steady flow of water, but reservoirs can hold water for extended periods, which can be used during dry weather.
C) One of the primary advantages of damming rivers is to provide a reliable water source during droughts.
D) Dams can also retain large quantities of water for controlled use, working from sea to river and vice versa.

- Ans ☒ 1. CBAD
☒ 2. ABCD
☒ 3. BCAD
☒ 4. CDAB

Question ID : 630680371965
Option 1 ID : 6306801449163
Option 2 ID : 6306801449165
Option 3 ID : 6306801449166
Option 4 ID : 6306801449164
Status : Answered
Chosen Option : 4

Q.12 Choose the most appropriate meaning of the below mentioned word:
Voracious

- Ans ☒ 1. Complete
☐ 2. Satisfied
☐ 3. Covetous
☐ 4. Full


Question ID : 630680371976
Option 1 ID : 6306801449210
Option 2 ID : 6306801449208
Option 3 ID : 6306801449207
Option 4 ID : 6306801449209
Status : Answered
Chosen Option : 3


Q.13 Select the most appropriate option to complete the following sentence:
We were all too afraid to speak. Nobody dared ____anything.


- Ans ☐ 1. To said
☐ 2. To tell
☒ 3. to say
☐ 4. saying


Question ID : 630680371973
Option 1 ID : 6306801449195
Option 2 ID : 6306801449198
Option 3 ID : 6306801449196
Option 4 ID : 6306801449197
Status : Answered
Chosen Option : 3

Q.14 The implementation process is currently _____by internal conflicts between key public policymakers and diverging perspectives of government and global stakeholders.

Ans  1. Hindered

 2. Approved

 3. Conflicted

 4. Functioned

Question ID : 630680371969

Option 1 ID : 6306801449179

Option 2 ID : 6306801449180


Option 3 ID : 6306801449181


Option 4 ID : 6306801449182


Status : Answered


Chosen Option : 2

Q.15 Choose the answer below that spells the word in bold correctly:
The instinct to work is an integral part of human nature, and leissure only has value by contrast with work.

Ans  1. leisure

 2. leasure

 3. leisurre

 4. luzure

Question ID : 630680371979

Option 1 ID : 6306801449220

Option 2 ID : 6306801449219

Option 3 ID : 6306801449222

Option 4 ID : 6306801449221

Status : Answered

Chosen Option : 1

Q.16 Choose the most appropriate meaning of the below quoted idiom:
“Miss the boat/ bus”

- Ans
- ☐ 1. To be late for bus
 - ☐ 2. To be on time to board the bus
 - ☐ 3. To grab the opportunity on time
 - ☒ 4. To miss an opportunity

Question ID : 630680371974
Option 1 ID : 6306801449199
Option 2 ID : 6306801449200
Option 3 ID : 6306801449202
Option 4 ID : 6306801449201
Status : Answered
Chosen Option : 4

Q.17 Select the most appropriate option to complete the following sentence:
I've been invited to the party but I don't know _____ or not.

- Ans
- ☒ 1. Whether to go
 - ☐ 2. How to go
 - ☐ 3. How did go
 - ☐ 4. Whether to went

Question ID : 630680371972
Option 1 ID : 6306801449193
Option 2 ID : 6306801449191
Option 3 ID : 6306801449194
Option 4 ID : 6306801449192
Status : Answered
Chosen Option : 1

Q.18 Choose the most appropriate meaning of the below mentioned word:
Profusely

- Ans
- ☒ 1. Scant
 - ☒ 2. Ample
 - ☒ 3. Lacking
 - ☒ 4. Sparse

Question ID : 630680371977
Option 1 ID : 6306801449214
Option 2 ID : 6306801449211
Option 3 ID : 6306801449212
Option 4 ID : 6306801449213
Status : Answered
Chosen Option : 2

Q.19 Choose the correct answer from below options that suits the below mentioned
question:
She was the ____ passenger on the bus.

- Ans
- ☒ 1. sole
 - ☒ 2. slow
 - ☒ 3. soul
 - ☒ 4. so

Question ID : 630680371981
Option 1 ID : 6306801449230
Option 2 ID : 6306801449227
Option 3 ID : 6306801449228
Option 4 ID : 6306801449229
Status : Answered
Chosen Option : 1

Q.20 Choose the most logical order of the sentences from among the four given choices to construct a coherent paragraph.

Human beings experience a range of consciousness throughout their daily lives. Consciousness, the awareness of the world around us, is not always constant and can vary in intensity.

A) In contrast, high awareness is a state when the mind is strongly focused on the details of the environment.

B) Understanding the different states of consciousness is essential in assessing an individual's issues and finding solutions.

C) The state of low awareness is characterized by the inability to perceive every aspect of the surrounding world in detail, but the brain is still capable of receiving and processing signals.

D) Lack of awareness is known as unconsciousness, while being conscious but not fully present is referred to as daydreaming.

Ans  1. CADB

 2. DBCA

 3. DCAB

 4. BACD

Question ID : 630680371966

Option 1 ID : 6306801449167

Option 2 ID : 6306801449168

Option 3 ID : 6306801449169

Option 4 ID : 6306801449170

Status : **Answered**

Chosen Option : 4

Q.21 Parts of the following sentence have been given as option that contains an error in spelling. If you don't find any error, mark "No error" as your answer.

The convenience of using fiat currency, easy transactions, and high purchasing power can help keep inflation low, but the risks of inflation and citizen distrust cannot be overlooked.

- Ans
- ☒ 1. purchasing
 - ☒ 2. inflation
 - ☒ 3. No error
 - ☒ 4. convenience

Question ID : 630680371978

Option 1 ID : 6306801449217

Option 2 ID : 6306801449216

Option 3 ID : 6306801449218

Option 4 ID : 6306801449215

Status : Answered

Chosen Option : 4

Comprehension:

Read the passage and answer the given questions
The modern scientific revolution has enabled humanity to make remarkable progress in harnessing nature's power and potential for its own purposes. However, it is important to avoid assuming too easily that final and complete control is only a matter of time. In the past, progress was hindered by ignorance and superstition, but the Renaissance set thought free, and science struggled free from religion. From the 18th century onwards, discovery has followed discovery at a fantastic speed, leading to dramatic advances in technology, medicine, public health, and agriculture.

As man probes nature's laws, he seems to gain more control over nature. He can extract precious metals from ores, move earth and forests, build roads and new cities, defend himself with modern weapons, and ride the earth's surface by car, rail, bicycle, and ship. He can fly high over the earth's atmosphere, photograph the moon from a few kilometers range, and transmit the pictures instantaneously to earth. He can even move and till the earth with giant machines, use natural products as never before, and produce electricity using nuclear power.

However, it is easy to assume that man will soon master the world and eventually the universe. This assumption is a fallacy, for what man is really doing is discovering and applying the forces of nature, not inventing them. In his applications, he is merely scratching the surface. Science may probe space, but it cannot defeat the laws of time and motion. There is no foreseeable way in which man could ever venture beyond Mars, and medicine has advanced, but we still suffer from the common cold. The psychiatrist can diagnose a psychopath, but cannot cure him. The technologist can make a robot or a computer, but cannot begin to understand the human brain.

It seems that the giant intelligence we call God has set limits to man's mastery over nature. Man has not and never will master nature. Nature, in fact, gently tolerates man. The facts of man's moral nature do not give cause for optimism either. Despite all his technological advancements, man still struggles with issues such as poverty, war, and environmental degradation. Therefore, it is important to remember that while science has brought many benefits to humanity, it is crucial to recognize the limits of man's control over nature and to continue to approach scientific advancements with caution and respect for the natural world.

SubQuestion No : 22

Q.22 Identify the suitable title for the passage

- Ans ✓ 1. The Limits of Man's Mastery over Nature
- ✗ 2. Nature's Law
- ✗ 3. Technology in today's time
- ✗ 4. Science vs Man

Question ID : 630680371958
Option 1 ID : 6306801449136
Option 2 ID : 6306801449138
Option 3 ID : 6306801449135
Option 4 ID : 6306801449137
Status : Answered
Chosen Option : 1

Comprehension:

Read the passage and answer the given questions
The modern scientific revolution has enabled humanity to make remarkable progress in harnessing nature's power and potential for its own purposes. However, it is important to avoid assuming too easily that final and complete control is only a matter of time. In the past, progress was hindered by ignorance and superstition, but the Renaissance set thought free, and science struggled free from religion. From the 18th century onwards, discovery has followed discovery at a fantastic speed, leading to dramatic advances in technology, medicine, public health, and agriculture.

As man probes nature's laws, he seems to gain more control over nature. He can extract precious metals from ores, move earth and forests, build roads and new cities, defend himself with modern weapons, and ride the earth's surface by car, rail, bicycle, and ship. He can fly high over the earth's atmosphere, photograph the moon from a few kilometers range, and transmit the pictures instantaneously to earth. He can even move and till the earth with giant machines, use natural products as never before, and produce electricity using nuclear power.

However, it is easy to assume that man will soon master the world and eventually the universe. This assumption is a fallacy, for what man is really doing is discovering and applying the forces of nature, not inventing them. In his applications, he is merely scratching the surface. Science may probe space, but it cannot defeat the laws of time and motion. There is no foreseeable way in which man could ever venture beyond Mars, and medicine has advanced, but we still suffer from the common cold. The psychiatrist can diagnose a psychopath, but cannot cure him. The technologist can make a robot or a computer, but cannot begin to understand the human brain.

It seems that the giant intelligence we call God has set limits to man's mastery over nature. Man has not and never will master nature. Nature, in fact, gently tolerates man. The facts of man's moral nature do not give cause for optimism either. Despite all his technological advancements, man still struggles with issues such as poverty, war, and environmental degradation. Therefore, it is important to remember that while science has brought many benefits to humanity, it is crucial to recognize the limits of man's control over nature and to continue to approach scientific advancements with caution and respect for the natural world.

SubQuestion No : 23

Q.23 Identify the inferences drawn from the passage

- Ans
- ✗ 1. Despite all the technological advancements, man still struggles with issues such as poverty, war, and environmental degradation.
 - ✗ 2. In the past, progress was hindered by ignorance and superstition, but the Renaissance set thought free, and science struggled free from religion.
 - ✓ 3. Science has brought many benefits to humanity, it is crucial to recognize the limits of man's control over nature and to continue to approach scientific advancements with caution and respect for the natural world.
 - ✗ 4. Science may probe space, but it cannot defeat the laws of time and motion and human beings must respect that.

Question ID : 630680371960
Option 1 ID : 6306801449143
Option 2 ID : 6306801449144
Option 3 ID : 6306801449145
Option 4 ID : 6306801449146

Status : **Answered**
Chosen Option : **1**



Comprehension:

Read the passage and answer the given questions
The modern scientific revolution has enabled humanity to make remarkable progress in harnessing nature's power and potential for its own purposes. However, it is important to avoid assuming too easily that final and complete control is only a matter of time. In the past, progress was hindered by ignorance and superstition, but the Renaissance set thought free, and science struggled free from religion. From the 18th century onwards, discovery has followed discovery at a fantastic speed, leading to dramatic advances in technology, medicine, public health, and agriculture.

As man probes nature's laws, he seems to gain more control over nature. He can extract precious metals from ores, move earth and forests, build roads and new cities, defend himself with modern weapons, and ride the earth's surface by car, rail, bicycle, and ship. He can fly high over the earth's atmosphere, photograph the moon from a few kilometers range, and transmit the pictures instantaneously to earth. He can even move and till the earth with giant machines, use natural products as never before, and produce electricity using nuclear power.

However, it is easy to assume that man will soon master the world and eventually the universe. This assumption is a fallacy, for what man is really doing is discovering and applying the forces of nature, not inventing them. In his applications, he is merely scratching the surface. Science may probe space, but it cannot defeat the laws of time and motion. There is no foreseeable way in which man could ever venture beyond Mars, and medicine has advanced, but we still suffer from the common cold. The psychiatrist can diagnose a psychopath, but cannot cure him. The technologist can make a robot or a computer, but cannot begin to understand the human brain.

It seems that the giant intelligence we call God has set limits to man's mastery over nature. Man has not and never will master nature. Nature, in fact, gently tolerates man. The facts of man's moral nature do not give cause for optimism either. Despite all his technological advancements, man still struggles with issues such as poverty, war, and environmental degradation. Therefore, it is important to remember that while science has brought many benefits to humanity, it is crucial to recognize the limits of man's control over nature and to continue to approach scientific advancements with caution and respect for the natural world.

SubQuestion No : 24

Q.24 What is the meaning of “Ignorance”?

- Ans
- ☐ 1. Awareness
 - ☐ 2. Familiar
 - ☒ 3. Unawareness
 - ☐ 4. Experience

Question ID : 630680371959
Option 1 ID : 6306801449139
Option 2 ID : 6306801449142
Option 3 ID : 6306801449141
Option 4 ID : 6306801449140

Status : Answered
Chosen Option : 3

Comprehension:

Read the passage and answer the given questions
The modern scientific revolution has enabled humanity to make remarkable progress in harnessing nature's power and potential for its own purposes. However, it is important to avoid assuming too easily that final and complete control is only a matter of time. In the past, progress was hindered by ignorance and superstition, but the Renaissance set thought free, and science struggled free from religion. From the 18th century onwards, discovery has followed discovery at a fantastic speed, leading to dramatic advances in technology, medicine, public health, and agriculture.

As man probes nature's laws, he seems to gain more control over nature. He can extract precious metals from ores, move earth and forests, build roads and new cities, defend himself with modern weapons, and ride the earth's surface by car, rail, bicycle, and ship. He can fly high over the earth's atmosphere, photograph the moon from a few kilometers range, and transmit the pictures instantaneously to earth. He can even move and till the earth with giant machines, use natural products as never before, and produce electricity using nuclear power.

However, it is easy to assume that man will soon master the world and eventually the universe. This assumption is a fallacy, for what man is really doing is discovering and applying the forces of nature, not inventing them. In his applications, he is merely scratching the surface. Science may probe space, but it cannot defeat the laws of time and motion. There is no foreseeable way in which man could ever venture beyond Mars, and medicine has advanced, but we still suffer from the common cold. The psychiatrist can diagnose a psychopath, but cannot cure him. The technologist can make a robot or a computer, but cannot begin to understand the human brain.

It seems that the giant intelligence we call God has set limits to man's mastery over nature. Man has not and never will master nature. Nature, in fact, gently tolerates man. The facts of man's moral nature do not give cause for optimism either. Despite all his technological advancements, man still struggles with issues such as poverty, war, and environmental degradation. Therefore, it is important to remember that while science has brought many benefits to humanity, it is crucial to recognize the limits of man's control over nature and to continue to approach scientific advancements with caution and respect for the natural world.

SubQuestion No : 25

Q.25 Identify the central theme of the passage

- Ans
- ✗ 1. The modern scientific revolution has enabled humanity to make remarkable progress in harnessing nature's power and potential for its own purposes.
 - ✗ 2. With the recent technological advancements it is safe to assume that man will soon master the world and eventually the universe.
 - ✗ 3. Nature tolerates man a lot. The facts of man's moral nature do not give cause for optimism either. Despite all his technological advancements, man still struggles issues such as poverty, war, and environmental degradation
 - ✓ 4. Scientific and technological advancements have enabled humans to recognize its limitation over nature and continue its approach with keeping nature in its mind.

Question ID : 630680371957
Option 1 ID : 6306801449133
Option 2 ID : 6306801449132
Option 3 ID : 6306801449131
Option 4 ID : 6306801449134

Status : **Answered**
Chosen Option : **3**

