

DELHI DEVELOPMENT AUTHORITY
RECRUITMENT CELL
VIKAS SADAN, INA, NEW DELHI - 110023
<https://www.dda.gov.in>

Advertisement No. 02/2023/Recdt. Cell/Pers./DDA

Participant ID	
Participant Name	
Test Center Name	
Test Date	22/09/2023
Test Time	5:30 PM - 6:30 PM
Subject	Junior Secretariat Assistant

Section : General Intelligence

Adda247

Test Prime

ALL EXAMS, ONE SUBSCRIPTION



1,00,000+
Mock Tests



**Personalised
Report Card**



**Unlimited
Re-Attempt**



600+
Exam Covered



25,000+ Previous
Year Papers



500%
Refund



ATTEMPT FREE MOCK NOW

Q.1 After interchanging the which two numbers, the value of the given equation will be '17'?

$6 \times 2 + 7 - 8 \div 1$

Ans ☒ 1. 7 and 8

☒ 2. 6 and 7

☒ 3. 8 and 2

☒ 4. 8 and 6

Question ID : 630680372390

Option 1 ID : 6306801450856

Option 2 ID : 6306801450858

Option 3 ID : 6306801450855

Option 4 ID : 6306801450857

Status : Answered

Chosen Option : 4

Q.2 A series is given with one term missing. Select the correct alternative from the given ones that will complete the series.
MRM, JML, GHK, DCJ, ?

Ans ☒ 1. AXI

☒ 2. AMG

☒ 3. ATS

☒ 4. ANR

Question ID : 630680372381

Option 1 ID : 6306801450820

Option 2 ID : 6306801450821

Option 3 ID : 6306801450819

Option 4 ID : 6306801450822

Status : Answered

Chosen Option : 1

Q.3 In the following question, select the missing number from the given series.
49, 58, 40, 67, 31, ?

- Ans ☒ 1. 75
☒ 2. 70
☒ 3. 76
☒ 4. 78

Question ID : 630680372393
Option 1 ID : 6306801450868
Option 2 ID : 6306801450867
Option 3 ID : 6306801450870
Option 4 ID : 6306801450869
Status : Answered
Chosen Option : 3

Q.4 What is the approximate value of 516% of $799.67 + (11.20)^2 + 18.99$?

- Ans ☒ 1. 4936
☒ 2. 5012
☒ 3. 5177
☒ 4. 4268

Question ID : 630680372396
Option 1 ID : 6306801450881
Option 2 ID : 6306801450882
Option 3 ID : 6306801450880
Option 4 ID : 6306801450879
Status : Answered
Chosen Option : 1

Q.5 A series is given with one term missing. Select the correct alternative from the given ones that will complete the series.
QMRS, JHIH, CCZW, VXQL, ?

- Ans ☒ 1. NMRO
☒ 2. OMNO
☒ 3. PQNO
☒ 4. OSHA

Question ID : 630680372382
Option 1 ID : 6306801450823
Option 2 ID : 6306801450825
Option 3 ID : 6306801450826
Option 4 ID : 6306801450824
Status : Answered
Chosen Option : 4

Q.6 In the following question, four letter pairs are given. The letters on left side of (–) is related to the letters on the right side of (–) with some Logic/Rule/Relation. Three are similar on basis of same Logic/Rule/Relation. Select the odd one out from the given alternatives.

- Ans ☒ 1. FLPS – DJNQ
☒ 2. GKMP – EHKN
☒ 3. ZFJM – XDHK
☒ 4. PVZC – NTXA

Question ID : 630680372389
Option 1 ID : 6306801450853
Option 2 ID : 6306801450851
Option 3 ID : 6306801450854
Option 4 ID : 6306801450852
Status : Answered
Chosen Option : 2

Q.7 Eight persons R1, R2, R3, R4, R5, R6, R7 and R8 live on eight different floors such as lowermost floor is numbered as 1, floor above it is numbered as 2 and so on till top floor which is numbered as 8.
R3 lives on an even numbered floor. Only three people live between R3 and R4. Only five persons live between R8 and R5, and both (R8 and R5) live on odd numbered floors.R8 lives above R3. Both R6 and R7 live above R1. R6 lives above R7. R8 lives above R2. Three persons live between R1 and R2.R2 lives on an even numbered floor. How many persons live between R5 and R7?

- Ans**
- ☒ 1. 3
 - ☒ 2. 1
 - ☒ 3. 2
 - ☒ 4. 0

Question ID : 630680372377
Option 1 ID : 6306801450804
Option 2 ID : 6306801450806
Option 3 ID : 6306801450803
Option 4 ID : 6306801450805
Status : **Not Attempted and Marked For Review**
Chosen Option : --

Q.8 In the following question, four letter pairs are given. The letters on left side of (–) is related to the letters on the right side of (–) with some Logic/Rule/Relation. Three are similar on basis of same Logic/Rule/Relation. Select the odd one out from the given alternatives.

- Ans**
- ☒ 1. CR – RC
 - ☒ 2. SH – HS
 - ☒ 3. EX – XC
 - ☒ 4. IW – WI

Question ID : 630680372388
Option 1 ID : 6306801450849
Option 2 ID : 6306801450848
Option 3 ID : 6306801450850
Option 4 ID : 6306801450847
Status : **Answered**
Chosen Option : 3

Q.9 In a certain code language, 'PAPER' is written as '56761', 'PEN' is written as '697', 'PRINT' is written as '03619'. What is the code for 'A' in that code language?

- Ans
- ☒ 1. 1
 - ☒ 2. 5
 - ☒ 3. 7
 - ☒ 4. 6

Question ID : 630680372384
Option 1 ID : 6306801450834
Option 2 ID : 6306801450833
Option 3 ID : 6306801450832
Option 4 ID : 6306801450831
Status : Answered
Chosen Option : 2

Q.10 In the following question, select the related letter pair from the given alternatives.
PSV : QTW :: ?

- Ans
- ☒ 1. BPD : LON
 - ☒ 2. CBA : XUV
 - ☒ 3. FJN : GKO
 - ☒ 4. LBM : XOM

Question ID : 630680372387
Option 1 ID : 6306801450843
Option 2 ID : 6306801450844
Option 3 ID : 6306801450846
Option 4 ID : 6306801450845
Status : Answered
Chosen Option : 3

Q.11 Select the option that is related to the fifth number cluster in the same way as the second number cluster is related to the first number cluster and fourth number cluster is related to third number cluster.
6 : 42 :: 11 : 132 :: 5 : ?

- Ans ☒ 1. 30
☐ 2. 25
☐ 3. 24
☐ 4. 20

Question ID : 630680372399
Option 1 ID : 6306801450894
Option 2 ID : 6306801450893
Option 3 ID : 6306801450891
Option 4 ID : 6306801450892
Status : Answered
Chosen Option : 1

Q.12 Six workers P, Q, R, S, T and U are sitting around a circular table facing opposite to the centre (not necessarily in the same order). P is second to the right of S. T is second to the left of S. S is the immediate neighbour of both U and Q. R is second to the left of Q. Who is second to the left of R?

- Ans ☐ 1. S
☐ 2. T
☐ 3. Q
☒ 4. U

Question ID : 630680372375
Option 1 ID : 6306801450797
Option 2 ID : 6306801450798
Option 3 ID : 6306801450796
Option 4 ID : 6306801450795
Status : Answered
Chosen Option : 4

Q.13 In the following question, select the related letters from the given alternatives.
TS : UU :: FI : ?

- Ans
- ☒ 1. GT
 - ☒ 2. ER
 - ☒ 3. GK
 - ☒ 4. HU

Question ID : 630680372386
Option 1 ID : 6306801450839
Option 2 ID : 6306801450842
Option 3 ID : 6306801450841
Option 4 ID : 6306801450840
Status : Answered
Chosen Option : 3

Q.14 If '+' means '÷', '÷' means '×', '×' means '-' and '-' means '+', then $50 - 16 \times 4 \div 8 + 16 =$?

- Ans
- ☒ 1. 68
 - ☒ 2. 50
 - ☒ 3. 64
 - ☒ 4. 78

Question ID : 630680372398
Option 1 ID : 6306801450890
Option 2 ID : 6306801450887
Option 3 ID : 6306801450888
Option 4 ID : 6306801450889
Status : Answered
Chosen Option : 3

Q.15 If '+' means 'x', 'x' means '-', '-' means '÷' and '÷' means '+', then $15 \times 5 + 6 \div 20 - 2 = ?$

Ans ☒ 1. -5

☐ 2. -8

☐ 3. 0

☐ 4. 10

Question ID : 630680372397

Option 1 ID : 6306801450883

Option 2 ID : 6306801450886

Option 3 ID : 6306801450885

Option 4 ID : 6306801450884

Status : Answered

Chosen Option : 1

Q.16 In the following question below are given some statements followed by some conclusions based on those statements. Taking the given statements to be true even if they seem to be at variance from commonly known facts. Read all the conclusions and then decide which of the given conclusion logically follows the given statements.

Statements:

I. Some shirt are red.

II. No red is jeans.

Conclusion:

I. No jeans is shirt.

II. Some jeans are not red.

Ans ☐ 1. Both conclusions I and II follows

☒ 2. Only conclusion II follows

☐ 3. Only conclusion I follows

☐ 4. Neither conclusion follows

Question ID : 630680372391

Option 1 ID : 6306801450860

Option 2 ID : 6306801450861

Option 3 ID : 6306801450859

Option 4 ID : 6306801450862

Status : Answered

Chosen Option : 2

Q.17 In the following question below are given some statements followed by some conclusions based on those statements. Taking the given statements to be true even if they seem to be at variance from commonly known facts. Read all the conclusions and then decide which of the given conclusion logically follows the given statements.

Statements:

- I. Some P are F.
- II. Some F are N.

Conclusion:

- I. No N is F.
- II. Some P are N.

- Ans
- ☒ 1. Only conclusion II follows
 - ☒ 2. Only conclusion I follows
 - ☒ 3. Both conclusions I and II follows
 - ☒ 4. Neither conclusion follows

Question ID : 630680372379
Option 1 ID : 6306801450812
Option 2 ID : 6306801450811
Option 3 ID : 6306801450813
Option 4 ID : 6306801450814
Status : Answered
Chosen Option : 4

Q.18 In the following question, select the missing number from the given series.
4, 11, 36, 103, 316, ?

- Ans
- ☒ 1. 960
 - ☒ 2. 961
 - ☒ 3. 939
 - ☒ 4. 959

Question ID : 630680372394
Option 1 ID : 6306801450873
Option 2 ID : 6306801450874
Option 3 ID : 6306801450871
Option 4 ID : 6306801450872
Status : Not Attempted and Marked For Review
Chosen Option : --

Q.19 In the following question below are given some statements followed by some conclusions based on those statements. Taking the given statements to be true even if they seem to be at variance from commonly known facts. Read all the conclusions and then decide which of the given conclusion logically follows the given statements.

Statements:

I. Some car are black.

II. No black is road.

Conclusion:

I. No road is car.

II. Some road are not black.

- Ans ☒ 1. Only conclusion I follows
- ☒ 2. Neither conclusion follows
- ☒ 3. Only conclusion II follows
- ☒ 4. Both conclusions I and II follows

Question ID : 630680372392
Option 1 ID : 6306801450863
Option 2 ID : 6306801450865
Option 3 ID : 6306801450866
Option 4 ID : 6306801450864
Status : Answered
Chosen Option : 3

Q.20 Consider the five three letter words given below and the answer the questions based on it.

(Left) ILN UBH LJL XSB SVO (Right)

If the 2nd and 4th word from the left end interchanges their positions then what will be the 2nd letter of the 4th word from the right end in the newly formed group of words?

- Ans ☒ 1. S
- ☒ 2. V
- ☒ 3. J
- ☒ 4. B

Question ID : 630680372383
Option 1 ID : 6306801450828
Option 2 ID : 6306801450830
Option 3 ID : 6306801450829
Option 4 ID : 6306801450827
Status : Answered
Chosen Option : 1

Q.21 In a certain code language, 'CMBNA' is written as '85301', 'NMAE' is written as '0186', 'BALL' is written as '7157'. What is the code for 'B' in that code language?

- Ans
- ☒ 1. 1
 - ☒ 2. 7
 - ☒ 3. 5
 - ☒ 4. 3

Question ID : 630680372385
Option 1 ID : 6306801450838
Option 2 ID : 6306801450836
Option 3 ID : 6306801450837
Option 4 ID : 6306801450835
Status : Answered
Chosen Option : 2

Q.22 In the following question below are given some statements followed by some conclusions based on those statements. Taking the given statements to be true even if they seem to be at variance from commonly known facts. Read all the conclusions and then decide which of the given conclusion logically follows the given statements.

- Statements:
- I. All spoon are cup.
 - II. Some plate are spoon.
- Conclusion:
- I. Some cup are plate.
 - II. No plate is cup.
 - III. Some cup are not spoon.

- Ans
- ☒ 1. Both conclusions I and II follows
 - ☒ 2. Only conclusion I follows
 - ☒ 3. Only conclusion II follows
 - ☒ 4. Both conclusions II and III follows

Question ID : 630680372380
Option 1 ID : 6306801450816
Option 2 ID : 6306801450818
Option 3 ID : 6306801450817
Option 4 ID : 6306801450815
Status : Answered
Chosen Option : 2

Q.23 Five plays S1, S2, S3, S4 and S5 are to be staged from Monday to Friday of a week. On each day, only one play will be staged. S4 and S5 should not be the first or last to be staged. S5 should be staged immediately before S3. S2 should be staged immediately after S4. One play is staged between S1 and S2. How many plays are staged between S1 and S5?

- Ans
- ☒ 1. 1
 - ☒ 2. 2
 - ☒ 3. 3
 - ☒ 4. 0

Question ID : 630680372378
Option 1 ID : 6306801450810
Option 2 ID : 6306801450808
Option 3 ID : 6306801450809
Option 4 ID : 6306801450807
Status : Answered
Chosen Option : 2

Q.24 What is the approximate value of $(21.01)^2 \times 5.891 \div 5.99 + (15.007)^3 - 1180.2$?

- Ans
- ☒ 1. 2636
 - ☒ 2. 2128
 - ☒ 3. 2254
 - ☒ 4. 1908

Question ID : 630680372395
Option 1 ID : 6306801450876
Option 2 ID : 6306801450877
Option 3 ID : 6306801450878
Option 4 ID : 6306801450875
Status : Not Attempted and Marked For Review
Chosen Option : --

Q.25 Seven workers W1, W2, W3, W4, W5, W6 and W7 are sitting in a row facing towards the south (not necessarily in the same order). W5 is at one of the end. W1 is fifth to the right of W5. W2 is not the immediate neighbour of W1 or W5. W3 is third to the right of W2. Only W4 is sitting between W1 and W2. Only two workers are sitting between W4 and W6.
Which of the following statement(s) is/are correct?
I. W4 is second to the right of W7.
II. W1 is to the immediate left of W3.

- Ans
- ☒ 1. Neither I nor II
 - ☒ 2. Only II
 - ☒ 3. Both I and II
 - ☒ 4. Only I

Question ID : 630680372376
Option 1 ID : 6306801450802
Option 2 ID : 6306801450800
Option 3 ID : 6306801450801
Option 4 ID : 6306801450799
Status : Answered
Chosen Option : 3

Section : General Awareness

Q.1 Which team was the winner of the Squash World Cup 2023?

- Ans
- ☒ 1. Japan
 - ☒ 2. Malaysia
 - ☒ 3. Egypt
 - ☒ 4. Australia

Question ID : 630680372350
Option 1 ID : 6306801450697
Option 2 ID : 6306801450696
Option 3 ID : 6306801450695
Option 4 ID : 6306801450698
Status : Not Attempted and Marked For Review
Chosen Option : --

Q.2 Opportunity cost is often called the _____.

- Ans
- ☒ 1. revenue cost
 - ☒ 2. total cost
 - ☒ 3. economic cost
 - ☒ 4. production cost

Question ID : 630680372355
Option 1 ID : 6306801450718
Option 2 ID : 6306801450716
Option 3 ID : 6306801450715
Option 4 ID : 6306801450717

Status : Not Attempted and
Marked For Review

Chosen Option : --

Q.3 Which of the following statement is correct with respect to the ruler Timur?
I. He ruled in Iran, Iraq and modern-day Turkey.
II. He died in 1414.

- Ans
- ☒ 1. Neither I nor II
 - ☒ 2. Both I and II
 - ☒ 3. Only I
 - ☒ 4. Only II

Question ID : 630680372362
Option 1 ID : 6306801450746
Option 2 ID : 6306801450745
Option 3 ID : 6306801450743
Option 4 ID : 6306801450744

Status : Answered

Chosen Option : 2

Q.4 Salman Rushdie won the Booker Prize in 1981 for which of the following books?

- Ans ☒ 1. Midnight Children
- ☐ 2. The Inheritance of Loss
- ☐ 3. The God of Small Things
- ☐ 4. In a Free State

Question ID : 630680372363
Option 1 ID : 6306801450747
Option 2 ID : 6306801450750
Option 3 ID : 6306801450748
Option 4 ID : 6306801450749
Status : Answered
Chosen Option : 3

Q.5 In January 2023, Air India announced to use _____ software to enhance safety management and for the status of in-flight incidents.

- Ans ☐ 1. Safesite
- ☒ 2. Coruson
- ☐ 3. Workhub
- ☐ 4. SpheraCloud

Question ID : 630680372352
Option 1 ID : 6306801450705
Option 2 ID : 6306801450704
Option 3 ID : 6306801450706
Option 4 ID : 6306801450703
Status : Not Attempted and Marked For Review
Chosen Option : --

Q.6 The region which is a major source of water and forest wealth in India is _____.

- Ans
- ☐ 1. The coastal plains
 - ☐ 2. The plateau regions
 - ☐ 3. The northern plains
 - ☒ 4. The mountain regions

Question ID : 630680372369
Option 1 ID : 6306801450774
Option 2 ID : 6306801450773
Option 3 ID : 6306801450772
Option 4 ID : 6306801450771
Status : Answered
Chosen Option : 3

Q.7 As per Census 2011, the literacy rate for females in India is _____.

- Ans
- ☒ 1. 64.63 percent
 - ☐ 2. 78.9 percent
 - ☐ 3. 72.98 percent
 - ☐ 4. 80.9 percent

Question ID : 630680372372
Option 1 ID : 6306801450783
Option 2 ID : 6306801450785
Option 3 ID : 6306801450784
Option 4 ID : 6306801450786
Status : Answered
Chosen Option : 3

Q.8 Tusu Parab is celebrated in which of the following states of India?

- Ans ☒ 1. Jharkhand
- ☐ 2. Tripura
- ☐ 3. Punjab
- ☐ 4. Telangana

Question ID : 630680372367
Option 1 ID : 6306801450764
Option 2 ID : 6306801450766
Option 3 ID : 6306801450763
Option 4 ID : 6306801450765
Status : Not Attempted and Marked For Review
Chosen Option : --

Q.9 Which among the following languages does not belongs to the Indo-Aryan language family?

- Ans ☒ 1. Savara
- ☐ 2. Urdu
- ☐ 3. Halabi
- ☐ 4. Sindhi

Question ID : 630680372365
Option 1 ID : 6306801450758
Option 2 ID : 6306801450757
Option 3 ID : 6306801450755
Option 4 ID : 6306801450756
Status : Answered
Chosen Option : 2

Q.10 As per Census 2011, which among the following states has male-female sex ratio below 900?

- I. Punjab
- II. Rajasthan

- Ans
- ☒ 1. Both I and II
 - ☒ 2. Neither I nor II
 - ☒ 3. Only II
 - ☒ 4. Only I

Question ID : 630680372373
Option 1 ID : 6306801450789
Option 2 ID : 6306801450790
Option 3 ID : 6306801450788
Option 4 ID : 6306801450787
Status : Not Attempted and Marked For Review
Chosen Option : --

Q.11 Vetti tax that was not taken in cash, is mentioned in which of the following dynasty inscriptions?

- Ans
- ☒ 1. Chola
 - ☒ 2. Chalukya
 - ☒ 3. Gupta
 - ☒ 4. Pallava

Question ID : 630680372360
Option 1 ID : 6306801450737
Option 2 ID : 6306801450735
Option 3 ID : 6306801450736
Option 4 ID : 6306801450738
Status : Not Attempted and Marked For Review
Chosen Option : --

Q.12 Commercial paper was introduced in India in _____.

- Ans ☒ 1. 1995
- ☒ 2. 1990
- ☒ 3. 1989
- ☒ 4. 1997

Question ID : 630680372356
Option 1 ID : 6306801450720
Option 2 ID : 6306801450722
Option 3 ID : 6306801450721
Option 4 ID : 6306801450719

Status : Not Attempted and
Marked For Review

Chosen Option : --

Q.13 Due to intense heating of Tibetan plateau during summer results in the formation of low pressure over the plateau at about _____ km above sea level.

- Ans ☒ 1. 1
- ☒ 2. 13
- ☒ 3. 6
- ☒ 4. 9

Question ID : 630680372370
Option 1 ID : 6306801450775
Option 2 ID : 6306801450778
Option 3 ID : 6306801450776
Option 4 ID : 6306801450777

Status : Answered

Chosen Option : 3

Q.14 Which of the following statements is correct regarding Mahila Nidhi scheme?
I. This scheme has been introduced by Rajasthan Government.
II. This scheme will facilitate crediting of loans up to Rs 40,000 within 48 hours, and above Rs 40,000 within 15 days.

- Ans ☒ 1. Only I
☒ 2. Both I and II
☒ 3. Neither I nor II
☒ 4. Only II

Question ID : 630680372354
Option 1 ID : 6306801450711
Option 2 ID : 6306801450713
Option 3 ID : 6306801450714
Option 4 ID : 6306801450712
Status : Answered
Chosen Option : 1

Q.15 Which among the following statements is correct regarding Mizo language?
I. It belongs to Sino-Tibetan language family.
II. It is also known as Lushai.

- Ans ☒ 1. Neither I nor II
☒ 2. Both I and II
☒ 3. Only I
☒ 4. Only II

Question ID : 630680372366
Option 1 ID : 6306801450762
Option 2 ID : 6306801450761
Option 3 ID : 6306801450759
Option 4 ID : 6306801450760
Status : Not Attempted and Marked For Review
Chosen Option : --

Q.16 Which of the following pairs of ‘festival – state’ is correctly matched?

- I. Hareli – Assam
- II. Garia – Tripura

- Ans
- ☒ 1. Both I and II
 - ☒ 2. Only II
 - ☒ 3. Only I
 - ☒ 4. Neither I nor II

Question ID : 630680372368
Option 1 ID : 6306801450769
Option 2 ID : 6306801450768
Option 3 ID : 6306801450767
Option 4 ID : 6306801450770
Status : Not Attempted and Marked For Review
Chosen Option : --

Q.17 Which of the following statements is correct regarding the Satyashodhak Samaj?
I. It was established by Jyotirao Phule.
II. It was established in the Pune district of Maharashtra, in 1873.

- Ans
- ☒ 1. Neither I nor II
 - ☒ 2. Only I
 - ☒ 3. Both I and II
 - ☒ 4. Only II

Question ID : 630680372359
Option 1 ID : 6306801450734
Option 2 ID : 6306801450731
Option 3 ID : 6306801450733
Option 4 ID : 6306801450732
Status : Answered
Chosen Option : 3

Q.18 The Simon Commission arrived in India in _____.

- Ans
- ☐ 1. 1938
 - ☐ 2. 1924
 - ☐ 3. 1934
 - ☒ 4. 1928

Question ID : 630680372357
Option 1 ID : 6306801450726
Option 2 ID : 6306801450723
Option 3 ID : 6306801450725
Option 4 ID : 6306801450724
Status : Answered
Chosen Option : 4

Q.19 Which of the following pairs of 'player – sports' is correctly matched?
I. Elavenil Valarivan - Chess
II. Tarun Dhillon - Para Badminton

- Ans
- ☒ 1. Only II
 - ☐ 2. Neither I nor II
 - ☐ 3. Both I and II
 - ☐ 4. Only I

Question ID : 630680372351
Option 1 ID : 6306801450700
Option 2 ID : 6306801450702
Option 3 ID : 6306801450701
Option 4 ID : 6306801450699
Status : Not Attempted and Marked For Review
Chosen Option : --

Q.20 Which of the following gland produces insulin hormone in human body?

- Ans ☒ 1. Thyroid
- ☒ 2. Pancreas
- ☒ 3. Thymus
- ☒ 4. Adrenaline

Question ID : 630680372374
Option 1 ID : 6306801450793
Option 2 ID : 6306801450794
Option 3 ID : 6306801450792
Option 4 ID : 6306801450791
Status : Answered
Chosen Option : 2

Q.21 Which of the following statement is correct?
I. There is no definite time for trees to shed their leaves in tropical evergreen forest.
II. The moist deciduous forests are found in areas having rainfall between 70 cm and 100 cm.

- Ans ☒ 1. Neither I nor II
- ☒ 2. Only I
- ☒ 3. Both I and II
- ☒ 4. Only II

Question ID : 630680372371
Option 1 ID : 6306801450782
Option 2 ID : 6306801450779
Option 3 ID : 6306801450781
Option 4 ID : 6306801450780
Status : Answered
Chosen Option : 4

Q.22 Who among the following rulers ruled over Delhi from 1296 to 1316?

- Ans
- ☒ 1. Ghiasuddin Balban
 - ☒ 2. Jalaluddin Khalji
 - ☒ 3. Alauddin Khalji
 - ☒ 4. Ghiasuddin Tughluq

Question ID : 630680372361
Option 1 ID : 6306801450741
Option 2 ID : 6306801450739
Option 3 ID : 6306801450742
Option 4 ID : 6306801450740
Status : Answered
Chosen Option : 3

Q.23 Tipu Sultan died in _____.

- Ans
- ☒ 1. 1793
 - ☒ 2. 1802
 - ☒ 3. 1799
 - ☒ 4. 1796

Question ID : 630680372358
Option 1 ID : 6306801450727
Option 2 ID : 6306801450730
Option 3 ID : 6306801450729
Option 4 ID : 6306801450728
Status : Not Attempted and Marked For Review
Chosen Option : --

Q.24 Who won the Sahitya Akademi Award 2022 for Hindi language?

Ans ☒ 1. Nand Kishore Acharya

☒ 2. Badri Narayan

☒ 3. Rashmi Choudhury

☒ 4. Veena Gupta

Question ID : 630680372364

Option 1 ID : 6306801450753

Option 2 ID : 6306801450754

Option 3 ID : 6306801450752

Option 4 ID : 6306801450751

Status : Answered

Chosen Option : 2

Q.25 PARAKH has been set up as the organisation under _____.

Ans ☒ 1. NCERT

☒ 2. AICTE

☒ 3. UGC

☒ 4. UPSC

Question ID : 630680372353

Option 1 ID : 6306801450707

Option 2 ID : 6306801450708

Option 3 ID : 6306801450709

Option 4 ID : 6306801450710

Status : Answered

Chosen Option : 1

Section : Quantitative Aptitude (Basic Arithmetic Skill)

Q.1 The average of six boys is 3.52. The average of two of them is 3.7, while the average of other two is 2.5. What is the average of the remaining two?

- Ans** ☒ 1. 4.36
☐ 2. 45
☐ 3. 5.2
☐ 4. 3.7

Question ID : 630680372402
Option 1 ID : 6306801450903
Option 2 ID : 6306801450905
Option 3 ID : 6306801450906
Option 4 ID : 6306801450904
Status : Answered
Chosen Option : 1

Q.2 The size of the wooden block is $3 \times 6 \times 10 \text{ cm}^3$. How many such blocks will be required to construct a solid wooden cube of minimum size?

- Ans** ☐ 1. 140
☐ 2. 160
☐ 3. 120
☒ 4. 150

Question ID : 630680372417
Option 1 ID : 6306801450965
Option 2 ID : 6306801450966
Option 3 ID : 6306801450964
Option 4 ID : 6306801450963
Status : Answered
Chosen Option : 3

Q.3 A large cube is formed from the material obtained by melting three smaller cubes of 1, 6 and 8 cm side. What is the ratio of the total surface areas of the smaller cubes and the large cube?

- Ans**
- ☒ 1. 81 : 110
 - ☒ 2. 81:101
 - ☒ 3. 110 : 81
 - ☒ 4. 101 : 81

Question ID : 630680372418
Option 1 ID : 6306801450968
Option 2 ID : 6306801450970
Option 3 ID : 6306801450967
Option 4 ID : 6306801450969
Status : **Not Attempted and Marked For Review**
Chosen Option : --

Q.4 Anurag Sold a watch to Bholu at 20% gain and Bholu sold it to Chandu at a loss of 10%. If Chandu bought the watch for ₹ 216, at what price did Anurag purchase it?

- Ans**
- ☒ 1. ₹ 176
 - ☒ 2. ₹ 200
 - ☒ 3. ₹216
 - ☒ 4. ₹ 250

Question ID : 630680372406
Option 1 ID : 6306801450922
Option 2 ID : 6306801450921
Option 3 ID : 6306801450920
Option 4 ID : 6306801450919
Status : **Answered**
Chosen Option : 2

Q.5 What is the value of $\sqrt{13225}$?

- Ans ☒ 1. 115
☐ 2. 125
☐ 3. 145
☐ 4. 135

Question ID : 630680372400
Option 1 ID : 6306801450898
Option 2 ID : 6306801450897
Option 3 ID : 6306801450895
Option 4 ID : 6306801450896
Status : Answered
Chosen Option : 1

Q.6 A cuboidal cake of edge 22 cm is to be filled with cream up to its edge of radius 2 cm and height 7 cm and is to be distributed among some children. How many children will get cream?

- Ans ☐ 1. 150
☒ 2. 363
☐ 3. 163
☐ 4. 263

Question ID : 630680372422
Option 1 ID : 6306801450986
Option 2 ID : 6306801450983
Option 3 ID : 6306801450985
Option 4 ID : 6306801450984
Status : Answered
Chosen Option : 2

Q.7 The area of a circular land is 13.86 hectares. Find the cost of fencing it at the rate of ₹4.40 per metre.

- Ans**
- ☒ 1. ₹ 9800
 - ☒ 2. ₹5808
 - ☒ 3. ₹6000
 - ☒ 4. ₹ 7500

Question ID : 630680372421
Option 1 ID : 6306801450982
Option 2 ID : 6306801450981
Option 3 ID : 6306801450980
Option 4 ID : 6306801450979
Status : Answered
Chosen Option : 2

Q.8 The ratio of the number of students studying in schools x, y and z is 5:6:8. If the number of students in each of the schools is increased by 30%, 25% and 25% respectively, what will be the new ratio of the students in schools x, y and z?

- Ans**
- ☒ 1. 15:25:20
 - ☒ 2. 13:15:20
 - ☒ 3. 20:15:13
 - ☒ 4. 15:13:20

Question ID : 630680372409
Option 1 ID : 6306801450934
Option 2 ID : 6306801450931
Option 3 ID : 6306801450932
Option 4 ID : 6306801450933
Status : Answered
Chosen Option : 2

Q.9 How many copper rods, each of length 14 m and diameter 10 cm can be made out of 1.43 cubic meters of copper.

- Ans**
- ☒ 1. 14
 - ☒ 2. 12
 - ☒ 3. 13
 - ☒ 4. 15

Question ID : 630680372420
Option 1 ID : 6306801450975
Option 2 ID : 6306801450977
Option 3 ID : 6306801450976
Option 4 ID : 6306801450978
Status : Answered
Chosen Option : 3

Q.10 T is 25 percent more efficient than U. If U alone can finish a work in 50 days, then in how many days will T alone finish the same work?

- Ans**
- ☒ 1. 48 days
 - ☒ 2. 45 days
 - ☒ 3. 35 days
 - ☒ 4. 40 days

Question ID : 630680372414
Option 1 ID : 6306801450954
Option 2 ID : 6306801450952
Option 3 ID : 6306801450951
Option 4 ID : 6306801450953
Status : Answered
Chosen Option : 4

Q.11 In what ratio water be mixed with milk to gain 5% by selling the mixture at cost price?

- Ans ☒ 1. 1 : 50
☒ 2. 50 : 1
☒ 3. 1 : 51
☒ 4. 51 : 1

Question ID : 630680372403

Option 1 ID : 6306801450908

Option 2 ID : 6306801450907

Option 3 ID : 6306801450910

Option 4 ID : 6306801450909

Status : **Not Attempted and
Marked For Review**

Chosen Option : --

Q.12 Solving $x + y = 3$ and, $x - y = 5$, we have value of y as

- Ans ☒ 1. -1
☒ 2. 2
☒ 3. -2
☒ 4. 1

Question ID : 630680372415

Option 1 ID : 6306801450956

Option 2 ID : 6306801450958

Option 3 ID : 6306801450955

Option 4 ID : 6306801450957

Status : **Answered**

Chosen Option : 1

Q.13 If each edge of a cube is increased by 25% find the percentage increase in its volume

Ans

✓ 1. $95\frac{20}{64}$

✗ 2. $95\frac{10}{64}$

✗ 3. $195\frac{20}{64}$

✗ 4. $195\frac{10}{64}$

Question ID : 630680372419

Option 1 ID : 6306801450973

Option 2 ID : 6306801450971

Option 3 ID : 6306801450972

Option 4 ID : 6306801450974

Status : **Not Attempted and Marked For Review**

Chosen Option : --

Q.14 A charger is listed at Rs 1500 and a discount of 20% is offered on the list price. What additional discount must be offered to the Shubham to bring the net price to ₹1104?

Ans

✗ 1. 25%

✓ 2. 8%

✗ 3. 12%

✗ 4. 10%

Question ID : 630680372407

Option 1 ID : 6306801450924

Option 2 ID : 6306801450923

Option 3 ID : 6306801450925

Option 4 ID : 6306801450926

Status : **Answered**

Chosen Option : 2

Q.15 Point (3, 3) lies on the line

Ans ☒ 1. $2x = y$

☒ 2. $x = -y$

☒ 3. $x = y$

☒ 4. $x = 2y$

Question ID : 630680372416

Option 1 ID : 6306801450961

Option 2 ID : 6306801450960

Option 3 ID : 6306801450959

Option 4 ID : 6306801450962

Status : Answered

Chosen Option : 3

Q.16 If $\cos\theta = 5/13$, then what is the value of $\sin(90^\circ - \theta)$?

Ans ☒ 1. $\frac{13}{12}$

☒ 2. $\frac{13}{5}$

☒ 3. $\frac{12}{13}$

☒ 4. $\frac{5}{13}$

Question ID : 630680372423

Option 1 ID : 6306801450987

Option 2 ID : 6306801450989

Option 3 ID : 6306801450988

Option 4 ID : 6306801450990

Status : Answered

Chosen Option : 4

Q.17 Ripe fruits contains 68% water and dry fruit contains 20% water. How much dry fruit can be obtained from 100 kg of ripe fruits?

- Ans**
- ☒ 1. 35kg
 - ☒ 2. 50Kg
 - ☒ 3. 20kg
 - ☒ 4. 40kg

Question ID : 630680372405

Option 1 ID : 6306801450916

Option 2 ID : 6306801450918

Option 3 ID : 6306801450915

Option 4 ID : 6306801450917

Status : Answered

Chosen Option : 4

Q.18 If $\sec \theta = \frac{13}{12}$, then what is the value of $\operatorname{cosec} \theta$?

- Ans**
- ☒ 1. $\frac{5}{13}$
 - ☒ 2. $\frac{13}{12}$
 - ☒ 3. $\frac{12}{13}$
 - ☒ 4. $\frac{13}{5}$

Question ID : 630680372424

Option 1 ID : 6306801450993

Option 2 ID : 6306801450992

Option 3 ID : 6306801450991

Option 4 ID : 6306801450994

Status : Answered

Chosen Option : 4

Q.19 The compound interest on a certain sum for a years at 20% per annum is Rs. 750. The simple interest on the same sum for double the time at half the rate percent per annum is:

- Ans**
- ✗ 1. ₹775
 - ✗ 2. ₹ 700
 - ✗ 3. ₹625
 - ✓ 4. ₹750

Question ID : 630680372410
Option 1 ID : 6306801450937
Option 2 ID : 6306801450935
Option 3 ID : 6306801450938
Option 4 ID : 6306801450936
Status : **Not Attempted and Marked For Review**
Chosen Option : --

Q.20 A can do a piece of work in 5 hours; B and C together can do it in 2 hours, while A and C together can do it in 3 hours. How long will B alone take to do it?

- Ans**
- ✗ 1. $8\frac{2}{11}$ days
 - ✓ 2. $2\frac{8}{11}$ days
 - ✗ 3. $3\frac{7}{11}$ days
 - ✗ 4. $8\frac{6}{11}$ days

Question ID : 630680372411
Option 1 ID : 6306801450942
Option 2 ID : 6306801450939
Option 3 ID : 6306801450940
Option 4 ID : 6306801450941
Status : **Answered**
Chosen Option : 2

Q.21 How many numbers between 100 and 400 are completely divisible by 4 and 5?

- Ans
- ☐ 1. 15
 - ☒ 2. 14
 - ☐ 3. 17
 - ☐ 4. 16

Question ID : 630680372401
Option 1 ID : 6306801450900
Option 2 ID : 6306801450899
Option 3 ID : 6306801450902
Option 4 ID : 6306801450901
Status : Answered
Chosen Option : 1

Q.22 Road tax is increased by 20% and its consumption is decreased by 20%. The increase or decrease in the expenditure is :

- Ans
- ☐ 1. 4% increase
 - ☐ 2. 5% decrease
 - ☐ 3. 5% increase
 - ☒ 4. 4% decrease

Question ID : 630680372404
Option 1 ID : 6306801450913
Option 2 ID : 6306801450911
Option 3 ID : 6306801450914
Option 4 ID : 6306801450912
Status : Answered
Chosen Option : 4

Q.23 A can finish a work in 12 days and B can do the same work in 16 days. B worked for 8 days and left the job. In how many days, A alone can finish the remaining work?

- Ans**
- ☐ 1. 5 days
 - ☒ 2. 6 days
 - ☐ 3. 7 days
 - ☐ 4. 4 days

Question ID : 630680372412
Option 1 ID : 6306801450943
Option 2 ID : 6306801450944
Option 3 ID : 6306801450945
Option 4 ID : 6306801450946
Status : Answered
Chosen Option : 2

Q.24 If $0.4 : 1.4 :: 1.4 : z$, then $z = ?$

- Ans**
- ☐ 1. 0.49
 - ☐ 2. 49
 - ☒ 3. 4.9
 - ☐ 4. 0.4

Question ID : 630680372408
Option 1 ID : 6306801450928
Option 2 ID : 6306801450927
Option 3 ID : 6306801450930
Option 4 ID : 6306801450929
Status : Answered
Chosen Option : 3

Q.25 A trader buys two pens for Rs 3200 each article. If he earns a profit of 10 percent on one and loses 30 percent on the other, then what will be his overall loss percentage?

- Ans
- ☐ 1. 6 percent
 - ☐ 2. 5 percent
 - ☒ 3. 10 percent
 - ☐ 4. 8 percent

Question ID : 630680372413
Option 1 ID : 6306801450950
Option 2 ID : 6306801450949
Option 3 ID : 6306801450948
Option 4 ID : 6306801450947
Status : Answered
Chosen Option : 3

Section : English Language (Basic Knowledge)

Q.1 Choose the most appropriate meaning of the below quoted idiom:
“Back to square one”

- Ans
- ☐ 1. To destroy something
 - ☒ 2. Start over all again
 - ☐ 3. To finish something on time
 - ☐ 4. To keep repeating mistakes

Question ID : 630680372343
Option 1 ID : 6306801450669
Option 2 ID : 6306801450670
Option 3 ID : 6306801450667
Option 4 ID : 6306801450668
Status : Answered
Chosen Option : 2

Q.2 The old proverb about teaching people to fish so they can eat for a lifetime, rather than gifting a fish that lasts just a day, also applies to how organizations can _____, rather than merely help, disadvantaged groups.

- Ans ☒ 1. fail
- ☒ 2. empower
- ☒ 3. allow
- ☒ 4. diversity

Question ID : 630680372337
Option 1 ID : 6306801450644
Option 2 ID : 6306801450643
Option 3 ID : 6306801450646
Option 4 ID : 6306801450645
Status : Answered
Chosen Option : 1

Q.3 Select the most appropriate option to complete the following sentence:
Tom doesn't take risks when he's driving. He's always _____.

- Ans ☒ 1. patiently
- ☒ 2. suddenly
- ☒ 3. careful
- ☒ 4. carefully

Question ID : 630680372339
Option 1 ID : 6306801450654
Option 2 ID : 6306801450653
Option 3 ID : 6306801450652
Option 4 ID : 6306801450651
Status : Answered
Chosen Option : 3

Q.4 Choose the most appropriate one-word substitution for “A paper written in one’s own handwriting”

- Ans
- ☐ 1. Parchment
 - ☐ 2. Transcript
 - ☐ 3. Scroll
 - ☒ 4. Manuscript

Question ID : 630680372329
Option 1 ID : 6306801450614
Option 2 ID : 6306801450612
Option 3 ID : 6306801450611
Option 4 ID : 6306801450613
Status : Answered
Chosen Option : 4

Q.5 Choose the most appropriate meaning of the below quoted idiom: “Once bitten, twice shy”

- Ans
- ☐ 1. Excited to try something new
 - ☐ 2. Need to do something urgently
 - ☐ 3. To be in a hurry to do something
 - ☒ 4. Afraid of doing something again

Question ID : 630680372342
Option 1 ID : 6306801450663
Option 2 ID : 6306801450664
Option 3 ID : 6306801450666
Option 4 ID : 6306801450665
Status : Answered
Chosen Option : 4

Q.6 Choose the most logical order of the sentences from among the four given choices to construct a coherent paragraph.

The pursuit of scientific knowledge has played a significant role in shaping our understanding of the world around us. Yet, the notion that science can provide a final answer to all of life's questions is a misguided one.

A) Science is but one way of studying the world, and its limitations must be acknowledged. By exploring different approaches and disciplines, we can gain a more complete understanding of the world around us.

B) The notion that science is solely responsible for answering life's most profound questions is a reductionist one.

C) Science is but one way of studying the universe, and while it has made significant contributions to our understanding of the world, it is not the only approach.

D) While scientific inquiry has contributed immensely to our understanding of the universe, it is only one of many approaches to comprehending the complexities of existence.

Ans  1. BCAD

 2. DBCA

 3. CDAB

 4. DACB

Question ID : 630680372333

Option 1 ID : 6306801450630

Option 2 ID : 6306801450627

Option 3 ID : 6306801450628

Option 4 ID : 6306801450629

Status : Answered

Chosen Option : 4

Q.7 Choose the correct answer from below options that suits the below mentioned question:

Add more_____ if the dough is too sticky.

Ans ☒ 1. flour

☐ 2. flor

☐ 3. floor

☐ 4. flower

Question ID : 630680372348

Option 1 ID : 6306801450689

Option 2 ID : 6306801450688

Option 3 ID : 6306801450690

Option 4 ID : 6306801450687

Status : Answered

Chosen Option : 1

Q.8 Choose the most appropriate meaning of the below mentioned word:
Evident

Ans ☒ 1. Obvious

☐ 2. Hidden

☐ 3. Impossible

☐ 4. Unlikely

Question ID : 630680372344

Option 1 ID : 6306801450674

Option 2 ID : 6306801450672

Option 3 ID : 6306801450673

Option 4 ID : 6306801450671

Status : Answered

Chosen Option : 1

Q.9 Select the most appropriate option that can substitute the underlined segment in the given sentence.
He was very anxious _____ the outcome of the interview.

- Ans
- ☒ 1. of
 - ☒ 2. if
 - ☒ 3. about
 - ☒ 4. for

Question ID : 630680372332
Option 1 ID : 6306801450623
Option 2 ID : 6306801450626
Option 3 ID : 6306801450625
Option 4 ID : 6306801450624
Status : Answered
Chosen Option : 1

Q.10 Choose the most appropriate one-word substitution for “One who talks continuously”

- Ans
- ☒ 1. Voracious
 - ☒ 2. Silent
 - ☒ 3. Loquacious
 - ☒ 4. Reserved

Question ID : 630680372330
Option 1 ID : 6306801450617
Option 2 ID : 6306801450618
Option 3 ID : 6306801450615
Option 4 ID : 6306801450616
Status : Answered
Chosen Option : 3

Q.11 Choose the most logical order of the sentences from among the four given choices to construct a coherent paragraph.

Over the last few decades, Far Eastern countries have undergone rapid industrial development. This has ranged from nations with no prior experience in the field to more advanced states like Japan and Singapore.

- A) This development should lead to better healthcare facilities, schools and colleges, sports facilities, and other amenities.
- B) Most countries possess natural resources such as oil, timber, minerals, and gemstones, which they have exploited by importing foreign expertise and equipment.
- C) The result has been a significant increase in countries' GNP, favorable balances of trade, and hard currencies that attract foreign investment.
- D) The availability of good wages should permit radical improvements in living standards.

- Ans ☒ 1. BCAD
- ☐ 2. ABCD
- ☐ 3. BACD
- ☐ 4. CADB

Question ID : 630680372334
Option 1 ID : 6306801450632
Option 2 ID : 6306801450633
Option 3 ID : 6306801450634
Option 4 ID : 6306801450631
Status : Answered
Chosen Option : 1

Q.12 Select the most appropriate option to complete the following sentence:
We've got a new computer in our office. I haven't learnt how _____ it yet.

- Ans ☐ 1. using
- ☐ 2. To used
- ☒ 3. to use
- ☐ 4. Start using

Question ID : 630680372341
Option 1 ID : 6306801450659
Option 2 ID : 6306801450661
Option 3 ID : 6306801450660
Option 4 ID : 6306801450662
Status : Answered
Chosen Option : 3

Q.13 Everyone's eyes lit _____ at the fantastic idea.

- Ans
- ☐ 1. in
 - ☐ 2. along
 - ☐ 3. on
 - ☒ 4. up

Question ID : 630680372336
Option 1 ID : 6306801450639
Option 2 ID : 6306801450642
Option 3 ID : 6306801450640
Option 4 ID : 6306801450641
Status : Answered
Chosen Option : 4

Q.14 Select the most appropriate option that can substitute the underlined segment in the given sentence.
Don't disturb the boy, he prepares for his examination.

- Ans
- ☐ 1. Would prepare
 - ☒ 2. is preparing
 - ☐ 3. Was preparing
 - ☐ 4. prepared

Question ID : 630680372331
Option 1 ID : 6306801450619
Option 2 ID : 6306801450622
Option 3 ID : 6306801450620
Option 4 ID : 6306801450621
Status : Answered
Chosen Option : 2

Q.15 Choose the answer below that spells the word in bold correctly:
Wood has been the basic material used for shelter since **premitive** times.

- Ans
- ☒ 1. pramative
 - ☒ 2. primitive
 - ☒ 3. preemitive
 - ☒ 4. primitiveee

Question ID : 630680372347
Option 1 ID : 6306801450683
Option 2 ID : 6306801450684
Option 3 ID : 6306801450685
Option 4 ID : 6306801450686
Status : Answered
Chosen Option : 2

Q.16 Select the most appropriate option to complete the following sentence:
She doesn't allow _____ in the house.

- Ans
- ☒ 1. smoking
 - ☒ 2. To smoking
 - ☒ 3. Are smoking
 - ☒ 4. smoke

Question ID : 630680372340
Option 1 ID : 6306801450657
Option 2 ID : 6306801450655
Option 3 ID : 6306801450658
Option 4 ID : 6306801450656
Status : Answered
Chosen Option : 1

Q.17 Despite the crowd, the boys still went in. It was so difficult to find ____ empty spot in the pool.

- Ans
- ☐ 1. at
 - ☐ 2. in
 - ☐ 3. off
 - ☒ 4. an

Question ID : 630680372335
Option 1 ID : 6306801450635
Option 2 ID : 6306801450638
Option 3 ID : 6306801450636
Option 4 ID : 6306801450637
Status : Answered
Chosen Option : 4

Q.18 Parts of the following sentence have been given as option that contains an error in spelling. If you don't find any error, mark "No error" as your answer.
The spread of common criminality can be attributed to the abandonment of religion and morelity and the weakening of the family system.

- Ans
- ☐ 1. No error
 - ☐ 2. attributed
 - ☒ 3. morelity
 - ☐ 4. criminality

Question ID : 630680372346
Option 1 ID : 6306801450682
Option 2 ID : 6306801450681
Option 3 ID : 6306801450679
Option 4 ID : 6306801450680
Status : Answered
Chosen Option : 4

Q.19 Choose the most appropriate meaning of the below mentioned word:
Anonymous

- Ans ☒ 1. Identified
☒ 2. Undisclosed
☒ 3. Renown
☒ 4. Popular

Question ID : 630680372345
Option 1 ID : 6306801450676
Option 2 ID : 6306801450675
Option 3 ID : 6306801450677
Option 4 ID : 6306801450678
Status : Answered
Chosen Option : 2

Q.20 Choose the correct answer from below options that suits the below mentioned
question:
He released the brake, and the tractor slowly moved ____.


- Ans ☒ 1. forward
☒ 2. foward
☒ 3. foreword
☒ 4. toward

Question ID : 630680372349
Option 1 ID : 6306801450694
Option 2 ID : 6306801450692
Option 3 ID : 6306801450691
Option 4 ID : 6306801450693
Status : Answered
Chosen Option : 1

Q.21 New Jersey is a really big and busy city. This place seems to be bustling _____ activity at all times of the day and night.

- Ans
- ☐ 1. between
 - ☐ 2. at
 - ☐ 3. while
 - ☒ 4. with

Question ID : 630680372338
Option 1 ID : 6306801450649
Option 2 ID : 6306801450647
Option 3 ID : 6306801450648
Option 4 ID : 6306801450650
Status : Answered
Chosen Option : 4



Comprehension:

Read the following passage and answer the given questions:
Human beings experience a range of consciousness throughout their daily lives. Consciousness, the awareness of the world around us, is not always constant and can vary in intensity. Lack of awareness is known as unconsciousness, while being conscious but not fully present is referred to as daydreaming. Understanding the different states of consciousness is essential in assessing an individual's issues and finding solutions. The state of low awareness is characterized by the inability to perceive every aspect of the surrounding world in detail, but the brain is still capable of receiving and processing signals. For example, when overwhelmed by incoming information, a person may still be able to perceive and respond to their name being called out.

In contrast, high awareness is a state when the mind is strongly focused on the details of the environment. It is characterized by being an active participant in an activity or conversation, with the body inclined towards the other person, and the eyes open wider than regular. Daydreaming is a type of consciousness that allows people to think about unrelated thoughts. The effects of daydreaming can vary, with personally meaningful daydreaming increasing motivation. During personally meaningful daydreaming, an individual's breathing becomes more relaxed, and their awareness of their surroundings lowers.

Sleep is another state of consciousness where a person experiences a lower level of awareness, but the brain remains active. During sleep, the brain cycles through stages known as rapid eye movement (REM) and non-REM. The presence of these stages indicates brain activity, even though the individual may not be aware of their body's behavior during this time. Understanding the different states of consciousness is crucial in assessing an individual's issues and finding solutions. For example, if a person experiences difficulty sleeping, understanding the different stages of sleep can aid in finding the root cause of the problem. Additionally, being aware of when an individual is not fully present during a conversation can help improve communication and understanding between people.

In conclusion, human beings experience various states of consciousness, each with their unique characteristics. Understanding the different states of consciousness can help in addressing an individual's problems and finding solutions.

SubQuestion No : 22

Q.22 Identify the suitable title for the passage

- Ans
- ☒ 1. Low awareness vs high awareness
 - ☒ 2. The Significance of Understanding Different States of Consciousness
 - ☒ 3. Human beings vs consciousness
 - ☒ 4. Consciousness: A stigma to society

Question ID : 630680372326
Option 1 ID : 6306801450599
Option 2 ID : 6306801450600
Option 3 ID : 6306801450602
Option 4 ID : 6306801450601
Status : Answered

Chosen Option : 3



Comprehension:

Read the following passage and answer the given questions:
Human beings experience a range of consciousness throughout their daily lives. Consciousness, the awareness of the world around us, is not always constant and can vary in intensity. Lack of awareness is known as unconsciousness, while being conscious but not fully present is referred to as daydreaming. Understanding the different states of consciousness is essential in assessing an individual's issues and finding solutions. The state of low awareness is characterized by the inability to perceive every aspect of the surrounding world in detail, but the brain is still capable of receiving and processing signals. For example, when overwhelmed by incoming information, a person may still be able to perceive and respond to their name being called out.

In contrast, high awareness is a state when the mind is strongly focused on the details of the environment. It is characterized by being an active participant in an activity or conversation, with the body inclined towards the other person, and the eyes open wider than regular. Daydreaming is a type of consciousness that allows people to think about unrelated thoughts. The effects of daydreaming can vary, with personally meaningful daydreaming increasing motivation. During personally meaningful daydreaming, an individual's breathing becomes more relaxed, and their awareness of their surroundings lowers.

Sleep is another state of consciousness where a person experiences a lower level of awareness, but the brain remains active. During sleep, the brain cycles through stages known as rapid eye movement (REM) and non-REM. The presence of these stages indicates brain activity, even though the individual may not be aware of their body's behavior during this time. Understanding the different states of consciousness is crucial in assessing an individual's issues and finding solutions. For example, if a person experiences difficulty sleeping, understanding the different stages of sleep can aid in finding the root cause of the problem. Additionally, being aware of when an individual is not fully present during a conversation can help improve communication and understanding between people.

In conclusion, human beings experience various states of consciousness, each with their unique characteristics. Understanding the different states of consciousness can help in addressing an individual's problems and finding solutions.

SubQuestion No : 23

Q.23 Identify the central theme of the passage

- Ans
- ☒ 1. The state of low awareness is characterized by the inability to perceive every aspect of the surrounding world in detail, but the brain is still capable of receiving and processing signals.
 - ☒ 2. Understanding the different states of consciousness is crucial in assessing an individual's issues and finding solutions.
 - ☒ 3. Human beings experience a range of consciousness throughout their daily lives.
 - ☒ 4. Consciousness, the awareness of the world around us, is not always constant and can vary in intensity.

Question ID : 630680372325
Option 1 ID : 6306801450596
Option 2 ID : 6306801450598
Option 3 ID : 6306801450597

Option 4 ID : 6306801450595
Status : **Marked For Review**
Chosen Option : 3



Comprehension:

Read the following passage and answer the given questions:
Human beings experience a range of consciousness throughout their daily lives. Consciousness, the awareness of the world around us, is not always constant and can vary in intensity. Lack of awareness is known as unconsciousness, while being conscious but not fully present is referred to as daydreaming. Understanding the different states of consciousness is essential in assessing an individual's issues and finding solutions. The state of low awareness is characterized by the inability to perceive every aspect of the surrounding world in detail, but the brain is still capable of receiving and processing signals. For example, when overwhelmed by incoming information, a person may still be able to perceive and respond to their name being called out.





In contrast, high awareness is a state when the mind is strongly focused on the details of the environment. It is characterized by being an active participant in an activity or conversation, with the body inclined towards the other person, and the eyes open wider than regular. Daydreaming is a type of consciousness that allows people to think about unrelated thoughts. The effects of daydreaming can vary, with personally meaningful daydreaming increasing motivation. During personally meaningful daydreaming, an individual's breathing becomes more relaxed, and their awareness of their surroundings lowers.

Sleep is another state of consciousness where a person experiences a lower level of awareness, but the brain remains active. During sleep, the brain cycles through stages known as rapid eye movement (REM) and non-REM. The presence of these stages indicates brain activity, even though the individual may not be aware of their body's behavior during this time. Understanding the different states of consciousness is crucial in assessing an individual's issues and finding solutions. For example, if a person experiences difficulty sleeping, understanding the different stages of sleep can aid in finding the root cause of the problem. Additionally, being aware of when an individual is not fully present during a conversation can help improve communication and understanding between people.

In conclusion, human beings experience various states of consciousness, each with their unique characteristics. Understanding the different states of consciousness can help in addressing an individual's problems and finding solutions.

SubQuestion No : 24

Q.24 Identify the inferences drawn from the passage

- Ans  1. During personally meaningful daydreaming, an individual's breathing becomes more relaxed, and their awareness of their surroundings lowers.
-  2. Understanding the different states of consciousness can help in addressing an individual's problems and finding solutions.
-  3. Lack of awareness is known as unconsciousness, while being conscious but not fully present is referred to as daydreaming.
-  4. Being aware of when an individual is not fully present during a conversation can help improve communication and understanding between people.

Question ID : 630680372328
Option 1 ID : 6306801450610
Option 2 ID : 6306801450609
Option 3 ID : 6306801450608

Option 4 ID : 6306801450607
Status : **Answered**
Chosen Option : 2



Comprehension:

Read the following passage and answer the given questions:
Human beings experience a range of consciousness throughout their daily lives. Consciousness, the awareness of the world around us, is not always constant and can vary in intensity. Lack of awareness is known as unconsciousness, while being conscious but not fully present is referred to as daydreaming. Understanding the different states of consciousness is essential in assessing an individual's issues and finding solutions. The state of low awareness is characterized by the inability to perceive every aspect of the surrounding world in detail, but the brain is still capable of receiving and processing signals. For example, when overwhelmed by incoming information, a person may still be able to perceive and respond to their name being called out.

In contrast, high awareness is a state when the mind is strongly focused on the details of the environment. It is characterized by being an active participant in an activity or conversation, with the body inclined towards the other person, and the eyes open wider than regular. Daydreaming is a type of consciousness that allows people to think about unrelated thoughts. The effects of daydreaming can vary, with personally meaningful daydreaming increasing motivation. During personally meaningful daydreaming, an individual's breathing becomes more relaxed, and their awareness of their surroundings lowers.

Sleep is another state of consciousness where a person experiences a lower level of awareness, but the brain remains active. During sleep, the brain cycles through stages known as rapid eye movement (REM) and non-REM. The presence of these stages indicates brain activity, even though the individual may not be aware of their body's behavior during this time. Understanding the different states of consciousness is crucial in assessing an individual's issues and finding solutions. For example, if a person experiences difficulty sleeping, understanding the different stages of sleep can aid in finding the root cause of the problem. Additionally, being aware of when an individual is not fully present during a conversation can help improve communication and understanding between people.

In conclusion, human beings experience various states of consciousness, each with their unique characteristics. Understanding the different states of consciousness can help in addressing an individual's problems and finding solutions.

SubQuestion No : 25

Q.25 What is the meaning of “perceive”?

- Ans ☒ 1. Notice
- ☐ 2. Neglect
- ☐ 3. reject
- ☐ 4. Ignore

Question ID : 630680372327
Option 1 ID : 6306801450605
Option 2 ID : 6306801450604
Option 3 ID : 6306801450606
Option 4 ID : 6306801450603
Status : Answered

Chosen Option : 1

