

# VIDEO COURSES

for Government Exams



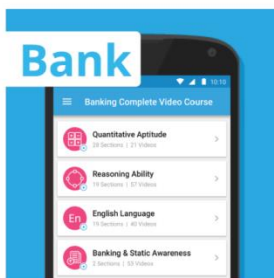
From the oldest and most trusted name in Exam Preparation which gave us Career Power, Bankersadda, Sscadda, here is the latest offering – Video Courses that are tailor-made for the Govt. Job aspirants of digital India. Various banking and SSC exams are conducted online with regular changes to exam pattern and level of questions. We understand the changing needs of the students and have devised a unique solution, making preparation easy, cost-effective and efficient.

Video courses for banking and SSC consist of exhaustive video lectures for government exams which are pre-loaded on an SD card. We offer these courses in two variants: [Android Tab + SD-Card] or [SD Card only]. The SD Card can be run on your personal android device as well. The video courses will run on the Adda247 mobile app, the number one App for Bank and SSC exam preparation.

## What you get?



## Available Courses



Banking Complete Video Course



Maths Video Course for SSC Exams



Maths + English Video Course for SSC Exams



SSC Complete Video Course

To Purchase visit : [elearning.adda247.com](http://elearning.adda247.com)

For any query : Call us at +91-90691 42412 • Email us at [elearning@adda247.com](mailto:elearning@adda247.com)

**Directions (1-5): Answer the questions on the basis of the information given below.**

Six kids- Z, X, C, V, B and N- watch different Cartoon serials on their TV viz. Ducktails, Doremon, Shinchain, Baloo, Chota beem and Hanuman - and they live on six different floors of a building, numbered 1 to 6. Ground floor is numbered as 1 and topmost floor is numbered as 6. They like six different Cartoon Characters viz. Dholu, Sizuka, Munni, Lui, Jiyan and Pumba, not necessarily in a same order. Each Cartoon serial is cast on a different day from Monday to Saturday. X likes Jiyan and Cartoon serial which is liked by him is Doremon and X lives on the 6th floor of the building. B and Z live on even numbered floors and their favorite cartoons cast on Saturday and Monday respectively. The one who watch Ducktails lives on the lowest floor and it is cast on Tuesday. Baloo Cartoon serial watched by that kid who lives on the floor which is just below X and it is cast on Thursday. The kid who watches Hanuman likes Pumba and his cartoon is cast on Monday. N likes Lui and no one lives below N. One of the kids who watches Cartoon serials which cast on Friday lives on even numbered floors. V lives below C and he likes Munni. B, who doesn't live just below C, likes Dholu and his favourite serial cast on Saturday. The kid who likes Chota beem lives on an even numbered floor.

**Q1. Who is watching Ducktails cartoon serial?**

- (a) Z
- (b) N
- (c) V
- (d) X
- (e) C

**Q2. Which Character does B like?**

- (a) Pumba
- (b) Jiyan
- (c) Dholu
- (d) Lui
- (e) Sizuka

**Q3. Who among the following watch that cartoon which is cast on Thursday?**

- (a) V
- (b) N
- (c) Z
- (d) X
- (e) C

**Q4. If V is related to C and B is related to Z, in the same way N is related to?**

- (a) X
- (b) N
- (c) Z
- (d) V
- (e) C



An advertisement for SSC CGL TIER II Mock Test Booklets. It features the Adda247 logo at the top, the SSC logo, and the text 'SSC CGL TIER II Maths &amp; English @399/- Mock Test Booklets 10 TEST BOOKLETS (PRINTED TEST) Bilingual'.

**Q5. Which of the following combination is correct?**

- (a) V - Shinchain - Sizuka
- (b) C - Baloo - Munni
- (c) Z - Chota beem - Pumba
- (d) X - Doremon - Dholu
- (e) N - Ducktails - Lui

**Directions (6-10): Study the following information carefully to answer the given questions.**

A word and number arrangement machine when given an input line of words and numbers rearranges them following a particular rule in each step. The following is an illustration of input and rearrangement.

**Input:** technology 58 causing 29 problems 31 62 80 society erosion 17 relations

**Step I:** erosion technology 58 causing 29 problems 31 62 society 17 relations 80

**Step II:** erosion relations technology 58 causing 29 problems 62 society 17 80 31

**Step III:** erosion relations causing technology 58 29 problems society 17 80 31 62

**Step IV:** erosion relations causing society technology 58 problems 17 80 31 62 29

**Step V:** erosion relations causing society technology problems 17 80 31 62 29 58

**Step VI:** erosion relations causing society technology problems 80 31 62 29 58 17

Step VI is the last step of given Input machine. From above example we have to find the logic and then solve the next questions.

**Input:** fast 29 pain 19 32 strong 78 makes 64 emotion victory 23

**Q6. Which of the following will be the penultimate step?**

- (a) Step VI
- (b) Step V
- (c) Step IV
- (d) Step III
- (e) None of these

**Q7. What will be the position of 'strong' in the last but one step?**

- (a) Seventh from the left
- (b) Seventh from the right
- (c) Eight from the left
- (d) Fifth from the left
- (e) None of these

**Q8. Which word/number would be at fourth from the right end in Step IV?**

- (a) strong
- (b) 78
- (c) 32
- (d) victory
- (e) None of these

**Q9. After how many steps no further rearrangement of words is possible?**

- (a) Five
- (b) Four
- (c) Six
- (d) Seven
- (e) Eight

**Q10. What will be the position of fast in step IV?**

- (a) Sixth from right
- (b) Seventh from right
- (c) Seventh from left
- (d) Fifth from left
- (e) None of these

**Directions (11-15): Study the following information carefully and answer the given questions.**

Eight friends regularly going for musical class where they learn to play different type of musical instruments. Eight friends are AG, OG, LG, SU, NO, GO, JO and KG who are sitting around a square table in such a way that four of them sit at four corners while four sit in the middle of each of the four sides for playing different musical instruments, but not necessarily in the same order. Each one of them play different instruments viz. Guitar, Piano, Sitar, Drum, Mouthorgan, Violin, Harmonium and Chello. The one who sit in the middle of the sides face the centre while those who sit at the four corners face outside. (i.e. opposite to the centre).

JO sits third to the right of NO. The one who faces the centre plays Guitar instrument. NO sits on one of the corners of the table. OG does not play Piano. The one who plays Sitar instrument is one of the immediate neighbours of GO.

The one who plays Guitar instrument sits immediate left of the person who plays Sitar instrument. Only one person sits between SU and JO. OG is one of the immediate neighbours of SU. The one who faces the outside of the centre plays Mouthorgan instrument.

The one who plays Drum faces the JO. The persons who play Harmonium and Violin sit next to each other. NO does not play Mouthorgan. LG sits second to the right of OG. Only three persons sit between OG and AG.

KG sits to the immediate right of AG. The persons who play Piano and Mouthorgan sit on the corners and opposite to each other. The person who plays Harmonium sits immediate right of the person who plays Chello.

**Q11. Who among the following plays Sitar?**

- (a) OG
- (b) LG
- (c) SU
- (d) NO
- (e) AG



**IBPS SPECIAL COMBO 2017**

with Video Solutions

**360 TOTAL TESTS**

- 150 Full Length Mocks
- 210 Practice Sets Bilingual
- E-Books, Study Notes etc.

**Q12. Four of the following five are alike in a certain way based on the given arrangement and so form a group. Which is the one that does not belong to that group?**

- (a) LG, AG
- (b) AG, NO
- (c) LG, OG
- (d) OG, SU
- (e) None of the above

**Q13. What is the position of AG with respect to the one who plays Mouthorgan instrument?**

- (a) Third to the right
- (b) Second to the right
- (c) Immediate left
- (d) Third to the left
- (e) Fourth to the left

**Q14. Who among the following sits between LG and the one who plays Harmonium instrument when counted anticlockwise from LG?**

- (a) SU
- (b) AG
- (c) NO
- (d) The one who plays Chello
- (e) GO

**Q15. Which of the following statements is true regarding JO?**

- (a) JO face outside
- (b) JO plays Drum
- (c) JO sits immediate left of the person who plays Harmonium
- (d) There are two people sit between JO and GO.
- (e) None of the Above

**Directions (16-20): Each of the questions below consists of a question and two or three statements numbered I and II or III given below it. You have to decide whether the data provided in the statements are sufficient to answer the question. Read both the statements and give answer**

**Q16. Who among Kamla, Vimla, Madhuri and Sanjul is the heaviest?**

**I.** Vimla is heavier than Sanjul.

**II.** Kamla is not as heavy as either Madhuri or Vimla.

**III.** Sanjul is neither the heaviest nor the lightest.

- (a) If the data in statement I alone are sufficient to answer the question.
- (b) If the data in both the statements II and II together are necessary to answer the question.
- (c) If the data in both the statements I and III together are necessary to answer the question
- (d) If the data in both the statements I, II and III together are necessary to answer the question
- (e) Can't be determined



**Q17. On which day of the week from Monday to Sunday did Ronit leave for Mumbai?**

**I.** Ronit's brother left for Mumbai on Friday.

**II.** Ronit leaves for Mumbai after Tuesday.

**III.** Ronit left before his brother.

- (a) If the data in statement I alone are sufficient to answer the question.
- (b) If the data in statement II alone are sufficient to answer the question.
- (c) If the data given in both the statements I and II together are not sufficient to answer the question.
- (d) If the data in both the statements I and III together are necessary to answer the question
- (e) Data inadequate

**Q18. How many days did Harish take to complete his assignment?**

**I.** Bhagat correctly remembers that Harish took more than 3 days but less than 9 days to complete his assignment.

**II.** Ganesh correctly remembers that Harish took more than 6 days but less than 11 days to complete his assignment.

- (a) If the data in statement I alone are sufficient to answer the question.
- (b) If the data in statement II alone are sufficient to answer the question.
- (c) If the data given in both the statements I and II together are sufficient to answer the question
- (d) If the data either in statement I alone or in statement II alone are sufficient to answer the question.
- (e) If the data given in both the statements I and II together are not sufficient to answer the question

**Q19. How many sisters does B have?**

**I.** A is sister of B.

**II.** Mother of B has three children.

- (a) If the data in statement I alone are sufficient to answer the question.
- (b) If the data in statement II alone are sufficient to answer the question.
- (c) If the data given in both the statements I and II together are sufficient to answer the question.
- (d) If the data either in statement I alone or in statement II alone are sufficient to answer the question
- (e) If the data given in both the statements I and II together are not sufficient to answer the question

**Q20. Four employees were added to an office team. Would the manager able to divide his employees evenly into a team (or teams) of 8?**

**I.** The number of employees in the team is currently not divisible by 8.

**II.** If 12 employees were added, the coach could put everyone in teams of 8 without any leftovers.

- (a) If the data in statement I alone are sufficient to answer the question.
- (b) If the data in statement II alone are sufficient to answer the question.
- (c) If the data given in both the statements I and II together are sufficient to answer the question
- (d) If the data either in statement I alone or in statement II alone are sufficient to answer the question
- (e) If the data given in both the statements I and II together are not sufficient to answer the question

**Direction (21-25):** Study the information given below and answer the given questions.

P, Q, R, S, T, U, V, W, and X are nine friends stay in a building, but not necessarily in the same order. The building has nine floors and only one person stays on each floor. All of them belong to different cities, ie Chennai, Chandigarh, Cochin, Coimbatore, Cuttack, Chittoor, Chhapra, Champawat and Churu, but not necessarily in the same order. The ground floor is numbered 1, the floor above it is numbered 2, and so on, and the topmost floor is numbered 9.

W belongs to Coimbatore and stayed on an even-numbered floor. P stays one of the even numbered floors below on which W stays. The one who belongs to Champawat stays on the fourth floor. T stays on the second floor and belongs to Cochin. The one who belongs to Churu stays on the third floor. P does not belong to Chittoor. There are two floors between the floors on which the persons who are from Chhapra and Coimbatore stay. R belongs to Chandigarh. There are three floors between the floors on which R and V stay. S stays on a floor immediately above X's floor. There is one floor between the floors on which U and V stay. U does not belong to Churu. The one who belongs to Chennai stays on the topmost floor. U does not stay on the ground floor.

**Q21. Who amongst the following friend does belong to Chittoor?**

- (a) S
- (b) X
- (c) V
- (d) U
- (e) None of these

**Q22. Who amongst the following stays on the topmost floor?**

- (a) U
- (b) V
- (c) S
- (d) R
- (e) None of these

**Q23. P belongs to which of the following place?**

- (a) Champawat
- (b) Churu
- (c) Cuttack
- (d) Chennai
- (e) None of these



**CAREER POWER**  
AN IIT/IIM ALUMNI COMPANY

**IBPS** **IT OFFICER**  
(SCALE - I)  
2017-18

**COMBO**

- 10 PRELIMS MOCKS Bilingual
- 10 MAINS MOCKS English Medium

**Q24. Who stays on the floor which is exactly between the floor on which W stays and the floor on which P stays?**

- (a) Q
- (b) V
- (c) R
- (d) U
- (e) None of these

**Q25. How many floors are there between the floor on which X stays and the floor on which R stays?**

- (a) One
- (b) Two
- (c) None
- (d) Three
- (e) More than three

**Directions (26-30): Study the following information carefully and answer the questions given below:**

In a certain code language

'Uttar Pradesh legislative assembly' is written as [E10& K22# H16/ G14%]

'The election commission of India' is written as [J20+ C6# H16+ B4\* E10\$]

'Is Scheduled into seven phases' is written as [I18! D8< B4@ F12@ E10+]

'Result will be declared' is written as [D8= F12> B4# H16!]

**Q26. What is the code for the word 'Scheduled'?**

- (a) D8<
- (b) F12@
- (c) E10+]
- (d) I18!
- (e) None of these

**Q27. The code 'G14%' belongs to which of the following word?**

- (a) assembly
- (b) legislative
- (c) Pradesh
- (d) Uttar
- (e) None of these



**Q28. According to the given code, what is the code for 'F'?**

- (a) \*
- (b) \$
- (c) @
- (d) !
- (e) <

**Q29. What is the code for the word 'February'?**

- (a) G16\*
- (b) H16/
- (c) L14@
- (d) Y8#
- (e) None of these

**Q30. According to the following pattern, what is the code of the word 'declared'?**

- (a) B4#
- (b) F12>
- (c) D8=
- (d) H16!
- (e) None of these

**Directions (31-35): Study the following information carefully and answer the questions given below:**

In Delhi NCR, there is an engineering college Jaypee University where an event is organized, seven different boxes D, E, F, G, H, I, and J of different colours viz., Green, Red, Blue, Yellow, Purple, Pink and Orange are arranged one above the other. The box at the bottom of arrangement is numbered 1, the above box is numbered 2 and so on. E is immediately above H. More than two boxes are above the Green box. The Yellow box is immediately below D. Only one box is between the Green box and I. J is immediately above the Pink box. Only one box is between E and the Red box. Only two boxes are between the Red and the Orange box. Only two boxes are between the Yellow box and the Green box. The blue box is neither at the top nor at the bottom of the arrangement. E is above Red box. F is immediately above I. Neither F nor J is a Yellow box. J is not a Green box. Box D is not at top.

**Q31. Which of the following is the colour of Box "H"?**

- (a) Red
- (b) Purple
- (c) Pink
- (d) Green
- (e) None of the Above



- 15 Full Length Mocks
  - 25 Practice Sets
  - E-Books, Study Notes etc.
- Bilingual

**Q32. Which of the following is correctly matched?**

- (a) I- Purple
- (b) E - Yellow
- (c) H - Blue
- (d) D- Pink
- (e) G - Red

**Q33. Which combination represents the position of F and its colour?**

- (a) 5 - Purple
- (b) 4 - Pink
- (c) 1 - Yellow
- (d) 4 - Green
- (e) 7 - Purple

**Q34. As per the given arrangement, J is related to Orange and D is related to Blue in a certain way. To which of the following is G related to the same way?**

- (a) Yellow
- (b) Pink
- (c) Green
- (d) Purple
- (e) None of the Above

**Q35. Which box is in between the box numbered 6 and the box of green colour?**

- (a) Box numbered 3
- (b) Pink
- (c) Box numbered 4
- (d) Blue
- (e) None of the Above

**Q36. Unlike other retail outlets, where items are purchased in any number of units the customer wants, in super-markets items are grouped in bulk packages. This bulk buying offers savings to the customer. The option to buy at wholesale prices by buying in bulk makes super-markets a practical choice for budget-conscious consumers.**

**Which of the following is an assumption necessary to the author's argument?**

- (a) Super-markets often have greater buying power and lower overhead costs, so they can offer a greater variety of products than regular retail outlets.
- (b) Super-markets are often more conveniently located and have better parking facilities.
- (c) The emergence of super-markets has caused many small retail stores to close down and thus eliminate competition.
- (d) It is economically wise to buy single items since bulk packages seldom offer significant savings.
- (e) The financial savings from purchasing bulk packages may outweigh the inconvenience of being unable to purchase in any number of units that suits the customers' need.

**Q37. The increase in the number of reality shows on television channels bolsters the contention that channels owners are more interested in boosting their revenues by pandering to voyeuristic tendencies of viewers.**

**The premise behind the above argument is that**

- (a) reality shows on television channels are a recent phenomenon.
- (b) everything that a channel broadcasts should be educational.
- (c) reality shows on television appeal to the basic instincts of viewers.
- (d) reality shows make more money than other types of programs.
- (e) The channel owners can influence what is watched by the viewers.

**Q38. Many entrepreneurs try to control the composition of their boards of directors, but more experienced entrepreneurs tend to share control, inviting participation from institutional investors and outside directors.**

**Which option best summarizes the idea that might be guiding experienced entrepreneurs' behavior?**

- (a) The experienced entrepreneurs expect outside directors and institutional investors to monitor the performance of the enterprise and be a sounding board.
- (b) The experienced entrepreneurs expect the institutional investors to support the opinion of entrepreneurs on all major decisions.
- (c) The experienced entrepreneurs expect the institutional investors and outside directors to agree to higher remuneration for the board members.
- (d) Experienced entrepreneurs expect the experienced directors to engage in day-to-day management of the company.
- (e) More the number of influential people on board, the easier it is to raise finances.

**Q39. "Indigestion? Acidity ? Unable to sleep? .Don't spend the night tossing and turning! Take Magix for a sound, restful sleep ... you'll soon fall asleep, and wake up refreshed and energized. Remember ... Magix when you are suffering from acidity and need that sleep!"**

**All of the following are claims of Magix except:**

- (a) A good night's sleep
- (b) Added energy
- (c) A cure to indigestion
- (d) Quickly falling asleep
- (e) A restful slumber

**Q40. Filmmakers tend to highlight their emotional points with visuals, rather than dialogue. Words tend to be the tools of playwrights. Images are the stuff that films are made of. Nevertheless, many successful films have been made from stage plays and contain little else than one location or one stage set.**

**The option which is most opposite to the idea in the statement:**

- (a) Films are not necessarily a filmmaker's medium.
- (b) Films are not limited to any one particular style.
- (c) Films are solely built upon visual and eye-catching scenes.
- (d) Films are better made by playwrights and novelists.
- (e) Films perhaps are better understood by literary critics.

**Directions (41-44): Study the following information carefully and answer the questions which follow.**

F, H, K, L, T, M, V and A are members of a family. There are four males and four females in the family. Not more than two males or two females can sit together. They are sitting around a circular table facing to the centre. M is third to the left of F. Females are not near to L, who is a female. There are two people sitting between V and A and both are of different genders. K is second to the right of H, who is third to the left of L. The females are sitting opposite to females. H is neither opposite to V nor to A.

**Q41. Which of the following is a group of females?**

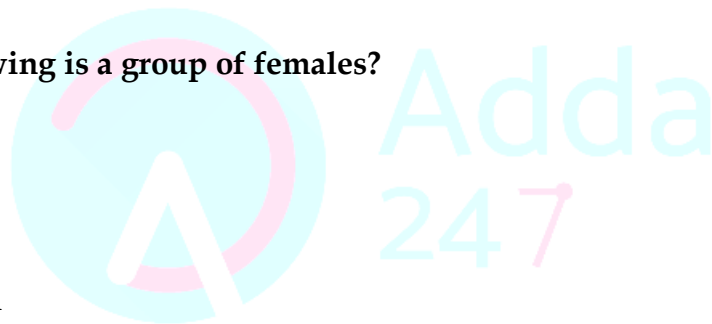
- (a) HTVL
- (b) FATL
- (c) AFHL
- (d) KTVL
- (e) Cannot be determined

**Q42. What is the position of H with respect of T?**

- (a) Second to the left
- (b) Second to the right
- (c) Third to the left
- (d) Third to the right
- (e) None of these

**Q43. If F is second place away from A then who is sitting between them? Also find the gender of that person.**

- (a) T, female
- (b) H, female
- (c) T, male
- (d) H, male
- (e) Cannot be determined

The logo for CAREER POWER, an IT/IIM ALUMNI COMPANY.  
The logo for IBPS (Institute of Banking Personnel Selection).  
**IT OFFICER (SCALE -I) 2017-18**  
**COMBO**  
• 10 PRELIMS MOCKS (Bilingual)  
• 10 MAINS MOCKS (English Medium)

**Q44. Which of the following statement is definitely true?**

- (a) All males are sitting on alternate position
- (b) K and M are sitting opposite to each other
- (c) V and T are of the same gender
- (d) H is a female
- (e) A and K are opposite to each other

**Q45. In a certain code language the word SPIDER is written as LMVUBG. How will the word SURVEY be written in that code language?**

- (a) URVBBY
- (b) URVYBB
- (c) BRUVBU
- (d) BBYURU
- (e) None of these

**Directions (46-50): Study the following information carefully and answer the given questions. Six persons--**

Six persons A, B, C, D, E and F were born in different years starting from 1980 to 1985 such that no two of them was born in the same year. Each of them is a fan of different music artists viz. Michael Jackson, George Michael, Metallica, Backstreet boys, Guns n roses and Nirvana. D is a fan of Metallica but he was born neither in 1984 nor in 1981. The person who is a fan of Nirvana was born either in 1985 or in 1982. E was not born in an odd-numbered year. B is neither a fan of Backstreet boys, nor a fan of Guns n Roses but he is the oldest of them all. The person who is a fan of Guns n Roses is older than the one who is a fan of Backstreet boys but younger than the person who is a fan of George Michael. A who was born in 1982, is either a fan of Guns n roses or a Backstreet boys fan. Either C or F is s fan of George Michael.

**Q46. C is a fan of which of the following music artists?**

- (a) Metallica
- (b) George Michael
- (c) Nirvana
- (d) Backstreet boys
- (e) Can't be determined

**Q47. The one who was born in 1983 is a fan of which of the following music artists?**

- (a) George Michael
- (b) Metallica
- (c) Michael Jackson
- (d) Backstreet boys
- (e) Nirvana

**Q48. Which of the following combinations is definitely true?**

- (a) C–Nirvana–1985
- (b) D–Metallica–1981
- (c) E–Backstreet boys–1984
- (d) F–George Michael–1981
- (e) None of these

**Q49. Which of the following combinations is definitely false?**

- (a) A–Guns n roses–1984
- (b) B–Michael Jackson–1980
- (c) E–Backstreet boys–1984
- (d) D–Metallica–1983
- (e) None of these

**Q50. The person who is a fan of Backstreet boys is older than?**

- (a) F
- (b) C
- (c) D
- (d) E
- (e) Either F or C



**RBI OFFICE ATTENDANT**

**All India Mock 2017**

**USE CODE: RBIA17**

for 100% discount



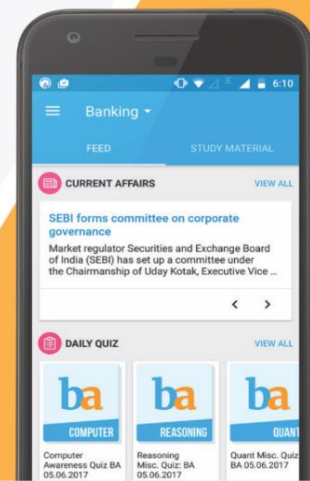




## VIDEO COURSE

Compliment your classroom with Banking Video Courses  
visit: [videocourses.adda247.com](http://videocourses.adda247.com)

Study on the GO with the Adda247 App



Boost your prep with Topic-wise E-books and monthly Magazines  
visit: [store.adda247.com](http://store.adda247.com)



Fulfill your Dream of **Government Job** visit: [careerpower.in](http://careerpower.in)