

DSSSB JULY 2018

PGT ECONOMICS MALE

Section : Mental Ability

Q.1 उस विकल्प का चयन करें जो तीसरे पद से ठीक उसी तरह संबंधित है जिस तरह दूसरा पद पहले पद से सम्बंधित है।

Question ID : 7230531243

सौपना : बौटना :: मिश्रण : _____

- Ans
- ☒ 1. झुकना
 - ☒ 2. मिलाना
 - ☒ 3. अलग करना
 - ☒ 4. रस

Q.2 In a certain code, PAPER is written as QCSIW. How is HOSTEL written in the same code?

Question ID : 7230531236

- Ans
- ☒ 1. IQUXIR
 - ☒ 2. IQUXJQ
 - ☒ 3. IQVXJR
 - ☒ 4. IQVXIR

Q.3 Kumar walks 6 km to the east and then turns to the south to walk 2 km. He again turns to the east and walks 2 km. Next, he turns northwards and walks 8 km. How far is he now from his starting point?

Question ID : 7230531238

- Ans
- ☒ 1. 12 km
 - ☒ 2. 8 km
 - ☒ 3. 10.5 km
 - ☒ 4. 10 km

Q.4 Find the missing term in the below series.

Question ID : 7230531249

ZabY, XcdW, VefU, _____, RjiQ

- Ans
- ☒ 1. ShgT
 - ☒ 2. SghT
 - ☒ 3. ThgS
 - ☒ 4. TghS

Q.5 'C \$ D' means 'C is the mother of D';
'C # D' means 'C is the father of D';
'C @ D' means 'C is the daughter of D';
Now, if P \$ Q # R @ S, then which of the following is NOT true?

Question ID : 7230531239

- Ans
- ☒ 1. P is mother-in-law of S
 - ☒ 2. S is the wife of Q
 - ☒ 3. R is Q's daughter
 - ☒ 4. Q is the wife of S

Q.6 Five friends — Geetha, Seetha, Preetha, Vanitha and Rani — are sitting in a circle. Seetha is sitting between Geetha and Vanitha, whereas Vanitha is sitting to Rani's right. Then, who is seated to Preetha's left?

Question ID : 7230531242

- Ans
- ✓ 1. Geetha
 - ✗ 2. Vanitha
 - ✗ 3. Rani
 - ✗ 4. Seetha

Q.7 Choose the missing character from the given alternatives.

Question ID : 7230531233

AD _{2.5}	BE _{3.5}	CF _{4.5}
DG _{5.5}	EH _{6.5}	FI _{7.5}
GJ _{8.5}	?	IL _{10.5}

- Ans
- ✗ 1. KL_{9.5}
 - ✗ 2. HI_{9.5}
 - ✓ 3. HK_{9.5}
 - ✗ 4. KH_{9.5}

Q.8 Read the following information carefully and answer the question given below.

Question ID : 7230531247

α denotes 'greater than';
 β denotes 'less than';
 γ denotes 'not greater than';
 δ denotes 'equal to';
 μ denotes 'not less than';

If $Y \delta 2Z$ and $3Z \gamma X$, then which of the following is true?

- Ans
- ✗ 1. $3Y \alpha 2X$
 - ✓ 2. $Y \beta X$
 - ✗ 3. $Y \delta X$
 - ✗ 4. $Y \mu 2X$

Q.9 नीचे दी गई परिस्थिती को पढ़ें और आपके द्वारा लिए जानेवाले सबसे तार्किक कदम का चयन करें।

Question ID : 7230531248

आपके पड़ोसी का हाथ भोजन बनाते समय जल गया है। आपको:

- Ans
- ✗ 1. अपने पड़ोसी से कहना चाहिए कि उसे ज्यादा सावधान रहना चाहिए था।
 - ✓ 2. उसके हाथों को पानी में डुबाए रखना चाहिए जब तक जलन का एहसास कम ना हो जाए।
 - ✗ 3. परिस्थिती को नज़रंदाज़ करना चाहिए।
 - ✗ 4. जले हुए हिस्से पर मरहम लगाना चाहिए।

Q.10 आपको दो वाक्य और दो निष्कर्ष दिए गए हैं। उन्हें ध्यानपूर्वक पढ़ें और निर्णय लें कि कौन सा/से निष्कर्ष बयान का तर्कसंगत रूप से अनुसरण करता है/ करते हैं।

Question ID : 7230531235

वाक्य:
सारे बल्ब फूल हैं।
कुछ फूल पत्ते हैं।

निष्कर्ष:
I. सारे बल्ब पत्ते हैं।
II. सारे पत्ते फूल हैं।

- Ans
- ✗ 1. केवल निष्कर्ष I तर्कसंगत है
 - ✗ 2. केवल निष्कर्ष II तर्कसंगत है
 - ✓ 3. ना तो I और ना ही II तर्कसंगत है

✗ 4. या तो । या फिर ॥ तर्कसंगत है

Q.11 Select the pair from the options that has the same relationship between the numbers as there exists between the numbers of the pair given below.

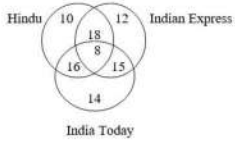
Question ID : 7230531246

4 : 36 :: _____ : _____

- Ans
- ✗ 1. 6 : 50
 - ✗ 2. 2 : 8
 - ✓ 3. 5 : 49
 - ✗ 4. 3 : 81

Q.12 Consider the following venn diagram.

Question ID : 7230531234



The numbers in the Venn diagram indicate the number of persons reading various newspapers. The diagram is drawn after surveying 100 persons. In a population of 5,000, how many can be expected to read at least two newspapers?

- Ans
- ✗ 1. 2,875
 - ✗ 2. 2,900
 - ✗ 3. 2,750
 - ✓ 4. 2,850

Q.13 Which letter will be 10th to the right of the 18th letter from the right end of the English alphabet series?

Question ID : 7230531237

- Ans
- ✓ 1. S
 - ✗ 2. T
 - ✗ 3. R
 - ✗ 4. P

Q.14 Find the missing term in the below number series.

Question ID : 7230531241

22, 23, 27, 36, 52, 77, 113, _____, 226

- Ans
- ✗ 1. 167
 - ✓ 2. 162
 - ✗ 3. 176
 - ✗ 4. 161

Q.15 दिए गए चार विकल्पों में से, नीचे दिए गए तीन शब्दों के सबसे उपयुक्त विवरण का चयन करें।

Question ID : 7230531250

बाइबल : गीता : कुरान

- Ans
- ✗ 1. सभी उर्दू भाषा में लिखे गए हैं।
 - ✗ 2. ये सिखाते हैं कि हिंदु, मुस्लिम और ईसाई अलग अलग हैं।
 - ✓ 3. ये सभी पवित्र पुस्तक हैं।
 - ✗ 4. ये कुछ भारतीयों की पवित्र किताबें हैं।

Q.16 In the following figure, if the centres of all the circles are joined by horizontal and vertical lines, then find the number of squares that can be formed is:

Question ID : 7230531240



- Ans
- ✗ 1. 3

- ✓ 2. 5
 ✗ 3. 4
 ✗ 4. 8

Q.17 Choose the missing character from the given alternatives.

Question ID : 7230531245

3	3	216
4	3	?
5	3	512

- Ans ✗ 1. 396
 ✓ 2. 343
 ✗ 3. 256
 ✗ 4. 356

Q.18 You are given a statement and two conclusions. Read them carefully and select the option(s) that logically follow(s) from the statement.

Question ID : 7230531251

Statement:

'Our 'X' brand mobile phones are best in picture clarity and multiplicity of functions.' – An advertisement on TV.

Conclusions:

I. TV has a wide range of viewers.

II. People look for picture clarity and multiplicity of functions in a mobile phone.

- Ans ✗ 1. Either conclusion I or II follows
 ✓ 2. Both conclusions I and II follows
 ✗ 3. Only conclusion II follows
 ✗ 4. Only conclusion I follows

Q.19 Raja and Sanjay started walking from certain points towards each other. Raja walked 20 km and Sanjay walked 30 km. Then Raja turned to his left and Sanjay turned to his right, and they walked 25 km each. If Raja is facing North, which direction is Sanjay facing now?

Question ID : 7230531252

- Ans ✗ 1. South
 ✓ 2. North
 ✗ 3. West
 ✗ 4. East

Q.20 If BIRLA is coded as 92513 and UMPIRE is coded as 487256, then what is the code for UMBRELLA?

Question ID : 7230531244

- Ans ✗ 1. 48659113
 ✗ 2. 48695113
 ✗ 3. 48959113
 ✓ 4. 48956113

Section : General Awareness

Q.1 Which rank did India occupy in Global Optimism Index released as part of Grant Thornton's International Business Report (IBR) in the first quarter of 2018?

Question ID : 7230531262

- Ans ✗ 1. 2
 ✗ 2. 9
 ✓ 3. 6
 ✗ 4. 3

Q.2 Which mirror is used in the headlight of cars?

Question ID : 7230531268

- Ans
- ☒ 1. Convex mirror
 - ☒ 2. Rectangle mirror
 - ☒ 3. Plane mirror
 - ☒ 4. Concave mirror

Q.3 How many Olympic Medals has India won in the sport of wrestling so far?

Question ID : 7230531266

- Ans
- ☒ 1. 2
 - ☒ 2. 7
 - ☒ 3. 3
 - ☒ 4. 5

Q.4 The Comptroller and Auditor-General of India is appointed by:

Question ID : 7230531258

- Ans
- ☒ 1. the Prime Minister of India
 - ☒ 2. the Vice-President of India
 - ☒ 3. the President of India
 - ☒ 4. the Chief Justice of India

Q.5 The Gobardhan Scheme was launched at National Dairy Research Institute, _____.

Question ID : 7230531270

- Ans
- ☒ 1. Karnal
 - ☒ 2. Rohtak
 - ☒ 3. Ambala
 - ☒ 4. Hisar

Q.6 Which of the following is correct?

Question ID : 7230531259

- Ans
- ☒ 1. The Legislative Council of a State is not subject to dissolution.
 - ☒ 2. The Legislative Council of a State is dissolved after six years.
 - ☒ 3. The Legislative Council of a State is dissolved after five years.
 - ☒ 4. The Governor dissolves the Legislative Council of a State.

Q.7 The noted musician Arvind Parikh is associated with which of the following musical instruments?

Question ID : 7230531264

- Ans
- ☒ 1. Sarod
 - ☒ 2. Sitar
 - ☒ 3. Shehnai
 - ☒ 4. Mridangam

Q.8 What has been set as MSP for jute per quintal for 2018-19?

Question ID : 7230531272

- Ans
- ☒ 1. ₹ 3,100
 - ☒ 2. ₹ 3,700
 - ☒ 3. ₹ 4,200
 - ☒ 4. ₹ 3,500

Q.9 निम्नलिखित में से कौन सी विशेषता बौद्ध धर्म को जैन धर्म से अलग करती है?

Question ID : 7230531255

Ans

- ☒ 1. वेदों के प्रभुत्व की अस्वीकृति
- ☒ 2. अच्छे कर्मों में विश्वास
- ☒ 3. आचरण और आत्मनिग्रह का चरम रूप
- ☒ 4. सजीव प्राणियों को नुकसान नहीं पहुंचाना

Q.10 The Governor of a State holds office during the pleasure of:

Question ID : 7230531260

- Ans
- ☒ 1. The President of India
 - ☒ 2. The Home Minister of India
 - ☒ 3. The Attorney-General of India
 - ☒ 4. The Chief Minister of the concerned State

Q.11 Who was the author of the famous book "Poverty and Un-British Rule in India"?

Question ID : 7230531253

- Ans
- ☒ 1. Madan Mohan Malaviya
 - ☒ 2. Subhash Chandra Bose
 - ☒ 3. Mohammad Ali Jinnah
 - ☒ 4. Dadabhai Naoroji

Q.12 Who holds the record for the "highest number of wickets" across all seasons of IPL as of April 2018?

Question ID : 7230531267

- Ans
- ☒ 1. Ravichandran Ashwin
 - ☒ 2. Umesh Yadav
 - ☒ 3. Harbhajan Singh
 - ☒ 4. Lasith Malinga

Q.13 With whom has the Union Government of India entered into an agreement for flexible financing arrangement to accelerate research towards early development of biopharmaceuticals under National Biopharma Mission?

Question ID : 7230531271

- Ans
- ☒ 1. IMF
 - ☒ 2. WHO
 - ☒ 3. UNICEF
 - ☒ 4. World Bank

Q.14 Where is the headquarters of UNICEF located?

Question ID : 7230531269

- Ans
- ☒ 1. New York
 - ☒ 2. Paris
 - ☒ 3. Shanghai
 - ☒ 4. London

Q.15 In which state is Chapchar Kut festival celebrated?

Question ID : 7230531263

- Ans
- ☒ 1. Mizoram
 - ☒ 2. Assam
 - ☒ 3. Nagaland
 - ☒ 4. Manipur

Q.16 In which state is the Kanha National Park situated?

Question ID : 7230531256

- Ans
- ☒ 1. Chhattisgarh

- ☒ 2. West Bengal
☒ 3. Uttar Pradesh
☒ 4. Madhya Pradesh

Q.17 In which state is the Anantagiri Hills located?

Question ID : 7230531257

- Ans ☒ 1. Karnataka
☒ 2. Andhra Pradesh
☒ 3. Kerala
☒ 4. Telangana

Q.18 The statutory power for exchange control was provided to the RBI by the Foreign Exchange Regulation Act (FERA) of:

Question ID : 7230531261

- Ans ☒ 1. 1963
☒ 2. 1923
☒ 3. 1981
☒ 4. 1947

Q.19 Who established the Darpana Academy of Performing Arts in Ahmedabad?

Question ID : 7230531265

- Ans ☒ 1. Yamini Krishnamurthy
☒ 2. Mrinalini Sarabhai
☒ 3. Sonal Mansingh
☒ 4. Rukmini Devi Arundale

Q.20 किस पुलिस स्टेशन में प्रदर्शनकारी की एक भीड़ द्वारा आग लगाये जाने के उपरान्त 1922 में महात्मा गांधी द्वारा असहयोग आंदोलन बंद कर दिया गया था?

Question ID : 7230531254

- Ans ☒ 1. साबरमती
☒ 2. चौरी चौरा
☒ 3. वर्धा
☒ 4. वैशाली

Section : Arithmetic Ability

Q.1 ₹ 13,600 का मूलधन चक्रवृद्धि व्याज के किसी खास वार्षिक दर पर किसी खास समयावधि में बढ़ कर ₹ 16,456 हो जाता है। वह मूलधन उसी वार्षिक दर पर उससे आधे समय में कितना होगा?

Question ID : 7230531283

- Ans ☒ 1. ₹ 14,960
☒ 2. ₹ 15,840
☒ 3. ₹ 14,840
☒ 4. ₹ 14,980

Q.2 एक व्यक्ति 21 km की दूरी के लिए धारा के विपरीत नौका चलाता है और फिर शुरुआती बिंदु पर लौटता है। वह इस यात्रा को 10 घंटों में पूरा करता है। यदि 7 km धारा के अनुकूल जाने में उसके द्वारा लिया गया समय 3 km धारा के विपरीत जाने में लिए गए समय के बराबर है, तो धारा की गति क्या है?

Question ID : 7230531285

- Ans ☒ 1. 2 km/h
☒ 2. $1\frac{1}{2}$ km/h
☒ 3. 3 km/h
☒ 4. $3\frac{1}{2}$ km/h

Q.3 On selling an article at 20% discount on its marked price, there is a loss of $x\%$. If it is sold at the marked price, then profit is 15%. What is the value of x ?

Question ID : 7230531282

- Ans
- ☒ 1. 12%
 - ☒ 2. 10%
 - ☒ 3. 9%
 - ☒ 4. 8%

Q.4 The value of $\frac{5+[2+\{2-2(5-3)+5\}-10]+5}{3+\frac{1}{6}\{29-(20+3)+\frac{1}{2}of 48\}+4}$ lies between:

Question ID : 7230531275

- Ans
- ☒ 1. 0.4 and 0.5
 - ☒ 2. 0.3 and 0.4
 - ☒ 3. 0.1 and 0.2
 - ☒ 4. 0.2 and 0.3

Q.5 The value of $\frac{(12.12)^2 - (8.12)^2}{(0.25)^2 + (0.25)(19.99)} \div \left(\frac{17.28 + 12}{3.6 \times 0.02}\right)$ is:

Question ID : 7230531274

- Ans
- ☒ 1. 0.6
 - ☒ 2. 0.8
 - ☒ 3. 0.4
 - ☒ 4. 1.2

Q.6 A, B and C working together can complete a task in 18 days. B takes double the time that A takes and C takes double the time that B takes to complete the task. They work together for 4 days. A alone will complete the remaining task in:

Question ID : 7230531286

- Ans
- ☒ 1. 20 days
 - ☒ 2. $24\frac{1}{2}$ days
 - ☒ 3. $20\frac{1}{2}$ days
 - ☒ 4. 24 days

Q.7 If the sum of eighteen consecutive positive integers is a perfect square, then the smallest possible value of the sum is:

Question ID : 7230531273

- Ans
- ☒ 1. 225
 - ☒ 2. 169
 - ☒ 3. 289
 - ☒ 4. 324

Q.8 A person has 1323 mangoes, 2457 apples and 2835 oranges. He wants to pack them in boxes so that each box has equal number of fruits of the same kind. The least number of boxes will be:

Question ID : 7230531279

- Ans
- ☒ 1. 54
 - ☒ 2. 28
 - ☒ 3. 20
 - ☒ 4. 35

Q.9 The sum and difference of LCM and HCF of two numbers are 592 and 518, respectively. If the difference of the numbers is x and their sum is 296 then the value of x is:

Question ID : 7230531278

- Ans
- ☒ 1. 148
 - ☒ 2. 111
 - ☒ 3. 74
 - ☒ 4. 37

Q.10 Three concentric circles have radii (in cm) a , b and c where $a < b < c$. If $a = 8$, $b = 9$ and the middle circle bisects the area between the other two circles, then the value of c is:

Question ID : 7230531284

Ans

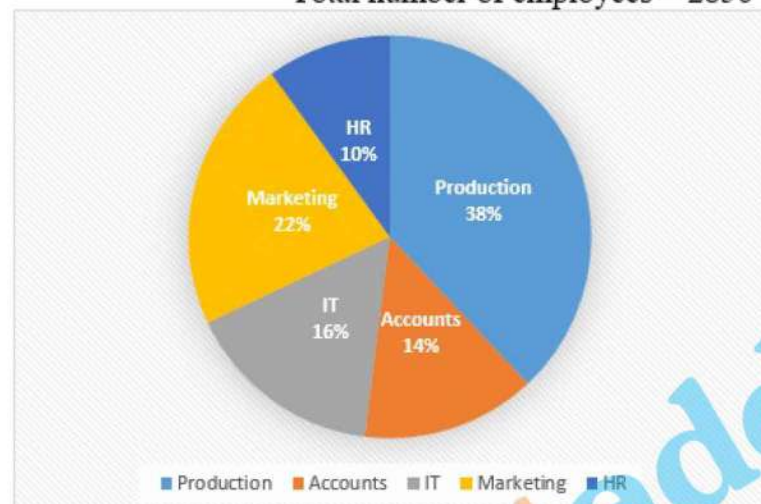
Study the following pie chart and table and answer the questions that follow.

The following table shows the respective ratio of males to females in each department of a company.

Department	Males : females
Production	11 : 8
HR	8 : 7
IT	3 : 5
Marketing	7 : 4
Accounts	2 : 5

Percentage wise breakup of employees in various departments

Total number of employees = 2850



SubQuestion No : 15

Q.1 The total number of females working in the HR department and the total number of males working in the Accounts department forms approximately how much percent of the total number of female employees in the company?

Question ID : 7230531289

- Ans
- ✓ 1. 17.8%
 - ✗ 2. 15.8%
 - ✗ 3. 16.4%
 - ✗ 4. 16.2%

Comprehension:

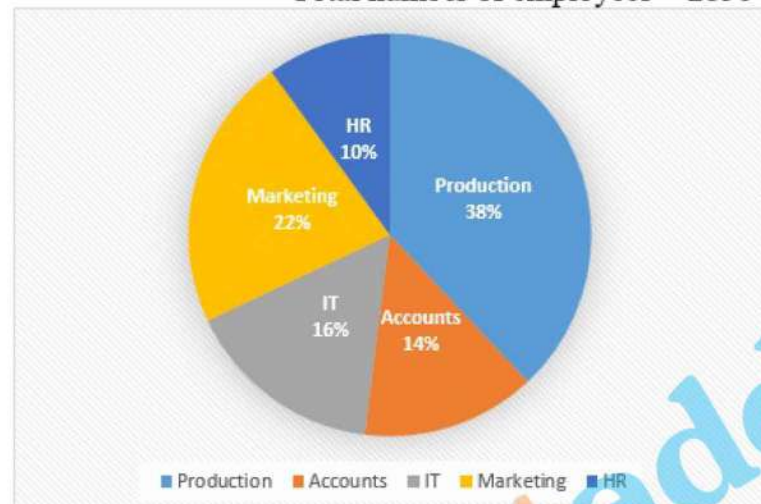
Study the following pie chart and table and answer the questions that follow.

The following table shows the respective ratio of males to females in each department of a company.

Department	Males : females
Production	11 : 8
HR	8 : 7
IT	3 : 5
Marketing	7 : 4
Accounts	2 : 5

Percentage wise breakup of employees in various departments

Total number of employees = 2850



SubQuestion No : 16

Q.1
6 What is the ratio of the total number of males working in IT and marketing departments to the numbers of females working in the Production department?

Question ID : 7230531288

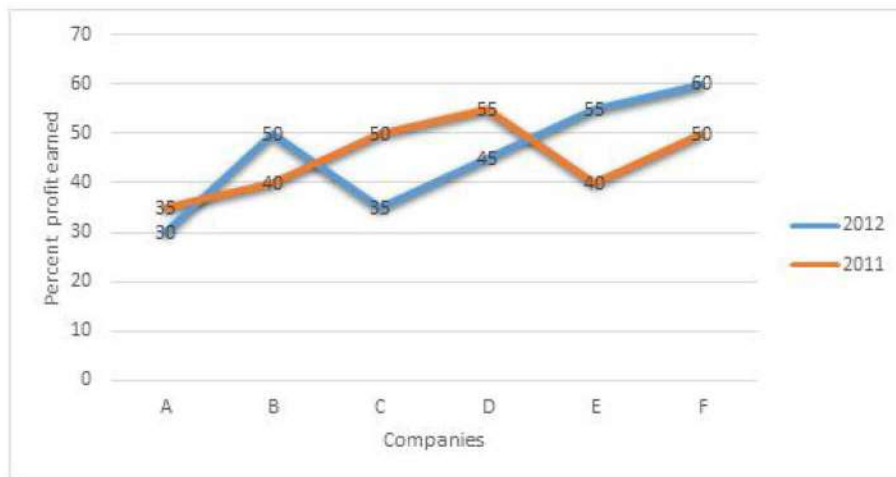
- Ans
- ☒ 1. 10 : 9
 - ☒ 2. 5 : 2
 - ☒ 3. 5 : 4
 - ☒ 4. 2 : 1

Comprehension:

Study the following graph which shows percent profit earned by six companies during 2011 and 2012. And answer the questions that follow.

Profit = Income – Expenditure

$$\% \text{ profit} = \frac{\text{Income} - \text{Expenditure}}{\text{Expenditure}} \times 100$$



SubQuestion No : 17

Q.17 The expenditures of company A in 2011 and 2012 were ₹ 21 crores and ₹ 25 crores, respectively. What was the total income of the company in these two years? (in crores of rupees)

Question ID : 7230531292

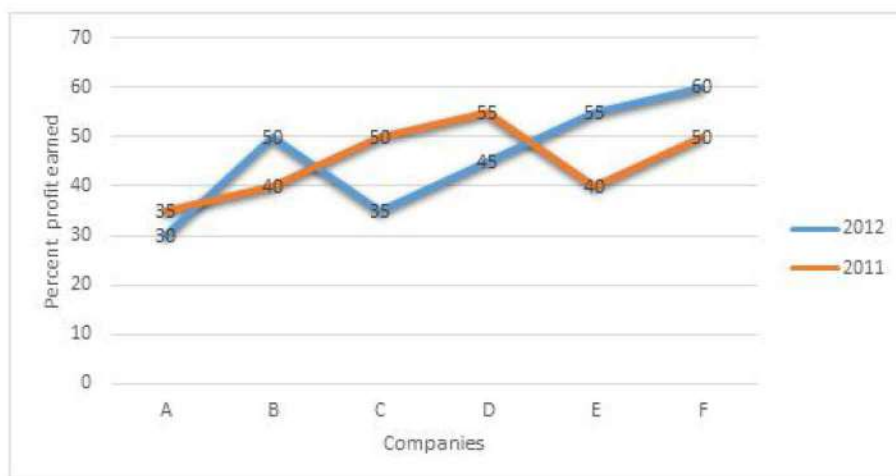
- Ans
- ☒ 1. 70.52
 - ☒ 2. 70.82
 - ☒ 3. 60.85
 - ☒ 4. 60.55

Comprehension:

Study the following graph which shows percent profit earned by six companies during 2011 and 2012. And answer the questions that follow.

Profit = Income – Expenditure

$$\% \text{ profit} = \frac{\text{Income} - \text{Expenditure}}{\text{Expenditure}} \times 100$$



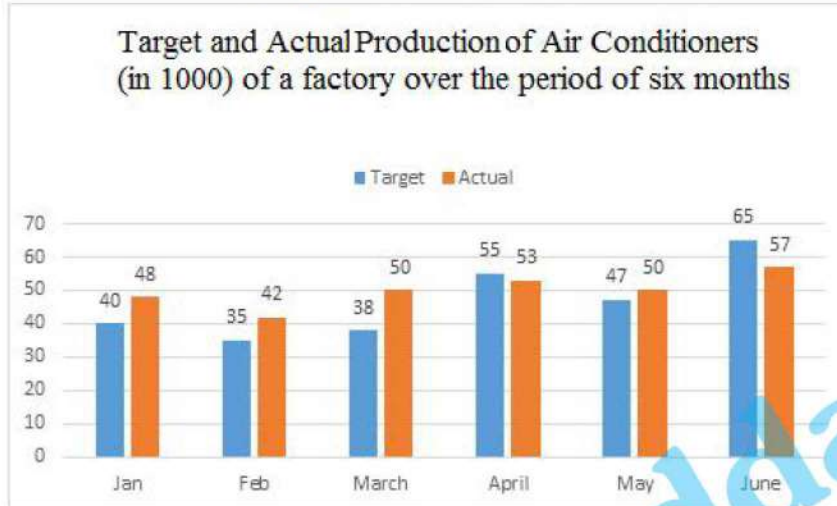
Q.1
8 If the expenditure of company E in 2011 and 2012 was the same, then what was the ratio of incomes of the company in the same years respectively?

Question ID : 7230531291

- Ans
- ☒ 1. 8 : 11
 - ☒ 2. 28 : 31
 - ☒ 3. 29 : 31
 - ☒ 4. 9 : 10

Comprehension:

Study the following graph and answer the question that follows.



SubQuestion No : 19

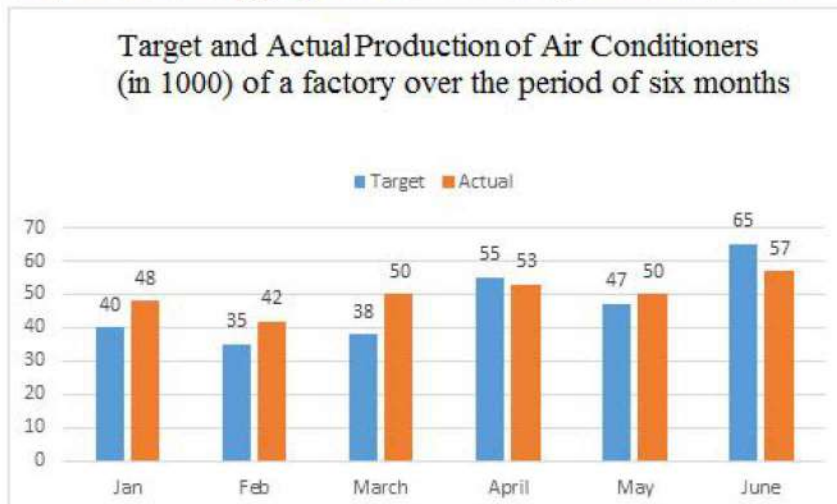
Q.1
9 What is the difference between the total targeted production for February, April and May and the actual production in thousand for January, March and June?

Question ID : 7230531295

- Ans
- ☒ 1. 22
 - ☒ 2. 29
 - ☒ 3. 18
 - ☒ 4. 24

Comprehension:

Study the following graph and answer the question that follows.



SubQuestion No : 20

Q.2 The combined actual production of air conditioners in February and June is what percent less than the combined targeted production in January, March and May?

- Ans
- ☒ 1. 19.8%
 - ☒ 2. 21.2%
 - ☒ 3. 20.8%
 - ☒ 4. 20.4%

Section : General English

Q.1 Fill in the blank with the appropriate word/s.

Question ID : 7230531300

Did your college _____ in the university tournament?

- Ans
- ☒ 1. participating
 - ☒ 2. are participating
 - ☒ 3. participate
 - ☒ 4. participated

Q.2 Fill in the blank with the appropriate idiomatic expression.

Question ID : 7230531310

Virat Kohli is _____ most batsmen in the world.

- Ans
- ☒ 1. leaving no stone unturned
 - ☒ 2. keeping an eye on
 - ☒ 3. hard and fast
 - ☒ 4. head and shoulders above

Q.3 Choose the passive voice form of the given sentence.

Question ID : 7230531304

My colleague and I decided we would continue our efforts to conquer the seas.

- Ans
- ☒ 1. My colleague and I decided we will continue our efforts to conquer the seas.
 - ☒ 2. It was decided by my colleague and me that we would continue our efforts to conquer the seas.
 - ☒ 3. My colleague and I decided we would be continuing our efforts to conquer the seas.
 - ☒ 4. It is decided by my colleague and me to continue our efforts to conquer the seas.

Q.4 Fill in the blank with the appropriate word.

Question ID : 7230531301

On Sundays I _____ have my breakfast in bed and spend the morning relaxing with a book.

- Ans
- ☒ 1. frequently
 - ☒ 2. gradually
 - ☒ 3. usually
 - ☒ 4. rapidly

Q.5 Choose the correct synonym of:

Question ID : 7230531296

oration

- Ans
- ☒ 1. dialogue
 - ☒ 2. attraction
 - ☒ 3. silence
 - ☒ 4. speech

Q.6 In the following sentence four words or phrases have been underlined. One of them is incorrect. Choose the incorrect word or phrase from the given options.

Question ID : 7230531303

It was a near-impossible mission, and once more fate handed me a failure when I could see the finish line and expect to win.

- Ans
- ☒ 1. handed me
 - ☒ 2. once more
 - ☒ 3. I could see
 - ☒ 4. expect to win

Q.7 Choose the best option to combine the given sentences.

Question ID : 7230531306

Ritu felt very offended. She stopped talking to her friend.

- Ans
- ☒ 1. Ritu felt very offended because she stopped talking to her friend.
 - ☒ 2. Ritu felt too offended she that stopped talking to her friend.
 - ☒ 3. Ritu felt so offended that she stopped talking to her friend.
 - ☒ 4. Ritu felt very offended that she stopped talking to her friend.

Q.8 Choose the most appropriate indirect narration for the following sentence.

Question ID : 7230531305

Ravi said, "Do you understand how difficult this job is? I need at least four team members to complete it within five days."

- Ans
- ☒ 1. Ravi asked do you understand how difficult this job is? I need at least four team members to complete it within five days.
 - ☒ 2. Ravi asked if he understood how difficult that job was and further said he needed at least four team members to complete it within five days.
 - ☒ 3. Ravi said if he understands how difficult this job is? He said he needs at least four team members to complete it within five days.
 - ☒ 4. Ravi says, "Do you understand how difficult this job is? I needed at least four team members to complete it within five days."

Q.9 In the following sentence four words or phrases have been underlined. One of them is incorrect. Choose the incorrect word or phrase from the given options.

Question ID : 7230531302

One who desires wealth and property from God is not a devotee but a slavery of wealth and property because, to him, God is only a means to an end.

- Ans
- ☒ 1. One who desires
 - ☒ 2. not a devotee
 - ☒ 3. means to an end
 - ☒ 4. slavery of wealth

Q.10 Choose the passage that is correctly punctuated.

Question ID : 7230531307

- Ans
- ☒ 1. It was very dark and windy. Aastha saw the dark clouds and shouted, "mother it's going to rain. Let's run indoors quickly."
 - ☒ 2. It was very dark and windy. Aastha saw the dark clouds and shouted, "Mother! Its going to rain. Let's run indoors quickly."
 - ☒ 3. It was very dark and windy. Aastha saw the dark clouds and shouted, "Mother! It's going to rain. Let's run indoors quickly."

✗ 4.

It was very dark and windy. Aastha saw the dark clouds and shouted Mother! It's going to rain. Let's run indoors quickly.

Q.11 Choose the appropriate antonym of:

Question ID : 7230531297

avoid

- Ans
- ✓ 1. seek
 - ✗ 2. dodge
 - ✗ 3. discover
 - ✗ 4. kill

Q.12 Choose the correct antonym of the underlined word to fill in the blank.

Question ID : 7230531298

It looked as if the answer to the quiz question was obvious but it turned out to be _____.

- Ans
- ✗ 1. predictable
 - ✗ 2. transparent
 - ✓ 3. ambiguous
 - ✗ 4. persuasion

Q.13 Fill in the blank with the correct word.

Question ID : 7230531299

The match was quite boring as we could easily predict who would be _____ winner.

- Ans
- ✗ 1. some
 - ✗ 2. an
 - ✓ 3. the
 - ✗ 4. a

Q.14 Fill in the blank with the appropriate idiomatic expression.

Question ID : 7230531309

Why are you _____? You paid no heed when you were warned so many times.

- Ans
- ✗ 1. beating about the bush
 - ✗ 2. giving yourself airs
 - ✓ 3. crying over spilt milk
 - ✗ 4. chicken- hearted

Q.15 Choose the word that is correctly spelt.

Question ID : 7230531308

- Ans
- ✗ 1. imediate
 - ✗ 2. recieve
 - ✓ 3. irrelevant
 - ✗ 4. grammer

Comprehension:

Read the following passage and answer the questions based on it.

My only work is to give you a clear-cut idea how you can become more conscious; I call it meditation. Working, walking, sitting. . . . I don't believe what others call meditation; that for ten minutes or 20 minutes you do it and then just be your ordinary self for 24 hours and again meditate for 20 minutes. It is like asking a person to breathe every day for 20 minutes and then forget all about it, because the person has to do many other things! And then next day she/he can breathe again in the morning! To me meditation is exactly like breathing. So whatsoever you are doing and wherever you are, do it more consciously.

Just try for few minutes to walk consciously; be alert at each step and you will be surprised that the quality of your walk is totally different. It is relaxed. There is no tension and there is a subtle joy that is arising out of your relaxed walking. And the more you become aware of this joy, the more you would like to be awake.

Eat with awareness. Thirty million people in America are suffering from overeating. Strange world we are living in; men are dying every day in Ethiopia because they don't have food, and millions are dying in America because they have too much food. These people who are suffering from obesity cannot resist eating. No doctor is going to help them, unless they become aware, while they are eating. They have to be aware that a man of awareness eats only as much as his body needs. He immediately feels that now there is no need, the hunger is gone, he is content.

SubQuestion No : 16

Q.1
6 One who is _____ is an aware person.

Question ID : 7230531316

Ans

- ✓ 1. always alert
- ✗ 2. always tense
- ✗ 3. terribly overweight
- ✗ 4. eats unconsciously

Comprehension:

Read the following passage and answer the questions based on it.

My only work is to give you a clear-cut idea how you can become more conscious; I call it meditation. Working, walking, sitting. . . . I don't believe what others call meditation; that for ten minutes or 20 minutes you do it and then just be your ordinary self for 24 hours and again meditate for 20 minutes. It is like asking a person to breathe every day for 20 minutes and then forget all about it, because the person has to do many other things! And then next day she/he can breathe again in the morning! To me meditation is exactly like breathing. So whatsoever you are doing and wherever you are, do it more consciously.

Just try for few minutes to walk consciously; be alert at each step and you will be surprised that the quality of your walk is totally different. It is relaxed. There is no tension and there is a subtle joy that is arising out of your relaxed walking. And the more you become aware of this joy, the more you would like to be awake.

Eat with awareness. Thirty million people in America are suffering from overeating. Strange world we are living in; men are dying every day in Ethiopia because they don't have food, and millions are dying in America because they have too much food. These people who are suffering from obesity cannot resist eating. No doctor is going to help them, unless they become aware, while they are eating. They have to be aware that a man of awareness eats only as much as his body needs. He immediately feels that now there is no need, the hunger is gone, he is content.

SubQuestion No : 17

Q.1
7 Choose the most suitable option to complete the sentence given below.

Question ID : 7230531313

When meditation is done with awareness, it:

Ans

- ☒ 1. makes you a forgetful person.
- ☒ 2. gives a great deal of satisfaction.
- ☒ 3. is quite time consuming.
- ☒ 4. is painful and tedious.

Comprehension:

Read the following passage and answer the questions based on it.

My only work is to give you a clear-cut idea how you can become more conscious; I call it meditation. Working, walking, sitting. . . . I don't believe what others call meditation; that for ten minutes or 20 minutes you do it and then just be your ordinary self for 24 hours and again meditate for 20 minutes. It is like asking a person to breathe every day for 20 minutes and then forget all about it, because the person has to do many other things! And then next day she/he can breathe again in the morning! To me meditation is exactly like breathing. So whatsoever you are doing and wherever you are, do it more consciously.

Just try for few minutes to walk consciously; be alert at each step and you will be surprised that the quality of your walk is totally different. It is relaxed. There is no tension and there is a subtle joy that is arising out of your relaxed walking. And the more you become aware of this joy, the more you would like to be awake.

Eat with awareness. Thirty million people in America are suffering from overeating. Strange world we are living in; men are dying every day in Ethiopia because they don't have food, and millions are dying in America because they have too much food. These people who are suffering from obesity cannot resist eating. No doctor is going to help them, unless they become aware, while they are eating. They have to be aware that a man of awareness eats only as much as his body needs. He immediately feels that now there is no need, the hunger is gone, he is content.

SubQuestion No : 18

Q.1
8 Choose the most suitable option to answer the question given below.

Question ID : 7230531315

What should you NOT do if you are obese?

Ans

- ✓ 1. Be led by your love for food
- ✗ 2. Resist eating too much
- ✗ 3. Eat only what your body needs
- ✗ 4. Consult a doctor

Comprehension:

Read the following passage and answer the questions based on it.

My only work is to give you a clear-cut idea how you can become more conscious; I call it meditation. Working, walking, sitting. . . . I don't believe what others call meditation; that for ten minutes or 20 minutes you do it and then just be your ordinary self for 24 hours and again meditate for 20 minutes. It is like asking a person to breathe every day for 20 minutes and then forget all about it, because the person has to do many other things! And then next day she/he can breathe again in the morning! To me meditation is exactly like breathing. So whatsoever you are doing and wherever you are, do it more consciously.

Just try for few minutes to walk consciously; be alert at each step and you will be surprised that the quality of your walk is totally different. It is relaxed. There is no tension and there is a subtle joy that is arising out of your relaxed walking. And the more you become aware of this joy, the more you would like to be awake.

Eat with awareness. Thirty million people in America are suffering from overeating. Strange world we are living in; men are dying every day in Ethiopia because they don't have food, and millions are dying in America because they have too much food. These people who are suffering from obesity cannot resist eating. No doctor is going to help them, unless they become aware, while they are eating. They have to be aware that a man of awareness eats only as much as his body needs. He immediately feels that now there is no need, the hunger is gone, he is content.

SubQuestion No : 19

Q.1
9 Choose the most suitable option to answer the question given below.

Question ID : 7230531314

What is the irony of life mentioned by the writer?

- Ans
- ☒ 1. Awareness is essential but it has no effect
 - ☒ 2. Many Americans are dying due to overeating
 - ☒ 3. Many people are dying in Ethiopia
 - ☒ 4. While some people die of hunger, others die of overeating

While some people die of hunger, others die of overeating

Comprehension:

Read the following passage and answer the questions based on it.

My only work is to give you a clear-cut idea how you can become more conscious; I call it meditation. Working, walking, sitting. . . . I don't believe what others call meditation; that for ten minutes or 20 minutes you do it and then just be your ordinary self for 24 hours and again meditate for 20 minutes. It is like asking a person to breathe every day for 20 minutes and then forget all about it, because the person has to do many other things! And then next day she/he can breathe again in the morning! To me meditation is exactly like breathing. So whatsoever you are doing and wherever you are, do it more consciously.

Just try for few minutes to walk consciously; be alert at each step and you will be surprised that the quality of your walk is totally different. It is relaxed. There is no tension and there is a subtle joy that is arising out of your relaxed walking. And the more you become aware of this joy, the more you would like to be awake.

Eat with awareness. Thirty million people in America are suffering from overeating. Strange world we are living in; men are dying every day in Ethiopia because they don't have food, and millions are dying in America because they have too much food. These people who are suffering from obesity cannot resist eating. No doctor is going to help them, unless they become aware, while they are eating. They have to be aware that a man of awareness eats only as much as his body needs. He immediately feels that now there is no need, the hunger is gone, he is content.

SubQuestion No : 20

Q.2
0 Complete the sentence by choosing a suitable option.

Question ID : 7230531312

The writer believes that meditation _____.

- Ans
- ☒ 1. can be done only when you are walking
 - ☒ 2. is a process that requires consciousness
 - ☒ 3. needs to be done for only 20 minutes a day
 - ☒ 4. must be done many times during the day

Section : General Hindi

Comprehension:

निम्नलिखित गद्यांश को ध्यानपूर्वक पढ़कर पूछे गए प्रश्नों के उत्तर दीजिये।

हम एक ऐसे युग में जी रहे हैं, जहाँ एक तरफ भौतिक समृद्धि अपनी ऊँचाई पर है, तो दूसरी तरफ चारित्रिक पतन की गहराई है।

आधुनिकीकरण में उलझा मानव सफलता की नित नई परिभाषाएँ खोजता रहता है अपनी अंतहीन इच्छाओं के रेगिस्तान में भटकता रहता है। ऐसे समय में सच्ची सफलता और सुख-शांति की प्यास से व्याकुल व्यक्ति अनेक मानसिक रोगों का शिकार बनता जा रहा है। हमसे कितने लोगों को इस बात का ज्ञान है की जीवन में सफलता प्राप्त करना और सफल जीवन जीना, यह दोनों अलग-अलग बातें हैं! यह जरूरी नहीं कि जिसने अपने जीवन में साधारण कामनाओं को हासिल कर लिया हो, वह पूर्णतः संतुष्ट और प्रसन्न भी हो। अतः हमें गंभीरतापूर्वक इस बात को समझना चाहिए कि इच्छित फल को प्राप्त कर लेना ही सफलता नहीं है। जब तक हम अपने जीवन में नैतिक व आध्यात्मिक मूल्यों का सिंचन नहीं करेंगे, तब तक यथार्थ सफलता पाना हमारे लिए मुश्किल ही नहीं, अपितु असंभव कार्य हो जाएगा, क्योंकि बिना मूल्यों के प्राप्त सफलता केवल क्षणभंगुर सुख के समान रहती है। कुछ निराशावादी लोगों का कहना है कि हम सफल नहीं हो सकते, क्योंकि हमारी तकदीर या परिस्थितियाँ ही ऐसी हैं। परंतु यदि हम अपना ध्येय निश्चित करके उसे अपने मन में बिठा लें, तो फिर सफलता स्वयं हमारी ओर चलकर आएगी। सफल होना हर मनुष्य का जन्मसिद्ध अधिकार है, परंतु यदि हम अपनी विफलताओं के बारे में ही सोचते रहेंगे, तो सफलता को कभी हासिल नहीं कर पाएँगे। अतः विफलताओं की चिंता न करें, क्योंकि वे तो हमारे जीवन का सौंदर्य है और संघर्ष जीवन का काव्य है, कई बार प्रथम आघात में पत्थर नहीं टूट पाता, उसे तोड़ने के लिए आघात करने पड़ते हैं, इसलिए सदैव अपने लक्ष्य को सामने रख आगे बढ़ने की जरूरत है। कहा भी गया है कि जीवन में सकारात्मक कोशिश करने वालों की कभी हार नहीं होती।

SubQuestion No : 1

Q.1 परिस्थितियों को असफलता का कारण मानते हैं:

Question ID : 7230531320

- Ans
- ☒ 1. श्रमशील लोग
 - ☒ 2. ध्येयनिष्ठ व्यक्ति
 - ☒ 3. कर्मरत लोग
 - ☒ 4. निराश लोग

Comprehension:

निम्नलिखित गद्यांश को ध्यानपूर्वक पढ़कर पूछे गए प्रश्नों के उत्तर दीजिये।

हम एक ऐसे युग में जी रहे हैं, जहाँ एक तरफ भौतिक समृद्धि अपनी ऊँचाई पर है, तो दूसरी तरफ चारित्रिक पतन की गहराई है।

आधुनिकीकरण में उलझा मानव सफलता की नित नई परिभाषाएँ खोजता रहता है अपनी अंतहीन इच्छाओं के रेगिस्तान में भटकता रहता है। ऐसे समय में सच्ची सफलता और सुख-शांति की प्यास से व्याकुल व्यक्ति अनेक मानसिक रोगों का शिकार बनता जा रहा है। हमसे कितने लोगों को इस बात का ज्ञान है की जीवन में सफलता प्राप्त करना और सफल जीवन जीना, यह दोनों अलग-अलग बातें हैं! यह जरूरी नहीं कि जिसने अपने जीवन में साधारण कामनाओं को हासिल कर लिया हो, वह पूर्णतः संतुष्ट और प्रसन्न भी हो। अतः हमें गंभीरतापूर्वक इस बात को समझना चाहिए कि इच्छित फल को प्राप्त कर लेना ही सफलता नहीं है। जब तक हम अपने जीवन में नैतिक व आध्यात्मिक मूल्यों का सिंचन नहीं करेंगे, तब तक यथार्थ सफलता पाना हमारे लिए मुश्किल ही नहीं, अपितु असंभव कार्य हो जाएगा, क्योंकि बिना मूल्यों के प्राप्त सफलता केवल क्षणभंगुर सुख के समान रहती है। कुछ निराशावादी लोगों का कहना है कि हम सफल नहीं हो सकते, क्योंकि हमारी तकदीर या परिस्थितियाँ ही ऐसी हैं। परंतु यदि हम अपना ध्येय निश्चित करके उसे अपने मन में बिठा लें, तो फिर सफलता स्वयं हमारी ओर चलकर आएगी। सफल होना हर मनुष्य का जन्मसिद्ध अधिकार है, परंतु यदि हम अपनी विफलताओं के बारे में ही सोचते रहेंगे, तो सफलता को कभी हासिल नहीं कर पाएँगे। अतः विफलताओं की चिंता न करें, क्योंकि वे तो हमारे जीवन का सौंदर्य है और संघर्ष जीवन का काव्य है, कई बार प्रथम आघात में पत्थर नहीं टूट पाता, उसे तोड़ने के लिए आघात करने पड़ते हैं, इसलिए सदैव अपने लक्ष्य को सामने रख आगे बढ़ने की जरूरत है। कहा भी गया है कि जीवन में सकारात्मक कोशिश करने वालों की कभी हार नहीं होती।

SubQuestion No : 2

Q.2 'पत्थर तोड़ने के लिए कई आघात करने पड़ते हैं' का आशय है:

Question ID : 7230531322

- Ans
- ☒ 1. निरंतर पत्थर तोड़ते रहना।
 - ☒ 2. निरंतर सहायतार्थ पुकारना।
 - ☒ 3. निरंतर चोट खाते रहना।
 - ☒ 4. निरंतर श्रम करते रहना।

Comprehension:

निम्नलिखित गद्यांश को ध्यानपूर्वक पढ़कर पूछे गए प्रश्नों के उत्तर दीजिये।

हम एक ऐसे युग में जी रहे हैं, जहाँ एक तरफ भौतिक समृद्धि अपनी ऊँचाई पर है, तो दूसरी तरफ चारित्रिक पतन की गहराई है।

आधुनिकीकरण में उलझा मानव सफलता की नित नई परिभाषाएँ खोजता रहता है अपनी अंतहीन इच्छाओं के रेगिस्तान में भटकता रहता है। ऐसे समय में सच्ची सफलता और सुख-शांति की प्यास से व्याकुल व्यक्ति अनेक मानसिक रोगों का शिकार बनता जा रहा है। हमसे कितने लोगों को इस बात का ज्ञान है की जीवन में सफलता प्राप्त करना और सफल जीवन जीना, यह दोनों अलग-अलग बातें हैं! यह ज़रूरी नहीं कि जिसने अपने जीवन में साधारण कामनाओं को हासिल कर लिया हो, वह पूर्णतः संतुष्ट और प्रसन्न भी हो। अतः हमें गंभीरतापूर्वक इस बात को समझना चाहिए कि इच्छित फल को प्राप्त कर लेना ही सफलता नहीं है। जब तक हम अपने जीवन में नैतिक व आध्यात्मिक मूल्यों का सिंचन नहीं करेंगे, तब तक यथार्थ सफलता पाना हमारे लिए मुश्किल ही नहीं, अपितु असंभव कार्य हो जाएगा, क्योंकि बिना मूल्यों के प्राप्त सफलता केवल क्षणभंगुर सुख के समान रहती है। कुछ निराशावादी लोगों का कहना है कि हम सफल नहीं हो सकते, क्योंकि हमारी तकदीर या परिस्थितियाँ ही ऐसी हैं। परंतु यदि हम अपना ध्येय निश्चित करके उसे अपने मन में बिठा लें, तो फिर सफलता स्वयं हमारी ओर चलकर आएगी। सफल होना हर मनुष्य का जन्मसिद्ध अधिकार है, परंतु यदि हम अपनी विफलताओं के बारे में ही सोचते रहेंगे, तो सफलता को कभी हासिल नहीं कर पाएँगे। अतः विफलताओं की चिंता न करें, क्योंकि वे तो हमारे जीवन का सौंदर्य है और संघर्ष जीवन का काव्य है, कई बार प्रथम आघात में पत्थर नहीं टूट पाता, उसे तोड़ने के लिए आघात करने पड़ते हैं, इसलिए सदैव अपने लक्ष्य को सामने रख आगे बढ़ने की जरूरत है। कहा भी गया है कि जीवन में सकारात्मक कोशिश करने वालों की कभी हार नहीं होती।

SubQuestion No : 3

Q.3 चारित्रिक पतन का कारण है:

Question ID : 7230531319

- Ans
- ☒ 1. आध्यात्मिक चिंतन
 - ☒ 2. प्रगतशील विचार
 - ☒ 3. अंतहीन इच्छाएँ
 - ☒ 4. नैतिक मूल्यों को महत्व देना

Comprehension:

निम्नलिखित गद्यांश को ध्यानपूर्वक पढ़कर पूछे गए प्रश्नों के उत्तर दीजिये।

हम एक ऐसे युग में जी रहे हैं, जहाँ एक तरफ भौतिक समृद्धि अपनी ऊँचाई पर है, तो दूसरी तरफ चारित्रिक पतन की गहराई है।

आधुनिकीकरण में उलझा मानव सफलता की नित नई परिभाषाएँ खोजता रहता है अपनी अंतहीन इच्छाओं के रेगिस्तान में भटकता रहता है। ऐसे समय में सच्ची सफलता और सुख-शांति की प्यास से व्याकुल व्यक्ति अनेक मानसिक रोगों का शिकार बनता जा रहा है। हमसे कितने लोगों को इस बात का ज्ञान है की जीवन में सफलता प्राप्त करना और सफल जीवन जीना, यह दोनों अलग-अलग बातें हैं! यह जरूरी नहीं कि जिसने अपने जीवन में साधारण कामनाओं को हासिल कर लिया हो, वह पूर्णतः संतुष्ट और प्रसन्न भी हो। अतः हमें गंभीरतापूर्वक इस बात को समझना चाहिए कि इच्छित फल को प्राप्त कर लेना ही सफलता नहीं है। जब तक हम अपने जीवन में नैतिक व आध्यात्मिक मूल्यों का सिंचन नहीं करेंगे, तब तक यथार्थ सफलता पाना हमारे लिए मुश्किल ही नहीं, अपितु असंभव कार्य हो जाएगा, क्योंकि बिना मूल्यों के प्राप्त सफलता केवल क्षणभंगुर सुख के समान रहती है। कुछ निराशावादी लोगों का कहना है कि हम सफल नहीं हो सकते, क्योंकि हमारी तकदीर या परिस्थितियाँ ही ऐसी हैं। परंतु यदि हम अपना ध्येय निश्चित करके उसे अपने मन में बिठा लें, तो फिर सफलता स्वयं हमारी ओर चलकर आएगी। सफल होना हर मनुष्य का जन्मसिद्ध अधिकार है, परंतु यदि हम अपनी विफलताओं के बारे में ही सोचते रहेंगे, तो सफलता को कभी हासिल नहीं कर पाएँगे। अतः विफलताओं की चिंता न करें, क्योंकि वे तो हमारे जीवन का सौंदर्य है और संघर्ष जीवन का काव्य है, कई बार प्रथम आघात में पत्थर नहीं टूट पाता, उसे तोड़ने के लिए आघात करने पड़ते हैं, इसलिए सदैव अपने लक्ष्य को सामने रख आगे बढ़ने की जरूरत है। कहा भी गया है कि जीवन में सकारात्मक कोशिश करने वालों की कभी हार नहीं होती।

SubQuestion No : 4

Q.4 यथार्थ सफलता मिलती है:

Question ID : 7230531318

- Ans
- ☒ 1. आधुनिकीकरण की प्रवृत्ति से
 - ☒ 2. इच्छाओं की पूर्ति से
 - ☒ 3. नैतिक मूल्यों को अपनाने से
 - ☒ 4. भौतिक समृद्धि से

Comprehension:

निम्नलिखित गद्यांश को ध्यानपूर्वक पढ़कर पूछे गए प्रश्नों के उत्तर दीजिये।

हम एक ऐसे युग में जी रहे हैं, जहाँ एक तरफ भौतिक समृद्धि अपनी ऊँचाई पर है, तो दूसरी तरफ चारित्रिक पतन की गहराई है।

आधुनिकीकरण में उलझा मानव सफलता की नित नई परिभाषाएँ खोजता रहता है अपनी अंतहीन इच्छाओं के रेगिस्तान में भटकता रहता है। ऐसे समय में सच्ची सफलता और सुख-शांति की प्यास से व्याकुल व्यक्ति अनेक मानसिक रोगों का शिकार बनता जा रहा है। हमसे कितने लोगों को इस बात का ज्ञान है की जीवन में सफलता प्राप्त करना और सफल जीवन जीना, यह दोनों अलग-अलग बातें हैं! यह ज़रूरी नहीं कि जिसने अपने जीवन में साधारण कामनाओं को हासिल कर लिया हो, वह पूर्णतः संतुष्ट और प्रसन्न भी हो। अतः हमें गंभीरतापूर्वक इस बात को समझना चाहिए कि इच्छित फल को प्राप्त कर लेना ही सफलता नहीं है। जब तक हम अपने जीवन में नैतिक व आध्यात्मिक मूल्यों का सिंचन नहीं करेंगे, तब तक यथार्थ सफलता पाना हमारे लिए मुश्किल ही नहीं, अपितु असंभव कार्य हो जाएगा, क्योंकि बिना मूल्यों के प्राप्त सफलता केवल क्षणभंगुर सुख के समान रहती है। कुछ निराशावादी लोगों का कहना है कि हम सफल नहीं हो सकते, क्योंकि हमारी तकदीर या परिस्थितियाँ ही ऐसी हैं। परंतु यदि हम अपना ध्येय निश्चित करके उसे अपने मन में बिठा लें, तो फिर सफलता स्वयं हमारी ओर चलकर आएगी। सफल होना हर मनुष्य का जन्मसिद्ध अधिकार है, परंतु यदि हम अपनी विफलताओं के बारे में ही सोचते रहेंगे, तो सफलता को कभी हासिल नहीं कर पाएँगे। अतः विफलताओं की चिंता न करें, क्योंकि वे तो हमारे जीवन का सौंदर्य है और संघर्ष जीवन का काव्य है, कई बार प्रथम आघात में पत्थर नहीं टूट पाता, उसे तोड़ने के लिए आघात करने पड़ते हैं, इसलिए सदैव अपने लक्ष्य को सामने रख आगे बढ़ने की जरूरत है। कहा भी गया है कि जीवन में सकारात्मक कोशिश करने वालों की कभी हार नहीं होती।

SubQuestion No : 5

Q.5 दृढ़निश्चय वाले लोग पा लेते हैं:

Question ID : 7230531321

- Ans
- ☒ 1. हताशा
 - ☒ 2. निराशा
 - ☒ 3. विफलता
 - ☒ 4. सफलता

Q.6 निम्नलिखित में से भाववाचक संज्ञा शब्द की पहचान करें।

Question ID : 7230531329

- Ans
- ☒ 1. घर
 - ☒ 2. शूर

✗ 3. नुकीला

✓ 4. क्रोध

Q.7 'बांसों उछालना' मुहावरे का अर्थ होता है:

Question ID : 7230531336

Ans ✓ 1. प्रसन्न होना

✗ 2. बांस की सहायता से ऊपर उठना

✗ 3. पागल हो जाना

✗ 4. उछल कर चढ़ना

Q.8 निम्नलिखित में से कौन सा शब्द तद्भव है?

Question ID : 7230531324

Ans ✗ 1. शाक

✗ 2. सूत्र

✗ 3. मित्र

✓ 4. मुँह

Q.9 निम्नलिखित में से कौन-सा शब्द स्त्रीलिंग है?

Question ID : 7230531333

Ans ✗ 1. मात

✗ 2. गात

✗ 3. दांत

✓ 4. बात

Q.10 'सदधर्म' शब्द में कौन-सा समास है?

Question ID : 7230531325

Ans ✗ 1. बहुव्रीहि

✗ 2. तत्पुरुष

✓ 3. कर्मधारय

✗ 4. द्वन्द्व

Q.11 'इस हाथ दे उस हाथ ले' लोकोक्ति का अर्थ है:

Question ID : 7230531337

Ans ✓ 1. लेने का देना

✗ 2. हैरान रह जाना

✗ 3. लाभ कमाना

✗ 4. चालाकी से काम निकालना

Q.12 'माली' शब्द का बहुवचन (अभिभक्ति) होगा:

Question ID : 7230531327

Ans ✗ 1. मालियों

✗ 2. मालिया

✗ 3. मालिँ

✓ 4. माली

Q.13 निम्नलिखित में से 'तत्सम' शब्द की पहचान करें।

Question ID : 7230531323

- Ans
- ✓ 1. मनुष्य
 - ✗ 2. ब्याह
 - ✗ 3. सात
 - ✗ 4. साँस

Q.14 'मित्र' शब्द का पर्यायवाची शब्द नहीं है:

Question ID : 7230531330

- Ans
- ✗ 1. दोस्त
 - ✗ 2. गीत
 - ✗ 3. सखा
 - ✓ 4. सहपाठी

Q.15 'जिसमे संदेह न हो' उसे कहते हैं:

Question ID : 7230531332

- Ans
- ✗ 1. आंत
 - ✓ 2. असंदिग्ध
 - ✗ 3. अनिर्णीत
 - ✗ 4. संदिग्ध

Q.16 'दुराचार' शब्द का विलोम है:

Question ID : 7230531331

- Ans
- ✗ 1. अविचार
 - ✗ 2. अपचार
 - ✗ 3. कदाचार
 - ✓ 4. सदाचार

Q.17 निम्नलिखित वाक्यों में से शुद्धवाक्य को छांटिए:

Question ID : 7230531335

- Ans
- ✗ 1. मेरे को इसका उत्तर नहीं आता।
 - ✗ 2. उसे पैसे निकालने चाहिएँ।
 - ✓ 3. आज हमारे घर बहुत मेहमान आएँगे।
 - ✗ 4. फलों का रस मेरे को नहीं पीना।

Q.18 निम्नलिखित में से कौन-सा शब्द पुलिंग है?

Question ID : 7230531334

- Ans
- ✓ 1. बहाव
 - ✗ 2. भौंह
 - ✗ 3. चमक
 - ✗ 4. उलझन

Q.19 'उज्ज्वल' का संधि विच्छेद होगा:

Question ID : 7230531326

- Ans
- ✓ 1. उत्+ज्वल

- ✗ 2. उज्+ज्वल
- ✗ 3. उद+ज्वल
- ✗ 4. उत्+ज्वल

Q.20 सदा बहुवचन में प्रयुक्त होने वाला शब्द है:

Question ID : 7230531328

- Ans
- ✗ 1. गीत
 - ✗ 2. वेद
 - ✗ 3. सब्जी
 - ✓ 4. दर्शन

Section : Subject Related

Q.1 The concept of Marginal Rate of Substitution is an important tool in analysing:

Question ID : 7230531349

- Ans
- ✗ 1. Supply
 - ✓ 2. Demand
 - ✗ 3. Both demand and Supply
 - ✗ 4. Neither demand nor Supply

Q.2 A graphical presentation of alternative production possibilities facing an economy is called as:

Question ID : 7230531339

- Ans
- ✓ 1. Production possibility curve
 - ✗ 2. Marginal cost curve
 - ✗ 3. Lorenz curve
 - ✗ 4. Average cost curve

Q.3 The Arc method is used to measure:

Question ID : 7230531355

- Ans
- ✗ 1. Total utility of a consumer
 - ✗ 2. Consumer's equilibrium
 - ✓ 3. Elasticity between two points on a demand curve

Elasticity between two points on a demand curve

- ✗ 4. Marginal utility of a consumer

Q.4 If income effect is negative and X is an inferior good and Y is a normal good, then the income - consumption curve (ICC) will slope:

Question ID : 7230531357

- Ans
- ✓ 1. Backward bending to the left
 - ✗ 2. Slope downwards to the right
 - ✗ 3. Straight line
 - ✗ 4. Constant

Q.5 The condition of consumer's equilibrium in case of two goods under proportionality rule:

Question ID : 7230531346

- Ans
- ✗ 1. $MU_A = MU_B$
 - ✓ 2. $\frac{MU_A}{P_A} = \frac{MU_B}{P_B}$

✗ 3. $\frac{\Delta P_B}{\Delta Q_A} \times \frac{Q_A}{P_B}$

✗ 4. $\frac{\Delta Q_A}{\Delta Q_B} \times \frac{P_B}{P_A}$

Q.6 The curve that connects the various tangency points of indifference curves and wage lines is:

Question ID : 7230531353

- Ans
- ✗ 1. Iso-revenue curve
 - ✓ 2. Wage offer curve
 - ✗ 3. Budget line
 - ✗ 4. Iso-cost curve

Q.7 In a capitalist economy, the resource allocation is done by the:

Question ID : 7230531345

- Ans
- ✗ 1. Total industry
 - ✗ 2. Monopolies
 - ✓ 3. Free market mechanism
 - ✗ 4. Government

Q.8 The principle of increasing opportunity cost makes the production possibility curve as:

Question ID : 7230531342

- Ans
- ✗ 1. Vertical
 - ✓ 2. Concave to origin
 - ✗ 3. Horizontal
 - ✗ 4. Convex to origin

Q.9 When the price consumption curve (PCC) is horizontal then the elasticity is:

Question ID : 7230531350

- Ans
- ✗ 1. $E_p < 1$
 - ✗ 2. $E_p = \infty$
 - ✗ 3. $E_p > 1$
 - ✓ 4. $E_p = 1$

Q.10 If the consumer is affected by the principle of Demonstration effect, then the shape of the demand curve is:

Question ID : 7230531347

- Ans
- ✗ 1. Vertical towards OY - axis
 - ✗ 2. Negative slope from left to right
 - ✗ 3. Horizontal to OX - axis
 - ✓ 4. Positive slope from left to right

Q.11 Match the following.

Question ID : 7230531354

1	Liquidity trap	A	H.H. Gossen
2	Law of Diminishing Marginal Utility	B	J.M. Keynes
3	Diamond-Water paradox	C	Robert Giffen
4	Substitution effect	D	Adam Smith
5	Demand for inferior goods	E	Eugen Slutsky

- Ans
- ✓ 1. 1-B; 2-A; 3-D; 4-E; 5-C
 - ✗ 2. 1-B; 2-D; 3-E; 4-C; 5-A
 - ✗ 3. 1-A; 2-C; 3-E; 4-B; 5-D
 - ✗ 4. 1-A; 2-B; 3-E; 4-C; 5-D

Q.12 In a free market economy, the point at which the production possibility curve will operate depends upon the:

Question ID : 7230531343

- Ans
- ☒ 1. Consumer demand for different goods
 - ☐ 2. Pattern of allocation of resources
 - ☐ 3. Supply of different goods by the producers
 - ☐ 4. Government decisions

Q.13 The amount of a next best commodity foregone for producing an extra unit of a commodity is known as:

Question ID : 7230531341

- Ans
- ☐ 1. Total variable cost
 - ☒ 2. Opportunity cost
 - ☐ 3. Total average cost
 - ☐ 4. Total fixed cost

Q.14 In the case of inferior goods, the income effect is:

Question ID : 7230531351

- Ans
- ☐ 1. Equal to zero
 - ☒ 2. Negative
 - ☐ 3. Positive
 - ☐ 4. Equal to one

Q.15 If the price of good 'x' declines, the number of its quantities purchased rises proportionately; however, the purchased quantity of good 'y' remains same. What is the shape of the price consumption curve?

Question ID : 7230531352

- Ans
- ☒ 1. Horizontal
 - ☐ 2. Vertical
 - ☐ 3. Convex
 - ☐ 4. Concave

Q.16 Rightward movement of the economy from one production possibility curve to another indicates:

Question ID : 7230531340

- Ans
- ☐ 1. Increase in number of firms
 - ☒ 2. Increase in output of goods and services
 - ☐ 3. Increase in consumption
 - ☐ 4. Increase in cost of production

Q.17 Utilisation of its available resources fully and most effectively and thereby production of maximum possible output with the given amount of resources by a firm, industry or an entire economy is known as:

Question ID : 7230531338

- Ans
- ☐ 1. Allocation efficiency
 - ☐ 2. Economic efficiency
 - ☐ 3. Market efficiency
 - ☒ 4. Technical efficiency

Q.18 Find the incorrect statement.

Question ID : 7230531348

- Ans
- ☐ 1. The slope of the Indifference curve is convex to the origin.
 - ☐ 2. Higher indifference curve represents a higher level of satisfaction.
 - ☒ 3. The shape of the indifference curve is 'U' shaped in the case of perfect complementary goods.
 - ☐ 4. Indifference curves neither touch nor intersect with each other.

Q.19 Compensated demand curve includes only the:

Question ID : 7230531356

- Ans
- ☒ 1. Both price and income effect
 - ☒ 2. Substitution effect
 - ☒ 3. Income effect
 - ☒ 4. Price effect

Q.20 In a socialist economy, the functions of the market are performed by the:

Question ID : 7230531344

- Ans
- ☒ 1. Consumers
 - ☒ 2. Managers
 - ☒ 3. Central planning authority
 - ☒ 4. Producers

Section : Subject Related

Q.1 Which among following is not correct assumption of perfect competition?

Question ID : 7230531374

- Ans
- ☒ 1. Perfect mobilisation of inputs
 - ☒ 2. Differentiated product
 - ☒ 3. Perfect market knowledge
 - ☒ 4. Absence of selling costs

Q.2 The price of a perishable commodity is influenced by:

Question ID : 7230531373

- Ans
- ☒ 1. No change in supply
 - ☒ 2. Changes in the prices of substitutes
 - ☒ 3. Changes in supply
 - ☒ 4. Changes in demand

Q.3 The concept of social welfare function was first introduced by:

Question ID : 7230531369

- Ans
- ☒ 1. Bergson
 - ☒ 2. Scitovsky
 - ☒ 3. Hicks and Kaldor
 - ☒ 4. Arrow

Q.4 Income derived from machines and other appliances made by man during short run is known as:

Question ID : 7230531366

- Ans
- ☒ 1. Interest
 - ☒ 2. Quasi-rent
 - ☒ 3. Profits
 - ☒ 4. Rent

Q.5 If the monopolist sells his product at a higher price in internal market and at a lower price in external market, it is known as:

Question ID : 7230531377

- Ans
- ☒ 1. Tariff
 - ☒ 2. Countervailing duty
 - ☒ 3. Export duty
 - ☒ 4. Dumping

Q.6 The demand curve (Average Revenue Curve) under perfect competition is:

Question ID : 7230531375

- Ans
- ✓ 1. Perfect elastic
 - ✗ 2. Perfect inelastic
 - ✗ 3. Relative inelastic
 - ✗ 4. Relative elastic

Q.7 Match the following.

Question ID : 7230531372

1	Marginal products of factors of production becomes zero	A	Budget line
2	Represents the prices of the goods and consumer's money income	B	Price consumption curve
3	Locus of different equilibrium points of a consumer at different prices, given the money income	C	Iso-cost curve
4	Combinations of two factors that the firm can buy with a given outlay	D	Ridgelines

- Ans
- ✗ 1. 1-A; 2-D; 3-C; 4-B
 - ✗ 2. 1-D; 2-C; 3-B; 4-A
 - ✗ 3. 1-C; 2-D; 3-A; 4-B
 - ✓ 4. 1-D; 2-A; 3-B; 4-C

Q.8 What is the shape of the MFC and AFC if the factor market is monopsony and the product market is perfect competition?

Question ID : 7230531365

- Ans
- ✗ 1. Both are same and horizontal
 - ✗ 2. An upward sloping where AFC lies above the MFC
 - ✗ 3. Negatively sloping from left to right
 - ✓ 4. Positively rising from left to right

Q.9 Who introduced the concept of externalities to explain welfare?

Question ID : 7230531368

- Ans
- ✗ 1. Marshall
 - ✗ 2. Pareto
 - ✗ 3. Hicks
 - ✓ 4. Pigou

Q.10 Match the following.

Question ID : 7230531364

1	Differential rent theory	A	Wickstead
2	Marginal productivity theory	B	Karl Marx
3	Surplus value principle	C	Kalecki
4	Degree of monopoly theory of profit	D	Alfred Marshall
5	Adding-up problem	E	David Ricardo

- Ans
- ✗ 1. 1-E; 2-B; 3-A; 4-C; 5-D
 - ✗ 2. 1-D; 2-B; 3-A; 4-E; 5-C
 - ✓ 3. 1-E; 2-D; 3-B; 4-C; 5-A
 - ✗ 4. 1-D; 2-E; 3-B; 4-C; 5-A

Q.11 When labour is on x-axis, the shape of the iso-quant that combines more labour with the same quantity of capital is:

Question ID : 7230531358

- Ans
- ✗ 1. Convex

- ☒ 2. Vertical
- ☒ 3. Horizontal
- ☒ 4. Concave

Q.12 The important property of the Cobb-Douglas production is that the production function is subject to:

Question ID : 7230531361

- Ans
- ☒ 1. Negative returns to scale
 - ☒ 2. Constant returns to scale
 - ☒ 3. Increasing returns to scale
 - ☒ 4. Decreasing returns to scale

Q.13 Constrained bliss point is the point where the:

Question ID : 7230531370

- Ans
- ☒ 1. Indifference curve is tangent to the budget line
 - ☒ 2. Iso-quant is tangent to the iso-cost curve
 - ☒ 3. There is equality between iso-cost curve and iso-project curve
 - ☒ 4. Social indifference curve of the society is tangent to the grand utility possibility curve

Q.14 In a competitive factor market, a firm is said to be in equilibrium in the long run when which of the following conditions is satisfied?

Question ID : 7230531363

- Ans
- ☒ 1. $MRP = MFC$
 - ☒ 2. $MRP > MFC$
 - ☒ 3. Both $MRP = MFC$ and MRP curve must cut MFC curve from above
 - ☒ 4. MRP curve must cut MFC curve from above

Q.15 Under which condition price discrimination is profitable?

Question ID : 7230531376

- Ans
- ☒ 1. Different elasticities of demand
 - ☒ 2. Same elasticities of demand
 - ☒ 3. Relative inelastic demand
 - ☒ 4. Perfect elastic demand

Q.16 Technical substitution measures the degree of substitutability between:

Question ID : 7230531360

- Ans
- ☒ 1. Two firms
 - ☒ 2. Two goods
 - ☒ 3. Two individuals
 - ☒ 4. Two factors

Q.17 Match the following.

Question ID : 7230531371

1	Increasing returns to scale	A	Long-run period
2	All inputs are changeable	B	Existence of external economies
3	Decreasing returns to scale	C	Short-run period
4	Labour is the only variable input	D	Existence of external diseconomies

- Ans
- ☒ 1. 1-B; 2-D; 3-C; 4-A

✗ 2. 1-A; 2-D; 3-B; 4-C

✗ 3. 1-A; 2-B; 3-D; 4-C

✓ 4. 1-B; 2-A; 3-D; 4-C

Q.18 Imputed value of an entrepreneur's own resources and services is known as:

Question ID : 7230531362

Ans ✗ 1. Selling cost

✗ 2. Opportunity cost

✗ 3. Total cost

✓ 4. Implicit cost

Q.19 Which factors the modern economist took into consideration to determine interest?

Question ID : 7230531367

Ans ✗ 1. Liquidity preference schedules

✓ 2.

Savings and investment on one hand and liquidity preference and supply of money on another

✗ 3. Demand and supply of loanable funds

✗ 4. Savings and investment

Q.20 The line that joins all the tangency points of iso-quant and iso-cost line is:

Question ID : 7230531359

Ans ✗ 1. Production possibility curve

✗ 2. Opportunity cost

✓ 3. Output-factor curve

✗ 4. Iso-project curve

Section : Subject Related

Q.1 At zero level of income, average propensity to consume is:

Question ID : 7230531394

Ans ✓ 1. Infinite

✗ 2. Between 0 and ∞

✗ 3. Zero

✗ 4. Between 0 and 1

Q.2 व्यक्तिगत आय में _____ को छोड़कर सभी शामिल हैं।

Question ID : 7230531392

Ans ✗ 1. व्यक्तिगत कर

✗ 2. व्यक्तिगत बचत

✗ 3. अंतरित भुगतान

✓ 4. अवितरित कॉर्पोरेट लाभ

Q.3 The degrees of price discrimination has been distinguished by:

Question ID : 7230531378

Ans ✗ 1. Marshall

✗ 2. Cournot

✗ 3. Chamberlin

✓ 4. Pigou

Q.4 The best indicator of economic development is:

Question ID : 7230531389

- Ans
- ☒ 1. Real national income
 - ☒ 2. Per capita real national income
 - ☒ 3. GNP at current prices
 - ☒ 4. National income at factor cost

Q.5 Payments accruing to factors of production is equal to:

Question ID : 7230531396

- Ans
- ☒ 1. Transfer payments
 - ☒ 2. Corporate profits
 - ☒ 3. Net value added
 - ☒ 4. Personal income

Q.6 In which model each producer believes that his rival will keep the prices of his products constant at the present level, whatever price the producer might himself set?

Question ID : 7230531383

- Ans
- ☒ 1. Bertrand model
 - ☒ 2. Edgeworth model
 - ☒ 3. Chamberlin's model
 - ☒ 4. Cournot's model

Q.7 In a straight line demand curve meeting the two axis, the marginal revenue (MR) at the mid-point of the curve is:

Question ID : 7230531388

- Ans
- ☒ 1. Greater than one
 - ☒ 2. One
 - ☒ 3. Less than one
 - ☒ 4. Zero

Q.8 The Total cost (TC) in monopolistic competition is a sum of:

Question ID : 7230531381

- Ans
- ☒ 1. Average Fixed Cost and Quantity of Output
 - ☒ 2. Total Fixed Cost and Total Variable Cost
 - ☒ 3. Production Cost and Selling Cost
 - ☒ 4. Total Fixed Cost and Marginal Cost

Q.9 Income elasticity of a luxury good is:

Question ID : 7230531387

- Ans
- ☒ 1. Less than one
 - ☒ 2. Greater than one
 - ☒ 3. Zero
 - ☒ 4. Equal to one

Q.10 Cross elasticity of demand for product of pure monopoly is:

Question ID : 7230531380

- Ans
- ☒ 1. $E_C = 0$
 - ☒ 2. $E_C < 1$
 - ☒ 3. $E_C = 1$
 - ☒ 4. $E_C > 1$

Q.11 The industry demand curve and the average revenue curve are same in the case of:

Question ID : 7230531386

- Ans
- ☒ 1. Monopolistic competition
 - ☒ 2. Monopoly

✗ 3. Oligopoly

✗ 4. Duopoly

Q.12 A. P. Lerner's index of monopoly power is given by:

Question ID : 7230531379

Ans

✗ 1. $\frac{P - MC}{MC}$

✗ 2. $\frac{MC - P}{MC}$

✓ 3. $\frac{P - MC}{P}$

✗ 4. $\frac{MC - P}{AC}$

Q.13 If GDP (at market prices) = ₹ 500 crore, depreciation = ₹ 50 crore, indirect taxes = ₹ 30 crore, subsidies = ₹ 10 crore, net factor income from abroad = ₹ 20 crore, then national income is:

Question ID : 7230531397

Ans

✗ 1. ₹ 500 crore

✗ 2. ₹ 540 crore

✗ 3. ₹ 570 crore

✓ 4. ₹ 450 crore

Q.14 An expansionary monetary and fiscal policy shifts:

Question ID : 7230531395

Ans

✗ 1. Aggregate supply curve to the right

✓ 2. Aggregate demand curve to the right

✗ 3. Aggregate supply curve to the left

✗ 4. Aggregate demand curve to the left

Q.15 Marginal revenue of a firm under perfect competition is:

Question ID : 7230531385

Ans

✓ 1. Equal to the price

✗ 2. Less than the price

✗ 3. Greater than the price

✗ 4. Greater than marginal cost

Q.16 Wages and salaries + dividends paid at home + factor income received from abroad + transfers from government – personal income tax =

Question ID : 7230531391

Ans

✓ 1. Personal disposable income

✗ 2. GDP

✗ 3. Per capita income

✗ 4. National income

Q.17 Which is created under monopolistic competition due to entry of too many firms in long run and absence of price competition each firm produces much less than its full capacity?

Question ID : 7230531382

Ans

✗ 1. Excess output

✓ 2. Excess capacity

✗ 3. Optimum firm size

✗ 4. Optimum output

Q.18

Question ID : 7230531384

Match the following.

1	Kinked demand curve	A	Monopolistic competition
2	Monopolistic competition	B	Oligopoly
3	Price leadership	C	Price rigidity
4	Group equilibrium	D	Excess capacity

Ans ☒ 1. 1-A; 2-D; 3-B; 4-C

☒ 2. 1-B; 2-D; 3-A; 4-C

☒ 3. 1-B; 2-D; 3-C; 4-A

☒ 4. 1-C; 2-D; 3-B; 4-A

Q.19 The slope of consumption function represents:

Question ID : 7230531393

Ans ☒ 1. Marginal propensity to save

☒ 2. Average propensity to consume

☒ 3. Average propensity to save

☒ 4. Marginal propensity to consume

Q.20 GDP at market price exceeds GDP at factor cost by the amount of revenue raised through:

Question ID : 7230531390

Ans ☒ 1. Indirect taxes

☒ 2. Direct taxes

☒ 3. Sales tax

☒ 4. Income tax

Section : Subject Related

Q.1 Which of the following is not a classical assumption?

Question ID : 7230531409

Ans ☒ 1. Perfect competition

☒ 2. Existence of full employment

☒ 3. Laissez-faire

☒ 4. Rigid wages and prices

Q.2 "Ratchet effect" is the situation where households find:

Question ID : 7230531405

Ans ☒ 1.

Difficult to adjust to both raising income as well as falling income

☒ 2.

Easy to adjust to rising income than falling income

☒ 3.

Easy to adjust to falling income than rising income

☒ 4.

Difficult to adjust to rising incomes than falling income

Q.3 The flexible acceleration theory of investment was developed by:

Question ID : 7230531415

Ans ☒ 1. H.B. Chenery

☒ 2. J.B. Clark

☒ 3. J. R. Hicks

☒ 4. Nicholas Kaldor

Q.4 Which among the following relates to macroeconomics?

Question ID : 7230531402

- Ans
- ☒ 1. Revenue from cement industry
 - ☒ 2. Output of coal industry
 - ☒ 3. Capita-output ratio in the steel industry
 - ☒ 4. Disposable income of a country

Q.5 Keynesian transactionary demand for money is:

Question ID : 7230531411

- Ans
- ☒ 1. Interest inelastic and income elastic
 - ☒ 2. Interest inelastic and income inelastic
 - ☒ 3. Interest elastic and income inelastic
 - ☒ 4. Interest elastic and income elastic

Q.6 The vertical difference between aggregate demand curve and consumption function curve is equal to:

Question ID : 7230531410

- Ans
- ☒ 1. Autonomous consumption
 - ☒ 2. Autonomous investment
 - ☒ 3. Induced investment
 - ☒ 4. Induced consumption

Q.7 Which is the flow variable among the following?

Question ID : 7230531398

- Ans
- ☒ 1. Consumption S
 - ☒ 2. Unemployment
 - ☒ 3. Money supply
 - ☒ 4. Foreign exchange reserves

Q.8 Increase in the value of multiplier will not depend on:

Question ID : 7230531407

- Ans
- ☒ 1. Increase in marginal propensity to save
 - ☒ 2. Increase in average propensity to consume
 - ☒ 3. Increase in marginal propensity to consume
 - ☒ 4. Decrease in tax rate

Q.9 Investment is determined by:

Question ID : 7230531413

- Ans
- ☒ 1. Marginal efficiency of capital and rate of consumption
 - ☒ 2. Marginal efficiency of capital and rate of interest
 - ☒ 3. Marginal propensity to import and rate of interest
 - ☒ 4. Marginal propensity to consume and rate of consumption

Q.10 If the net national product is increased by 8.8%, the population is increased by 2.0%, then the per capita income will increase by:

Question ID : 7230531399

- Ans
- ☒ 1. 4.4%
 - ☒ 2. 10.8%
 - ☒ 3. 16.8%

✓ 4. 6.8%

Q.11 International current account shows:

Question ID : 7230531404

- Ans
- ✓ 1. Inflows and outflows of goods and services
 - ✗ 2. Transfers to other countries
 - ✗ 3. Total imports
 - ✗ 4. Total exports

Q.12 At the minimum rate of interest, the shape of liquidity preference curve:

Question ID : 7230531412

- Ans
- ✓ 1. is horizontal
 - ✗ 2. Intersects on axis
 - ✗ 3. is inelastic
 - ✗ 4. is vertical

Q.13 In evolving a detailed system of national accounts, who made a valuable contribution?

Question ID : 7230531403

- Ans
- ✓ 1. Richard Stone
 - ✗ 2. A Marshall
 - ✗ 3. AC Pigou
 - ✗ 4. JM Keynes

Q.14 The increase in autonomous investment leads to:

Question ID : 7230531408

- Ans
- ✓ 1. Shifting the IS curve to the right
 - ✗ 2. Shifting the IS curve to the left
 - ✗ 3. Shifting the LM curve to the right
 - ✗ 4. Shifting the LM curve to the left

Q.15 If the marginal propensity to import increases:

Question ID : 7230531406

- Ans
- ✗ 1. No effect on multiplier value
 - ✓ 2. The value of multiplier decreases
 - ✗ 3. The value of multiplier increases
 - ✗ 4. The marginal propensity to invest increases

Q.16 AW Phillips curve shows the relationship between:

Question ID : 7230531417

- Ans
- ✓ 1. Money wage rate and unemployment
 - ✗ 2. Real wage rate and inflation
 - ✗ 3. Deflation and unemployment
 - ✗ 4. Real wage rate and unemployment

Q.17 If consumption function curve intersects aggregate expenditure curve then:

Question ID : 7230531400

- Ans
- ✓ 1. Savings equals to zero
 - ✗ 2. Savings equals to one
 - ✗ 3. Investment is equal to zero
 - ✗ 4. Savings equal to investment

Q.18 If MPC is 0.2, then the value of the multiplier is:

Question ID : 7230531416

- Ans
- ☒ 1. 1.25
 - ☐ 2. 0.8
 - ☐ 3. 1.0
 - ☐ 4. 5.0

Q.19 Identify which is not the subject of macroeconomics among the following.

Question ID : 7230531401

- Ans
- ☐ 1. Theory of employment
 - ☐ 2. Theory of general prices
 - ☐ 3. Theory of economic development
 - ☒ 4. Theory of economic welfare

Q.20 Keynesian theory of consumption is based on:

Question ID : 7230531414

- Ans
- ☐ 1. Relative income hypothesis
 - ☐ 2. Permanent income hypothesis
 - ☒ 3. Absolute income hypothesis
 - ☐ 4. Past income hypothesis

Section : Subject Related

Q.1 "Taxation is not just a vehicle for raising state revenue, it is critically important for economic and political development." This was opined by:

Question ID : 7230531425

- Ans
- ☐ 1. Shirras and Bastable
 - ☐ 2. J. B. Say and A. C. Pigou
 - ☒ 3. Besley and Pearson
 - ☐ 4. Adam Smith and Dalton

Q.2 The relationship between required reserve ratio and money supply is:

Question ID : 7230531421

- Ans
- ☐ 1. Positive
 - ☐ 2. Unrelated
 - ☐ 3. Either negative or positive
 - ☒ 4. Negative

Q.3 Which committee recommended the Debt-to-GDP ratio as a medium term anchor for fiscal policy in India?

Question ID : 7230531433

- Ans
- ☐ 1. Taxation Enquiry Commission 1953-54
 - ☒ 2. FRBM Review Committee 2017
 - ☐ 3. Wanchoo Committee 1970
 - ☐ 4. Rekhi Committee 1993

Q.4 The percentage of Fiscal Deficit was revised for the financial year ending 2018 as:

Question ID : 7230531430

- Ans
- ☐ 1. 3.3% of the GDP
 - ☒ 2. 3.5% of the GDP
 - ☐ 3. 3.0% of the GDP
 - ☐ 4. 3.2% m of the GDP

Q.5 Government sells bonds and securities to the people during:

Question ID : 7230531422

- Ans
- ☒ 1. Stagflation
 - ☒ 2. Recession
 - ☒ 3. Inflation
 - ☒ 4. Deflation

Q.6 The High power money can be calculated with:

Question ID : 7230531419

- Ans
- ☒ 1. $H = \frac{C_r - RR_r + ER_r}{1 + C_r} \times M$
 - ☒ 2. $H = \frac{C_r + RR_r + ER_r}{1 + C_r} \times M$
 - ☒ 3. $H = \frac{1 + C_r}{C_r + RR_r + ER_r} \times M$
 - ☒ 4. $H = \frac{C_r + RR_r - ER_r}{1 + C_r} \times M$

Q.7 The difference between M_3 and M_1 is:

Question ID : 7230531418

- Ans
- ☒ 1. Term deposits
 - ☒ 2. Demand deposits
 - ☒ 3. M_2
 - ☒ 4. Post office saving deposits

Q.8 Find out which type of deficit is arrived at by deducting interest paid on borrowings from the fiscal deficit.

Question ID : 7230531431

- Ans
- ☒ 1. Budget deficit
 - ☒ 2. Revenue deficit
 - ☒ 3. Primary deficit
 - ☒ 4. Fiscal deficit

Q.9 A budget based on functions, activities and projects, which was adopted in USA (1949), refers to:

Question ID : 7230531437

- Ans
- ☒ 1. Performance Budgeting
 - ☒ 2. Programming Budgeting
 - ☒ 3. Planning Budget
 - ☒ 4. Zero-Based Budget

Q.10 In which type of budget, outlays, outputs and outcomes in measurable terms are presented to the Parliament?

Question ID : 7230531429

- Ans
- ☒ 1. Balanced Budget
 - ☒ 2. Deficit Budget
 - ☒ 3. Surplus Budget
 - ☒ 4. Outcome Budget

Q.11 Which of the following is not a quantitative measure of RBI?

Question ID : 7230531424

- Ans
- ☒ 1. Bank rate
 - ☒ 2. Open market operations

- ✓ 3. Variable interest rates
- ✗ 4. Variable reserve requirements

Q.12 Which type of budgeting technique is considered as a powerful tool for achieving gender-mainstreaming in India?

Question ID : 7230531434

- Ans
- ✗ 1. Outcome Budget
 - ✓ 2. Gender Budgeting
 - ✗ 3. Traditional Budgeting
 - ✗ 4. Zero-Based Budgeting

Q.13 Which type of deficit refers to the difference between revenue deficit and Grants for creation of capital assets?

Question ID : 7230531428

- Ans
- ✗ 1. Fiscal Deficit
 - ✗ 2. Revenue Deficit
 - ✓ 3. Effective Revenue Deficit
 - ✗ 4. Primary Deficit

Q.14 The amount of revenue deficit of the Central Government for the period April to November during the year 2017-18:

Question ID : 7230531426

- Ans
- ✓ 1. ₹ 4.90 lakh Crore
 - ✗ 2. ₹ 4.58 lakh Crore
 - ✗ 3. ₹ 3.45 lakh Crore
 - ✗ 4. ₹ 5.48 lakh Crore

Q.15 Which one of the following is not a function of the RBI?

Question ID : 7230531423

- Ans
- ✗ 1. Issue of notes
 - ✓ 2. Accepting the deposits from public
 - ✗ 3. Custodian of cash reserves of banks
 - ✗ 4. Banker to government

Q.16 The number of GST registrants in India, as on December 2017, was estimated at:

Question ID : 7230531432

- Ans
- ✓ 1. 9.8 million
 - ✗ 2. 9.0 million
 - ✗ 3. 9.1 million
 - ✗ 4. 8.9 million

Q.17 The target for the amount of disinvestment for the year 2018-19 was set as:

Question ID : 7230531436

- Ans
- ✗ 1. ₹ 72,500 Cr
 - ✓ 2. ₹ 80,000 Cr
 - ✗ 3. ₹ 79,000 Cr
 - ✗ 4. ₹ 1,00,000 Cr

Q.18 To which parameter was the focus laid by Government of India to reset India's fiscal policy as was recommended by N. K. Singh panel?

Question ID : 7230531427

- Ans
- ✗ 1. Tax Revenue-to-GDP Ratio
 - ✗ 2. Expenditure-to-GDP Ratio
 - ✓ 3. Debt-to-GDP Ratio
 - ✗ 4. Borrowings-to-GDP Ratio

Q.19

The formula for money multiplier m is:

- Ans
- ☒ 1. $m = C_r + RR_r + ER_r$
 - ☒ 2. $m = \frac{1 + C_r}{C_r + RR_r + ER_r}$
 - ☒ 3. $m = \frac{1 + C_r}{C_r + RR_r + ER_r} - H$
 - ☒ 4. $m = \frac{1 + C_r}{C_r + RR_r + ER_r} + H$

Q.20 The targets of fixed percentages of Debt-to-GDP Ratio for Centre and States as suggested by FRBM Review Committee, 2017 are:

Question ID : 7230531435

- Ans
- ☒ 1. 33.0% and 23.0% respectively
 - ☒ 2. 35.0% and 19.0% respectively
 - ☒ 3. 40.0% and 20.0% respectively
 - ☒ 4. 30.0% and 20% respectively

Section : Subject Related

Q.1 Fixed exchange rates may lead to:

Question ID : 7230531442

- Ans
- ☒ 1. Appreciation of domestic currency
 - ☒ 2. Depreciation of domestic currency
 - ☒ 3. Inflation
 - ☒ 4. Drain on Foreign exchange reserves

Q.2 Indemnity payments is a component of:

Question ID : 7230531451

- Ans
- ☒ 1. Merchandise account
 - ☒ 2. Short term capital account
 - ☒ 3. Invisible account
 - ☒ 4. Long term Capital account

Q.3 Agreement made at present to get foreign exchange at a future date at a specified exchange rate is known as:

Question ID : 7230531452

- Ans
- ☒ 1. Gentlemen agreement
 - ☒ 2. Forward contract
 - ☒ 3. Arbitrage
 - ☒ 4. Spot contract

Q.4 An Indian exporter, who was getting ₹ 65 per dollar in 2017, gets ₹ 60 in 2018. The situation is known as:

Question ID : 7230531445

- Ans
- ☒ 1. Revaluation of Rupee
 - ☒ 2. Depreciation of Rupee
 - ☒ 3. Appreciation of Rupee
 - ☒ 4. Depreciation of Dollar

Q.5 Which of the following pairs is not correctly matched?

Question ID : 7230531439

Ans

☒ 1. Budget - a small leather bag

☒ 2.

NABH Nirman - Expansion of Airport Capacity

☒ 3. UDAN - Ude Desh Ka Aam Nagarik

☒ 4. Gr. AMs - German Agricultural Markets

Q.6 The system of flexible exchange rates gives rise to:

Question ID : 7230531443

Ans ☒ 1. Deficit in balance of payments

☒ 2. Equilibrium in balance of payments

☒ 3. Surplus in balance of payments

☒ 4. Depletion of foreign exchange reserves

Q.7 When the demand for Euro rises in India, it leads to:

Question ID : 7230531448

Ans ☒ 1. Depreciation of Rupee

☒ 2. Revaluation of Rupee

☒ 3. Appreciation of Rupee

☒ 4. Depreciation of Euro

Q.8 From the following, identify the intra-industry trade model.

Question ID : 7230531454

Ans ☒ 1. Ricardo's Model

☒ 2. Neo-Heckscher-Ohlin Model

☒ 3. Adam Smith Model

☒ 4. Heckscher-Ohlin Model

Q.9 When the forces of demand for and supply of a currency operate freely to determine its foreign exchange rate, the system is known as:

Question ID : 7230531444

Ans ☒ 1. Fixed Exchange Rate

☒ 2. Crawling Peg

☒ 3. Managed Flexibility

☒ 4. Floating Exchange Rate

Q.10 Find out the correct matched pair from the following.

Question ID : 7230531438

Ans ☒ 1. Fiscal Policy - Money Supply

☒ 2. Government Budget - Economic Growth

☒ 3. Taxes on Personal Income - Indirect Taxes

☒ 4. Monetary Policy - Public Borrowings

Q.11 Foreign exchange rate is defined as:

Question ID : 7230531440

Ans ☒ 1.

Price of one unit of foreign currency expressed in terms of domestic currency

☒ 2.

Number of units of domestic currency exchanged for 100 units of foreign currency

☒ 3.

Number of units of foreign currency exchanged for 100 units of domestic currency

☒ 4.

Q.12 Leontief empirically verified the theory of:

Question ID : 7230531455

- Ans ☒ 1. Factor Proportions
☒ 2. Opportunity Cost
☒ 3. Absolute Cost Difference
☒ 4. Comparative Cost Difference

Q.13 The problem of Surplus in India's balance of payments could be solved through:

Question ID : 7230531450

- Ans ☒ 1. Appreciation of Rupee
☒ 2. Exporting more goods and services
☒ 3. Depreciation of Rupee
☒ 4. Cutting expenditure on imports

Q.14 Reduction in the value of rupee against US dollar under Bretton Woods system meant:

Question ID : 7230531446

- Ans ☒ 1. Revaluation
☒ 2. Devaluation
☒ 3. Depreciation
☒ 4. Realignment of parity of the currencies

Q.15 निम्न में से कौनसा मुक्त अंतराष्ट्रीय व्यापार का व्यवहारिक, न की सैद्धांतिक, महत्व है?

Question ID : 7230531457

- Ans ☒ 1. उपभोक्ताओं के लिए वस्तुओं की व्यापक पसंद
☒ 2. व्यापारिक देशों में कारक मूल्यों का समानीकरण
☒ 3. व्यापारिक देशों में वस्तुओं के मूल्यों का समानीकरण
☒ 4. अंतरराष्ट्रीय संसाधनों का कुशल आवंटन

Q.16 Under Gold standard, the exchange rates were:

Question ID : 7230531441

- Ans ☒ 1. Fixed
☒ 2. Flexible
☒ 3. Managed
☒ 4. Floating

Q.17 Free Trade redistributes income in favour of:

Question ID : 7230531456

- Ans ☒ 1. Scarce Factor of Production
☒ 2. Abundant Factor of Production
☒ 3. Fixed Factor of Production
☒ 4. Variable Factor of Production

Q.18 Importers and exporters can reduce their exchange risk through:

Question ID : 7230531447

- Ans ☒ 1. Speculation

✓ 2. Hedging

✗ 3. Spot buying of foreign currency

✗ 4. Arbitrage

Q.19 Identify the item that does not fall under current account of the balance of payments.

Question ID : 7230531449

Ans ✗ 1. Interest payments

✓ 2. Capital payments

✗ 3. Shipping Charges

✗ 4. Insurance charges

Q.20 Which of the following is not correct regarding the year of establishment?

Question ID : 7230531453

Ans ✗ 1.

International Development Association (IDA), 1960

✗ 2.

Multilateral Investment Guarantee Agency (MIGA), 1988

✓ 3.

International Financial Corporation (IFC), 1950

✗ 4.

International Bank of Reconstruction and Development (IBRD), 1945

Section : Subject Related

Q.1 Which of the following is not the function of Stock market?

Question ID : 7230531463

Ans ✗ 1. Ensuring the safety of the transactions

✗ 2. Pricing of Securities

✗ 3. Contribution to Economic Growth

✓ 4. Spreading the debt culture

Q.2 The Eleventh Ministerial Conference of the WTO was held in:

Question ID : 7230531462

Ans ✗ 1. Doha

✗ 2. Bali

✓ 3. Buenos Aires

✗ 4. Nairobi

Q.3 Bombay Stock Exchange was founded in the year:

Question ID : 7230531465

Ans ✗ 1. June, 1870

✗ 2. June, 1949

✓ 3. July, 1875

✗ 4. July, 1936

Q.4 SEBI was given Statutory powers in:

Question ID : 7230531464

Ans ✗ 1. July - 1982

✗ 2. April -1990

✓ 3. January - 1992

✗ 4. April - 1988

Q.5 If $\sum fd^2$ is 362, $\sum fd$ is +128 and n is 217, then σ is:

Question ID : 7230531474

Ans ✗ 1. 1.7

✗ 2. 1.9

✗ 3. 2.0

✓ 4. 1.149

Q.6 Which of the following awards was not obtained by NSE in the year 2015?

Question ID : 7230531468

Ans ✗ 1.

Golden Peacock Innovative Product / Service Award

✓ 2. Global Architecture Excellence Award

✗ 3.

FOW Awards for Asia - Best New Technology Product - Market Surveillance

✗ 4.

Asian Banker Achievement Awards - Stock Exchange of the Year

Q.7 The formula for the coefficient of variation is:

Question ID : 7230531475

Ans ✓ 1. $\frac{\sigma}{\text{Mean}} \times 100$

✗ 2. $\frac{\text{Mean}}{\sigma} \times 100$

✗ 3. $\frac{\text{Mean}}{Z} \times 100$

✗ 4. $\frac{Z}{\text{Mean}} \times 100$

Q.8 Premchand Roychand founded:

Question ID : 7230531469

Ans ✗ 1. Calcutta Stock Exchange

✗ 2. National Stock Exchange

✗ 3. Chennai Stock Exchange

✓ 4. Bombay Stock Exchange

Q.9 Mode is found graphically by:

Question ID : 7230531473

Ans ✗ 1. Ogive curve

✗ 2. Pie diagram

✗ 3. Frequency polygon

✓ 4. Histogram

Q.10 Tariffs cannot improve the terms of trade of the tariff imposing country when the elasticity of the offer curve of the foreign country is:

Question ID : 7230531458

Ans ✗ 1. Zero

✓ 2. Perfectly elastic

✗ 3. Equal to unity

✗ 4. Perfectly inelastic

Q.11 Which of the following is the regulatory function of SEBI?

Question ID : 7230531470

- Ans
- ☒ 1. Check on price rigging
 - ☒ 2. Prohibiting fraudulent and unfair trade practices
 - ☒ 3. Conducting inquiries and audit of stock exchanges
 - ☒ 4. Prohibiting insider trading

Q.12 Which of the following is not ensured by owning a share of a company?

Question ID : 7230531466

- Ans
- ☒ 1. Voting Rights
 - ☒ 2. Assured Flow of Income
 - ☒ 3. Ownership of the company
 - ☒ 4. Dividend

Q.13 Which of the following organisations is called 'Soft lending institution'?

Question ID : 7230531461

- Ans
- ☒ 1. BRICS Bank
 - ☒ 2. IBRD
 - ☒ 3. IMF
 - ☒ 4. IDA

Q.14 The relationship between two variables are shown in:

Question ID : 7230531471

- Ans
- ☒ 1. Bar diagram
 - ☒ 2. Histogram
 - ☒ 3. Line diagram
 - ☒ 4. Pictograph

Q.15 Mean – Mode/ σ is used to calculate:

Question ID : 7230531477

- Ans
- ☒ 1. Karl Pearson's coefficient of skewness
 - ☒ 2. Karl Pearson's coefficient of correlation
 - ☒ 3. Standard Deviation
 - ☒ 4. Quartile deviation

Q.16 Gini coefficient is used to measure:

Question ID : 7230531476

- Ans
- ☒ 1. Human Development Index (HDI)
 - ☒ 2. Poverty Index (PI)
 - ☒ 3. Income Inequality
 - ☒ 4. Physical Quality Life Index (PQLI)

Q.17 Who is the current (as of April 2018) Managing Director and CEO of NSE?

Question ID : 7230531467

- Ans
- ☒ 1. Vikram Limaye
 - ☒ 2. Ashok Chawla
 - ☒ 3. Deepak Mishra
 - ☒ 4. Anurag Patil

Q.18 The Gold Tranche of the IMF quota of a country is equal to:

- Ans
- ☒ 1. 50 percent of the country's quota
 - ☒ 2. 125 percent of the country's quota
 - ☒ 3. 25 percent of the country's quota
 - ☒ 4. 100 percent of the country's quota

Q.19 The most common form of diagrammatic representation of a grouped frequency system is:

Question ID : 7230531472

- Ans
- ☒ 1. Ogive curve
 - ☒ 2. Pie diagram
 - ☒ 3. Histogram
 - ☒ 4. Frequency polygon

Q.20 Who is the Managing Director of IMF as of April 2018?

Question ID : 7230531460

- Ans
- ☒ 1. Christine Lagarde
 - ☒ 2. Horst Köhler
 - ☒ 3. Dominique Strauss-Kahn
 - ☒ 4. Rodrigo de Rato y Figaredo

Section : Subject Related

Q.1 The cultivation of which commercial crop led to 'Uprising' among the farmers during the British rule?

Question ID : 7230531482

- Ans
- ☒ 1. Indigo
 - ☒ 2. Tobacco
 - ☒ 3. Jute
 - ☒ 4. Cotton

Q.2 The classical economist who worked for the British East India company in 1857 was:

Question ID : 7230531481

- Ans
- ☒ 1. John Stuart Mill
 - ☒ 2. David Ricardo
 - ☒ 3. Adam Smith
 - ☒ 4. TR Malthus

Q.3 निम्नलिखित में से कौन सी भारतीय योजना के 'भारी उद्योग प्रथम' मॉडल की समस्या नहीं थी?

Question ID : 7230531487

- Ans
- ☒ 1. प्रगल्भ और पिछड़ों के संबंधों को मजबूत बनाना
 - ☒ 2. बढ़ती बेरोजगारी
 - ☒ 3. बढ़ती गरीबी
 - ☒ 4. क्षेत्रीय असमानताओं का बढ़ना

Q.4 'Removal of poverty' was the objective of which five year plan?

Question ID : 7230531484

- Ans
- ☒ 1. Fourth Five year Plan
 - ☒ 2. Third Five Year Plan
 - ☒ 3. Fifth Five Year Plan

✗ 4. Sixth Five Year Plan

Q.5 The Fifth Five year Plan was prepared and launched by:

Question ID : 7230531485

Ans ✗ 1. MN Roy

✗ 2. S Chakraborty

✗ 3. P R Brahmananda

✓ 4. D P Dhar

Q.6 Which of the following reform measures was NOT undertaken by India on domestic sector in 1991?

Question ID : 7230531494

Ans ✗ 1. Cut in subsidies

✓ 2. Cut in interest rates

✗ 3. Cut in fiscal deficit

✗ 4. Cut in transfers to public sector enterprises

Q.7 Which of the following was not the goal of the First Ten Five Year Plans in India?

Question ID : 7230531483

Ans ✓ 1. Inclusive Growth

✗ 2. Balanced Regional Development

✗ 3. Socialistic Pattern of Society

✗ 4. Increasing the National Income

Q.8 The sum of squares of differences of ranks, given by the judges A and B, for 8 students, is 21. The value of rank correlation coefficient is:

Question ID : 7230531478

Ans ✗ 1. 0.7

✗ 2. 0.65

✗ 3. 0.8

✓ 4. 0.75

Q.9 The Fiscal Responsibility and Budget Management (FRBM) Act, 2003, aims to bring down fiscal deficit to:

Question ID : 7230531496

Ans ✗ 1. 4 % of GDP

✓ 2. 3 % of GDP

✗ 3. 4.5 % of GDP

✗ 4. 5 % of GDP

Q.10 As a part of the new economic reforms in 1997, the statutory liquidity ratio (SLR) was brought down to:

Question ID : 7230531492

Ans ✗ 1. 8.0 percent

✓ 2. 25.0 percent

✗ 3. 20 percent

✗ 4. 11.0 percent

Q.11 Which of the following reform measures was NOT undertaken by India on external sector in 1991?

Question ID : 7230531495

Ans ✓ 1. Revaluation of rupee by 23 % in two stages

✗ 2.

Abolition of complex system of import licensing

✗ 3. Liberalisation of FDI Policy

✗ 4. Liberalisation of trade policy

Q.12 दूसरी पंचवर्षीय योजना के दौरान किस क्षेत्र को 'कमांडिंग हाइट्स' का दर्जा दिया गया था?

Question ID : 7230531486

Ans

- ☒ 1. सहकारी क्षेत्र
- ☒ 2. सार्वजनिक क्षेत्र
- ☒ 3. संयुक्त क्षेत्र
- ☒ 4. निजी क्षेत्र

Q.13 The actual public sector outlay during the First Five Year Plan was:

Question ID : 7230531490

- Ans
- ☒ 1. ₹ 1,960 crore
 - ☒ 2. ₹ 1,450 crore
 - ☒ 3. ₹ 1,650 crore
 - ☒ 4. ₹ 4,600 crore

Q.14 Which of the following was not the priority of the First Five Year Plan?

Question ID : 7230531489

- Ans
- ☒ 1. Rehabilitation of the refugees
 - ☒ 2. Correction of the disequilibrium in the economy caused by the partition of the country
 - ☒ 3. Rapid agricultural development to achieve self-sufficiency in food grains
 - ☒ 4. Accelerated development of the industrial sector

Q.15 The land tenure system introduced by Sir Thomas Munro was introduced:

Question ID : 7230531480

- Ans
- ☒ 1. Mahalwari System
 - ☒ 2. Ryotwari System
 - ☒ 3. Miras System
 - ☒ 4. Zamindari System

Q.16 The quartile deviation of 12, 7, 15, 10, 16, 17 and 25 is:

Question ID : 7230531479

- Ans
- ☒ 1. 4.5
 - ☒ 2. 9
 - ☒ 3. 5.5
 - ☒ 4. 3.5

Q.17 Vakil and Brahmananda attributed the existence of mass poverty in India to the shortages of:

Question ID : 7230531488

- Ans
- ☒ 1. Intermediate goods
 - ☒ 2. Wage goods
 - ☒ 3. Raw materials
 - ☒ 4. Capital goods

Q.18 The World Bank supported India's economic reforms of 1991 with a Structural Adjustment Loan of:

Question ID : 7230531493

- Ans
- ☒ 1. US\$ 600 million
 - ☒ 2. US\$ 5,000 million
 - ☒ 3. US\$ 500 million
 - ☒ 4. US\$ 1,000 million

Q.19 Which of the following is not considered to be the positive effect of LPG policies?

Question ID : 7230531497

- Ans
- ☒ 1. Control on Fiscal Deficit
 - ☒ 2. Increased foreign exchange reserves
 - ☒ 3. Increased role of MNCs
 - ☒ 4. High growth rate of the economy

Q.20 Which of the following was not the reason for the introduction of New Economic Reforms in India in 1991?

Question ID : 7230531491

- Ans
- ☒ 1. Fall in India's credit rating by the international agencies
 - ☒ 2. Rising average trade deficit
 - ☒ 3. Rising receipts on invisible account
 - ☒ 4. Fall in the foreign exchange reserves

Section : Subject Related

Q.1 The Sustainable Development Goals (SDGs) that came into effect in January 2016 will continue to guide UNDP policy and funding until the year:

Question ID : 7230531509

- Ans
- ☒ 1. 2030
 - ☒ 2. 2025
 - ☒ 3. 2035
 - ☒ 4. 2020

Q.2 Which of the following is not the economic factor determining the cropping pattern?

Question ID : 7230531503

- Ans
- ☒ 1. Price of the product
 - ☒ 2. Soil
 - ☒ 3. Procurement policy of the government
 - ☒ 4. Insurance against risk

Q.3 The word 'Sustainable Development' was first coined by:

Question ID : 7230531508

- Ans
- ☒ 1. Brundtland Commission
 - ☒ 2. European Commission
 - ☒ 3. Global Judicial Institute on Environment
 - ☒ 4. The Water Commission

Q.4 According to Human Development Report 2016:

Question ID : 7230531514

- Ans
- ☒ 1. Both India and Pakistan are placed in Low Human Development category countries
 - ☒ 2. Both India and Pakistan are placed in Medium Human Development category countries
 - ☒ 3. India is placed in Medium Human Development category while Pakistan in Low Human Development category
 - ☒ 4. India is placed in Low Human Development category while Pakistan in Medium Human Development category

Q.5 The Report "Our Common Future" was submitted in the year:

Question ID : 7230531507

- Ans
- ☒ 1. 1997
 - ☒ 2. 1982
 - ☒ 3. 1987
 - ☒ 4. 1992

Q.6 Which of the following was not one of the 8 Millennium Development Goals?

Question ID : 7230531510

- Ans
- ☒ 1. Eradicate Extreme Poverty and Hunger
 - ☒ 2. Achieve Universal Primary Education
 - ☒ 3. Achieve Sustainable Cities and Communities
 - ☒ 4. Promote Gender Equality and Empower Women

Q.7 Studies on poverty heavily depend upon:

Question ID : 7230531501

- Ans
- ☒ 1. Census Data
 - ☒ 2. NSSO Data
 - ☒ 3. CSO Data
 - ☒ 4. NCAER Data

Q.8 The Comprehensive Crop Insurance Scheme (CCIS) was introduced in India in the year:

Question ID : 7230531517

- Ans
- ☒ 1. 1980
 - ☒ 2. 1985
 - ☒ 3. 1975
 - ☒ 4. 1990

Q.9 Identify the positive Effect of the Economic Reforms of 1991.

Question ID : 7230531498

- Ans
- ☒ 1. Erosion of cultural values
 - ☒ 2. Lopsided growth process
 - ☒ 3. Widening of the 'rural-urban divide'
 - ☒ 4. Shift from monopoly to competitive market

Q.10 According to India Brand Equity Foundation (IBEF), in April 2018, India has become the second largest market for e-learning after:

Question ID : 7230531506

- Ans
- ☒ 1. USA
 - ☒ 2. China
 - ☒ 3. Canada
 - ☒ 4. Australia

Q.11 The initial Reform process in China covering the period from 1978 to 1984 focused on:

Question ID : 7230531513

- Ans
- ☒ 1. Non-farm activities in rural areas
 - ☒ 2. Land tenure system and support prices for agricultural products
 - ☒ 3. Foreign trade and investments
 - ☒ 4. Industrial development

Q.12 China seemed to have outstripped India for the first time in the share of World GDP in the year around:

Question ID : 7230531511

- Ans
- ☒ 1. 1600
 - ☒ 2. 1700
 - ☒ 3. 1500
 - ☒ 4. 1000

Q.13 Which of the following comparisons between India and China is not true?

Question ID : 7230531512

- Ans
- ☒ 1.

China has one party authoritarian rule while India has a multi-party system

☒ 2.

Chinese people are relatively homogeneous while those of India are heterogeneous

☒ 3.

The economic reforms in both the countries are crisis driven

☒ 4.

Chinese economy is the second largest and the Indian economy is the fourth largest in the world in terms of PPP GDP

Q.14 The 2009 Tendulkar Committee Report related to methodology of estimation of:

Question ID : 7230531500

Ans ☒ 1. Inequality

☒ 2. Inflation

☒ 3. Poverty

☒ 4. Unemployment

Q.15 According to World Bank study of 2016, poverty rate is the highest among:

Question ID : 7230531502

Ans ☒ 1. Others

☒ 2. OBCs

☒ 3. SCs

☒ 4. STs

Q.16 Which of the following is the least important in human capital formation?

Question ID : 7230531505

Ans ☒ 1. Good Training

☒ 2. Good Health

☒ 3. Good friendship

☒ 4. Good Education

Q.17 India's ranking in the world production of the fruits is:

Question ID : 7230531504

Ans ☒ 1. Tenth

☒ 2. First

☒ 3. Third

☒ 4. Second

Q.18 According to Human Development Report 2016, Gender inequality in India was:

Question ID : 7230531516

Ans ☒ 1. Lower than China but higher than Pakistan

☒ 2. Higher than China but lower than Pakistan

☒ 3. Lower than both China and Pakistan

☒ 4. Higher than both China and Pakistan

Q.19 निम्नलिखित में से क्या वैश्वीकरण के अंतर्गत नहीं आता है?

Question ID : 7230531499

Ans ☒ 1. बहुराष्ट्रीय कंपनियों को अनुमति

☒ 2. उत्पाद शुल्क में कमी

☒ 3. एफडीआई का उदारीकरण

☒ 4. टैरिफ के स्तर में कमी

Q.20 According to Human Development Report 2016:

Question ID : 7230531515

Ans

- ✓ 1. India is placed in Medium Human Development category while China in High Human Development category
- ✗ 2. India is placed in Medium Human Development category while China in Low Human Development category
- ✗ 3. Both India and China are placed in High Human Development category countries
- ✗ 4. Both India and China are placed in Medium Human Development category countries

Section : Subject Related

Q.1 निम्नलिखित में से क्या एक द्वि-आयामी (2D) कला, विधि या तकनीक नहीं है, जो एक विषय को पढ़ाने के दौरान प्रयोग में लाई जाती है?

Question ID : 7230531528

- Ans
- ✗ 1. रंगोली
- ✓ 2. संस्थापना (इंस्टालेशन)
- ✗ 3. समुचित चित्र (कोलाज) बनाना
- ✗ 4. मंडन

Q.2 दिये गए विकल्पों में से वार्तालाप गतिविधि पर सही कथन की पहचान करें?

Question ID : 7230531529

- Ans
- ✗ 1. शिक्षार्थी की भागीदारी का न्यून स्तर
- ✓ 2. प्रभावशाली अनुक्षेत्र (डोमेन) में मुद्दों के संबंध में संबोधित करते समय प्रभावी
- ✗ 3. सभी प्रकार के शिक्षार्थी वार्तालाप गतिविधियों के लिए सक्रिय रहते हैं
- ✗ 4. अंतर्मुखी वार्तालाप गतिविधियों का आनंद लेते हैं

Q.3 When a learner performs a skill according to the instruction rather than the observation, he is known to be at the _____ level of psychomotor domain.

Question ID : 7230531520

- Ans
- ✗ 1. 'Naturalises'
- ✓ 2. 'Imitates'
- ✗ 3. 'Articulates'
- ✗ 4. 'Manipulates'

Q.4 When knowledge is acquired through religious texts, it is known as _____.

Question ID : 7230531532

- Ans
- ✗ 1. authority
- ✓ 2. revelation
- ✗ 3. testimony
- ✗ 4. reason

Q.5 What should be the objective of teaching science at higher secondary school level?

Question ID : 7230531523

- Ans
- ✓ 1. To develop economic efficiency and capacity to earn a livelihood
- ✗ 2. To develop the observation skills
- ✗ 3. To get the knowledge about the society and natural environment
- ✗ 4. Develop the quantitative sense to solve the problems

Q.6 Which of these is NOT a good aspect relating to reading a newspaper?

Question ID : 7230531527

Ans ☒ 1.

Exaggerated or underplayed news of the real situation

☐ 2.

Knowledge on antisocial elements in the society

☐ 3. Increased vocabulary

☐ 4. Latest update on the current happenings

Q.7 Which of these is NOT a correct statement on the guiding principles of constructivism?

Question ID : 7230531534

Ans ☒ 1.

The learning process focuses on isolated facts, not on primary concepts

☐ 2.

The purpose of learning is for an individual to construct his or her own meaning, not just to memorise the "right" answers

☐ 3.

Learning requires understanding wholes as well as parts and parts must be understood in the context of wholes

☐ 4.

Learning must start with the issues around which students are actively trying to construct meaning

Q.8 _____ is/are mandated to provide academic and technical resource support to adult and continuing education through development and production of material and training modules. In addition to this, it/they would be required to conduct motivational and environmental building, action research and evaluation and monitoring.

Question ID : 7230531519

Ans ☐ 1. Jan Shikshan Sansthan

☒ 2. The State Resource Centre(s)

☐ 3. Rashtriya Madhyamik Shiksha Abhiyan

☐ 4. Sarva Shiksha Abhiyan

Q.9 The assessment that expands the findings of an assessment with analysis of abilities and potentials with a further dimension is known as:

Question ID : 7230531535

Ans ☐ 1. summative assessment

☐ 2. formative assessment

☒ 3. prognostic assessment

☐ 4. diagnostic assessment

Q.10 In a particular Mathematics class, a student can draw geometrical figures and graphs. Which stage of cognitive domain is the student exhibiting?

Question ID : 7230531526

Ans ☐ 1. Understanding

☐ 2. Knowledge

☐ 3. Application

☒ 4. Skill

Q.11 Identify the learning style from the given description:
Somu likes to have a hands-on experience in anything he learns. He enjoys field trips to experience the physical proximity of the target knowledge. He makes his own notes on whatever he learns.

Question ID : 7230531521

Ans ☒ 1. Tactile Learning style

☐ 2. Visual / Non-verbal Learning style

☐ 3. Visual / Verbal Learning style

☐ 4. Auditory Learning style

Q.12 Which of these is NOT a correct statement on including inclusive education in India?

Question ID : 7230531536

Ans ☐ 1.

It is an opportunity to form friendships with other children.

✗ 2.

Giving all the normal and differently abled children equal opportunities to learn and get equal treatment as others.

✗ 3.

It develops the tolerance and appreciation of normal children for differently abled students.

✓ 4.

Children with special needs cannot be made a part of regular school.

Q.13 _____ is a developmental disability significantly affecting verbal and non-verbal communication and social interaction, generally evident before age three and characterised by engaging in repetitive activities and stereotyped movements.

Question ID : 7230531537

Ans ✗ 1. Dyslexia

✓ 2. Autism

✗ 3. Dysgraphia

✗ 4. ADHD

Q.14 Which of these is NOT an assessment method?

Question ID : 7230531533

Ans ✗ 1. Presentations

✓ 2. Students watching an audiovisual

✗ 3. Homework exercises

✗ 4. Simulations

Q.15 Which of these factors does NOT affect the emotionality of a person?

Question ID : 7230531518

Ans ✗ 1.

Child A is too much excited at the thought of an ice cream

✓ 2.

Child C is happily sleeping at night undisturbed for 8 hours

✗ 3.

Child D is suffering from disease due to malnutrition

✗ 4.

Child B is exhausted after travelling for 4 hours in the car

Q.16 निम्नलिखित में से क्या एक ब्लॉग साधन (टूल) नहीं है?

Question ID : 7230531530

Ans ✗ 1. ब्लॉगर

✗ 2. एडुब्लॉग

✓ 3. ट्रैकबैक

✗ 4. वर्डप्रेस

Q.17 निम्नलिखित में से कौन सा कौशल एक ग्रहणशील कौशल है?

Question ID : 7230531522

Ans ✗ 1. लिखना

✗ 2. भाषा

✗ 3. बोलना

✓ 4. सुनना

Q.18 Which of these is NOT a correct statement of the CAI?

Question ID : 7230531531

Ans ✗ 1. It facilitates reteaching and reinforcing

✓ 2.

CAI can give a human touch better than traditional teaching

✗ 3.

It can help teachers to improve their role in education process.

✗ 4. It can create simulations in the learner

Q.19 वर्तमान लिंग अंतरों और मुद्दों को समझने और रणनीतियों और कार्यों में इन्हें सम्मिलित करने की क्षमता को क्या कहा जाता है?

Question ID : 7230531524

Ans

✗ 1. लिंग समता (जेंडर पैरिटी)

✓ 2. लिंग संवेदनशीलता (जेंडर सेंसिटिविटी)

✗ 3. लिंग समानता (जेंडर इक्वलिटी)

✗ 4. लिंग साम्यता (जेंडर इक्विटी)

Q.20 Which of these is NOT a part of social science?

Question ID : 7230531525

Ans

✗ 1. Statistics

✓ 2. Biology

✗ 3. Sociology

✗ 4. Anthropology